



Teachingninja.in



Latest Govt Job updates



Private Job updates



Free Mock tests available

Visit - teachingninja.in



Delhi Police Head Constable

**Previous Year Paper
(Ministerial) 20 Oct 2022
Shift 2**



Head Constable Ministerial in Delhi Police Examination 2022

Roll Number	
Candidate Name	
Venue Name	iON Digital Zone iDZ Bahadurgarh Patiala
Exam Date	20/10/2022
Exam Time	1:00 PM - 2:30 PM
Subject	Head Constable Ministerial in Delhi Police Examination 2022

Section : Part-A-General Awareness

Q.1 Who launched the official mobile application of the Parliament named 'Digital Sansad App' on 27 January 2022?

- Ans
- ☒ 1. Narendra Modi
 - ☒ 2. Ram Nath Kovind
 - ☒ 3. Amit Shah
 - ☒ 4. Om Birla

Question ID : 26433055037
Status : Answered
Chosen Option : 4

Q.2 In which of the following cities did Sourav Ganguly lay the foundation of the world's third largest cricket stadium in February 2022?

- Ans
- ☒ 1. Kolkata
 - ☒ 2. Bhopal
 - ☒ 3. Ahmedabad
 - ☒ 4. Jaipur

Question ID : 26433061865
Status : Not Answered
Chosen Option : --

Q.3 Which politicians established a Swaraj Party within Congress?

- Ans
- ☒ 1. Motilal Nehru and Sarojini Naidu
 - ☒ 2. CR Das and Dadabhai Naoroji
 - ☒ 3. CR Das and Jawaharlal Nehru
 - ☒ 4. Motilal Nehru and CR Das

Question ID : 26433064733
Status : Answered
Chosen Option : 4

Q.4 In November 2021, which State Government approved the 'Back to Work' scheme for women who sometimes have to quit their jobs due to family circumstances?

- Ans
- ☒ 1. Rajasthan
 - ☒ 2. Uttar Pradesh
 - ☒ 3. Madhya Pradesh
 - ☒ 4. Gujarat

Question ID : 26433055037
Status : Not Answered
Chosen Option : --



Teachingninja.in

Q.5 According to the Census of India 2011, which Union Territory of India recorded lowest literacy rate?

- Ans ☒ 1. Chandigarh
- ☒ 2. Dadra and Nager Haveli
- ☒ 3. Pondicherry
- ☒ 4. Andaman and Nicobar Islands

Question ID : 26433081926
Status : Answered
Chosen Option : 4

Q.6 When was the battle of Chausa fought between Humayun and Sher Shah Suri?

- Ans ☒ 1. 1550 AD
- ☒ 2. 1539 AD
- ☒ 3. 1540 AD
- ☒ 4. 1549 AD

Question ID : 26433095238
Status : Answered
Chosen Option : 3

Q.7 Reliance Jio has partnered with which of the following company to develop 5G Solutions for India?

- Ans ☒ 1. Verizon
- ☒ 2. T Mobile
- ☒ 3. Qualcomm
- ☒ 4. AT&T Mobility

Question ID : 26433095264
Status : Not Answered
Chosen Option : --

Q.8 Which of the following ministries implemented the PM Daksh Yojana from the year 2021-22?

- Ans ☒ 1. Ministry of Home Affairs
- ☒ 2. Ministry of Education
- ☒ 3. Ministry of Labour and Employment
- ☒ 4. Ministry of Social Justice and Empowerment

Question ID : 26433072874
Status : Answered
Chosen Option : 3

Q.9 Indian Constitution is a unique blend of _____ and flexibility.

- Ans ☒ 1. conformity
- ☒ 2. rigidity
- ☒ 3. durability
- ☒ 4. uniformity

Question ID : 26433055537
Status : Answered
Chosen Option : 2

Q.10 Which of the following stepwells is located in the Indian state of Rajasthan?

- Ans ☒ 1. Rajon ki Baoli
☒ 2. Ujala Baoli
☒ 3. Chand Baori
☒ 4. Agrasen ki Baoli

Question ID : 26433064365
Status : Not Answered
Chosen Option : --

Q.11 Which of the following states have become the first State in the country to get the L-root server, which will enable the State government to provide its flagship digital services and enforce e-governance with seamless internet connectivity?

- Ans ☒ 1. Karnataka
☒ 2. Gujrat
☒ 3. Kerela
☒ 4. Rajasthan

Question ID : 26433095261
Status : Not Answered
Chosen Option : --

Q.12 Which of the following notes was demonetised in 2016?

- Ans ☒ 1. ₹500 and ₹2,000
☒ 2. ₹500 and ₹1,000
☒ 3. ₹500 and ₹200
☒ 4. ₹500 and ₹5,000

Question ID : 26433059101
Status : Answered
Chosen Option : 2

Q.13 Which of the following festivals is celebrated in Manipur to celebrate the onset of spring?

- Ans ☒ 1. Kut
☒ 2. Yaoshang
☒ 3. Lai-Haraoba
☒ 4. Gang-Ngai

Question ID : 26433054872
Status : Not Answered
Chosen Option : --

Q.14 Under which of the following rates does RBI rediscount bills of exchange?

- Ans ☒ 1. Repo rate
☒ 2. Bank rate
☒ 3. Rate of interest
☒ 4. Prime lending rate

Question ID : 26433059249
Status : Answered
Chosen Option : 4

Q.15 The British government sent the Cabinet Mission to India in the year:

- Ans ☒ 1. 1948
☒ 2. 1946
☒ 3. 1947
☒ 4. 1945

Question ID : 26433055621
Status : Answered
Chosen Option : 2

Q.16 Which of the following ministries conducts the Census of India?

- Ans ☒ 1. Ministry of Health and Family Welfare
☒ 2. Ministry of Social Welfare
☒ 3. Ministry of Information and Broadcasting
☒ 4. Ministry of Home Affairs

Question ID : 26433066598
Status : Not Answered
Chosen Option : --

Q.17 In which year was the rupee devalued for the first time by nearly 37%?

- Ans ☒ 1. 1969
☒ 2. 1966
☒ 3. 1962
☒ 4. 1960

Question ID : 26433059265
Status : Not Answered
Chosen Option : --

Q.18 Guru Bipin Singh, conferred with the Kalidas Samman, was a _____ dancer.

- Ans ☒ 1. Kathak
☒ 2. Kuchipudi
☒ 3. Sattriya
☒ 4. Manipuri

Question ID : 26433064311
Status : Not Answered
Chosen Option : --

Q.19 Dry deciduous forest cover of the country receives rainfall ranged between:

- Ans ☒ 1. 70-200 cm
☒ 2. 70-100 cm
☒ 3. 100-200 cm
☒ 4. 50-70 cm

Question ID : 26433054992
Status : Answered
Chosen Option : 4

Q.20 Name the cropping seasons in India in a sequence starting from the onset of monsoon.

- Ans ☒ 1. Zaid, Rabi and Kharif
☒ 2. Kharif, Rabi and Zaid
☒ 3. Zaid, Kharif and Rabi
☒ 4. Rabi, Kharif and Zaid

Question ID : 26433054952
Status : Answered
Chosen Option : 2

Section : Part-B-Quantitative Aptitude

Q.1 A two-digit number, 9A, is a prime number. Find A.

- Ans ☒ 1. 3
☒ 2. 1
☒ 3. 9
☒ 4. 7

Question ID : 26433065046
Status : Answered
Chosen Option : 1

Q.2 Two concentric circles of radii 10 cm and 8 cm are given, the length of the chord of the larger circle which touches the smaller circle is:

- Ans ☒ 1. 10 cm
☒ 2. 8 cm
☒ 3. 14 cm
☒ 4. 12 cm

Question ID : 26433058982
Status : Answered
Chosen Option : 4

Q.3 Successive discounts of 12%, 15% and 18% amount to a single discount of x%. Find x.

- Ans ☒ 1. 38.646
☒ 2. 36.684
☒ 3. 38.664
☒ 4. 36.864

Question ID : 26433065074
Status : Answered
Chosen Option : 3

Q.4 P is four times as good a workman as Q, and therefore is able to finish a task in 36 days less than Q. Working together, both can finish the work in:

Ans

☒ 1. $9\frac{1}{5}$ days

☒ 2. $9\frac{3}{5}$ days

☒ 3. 48 days

☒ 4. 12 days

Question ID : 26433062651

Status : Answered

Chosen Option : 2

Q.5 A person sold an item to B at 38% gain and B sold it to C at a loss of 28%. If C bought the item for ₹9,936, then at what price did A purchase it?

@Qmaths

Ans

☒ 1. ₹15,000

☒ 2. ₹8,000

☒ 3. ₹10,000

☒ 4. ₹12,000

Question ID : 26433058966

Status : Answered

Chosen Option : 3

Q.6 What is the HCF of the polynomials $(x^4 - 1)$, $(x^3 - 3x^2 + 3x - 1)$ and $(x^3 - 2x^2 + x)$?

Ans

☒ 1. $(x - 4)$

☒ 2. $(x - 2)$

☒ 3. $(x - 8)$

☒ 4. $(x - 1)$

Question ID : 26433063355

Status : Answered

Chosen Option : 4

Q.7 The value of $\sin 10^\circ \cdot \sin 50^\circ \cdot \sin 60^\circ \cdot \sin 70^\circ$ is:

Ans

☒ 1. $\frac{\sqrt{3}}{16}$

☒ 2. $\frac{\sqrt{3}}{15}$

☒ 3. $\frac{\sqrt{3}}{4}$

☒ 4. $\frac{\sqrt{3}}{2}$

Question ID : 26433061367

Status : Answered

Chosen Option : 1

Q.8 Find the smallest 5-digit number which when divided by 15, 20 and 25 leaves remainders 7, 12 and 17, respectively.

- Ans ☒ 1. 10192
☐ 2. 10194
☐ 3. 10195
☐ 4. 10193

Question ID : 26433063360
Status : Answered
Chosen Option : 1

Q.9 If $x + \frac{1}{x} = 3$, then the value of $x^4 + \frac{1}{x^4}$ is:

- Ans ☐ 1. 49
☐ 2. 55
☐ 3. 36
☒ 4. 47

Question ID : 26433061451
Status : Answered
Chosen Option : 4

Q.10 P's salary is 30% of Q's salary and Q's salary is 20% of R's salary. What percentage of R's salary is P's salary?

- Ans ☐ 1. 5%
☒ 2. 6%
☐ 3. 8%
☐ 4. 10%

Question ID : 26433063461
Status : Answered
Chosen Option : 2

Q.11 Twenty men take 10 days to complete a job, working 8 hours a day. How many hours a day would 25 men take in 10 days to complete the job?

- Ans ☐ 1. 6.8
☐ 2. 6.2
☒ 3. 6.4
☐ 4. 6.6

Question ID : 26433058693
Status : Answered
Chosen Option : 3

Q.12 A boat takes 20 hours to travel downstream from point P to point Q and to come back to a point R which is at midway between P and Q. If the velocity of the stream is 6 km/h and the speed of the boat in still water is 18 km/h, what is the distance between P and Q?

- Ans ☐ 1. 280 km
☒ 2. 240 km
☐ 3. 320 km
☐ 4. 180 km

Question ID : 26433058914
Status : Answered
Chosen Option : 3

Q.13 Three solid metallic cubes having sides 2 cm, 12 cm and 16 cm, respectively, are melted and recast into a single cube. What is the length of the side (in cm) of the cube so obtained?

- Ans
- ☐ 1. 14
 - ☐ 2. 20
 - ☒ 3. 18
 - ☐ 4. 17

Question ID : 26433063269
Status : Answered
Chosen Option : 3

Q.14 A solid cylinder of radius 20 units is melted so as to make solid cones with radius 4 units but same height as that of the cylinder. How many such cones can be made?

- Ans
- ☒ 1. 75
 - ☐ 2. 100
 - ☐ 3. 150
 - ☐ 4. 85

Question ID : 26433056345
Status : Answered
Chosen Option : 1

Q.15 A mobile phone is available for Rs.25,000 or Rs.5,200 down payment, followed by 4 equal monthly instalments. If the rate of interest is 25% p.a. simple interest, calculate the amount of each instalment.

- Ans
- ☐ 1. Rs.5,020
 - ☒ 2. Rs.5,200
 - ☐ 3. Rs.5,362
 - ☐ 4. Rs.4,950

Question ID : 26433058145
Status : Not Answered
Chosen Option : --

Q.16 In what ratio must 45% milk be mixed with that of 25% grape juice so as to get a mixture of 40% grape juice?

- Ans
- ☐ 1. 2 : 3
 - ☐ 2. 4 : 1
 - ☐ 3. 4 : 3
 - ☒ 4. 3 : 1

Question ID : 26433071279
Status : Not Answered
Chosen Option : --

Q.17 If $x + y + z = 35$, $x^2 + y^2 + z^2 = 525$, and $yz = x^2$, $y > z > 0$, what is the value of $(y - z)$?

- Ans
- ☒ 1. 15
 - ☐ 2. 30
 - ☐ 3. 25
 - ☐ 4. 20

Question ID : 26433061952
Status : Answered
Chosen Option : 1

Q.18 What is the difference between compound interest and simple interest for 2 years on the sum of Rs.6,800 at 15% per annum?

- Ans ☒ 1. Rs.148
☒ 2. Rs.153
☒ 3. Rs.163
☒ 4. Rs.155

Question ID : 26433061078
Status : Answered
Chosen Option : 2

Q.19 Annual production of four different types of chocolates has been tabulated in the following table. Which of these chocolates has encountered maximum percentage increment in production?

Chocolates	2010	2011
A	720000	780000
B	850000	880000
C	690000	740000
D	580000	670000

- Ans ☒ 1. B
☒ 2. A
☒ 3. D
☒ 4. C

Question ID : 26433074319
Status : Answered
Chosen Option : 3

Q.20 Sanju and Manju had 20% and 30% rupees less than Anju, respectively. Find the ratio of the money with Sanju to that with Manju.

- Ans ☒ 1. 2 : 3
☒ 2. 7 : 8
☒ 3. 8 : 7
☒ 4. 3 : 2

Question ID : 26433058407
Status : Answered
Chosen Option : 3

Section : Part-C-General Intelligence

Q.1 Seven friends - T, U, V, W, X, Y and Z - are sitting around a circular table, facing towards the centre of the table. T is an immediate neighbour of W and Y. V is second to the right of T. U is third to the right of Y. Z is not an immediate neighbour of V. If U is an immediate neighbour of X and Z, what is the position of Z?

- Ans ☒ 1. Third to the right to Y
☒ 2. Immediate left of W
☒ 3. Second to the right of U
☒ 4. Second to the left of V

Question ID : 26433068814
Status : Answered
Chosen Option : 2

Q.2 सुरक्षा ने सुभद्रा की एक तस्वीर की ओर इशारा करते हुए कहा, "वह मेरे पिता के भाई की इकलौती भाभी की बेटी है।" सुभद्रा का सुरक्षा से क्या संबंध है?

- Ans
- ☒ 1. माँ
 - ☒ 2. बहन
 - ☒ 3. दादी
 - ☒ 4. चाचा की बेटी

Question ID : 26433057708
Status : Answered
Chosen Option : 2

Q.3 Select the option that is related to the third term in the same way as the second term is related to the first term and the sixth term is related to the fifth term.
7 : 25 :: 12 : ? :: 16 : 70

- Ans
- ☒ 1. 50
 - ☒ 2. 45
 - ☒ 3. 60
 - ☒ 4. 55

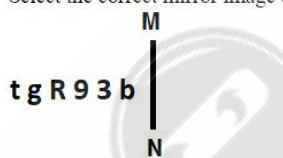
Question ID : 26433057062
Status : Answered
Chosen Option : 1

Q.4 Select the combination of letters that when sequentially placed in the blanks of the given series, will complete the series.
GHIG _ HIGGH _ I _ GHH _ IG

- Ans
- ☒ 1. GHHI
 - ☒ 2. IHIG
 - ☒ 3. GHGI
 - ☒ 4. HHGG

Question ID : 26433057735
Status : Answered
Chosen Option : 3

Q.5 Select the correct mirror image of the given figure when the mirror is placed at MN as shown below.



- Ans
- ☒ 1. b Ǝ 9 R g t
 - ☒ 2. d Ǝ 9 R g t
 - ☒ 3. p Ǝ 9 R g t
 - ☒ 4. d Ǝ 9 R g t

Question ID : 26433056971
Status : Answered
Chosen Option : 4

Q.6 Which of the following numbers will replace the question mark (?) in the given series?
756, 772, 740, ?, 724

Ans ☒ 1. 788

☒ 2. 756

☒ 3. 738

☒ 4. 798

Question ID : 26433056473

Status : Answered

Chosen Option : 1

Q.7 A is the son of B. B is the father of C. C is the wife of D. E and F are the daughters of D.
How is F related to A?

Ans ☒ 1. Sister's daughter

☒ 2. Sister's sister

☒ 3. Daughter

☒ 4. Sister

Question ID : 26433057832

Status : Answered

Chosen Option : 1

Q.8 Select the option that is related to the fifth letter cluster in the same way as the second letter cluster is related to the first letter cluster and the fourth letter cluster is related to the third letter cluster.
RLZ : NHV :: YGV : UCR :: WLA : ?

Ans ☒ 1. SHW

☒ 2. SDN

☒ 3. NRW

☒ 4. HRT

Question ID : 26433074681

Status : Answered

Chosen Option : 1

Q.9 In a code language, 'BOARD' is coded as E55 and 'HOVER' is coded as S83. How will 'GHOST' be coded in the same language?

Ans ☒ 1. U84

☒ 2. S83

☒ 3. U80

☒ 4. S82

Question ID : 26433057821

Status : Answered

Chosen Option : 1

Q.10 Based on the position in the English alphabetical order, three of the following letter-clusters are alike in some manner and one is different. Select the odd letter-cluster.

Ans ☒ 1. FHJG

☒ 2. RUVS

☒ 3. MOQN

☒ 4. BDFC

Question ID : 26433095717

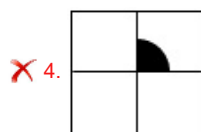
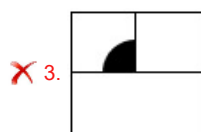
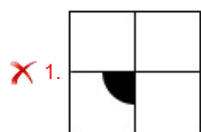
Status : Answered

Chosen Option : 2

Q.11 Select the figure that will replace the question mark (?) in the following figure series.



Ans

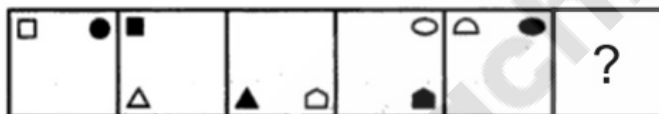


Question ID : 26433055721

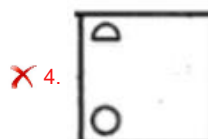

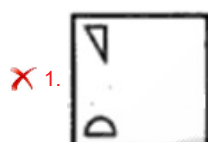
Status : Answered

Chosen Option : 2

Q.12 Select the figure from among the given options that can replace the question mark (?) in the following series.



Ans



Question ID : 26433080533

Status : Answered

Chosen Option : 2

Q.13 Which of the following numbers will replace the question mark (?) in the given series?
89, 96, 110, 121, 141, 156, 182, ?

- Ans ☒ 1. 211
☒ 2. 205
☒ 3. 196
☒ 4. 201

Question ID : 26433057559
Status : Answered
Chosen Option : 4

Q.14 Select the option that is related to the fourth number in the same way as the first number is related to the second number and the fifth number is related to the sixth number.
361 : 18 :: ? : 20 :: 529 : 22

- Ans ☒ 1. 484
☒ 2. 576
☒ 3. 400
☒ 4. 441

Question ID : 26433056481
Status : Answered
Chosen Option : 4

Q.15 Read the given statements and conclusions carefully. Assuming that the information given in the statements is true, even if it appears to be at variance with commonly known facts, decide which of the given conclusions logically follow(s) from the statements.

Statements:

All boats are hotels.

Some hotels are palaces.

No palace is a mansion.

Conclusions:

I. Some boats are palaces.

II. Some mansions being not hotels is a possibility.

III. No boat is a palace.

- Ans ☒ 1. Only conclusion I follows.
☒ 2. Conclusion II and either conclusion I or conclusion III follow.
☒ 3. I, II and III follow.
☒ 4. Both conclusions I and II follow.

Question ID : 26433079073
Status : Not Answered
Chosen Option : --

Q.16 Which two groups of numbers should be interchanged to balance the given equation?
 $376 \times 6 - 478 \div 2 \times 8 + 100 = 19 \times 11 + 14 \times 80$

- Ans ☒ 1. (6 and 8), and (14 and 19)
☒ 2. (478 and 100), and (19 and 80)
☒ 3. (376 and 478), and (11 and 14)
☒ 4. (376 and 478), and (6 and 8)

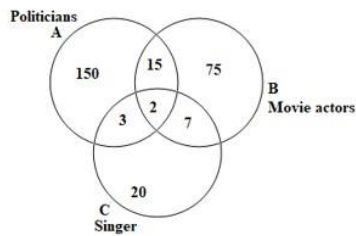
Question ID : 26433056527
Status : Answered
Chosen Option : 1

Q.17 Which letter cluster will replace the question mark(?) to complete the given series?
EMXB, ?, YGRV, VDOS, SALP

- Ans ☒ 1. BJUY
☒ 2. JBUY
☒ 3. BYJU
☒ 4. YUBJ

Question ID : 26433065592
 Status : Answered
 Chosen Option : 1

Q.18 Study the given diagram carefully and answer the question. The numbers in different sections indicate the number of persons.



How many politicians are there who are Movie actors and singers also?

- Ans ☒ 1. 2
☒ 2. 12
☒ 3. 3
☒ 4. 7

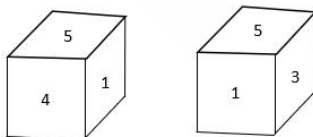
Question ID : 26433069669
 Status : Answered
 Chosen Option : 4

Q.19 In a code language, 'RABBIT' is coded as BSCCUJ and 'DRAGON' is coded as SEHBOP. How will 'FALCON' be coded in the same language?

- Ans ☒ 1. BGENOP
☒ 2. CHDMPP
☒ 3. BHDMP
☒ 4. BGDMP

Question ID : 26433057911
 Status : Answered
 Chosen Option : 4

Q.20 Two different positions of the same dice are shown. What number will be on the bottom if 3 is on top?



- Ans ☒ 1. 1
☒ 2. 5
☒ 3. 2
☒ 4. 4

Question ID : 26433058116
 Status : Answered
 Chosen Option : 4

Q.21 Select the option that represents the correct order of the given words as they would appear in an English dictionary.

1. Merchant
2. Meteorite
3. Mercy
4. Mermaid
5. Menace
6. Merit

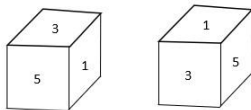
Ans ☒ 1. 5, 3, 1, 6, 4, 2
☒ 2. 2, 1, 3, 6, 4, 5
☒ 3. 5, 1, 4, 6, 3, 2
☒ 4. 5, 1, 3, 6, 4, 2

Question ID : 26433056722

Status : Answered

Chosen Option : 4

Q.22 Two different positions of a standard dice are shown below. What will be the sum of the numbers which are opposite 3, 1 and 5?



Ans ☒ 1. 12
☒ 2. 9
☒ 3. 10
☒ 4. 8

Question ID : 26433058117

Status : Answered

Chosen Option : 1

Q.23 Which two signs should be interchanged to make the given equation correct?
 $82 \times 2 + 76 - 12 \div 6 = 45$

Ans ☒ 1. \times and \div
☒ 2. $+$ and $-$
☒ 3. $+$ and \times
☒ 4. \div and $-$

Question ID : 26433056864

Status : Answered

Chosen Option : 1

Q.24 Select the option that is related to the fifth letter cluster in the same way as the second letter cluster is related to the first letter cluster and the fourth letter cluster is related to the third letter cluster.

TBFNR : MNYZK :: GWDNM : ZIWZF :: YDJCQ : ?

Ans ☒ 1. RPCOJ
☒ 2. PCJOR
☒ 3. PCORJ
☒ 4. RJPOC

Question ID : 26433074704

Status : Answered

Chosen Option : 1

Q.25 J, K, M, P, S, T, Y and Z are sitting around a square table facing the centre of the table. Some of them are sitting at the corners, while some are sitting at the exact centre of the sides.

Y sits at one of the corners of the table. Only one person sits between Y and T. S sits third to the right of T. Only three people sit between S and J. P sits to the immediate left of J. Only two people sit between P and M. Z is not an immediate neighbour of S. Who sits exactly between K and Y?

- Ans
- ☒ 1. P
 - ☒ 2. M
 - ☒ 3. S
 - ☒ 4. Z

Question ID : 26433058035
Status : Answered
Chosen Option : 3

Section : Part-D- English Language

Q.1 Select the most appropriate synonym of the highlighted word in the following sentence.

My parents decided to sell the obsolete machinery lying in the farm and renovate the place.

- Ans
- ☒ 1. Overweight
 - ☒ 2. Outdated
 - ☒ 3. Corroded
 - ☒ 4. Expensive

Question ID : 26433065220
Status : Answered
Chosen Option : 2

Q.2 Sentences of a paragraph are given below in jumbled order. Arrange the sentences in the correct order to form a meaningful and coherent paragraph.

A.It was dedicated to the memory of Queen Victoria and was formally opened in 1921.
B.Prince of Wales laid the foundation of the building.
C.Victoria Memorial is located in Kolkata, India.
D.It is now a museum under the Ministry of Culture.

- Ans
- ☒ 1. DACB
 - ☒ 2. CBDA
 - ☒ 3. ACDB
 - ☒ 4. CABD

Question ID : 26433072385
Status : Answered
Chosen Option : 4

Q.3 Identify the error in tense and choose the correct form of the verb in present perfect tense from the following options.
We often talk about travelling to Bali.

- Ans
- ☒ 1. often been talking
 - ☒ 2. often have been talking
 - ☒ 3. are often talking
 - ☒ 4. have often talked

Question ID : 26433059076
Status : Answered
Chosen Option : 4

Q.4 Select the most appropriate idiom or phrase to complete the given sentence.

The final round contestants at the Miss Thailand pageant will be tested for brains because _____.

- Ans
- ☒ 1. of their polished performance
 - ☒ 2. they bring to book
 - ☒ 3. beauty is only skin deep
 - ☒ 4. they hit the nail on the head

Question ID : 26433070661
Status : Answered
Chosen Option : 3

Q.5 Select the most appropriate ANTONYM of the underlined word.

Without the encumbrance of a heavy backpack, I could run along the road.

- Ans
- ☒ 1. Nuisance
 - ☒ 2. Impediment
 - ☒ 3. Asset
 - ☒ 4. Scarcity

Question ID : 26433055845
Status : Answered
Chosen Option : 3

Q.6 Select the most appropriate option to fill in the blank.

Is this, I have wondered, the growth of a spirit of resignation, or is it a _____ of the texture?

- Ans
- ☒ 1. toughen
 - ☒ 2. tough
 - ☒ 3. toughened
 - ☒ 4. toughening

Question ID : 26433063555
Status : Answered
Chosen Option : 2

Q.7 Select the most appropriate option to fill in the blank.

These words of comfort, uttered with cheering tones, and accompanied with a look of inexpressible tenderness and serenity, brought back peace for a while to her troubled spirit. They communicated together, and on parting, the magnanimous woman once more embraced her young friend; then stretching her hand toward heaven, said, "Be tranquil, Maria! by tomorrow morning we are there, and all our sorrows stay here _____ us."

- Ans
- ☒ 1. away
 - ☒ 2. above
 - ☒ 3. apart
 - ☒ 4. behind

Question ID : 26433069770
Status : Answered
Chosen Option : 4

Q.8 Select the option that can be used as a one-word substitute for the given group of words.

Study of statistics of population

- Ans** ☒ 1. Topography
☒ 2. Geography
☒ 3. Demography
☒ 4. Holography

Question ID : 26433070577
Status : Answered
Chosen Option : 3

Q.9 Select the most appropriate synonym of the given word.

Obstinate

- Ans** ☒ 1. Stubborn
☒ 2. Ordinary
☒ 3. Old
☒ 4. Obsolete

Question ID : 26433055858
Status : Answered
Chosen Option : 1

Q.10 Select the INCORRECTLY spelt word.

- Ans** ☒ 1. Economy
☒ 2. Traverse
☒ 3. Privelege
☒ 4. Productive

Question ID : 26433066152
Status : Answered
Chosen Option : 3

Q.11 Select the most appropriate ANTONYM of the given word.

Subjective

- Ans** ☒ 1. Supportive
☒ 2. Biased
☒ 3. Personal
☒ 4. Objective

Question ID : 26433063161
Status : Answered
Chosen Option : 4

Q.12 Select the most appropriate ANTONYM of the underlined word in a sentence.

He remained in a stupor for many days after the incident.

- Ans
- ☒ 1. Drowsy
 - ☒ 2. Exhaust
 - ☒ 3. Ignorant
 - ☒ 4. Consciousness

Question ID : 26433056005
Status : Answered
Chosen Option : 4

Q.13 The following sentence has been split into four segments. Identify the segment that contains a grammatical error.

She needed a break then / because she had solved / mathematical problems / all morning.

- Ans
- ☒ 1. because she had solved
 - ☒ 2. mathematical problems
 - ☒ 3. She needed a break then
 - ☒ 4. all morning

Question ID : 26433055839
Status : Answered
Chosen Option : 1

Q.14 Select the most appropriate idiom or phrase to complete the given sentence.

The thief _____ when he thought he heard someone coming.

- Ans
- ☒ 1. was behind one's back
 - ☒ 2. had a tight spot
 - ☒ 3. took to his heels
 - ☒ 4. upset the apple cart

Question ID : 26433056015
Status : Answered
Chosen Option : 2

Q.15 Select the most appropriate option that can substitute the underlined segment in the given sentence. If there is no need to substitute it, select 'No substitution'.

My dear friends, we does not use it in mopping, cloth washing and bathing.

- Ans
- ☒ 1. No substitution
 - ☒ 2. do not use it in mop, cloth washing and bathing.
 - ☒ 3. do not use it in mopping, cloth washing and bathing.
 - ☒ 4. does not use it in mopping, cloth washing and bath.

Question ID : 26433072301
Status : Answered
Chosen Option : 3

Q.16 Select the most appropriate synonym of the given word.

Bifurcation

- Ans ☒ 1. Division
☒ 2. Amalgam
☒ 3. Assembling
☒ 4. Confluence

Question ID : 26433063579
Status : Answered
Chosen Option : 1

Q.17 Select the most appropriate option to fill in the blanks.

In his _____ the commander _____ the soldiers for their unruly behaviour and asked them to submit apology letters.

- Ans ☒ 1. harangue; admonished
☒ 2. eulogy; extolled
☒ 3. ministration; lauded
☒ 4. discourse; commended

Question ID : 26433065188
Status : Answered
Chosen Option : 1

Q.18 Select the most appropriate option to fill in the blank.

My neighbour has become dependent on drugs. He is a/an _____.

- Ans ☒ 1. derelict
☒ 2. adamant
☒ 3. addict
☒ 4. edict

Question ID : 26433072478
Status : Answered
Chosen Option : 3

Q.19 Select the INCORRECTLY spelt word.

- Ans ☒ 1. Speech
☒ 2. Organic
☒ 3. Practice
☒ 4. Tenor

Question ID : 26433066140
Status : Answered
Chosen Option : 1

Q.20 Select the most appropriate meaning of the underlined word.

After coming back from the war, Ulysses decided to spend an indolent life in Ithaca.

- Ans
- ☐ 1. Arduous and painstaking
 - ☐ 2. Unfavourable and hostile
 - ☐ 3. Enthusiastic and devotional
 - ☒ 4. Uninteresting and lazy

Question ID : 26433058629

Status : Answered

Chosen Option : 4

Comprehension:

In the following passage, some words have been deleted. Read the passage carefully and select the most appropriate option to fill in each blank.

I now (1)_____ Catherine's weekly sessions at the end of the day, because they were (2)_____ several hours. She still had that peaceful look about her when she came in the (3)_____ week. She had talked with her father on the phone. Without giving him any details, she had, in her (4)_____ forgiven him. I had never seen her this (5)_____

SubQuestion No : 21

Q.21 Select the most appropriate option to fill in blank number 1.

- Ans
- ☐ 1. prelude
 - ☐ 2. put
 - ☒ 3. scheduled
 - ☐ 4. pushed

Question ID : 26433058769

Status : Answered

Chosen Option : 3

Comprehension:

In the following passage, some words have been deleted. Read the passage carefully and select the most appropriate option to fill in each blank.

I now (1)_____ Catherine's weekly sessions at the end of the day, because they were (2)_____ several hours. She still had that peaceful look about her when she came in the (3)_____ week. She had talked with her father on the phone. Without giving him any details, she had, in her (4)_____ forgiven him. I had never seen her this (5)_____

SubQuestion No : 22

Q.22 Select the most appropriate option to fill in blank number 2.

- Ans
- ☐ 1. staying
 - ☐ 2. pasting
 - ☒ 3. lasting
 - ☐ 4. sitting

Question ID : 26433058770

Status : Answered

Chosen Option : 4

Comprehension:

In the following passage, some words have been deleted. Read the passage carefully and select the most appropriate option to fill in each blank.

I now (1) _____ Catherine's weekly sessions at the end of the day, because they were (2) _____ several hours. She still had that peaceful look about her when she came in the (3) _____ week. She had talked with her father on the phone. Without giving him any details, she had, in her (4) _____ forgiven him. I had never seen her this (5) _____

SubQuestion No : 23

Q.23 Select the most appropriate option to fill in blank number 3.

- Ans ☒ 1. latest
☒ 2. current
☒ 3. present
☒ 4. following

Question ID : 26433058771

Status : Answered

Chosen Option : 4

Comprehension:

In the following passage, some words have been deleted. Read the passage carefully and select the most appropriate option to fill in each blank.

I now (1) _____ Catherine's weekly sessions at the end of the day, because they were (2) _____ several hours. She still had that peaceful look about her when she came in the (3) _____ week. She had talked with her father on the phone. Without giving him any details, she had, in her (4) _____ forgiven him. I had never seen her this (5) _____

SubQuestion No : 24

Q.24 Select the most appropriate option to fill in blank number 4.

- Ans ☒ 1. cruelty
☒ 2. way
☒ 3. anger
☒ 4. mentality

Question ID : 26433058772

Status : Answered

Chosen Option : 2

Comprehension:

In the following passage, some words have been deleted. Read the passage carefully and select the most appropriate option to fill in each blank.

I now (1) _____ Catherine's weekly sessions at the end of the day, because they were (2) _____ several hours. She still had that peaceful look about her when she came in the (3) _____ week. She had talked with her father on the phone. Without giving him any details, she had, in her (4) _____ forgiven him. I had never seen her this (5) _____

SubQuestion No : 25

Q.25 Select the most appropriate option to fill in blank number 5.

- Ans ☒ 1. scared
☒ 2. nervous
☒ 3. serene
☒ 4. clean

Question ID : 26433058773

Status : Answered

Chosen Option : 3

Q.1 _____ shortcut key is used in MS-Excel 2010 to start a new line of text or add spacing between lines or paragraphs of text in a worksheet cell.

- Ans
- ☒ 1. Ctrl+Space
 - ☒ 2. Ctrl+Enter
 - ☒ 3. ALT+Enter
 - ☒ 4. ALT+Space

Question ID : 26433095452
Status : Answered
Chosen Option : 2

Q.2 Which of the following keyboard shortcut is used to save a MS-Word 2010 document?

- Ans
- ☒ 1. Ctrl + C
 - ☒ 2. Ctrl + A
 - ☒ 3. Ctrl + S
 - ☒ 4. Ctrl + B

@Qmaths

Question ID : 26433095331
Status : Answered
Chosen Option : 3

Q.3 _____ function key is used to close a workbook in MS-Excel 2010.

- Ans
- ☒ 1. Ctrl+F2
 - ☒ 2. Ctrl+F3
 - ☒ 3. Ctrl+F1
 - ☒ 4. Ctrl+F4

Question ID : 26433095409
Status : Answered
Chosen Option : 4

Q.4 Choose the wrong option with respect to MS-Excel 2010:

- Ans
- ☒ 1. In MS-Excel 2010, Ctrl + 9 is used in hiding the rows within the sheet.
 - ☒ 2. In MS-Excel 2010, Alt + 0 is used in hiding the columns within the sheet.
 - ☒ 3. In MS-Excel 2010, Ctrl + 0 is used in hiding the columns within the sheet.
 - ☒ 4. In MS-Excel 2010, Home Tab in ribbon bar contains the most frequently used commands such as copying and pasting, sorting and filtering, formatting, etc

Question ID : 26433095484
Status : Answered
Chosen Option : 1

Q.5 In MS-Excel 2010 _____ function returns the year corresponding to a date.

- Ans
- ☒ 1. YEAR
 - ☒ 2. CURRENT
 - ☒ 3. NOW
 - ☒ 4. TODAY

Question ID : 26433095481
Status : Not Answered
Chosen Option : --

Q.6 Google Chrome is a web browsing software developed in the year _____ by Google Inc.

- Ans
- ☒ 1. 2010
 - ☒ 2. 2007
 - ☒ 3. 2008
 - ☒ 4. 2009

Question ID : 26433095397
Status : Not Answered
Chosen Option : --

Q.7 Consider a formula " $=B2+4$ " in cell A1 of MS-Excel 2010. If cell A1 is copied and pasted into D4, then what will be the formula in D4?

- Ans
- ☒ 1. $=B4+7$
 - ☒ 2. $=D4+4$
 - ☒ 3. $=B2+4$
 - ☒ 4. $=E5+4$

Question ID : 26433095329
Status : Answered
Chosen Option : 3

Q.8 Which of the following is a correct sequence of an email address?

- Ans
- ☒ 1. User name, @, Domain name
 - ☒ 2. @, Domain name, User name
 - ☒ 3. Domain name, @, User name
 - ☒ 4. @, User name, Domain name

Question ID : 26433095525
Status : Answered
Chosen Option : 1

Q.9 Internet is a group of interconnected computers across the globe. Internet itself is a type of _____.

- Ans
- ☒ 1. WAN
 - ☒ 2. MAN
 - ☒ 3. LAN
 - ☒ 4. VPN

Question ID : 26433095316
Status : Answered
Chosen Option : 1

Q.10 Which of the following operation adds content from clipboard to your document in MS-Word 2010?

- Ans
- ☒ 1. Hyphenation
 - ☒ 2. Paste
 - ☒ 3. Copy
 - ☒ 4. Format painter

Question ID : 26433095523
Status : Answered
Chosen Option : 2