



Teachingninja.in



Latest Govt Job updates



Private Job updates



Free Mock tests available

Visit - teachingninja.in



Delhi Police Head Constable

**Previous Year Paper
(Ministerial) 20 Oct 2022
Shift 3**



Head Constable Ministerial in Delhi Police Examination 2022

Roll Number	
Candidate Name	
Venue Name	ION Digital Zone iDZ Headway IT services Mangal Compound Dewas Naka
Exam Date	20/10/2022
Exam Time	5:00 PM - 6:30 PM
Subject	Head Constable Ministerial in Delhi Police Examination 2022

Section : **Part-A-General Awareness**

Q.1 Van Vihar National Park is located in which of the following cities of India?

- Ans ☒ 1. Alwar
☒ 2. Indore
☒ 3. Ranthambore
☒ 4. Bhopal

Question ID : **26433095255**
Status : **Answered**
Chosen Option : 4

Q.2 Who among the following took over as the Chief Minister of Punjab in September 2021?

- Ans ☒ 1. O P Soni
☒ 2. Sukhjinder Randhawa
☒ 3. Sunil Jakhar
☒ 4. Charanjit Singh Channi

Question ID : **26433061784**
Status : **Answered**
Chosen Option : 4

Q.3 The 'Aman Setu' is located between:

- Ans ☒ 1. Pathankot and Amritsar
☒ 2. Srinagar and Muzaffarabad
☒ 3. Hussainiwala border
☒ 4. Jammu and Kashmir

Question ID : **26433059217**
Status : **Not Answered**
Chosen Option : --

Q.4 The 'Salt Satyagraha' was launched by Mahatma Gandhi in the year:

- Ans ☒ 1. 1929
☒ 2. 1930
☒ 3. 1920
☒ 4. 1919

Question ID : **26433055628**
Status : **Answered**
Chosen Option : 2

Q.5 Why was the growth rate of India during 1901-1921 stagnant and the phase of India's population considered stationary?

- Ans
- ☐ 1. Birth rate and death rate were low
 - ☐ 2. Birth rate was high and death rate was low
 - ☒ 3. Birth rate and death rate were high
 - ☐ 4. Birth rate was low and death rate was high

Question ID : 26433071599
Status : Not Answered
Chosen Option : --

Q.6 After being presented separately for 92 years, when was the Railway Budget merged with the Union Budget and since then presented together?

- Ans
- ☐ 1. 2015
 - ☐ 2. 2014
 - ☒ 3. 2017
 - ☐ 4. 2016

Question ID : 26433064482
Status : Not Answered
Chosen Option : --

Q.7 Which of the following is not true about the Great ruler of South India-Rajaraja Chola?

- Ans
- ☐ 1. He built great navy.
 - ☐ 2. He was a tolerant ruler.
 - ☒ 3. He did not contribute anything to the south Indian architecture.
 - ☐ 4. He laid the foundation of local self-government.

Question ID : 26433095231
Status : Answered
Chosen Option : 3

Q.8 Which of the following institutions provides microfinance for small industries in India?

- Ans
- ☒ 1. SIDBI
 - ☐ 2. NABARD
 - ☐ 3. IFCI
 - ☐ 4. IDBI

Question ID : 26433059098
Status : Not Answered
Chosen Option : --

Q.9 Which of the following Indian classical dance forms is interpreted as the dance of the celestial enchantress of the Hindu mythology?

- Ans
- ☐ 1. Sattriya
 - ☐ 2. Bharatnatyam
 - ☐ 3. Kathak
 - ☒ 4. Mohiniyattam

Question ID : 26433072623
Status : Not Answered
Chosen Option : --

Q.10 Identify the number of gun salute given to the President on Republic Day.

- Ans ☒ 1. 18
☒ 2. 10
☒ 3. 21
☒ 4. 12

Question ID : 26433066542
Status : Answered
Chosen Option : 3

Q.11 In which year were the fundamental duties for the citizens added in the Constitution of India?

- Ans ☒ 1. 1975
☒ 2. 1977
☒ 3. 1978
☒ 4. 1976

Question ID : 26433064698
Status : Answered
Chosen Option : 3

Q.12 Who among the following was the Mughal emperor when the Jama Masjid of Delhi was built?

- Ans ☒ 1. Aurangzeb
☒ 2. Akbar
☒ 3. Shah Jahan
☒ 4. Jehangir

Question ID : 26433064357
Status : Not Answered
Chosen Option : --

Q.13 Which state recorded the highest number of in-migrants, according to the 2011 Census?

- Ans ☒ 1. Gujarat
☒ 2. Rajasthan
☒ 3. Uttar Pradesh
☒ 4. Maharashtra

Question ID : 26433069787
Status : Not Answered
Chosen Option : --

Q.14 "A procedure that involves the transplantation, implantation or infusion into a human recipient of either (a) live cells, tissues, or organs from a nonhuman animal source, or (b) human body fluids, cells, tissues or organs that have had ex vivo contact with live non-human animal cells, tissues or organs" is called what?

- Ans ☒ 1. Biotransplantation
☒ 2. Xenotransplantation
☒ 3. Anotransplantation
☒ 4. Zootransplantation

Question ID : 26433095233
Status : Not Answered
Chosen Option : --

Q.15 Which of the following schemes implemented by the Ministry of Social Justice and Empowerment from the year 2021-22 is a National Action Plan for skilling marginalised sections of the population including OBCs, SCs, DNTs, EBCs, and sanitation workers comprising waster pickers?

- Ans
- ☒ 1. Hridaya Plan
 - ☒ 2. Rail Kaushal Vikas Yojana
 - ☒ 3. PM Daksh Yojana
 - ☒ 4. PM Mudra Yojana

Question ID : 26433061790
Status : Answered
Chosen Option : 4

Q.16 Who among the following cricketers was the most expensive buy at the IPL 2022 auction?

- Ans
- ☒ 1. Shreyas Iyer
 - ☒ 2. Ishan Kishan
 - ☒ 3. Pat Cummins
 - ☒ 4. Chris Morris

@Qmaths

Question ID : 26433061819
Status : Not Answered
Chosen Option : --

Q.17 The industrial sector of the country was divided into how many schedules under the Industrial Policy Resolution 1956?

- Ans
- ☒ 1. Four
 - ☒ 2. Three
 - ☒ 3. Five
 - ☒ 4. Two

Question ID : 26433059275
Status : Not Answered
Chosen Option : --

Q.18 Which of the following options is correct about ITCZ?

- Ans
- ☒ 1. Short range monsoon rainfall
 - ☒ 2. Low pressure zone
 - ☒ 3. El-Nino
 - ☒ 4. La-Nina

Question ID : 26433059218
Status : Not Answered
Chosen Option : --

Q.19 The book 'Anomalies in Law and Justice' released in June 2021 is authored by _____.

- Ans
- ☒ 1. B.N. Srikrishna
 - ☒ 2. N.V. Ramana
 - ☒ 3. R. Banumathi
 - ☒ 4. R.V. Raveendran

Question ID : 26433061851
Status : Not Answered
Chosen Option : --

Q.20 Who among the following led the Theosophical Society in India and helped to spread its beliefs all over India?

- Ans
- ☒ 1. Colonel Henri Steel Olcott
 - ☒ 2. Hari Chand Chintamani
 - ☒ 3. Annie Besant
 - ☒ 4. Madam H.P. Blavatsky

Question ID : 26433054206

Status : Not Attempted and Marked For Review

Chosen Option : --

Section : Part-B-Quantitative Aptitude

Q.1 If $p = \frac{\sqrt{3}-\sqrt{2}}{\sqrt{3}+\sqrt{2}}$ and $q = \frac{\sqrt{3}+\sqrt{2}}{\sqrt{3}-\sqrt{2}}$, then the value of $\frac{p^2}{q} + \frac{q^2}{p}$ is:

- Ans
- ☒ 1. 970
 - ☒ 2. 1030
 - ☒ 3. 930
 - ☒ 4. 900

Question ID : 26433058949

Status : Answered

Chosen Option : 1

Q.2 A and B together can do a piece of work in 18 days. B and C together can do the same work in 24 days and A and C together can do the same work in 27 days. In how many days will A, B and C complete the entire work, working together?

- Ans
- ☒ 1. $14\frac{26}{29}$
 - ☒ 2. $14\frac{13}{19}$
 - ☒ 3. $7\frac{13}{29}$
 - ☒ 4. $7\frac{13}{19}$

Question ID : 26433063243

Status : Answered

Chosen Option : 3

Q.3 Express the number $0.\overline{98}$ as a vulgar fraction.

- Ans
- ☒ 1. $\frac{98}{99}$
 - ☒ 2. $\frac{89}{90}$
 - ☒ 3. $\frac{49}{45}$
 - ☒ 4. $\frac{89}{99}$

Question ID : 26433063674

Status : Answered

Chosen Option : 2

Q.4 What is the average of the first ten odd prime numbers?

- Ans
- ☒ 1. 13.1
 - ☒ 2. 15.8
 - ☒ 3. 16.2
 - ☒ 4. 12.9

Question ID : 26433073074
Status : Answered
Chosen Option : 2

Q.5 Find the third proportional of 0.25 and 0.45.

- Ans
- ☒ 1. 0.61
 - ☒ 2. 0.81
 - ☒ 3. 0.15
 - ☒ 4. 0.35

Question ID : 26433058410
Status : Answered
Chosen Option : 2

Q.6 If $\tan\theta + \cot\theta = -2$, then the value of $\tan^9\theta + \cot^9\theta$ is:

- Ans
- ☒ 1. 2
 - ☒ 2. -1
 - ☒ 3. -2
 - ☒ 4. 0

Question ID : 26433058439
Status : Answered
Chosen Option : 3

Q.7 A conical tent is 48 m high and the diameter of its base is 28 m. What is the cost of canvas at the rate of Rs.80/m² to make the tent?

- Ans
- ☒ 1. Rs. 1,80,000
 - ☒ 2. Rs. 1,76,000
 - ☒ 3. Rs. 1,96,000
 - ☒ 4. Rs. 1,48,000

Question ID : 26433058161
Status : Answered
Chosen Option : 2

Q.8 The value of the expression $\left(1 - \frac{1}{3} + \frac{4}{9}\right) \text{ of } \frac{3}{5} \div 1\frac{2}{3} \times 1\frac{1}{4} - \frac{1}{3}$ is:

- Ans
- ☒ 1. $\frac{3}{4}$
 - ☒ 2. $\frac{2}{3}$
 - ☒ 3. $\frac{1}{6}$
 - ☒ 4. 0

Question ID : 26433057113
Status : Answered
Chosen Option : 3

Q.9 If 35% of 60% of A is equal to 25% of 75% of B, then what is the ratio of A to B?

Ans ☒ 1. 25 : 28

☐ 2. 7 : 12

☐ 3. 12 : 7

☐ 4. 28 : 25

Question ID : 26433063203

Status : Answered

Chosen Option : 1

Q.10 If Mohit covers three equal distances at the speed of 30 km/h, 25 km/h, and 20 km/h, respectively, then find his average speed during the whole journey.

Ans ☐ 1. 34.50 km/h

☒ 2. 24.32 km/h

☐ 3. 25.30 km/h

☐ 4. 43.32 km/h

@Qmaths

Question ID : 26433061273

Status : Answered

Chosen Option : 2

Q.11 In a boutique there are two workers and one machine to do the work of weaving. Shikha can finish the work in 10 hours on the machine, while Ruchika can finish it in 15 hours. Both workers Shikha and Ruchika work for an hour on alternate basis. In how many hours will the work be completed, if Shikha starts the work?

Ans ☐ 1. $12\frac{3}{4}$ hours

☐ 2. $11\frac{3}{4}$ hours

☒ 3. 12 hours

☐ 4. $10\frac{2}{3}$ hours

Question ID : 26433058804

Status : Answered

Chosen Option : 3

Q.12 If $3x - 7y = 10$ and $xy = -1$, find the value of $9x^2 + 49y^2$.

Ans ☐ 1. 71

☒ 2. 58

☐ 3. 63

☐ 4. 46

Question ID : 26433061452

Status : Answered

Chosen Option : 2

Q.13 The following table shows the production of different types of two wheelers from 1993 to 1998.
(No. of two wheelers is in 1000s)

Year Type	1993	1994	1995	1996	1997	1998
A	36	34	40	35	37.5	40
B	20	22	25	23	19.5	18
C	14	22	16	25	29	35
D	60	62	67.5	75	76	80
E	40	45	48	50	80	105
F	45	52	55	60	57.5	56
Total	215	237	251.5	268	299.5	334

What is the approximate average yearly production of the two wheelers during the period?

- Ans
- ☒ 1. 265
 - ☒ 2. 269
 - ☒ 3. 268
 - ☒ 4. 260

Question ID : 26433066378
Status : Answered
Chosen Option : 3

Q.14 If the simple interest on a sum of Rs.P at 5% per annum for three years is thrice the simple interest received on Rs.Q at 7% per annum for four years, then find the relation between P and Q.

- Ans
- ☒ 1. $Q = 2.1P$
 - ☒ 2. $Q = 3.1P$
 - ☒ 3. $P = 4.8Q$
 - ☒ 4. $P = 5.6Q$

Question ID : 26433063789
Status : Answered
Chosen Option : 4

Q.15 When sold at a marked price, the product yields a profit of 25%. If the shopkeeper sells the product after providing a 20% discount on the marked price. Determine the net percentage profit earned by the shopkeeper.

- Ans
- ☒ 1. 3%
 - ☒ 2. 5%
 - ☒ 3. 0%
 - ☒ 4. 2%

Question ID : 26433071315
Status : Answered
Chosen Option : 3

Q.16 A dishonest shopkeeper sells sugar at ₹20 per kg which he bought at ₹15 per kg. Also, he gives 850 gm instead of 1000 gm. His actual profit or loss percentage is:

- Ans
- ☒ 1. 45.45% profit
 - ☒ 2. 42.56% loss
 - ☒ 3. 50.12% loss
 - ☒ 4. 56.86% profit

Question ID : 26433058909
Status : Answered
Chosen Option : 4

Q.17 Find the LCM of $3^4 \times 5^2 \times 7^2 \times 11$, $3^3 \times 5 \times 7 \times 11^2$ and $3^2 \times 5^3 \times 11^4$.

- Ans
- ☐ 1. $3^2 \times 5 \times 11$
 - ☒ 2. $3^4 \times 5^3 \times 7^2 \times 11^4$
 - ☐ 3. $3^4 \times 5 \times 7 \times 11^4$
 - ☐ 4. $3^2 \times 5 \times 7 \times 11$

Question ID : 26433063662

Status : Answered

Chosen Option : 2

Q.18 A student wants to know the area of a rhombus, one of whose diagonals is 6 cm. He measures another diagonal as 8 cm. What is the area of the rhombus?

- Ans
- ☐ 1. 48 cm^2
 - ☐ 2. 25 cm^2
 - ☐ 3. 20 cm^2
 - ☒ 4. 24 cm^2

@Qmaths

Question ID : 26433058247

Status : Answered

Chosen Option : 4

Q.19 In $\triangle PQR$, $\angle P = 80^\circ$, $\angle Q = 58^\circ$, OQ and OR are the bisectors of $\angle Q$ and $\angle R$, respectively. Find the value of $\angle QOR$.

- Ans
- ☐ 1. 90°
 - ☐ 2. 80°
 - ☐ 3. 110°
 - ☒ 4. 130°

Question ID : 26433061747

Status : Answered

Chosen Option : 4

Q.20 A money - lender borrows money at 6% per annum and pays the interest at the end of the year. He lends it at 8% per annum compound interest compounded half-yearly and receives the interest at the end of the year. In this way, he gains Rs.108 a year. The amount of money he borrows, is:

- Ans
- ☐ 1. Rs.6,000
 - ☒ 2. Rs.5,000
 - ☐ 3. Rs.5,500
 - ☐ 4. Rs.4,500

Question ID : 26433061269

Status : Answered

Chosen Option : 2

Section : Part-C-General Intelligence

Q.1 Which of the following numbers will replace the question mark (?) in the given series?
9, 10, 20, 24, 48, ?, 114

Ans ☒ 1. 57

☐ 2. 54

☐ 3. 67

☐ 4. 60

Question ID : 26433057547

Status : Answered

Chosen Option : 1

Q.2 दीया ने कहा, "मेरे बेटे की दादी के पति का इकलौता बेटा मेरा _____ है।"

Ans ☐ 1. पिता

☒ 2. पति

☐ 3. बेटा

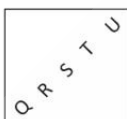
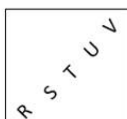
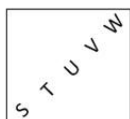
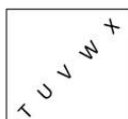
☐ 4. भाई

Question ID : 26433067256

Status : Answered

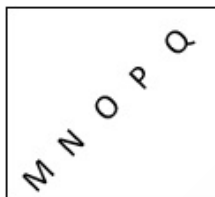
Chosen Option : 2

Q.3 Select the figure from among the given options that can replace the question mark (?) in the following series.



Ans


☐ 1.



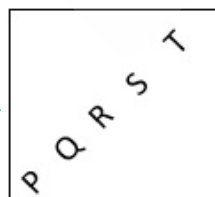
☐ 2.



☐ 3.



☒ 4.



Question ID : 26433068717

Status : Answered

Chosen Option : 4

Q.4 In a certain code language, 'FRIEND' is written as '6181810144' and 'ENEMY' is written as '1014101325'. How will 'HOME' be written in that language?

- Ans ☒ 1. 8301310
☐ 2. 16151310
☐ 3. 815135
☐ 4. 16301310

Question ID : 26433065603
Status : Answered
Chosen Option : 1

Q.5 In this question, three statements are given, followed by two conclusions numbered I and II. Assuming the statements to be true, even if they seem to be at variance with commonly known facts, decide which of the conclusion(s) logically follow(s) from the statements.

Statements:

All ships are boats.

All boats are submarines.

All submarines are cruises.

Conclusions:

I. Some ships are cruises.

II. All boats are cruises.

- Ans ☐ 1. Neither conclusion I nor II follows.
☒ 2. Both conclusions I and II follow.
☐ 3. Only conclusion II follows.
☐ 4. Only conclusion I follows.

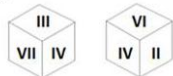
Question ID : 26433057918
Status : Answered
Chosen Option : 3

Q.6 Select the correct combination of mathematical signs to sequentially replace the * signs and to balance the given equation.
 $42 * 6 * 5 * 3 * 6 = 38$

- Ans ☒ 1. $\div \times - +$
☐ 2. $\times \div + -$
☐ 3. $+ \div \times -$
☐ 4. $- + \times \div$

Question ID : 26433057473
Status : Answered
Chosen Option : 1

Q.7 Six numbers II, III, IV, V, VI and VII are written on different faces of a dice. Two positions of this dice are shown in the figure. Find the number on the face opposite to II.



- Ans ☐ 1. VI
☒ 2. III
☐ 3. V
☐ 4. VII

Question ID : 26433057943
Status : Answered
Chosen Option : 2

Q.8 In a code language, 'MIND' is coded as KFLA, and 'SOUL' is coded as QLSI. How will 'LIFE' be coded in the same language?

- Ans ☒ 1. JFDB
☒ 2. JFCB
☒ 3. IGCB
☒ 4. IGDC

Question ID : 26433057765
 Status : Answered
 Chosen Option : 1

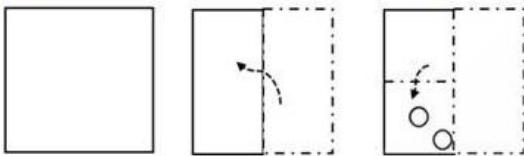
Q.9 Select the correct combination of mathematical signs to sequentially replace the * signs and to balance the given equation.
 $1027 * 359 * 2 * 669 * 3 = 430 * 5$

- Ans ☒ 1. +, ÷, -, ×, ÷
☒ 2. -, +, -, ×, +
☒ 3. ÷, -, +, -, ×
☒ 4. -, ×, -, ÷, ÷

@Qmaths

Question ID : 26433056516
 Status : Answered
 Chosen Option : 4

Q.10 A paper is folded and cut as shown below. How will it appear when unfolded?



Ans

- ☒ 1.
- ☒ 2.
- ☒ 3.
- ☒ 4.

Question ID : 26433056121
 Status : Answered
 Chosen Option : 4

Q.11 Select the option that represents the correct order of the given words as they would appear in an English dictionary.

1. Spectre
2. Specify
3. Spirit
4. Species
5. Spice
6. Sphere

Ans ☒ 1. 4, 1, 2, 6, 5, 3
☒ 2. 6, 4, 2, 1, 5, 3
☒ 3. 4, 2, 1, 6, 5, 3
☒ 4. 4, 2, 1, 5, 3, 6

Question ID : 26433056723

Status : Answered

Chosen Option : 4

Q.12 Select the combination of letters that when sequentially placed in the blanks of the given series, will complete the series.
KLMN_MN _ MN _ LNK _ MK

Ans ☒ 1. MLMML
☒ 2. KLLK
☒ 3. MKLK
☒ 4. LKKL

Question ID : 26433057736

Status : Answered

Chosen Option : 4

Q.13 Select the number from among the given options that can replace the question mark (?) in the following series.
395, 373, 351, 307, ?, 175, 87

Ans ☒ 1. 263
☒ 2. 275
☒ 3. 261
☒ 4. 270

Question ID : 26433057047

Status : Answered

Chosen Option : 1

Q.14 Which letter-cluster will replace the question mark (?) to complete the given series?
ANGE, DKLZ, GHQU, JEVF, ?


Ans ☒ 1. MCBK
☒ 2. MBAK
☒ 3. MBBK
☒ 4. MCAK

Question ID : 26433057968

Status : Answered

Chosen Option : 2

Q.15 Select the correct mirror image of the given figure when the mirror is placed at MN as shown below.



- Ans
- ✓ 1. e9SjY1ɹ
 - ✗ 2. e9ZjYrɹ
 - ✗ 3. eəZjYJɹ
 - ✗ 4. e9SjY1ɹ

Question ID : 26433056998

Status : Answered

Chosen Option : 1

Q.16 P, Q का भाई है। R, Q की माता है। S, R का भाई है। T, R के पिता है। T, P से किस प्रकार संबंधित है?

- Ans
- ✓ 1. नाना
 - ✗ 2. पुत्र
 - ✗ 3. पुत्र का पुत्र
 - ✗ 4. भाई

Question ID : 26433074717

Status : Answered

Chosen Option : 1

Q.17 Seven people D, E, F, G, H, I and J, are sitting in a straight row, facing the north. Only four people sit to the right of I. J sits second to the left of H. J is not an immediate neighbour of I. G sits fourth to the left of D. F sits to the immediate right of I. Who sits at the extreme left end of the line?


- Ans
- ✗ 1. F
 - ✗ 2. J
 - ✗ 3. G
 - ✓ 4. E

Question ID : 26433076523

Status : Answered

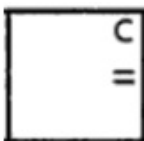
Chosen Option : 4

Q.18 Select the figure from among the given options that can replace the question mark (?) in the following series.

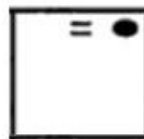


Ans

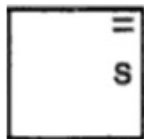
✗ 1.



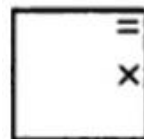
✗ 2.



✓ 3.



✗ 4.



@Qmaths

Question ID : 26433080534
Status : Answered
Chosen Option : 3

Q.19 Select the option that is related to the fifth term in the same way as the second term is related to the first term and the fourth term is related to the third term.
MEND : FOEP :: STAR : UUSC :: TERT : ?

Ans ✗ 1. GVWS

✗ 2. GWUT

✗ 3. FWWS

✓ 4. FVUT

Question ID : 26433058015
Status : Answered
Chosen Option : 4

Q.20 Select the option that is related to the fifth letter cluster in the same way as the second letter cluster is related to the first letter cluster and the fourth letter cluster is related to the third letter cluster.
HWQ : TIC :: GPS : SBE :: LTX : ?

Ans ✗ 1. ATB

✗ 2. AGR

✗ 3. ZFJ

✓ 4. XFJ

Question ID : 26433074685
Status : Answered
Chosen Option : 4

Q.21 Select the option that is related to the fourth number in the same way as the first number is related to the second number and the fifth number is related to the sixth number.

201 : 9 :: ? : 12 :: 366 : 14

- Ans
- ☒ 1. 321
 - ☒ 2. 276
 - ☒ 3. 294
 - ☒ 4. 288

Question ID : 26433056483

Status : Answered

Chosen Option : 3

Q.22 Six persons S, T, U, V, W and X are sitting around a circular table facing the centre. X is sitting second to the left of V. T is sitting second to the left of X. W is sitting second to the right of U. U is the only one sitting between X and V. Who is sitting between X and T?

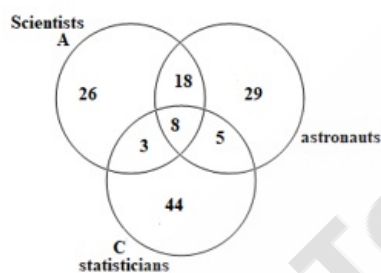
- Ans
- ☒ 1. W
 - ☒ 2. V
 - ☒ 3. S
 - ☒ 4. U

Question ID : 26433055514

Status : Answered

Chosen Option : 3

Q.23 Study the given diagram carefully and answer the question. The numbers in different sections indicate the number of persons.



How many astronauts in total are there according to the diagram?

- Ans
- ☒ 1. 31
 - ☒ 2. 60
 - ☒ 3. 29
 - ☒ 4. 47

Question ID : 26433069668

Status : Answered

Chosen Option : 2

Q.24 Three of the following letter-clusters are alike in some manner and hence form a group. Which letter-cluster does not belong to that group?

- Ans ☒ 1. DWFU
☒ 2. CXEV
☒ 3. FUHS
☒ 4. HSFU

Question ID : 26433056171
Status : Answered
Chosen Option : 4

Q.25 Select the option that is related to the fourth number in the same way as the first number is related to the second number and the fifth number is related to the sixth number.

30 : 14 :: ? : 17 :: 166 : 82

- Ans ☒ 1. 40
☒ 2. 38
☒ 3. 36
☒ 4. 56

@Qmaths

Question ID : 26433056487
Status : Answered
Chosen Option : 3

Section : Part-D- English Language

Q.1 Select the INCORRECTLY spelt word.

- Ans ☒ 1. Handsome
☒ 2. Concious
☒ 3. Crevice
☒ 4. Domicile

Question ID : 26433066137
Status : Answered
Chosen Option : 3

Q.2 Select the option that can be used as a one-word substitute for the given group of words.

One who is violently against established beliefs and traditions

- Ans ☒ 1. Iconoclast
☒ 2. Interlocutor
☒ 3. Martinet
☒ 4. Rebel

Question ID : 26433060831
Status : Answered
Chosen Option : 1

Q.3 Parts of the given sentence have been underlined and given as options. One of them contains an error. Select the option that correctly rectifies the error.

At the end, it is your happiness that matters to me the most.

- Ans
- ☒ 1. matters with me
 - ☒ 2. In the end
 - ☒ 3. To the end
 - ☒ 4. matters for me

Question ID : 26433055592
Status : Answered
Chosen Option : 2

Q.4 Select the most appropriate ANTONYM of the word brief from the given sentence:
In our lengthy farewell ceremony at school, our headmaster delivered a brief but very intense, notable, and impressive speech.

- Ans
- ☒ 1. notable
 - ☒ 2. lengthy
 - ☒ 3. impressive
 - ☒ 4. intense

Question ID : 26433058551
Status : Answered
Chosen Option : 2

Q.5 Select the most appropriate ANTONYM of the highlighted word.
The old man is very pious.

- Ans
- ☒ 1. sinful
 - ☒ 2. wistful
 - ☒ 3. thoughtful
 - ☒ 4. tactful

Question ID : 26433058299
Status : Answered
Chosen Option : 1

Q.6 Select the most appropriate option to fill in the blank.

Each individual is _____ to liberty and the ability to convey his or her moral convictions through actions and statements.

- Ans
- ☒ 1. provided
 - ☒ 2. subjected
 - ☒ 3. given
 - ☒ 4. entitled

Question ID : 26433072407
Status : Answered
Chosen Option : 2

Q.7 Select the most appropriate meaning of the given idiom.

Hornet's nest

- Ans ☒ 1. Dangerous idea
☒ 2. Raising controversy
☒ 3. Secret policy
☒ 4. Unpleasant result

Question ID : 26433072427
Status : Answered
Chosen Option : 3

Q.8 Select the INCORRECTLY spelt word.

- Ans ☒ 1. Entrant
☒ 2. Yeti
☒ 3. Antics
☒ 4. Tyrany

Question ID : 26433066146
Status : Answered
Chosen Option : 2

Q.9 Select the most appropriate option to fill in the blank.

My grandmother _____ all our secrets.

- Ans ☒ 1. new
☒ 2. knew
☒ 3. know
☒ 4. neo

Question ID : 26433058307
Status : Answered
Chosen Option : 3

Q.10 The following sentence has been split into four segments. Identify the segment that contains a grammatical error.

This is one of a customs / followed in the 18th century / in France / and the USA.

- Ans ☒ 1. This is one of a customs
☒ 2. followed in the 18th century
☒ 3. and the USA
☒ 4. in France

Question ID : 26433070484
Status : Answered
Chosen Option : 1

Q.11 Select the most appropriate homophone of the italicised word.

A *tale* of two cities.

- Ans
- ☒ 1. Tell
 - ☒ 2. Stale
 - ☒ 3. Tail
 - ☒ 4. Tel

Question ID : 26433055501
Status : Answered
Chosen Option : 3

Q.12 Select the option that can be used as a one-word substitute for the underlined part of the given sentence.

Many English words, frequently used in Shakespearean age, are no longer in use.

- Ans
- ☒ 1. antiquated
 - ☒ 2. extinct
 - ☒ 3. ancient
 - ☒ 4. archaic

Question ID : 26433072477
Status : Answered
Chosen Option : 4

Q.13 Select the most appropriate synonym of the given word.
Acute

- Ans
- ☒ 1. Severe
 - ☒ 2. Gentle
 - ☒ 3. Mild
 - ☒ 4. Moderate

Question ID : 26433063580
Status : Answered
Chosen Option : 1

Q.14 Select the most appropriate meaning of the given idiom.
Give someone the cold shoulder

- Ans
- ☒ 1. Unaffected by the surroundings
 - ☒ 2. Injured badly
 - ☒ 3. Bullying people who are good
 - ☒ 4. Ignore someone

Question ID : 26433066127
Status : Answered
Chosen Option : 4

Q.15 Sentences of a paragraph are given below in jumbled order. Arrange the sentences in the correct order to form a meaningful and coherent paragraph.

- A. Lastly, seeing our favourite celebrities doing the advertisement of the product makes it easier for us to choose.
- B. The power of media marketing has increased a lot, and it is influencing every generation.
- C. We cannot change this fact and I agree that we buy products based on its marketing.
- D. Though I think that this power cannot control me, still, all are being controlled is a fact.

Ans ☒ 1. BACD
☒ 2. DCBA
☒ 3. BDCA
☒ 4. BADC

Question ID : 26433058354
Status : Answered
Chosen Option : 3

Q.16 Select the most appropriate option that can substitute the underlined segment in the given sentence. If there is no need to substitute it, select 'No substitution required'.
First language also known as mother tongue is the general language a person learns first

Ans ☒ 1. is generally the language
☒ 2. No substitution required
☒ 3. is simply a language
☒ 4. is a casual language

Question ID : 26433063761
Status : Answered
Chosen Option : 2

Q.17 Select the option that can be used as a one-word substitute for the given group of words.
Government by military class

Ans ☒ 1. Stratocracy
☒ 2. Autocracy
☒ 3. Theocracy
☒ 4. Plutocracy

Question ID : 26433060834
Status : Answered
Chosen Option : 1

Q.18 Select the option that can be used as a one-word substitute for the underlined part of the given sentence.

Due to repeated failures, he tried to take his own life.

Ans ☒ 1. patricide
☒ 2. homicide
☒ 3. suicide
☒ 4. beside

Question ID : 26433072480
Status : Answered
Chosen Option : 3

Q.19 Parts of a sentence are given below in jumbled order. Arrange the parts in the correct order to form a meaningful sentence.

My brother / too / is / a writer / and / a lecturer

- Ans
- ☒ 1. A lecturer is my brother and a writer too.
 - ☒ 2. My brother is a lecturer too and a writer.
 - ☒ 3. My brother is too a writer and a lecturer.
 - ☒ 4. My brother is a lecturer and a writer too.

Question ID : 26433059607

Status : Answered

Chosen Option : 4

Q.20 Select the most appropriate synonym of the underlined word in the given sentence.
If you want to achieve your dream, you have to work hard.

- Ans
- ☒ 1. accomplish
 - ☒ 2. complete
 - ☒ 3. abandon
 - ☒ 4. resolve

@Qmaths

Question ID : 26433058586

Status : Answered

Chosen Option : 1

Comprehension:

In the following passage, some words have been deleted. Read the passage carefully and select the most appropriate option to fill in each blank.

The reports of the Banking Committees afford data in considerable bulk but of varying (1) _____ relating to the burden of debt on agriculturists in India and its nature and distribution which all refer to the period just before the depression. The immediate effect of the depression was (2) _____ to increase somewhat the money burden of the debt and very considerably its real burden. Another result of the depression (3) _____ the worsening of the position of the smaller producer and the loss on his part of some proportion of rights in land. The events of the war period seem to have led to a general improvement in the situation of the agriculturist producers. The incidence of the total effects has however, been very (4) _____. The differences are regional as well as between classes of producers within the same region. The regions and classes that have failed to profit from the (5) _____ rise of prices of agricultural produce during war years have evidently done so because of structural defects in their economies such as uneconomic holdings.

SubQuestion No : 21

Q.21 Select the most appropriate option to fill in blank number 1.

- Ans
- ☒ 1. effects
 - ☒ 2. variability
 - ☒ 3. reliability
 - ☒ 4. output

Question ID : 26433058854

Status : Answered

Chosen Option : 1

Comprehension:

In the following passage, some words have been deleted. Read the passage carefully and select the most appropriate option to fill in each blank.

The reports of the Banking Committees afford data in considerable bulk but of varying (1) _____ relating to the burden of debt on agriculturists in India and its nature and distribution which all refer to the period just before the depression. The immediate effect of the depression was (2) _____ to increase somewhat the money burden of the debt and very considerably its real burden. Another result of the depression (3) _____ the worsening of the position of the smaller producer and the loss on his part of some proportion of rights in land. The events of the war period seem to have led to a general improvement in the situation of the agriculturist producers. The incidence of the total effects has however, been very (4) _____. The differences are regional as well as between classes of producers within the same region. The regions and classes that have failed to profit from the (5) _____ rise of prices of agricultural produce during war years have evidently done so because of structural defects in their economies such as uneconomic holdings.

SubQuestion No : 22

Q.22 Select the most appropriate option to fill in blank number 2.

- Ans ☒ 1. questionably
☒ 2. doubtfully
☒ 3. indefinitely
☒ 4. obviously

Question ID : 26433058855

Status : Answered

Chosen Option : 4

Comprehension:

In the following passage, some words have been deleted. Read the passage carefully and select the most appropriate option to fill in each blank.

The reports of the Banking Committees afford data in considerable bulk but of varying (1) _____ relating to the burden of debt on agriculturists in India and its nature and distribution which all refer to the period just before the depression. The immediate effect of the depression was (2) _____ to increase somewhat the money burden of the debt and very considerably its real burden. Another result of the depression (3) _____ the worsening of the position of the smaller producer and the loss on his part of some proportion of rights in land. The events of the war period seem to have led to a general improvement in the situation of the agriculturist producers. The incidence of the total effects has however, been very (4) _____. The differences are regional as well as between classes of producers within the same region. The regions and classes that have failed to profit from the (5) _____ rise of prices of agricultural produce during war years have evidently done so because of structural defects in their economies such as uneconomic holdings.

SubQuestion No : 23

Q.23 Select the most appropriate option to fill in blank number 3.

- Ans ☒ 1. was unlikely
☒ 2. was improbably
☒ 3. was presumably
☒ 4. was uncertainly

Question ID : 26433058856

Status : Answered

Chosen Option : 2

Comprehension:

In the following passage, some words have been deleted. Read the passage carefully and select the most appropriate option to fill in each blank.

The reports of the Banking Committees afford data in considerable bulk but of varying (1) _____ relating to the burden of debt on agriculturists in India and its nature and distribution which all refer to the period just before the depression. The immediate effect of the depression was (2) _____ to increase somewhat the money burden of the debt and very considerably its real burden. Another result of the depression (3) _____ the worsening of the position of the smaller producer and the loss on his part of some proportion of rights in land. The events of the war period seem to have led to a general improvement in the situation of the agriculturist producers. The incidence of the total effects has however, been very (4) _____. The differences are regional as well as between classes of producers within the same region. The regions and classes that have failed to profit from the (5) _____ rise of prices of agricultural produce during war years have evidently done so because of structural defects in their economies such as uneconomic holdings.

SubQuestion No : 24

Q.24 Select the most appropriate option to fill in blank number 4.

- Ans ☒ 1. uneven
 ☐ 2. smooth
 ☐ 3. regular
 ☐ 4. balanced

@Qmaths

Question ID : 26433058857

Status : Answered

Chosen Option : 1

Comprehension:

In the following passage, some words have been deleted. Read the passage carefully and select the most appropriate option to fill in each blank.

The reports of the Banking Committees afford data in considerable bulk but of varying (1) _____ relating to the burden of debt on agriculturists in India and its nature and distribution which all refer to the period just before the depression. The immediate effect of the depression was (2) _____ to increase somewhat the money burden of the debt and very considerably its real burden. Another result of the depression (3) _____ the worsening of the position of the smaller producer and the loss on his part of some proportion of rights in land. The events of the war period seem to have led to a general improvement in the situation of the agriculturist producers. The incidence of the total effects has however, been very (4) _____. The differences are regional as well as between classes of producers within the same region. The regions and classes that have failed to profit from the (5) _____ rise of prices of agricultural produce during war years have evidently done so because of structural defects in their economies such as uneconomic holdings.

SubQuestion No : 25

Q.25 Select the most appropriate option to fill in blank number 5.

- Ans ☐ 1. familiar
 ☐ 2. expected
 ☒ 3. unprecedented
 ☐ 4. reported

Question ID : 26433058858

Status : Answered

Chosen Option : 2

Section : Part-E- Computer Fundamentals

Q.1 _____ shortcut key is used in MS-Excel 2010 renaming the table.

- Ans
- ☐ 1. Ctrl + I
 - ☐ 2. Alt + I
 - ☐ 3. Alt + R
 - ☒ 4. Ctrl + R

Question ID : 26433095442
Status : Answered
Chosen Option : 4

Q.2 _____ shortcut key is used in MS-Excel 2010 to go to the insert tab.

- Ans
- ☐ 1. ALT+T
 - ☐ 2. ALT+I
 - ☐ 3. ALT+F
 - ☒ 4. ALT+N

@Qmaths

Question ID : 26433095402
Status : Answered
Chosen Option : 4

Q.3 State whether following statements related to MS-Word 2010 are True or False?

- (i) In Landscape orientation, the height of a page is larger than its width.
(ii) In Portrait orientation, the width of a page is larger than its height.

- Ans
- ☐ 1. (i) - True (ii) - False
 - ☐ 2. (i) - True (ii) - True
 - ☐ 3. (i) - False (ii) - True
 - ☒ 4. (i) - False (ii) - False

Question ID : 26433095354
Status : Answered
Chosen Option : 4

Q.4 After finishing the table in MS-Word 2010, in case you want to insert a new row at the bottom of a particular row in a table, which of the following options can be used?

- Ans
- ☐ 1. Insert Columns to the Right
 - ☐ 2. Insert Columns to the Left
 - ☒ 3. Insert Rows Below
 - ☐ 4. Insert Rows Above

Question ID : 26433095382
Status : Answered
Chosen Option : 3

Q.5 _____ tab in MS-Excel 2010 ribbon bar provides tools to manage the worksheet appearance, both onscreen and printed. These tools control theme settings, gridlines, page margins, object aligning, and print area.

- Ans
- ☒ 1. Page Layout
 - ☐ 2. FORMULA
 - ☐ 3. FILE
 - ☐ 4. REVIEW

Question ID : 26433095428
Status : Answered
Chosen Option : 1

Q.6 What will be the address of a cell which lies at the intersection of the seventh row and tenth column in an MS-Excel 2010 worksheet?

- Ans
- ☒ 1. G10
 - ☒ 2. \$J7\$
 - ☒ 3. J7
 - ☒ 4. 7J

Question ID : 26433095338
Status : Answered
Chosen Option : 3

Q.7 _____ offers real time chat between individuals and group of people.

- Ans
- ☒ 1. VIRUS
 - ☒ 2. BLOG
 - ☒ 3. Instant messenger
 - ☒ 4. EMAIL

@Qmaths

Question ID : 26433095457
Status : Answered
Chosen Option : 3

Q.8 Which of the following is not an example of markup language?

- Ans
- ☒ 1. QBE
 - ☒ 2. XML
 - ☒ 3. HTML
 - ☒ 4. SGML

Question ID : 26433095526
Status : Answered
Chosen Option : 1

Q.9 Which of the following is not a component of email address?

- Ans
- ☒ 1. System name
 - ☒ 2. Domain name
 - ☒ 3. Username
 - ☒ 4. @ (at symbol)

Question ID : 26433095355
Status : Answered
Chosen Option : 1

Q.10 Which of the following keyboard shortcut key in MS-Word 2010 is used to move the previous cell in a row of the table?

- Ans
- ☒ 1. Windows + Tab
 - ☒ 2. Alt + Tab
 - ☒ 3. Shift + Tab
 - ☒ 4. Ctrl + Tab

@Qmaths

Question ID : 26433095381
Status : Answered
Chosen Option : 3