



Teachingninja.in



Latest Govt Job updates



Private Job updates



Free Mock tests available

Visit - teachingninja.in

FSSAI Junior Assistant Grade-I

**Previous Year Paper
30 March 2022 Shift 1
(English)**





FOOD SAFETY AND STANDARDS
AUTHORITY OF INDIA

Inspiring Trust, Assuring Safe & Nutritious Food
Ministry of Health and Family Welfare, Government of India

Participant ID	
Participant Name	
Test Center Name	
Test Date	30/03/2022
Test Time	9:00 AM - 12:00 PM
Subject	JUNIOR ASSISTANT GRADE-I

Section : General Intelligence

Q.1 Three of the following four letter-clusters are alike in a certain way and one is different.
Choose the odd one.

- Ans
- 1. QLF
 - 2. YTN
 - 3. UPJ
 - 4. NHB

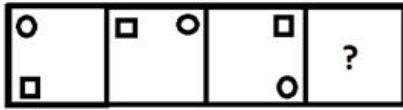
Question ID : 7773935462
Status : Answered
Chosen Option : 4

Q.2 In a certain code language, LOTUS is written as 18-21-26-27-25. How will LIGHT be written in the same code language?

- Ans
- 1. 18-15-12-13-26
 - 2. 18-15-13-14-26
 - 3. 18-14-12-13-25
 - 4. 18-15-13-14-25

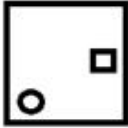
Question ID : 7773935472
Status : Answered
Chosen Option : 2

Q.3 Select the figure that can replace the question mark (?) in the following series.

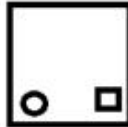


Ans

✗ 1.



✓ 2.



✗ 3.



✗ 4.



Question ID : 7773935464
Status : Answered
Chosen Option : 2

Q.4 Select the number that will replace the question mark (?) in the following series.

5, 15, 39, 83, ?, 255

Ans ✓ 1. 153

✗ 2. 150

✗ 3. 105

✗ 4. 152

Question ID : 7773935468
Status : Not Answered
Chosen Option : --

Q.5 From the given options, select the number set which is different from the other three options.

Ans ✗ 1. 126 : 612 : 216

✗ 2. 389 : 839 : 938

✗ 3. 562 : 625 : 265

✓ 4. 634 : 345 : 436

Question ID : 7773935466
Status : Answered
Chosen Option : 4

Q.6 Prashant is husband of Meetu. Sonu and Manoj are brothers. Shipra is wife of Rajat. Meetu's husband's father, Rajat, is also Sonu's father. Arya is son of the brother of Prashant. If Shipra has three sons, how is Rajat related to Arya?

- Ans
- 1. Son
 - 2. Grand-son
 - 3. Father
 - 4. Grand-father

Question ID : 7773935476
Status : Answered
Chosen Option : 3

Q.7 Which of the following two numbers need to be interchanged to make the given equation correct?

$$9 \times 8 \div 3 + 5 - 19 = 10$$

- Ans
- 1. 9 and 5
 - 2. 8 and 3
 - 3. 8 and 9
 - 4. 9 and 3

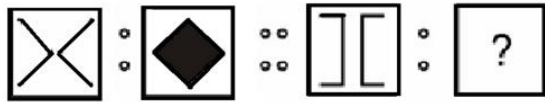
Question ID : 7773935469
Status : Answered
Chosen Option : 3

Q.8 Seven people, P,Q,R,L,X,Y,and Z are standing in a single line, facing a movie ticket booth. X is somewhere ahead of Y. There is only one person between R and Z. P is immediately ahead of L. Y is behind both Q and L. There is one person between P and Q. If L and R are at the fourth and the fifth place respectively, then who is at the FRONT of the line?

- Ans
- 1. Q
 - 2. R
 - 3. Y
 - 4. X

Question ID : 7773935478
Status : Answered
Chosen Option : 4

Q.9 Select the figure that is related to the third figure in the same way as the second figure is related to the first figure.



Ans

✗ 1.




✗ 2.



✓ 3.



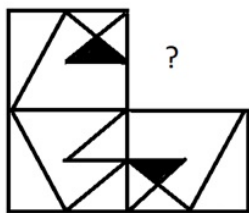
✗ 4.



Question ID : 7773935480
Status : Answered
Chosen Option : 3



Q.10 Select the option that can replace the question mark(?) in the given figure and complete the pattern (no rotation allowed)

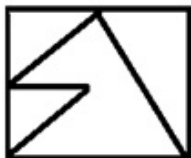


Ans

✗ 1.



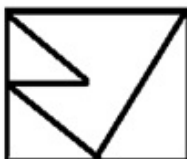
✓ 2.



✗ 3.



✗ 4.



Question ID : 7773935461

Status : Answered

Chosen Option : 2

Q.11 Select the correct combination of mathematical signs to replace * signs and to balance the following equation.

$$19 * (5 * 8 * 4) * 6 * 15$$

Ans ✓ 1. -, ×, ÷, +, =

✗ 2. +, -, ×, ÷, =

✗ 3. +, ×, ÷, -, =

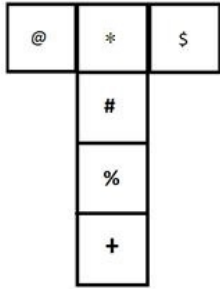
✗ 4. ÷, -, ×, +, =

Question ID : 7773935470

Status : Answered

Chosen Option : 1

Q.12 If the given figure is folded to form a cube, which character will come opposite '*'?



- Ans
- 1. %
 - 2. \$
 - 3. @
 - 4. #

Question ID : 7773935479
Status : Answered
Chosen Option : 1

Q.13 Three statements are followed by three conclusions numbered I, II and III. You have to consider these statements to be true, even if they seem at variance from commonly known facts. Decide which of the given conclusions logically follow/s from the given statement.

Statements:

1. All projects are sample.
2. Some samples are books.
3. No book is expensive.

Conclusions:

- I. Some expensive are books.
- II. No project is expensive.
- III. Some samples are projects.

- Ans
- 1. Only conclusions II and III follow.
 - 2. Only conclusion I follows.
 - 3. Only conclusion III follows.
 - 4. Only conclusions I and II follow.

Question ID : 7773935474
Status : Answered
Chosen Option : 3

Q.14 In a certain code language, FAMOUS is written as ECJSPY. How will FIGURE be written in the same code language?

- Ans
- 1. EKEZMK
 - 2. EKDYMK
 - 3. EJDYMJ
 - 4. EKDXLK

Question ID : 7773935473
Status : Answered
Chosen Option : 2

Q.15 Select the number that will replace the question mark (?) in the following series.

14, 15, 24, 49, 98, ?

- Ans
- 1. 179
 - 2. 162
 - 3. 113
 - 4. 169

Question ID : 7773935467
Status : Answered
Chosen Option : 1

Q.16 Study the given pattern carefully and select the number that can replace the question mark (?) in it.

5	6	9
2	3	4
4	4	1
20	?	18

- Ans
- 1. 32
 - 2. 36
 - 3. 19
 - 4. 35

Question ID : 7773935471
Status : Not Answered
Chosen Option : --

Q.17 A statement is followed by two assumptions numbered I and II. Consider the statement and decide which of the given assumption(s) is/are implicit in the statement.

Statement:

"The physical classes for class 9-12 at Schools are going to start from 7th September after CORONA lockdown but no student would be forced to attend physical classes in school. The consent of parents would be mandatory for every student attending the physical classes at the school." A government notification.

Assumptions:

- I. Some parents and students are still apprehensive about the outbreak of third wave and may consider it a life risk for their children.
- II. Parents who consent to send their children to school do not care about the health of their children.

- Ans
- 1. Only assumption I is implicit.
 - 2. Neither assumptions I nor II are implicit.
 - 3. Both assumptions I and II are implicit.
 - 4. Only assumption II is implicit.

Question ID : 7773935475
Status : Answered
Chosen Option : 1

Q.18 Select the figure that can replace the question mark (?) in the following series.



Ans

- ✗ 1.
- ✗ 2.
- ✓ 3.
- ✗ 4.

Question ID : 7773935465
Status : Answered
Chosen Option : 3

Q.19 Select the term that will replace the question mark (?) in the following series.

PKQ, SPO, VUM, YZK, ?

- Ans
- ✗ 1. BEJ
 - ✗ 2. CEI
 - ✓ 3. BEI
 - ✗ 4. BFI

Question ID : 7773935463
Status : Answered
Chosen Option : 3

Q.20 A, B, C, D, E, F, G and H are sitting around a circular table facing towards centre. A is on the immediate right of H who is not neighbour of D or E. F is on immediate right of B. C is between E and F, G is neighbour of E. Who is between A and B?

- Ans
- ✗ 1. F
 - ✗ 2. E
 - ✓ 3. D
 - ✗ 4. H

Question ID : 7773935477
Status : Answered
Chosen Option : 3

Section : Quantitative Aptitude

Q.1 The value of $4\frac{1}{2} \div \frac{3}{8} \times \frac{4}{5} \div \frac{1}{9}$ of $14\frac{2}{5} - (1\frac{1}{3} \times 1\frac{4}{5} \div \frac{3}{5}) \div 1\frac{1}{8}$ is:

- Ans
- 1. $\frac{5}{6}$
 - 2. $1\frac{2}{9}$
 - 3. $2\frac{1}{3}$
 - 4. $2\frac{4}{9}$

Question ID : 7773935482
Status : Answered
Chosen Option : 4

Q.2 A can do a certain piece of work in 45 hours. B is 35% more efficient than A and C is 20% less efficient than B. B and C work together for 10 hours. A alone can complete the remaining work in:

- Ans
- 1. 20.7 hours
 - 2. 21 hours
 - 3. 20 hours
 - 4. 21.4 hours

Question ID : 7773935499
Status : Answered
Chosen Option : 4

Q.3 The value of $[(0.\overline{43} \div 0.4\overline{7}) \times 0.\overline{72}] \times 2.6\overline{8}$ is:

- Ans
- 1. $\frac{9}{16}$
 - 2. $5\frac{1}{3}$
 - 3. $\frac{3}{8}$
 - 4. $1\frac{7}{9}$

Question ID : 7773935483
Status : Answered
Chosen Option : 4

Q.4 What is the smallest number which, when decreased by 31, is divisible by each of 150, 210 and 375?

Ans 1. 5281

2. 5287

3. 5253

4. 5278

Question ID : 7773935481

Status : Answered

Chosen Option : 1

Q.5 There are 45 girls and 25 boys in a music club. If 10 girls leave and 15 more boys join the club, then what is the percentage of girls in the club now?

Ans 1. 70%

2. $46\frac{2}{3}\%$

3. $87\frac{1}{2}\%$

4. $33\frac{1}{3}\%$

Question ID : 7773935487

Status : Answered

Chosen Option : 2

Q.6 A certain sum amounts to Rs. 10580 in 2 years at 15% p.a. compounded annually. What will be the compound interest (in Rs.) of the same sum in the same time at the same rate, if the interest is compounded 8 monthly?

Ans 1. 2648

2. 2580

3. 2680

4. 2728

Question ID : 7773935494

Status : Answered

Chosen Option : 1

Q.7 54 students went to a restaurant for dinner. 34 of them paid Rs. 140 each and the rest of them each paid Rs. 37.40 more than the average of what all the students paid. What was the total money (in Rs.) paid by all the students on dinner?

Ans 1. 8370

2. 8748

3. 8586

4. 8640

Question ID : 7773935492

Status : Answered

Chosen Option : 2

Q.8 Two positive numbers differ by 1004. When the larger number is divided by the smaller number, the quotient is 5 and the remainder is 124. The sum of the two numbers is:

- Ans 1. 1444
 2. 1433
 3. 1336
 4. 1338

Question ID : 7773935486
Status : Answered
Chosen Option : 1

Q.9 A certain sum amounts to ₹ 12345.60 in $4\frac{1}{3}$ years at 6.6% p.a., simple interest. What will be the simple interest on the same sum for $5\frac{1}{4}$ years at $\frac{5}{6}$ of the earlier rate?

- Ans 1. Rs.3009.60
 2. Rs. 3326.40
 3. Rs. 2772
 4. Rs. 2778

Question ID : 7773935493
Status : Answered
Chosen Option : 3

Q.10 Abhi has a sum of Rs.2600 in the form of 50 - rupee notes and 100- rupee notes. The ratio of the number of 50 - rupee notes to that of 100 - rupee notes is 7:3. The number of 50 - rupee notes with Abhi is:

- Ans 1. 21
 2. 35
 3. 14
 4. 28

Question ID : 7773935491
Status : Answered
Chosen Option : 4

Q.11 The value of $54 \div 36 \times 5 - [90 \div 8 \text{ of } \{12 \times (15 - 9) \div (84 \div 7 \text{ of } 5)\}]$ is:

- Ans 1. $\frac{57}{8}$
 2. $\frac{43}{4}$
 3. $\frac{37}{16}$
 4. $\frac{11}{4}$

Question ID : 7773935485
Status : Answered
Chosen Option : 1

Q.12 A can do $\frac{2}{5}$ th of a work in 8 days. He starts the work and leaves after 9 days. The remaining work is completed by B in $5\frac{1}{2}$ days. A and B together can complete 60% of the original work in:

- Ans
- 1. 5 days
 - 2. 6 days
 - 3. 4 days
 - 4. 8 days

Question ID : 7773935498
Status : Answered
Chosen Option : 3

Q.13 The speed of a boat in still water is 17 km/h and the speed of the stream is 3 km/h. How much time (in hours) will it take to sail 25 km downstream and 19.6 km upstream?

- Ans
- 1. 2.5
 - 2. 2.85
 - 3. 2.7
 - 4. 2.65

Question ID : 7773935500
Status : Answered
Chosen Option : 4

Q.14 If $\sqrt{57 + 24\sqrt{3}} - \sqrt{7 - 4\sqrt{3}} = a + b\sqrt{3}$, then what is the value of $(5a - 2b)$?

- Ans
- 1. -5
 - 2. 3
 - 3. 8
 - 4. -10

Question ID : 7773935484
Status : Not Answered
Chosen Option : --

Q.15 How many kg of rice costing Rs. 108 per kg should be mixed with 54 kg of rice costing Rs. 98 per kg so that by selling the mixture at Rs. 114.75 per kg, there is a profit of 12.5%?

- Ans
- 1. 45
 - 2. 40.5
 - 3. 38.25
 - 4. 36

Question ID : 7773935497
Status : Answered
Chosen Option : 4

Q.16 A certain sum (in Rs.) is divided between A, B and C such that the ratio of the shares of A and C is 4 : 5 and that of C and B is 3 : 2. If C's share is Rs. 1560, then the difference (in Rs.) between the shares of A and B is:

- Ans
- 1. 260
 - 2. 312
 - 3. 208
 - 4. 234

Question ID : 7773935490
Status : Answered
Chosen Option : 3

Q.17 A trader buys 720 kg of rice at Rs. 60 per kg. He sells 25% of it at 20% profit, 40% of the remaining at 25% loss and the remaining at 10% profit. What is his overall gain/loss in the entire transaction?

- Ans
- 1. Gain 2%
 - 2. Loss 5%
 - 3. Loss 2.5%
 - 4. Gain 5%

Question ID : 7773935495
Status : Not Answered
Chosen Option : --

Q.18 In a test, 68% students passed in Mathematics and 84% passed in English and 10% could not pass either of these two subjects. If 651 students passed the test, then what is the total number of students who appeared in the test?

- Ans
- 1. 960
 - 2. 900
 - 3. 1100
 - 4. 1050

Question ID : 7773935488
Status : Answered
Chosen Option : 4

Q.19 The price of a fan is 60% less than that of a washing machine. If the price of a fan is increased by 28% and that of a washing machine is decreased by 12%, then what is the percentage increase/decrease in the combined price of 5 fans and 8 washing machines?

- Ans
- 1. Increase by 2.5%
 - 2. Decrease by 4%
 - 3. Increase by 5%
 - 4. Decrease by 2%

Question ID : 7773935489
Status : Answered
Chosen Option : 2

Q.20 A starts a business with a capital of Rs. 10.5 lakhs and admits B and C after 4 months and 8 months with capitals of Rs. 24 lakhs and Rs. 30 lakhs, respectively. After a year, a profit of Rs. 11.68 lakhs is divided in proportion to their respective investments. The difference (in Rs.) of the shares in the profit of B and C is:

- Ans
- 1. 192000
 - 2. 126000
 - 3. 120000
 - 4. 159000

Question ID : 7773935496
Status : Answered
Chosen Option : 1

Section : English Language

Q.1 Select the most appropriate antonym of the given word.

PERSEVERANCE

- Ans
- 1. determination
 - 2. dedication
 - 3. continuance
 - 4. idleness

Question ID : 7773935507
Status : Answered
Chosen Option : 4

Q.2 Identify the segment in the sentence which contains a grammatical error.

About half an hour ago I see Mr. Gupta in the college canteen.

- Ans
- 1. I see
 - 2. About half an hour ago
 - 3. college canteen.
 - 4. Mr. Gupta in the

Question ID : 7773935510
Status : Answered
Chosen Option : 1

Q.3 Select the wrongly spelt word.

- Ans
- 1. hymn
 - 2. hyperbole
 - 3. hypnosis
 - 4. hypocrate

Question ID : 7773935509
Status : Answered
Chosen Option : 2

Q.4 Select the most appropriate option to fill in the blank.

It's time you had _____ holiday. You haven't had _____ day off for two months.

- Ans
- 1. a ; the
 - 2. the ; a
 - 3. a ; a
 - 4. the ; the

Question ID : 7773935501
Status : Answered
Chosen Option : 1

Q.5 Select the most appropriate option to fill in the blank.

He was ill _____ a week and _____ all that time his mother was with him.

- Ans
- 1. for ; over
 - 2. From ; during
 - 3. from ; over
 - 4. for ; during

Question ID : 7773935502
Status : Answered
Chosen Option : 2

Q.6 Select the most appropriate synonym of the given word.

ESTIMATE

- Ans
- 1. assess
 - 2. discover
 - 3. solve
 - 4. believe

Question ID : 7773935505
Status : Answered
Chosen Option : 4

Q.7 Select the most appropriate synonym of the given word.

MANIFEST

- Ans
- 1. withhold
 - 2. conceal
 - 3. exhibit
 - 4. cover

Question ID : 7773935504
Status : Answered
Chosen Option : 3

Q.8 Select the most appropriate option to fill in the blank.

I can't afford _____ any of Prof. Sehgal's lectures.

- Ans
- 1. to miss
 - 2. to missing
 - 3. missed
 - 4. miss

Question ID : 7773935503
Status : Answered
Chosen Option : 1

Q.9 Select the most appropriate word for the given group of words.

something that bends and moves easily

- Ans
- 1. supple
 - 2. brittle
 - 3. stiff
 - 4. hard

Question ID : 7773935508
Status : Answered
Chosen Option : 2

Q.10 Select the most appropriate antonym of the given word.

REPOSE

- Ans
- 1. halt
 - 2. relax
 - 3. settle
 - 4. exert

Question ID : 7773935506
Status : Answered
Chosen Option : 2

Section : General Awareness

Q.1 The practice of granting tax-free villages to Brahmans and Buddhist Monks started by the rulers of which dynasty?

- Ans
- 1. Cholas dynasty
 - 2. Guptas dynasty
 - 3. Satvahana dynasty
 - 4. Mauryas dynasty

Question ID : 7773935524
Status : Not Answered
Chosen Option : --

Q.2 The National Stock Exchange (NSE) is situated at:

- Ans
- 1. Chennai
 - 2. Patna
 - 3. Kolkata
 - 4. Mumbai

Question ID : 7773935528
Status : Answered
Chosen Option : 4

Q.3 The amendment of the Indian constitution which abolished the Privy Purses and privileges of the Indian Princes:

- Ans
- 1. 25th amendment Act 1971
 - 2. 36th amendment Act 1972
 - 3. 26th amendment Act 1971
 - 4. 28th amendment Act 1971

Question ID : 7773935518
Status : Answered
Chosen Option : 1

Q.4 Name the first Indian Talkie film which was produced in 1931:

- Ans
- 1. Alam Ara
 - 2. Raja Harishchandra
 - 3. Shakuntala
 - 4. Mughal-E-Azam

Question ID : 7773935529
Status : Answered
Chosen Option : 2

Q.5 In which year Anand Math was written by Bankim Chandra Chatopadhyay?

- Ans
- 1. 1890
 - 2. 1935
 - 3. 1857
 - 4. 1882

Question ID : 7773935523
Status : Not Answered
Chosen Option : --

Q.6 In which state/Union Territories (UT), a 24x7 Mental Health Helpline 'SUKOON' has been inaugurated?

- Ans
- 1. Daman and Diu
 - 2. Jammu and Kashmir
 - 3. Chandigarh
 - 4. Goa

Question ID : 7773935521
Status : Not Answered
Chosen Option : --

Q.7 Among the inner planets, which of the following is the largest?

- Ans
- 1. Pluto
 - 2. Earth
 - 3. Jupiter
 - 4. Uranus

Question ID : 7773935512
Status : Answered
Chosen Option : 2

Q.8 Which of the following schemes makes provision for the minimum basic amenities for people?

- Ans
- 1. Prime Minister's RozgarYojna
 - 2. Swarna Jayanti Shahari RozgarYojna
 - 3. Pradhan Mantri Awaas Yojana-Gramin (PMAY-G).
 - 4. National Rural Livelihood Mission

Question ID : 7773935527
Status : Not Answered
Chosen Option : --

Q.9 Which Indian state is the largest Sugar producer?

- Ans
- 1. Kerala
 - 2. Karnataka
 - 3. Gujarat
 - 4. Uttar Pradesh

Question ID : 7773935514
Status : Answered
Chosen Option : 4

Q.10 On the banks of the river Jhelum, Alexander the Greek ruler was confronted by the army of _____.

- Ans
- 1. Kosala
 - 2. Porus
 - 3. Dhanananda
 - 4. Avanti

Question ID : 7773935525
Status : Answered
Chosen Option : 2

Q.11 The National Council for Senior Citizens is headed by:

- Ans
- 1. Prime Minister of india
 - 2. Minister of Social Justice and Empowerment
 - 3. Chairman of National Development council
 - 4. Vice Chairman of NITI Aayog

Question ID : 7773935519
Status : Answered
Chosen Option : 1

Q.12 During Green Revolution in India, which of the following crops were dropped by using high yielding seeds?

- Ans
- 1. Oil seeds and sugarcane, millet and maize
 - 2. Rice, wheat, jowar, millet and maize
 - 3. Maize, gram, jowar, Rice, wheat, pulses
 - 4. Wheat, rice, sugarcane, coffee and tea

Question ID : 7773935515
Status : Answered
Chosen Option : 2

Q.13 What is the motive behind the inclusion of DPSP (Directive Principles of State Policy) in the Indian Constitution?

- Ans
- 1. Gandhian and economic Democracy.
 - 2. Social and Gandhian Democracy.
 - 3. Political and Social Democracy.
 - 4. Social and economic Democracy.

Question ID : 7773935517
Status : Not Answered
Chosen Option : --

Q.14 The Delhi Sultan who did not go for any fresh conquests was:

- Ans
- 1. Muhammad tughluq
 - 2. Sikandar Lodi
 - 3. Ala-ud-din Khalji
 - 4. Balban

Question ID : 7773935526
Status : Answered
Chosen Option : 2

Q.15 By which state a comprehensive Talent Search Campaign in the field of sports has been launched?

- Ans
- 1. Kerala
 - 2. Gujarat
 - 3. Haryana
 - 4. Madhya Pradesh

Question ID : 7773935520
Status : Not Answered
Chosen Option : --

Q.16 In which range Panchmarhi is located near the highest point of the range?

- Ans
- 1. Satpuras Range
 - 2. Vindhyaçal
 - 3. Eastern range
 - 4. Zaskar range

Question ID : 7773935511
Status : Not Answered
Chosen Option : --

Q.17 In the recently announced National Sports Awards 2020, Which Para Athletic who won the Rajiv Gandhi Khel Ratna Award?

- Ans
- 1. Shri Vijay Bhalchandra Munishwar
 - 2. Rohit Sharma
 - 3. Shri Manish Narwal
 - 4. Shri Mariyappan T.

Question ID : 7773935522
Status : Not Answered
Chosen Option : --

Q.18 The book 'Discovery of India' is written by:

- Ans
- 1. Meira Kumar
 - 2. Rahul Dravid
 - 3. Jawaharlal Nehru
 - 4. Amitav Ghosh

Question ID : 7773935530
Status : Answered
Chosen Option : 3

Q.19 During recessions and depressions the increase in unemployment occurs, which is called:

- Ans
- 1. normal unemployment
 - 2. frictional unemployment.
 - 3. structural unemployment
 - 4. cyclical unemployment

Question ID : 7773935513
Status : Answered
Chosen Option : 1

Q.20 Which function of the Vice-President as ex-officio Chairman of the Rajya Sabha has been wrongly listed?

- Ans
- 1. He presides over the meeting of the Rajya Sabha contacts its business.
 - 2. He protects the privileges of the members of Rajya Sabha.
 - 3. He acts as the spokesman of Rajya Sabha before the President and the Lok Sabha.
 - 4. He can dissolve the Rajya Sabha.

Question ID : 7773935516
Status : Not Answered
Chosen Option : --

Section : Computer Literacy

Q.1 What is the term adopted for updates by Twitter users?

- Ans
- 1. Tweets
 - 2. Posts
 - 3. Twinks
 - 4. Tees

Question ID : 7773935546
Status : Answered
Chosen Option : 1

Q.2 Who founded WhatsApp?

- Ans
- 1. Mark Zuckerberg and team
 - 2. Jack Dorsey and team
 - 3. Brian Acton and Jan Koum
 - 4. Kevin Systrom and Mike Krieger

Question ID : 7773935543
Status : Answered
Chosen Option : 2

Q.3 In MS-PowerPoint 2019 which tab lets you add comments, run spell-check, or compare one presentation with another (such as an earlier version)?

- Ans
- 1. File
 - 2. View
 - 3. Review
 - 4. Tools

Question ID : 7773935539
Status : Answered
Chosen Option : 3

Q.4 Which of the following options best describes the truthfulness of given statement about choosing a profile picture in Facebook App?

- (i) you can choose a photo that you've been tagged in on
- (ii) you cannot choose a photo which you've already uploaded

- Ans
- 1. (i) False (ii) False
 - 2. (i) True (ii) False
 - 3. (i) True (ii) True
 - 4. (i) False (ii) True

Question ID : 7773935551
Status : Answered
Chosen Option : 2

Q.5 While signing up Facebook account which of the following is not necessary?

- Ans
- 1. Last name
 - 2. First name
 - 3. Email address
 - 4. Birth time

Question ID : 7773935549
Status : Answered
Chosen Option : 4

Q.6 Which of the following shortcut keys is used to insert footnote in MS-Word 2019?

- Ans
- 1. Alt+Shift+F
 - 2. Ctrl+Alt+F
 - 3. Alt+Ctrl+D
 - 4. Alt+Shift+F12

Question ID : 7773935552
Status : Answered
Chosen Option : 1

Q.7 What could be the output of '=sign(-1200)' in MS-Excel 2019?

- Ans
- 1. Cannot work with a negative argument
 - 2. 0
 - 3. -1
 - 4. -ve

Question ID : 7773935533
Status : Answered
Chosen Option : 4

Q.8 In MS-PowerPoint 2019, you can set up how your slides change from one to the next on the _____ tab.

- Ans
- 1. Animations
 - 2. Transitions
 - 3. Design
 - 4. Slide Show

Question ID : 7773935538
Status : Answered
Chosen Option : 2

Q.9 Which of the following is NOT a valid function in MS-Excel 2019?

- Ans
- 1. MID()
 - 2. MOD()
 - 3. ABS()
 - 4. ADD()

Question ID : 7773935531
Status : Answered
Chosen Option : 1

Q.10 Which of the following is not a valid option in MS-PowerPoint 2019 Start Slide Show group of Slide Show tab?

- Ans
- 1. From Current Slide
 - 2. Custom Slide Show
 - 3. Reverse from Rear
 - 4. From Beginning

Question ID : 7773935534
Status : Answered
Chosen Option : 3

Q.11 Which of the following tab in MS-PowerPoint 2019 has 'New Slide' option?

- Ans
- 1. Developer
 - 2. Home
 - 3. Record
 - 4. Animation

Question ID : 7773935537
Status : Answered
Chosen Option : 2

Q.12 Which of the following options is not available in 'Proofing' group of 'Review' Tab in MS-Word 2019?

- Ans
- 1. Thesaurus
 - 2. Spelling & Grammar
 - 3. Word count
 - 4. Comment

Question ID : 7773935554
Status : Answered
Chosen Option : 4

Q.13 The 'screenshot' option is available in _____ tab of MS-Word 2019.

- Ans
- 1. Review
 - 2. Insert
 - 3. Design
 - 4. Draw

Question ID : 7773935555
Status : Answered
Chosen Option : 1

Q.14 Which of the following is false with reference to Twitter?

- Ans
- 1. If we don't want to converse publicly, we can send private messages
 - 2. By default, everything you share on Twitter is publicly viewable
 - 3. To send a message, select the Messages icon, choose the person you want to contact, and type your message
 - 4. private messages are limited to 280 characters

Question ID : 7773935548
Status : Answered
Chosen Option : 4

Q.15 Which of the following is true with reference to mail providers?

- (i) We can use Yahoo mail app in Windows 10
- (ii) In Outlook mail we can have E-mail, calendar, People at one place.

- Ans
- 1. Both (i) and (ii)
 - 2. Only (i)
 - 3. Only (ii)
 - 4. Neither (i) nor (ii)

Question ID : 7773935540
Status : Answered
Chosen Option : 1

Q.16 Which of the following view is not supported in MS-PowerPoint 2019?

- Ans
- 1. Slide sorter
 - 2. Reverse
 - 3. Outline
 - 4. Reading

Question ID : 7773935535
Status : Answered
Chosen Option : 4

Q.17 What will be the output of the function '=power(3,-2)' in MS-Excel 2019?

- Ans
- 1. 0.11111
 - 2. 0.33333
 - 3. 0.22222
 - 4. 0.12345

Question ID : 7773935532
Status : Answered
Chosen Option : 2

Q.18 Which of the following is an invalid suffix of an email web domain?

- Ans
- 1. .mil
 - 2. .got
 - 3. .edu
 - 4. .gov

Question ID : 7773935541
Status : Answered
Chosen Option : 1

Q.19 Which of the following tab in Facebook App can be used to fill education, job title etc.?

- Ans
- 1. Friends
 - 2. About
 - 3. Photos
 - 4. Videos

Question ID : 7773935550
Status : Answered
Chosen Option : 2

Q.20 By default, the file extension of MS-PowerPoint 2007 and later versions is _____.

- Ans
- 1. ppx
 - 2. ppt
 - 3. pptx
 - 4. ppxt

Question ID : 7773935536
Status : Answered
Chosen Option : 3

Q.21 If we tweet by mentioning name of the person in Twitter, he or she will receive _____.

- Ans
- 1. SMS message
 - 2. MMS message
 - 3. Notification
 - 4. Suggestion

Question ID : 7773935547
Status : Answered
Chosen Option : 3

Q.22 Which of the following is true with reference to restoring chats in WhatsApp?

- (i) To restore your WhatsApp chats history, you need to ensure back up has been done before actually restoring them.
(ii) To maintain a copy of your WhatsApp chat history on Google Drive, you can enable the automatic backup feature and select its frequency as daily, weekly, or monthly.

- Ans
- 1. Only (ii)
 - 2. Only (i)
 - 3. Neither (i) nor (ii)
 - 4. Both (i) and (ii)

Question ID : 7773935544
Status : Answered
Chosen Option : 4

Q.23 Which of the following option of Settings in WhatsApp is used to backup chats?

- Ans
- 1. Storage and Data
 - 2. Chats
 - 3. Notifications
 - 4. Account

Question ID : 7773935545
Status : Answered
Chosen Option : 1

Q.24 Which of the following options is not available in 'Start Mail Merge' group of 'Mailings' Tab in MS-Word 2019?

- Ans
- 1. Edit recipient List
 - 2. Start mail merge
 - 3. Labels
 - 4. Select recipients

Question ID : 7773935553
Status : Answered
Chosen Option : 3

Q.25 In addition to email access, webmail providers offer various tools and features. Which of the following feature helps to have text-based conversations?

- Ans
- 1. Public profile
 - 2. Online address book
 - 3. Online calendar
 - 4. Instant messaging

Question ID : 7773935542
Status : Answered
Chosen Option : 4

Section : FSSAI(General understanding)

Q.1 What is the full form of IEC?

- Ans
- 1. Importer Exporter Code
 - 2. Import Export Committee
 - 3. Importer External Code
 - 4. Inland Export Council

Question ID : 7773935566
Status : Answered
Chosen Option : 1

Q.2 What is the full form of NABL?

- Ans
- 1. National Accreditation Board for Testing and Correction Laboratories
 - 2. National Accreditation Bureau for Testing and Calibration Laboratories
 - 3. National Accreditation Board for Testing and Calibration Laboratories
 - 4. National Authorization Board for Testing and Calibration Laboratories

Question ID : 7773935564
Status : Answered
Chosen Option : 3

Q.3 The FSSAI scientific committee includes all chairpersons of scientific panel and _____ independent scientific experts.

- Ans
- 1. Eight
 - 2. Four
 - 3. Two
 - 4. Six

Question ID : 7773935559
Status : Answered
Chosen Option : 4

Q.4 State Level Steering Committee is governed by:

- Ans
- 1. District Level Advisory Committee
 - 2. Scientific Panels
 - 3. Scientific Committee
 - 4. Central Advisory Committee

Question ID : 7773935580
Status : Answered
Chosen Option : 3

Q.5 Trans fats are not linked with:

- Ans
- 1. Dementia
 - 2. Immune dysfunction
 - 3. Keratomalacia
 - 4. Heart Disease

Question ID : 7773935571
Status : Answered
Chosen Option : 1

Q.6 Which of the following is not a core component of the "Eat Right India" movement?

- Ans
- 1. Healthy Diet
 - 2. Sustainable Food System
 - 3. Food Safety
 - 4. Disease Prevention

Question ID : 7773935570
Status : Answered
Chosen Option : 4

Q.7 Which initiative is not a part of the SOFTeL scheme?

- Ans
- 1. Risk assessment and Quality assurance
 - 2. Boost the efficiency of state-run food safety laboratories.
 - 3. Encourage the use of mobile food testing facilities.
 - 4. Develop a culture of food testing in schools and colleges.

Question ID : 7773935565
Status : Answered
Chosen Option : 4

Q.8 The head office of Food Safety and Standards Authority of India (FSSAI) is located in:

- Ans
- 1. Kolkata
 - 2. Mumbai
 - 3. Noida
 - 4. Delhi

Question ID : 7773935558
Status : Answered
Chosen Option : 4

Q.9 _____ serves as a link between the central and the state government.

- Ans
- 1. Central Advisory Committee
 - 2. Scientific committee
 - 3. Chief Executive Officer
 - 4. Food Authority

Question ID : 7773935563
Status : Answered
Chosen Option : 4

Q.10 Which two countries fortify milk with calcium in addition to Vitamin A and D?

- Ans
- 1. Canada and USA
 - 2. Canada and China
 - 3. China and USA
 - 4. Costa Rica and China

Question ID : 7773935574
Status : Not Answered
Chosen Option : --

Q.11 Which of the following refers to "The Principles of Auditing"?

- Ans
- 1. ISO 19031
 - 2. ISO 19081
 - 3. ISO 19021
 - 4. ISO 19011

Question ID : 7773935569
Status : Not Answered
Chosen Option : --

Q.12 The national Eat Right Mela was first organized in:

- Ans
- 1. 2020
 - 2. 2018
 - 3. 2019
 - 4. 2021

Question ID : 7773935572
Status : Answered
Chosen Option : 3

Q.13 World Biofuel Day is celebrated on:

- Ans
- 1. 10th December
 - 2. 10th June
 - 3. 10th August
 - 4. 10th January

Question ID : 7773935578
Status : Answered
Chosen Option : 3

Q.14 India (FSSAI) was appointed as the Regional Coordinator for Asia in Codex in the year _____.

- Ans
- 1. 2015
 - 2. 2013
 - 3. 2012
 - 4. 2014

Question ID : 7773935557
Status : Answered
Chosen Option : 1

Q.15 What is the full form of FPO?

- Ans
- 1. Fruit Prevention Order
 - 2. Food Prevention Order
 - 3. Food Products Order
 - 4. Fruit Products Order

Question ID : 7773935556
Status : Not Answered
Chosen Option : --

Q.16 States/Union Territories (UT)s are involved in:

- Ans
- 1. Implementing food safety laws in the field level
 - 2. Problem solving
 - 3. Providing direction and co-ordination
 - 4. Policy intervention

Question ID : 7773935579
Status : Not Answered
Chosen Option : --

Q.17 Horizontal standards include:

- Ans
- 1. Health supplements
 - 2. Contaminants
 - 3. Nutraceuticals
 - 4. Functional foods

Question ID : 7773935560
Status : Not Answered
Chosen Option : --

Q.18 What is the full form of WTO?

- Ans
- 1. World Textile Organization
 - 2. World Trade Organization
 - 3. Water Testing Office
 - 4. World Training Organization

Question ID : 7773935561
Status : Answered
Chosen Option : 2

Q.19 Which is not a component of Serve Safe initiative?

- Ans
- 1. Each food establishment should have a trained food safety supervisor.
 - 2. Food Safety Display Boards should be prominently displayed at food establishments.
 - 3. Outreach to government and non-profit organizations and other workplaces.
 - 4. 'Hygiene +' certification for food premises to promote healthy and safe foods to consumers.

Question ID : 7773935575
Status : Answered
Chosen Option : 4

Q.20 Which is not a criterion of Handling and Storage of Food in the Clean Street Food Hub?

- Ans
- 1. All foodstuffs should be protected from dust and dirt.
 - 2. Vegetarian and non-vegetarian foods should be treated with separate napkins and chopping boards.
 - 3. Foodstuffs should be kept in a clean, hygienic container.
 - 4. Before cooking, frozen foods should only be thawed once.

Question ID : 7773935577
Status : Answered
Chosen Option : 4

Q.21 Which of the following is a role and responsibility of Audit agency?

- Ans
- 1. to initiate audits in accordance with the industry's risk classification
 - 2. maintain privacy
 - 3. establish a protocol for audit management
 - 4. Submission of audit reports in accordance with the FSS Regulations, 2018

Question ID : 7773935568
Status : Answered
Chosen Option : 4

Q.22 FSSAI does not specify the limit for _____ in food.

- Ans
- 1. Heavy metals
 - 2. Additives
 - 3. Mycotoxin
 - 4. Proteins

Question ID : 7773935562
Status : Answered
Chosen Option : 2

Q.23 Through a fully automated process, _____ method distributes the sample randomly to FSSAI-notified NABL approved laboratories.

- Ans
- 1. NCR
 - 2. FICS
 - 3. INFOLNET
 - 4. SWIFT

Question ID : 7773935567
Status : Answered
Chosen Option : 2

Q.24 _____ vitamin protects the body from oxidative stress.

- Ans
- 1. D
 - 2. B1
 - 3. C
 - 4. Folic acid

Question ID : 7773935576
Status : Answered
Chosen Option : 3

Q.25 _____ is necessary for healthy immune system.

- Ans
- 1. Zinc
 - 2. Iron
 - 3. Calcium
 - 4. Sodium

Question ID : 7773935573
Status : Answered
Chosen Option : 4



Teachingninja.in