



Teachingninja.in



Latest Govt Job updates



Private Job updates



Free Mock tests available

Visit - teachingninja.in



Teachingninja.in

FSSAI
Personal Assistant
Previous Year Paper
29 March 2022 Shift 3
(English)





FOOD SAFETY AND STANDARDS
AUTHORITY OF INDIA

Inspiring Trust, Assuring Safe & Nutritious Food
Ministry of Health and Family Welfare, Government of India

Participant ID	
Participant Name	
Test Center Name	
Test Date	29/03/2022
Test Time	2:00 PM - 5:00 PM
Subject	Personal Assistant


Section : General Intelligence

Q.1 Select the figure that can replace the question mark (?) in the following series.


#	#	#	@	
@			#	?
	@	@		

Ans

✗ 1.




✗ 2.



✗ 3.



✓ 4.



Question ID : 7773935351

Status : Answered

Chosen Option : 4



Q.2 Select the figure that is related to the third figure in the same way as the second figure is related to the first figure.



Ans

- ☒ 1.
- ☒ 2.
- ☒ 3.
- ☒ 4.

Question ID : 7773935360

Status : Answered

Chosen Option : 4

Q.3 In a certain code language, ABDUCT is written as 1AC5BS. How will DEARTH be written in the same code language?

- Ans
- ☒ 1. C21QSI
 - ☒ 2. C21QSG
 - ☒ 3. CD1QSG
 - ☒ 4. E21QSG

Question ID : 7773935352

Status : Answered

Chosen Option : 2

Q.4 A group of letters is given which are numbered 1 to 8. Four options given below depict combinations of these numbers. Select that combination of numbers so that letters arranged accordingly form a meaningful word.

R	E	S	O	T	A	D	I
1	2	3	4	5	6	7	8

- Ans
- ☒ 1. 6, 3, 5, 2, 4, 1, 8, 7
 - ☒ 2. 3, 5, 2, 6, 4, 7, 8, 1
 - ☒ 3. 3, 5, 2, 6, 4, 1, 8, 7
 - ☒ 4. 6, 3, 5, 2, 1, 4, 8, 7

Question ID : 7773935344

Status : Answered

Chosen Option : 4



Q.5 Three of the following four word-pairs are alike in a certain way and one is different. Select the odd one.

- Ans ☒ 1. Wall- Brick
☒ 2. Milk - Butter
☒ 3. Rubber- Latex
☒ 4. Prism- Glass

Question ID : 7773935342
Status : Marked For Review
Chosen Option : 2

Q.6 Select the term that will replace the question mark (?) in the following series.

30, 34, 17, 21, 10.5, ?

- Ans ☒ 1. 17
☒ 2. 14.5
☒ 3. 14
☒ 4. 15

Question ID : 7773935347
Status : Marked For Review
Chosen Option : 2

Q.7 Gayatri is four times as old as Arya. Five years ago, she was five times as old as Arya. How old is Gayatri now?

- Ans ☒ 1. 10 years
☒ 2. 20 years
☒ 3. 80 years
☒ 4. 40 years

Question ID : 7773935357
Status : Answered
Chosen Option : 3

Q.8 नौ दोस्त G, K, L, M, N, O, P, R और Y को 'X' और 'Z' नामक दो कारों में दिल्ली से शिमला की यात्रा करनी है। बैठने की व्यवस्था निम्नलिखित शर्तों के अनुसार होनी चाहिए:

- (a) एक कार में अधिकतम पांच और न्यूनतम चार व्यक्ति बैठ सकते हैं।
(b) 'G' और 'M' एक ही कार में एक साथ यात्रा करेंगे। 'Y' इस कार में नहीं है।
(c) 'K' और 'L', 'R' के साथ एक ही कार में नहीं हो सकते हैं।
(d) 'O' 'P' के साथ यात्रा नहीं कर सकता लेकिन 'G' और 'N' के साथ यात्रा कर सकता है।
यदि R 'Z' कार में यात्रा करता है, तो निम्नलिखित में से कौन सा सत्य है?

- Ans ☒ 1. O और Y 'Z' कार में एक साथ यात्रा करते हैं।
☒ 2. Y और K 'Z' कार में एक साथ यात्रा करते हैं।
☒ 3. M और N 'X' कार में एक साथ यात्रा करते हैं।
☒ 4. O और R 'Z' कार में एक साथ यात्रा करते हैं।

Question ID : 7773935358
Status : Answered
Chosen Option : 4



Q.9 Select the term that will replace the question mark (?) in the following series.

SEM, NLD, ISU, ?, YGC

- Ans
- ☒ 1. DYL
 - ☒ 2. BYL
 - ☒ 3. DZL
 - ☒ 4. CYL

Question ID : 7773935343
Status : Answered
Chosen Option : 3

Q.10 In a certain code language, 'INLET' is written as 'ZKRT0'. What is the code for 'TOUCH' in that code language?

- Ans
- ☒ 1. NJAUZ
 - ☒ 2. NJATZ
 - ☒ 3. NIAUZ
 - ☒ 4. NJBUZ

Question ID : 7773935353
Status : Answered
Chosen Option : 3

Q.11 Three Statements are given followed by four conclusions numbered I, II, III and IV. Assuming the statements to be true, even if they seem to be at variance with commonly known facts, decide which of the conclusions logically follow(s) from the statements.

Statements:

- 1. All oranges are pears.
- 2. Some oranges are mangoes.
- 3. All mangoes are fruits.

Conclusions:

- I. Some pears are mangoes.
- II. Some fruits are pears.
- III. No fruit is an orange.
- IV. All pears are fruits.

- Ans
- ☒ 1. Only conclusion I and IV follow
 - ☒ 2. Only conclusion I and II follow
 - ☒ 3. Only conclusion I, II and III follow
 - ☒ 4. Only conclusion II, III and IV follow

Question ID : 7773935354
Status : Answered
Chosen Option : 2

Q.12 The two expressions on either side of the sign (=) will have the same value if two terms on either side or on the same side are interchanged. Find the correct terms to be interchanged.

$$7 - 4 \div 2 + 5 \times 3 = 8 \times 3 + 10 \div 5 - 6$$

- Ans ☒ 1. 6, 7
☐ 2. 4, 10
☐ 3. 4, 8
☐ 4. 7, 8

Question ID : 7773935350
Status : Answered
Chosen Option : 1

Q.13 Select the pair of words from the given options that shares a similar relationship as:

Speak : Shout

- Ans ☐ 1. Refuse : Accept
☐ 2. Eat : Drink
☐ 3. Talk : Whisper
☒ 4. Walk: Run

Question ID : 7773935341
Status : Answered
Chosen Option : 4

Q.14 Select the option that is related to the fifth number in the same way as the second number is related to the first term and fourth number is related to third number:

$$19: 23 :: 11: 13 :: 29: ?$$

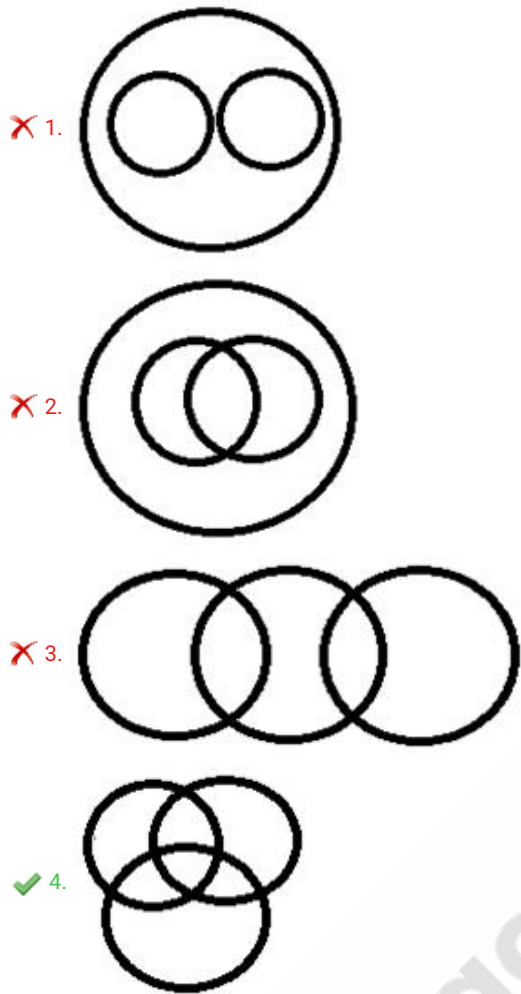
- Ans ☐ 1. 37
☒ 2. 31
☐ 3. 33
☐ 4. 35

Question ID : 7773935345
Status : Answered
Chosen Option : 4

Q.15 Choose the Venn diagram from the given options which represents the correct relationship amongst the following classes:

Women, Teachers, Singers

Ans



Question ID : 7773935356
Status : Answered
Chosen Option : 4

Q.16 From the given options, select the number pair which is different from the other three options.

- Ans
- ✗ 1. 81-121
 - ✗ 2. 64- 16
 - ✗ 3. 36 -25
 - ✓ 4. 49- 80

Question ID : 7773935346
Status : Answered
Chosen Option : 4

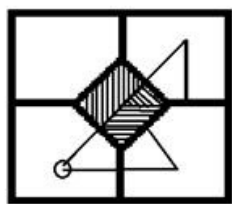
Q.17 Select the term that will replace the question mark (?) in the following series.

1, 3, 9, 23, ?, 115

- Ans
- ✗ 1. 54
 - ✗ 2. 50
 - ✗ 3. 51
 - ✓ 4. 53

Question ID : 7773935348
Status : Answered
Chosen Option : 4

Q.18 Which of the answer figures is the exact water image of the given figure?



Ans

- ✓ 1.
- ✗ 2.
- ✗ 3.
- ✗ 4.

Question ID : 7773935359
Status : Answered
Chosen Option : 1

Q.19 Which of the following two signs need to be interchanged to make the given equation correct?

$$96 \div 48 - 24 + 2 \times 50 = 4$$

- Ans
- ☒ 1. \div and \times
 - ☒ 2. $+$ and $-$
 - ☒ 3. \times and $+$
 - ☒ 4. $+$ and \div

Question ID : 7773935349

Status : Answered

Chosen Option : 3

Q.20 एक कथन के बाद दो धारणाएं I और II हैं। कथन पर विचार कीजिए और तय कीजिए कि दी धारणाओं में से कौन सी कथन में अंतर्निहित हैं।

कथन :

गन्ना के MSP में वृद्धि का किसान विरोध कर रहे हैं, जिसकी घोषणा हाल ही में सरकार ने की है।

धारणाएं:

I. गन्ने के MSP में किए गए बदलावों से किसान खुश नहीं हैं।

II. सरकार ने किसानों को आश्वासन दिया है कि वे आगे विरोध से बचने के लिए MSP में संशोधन पर विचार करेंगे।

- Ans
- ☒ 1. I और II दोनों धारणाएं अंतर्निहित हैं
 - ☒ 2. केवल धारणा I अंतर्निहित है
 - ☒ 3. न तो धारणा I और न ही धारणा II अंतर्निहित है
 - ☒ 4. केवल धारणा II अंतर्निहित है

Question ID : 7773935355

Status : Answered

Chosen Option : 2

Section : Quantitative Aptitude

Q.1 The difference between two positive numbers is 2701. When the larger number is divided by the smaller, the quotient is 7 and the remainder is 163. If the larger number is divided by 361, the remainder will be

- Ans
- ☒ 1. 211
 - ☒ 2. 223
 - ☒ 3. 242
 - ☒ 4. 236

Question ID : 7773935367

Status : Answered

Chosen Option : 4



Q.2 A trader buys 20 washing machines for a total of Rs. 3.8 lakhs, of which 8 machines are of type B and the other are of type A. The selling price of a washing machine of type A is 2.5 times that of type B. If he earns a profit of 20% on the whole, then what is the selling price of a washing machine of type A?

- Ans
- ☒ 1. Rs. 30,500
 - ☒ 2. Rs. 30,000
 - ☒ 3. Rs. 32,000
 - ☒ 4. Rs. 27,500

Question ID : 7773935376

Status : Answered

Chosen Option : 2

Q.3 यदि $\sqrt{52 - 6\sqrt{75}} + \sqrt{21 + 12\sqrt{3}} = x + y\sqrt{3}$, तो $(x+3y)$ का मान क्या है?

- Ans
- ☒ 1. 6
 - ☒ 2. 30
 - ☒ 3. 19
 - ☒ 4. 8

Question ID : 7773935365

Status : Marked For Review

Chosen Option : 4

Q.4 A certain sum is divided between A, B and C in the ratio $\frac{2}{5} : \frac{4}{9} : \frac{5}{6}$. If the difference between the shares of A and C is Rs. 1872, then the sum (in Rs.) is:

- Ans
- ☒ 1. 7344
 - ☒ 2. 7248
 - ☒ 3. 6788
 - ☒ 4. 7200

Question ID : 7773935371

Status : Answered

Chosen Option : 2

Q.5 The value of $9\frac{4}{9} \div 11\frac{1}{3}$ of $\frac{5}{6} - \left(1\frac{1}{20} \times 1\frac{1}{9} \div 1\frac{2}{19} - \frac{2}{9}\right) + \frac{2}{3} \div \frac{3}{8}$ of $2\frac{2}{9}$ is:

- Ans
- ☒ 1. $\frac{14}{15}$
 - ☒ 2. $\frac{7}{6}$
 - ☒ 3. $\frac{13}{10}$
 - ☒ 4. $\frac{29}{30}$

Question ID : 7773935363

Status : Answered

Chosen Option : 4

Q.6 यदि 300 का $x\%$ 200 के $(x+5)\%$ से 15 से अधिक है, तो $(250+x)$ का 20% , 150 के $(x+15)\%$ से कितना प्रतिशत कम है?

Ans

- ☒ 1. $7\frac{2}{3}\%$
- ☒ 2. $9\frac{1}{11}\%$
- ☒ 3. $8\frac{1}{3}\%$
- ☒ 4. $8\frac{2}{11}\%$

Question ID : 7773935368

Status : Marked For Review

Chosen Option : 1

Q.7 Pipes A, B and C together can fill a tank in 18 hours. All the three pipes were opened together for 10 hours and then only pipe C is closed, and A and B together took 12 hours to fill the remaining part of the tank. Pipe C alone can fill the whole tank in:

Ans

- ☒ 1. 45 hours
- ☒ 2. 36 hours
- ☒ 3. 54 hours
- ☒ 4. 40 hours

Question ID : 7773935380

Status : Answered

Chosen Option : 3

Q.8 The value of $(55 \div 40 \text{ of } 3) \times 2 - [36 \div 5 \text{ of } \{4 \times 8 - (17 - 23) \div (15 \div 2 \text{ of } 5)\}]$ is:

Ans

- ☒ 1. $\frac{22}{30}$
- ☒ 2. $\frac{7}{10}$
- ☒ 3. $\frac{43}{60}$
- ☒ 4. $\frac{3}{4}$

Question ID : 7773935366

Status : Answered

Chosen Option : 3



Q.9 The value of $[(5.4)^3 + (4.5)^3] \div [(5.4)^2 - (4.5)^2] - (0.9\bar{3} \div 0.\overline{84})$ is:

- Ans
- ☐ 1. 25.6
 - ☐ 2. 25.2
 - ☐ 3. 29
 - ☒ 4. 26.8

Question ID : 7773935364
Status : Answered
Chosen Option : 4

Q.10 Six years ago, the average age of A, B and C is 28 years. After 6 years from now, the average age of A and C will be 39 years. What is the age (in years) of B, after 5 years from now?

- Ans
- ☐ 1. 42
 - ☐ 2. 40
 - ☒ 3. 41
 - ☐ 4. 43

Question ID : 7773935373
Status : Answered
Chosen Option : 3

Q.11 The population of a city increases by 10% every year. If the difference between its population at the end of second year and the third year is 7293, then its population at the end of first year was

- Ans
- ☒ 1. 66300
 - ☐ 2. 58344
 - ☐ 3. 80223
 - ☐ 4. 51700

Question ID : 7773935369
Status : Answered
Chosen Option : 1

Q.12 What is sum of the digits of the greatest number of 4-digits which when divided by 20, 28, 32, and 35, the remainder in each case is 17?

- Ans
- ☒ 1. 31
 - ☐ 2. 35
 - ☐ 3. 23
 - ☐ 4. 41

Question ID : 7773935362
Status : Answered
Chosen Option : 1

Q.13 A man sells an article by giving 20% discount on its marked price and still earns a profit of 25%. If the cost price of the article increases by 10%, how much discount percent should he give now on its same marked price so as to earn same profit percentage as before?

- Ans
- ☒ 1. 12.5%
 - ☒ 2. 12%
 - ☒ 3. 10.5%
 - ☒ 4. 10%

Question ID : 7773935377
Status : Answered
Chosen Option : 2

Q.14 In a school, the number of girls is 20% less than that of boys. 45% of the girls and 84% of the boys take part in a social camp. The number of girls in the school is what percent more than the total number of students who do not take part in the social camp?

- Ans
- ☒ 1. $66\frac{2}{3}\%$
 - ☒ 2. $33\frac{1}{3}\%$
 - ☒ 3. 30%
 - ☒ 4. 20%

Question ID : 7773935370
Status : Answered
Chosen Option : 2

Q.15 The ratio of the incomes of A and B is 6:7. A and B save Rs. 12000 and Rs. 9000, respectively. If the ratio of their expenditures is 4 : 5, then their total expenditure (in Rs.) is:

- Ans
- ☒ 1. 135000
 - ☒ 2. 156000
 - ☒ 3. 147000
 - ☒ 4. 144000

Question ID : 7773935372
Status : Answered
Chosen Option : 1

Q.16 A sum of Rs. 7800 amounts to Rs. 11752 in $5\frac{1}{3}$ years at a certain rate percent per annum. What will be the simple interest on the same sum in $7\frac{1}{2}$ years at four-fifth of the same rate?

- Ans
- ☒ 1. Rs. 4446
 - ☒ 2. Rs. 4388
 - ☒ 3. Rs. 4584
 - ☒ 4. Rs. 4464

Question ID : 7773935374
Status : Answered
Chosen Option : 1



Q.17 The areas of three adjacent faces of a solid metallic cuboidal box are 108cm, 144cm and 192cm. It is melted and recast into 27 solid cubes of the same size. What is the sum of the lateral surface areas (in cm^2) of 12 such cubes?

- Ans**
- ☒ 1. 1152
 - ☒ 2. 960
 - ☒ 3. 768
 - ☒ 4. 640

Question ID : 7773935378
Status : Answered
Chosen Option : 3

Q.18 What is the compound interest (in Rs.) on a sum of Rs. 15500 at $13\frac{1}{3}\%$ in $2\frac{1}{4}$ years, if the interest is compounded 9-monthly? (Nearest to Rs.)

- Ans**
- ☒ 1. 5341
 - ☒ 2. 5242
 - ☒ 3. 5131
 - ☒ 4. 5238

Question ID : 7773935375
Status : Answered
Chosen Option : 3

Q.19 In a 40 litre solution of acid and water, the ratio of acid and water is 3 : 5. If 10 litres of the solution is replaced by 15 litres of water, the percentage of acid in the resulting solution will be:

- Ans**
- ☒ 1. 30%
 - ☒ 2. 20%
 - ☒ 3. 25%
 - ☒ 4. 28%

Question ID : 7773935379
Status : Answered
Chosen Option : 3

Q.20 When 6944, 7796 and 9287 are divided by the greatest number p, the remainder in each case is q. What is the value of $(3p-2q)$?

- Ans**
- ☒ 1. 399
 - ☒ 2. 383
 - ☒ 3. 259
 - ☒ 4. 193

Question ID : 7773935361
Status : Marked For Review
Chosen Option : 1

Section : English Language

Q.1 Select the most appropriate word for the given group of words.

Certain to happen and unable to be avoided or prevented

- Ans ☒ 1. indefinite
☒ 2. inevitable
☒ 3. invincible
☒ 4. indelible

Question ID : 7773935385
Status : Answered
Chosen Option : 2

Q.2 Identify the segment in the sentence which contains a grammatical error. If there is no error, select No Error.

There is / many fascinating / puzzles in nature.

- Ans ☒ 1. puzzles in nature.
☒ 2. many fascinating
☒ 3. No Error
☒ 4. There is

Question ID : 7773935388
Status : Marked For Review
Chosen Option : 3

Q.3 Given below are four jumbled sentences select the option that gives their correct logical sequence.

- A. During that time she would forget all her work and listen with the greatest concentration.
B. Later, she could repeat the entire text by heart.
C. My grandmother never went to school so she could not read.
D. Every Wednesday, the magazine would come and I would read the next episode of the story to her.

- Ans ☒ 1. CBDA
☒ 2. CDAB
☒ 3. DCBA
☒ 4. BDCA

Question ID : 7773935382
Status : Answered
Chosen Option : 2

Q.4 Select the most appropriate antonym of the given word.

CALM

- Ans
- ☒ 1. stable
 - ☒ 2. evident
 - ☒ 3. agitated
 - ☒ 4. fixed

Question ID : 7773935389
Status : Answered
Chosen Option : 3

Q.5 Select the wrongly spelt word.

- Ans
- ☒ 1. servile
 - ☒ 2. interruption
 - ☒ 3. abbreviation
 - ☒ 4. symmetry

Question ID : 7773935390
Status : Answered
Chosen Option : 3

Q.6 Select the correct passive voice form of the given sentence.

Professional advancement requires honesty and sincere work.

- Ans
- ☒ 1. Honesty and sincere work is required for professional advancement.
 - ☒ 2. Honesty and sincere work has been required by professional advancement.
 - ☒ 3. Professional advancement is required for honesty and sincere work.
 - ☒ 4. Honesty and sincere work requires professional advancement.

Question ID : 7773935386
Status : Answered
Chosen Option : 1

Q.7 Select the most appropriate synonym of the given word.

CONCISE

- Ans
- ☒ 1. capable
 - ☒ 2. brief
 - ☒ 3. minor
 - ☒ 4. relevant

Question ID : 7773935383
Status : Answered
Chosen Option : 2

Q.8 Select the most appropriate synonym of the given word.

ADROIT

- Ans
- ☐ 1. complete
 - ☐ 2. advanced
 - ☐ 3. mature
 - ☒ 4. skilful

Question ID : 7773935387
Status : Answered
Chosen Option : 4

Q.9 Select the sentence structure that is meaningful and grammatically correct.

- Ans
- ☐ 1. Essential items online most people started ordering during the pandemic.
 - ☒ 2. Most people started ordering essential items online during the pandemic.
 - ☐ 3. Started ordering essential items online during the pandemic most people.
 - ☐ 4. People most essential items during the pandemic started ordering online.

Question ID : 7773935381
Status : Answered
Chosen Option : 2

Q.10 Select the most appropriate antonym of the given word.

OBNOXIOUS

- Ans
- ☒ 1. agreeable
 - ☐ 2. undefined
 - ☐ 3. vague
 - ☐ 4. unclear

Question ID : 7773935384
Status : Answered
Chosen Option : 1

Section : General Awareness

Q.1 The first Livestock census in India was conducted during:

- Ans
- ☐ 1. 2017-2018
 - ☐ 2. 1856-1857
 - ☐ 3. 1901-1902
 - ☒ 4. 1919-1920

Question ID : 7773935404
Status : Answered
Chosen Option : 1

Q.2 With reference to physical features of India, in which river is the world's largest riverine island, Majuli, located?

Ans ☒ 1. Brahmaputra

☐ 2. Krishna

☐ 3. Cauvery

☐ 4. Kosi

Question ID : 7773935398

Status : Answered

Chosen Option : 1

Q.3 With reference to the rich cultural traditions of India, in which state/union territory is the Yaoshang Festival celebrated?

Ans ☒ 1. Manipur

☐ 2. Ladakh

☐ 3. Jammu and Kashmir

☐ 4. West Bengal

Question ID : 7773935397

Status : Answered

Chosen Option : 2

Q.4 In which city was India's first uterine transplant baby born in October 2018?

Ans ☐ 1. Chandigarh

☐ 2. Panaji

☒ 3. Pune

☐ 4. Nagpur

Question ID : 7773935405

Status : Answered

Chosen Option : 3

Q.5 With reference to Wildlife Sanctuaries and National parks of India, in which state is the Mukundra Hills National Park located?

Ans ☒ 1. Rajasthan

☐ 2. Goa

☐ 3. Uttar Pradesh

☐ 4. Punjab

Question ID : 7773935399

Status : Answered

Chosen Option : 3

Q.6 Who among the following has been awarded the 22nd Lal Bahadur Shastri National Award for Excellence in October 2021?

- Ans
- ☐ 1. Cyrus S. Poonawalla
 - ☐ 2. Adar Poonawalla
 - ☐ 3. Dr. Naresh Trehan
 - ☒ 4. Dr. Randeep Guleria

Question ID : 7773935409
Status : Answered
Chosen Option : 1

Q.7 With reference to the rich folk culture of India, what is the traditional bamboo dance of Mizoram called?

- Ans
- ☐ 1. Hojagiri
 - ☐ 2. Nongkrem
 - ☒ 3. Cheraw
 - ☐ 4. Dhol-Cholom

Question ID : 7773935395
Status : Answered
Chosen Option : 3

Q.8 In October 2021, World football body, FIFA unveiled the official mascot of the U-17 Women's World Cup India 2022 _____ representing women power.

- Ans
- ☐ 1. Ibha - an Indian leopardess
 - ☐ 2. Ibha - a Bengal tigress
 - ☒ 3. Ibha - an Asiatic lioness
 - ☐ 4. Ibha - a female cheetah

Question ID : 7773935408
Status : Answered
Chosen Option : 2

Q.9 Government think tank Niti Aayog and Rocky Mountain Institute (RMI) on September 15, 2021, launched a campaign called 'Shoonya', which is an initiative to promote:

- Ans
- ☐ 1. zero tolerance for environmental degradation
 - ☐ 2. zero-corruption
 - ☒ 3. zero-pollution
 - ☐ 4. zero tolerance for malnutrition

Question ID : 7773935410
Status : Answered
Chosen Option : 1



Q.10 The Indian Himalayan Region is spread across _____ Indian States/Union Territories as on January 1, 2021.

- Ans
- ☒ 1. 10
 - ☒ 2. 13
 - ☒ 3. 11
 - ☒ 4. 12

Question ID : 7773935400
Status : Answered
Chosen Option : 3

Q.11 With reference to India's independence movement, who among the following led a band of 10 revolutionary activists in the Kakori Train Robbery carried out in 1925?

- Ans
- ☒ 1. Khudiram Bose
 - ☒ 2. Ramprasad Bismil
 - ☒ 3. Udham Singh
 - ☒ 4. Chandra Shekhar Azad

Question ID : 7773935393
Status : Answered
Chosen Option : 4

Q.12 With reference to Indian Constitution, Part _____ of the Constitution specifies provisions related to Emergency.

- Ans
- ☒ 1. XV
 - ☒ 2. XIV
 - ☒ 3. XVIII
 - ☒ 4. IX

Question ID : 7773935401
Status : Not Answered
Chosen Option : --

Q.13 What was the rank of India in the Henley Passport Index for the year 2021, which lists the world's most travel-friendly passports?

- Ans
- ☒ 1. 80
 - ☒ 2. 65
 - ☒ 3. 95
 - ☒ 4. 90

Question ID : 7773935407
Status : Answered
Chosen Option : 2



Q.14 India's Polar Satellite Launch Vehicle PSLV-C51 successfully launched Amazonia-1 along with _____ co-passenger satellites on February 28, 2021, from Satish Dhawan Space Centre SHAR, Sriharikota.

- Ans
- ☒ 1. 9
 - ☒ 2. 15
 - ☒ 3. 18
 - ☒ 4. 3

Question ID : 7773935406
Status : Not Answered
Chosen Option : --

Q.15 As of 1st December 2021, the Bank rate in India as fixed by the Reserve Bank of India is:

- Ans
- ☒ 1. 5.75%
 - ☒ 2. 4.75%
 - ☒ 3. 6.25%
 - ☒ 4. 4.25%

Question ID : 7773935403
Status : Answered
Chosen Option : 4

Q.16 With reference to great dynasties which ruled India, which among the following dynasty is not associated with the Southern part of India?

- Ans
- ☒ 1. Pandyas
 - ☒ 2. Chahamanas
 - ☒ 3. Cholas
 - ☒ 4. Cheras

Question ID : 7773935392
Status : Answered
Chosen Option : 2

Q.17 Who among the following discovered remains of the Harappan Civilization at Lothal site?

- Ans
- ☒ 1. S.R. Rao
 - ☒ 2. Hasmukh Dhirajlal Sankhalia
 - ☒ 3. Bhagwan Lal Indraji
 - ☒ 4. Dayaram Sahni

Question ID : 7773935391
Status : Answered
Chosen Option : 4

Q.18 With reference to India's independence movement, who among the following was the first-ever woman to be elected as the President of the Indian National Congress in 1925?

- Ans ☒ 1. Sarojini Naidu
☐ 2. Kamla Nehru
☐ 3. Sucheta Kriplani
☐ 4. Nellie Sengupta

Question ID : 7773935394
Status : Answered
Chosen Option : 1

Q.19 Who among the following Indian classical musicians has/had acquired international fame by playing the classical instrument, Santoor?

- Ans ☐ 1. Ustad Amjad Ali Khan
☐ 2. Pandit Ravi Shankar
☐ 3. Ustad Bismillah Khan
☒ 4. Pandit Shivkumar Sharma

Question ID : 7773935396
Status : Answered
Chosen Option : 4

Q.20 Golden Jubilee of Indian Parliament was celebrated on _____.

- Ans ☐ 1. 15th August 1997
☒ 2. 13th May 2002
☐ 3. 26th November 2000
☐ 4. 13th March 2018

Question ID : 7773935402
Status : Answered
Chosen Option : 3

Section : Computer Literacy

Q.1 Which of the following is not a free email website?

- Ans ☐ 1. Zoho Mail
☐ 2. Yahoo Mail
☐ 3. AOL Mail
☒ 4. Google Workspace product

Question ID : 7773935427
Status : Answered
Chosen Option : 4

Q.2

- Ans
- ☐ 1. A parabola
 - ☐ 2. An ellipse
 - ☐ 3. A circle
 - ☒ 4. A diagonal line

Question ID : 7773935417
Status : Not Answered
Chosen Option : --

Q.3 Which of the following is a type of email attack in which the attacks are the practice of sending fraudulent communications that appear to come from a reputable entity or person in email or other communication channels?

- Ans
- ☐ 1. Business email compromise
 - ☒ 2. Phishing
 - ☐ 3. Spamming
 - ☐ 4. Ransomware

Question ID : 7773935426
Status : Answered
Chosen Option : 2

Q.4 Which of the following is false with reference to deleting Facebook account?

- Ans
- ☐ 1. It may take up to 90 days before all stored data is deleted from backup systems.
 - ☐ 2. If you log after initial facebook delete request, account will not be deleted.
 - ☐ 3. Once Facebook account is deleted, you cannot get it back.
 - ☒ 4. Facebook deletes accounts immediately after the initial request.

Question ID : 7773935430
Status : Answered
Chosen Option : 4

Q.5 Find the odd one out in 'Show' group of View Tab of MS-Word 2019.

- Ans
- ☒ 1. Footer
 - ☐ 2. Navigation Pane
 - ☐ 3. Guidelines
 - ☐ 4. Ruler

Question ID : 7773935413
Status : Answered
Chosen Option : 3

Q.6 The keyboard shortcut 'Alt+A' in MS-PowerPoint 2019 is used to _____.

- Ans
- ☒ 1. Open the Animations tab and add animations to slides.
 - ☐ 2. Open the Design tab and apply themes and customize slides.
 - ☐ 3. Open the Transitions tab and add transitions between slides.
 - ☐ 4. Open the Draw tab and access the drawing tools.

Question ID : 7773935422
Status : Answered
Chosen Option : 1

Q.7 In MS-Excel 2019, what is the maximum range of font size supported now?

- Ans
- ☐ 1. 0 to 255
 - ☐ 2. 1 to 31
 - ☐ 3. -72 to +72
 - ☒ 4. 1 to 409

Question ID : 7773935418
Status : Not Answered
Chosen Option : --

Q.8 In an MS-Excel sheet, a cell with text overflow problem can be dealt with _____.

- Ans
- ☐ 1. Text Merging
 - ☐ 2. Text Aligning
 - ☒ 3. Text Wrapping
 - ☐ 4. Text Bumping

Question ID : 7773935419
Status : Answered
Chosen Option : 3

Q.9 Which of the following cannot be used to delete a part of text in MS-Word 2019?

- Ans
- ☐ 1. Select the text and press Ctrl + X.
 - ☐ 2. Select the text and press the Backspace or Delete key.
 - ☒ 3. Select the text and press Shift + F3 key.
 - ☐ 4. Place the cursor next to the text then press Backspace key.

Question ID : 7773935416
Status : Answered
Chosen Option : 3

Q.10 Which of the following is correct way to block a Facebook user?

- Ans
- ☒ 1. Go to the Settings → Blocking → Enter the name of the person → Click Block option.
 - ☐ 2. Go to the profile of the person → Click on About option to block
 - ☐ 3. Go to the profile of the person → Click on More and select Block
 - ☐ 4. Go to the profile of the person → Click on Check-ins to block

Question ID : 7773935429
Status : Answered
Chosen Option : 2

Q.11 Which of the following keyboard shortcut in MS-PowerPoint 2019 is used to open the Slide Show tab and set up and play the Slide Show?

- Ans
- ☒ 1. Alt + N
 - ☒ 2. Alt + K
 - ☒ 3. Alt + S
 - ☒ 4. Alt + G

Question ID : 7773935421
Status : Answered
Chosen Option : 3

Q.12 Completed version of Twitter was debuted in which year?

- Ans
- ☒ 1. 2004
 - ☒ 2. 2007
 - ☒ 3. 2005
 - ☒ 4. 2002

Question ID : 7773935432
Status : Answered
Chosen Option : 3

Q.13 Which of the following symbols is used to to make text bold in WhatsApp chat?

- Ans
- ☒ 1.
 - ☒ 2.
 - ☒ 3.
 - ☒ 4.

Question ID : 7773935434
Status : Answered
Chosen Option : 4

Q.14 Which of the following is a predefined set of colors, fonts and visual effects that you apply to your slides for a unified, professional look in MS-PowerPoint 2019?

- Ans
- ☒ 1. Themes
 - ☒ 2. Transitions
 - ☒ 3. Templates
 - ☒ 4. Layouts

Question ID : 7773935424
Status : Answered
Chosen Option : 3

Q.15

- Ans
- ☐ 1. i) → b; ii) → d; iii) → a; iv) → c
 - ☒ 2. i) → a; ii) → d; iii) → b; iv) → c
 - ☐ 3. i) → c; ii) → d; iii) → b; iv) → a
 - ☐ 4. i) → a; ii) → b; iii) → d; iv) → c

Question ID : 7773935415
Status : Answered
Chosen Option : 2

Q.16 In MS-Word 2019 document, email address text string is automatically shown as a hyperlink. To remove this link which of the following option is selected?

- Ans
- ☐ 1. Remove Underline
 - ☐ 2. Edit Hyperlink
 - ☒ 3. Remove Hyperlink
 - ☐ 4. Convert to Regular Text

Question ID : 7773935414
Status : Answered
Chosen Option : 3

Q.17 Maximum possible number of rows in MS-Excel 2019 is _____.

- Ans
- ☐ 1. 1024
 - ☐ 2. 32768
 - ☐ 3. 65536
 - ☒ 4. 1048576

Question ID : 7773935420
Status : Answered
Chosen Option : 4

Q.18 Which of the following key is used to run spell check in MS-Word 2019?

- Ans
- ☐ 1. F1
 - ☐ 2. F5
 - ☐ 3. F3
 - ☒ 4. F7

Question ID : 7773935411
Status : Answered
Chosen Option : 4

Q.19 Which of the following is false with reference to animations in MS-PowerPoint 2016?

- Ans
- ☐ 1. Entrance and Emphasis are animation effects.
 - ☒ 2. You cannot animate text and objects such as clip Art, Shapes, and Pictures.
 - ☐ 3. To apply Animation you can use Animations tab.
 - ☐ 4. Transitions and Animations are different.

Question ID : 7773935425
Status : Answered
Chosen Option : 1

Q.20 Cover photos for Facebook (mobile) dimensions should have a width of _____ and height of _____.

- Ans
- ☒ 1. 1280 px ; 720 px
 - ☒ 2. 180 px ; 180 px
 - ☒ 3. 640 px ; 360 px
 - ☒ 4. 1200 px ; 628 px

Question ID : 7773935428
Status : Answered
Chosen Option : 1

Q.21 To start a phone call on WhatsApp, you need to do is open _____.

- Ans
- ☒ 1. Chat window
 - ☒ 2. Settings window
 - ☒ 3. Camera window
 - ☒ 4. Status window

Question ID : 7773935435
Status : Answered
Chosen Option : 1

Q.22 You can rehearse your presentation to make sure that it fits within a certain time frame. While you rehearse, use the _____ feature to record the time that you need to present each slide in MS-PowerPoint 2019?

- Ans
- ☒ 1. Slide Advancement
 - ☒ 2. Slide Transition
 - ☒ 3. Slide Animation
 - ☒ 4. Slide Timing

Question ID : 7773935423
Status : Answered
Chosen Option : 2

Q.23 Which of the following options is not available in 'Table of Contents' group of 'REFERENCES' Tab In MS-Word 2019?

- Ans
- ☒ 1. Add text
 - ☒ 2. Cross Reference
 - ☒ 3. Automatic Table 1
 - ☒ 4. Update table

Question ID : 7773935412
Status : Answered
Chosen Option : 2

Q.24 Username in Twitter is also known as _____.

- Ans
- ☒ 1. Twitter name
 - ☒ 2. Twitter handle
 - ☒ 3. Twitter app
 - ☒ 4. Twitter profile

Question ID : 7773935431
Status : Answered
Chosen Option : 2

Q.25 Which of the following is not a microblogging site?

- Ans
- ☒ 1. Twitter
 - ☒ 2. Tumblr
 - ☒ 3. WhatsApp
 - ☒ 4. Instagram

Question ID : 7773935433
Status : Answered
Chosen Option : 3

Section : FSSAI(General understanding)

Q.1 Who has the authority to grant or revoke a food company operator's license?

- Ans
- ☒ 1. Food Safety Officer
 - ☒ 2. Designated Officer
 - ☒ 3. Commissioner of Food Safety
 - ☒ 4. Adjudicating Officer

Question ID : 7773935440
Status : Answered
Chosen Option : 2

Q.2 _____ is comprised of all Food Safety Commissioners.

- Ans
- ☒ 1. Food and Nutrition Board
 - ☒ 2. Scientific Committee
 - ☒ 3. Scientific Panels
 - ☒ 4. Central Advisory Committee

Question ID : 7773935438
Status : Answered
Chosen Option : 4

Q.3 According to FSSAI, full form of UCO.

- Ans
- ☒ 1. Used Cooking Oil
 - ☐ 2. Usable Cooking Oil
 - ☐ 3. United Corporation Office
 - ☐ 4. Unstable Cooking Oil

Question ID : 7773935455
Status : Answered
Chosen Option : 1

Q.4 Full form of FICS:

- Ans
- ☒ 1. Food Import Clearance System
 - ☐ 2. Food Inspection Clearance system
 - ☐ 3. Facilitating Interface Clearance system
 - ☐ 4. Food Investigation and Clearance system

Question ID : 7773935443
Status : Answered
Chosen Option : 1

Q.5 The Basic Food Safety Training Programme and Certification for Food Handlers in India includes:

- Ans
- ☐ 1. Street food vending, Bakery, Catering
 - ☐ 2. Catering, Edible Oil, Packaged water
 - ☒ 3. Street food vending, Catering, Retail and Distribution
 - ☐ 4. Manufacturing/Processing, Edible oil, Bakery

Question ID : 7773935457
Status : Answered
Chosen Option : 4

Q.6 What is the full form of 'DASH' diet?

- Ans
- ☐ 1. Dietary Approach to Stay Healthy
 - ☐ 2. Dietary Application to Stop Hyperglycemia
 - ☐ 3. Dietary Approach to Stop Hypoglycemia
 - ☒ 4. Dietary Approach to Stop Hypertension

Question ID : 7773935447
Status : Answered
Chosen Option : 1

Q.7 One potential CSFH in Mumbai is:

- Ans
- ☐ 1. Rishi Nagar
 - ☒ 2. Zaveri bazar
 - ☐ 3. Chaat bazar
 - ☐ 4. Kamala Nehru Park

Question ID : 7773935454
Status : Not Answered
Chosen Option : --

Q.8 _____ is the International Standard for Accreditation of Laboratories.

- Ans
- ☐ 1. ISO 17045
 - ☐ 2. ISO 17026
 - ☐ 3. ISO 17051
 - ☒ 4. ISO 17025

Question ID : 7773935442
Status : Not Answered
Chosen Option : --

Q.9 The source of vitamin-A in fortified oil is:

- Ans
- ☐ 1. Retinyl iodate
 - ☒ 2. Retinyl palmitate
 - ☐ 3. Retinyl ester
 - ☐ 4. Retinyl sulphate

Question ID : 7773935450
Status : Answered
Chosen Option : 2

Q.10 _____ of the Food Safety and Standards Act establishes a system and guidelines for accrediting certification bodies for the Food Safety Management System (FSMS).

- Ans
- ☒ 1. Sec. 16(2)(c)
 - ☐ 2. Sec 16 (4)(a)
 - ☐ 3. Sec 16(4)(c)
 - ☐ 4. Sec 16(5)(a)

Question ID : 7773935444
Status : Not Answered
Chosen Option : --

Q.11 Which one is not approved by FSSAI as artificial sweetener?

- Ans
- ☐ 1. Neotame
 - ☐ 2. Aspartame
 - ☐ 3. Acesulfame potassium
 - ☒ 4. Sodium cyclamate

Question ID : 7773935451
Status : Answered
Chosen Option : 3

Q.12 _____ of the FSS Act allows the FSSAI to set up an unlimited number of scientific panels for any purpose.

- Ans
- ☒ 1. Section 12(a)
 - ☒ 2. Section 13(a)
 - ☒ 3. Section 12
 - ☒ 4. Section 13

Question ID : 7773935437
Status : Not Answered
Chosen Option : --

Q.13 The Commissioner of Food Safety appoints _____.

- Ans
- ☒ 1. Members of the Scientific panel
 - ☒ 2. Food Safety Officer
 - ☒ 3. Food Analyst
 - ☒ 4. Designated Officers

Question ID : 7773935459
Status : Answered
Chosen Option : 3

Q.14 Since _____, Vanaspati in India has been fortified with vitamin A.

- Ans
- ☒ 1. 1962
 - ☒ 2. 2016
 - ☒ 3. 1995
 - ☒ 4. 1953

Question ID : 7773935449
Status : Not Answered
Chosen Option : --

Q.15 Pulses are generally adulterated with _____.

- Ans
- ☒ 1. Papaya seeds
 - ☒ 2. Chalk
 - ☒ 3. Chakunda beans
 - ☒ 4. Turmeric

Question ID : 7773935460
Status : Answered
Chosen Option : 3

Q.16 फूड लेबल पर कौन सी जानकारी अनिवार्य नहीं है?

- Ans
- ☒ 1. बैच संख्या
 - ☒ 2. मौजूद भारी धातुओं की मात्रा
 - ☒ 3. खाद्य एलर्जी के संबंध में घोषणा
 - ☒ 4. मुख्य डिस्प्ले पैनल पर FSSAI लाइसेंस नंबर

Question ID : 7773935439

Status : Answered

Chosen Option : 3

Q.17 The Food Standards and Safety Bill (2005) became an Act on:

- Ans
- ☒ 1. 26th January, 2006
 - ☒ 2. 2nd August, 2006
 - ☒ 3. 2nd October, 2006
 - ☒ 4. 15th august, 2006

Question ID : 7773935436

Status : Answered

Chosen Option : 4

Q.18 _____ is an antioxidant

- Ans
- ☒ 1. vitamin-B1
 - ☒ 2. vitamin-D
 - ☒ 3. vitamin-E
 - ☒ 4. Folic acid

Question ID : 7773935452

Status : Answered

Chosen Option : 2

Q.19 The headquarters of BIS is located in:

- Ans
- ☒ 1. Kolkata
 - ☒ 2. Mumbai
 - ☒ 3. Bangalore
 - ☒ 4. New Delhi

Question ID : 7773935441

Status : Answered

Chosen Option : 4

Q.20 The Food Safety and Standards Act 2006 came into force on _____.

- Ans
- ☒ 1. August 15, 2008
 - ☒ 2. August 5, 2008
 - ☒ 3. August 15, 2011
 - ☒ 4. August 5, 2011

Question ID : 7773935458

Status : Answered

Chosen Option : 4



Q.21 Which of the following is an auditor's function and responsibility?

- Ans
- ☒ 1. Start an audit according to the industry's risk classification.
 - ☐ 2. Carry out the responsibilities specified in Section 10 of the FSS (FSA) Regulations, 2018.
 - ☐ 3. Establish a protocol for audit management
 - ☐ 4. Ensure that there are no conflicts of interest.

Question ID : 7773935445
Status : Answered
Chosen Option : 1

Q.22 Ethanol can be prepared from:

- Ans
- ☐ 1. onion
 - ☒ 2. cassava
 - ☐ 3. banana
 - ☐ 4. tapioca

Question ID : 7773935456
Status : Answered
Chosen Option : 4

Q.23 The WHO recommends a sodium consumption of _____ per day as a safe level.

- Ans
- ☐ 1. 7.5 gm
 - ☐ 2. 5000 mg
 - ☐ 3. 10 gm
 - ☒ 4. 2000 mg

Question ID : 7773935448
Status : Answered
Chosen Option : 1

Q.24 क्लीन स्ट्रीट फूड हब में अपशिष्ट निपटान के लिए निम्न में से कौन सा सही है?

- Ans
- ☐ 1. रसोई घर के फर्श और स्लैब की दैनिक सफाई होनी चाहिए।
 - ☐ 2. भोजन तैयार करने का क्षेत्र स्वच्छ और सुव्यवस्थित होना चाहिए।
 - ☒ 3. शेष उपभोज्य को उपयोग के तुरंत बाद प्रशीतित किया जाना चाहिए।
 - ☐ 4. कीट नियंत्रण नियमित रूप से किया जाना चाहिए।

Question ID : 7773935453
Status : Answered
Chosen Option : 2



Q.25

- Ans
- ☒ 1. Enriched foods
 - ☒ 2. Plant based foods
 - ☒ 3. Fortified foods
 - ☒ 4. Organic foods

Question ID : 7773935446
Status : Answered
Chosen Option : 1

