



# Teachingninja.in



**Latest Govt Job updates**



**Private Job updates**



**Free Mock tests available**

**Visit - [teachingninja.in](https://teachingninja.in)**



Teachingninja.in

# **IB ACIO Grade-II**

**Previous Year Paper  
(Executive)  
17 Jan, 2024 Shift 1**



INTELLIGENCE BUREAU

(Ministry of Home Affairs)

Government of India

Participant ID	
Application no	
Participant Name	
Test Center Name	
Test Date	17/01/2024
Test Time	8:30 AM - 9:30 AM
Subject	IB ACIO II Exe

Section : Current Affairs

Q.1 Consider the following statement about Hockey India Sub Junior Women South Zone Championship 2023:

- 1. It was the 2nd edition of such kind of tournament.
- 2. In this event Hockey Andhra Pradesh secured the top position with 12 points
- 3. Hockey Unit of Tamil Nadu have secured the 2nd position.

Which of the statement given above is/are correct?

- Ans ☒ 1. Statement 2 and 3
- ☐ 2. All are correct
- ☐ 3. Only statement 3
- ☐ 4. Only statement 2

Question ID : 630680552537  
Option 1 ID : 6306802160243  
Option 2 ID : 6306802160244  
Option 3 ID : 6306802160245  
Option 4 ID : 6306802160242  
Status : Not Answered  
Chosen Option : --

Q.2 Frontal offset test in Bharat New Car Assessment Programme (NCAP) is performed at a speed of \_\_\_\_\_.

- Ans ☐ 1. 70 kmph
- ☐ 2. 75 kmph
- ☐ 3. 82 kmph
- ☒ 4. 64 kmph

Question ID : 630680552517  
Option 1 ID : 6306802160163  
Option 2 ID : 6306802160164  
Option 3 ID : 6306802160165  
Option 4 ID : 6306802160162  
Status : Not Answered  
Chosen Option : --

Q.3 Consider the following statement about the peace agreement done by Government of India in December 2023:

- 1. It was signed between United National Liberation Front (UNLF), Government of Manipur and Government of India
- 2. NRFM (earlier United Revolutionary Front) was formed on September 11, 2021
- 3. Around 25 leaders/cadres of National Revolutionary Front Manipur (NRFM- a Meitei UG outfit) led by Major Boicha (Vice Chief of Army Staff of NRFM) along with 50 weapons have joined UNLF on 22nd December, 2023.

Which of the statement given above is/are correct?

- Ans
- ☒ 1. Statement 1 and 2
  - ☒ 2. Only statement 2
  - ☒ 3. Only statement 1
  - ☒ 4. All are correct

Question ID : 630680552544  
Option 1 ID : 6306802160272  
Option 2 ID : 6306802160271  
Option 3 ID : 6306802160270  
Option 4 ID : 6306802160273  
Status : Not Answered  
Chosen Option : --

Q.4 Consider the following statements about Mitrashakti 2023:

- 1. It is a naval exercise
- 2. It is the joint exercise of India and Sri Lanka
- 3. The exercise has been conducted from 16th to 29th November 2023.
- 4. It is aimed at fostering a deeper understanding of each other's operational strategies and tactics

Which of the statement given above is/are correct?

- Ans
- ☒ 1. Statement 1, 2 and 3
  - ☒ 2. All are correct
  - ☒ 3. Statement 1, 3, 4
  - ☒ 4. Statement 2 and 3

Question ID : 630680552540  
Option 1 ID : 6306802160255  
Option 2 ID : 6306802160256  
Option 3 ID : 6306802160257  
Option 4 ID : 6306802160254  
Status : Not Answered  
Chosen Option : --

Q.5 Orunodoi 2.0 is launched by which of the following states?

- Ans
- ☒ 1. Rajasthan
  - ☒ 2. Manipur
  - ☒ 3. Assam
  - ☒ 4. Jharkhand

Question ID : 630680552523  
Option 1 ID : 6306802160188  
Option 2 ID : 6306802160186  
Option 3 ID : 6306802160189  
Option 4 ID : 6306802160187  
Status : Not Answered  
Chosen Option : --

Q.6 Who is appointed as the new DGCA Chief in Jan 2023?

- Ans
- ☐ 1. Bir Singh Rai
  - ☐ 2. Ravi Krishna
  - ☐ 3. D.C Sharma
  - ☒ 4. Vikram Dev Dutt

Question ID : 630680552522  
Option 1 ID : 6306802160184  
Option 2 ID : 6306802160182  
Option 3 ID : 6306802160185  
Option 4 ID : 6306802160183  
Status : Answered  
Chosen Option : 4

Q.7 Which of the following city is recognized as city of music by UNESCO's Creative Cities Network?

- Ans
- ☐ 1. Srinagar
  - ☐ 2. Jaipur
  - ☐ 3. New Delhi
  - ☒ 4. Gwalior

Question ID : 630680552518  
Option 1 ID : 6306802160166  
Option 2 ID : 6306802160169  
Option 3 ID : 6306802160167  
Option 4 ID : 6306802160168  
Status : Answered  
Chosen Option : 4

Q.8 Consider the following statement about India's first Regional Rapid Transit System(RRTS):

1. It was inaugurated by Prime Minister Narendra Modi
2. It was inaugurated on 20 October 2023
3. It comes under Ministry of Housing & Urban Affairs
4. Delhi-Ghaziabad-Meerut RRTS corridor is the first RRTS corridor in India.

Which of the statement given above is/are incorrect?

- Ans
- ☒ 1. None of given statement
  - ☐ 2. Statement 2 and 3
  - ☐ 3. Statement 4
  - ☐ 4. Statement 1

Question ID : 630680552546  
Option 1 ID : 6306802160280  
Option 2 ID : 6306802160279  
Option 3 ID : 6306802160281  
Option 4 ID : 6306802160278  
Status : Answered  
Chosen Option : 2

Q.9 What is India's rank in Climate Change Performance Index in 2023?

- Ans ☒ 1. 8th
- ☐ 2. 5th
- ☐ 3. 7th
- ☐ 4. 6th

Question ID : 630680552524  
Option 1 ID : 6306802160190  
Option 2 ID : 6306802160193  
Option 3 ID : 6306802160191  
Option 4 ID : 6306802160192  
Status : Answered  
Chosen Option : 3

Q.10 What is the rank of India in Global Innovation Index 2023?

- Ans ☐ 1. 8th
- ☐ 2. 23rd
- ☒ 3. 40th
- ☐ 4. 34th

Question ID : 630680552520  
Option 1 ID : 6306802160174  
Option 2 ID : 6306802160175  
Option 3 ID : 6306802160177  
Option 4 ID : 6306802160176  
Status : Answered  
Chosen Option : 2

Q.11 Consider the following statement about “Miyawaki” Plantation Method:

1. In December 2023, in a bid boost forest cover in the coal belt region of Chhattisgarh, Coal India Ltd subsidiary, South Eastern Coalfields Ltd (SECL) will undertake plantation using the Miyawaki method for the first time in its operational areas.
2. The Miyawaki method of plantation was pioneered in the 90s by Spanish botanist and expert in plant ecology Mr. Akira Miyawaki.
3. This technique of plantation involves planting native trees, shrubs and groundcover plants within every square metre.

Which of the statement given above is/are correct?

- Ans ☐ 1. Statement 2 and 3
- ☐ 2. Only statement 2
- ☐ 3. All are correct
- ☒ 4. Statement 1 and 3

Question ID : 630680552545  
Option 1 ID : 6306802160275  
Option 2 ID : 6306802160274  
Option 3 ID : 6306802160276  
Option 4 ID : 6306802160277  
Status : Not Answered  
Chosen Option : --



**Q.12** Who among the following are the first-ever brother-sister duo to become Grandmasters in chess?

- Ans ☒ 1. Padmini Rout and Parimarjan Rout  
☒ 2. Priya Gupta and Abhijeet Gupta  
☒ 3. Vantika Agrawal and Suri Agrawal  
☒ 4. Vaishali Rameshbabu and Praggnanandhaa

Question ID : 630680552519  
Option 1 ID : 6306802160172  
Option 2 ID : 6306802160171  
Option 3 ID : 6306802160173  
Option 4 ID : 6306802160170  
Status : Answered  
Chosen Option : 4

**Q.13** Consider the following statement about "Project UDBHAV":

1. Rajnath Singh inaugurated 'Project Udbhav'.
2. This project has been launched in October 2023.
3. It is an initiative by the Indian Army to blend ancient wisdom with modern military methods for tackling current security challenges

Which of the statement given above is/are correct?

- Ans ☒ 1. Only statement 3  
☒ 2. All are correct  
☒ 3. Only statement 2  
☒ 4. Statement 2 and 3

Question ID : 630680552541  
Option 1 ID : 6306802160261  
Option 2 ID : 6306802160260  
Option 3 ID : 6306802160258  
Option 4 ID : 6306802160259  
Status : Answered  
Chosen Option : 2

**Q.14** Bharatiya Nyaya Sanhita was introduced in Lok Sabha to replace\_\_\_\_\_.

- Ans ☒ 1. Indian Criminal Code  
☒ 2. Indian Civil Code  
☒ 3. Indian Penal Code  
☒ 4. Indian Code of Conduct

Question ID : 630680552521  
Option 1 ID : 6306802160179  
Option 2 ID : 6306802160180  
Option 3 ID : 6306802160178  
Option 4 ID : 6306802160181  
Status : Answered  
Chosen Option : 1



Q.15 Match the list 1 and list 2 and select the correct answer using the code given below.

List 1 (Chatbot)	List 2 (Company)
A. Q	1. OpenAI
B. Bard	2. IndiGo
C. 6Eskai	3. Google
D. ChatGPT	4. Amazon

Ans ☒ 1. A-4 B-3 C-2 D-1

☒ 2. A-2 B-3 C-1 D-4

☒ 3. A-2 B-3 C-4 D-1

☒ 4. A-4 B-2 C-1 D-3

Question ID : 630680552539

Option 1 ID : 6306802160253

Option 2 ID : 6306802160251

Option 3 ID : 6306802160250

Option 4 ID : 6306802160252

Status : Answered

Chosen Option : 3

Q.16 Consider the following statement about NISAR:

1. It is a microwave remote sensing satellite for Earth observation
2. It is a joint mission of India and USA
3. It's full form is NASA-ISRO Synthetic Aperture Radar
4. It is targeted for launch onboard India's GSLV

Which of the statement given above is/are correct?

Ans ☒ 1. Only statement 2 and 4

☒ 2. Statement 2 and 3

☒ 3. Only statement 1, 3, 4

☒ 4. All are correct

Question ID : 630680552538

Option 1 ID : 6306802160246

Option 2 ID : 6306802160247

Option 3 ID : 6306802160249

Option 4 ID : 6306802160248

Status : Not Answered

Chosen Option : --

Q.17 As per Financial Assistance for Promotion of Guru-Shishya Parampara scheme of Ministry of Culture,

Ans ☒ 1. support is provided to 1 Guru and maximum 18 Shishyas in the field of theatre

☒ 2. support is provided to 1 Guru and maximum 15 Shishyas in the field of theatre

☒ 3. support is provided to 1 Guru and maximum 10 Shishyas in the field of theatre

☒ 4. support is provided to 1 Guru and maximum 12 Shishyas in the field of theatre

Question ID : 630680552525

Option 1 ID : 6306802160197

Option 2 ID : 6306802160196

Option 3 ID : 6306802160194

Option 4 ID : 6306802160195

Status : Answered

Chosen Option : 3



Q.18 Consider the following statement about "Women Reservation Act 2023":

1. Provides 33 percent reservation to women in state assemblies and Lok Sabha
2. It is related to the 106th constitutional amendment act of the Indian constitution
3. Through this act reservation will be provided for the next 10 years which can be extended in future.
4. Article 330A is inserted through this amendment

Which of the statement given above is/are correct?

- Ans ☒ 1. Statement 1, 2 and 4
- ☒ 2. Statement 2,3 and 4
- ☒ 3. All are correct
- ☒ 4. Statement 1, 2 and 3

Question ID : 630680552542  
Option 1 ID : 6306802160265  
Option 2 ID : 6306802160262  
Option 3 ID : 6306802160264  
Option 4 ID : 6306802160263  
Status : Answered  
Chosen Option : 1

Q.19 Sacred Ensembles of the Hoysalas which was declared as a UNESCO world heritage site in 2023 is located in \_\_\_\_\_.

- Ans ☒ 1. Karnataka
- ☒ 2. Chhattisgarh
- ☒ 3. Odisha
- ☒ 4. Andhra Pradesh

Question ID : 630680552526  
Option 1 ID : 6306802160200  
Option 2 ID : 6306802160201  
Option 3 ID : 6306802160198  
Option 4 ID : 6306802160199  
Status : Answered  
Chosen Option : 2

Q.20 As of December 2023, which among the following schemes are related with the Ministry of Minority Affairs:

1. Pradhan Mantri Jan Vikas Karyakram
2. Saksham Scholarship Scheme
3. Pragati Scholarship
4. Beti Bachao Beti Padhao

- Ans ☒ 1. Only 1
- ☒ 2. Only 4
- ☒ 3. 2 and 3
- ☒ 4. 1 and 2

Question ID : 630680552543  
Option 1 ID : 6306802160266  
Option 2 ID : 6306802160269  
Option 3 ID : 6306802160268  
Option 4 ID : 6306802160267  
Status : Answered  
Chosen Option : 4

Section : General Studies

Q.1 Which of the following were the aspects of the green revolution?

- A) Using High Yielding Varieties seeds
- B) Mechanization of Agriculture
- C) Use of Chemical Fertilizers and Pesticides
- D) Irrigation

Ans ☒ 1. B, C, D only  
☒ 2. A, B, C only  
☒ 3. A, B, C, D  
☒ 4. A, C, D only

Question ID : 630680552816  
Option 1 ID : 6306802161359  
Option 2 ID : 6306802161358  
Option 3 ID : 6306802161361  
Option 4 ID : 6306802161360  
Status : Answered  
Chosen Option : 2

Q.2 The term 'secular' was added to the Preamble of the Indian Constitution by \_\_\_\_\_.

Ans ☒ 1. the 45nd Constitutional Amendment Act of 1985.  
☒ 2. the 42nd Constitutional Amendment Act of 1976.  
☒ 3. the 42nd Constitutional Amendment Act of 1970.  
☒ 4. the 40th Constitutional Amendment Act of 1968

Question ID : 630680552817  
Option 1 ID : 6306802161365  
Option 2 ID : 6306802161364  
Option 3 ID : 6306802161363  
Option 4 ID : 6306802161362  
Status : Answered  
Chosen Option : 2

Q.3 Consider the following statements:

- A) Judicial decisions are bound by precedent in common law, whereas quasi-judicial decisions are generally not.
- B) Judicial decisions may create new laws, but quasi-judicial decisions are based on existing law.

Ans ☒ 1. Neither A nor B is true  
☒ 2. Only A is true  
☒ 3. Both A and B is true  
☒ 4. Only B is true

Question ID : 630680552818  
Option 1 ID : 6306802161369  
Option 2 ID : 6306802161366  
Option 3 ID : 6306802161368  
Option 4 ID : 6306802161367  
Status : Answered  
Chosen Option : 2

Q.4 Consider the following statements:

- 1.The Bhagavad Gita is part of the Mahabharata and is a dialogue between Krishna and Arjuna.
  - 2.Shankaracharya is associated with the Advaita Vedanta school of Hindu philosophy.
  - 3.The Rigveda is the oldest of the Vedas and contains hymns dedicated to various deities.
  - 4.The Natya Shastra, attributed to sage Bharata, is an ancient Indian treatise on the performing arts and is closely related to the expression of Hindu spirituality.
- Which of the statements above is/are correct?

- Ans    ☒ 1. 1, 2, 3, and 4
- ☒ 2. 2, 3, and 4 only
- ☒ 3. 1, 3, and 4 only
- ☒ 4. 1, 2, and 4 only

Question ID : 630680552832  
Option 1 ID : 6306802161425  
Option 2 ID : 6306802161424  
Option 3 ID : 6306802161423  
Option 4 ID : 6306802161422  
Status : Answered  
Chosen Option : 1

Q.5 Mamluk Dynasty was ended by which of the following rulers?

- Ans    ☒ 1. Jalal-ud-din Firuz Khilji
- ☒ 2. Timur
- ☒ 3. Qutb-ud-din Aibak
- ☒ 4. Ghiyas-ud-din Tughluq

Question ID : 630680552809  
Option 1 ID : 6306802161331  
Option 2 ID : 6306802161332  
Option 3 ID : 6306802161333  
Option 4 ID : 6306802161330  
Status : Answered  
Chosen Option : 2

Q.6 Consider the following statements:

- 1.The Tehri Dam, located on the Bhagirathi River in Uttarakhand, is the highest dam in India.
  - 2.The Kakrapar Atomic Power Plant is situated in Tapi, Gujarat.
  - 3.The Narora Atomic Power Station, situated in Uttar Pradesh, is a major contributor to India's nuclear energy production.
- Which of the statements above is/are correct?

- Ans    ☒ 1. 1 and 3 only
- ☒ 2. 1,2 and 3
- ☒ 3. 1 and 2 only
- ☒ 4. 2 and 3 only

Question ID : 630680552834  
Option 1 ID : 6306802161432  
Option 2 ID : 6306802161433  
Option 3 ID : 6306802161430  
Option 4 ID : 6306802161431  
Status : Answered  
Chosen Option : 2

Q.7 The literacy rate of males in India as per 2011 census is around\_\_\_\_\_.

- Ans ☒ 1. 79%  
☒ 2. 74%  
☒ 3. 82%  
☒ 4. 76%

Question ID : 630680552814  
Option 1 ID : 6306802161352  
Option 2 ID : 6306802161350  
Option 3 ID : 6306802161353  
Option 4 ID : 6306802161351  
Status : Answered  
Chosen Option : 3

Q.8 Ullambana is the festival of which of the following religion?

- Ans ☒ 1. Hinduism  
☒ 2. Buddhism  
☒ 3. Sikhism  
☒ 4. Jainism

Question ID : 630680552811  
Option 1 ID : 6306802161338  
Option 2 ID : 6306802161339  
Option 3 ID : 6306802161340  
Option 4 ID : 6306802161341  
Status : Answered  
Chosen Option : 4

Q.9 Consider the following statements:

- 1.The Constitution (74th Amendment) Act, 1992 provides for the constitution of Wards Committees.
  - 2.The Twelfth Schedule of the Constitution lists the powers, authority, and responsibilities of Municipalities.
  - 3.Urban Local Governments in India include Municipal Corporations, Municipal Councils, and Nagar Panchayats depending on the size of the population.
- Which of the above statements are correct?

- Ans ☒ 1. 1 and 3 only  
☒ 2. 2 and 3 only  
☒ 3. 1 and 2 only  
☒ 4. 1, 2 and 3

Question ID : 630680552838  
Option 1 ID : 6306802161447  
Option 2 ID : 6306802161448  
Option 3 ID : 6306802161446  
Option 4 ID : 6306802161449  
Status : Answered  
Chosen Option : 4



Q.10 Who among the following was the minister who helped King Ashoka acquire the throne?

- Ans
- ☐ 1. Susima
  - ☐ 2. Bhadrayudha
  - ☐ 3. Samudra
  - ☒ 4. Radhagupta

Question ID : 630680552810  
Option 1 ID : 6306802161334  
Option 2 ID : 6306802161335  
Option 3 ID : 6306802161337  
Option 4 ID : 6306802161336  
Status : Answered  
Chosen Option : 2

Q.11 Consider the following statements:

- 1.The Prime Minister of India must be a member of the Lok Sabha or the Rajya Sabha.
  - 2.The President of India has the power to grant pardons, reprieves, respites, or remissions of punishment under Article 73 of the Indian Constitution.
  - 3.The Vice-President of India is ex officio Chairman of the Lok Sabha.
  - 4.The Governor of a state in India is appointed by the President and holds office during the pleasure of the President.
- Which of the statements above is/are correct?

- Ans
- ☐ 1. 2 only
  - ☒ 2. 1 and 4 only
  - ☐ 3. 1 only
  - ☐ 4. 3 and 4 only

Question ID : 630680552837  
Option 1 ID : 6306802161443  
Option 2 ID : 6306802161444  
Option 3 ID : 6306802161442  
Option 4 ID : 6306802161445  
Status : Answered  
Chosen Option : 2

Q.12 Consider the following statements:

- 1.The Brahmaputra river is known as Tsangpo in its upper reaches in Tibet.
- 2.The Godavari river is often referred to as the Ganges of the South.
- 3.The Krishna river has the second-largest river basin in India, after the Ganges.
- 4.The Indus river originates from the Tibetan plateau, near Lake Mansarovar.

Which of the statements above is/are correct?

- Ans
- ☐ 1. 1, 2, and 3 only
  - ☐ 2. 2, 3, and 4 only
  - ☐ 3. 1, 3, and 4 only
  - ☒ 4. 1, 2, and 4 only

Question ID : 630680552833  
Option 1 ID : 6306802161429  
Option 2 ID : 6306802161428  
Option 3 ID : 6306802161427  
Option 4 ID : 6306802161426  
Status : Answered  
Chosen Option : 4

Q.13 Consider the following statements:

- 1.The HDI assesses a country's average accomplishment in three aspects: a long and healthy life, knowledge, and a decent standard of living.
  - 2.Kerala has consistently topped among Indian states in HDI rankings.
  - 3.According to the Human Development Report of 2021-22, India ranks 135 out of 191 countries, behind Bangladesh (129) and Sri Lanka (73).
- Which of the statements above is/are correct?

- Ans
- ☒ 1. 2 and 3 only
  - ☒ 2. 1, 2 and 3
  - ☒ 3. 1 and 2 only
  - ☒ 4. 1 and 3 only

Question ID : 630680552835  
Option 1 ID : 6306802161435  
Option 2 ID : 6306802161437  
Option 3 ID : 6306802161434  
Option 4 ID : 6306802161436  
Status : Answered  
Chosen Option : 2

Q.14 The height of the Dancing Girl figurine of Indus Valley Civilization is about \_\_\_\_\_.

- Ans
- ☒ 1. 83 cm
  - ☒ 2. 169 cm
  - ☒ 3. 11 cm
  - ☒ 4. 111 cm

Question ID : 630680552812  
Option 1 ID : 6306802161343  
Option 2 ID : 6306802161344  
Option 3 ID : 6306802161342  
Option 4 ID : 6306802161345  
Status : Answered  
Chosen Option : 3

Q.15 Consider the following statements:

- 1.The Eighth Schedule of the Indian Constitution lists 22 languages recognized as scheduled languages of India.
  - 2.Sanskrit is the liturgical language of Hinduism, Buddhism, and Jainism, and is one of the 22 languages listed in the Eighth Schedule.
  - 3.Konkani, spoken in the Western coastal regions of India, was added to the Eighth Schedule in the 71st amendment of the Constitution.
- Which of the statements above is/are correct?

- Ans
- ☒ 1. 1 and 2 only
  - ☒ 2. 1 only
  - ☒ 3. 2 and 3 only
  - ☒ 4. 1, 2, and 3

Question ID : 630680552831  
Option 1 ID : 6306802161419  
Option 2 ID : 6306802161418  
Option 3 ID : 6306802161420  
Option 4 ID : 6306802161421  
Status : Answered  
Chosen Option : 4

Q.16 Consider the following statements:

- 1.HDI is a composite index that accounts for life expectancy at birth, mean years of schooling, expected years of schooling, and Gross National Income per capita.
  - 2.As per the UNDP report, India's HDI value saw a decline during the COVID-19 pandemic.
  - 3.The HDI for India's female population has been historically lower than that for the male population.
  - 4.The Inequality-adjusted Human Development Index (IHDI) considers inequality in the distribution of each dimension across the population.
- Which of the statements above is/are correct?

- Ans ☒ 1. 1, 2, and 4 only
- ☒ 2. 1, 2, 3 and 4
- ☒ 3. 1, 3, and 4 only
- ☒ 4. 2, 3, and 4 only

Question ID : 630680552836  
Option 1 ID : 6306802161438  
Option 2 ID : 6306802161441  
Option 3 ID : 6306802161439  
Option 4 ID : 6306802161440  
Status : Answered  
Chosen Option : 1

Q.17 Which of the following rivers are east flowing rivers?

- A) Godavari
- B) Tapi
- C) Krishna
- D) Narmada

- Ans ☒ 1. A, B, C only
- ☒ 2. A, C only
- ☒ 3. B, C, D only
- ☒ 4. A,B only

Question ID : 630680552813  
Option 1 ID : 6306802161346  
Option 2 ID : 6306802161347  
Option 3 ID : 6306802161348  
Option 4 ID : 6306802161349  
Status : Answered  
Chosen Option : 2

Q.18 Net Indirect Taxes are included in \_\_\_\_\_.

- Ans ☒ 1. Personal Taxes
- ☒ 2. Personal Disposable Income
- ☒ 3. Net Current Transfers
- ☒ 4. National Disposable Income

Question ID : 630680552815  
Option 1 ID : 6306802161357  
Option 2 ID : 6306802161356  
Option 3 ID : 6306802161355  
Option 4 ID : 6306802161354  
Status : Answered  
Chosen Option : 1



Q.19 Consider the following statements:

1. The Vijayanagara Empire was established by Harihara-I and Bukka Raya-I.
  2. Krishnadevaraya, the greatest ruler of the Vijayanagara Empire, belonged to the Tuluva dynasty.
  3. The Battle of Talikota led to the decline of the Chola Empire.
- Which of the statements above is/are correct?

Ans ☒ 1. 1 and 2 only

☐ 2. 1, 2, and 3

☐ 3. 2 and 3 only

☐ 4. 1 and 3 only

Question ID : 630680552830

Option 1 ID : 6306802161414

Option 2 ID : 6306802161417

Option 3 ID : 6306802161415

Option 4 ID : 6306802161416

Status : Answered

Chosen Option : 2

Q.20 Consider the following statements:

- 1)The Indian National Congress was formed in 1885 with A.O. Hume as its first president.
  - 2)The Muslim League was founded in 1906 and proposed the idea of separate electorates for Muslims with the Lucknow Pact.
  - 3)The All India Kisan Sabha was established in Lucknow in 1936 to address the issues of the peasantry.
  - 4)The Ghadar Party was an international political movement founded by Punjabi Indians in the United States and Canada with the aim of liberating India from British rule.
- Which of the above statements are correct?

Ans ☐ 1. 1, 3, and 4

☒ 2. 2, 3, and 4

☐ 3. 1, 2, and 4

☐ 4. 1, 2, and 3

Question ID : 630680552829

Option 1 ID : 6306802161412

Option 2 ID : 6306802161411

Option 3 ID : 6306802161410

Option 4 ID : 6306802161413

Status : Answered

Chosen Option : 3

Section : Numerical Aptitude

**Q.1** Janaki leaves her home every day at 7:55 a.m and reaches office at 9: 25 a.m. However, one day she left her home at 7:55 a.m. but reached office at 09:20:30 a.m.

Which of the statements below support the information provided above?

Statement 1: Janaki travelled  $\frac{3}{10}$  of the distance at  $\frac{6}{7}$  of her usual speed and the rest of the distance at  $\frac{7}{6}$  of her usual speed.

Statement 2: Janaki travelled  $\frac{5}{9}$  of the distance at  $\frac{5}{4}$  of her usual speed and the rest of the distance at  $\frac{5}{6}$  of her usual speed.

Statement 3: Janaki travelled  $\frac{7}{9}$  of the distance at  $\frac{5}{6}$  of her usual speed and the rest of the distance at  $\frac{20}{3}$  of her usual speed.

**Ans**  1.

Each of Statements 1 and 3 supports the information provided, but Statement 2 doesn't.

 2.

Each of Statements 2 and 3 supports the information provided, but Statement 1 doesn't.

 3.

Each of Statements 1 and 2 supports the information provided, but Statement 3 doesn't.

 4.

None of the three statements supports the information provided.

Question ID : 630680552796

Option 1 ID : 6306802161279

Option 2 ID : 6306802161280

Option 3 ID : 6306802161278

Option 4 ID : 6306802161281

Status : Not Answered

Chosen Option : --

**Q.2** In the last financial year the ratio of the monthly incomes of Viraj and Rohan was  $m : n$  and the ratio of their monthly expenditures was  $p : n$ . In the current financial year Viraj's income has increased by  $q\%$  and his expenditure has gone up by  $2q\%$ . The corresponding increases for Rohan have been  $r\%$  and  $s\%$  respectively. The current monthly savings of Viraj and Rohan are respectively Rs  $u$  and Rs  $v$ , while the monthly savings of Rohan last year was Rs  $t$ .

Which one of the following is correct in respect of the Question and the Statements given below?

Statement 1: The values of  $m, n, p, q, r, s, t, u,$  and  $v$  are given respectively as 8, 5, 4, 12.5, 40, 20, 10000, 58000, and 24000.

Statement 2: The values of  $m, n, p, q, r, s, t, u,$  and  $v$  are given respectively as 10, 7, 6, 15, 40, 20, 7700, 21530, and 14140.

**Ans**  1.

Only statement 2 has values of the variables that are consistent with one another.

 2.

Only statement 1 has values of the variables that are consistent with one another.

 3.

Neither of the two statements has values of the variables that are consistent with one another.

 4.

Both statements have values of the variables that are consistent with one another.

Question ID : 630680552791

Option 1 ID : 6306802161259

Option 2 ID : 6306802161258

Option 3 ID : 6306802161261

Option 4 ID : 6306802161260

Status : Not Answered

Chosen Option : --

**Q.3** A train travels at a speed of 72.6 km/hr. How many kilometres will it travel in 15 minutes?

- Ans**
- ☒ 1. 13.12 km
  - ☒ 2. 16.22 km
  - ☒ 3. 20.5 km
  - ☒ 4. 18.15 km

Question ID : 630680552776  
Option 1 ID : 6306802161199  
Option 2 ID : 6306802161200  
Option 3 ID : 6306802161201  
Option 4 ID : 6306802161198  
Status : Answered  
Chosen Option : 4

**Q.4** From a cask filled with wine, 108.75 litres are first drawn and replaced with water. From this mixture 87 litres are drawn and replaced with water. The ratio of wine to water in the cask is now 3 : 2. How many litres of wine did the cask initially hold?

- Ans**
- ☒ 1. 522
  - ☒ 2. 348
  - ☒ 3. 470
  - ☒ 4. 435

Question ID : 630680552788  
Option 1 ID : 6306802161246  
Option 2 ID : 6306802161248  
Option 3 ID : 6306802161249  
Option 4 ID : 6306802161247  
Status : Answered  
Chosen Option : 3

**Q.5** What would be the annual interest accrued on a deposit of ₹24,550 in a bank that pays a 22% per annum rate of simple interest?

- Ans**
- ☒ 1. ₹6320
  - ☒ 2. ₹5401
  - ☒ 3. ₹5560
  - ☒ 4. ₹4760

Question ID : 630680552769  
Option 1 ID : 6306802161171  
Option 2 ID : 6306802161170  
Option 3 ID : 6306802161172  
Option 4 ID : 6306802161173  
Status : Answered  
Chosen Option : 2



**Q.6** The cost price of 28 articles is the same as the selling price of  $x$  articles. If the profit is 40%, then find the value of  $x$ .

- Ans**
- ☒ 1. 14
  - ☒ 2. 20
  - ☒ 3. 15
  - ☒ 4. 16

Question ID : 630680552774

Option 1 ID : 6306802161190

Option 2 ID : 6306802161193

Option 3 ID : 6306802161191

Option 4 ID : 6306802161192

Status : Answered

Chosen Option : 2

**Q.7** How many pairs of natural numbers  $(x, y)$  exist such that  $x > y$  and the product of  $x, y$  and HCF  $(x, y) = 2520$ ?

- Ans**
- ☒ 1. 3
  - ☒ 2. 4
  - ☒ 3. 5
  - ☒ 4. 6

Question ID : 630680552790

Option 1 ID : 6306802161256

Option 2 ID : 6306802161257

Option 3 ID : 6306802161255

Option 4 ID : 6306802161254

Status : Not Answered

Chosen Option : --

**Q.8** The average age of a group of 10 friends is 27 years. If one friend leaves the group, the average becomes 25 years. Find the age of the friend who left the group.

- Ans**
- ☒ 1. 45 years
  - ☒ 2. 50 years
  - ☒ 3. 55 years
  - ☒ 4. 65 years

Question ID : 630680552768

Option 1 ID : 6306802161167

Option 2 ID : 6306802161169

Option 3 ID : 6306802161168

Option 4 ID : 6306802161166

Status : Answered

Chosen Option : 1



**Q.9** If the numerator of a fraction is increased by 25% and the denominator is decreased by 10%, the value of the new fraction becomes  $\frac{25}{24}$ . Find the original fraction.

- Ans
- ☐ 1.  $2 : 3$
  - ☐ 2.  $4 : 3$
  - ☐ 3.  $3 : 2$
  - ☒ 4.  $3 : 4$

Question ID : 630680552773  
Option 1 ID : 6306802161186  
Option 2 ID : 6306802161188  
Option 3 ID : 6306802161189  
Option 4 ID : 6306802161187  
Status : Answered  
Chosen Option : 4

**Q.10** Find the HCF of 36, 108, and 156.

- Ans
- ☒ 1. 12
  - ☐ 2. 36
  - ☐ 3. 16
  - ☐ 4. 9

Question ID : 630680552771  
Option 1 ID : 6306802161178  
Option 2 ID : 6306802161179  
Option 3 ID : 6306802161181  
Option 4 ID : 6306802161180  
Status : Answered  
Chosen Option : 1

**Q.11** Which one of the following is correct in respect of the Statements given below?

Statement 1:  $2^{10}$  is the smallest natural number having exactly 11 factors.

Statement 2:  $2^{11}$  is the smallest natural number having exactly 12 factors.

Statement 3:  $2^{12}$  is the smallest natural number having exactly 13 factors.

- Ans
- ☐ 1. All the three statements given above are true.
  - ☐ 2. Statements 1 and 2 are true, but Statement 3 is false.
  - ☐ 3. None of the three statements (1, 2, 3) given is true.
  - ☒ 4. Statements 1 and 3 are true, but Statement 2 is false.

Question ID : 630680552789  
Option 1 ID : 6306802161250  
Option 2 ID : 6306802161251  
Option 3 ID : 6306802161253  
Option 4 ID : 6306802161252  
Status : Not Answered  
Chosen Option : --



**Q.12** If the interest is compounded half-yearly, calculate the amount when the principal is ₹4000, the rate of interest is 22% per annum and the duration is one year.

- Ans** ✓ 1. ₹4928.4  
✗ 2. ₹4288.8  
✗ 3. ₹4825.5  
✗ 4. ₹5204.9

Question ID : 630680552770  
Option 1 ID : 6306802161174  
Option 2 ID : 6306802161175  
Option 3 ID : 6306802161177  
Option 4 ID : 6306802161176  
Status : Answered  
Chosen Option : 1

**Q.13** Rohan purchased an item for which there was a 13.5% discount offered on the part of the payment made in cash and a 6.25% surcharge on the part of the payment made through a credit card. If Rohan would have paid the entire amount in cash he would have paid Rs y for the item. But he actually had to pay Rs 40964 in all for the item, out of which Rs 29064 was paid in cash. What is the value of y?

- Ans** ✗ 1. 32988  
✗ 2. 35700  
✗ 3. 38554  
✓ 4. 38752

Question ID : 630680552792  
Option 1 ID : 6306802161265  
Option 2 ID : 6306802161263  
Option 3 ID : 6306802161264  
Option 4 ID : 6306802161262  
Status : Not Answered  
Chosen Option : --

**Q.14** On a particular day each of Danny, Edwin and Fahim sold three types of pens from their respective shops. As a coincidence, each of them sold an identical number of pens of Type A, an identical number of pens of Type B and an identical number of pens of Type C. However, the numbers of pens of each type that were sold were all different from one another. Also, the three sellers sold each of the types of pens at different prices per unit.

Assertion (A): It is possible that Danny sold each pen of Type A at a profit of Rs 2, each pen of Type B at a loss of Re 1, and each pen of Type C at a loss of Rs 12 and made an overall profit of Rs 8; Edwin sold each pen of Type A at a profit of Rs 2, each pen of Type B at a loss of Rs 6, and each pen of Type C at a loss of Rs 6 and made an overall profit of Rs 14; and Fahim sold each pen of Type A at a profit of Re 1, each pen of Type B at a profit of Re 1, and each pen of Type C at a loss of Rs 3 and made an overall profit of Rs 27.

Reason (R): Framing and solving the three possible linear equations we will find that we get a unique solution.

- Ans** ✗ 1. Assertion (A) is true and Reason (R) is false.  
✗ 2. Both Assertion (A) and Reason (R) are true but Reason (R) is not a correct explanation of Assertion (A).  
✗ 3. Both Assertion (A) and Reason (R) are true and Reason (R) is a correct explanation of Assertion (A).  
✓ 4. Assertion (A) is false and Reason (R) is true.

Question ID : 630680552797  
Option 1 ID : 6306802161284  
Option 2 ID : 6306802161283  
Option 3 ID : 6306802161282  
Option 4 ID : 6306802161285  
Status : Not Answered  
Chosen Option : --

**Q.15** A shop sells only steamed momos and fried momos. On a particular day the ratio of the numbers of steamed momos and fried momos sold from that shop was 5 : 4. How many steamed momos were sold from the shop on that day?

Which one of the following is correct in respect of the Question and the Statements given below?

Statement 1: If the number of steamed momos were to double, the ratio of the numbers of steamed momos and fried momos sold from that shop would become 5 : 2.

Statement 2: If the number of fried momos sold was at least 13 more while the number of steamed momos sold stayed the same, then the number of fried momos sold would have been more than the number of steamed momos sold.

Ans ☒ 1.

The data in Statement 2 alone are sufficient answer the question.

☒ 2.

The data in Statement 1 and Statement 2 both taken together are not sufficient to answer the question.

☒ 3.

The data either in Statement 1 alone or in Statement 2 alone are sufficient to answer the question.

☒ 4.

The data in Statement 1 alone are sufficient to answer the question.

Question ID : 630680552794

Option 1 ID : 6306802161271

Option 2 ID : 6306802161273

Option 3 ID : 6306802161272

Option 4 ID : 6306802161270

Status : Not Answered

Chosen Option : --

**Q.16** X's income is 44% more than that of Y. What percent is Y's income less than X's?

Ans ☒ 1. 32.5%

☒ 2. 33%

☒ 3. 30.5%

☒ 4. 20.4%

Question ID : 630680552772

Option 1 ID : 6306802161183

Option 2 ID : 6306802161185

Option 3 ID : 6306802161182

Option 4 ID : 6306802161184

Status : Answered

Chosen Option : 3

**Q.17** If  $a^3 - b^3 = 602$  and  $a - b = 2$ , then find the value of  $(a^2 + b^2)$ .

Ans ☒ 1. 202

☒ 2. 156

☒ 3. 260

☒ 4. 240

Question ID : 630680552777

Option 1 ID : 6306802161203

Option 2 ID : 6306802161202

Option 3 ID : 6306802161204

Option 4 ID : 6306802161205

Status : Answered

Chosen Option : 1



**Q.18** The team of A, B, and C was supposed to complete a piece of work. Working alone, A could have completed the same work in 190 hours, B could have completed the same work in 285 hours, while C could have completed it in 342 hours. The trio decided that only one of the three would work at any point of time. In the first cycle of three days A worked for two hours on Day 1, B worked for two hours on Day 2, and C worked for two hours on Day 3. In the second cycle of three days A worked for four hours on Day 1, B worked for four hours on Day 2, and C worked for four hours on Day 3. In the third cycle of three days A worked for six hours on Day 1, B worked for six hours on Day 2, and C worked for six hours on Day 3. This continued till the piece of work was completed, with each working for  $2n$  hours in Cycle  $n$ , the sole exception being made, if necessary, in the last cycle, as the work may get completed mid-cycle. What was the total number of days needed for the work to be completed?

- Ans**
- ✓ 1. 26
  - ✗ 2. 25.5
  - ✗ 3. 26.4
  - ✗ 4. 25.8

Question ID : 630680552795  
 Option 1 ID : 6306802161276  
 Option 2 ID : 6306802161274  
 Option 3 ID : 6306802161277  
 Option 4 ID : 6306802161275  
 Status : Not Answered  
 Chosen Option : --

**Q.19** Three natural numbers are such that one-third of the first number is equal to two-fifths of the second, and two-thirds of the second number is equal to one-seventh of the third. The sum of five times the third number and half of the square of the first number is 1348. What is the value of the second number?

- Ans**
- ✗ 1. 24
  - ✓ 2. 30
  - ✗ 3. 15
  - ✗ 4. 21

Question ID : 630680552793  
 Option 1 ID : 6306802161269  
 Option 2 ID : 6306802161267  
 Option 3 ID : 6306802161266  
 Option 4 ID : 6306802161268  
 Status : Answered  
 Chosen Option : 2

**Q.20** If 22% of  $x$  is equal to 66% of  $y$ , then find the value of  $x : y$ .

- Ans**
- ✗ 1. 1 : 3
  - ✗ 2. 11 : 6
  - ✓ 3. 3 : 1
  - ✗ 4. 2 : 5

Question ID : 630680552775  
 Option 1 ID : 6306802161195  
 Option 2 ID : 6306802161197  
 Option 3 ID : 6306802161194  
 Option 4 ID : 6306802161196  
 Status : Answered  
 Chosen Option : 3

Q.1 In a class Pratik ranks 22nd from top and 27th from bottom, how many students are there in that class?

- Ans ☒ 1. 48
- ☐ 2. 30
- ☐ 3. 37
- ☐ 4. 44

Question ID : 630680552727  
Option 1 ID : 6306802161003  
Option 2 ID : 6306802161005  
Option 3 ID : 6306802161002  
Option 4 ID : 6306802161004  
Status : Answered  
Chosen Option : 1

Q.2 Select the correct mirror image of the given figure when the mirror is placed at MN as shown below.

g Y 5 p m S 4

M

N

- Ans ☐ 1. 4 2 m d 5 Y p
- ☒ 2. 4 2 m q 2 Y p
- ☐ 3. 4 2 m q 2 7 6
- ☐ 4. 7 S m q 2 Y p

Question ID : 630680552755  
Option 1 ID : 6306802161116  
Option 2 ID : 6306802161117  
Option 3 ID : 6306802161114  
Option 4 ID : 6306802161115  
Status : Answered  
Chosen Option : 2

Q.3 Four words have been given, out of which three are alike in some manner and one is different. Select the odd word.

- Ans ☐ 1. Yen
- ☐ 2. Euros
- ☒ 3. Beijing
- ☐ 4. Yuan

Question ID : 630680552731  
Option 1 ID : 6306802161019  
Option 2 ID : 6306802161018  
Option 3 ID : 6306802161021  
Option 4 ID : 6306802161020  
Status : Answered  
Chosen Option : 3



Q.4 Select the wrong term in the following number series:

458, 230, 116, 60, 30.5

Ans ☒ 1. 60

☐ 2. 30.5

☐ 3. 230

☐ 4. 116

Question ID : 630680552735

Option 1 ID : 6306802161035

Option 2 ID : 6306802161034

Option 3 ID : 6306802161036

Option 4 ID : 6306802161037

Status : Answered

Chosen Option : 1

Q.5 Six girls named A, B, C, D, E and F are sitting in a straight line, all facing north. Each one of them has different profession from amongst lawyer, doctor, chef, clerk, teacher and engineer. B is second to the left of D. C is third to the right of D. Only doctor is sitting between clerk and chef. Engineer is second to the left of lawyer. Clerk is sitting at one of the extreme ends. F is a teacher. C is a lawyer. E is not the immediate neighbour of F.

Which of the following is/are true based on the given arrangement?

I. E is an engineer.

II. The doctor is sitting at third place to the left of teacher.

III. Engineer is sitting to the immediate right of chef.

Ans ☐ 1. Only I and II are true

☒ 2. Only II and III are true

☐ 3. All I, II and III are true

☐ 4. Only I and III is true

Question ID : 630680552747

Option 1 ID : 6306802161083

Option 2 ID : 6306802161084

Option 3 ID : 6306802161085

Option 4 ID : 6306802161082

Status : Not Answered

Chosen Option : --

Q.6 In a university, 88 students had taken Mathematics courses, 90 students had taken Hindi courses, 64 students had taken Biology courses, 22 students had taken Mathematics and Biology, 28 students had taken Mathematics and Hindi, 24 students had taken Hindi and Biology courses, and 10 students had taken all three courses. Find how many students had taken mathematics courses only.

Ans ☐ 1. 44

☒ 2. 48

☐ 3. 50

☐ 4. 52

Question ID : 630680552730

Option 1 ID : 6306802161016

Option 2 ID : 6306802161017

Option 3 ID : 6306802161014

Option 4 ID : 6306802161015

Status : Answered

Chosen Option : 3



Q.7 Three Statements are given followed by two conclusions numbered I and II. Assuming the statements to be true, decide which of the conclusions logically follow(s) from the statements.

Statement I: Some Good are Bad.  
Statement II: Some Good are Nice.  
Statement III: Some Bad are Cute.

Conclusion I: Some Bad are not Cute.  
Conclusion II: Some Nice are good.

- Ans ☒ 1. Only conclusion I follows  
☒ 2. Neither conclusion I nor II follows  
☒ 3. Both conclusions I and II follow  
☒ 4. Only conclusion II follows

Question ID : 630680552729  
Option 1 ID : 6306802161010  
Option 2 ID : 6306802161013  
Option 3 ID : 6306802161012  
Option 4 ID : 6306802161011  
Status : Answered  
Chosen Option : 4

Q.8 Three different positions of the same dice are given below. Find the number opposite of 37.



- Ans ☒ 1. 35  
☒ 2. 33  
☒ 3. 39  
☒ 4. 22

Question ID : 630680552734  
Option 1 ID : 6306802161031  
Option 2 ID : 6306802161030  
Option 3 ID : 6306802161032  
Option 4 ID : 6306802161033  
Status : Answered  
Chosen Option : 2

Q.9 Select the set in which the numbers are related in the same way as are the numbers of the following sets.

(NOTE : Operations should be performed on the whole numbers, without breaking down the numbers into its constituent digits. E.g. 13 – Operations on 13 such as adding /subtracting /multiplying etc. to 13 can be performed. Breaking down 13 into 1 and 3 and then performing mathematical operations on 1 and 3 is not allowed)  
(24, 12, 169)  
(66, 14, 263)

- Ans ☒ 1. (25, 11, 127)  
☒ 2. (47, 15, 273)  
☒ 3. (61, 13, 211)  
☒ 4. (21, 17, 210)

Question ID : 630680552756  
Option 1 ID : 6306802161118  
Option 2 ID : 6306802161119  
Option 3 ID : 6306802161121  
Option 4 ID : 6306802161120  
Status : Not Answered  
Chosen Option : --

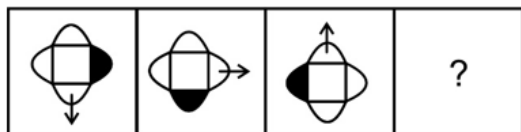
Q.10 Read the following information carefully and answer the question that follows. You must assume everything in the statement to be true and decide which of the conclusion/s logically follow/s.

Infant jaundice is yellow discoloration of newborn baby's skin and eyes which occurs because the baby's blood contains an excess of a yellow pigment called bilirubin. Infant jaundice usually occurs because a baby's liver isn't mature enough to get rid of bilirubin in the bloodstream.  
Which of the following can be concluded from the given information?  
A. In some newborn babies suffering from jaundice, the liver is not fully developed which causes excess bilirubin in the blood.  
B. The function of liver is also to remove excess bilirubin from the blood.  
C. Excess bilirubin is undesirable for infants only. For adults, bilirubin is necessary for survival.  
D. The colour of an infant's skin and eyes is usually yellowish in colour.

- Ans ☒ 1. Only A and D  
☒ 2. Only B, C and D  
☒ 3. Only B  
☒ 4. Only A, B and C

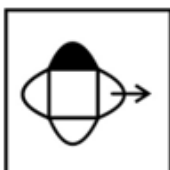
Question ID : 630680552753  
Option 1 ID : 6306802161109  
Option 2 ID : 6306802161108  
Option 3 ID : 6306802161107  
Option 4 ID : 6306802161106  
Status : Not Answered  
Chosen Option : --

Q.11 Select the figure that will replace the question mark (?) in the following figure series.

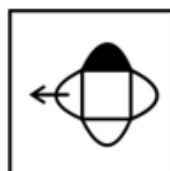


Ans

✗ 1.



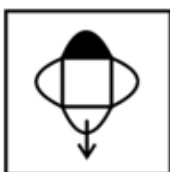
✓ 2.



✗ 3.



✗ 4.



Question ID : 630680552733  
 Option 1 ID : 6306802161027  
 Option 2 ID : 6306802161028  
 Option 3 ID : 6306802161029  
 Option 4 ID : 6306802161026

Status : Answered

Chosen Option : 2

Q.12 If A denotes 'addition', B denotes 'multiplication', C denotes 'subtraction', and D denotes 'division', then what will be the value of the following equation?

15 A 10 B 24 D 12 C 5 = ?

Ans

✗ 1. 5

✗ 2. 6

✗ 3. 10

✓ 4. 30

Question ID : 630680552736  
 Option 1 ID : 6306802161040  
 Option 2 ID : 6306802161041  
 Option 3 ID : 6306802161038  
 Option 4 ID : 6306802161039

Status : Answered

Chosen Option : 4



Q.13 Select the incorrect term in the alpha-numeric series:

X, Z, B, D, F, G

- Ans ☒ 1. X  
☒ 2. D  
☒ 3. Z  
☒ 4. G

Question ID : 630680552732  
Option 1 ID : 6306802161025  
Option 2 ID : 6306802161022  
Option 3 ID : 6306802161024  
Option 4 ID : 6306802161023  
Status : Answered  
Chosen Option : 4

Q.14 'A + B' means 'A is the sister of B'  
'A = B' means 'A is the daughter of B'  
'A # B' means 'A is the son of B'  
'A & B' means 'A is the father of B'

Based on the above information, find out which of the given statements can be the reason/s behind the assertion made below if it is given that 'H & N + Y = K = C'.

Assertion: H is U's sister's husband?

Reason A : D & U

Reason B : U # C

- Ans ☒ 1. Only A is the reason behind the assertion  
☒ 2. Only B is the reason behind the assertion  
☒ 3. Both A and B are reasons behind the assertion  
☒ 4. Neither A nor B is the reason behind the assertion

Question ID : 630680552750  
Option 1 ID : 6306802161095  
Option 2 ID : 6306802161096  
Option 3 ID : 6306802161094  
Option 4 ID : 6306802161097  
Status : Not Answered  
Chosen Option : --

Q.15 In a certain code language, 'PLOT' is written as '63', and 'SOUP' is written as '71'. Which of the following are correct matches as per the given code language?

WORD	CODE
(i) LIKE	(W) 56
(ii) DOSE	(X) 37
(iii) MINT	(Y) 53

- Ans ☒ 1. i-Y, ii-W only  
☒ 2. i-X , iii-W only  
☒ 3. i-X , ii-Y, iii-W only  
☒ 4. i-X , ii-W only

Question ID : 630680552749  
Option 1 ID : 6306802161092  
Option 2 ID : 6306802161091  
Option 3 ID : 6306802161093  
Option 4 ID : 6306802161090  
Status : Answered  
Chosen Option : 2

Q.16 Arrange the words in a meaningful logical order and select the appropriate sequence :

1. Dhanbad
2. India
3. World
4. Jharkhand
5. Universe

Ans ☒ 1. 42153  
☒ 2. 14253  
☒ 3. 53421  
☒ 4. 14235

Question ID : 630680552728

Option 1 ID : 6306802161007

Option 2 ID : 6306802161006

Option 3 ID : 6306802161009

Option 4 ID : 6306802161008

Status : Answered

Chosen Option : 4

Q.17 In a class, six students named P, Q, R, S, T and U obtain different marks out of total 100 marks. The ratio between marks of T and S is 2: 3 respectively. P obtains 50% marks. R obtains 5 marks less than P. U obtains 1.5 times of the marks obtained by P. T obtains less marks U but more marks than R. Q obtains 20 marks more than T. The ratio between marks of T and U is 4: 5 respectively.

Which of the following is true based on the given information?

I. S obtains 90% marks which are the highest among all.

II. The ratio between marks of P and Q is 5: 8 respectively.

Ans ☒ 1. Only II  
☒ 2. Only I  
☒ 3. Neither I nor II  
☒ 4. Both I and II

Question ID : 630680552748

Option 1 ID : 6306802161087

Option 2 ID : 6306802161086

Option 3 ID : 6306802161089

Option 4 ID : 6306802161088

Status : Not Answered

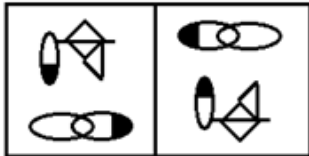
Chosen Option : --



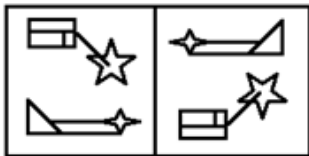
Q.18 Three of the following four figure pairs are alike in a certain way and thus form a group. Which is the one that does not belong to that group?

Ans

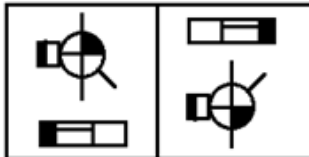
✗ 1.



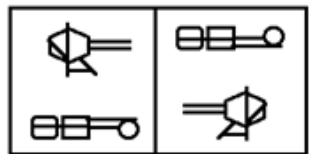
✗ 2.



✗ 3.



✓ 4.



Question ID : 630680552754

Option 1 ID : 6306802161112

Option 2 ID : 6306802161111

Option 3 ID : 6306802161110

Option 4 ID : 6306802161113

Status : Answered

Chosen Option : 4

Q.19 NAPTUNE is related to RCPGGPW in a certain way based on certain logic. In the same way, CURTAIN is related to TWEGPKC. Which of the following are correct matches following the same logic?

i. LOGICAL	(W) WQOMFGV
ii. MOUNTED	(X) KRPM PDG
iii. FIXTURE	(Y) TGDTCMP
iv. CERTAIN	(Z) ZKHGGTW

Ans ✗ 1. ii-W, iii-Z, iv-X only

✓ 2. ii-W, iii-Z only

✗ 3. ii-Z, iv-Y only

✗ 4. iii-Z only

Question ID : 630680552751

Option 1 ID : 6306802161101

Option 2 ID : 6306802161100

Option 3 ID : 6306802161099

Option 4 ID : 6306802161098

Status : Answered

Chosen Option : 2

**Q.20** A question is followed by two statements numbered (I) and (II). You have to decide whether the data provided in the statements are sufficient/necessary to answer the question. Read both the statements and decide the appropriate answer.

Question: If Kartik is the brother of Preeti, how is Kartik related to Amrita?

(I) Amrita is the daughter of Raghav, who is the son of Preeti's mother Seema.

(II) Seema is the wife of Prashant who is the paternal grandfather of Amrita.

- Ans ☒ 1. Data in Statement II alone is sufficient to answer the question while data in statement I is not
- ☒ 2. Data in Statement I alone is sufficient to answer the question while data in statement II is not
- ☒ 3. Data in statements I and II together are necessary to answer the question.
- ☒ 4. Data in statements I and II together are NOT sufficient to answer the question

Question ID : 630680552752  
Option 1 ID : 6306802161103  
Option 2 ID : 6306802161102  
Option 3 ID : 6306802161104  
Option 4 ID : 6306802161105  
Status : Answered  
Chosen Option : 2

Section : English

**Q.1** The sentence below has been divided into three parts. Select the part of the sentence that has an error. If the sentence has no error, select the option 'No Error'.

I don't know the reason why he/ has said all this yet it/ puts him in a bad light.

- Ans ☒ 1. has said all this yet it
- ☒ 2. No error
- ☒ 3. puts him in a bad light.
- ☒ 4. I don't know the reason why he

Question ID : 630680552569  
Option 1 ID : 6306802160371  
Option 2 ID : 6306802160373  
Option 3 ID : 6306802160372  
Option 4 ID : 6306802160370  
Status : Answered  
Chosen Option : 4

**Q.2** Arrange the given sentences (1-6) in the correct order to form a coherent paragraph.

1. They had escaped the dark world and were enveloped in a dazzling white light which almost blinded them.
2. The fountain of immortality sprung before them from which they collected the elixir in a large conch shell.
3. The next moment, the boys found themselves floating over misty clouds.
4. They gave him some elixir from the shell and he immediately acquired an ethereal form.
5. It was then that they saw the Formless One before them.
6. There was bliss and tranquillity around them.

- Ans ☒ 1. 614523
- ☒ 2. 316254
- ☒ 3. 352146
- ☒ 4. 512346

Question ID : 630680552584  
Option 1 ID : 6306802160430  
Option 2 ID : 6306802160431  
Option 3 ID : 6306802160432  
Option 4 ID : 6306802160433  
Status : Answered  
Chosen Option : 2



Q.3 Which of the following statements correctly use the idiom 'pour oil on troubled waters' by substituting the underlined words?

- A. If you unnecessarily interfere in others' affairs, you will suffer yourselves.
- B. Fed up with frequent strikes, the management decided to deal with the situation decisively.
- C. The government ordered a judicial enquiry into the communal riots in a bid to pacify the situation.
- D. From his behaviour it is obvious that someone has prejudiced him against me.

- Ans
- ☒ 1. Only statement B correctly uses the idiom.
  - ☒ 2. Only statement C correctly uses the idiom.
  - ☒ 3. Both statements A and C correctly use the idiom.
  - ☒ 4. Both statements B and D correctly use the idiom.

Question ID : 630680552591  
Option 1 ID : 6306802160460  
Option 2 ID : 6306802160461  
Option 3 ID : 6306802160458  
Option 4 ID : 6306802160459  
Status : Answered  
Chosen Option : 2

Q.4 Match the following groups of words with the correct one-word substitutions.

phrase	one-word substitution
A. an annual calendar that contains important dates and time	1. connoisseur
B. one who is a critical judge of any art	2. almanac
C. one who does not appreciate art, literature or music	3. utopia
D. an ideally perfect state	4. philistine

- Ans
- ☒ 1. A-2,B-1,C-4,D-3
  - ☒ 2. A-3,B-4,C-1,D-2
  - ☒ 3. A-2,B-4,C-1,D-3
  - ☒ 4. A-4,B-2,C-3,D-1

Question ID : 630680552585  
Option 1 ID : 6306802160437  
Option 2 ID : 6306802160434  
Option 3 ID : 6306802160435  
Option 4 ID : 6306802160436  
Status : Answered  
Chosen Option : 1

Q.5 Select the most appropriate meaning of the given proverb from the options

Better late than never

- Ans
- ☒ 1. It's good to be clean. God is clean, and you should be too
  - ☒ 2. It's better to finish something late than to never do it at all
  - ☒ 3. People who are similar spend time together
  - ☒ 4. Don't make someone angry or hurt someone who is helping you or paying for you

Question ID : 630680552564  
Option 1 ID : 6306802160352  
Option 2 ID : 6306802160350  
Option 3 ID : 6306802160351  
Option 4 ID : 6306802160353  
Status : Answered  
Chosen Option : 2

Q.6 Four sentences are given below. Find the odd sentence out.

- A. A new analysis has determined that the threat of global warming can still be greatly diminished if nations cut emissions of heat-trapping greenhouse gases by 70% this century.
- B. With research showing that additional warming of about 1 degree C may be the threshold for dangerous climate change, the European Union has called for dramatic cuts in emissions of carbon dioxide and other greenhouse gases.
- C. The most dangerous potential aspects of climate change include massive losses of Arctic sea ice and permafrost.
- D. "This research indicates that we can no longer avoid significant warming during this century," said NCAR scientist Warren Washington, the study paper's lead author.

Ans ☒ 1. Sentence A  
☒ 2. Sentence B  
☒ 3. Sentence C  
☒ 4. Sentence D

Question ID : 630680552583  
Option 1 ID : 6306802160426  
Option 2 ID : 6306802160427  
Option 3 ID : 6306802160428  
Option 4 ID : 6306802160429  
Status : Answered  
Chosen Option : 2

Q.7 Select the word that is opposite in meaning (ANTONYM) to the word given below.

Corpulent

Ans ☒ 1. Aerial  
☒ 2. Slim  
☒ 3. Anecdotalist  
☒ 4. Narrator

Question ID : 630680552565  
Option 1 ID : 6306802160355  
Option 2 ID : 6306802160354  
Option 3 ID : 6306802160357  
Option 4 ID : 6306802160356  
Status : Answered  
Chosen Option : 2

Q.8 The sentence below has been divided into three parts. Select the part of the sentence that has an error. If the sentence has no error, select the option 'No Error'.

He has been read through/ the archives to research/ his article on the town's history.

Ans ☒ 1. No error  
☒ 2. his article on the town's history.  
☒ 3. the archives to research  
☒ 4. He has been read through

Question ID : 630680552571  
Option 1 ID : 6306802160381  
Option 2 ID : 6306802160380  
Option 3 ID : 6306802160379  
Option 4 ID : 6306802160378  
Status : Answered  
Chosen Option : 4



Q.9 Match the following groups of words with the correct one-word substitutions.

phrase	one-word substitution
A. the act of looking into one's mind	1. hallucination
B. pleasure mixed with sadness at recalling happy moments in the past	2. reverie
C. a false perception of things that do not really exist	3. introspection
D. a state of absent-minded daydreaming	4. nostalgia

- Ans ☒ 1. A-4,B-2,C-3,D-1
- ☒ 2. A-2,B-1,C-4,D-3
- ☒ 3. A-3,B-4,C-1,D-2
- ☒ 4. A-3,B-2,C-4,D-1

Question ID : 630680552586  
Option 1 ID : 6306802160440  
Option 2 ID : 6306802160438  
Option 3 ID : 6306802160439  
Option 4 ID : 6306802160441  
Status : Answered  
Chosen Option : 4

Q.10 Select the correct conclusion based on the meaning of the underlined word:

Statement: The trade embargo has impacted export revenue.  
Conclusion:  
i. The new trade laws have exempted goods from duty.  
ii. Trading in certain goods has been temporarily stopped.  
iii. The government order has put restrictions on trade with some countries.  
iv. Exports have increased after signing of new trade treaties.

- Ans ☒ 1. options i and ii are correct
- ☒ 2. options i, ii and iv are correct
- ☒ 3. options ii and iii are correct
- ☒ 4. option i and iv are correct

Question ID : 630680552588  
Option 1 ID : 6306802160447  
Option 2 ID : 6306802160449  
Option 3 ID : 6306802160448  
Option 4 ID : 6306802160446  
Status : Answered  
Chosen Option : 3

Q.11 The sentence below has been divided into three parts. Select the part of the sentence that has an error. If the sentence has no error, select the option 'No Error'.

As noon approached, sunlight filtered/ through an branches, casting dappled/ patterns on the cobblestone path.

- Ans ☒ 1. patterns on the cobblestone path.
- ☒ 2. As noon approached, sunlight filtered
- ☒ 3. No error
- ☒ 4. through an branches, casting dappled

Question ID : 630680552568  
Option 1 ID : 6306802160368  
Option 2 ID : 6306802160366  
Option 3 ID : 6306802160369  
Option 4 ID : 6306802160367  
Status : Answered  
Chosen Option : 4

Q.12 Select the correct conclusion based on the meaning of the underlined word:

Statement: After his father's death, he became a prodigal of his fortune.

Conclusion:

- i. He gained wisdom and spent money cautiously.
- ii. Being the only heir, he inherited all his father's wealth.
- iii. He squandered his wealth recklessly and lost all he had.
- iv. He assumed the responsibility of increasing his father's fortune.

Ans ☒ 1. Both options ii and iii are correct

☒ 2. only option iv is correct

☒ 3. only option iii is correct

☒ 4. Both options ii and iv are correct

Question ID : 630680552587

Option 1 ID : 6306802160443

Option 2 ID : 6306802160444

Option 3 ID : 6306802160445

Option 4 ID : 6306802160442

Status : Answered

Chosen Option : 3

Q.13 Select the word that is closest in meaning (SYNONYM) to the word given below

Equivocal

Ans ☒ 1. Unanimous

☒ 2. Occlude

☒ 3. Obstruct

☒ 4. Ambiguous

Question ID : 630680552566

Option 1 ID : 6306802160359

Option 2 ID : 6306802160358

Option 3 ID : 6306802160360

Option 4 ID : 6306802160361

Status : Answered

Chosen Option : 1



Q.14 Some parts of a sentence have been jumbled up, and labelled P, Q, R and S. Select the option that gives the correct sequence in which these parts can be rearranged to form a meaningful and grammatically correct paragraph. Opening and Closing sentence indicate the start of the paragraph and end of the sentence paragraph.

Opening Sentence: Born on October 5, 1983, in Los Angeles, California, Emma Stone's journey in the entertainment industry began at a young age.

P. While attending local theatre classes, Stone discovered her passion for acting and soon started auditioning for various roles.

Q. Despite facing initial rejections, Stone's determination and talent eventually landed her a breakthrough role in the comedy "Superbad."

R. Stone's career skyrocketed as she garnered critical acclaim for her performances in movies like "The Help" and "La La Land," earning her an Academy Award for Best Actress.

S. Inspired by the likes of Meryl Streep, Stone continued honing her craft and exploring diverse roles, solidifying her status as one of Hollywood's leading actresses.

Closing Sentence: Today, Emma Stone stands as a respected figure in the film industry, celebrated for her versatility and contributions to the world of cinema.

- Ans
- ☒ 1. SRQP
  - ☒ 2. SPQR
  - ☒ 3. PQSR
  - ☒ 4. RQPS

Question ID : 630680552562  
Option 1 ID : 6306802160342  
Option 2 ID : 6306802160345  
Option 3 ID : 6306802160343  
Option 4 ID : 6306802160344  
Status : Answered  
Chosen Option : 3

Q.15 The sentence below has been divided into three parts. Select the part of the sentence that has an error. If the sentence has no error, select the option 'No Error'.

We will have to spend a few/ hours journeying down in a bus,/ which is bound to take its toll.

- Ans
- ☒ 1. hours journeying down in a bus,
  - ☒ 2. which is bound to take its toll.
  - ☒ 3. We will have to spend a few
  - ☒ 4. No error

Question ID : 630680552570  
Option 1 ID : 6306802160375  
Option 2 ID : 6306802160376  
Option 3 ID : 6306802160374  
Option 4 ID : 6306802160377  
Status : Answered  
Chosen Option : 1



Q.16 In the following passage there are blanks, each of which has been numbered. Select the correct option to fill in the blanks.

What draws India closer to an obscure and indifferent picture are the 1. \_\_\_\_\_ tribes. They own their personal identity, far from the 2. \_\_\_\_\_ trend and economic development, as Adivasis having their own language, religion, festivals, cuisine, dance and music. With such an 3. \_\_\_\_\_ culture and hospitality they also significantly hold a contrasting patriarchal and matriarchal society. The lively 4. \_\_\_\_\_ of the tribal community in India stretches from the remote villages tucked in the Indian Himalayan region to southern-most tip of India and from the farthest corner of North East India to the dunes of Rajasthan.

- Ans ☒ 1. 1- indigenous, 2- contemporary, 3- enigmatic, 4- tableau  
☒ 2. 1- original, 2- unique, 3- oppressive, 4- representation  
☒ 3. 1- obsolete, 2- modern, 3- enchanting, 4- presence  
☒ 4. 1- immigrant, 2- current, 3- alarming, 4- culture

Question ID : 630680552589  
Option 1 ID : 6306802160451  
Option 2 ID : 6306802160453  
Option 3 ID : 6306802160450  
Option 4 ID : 6306802160452  
Status : Answered  
Chosen Option : 1

Q.17 Select the word that is closest in meaning (SYNONYM) to the word given below

Aegis

- Ans ☒ 1. Aggravate  
☒ 2. Spread  
☒ 3. Intensify  
☒ 4. Protection

Question ID : 630680552567  
Option 1 ID : 6306802160365  
Option 2 ID : 6306802160362  
Option 3 ID : 6306802160364  
Option 4 ID : 6306802160363  
Status : Answered  
Chosen Option : 1

Q.18 Select the correct conclusion based on the meaning of the underlined idiom:

Statement: Splitting hairs is futile and will not resolve our problem.

Conclusion:

- i. A superficial investigation will suffice for the problem at hand.  
ii. Making peevish criticisms on trivial matters will not lead us anywhere.  
iii. A difference of opinion is not tolerated in a dictatorship.

- Ans ☒ 1. Only conclusion (i) is correct  
☒ 2. Both conclusion (ii) and (iii) are correct  
☒ 3. Only conclusion (ii) is correct  
☒ 4. Both conclusion (i) and (iii) are correct

Question ID : 630680552590  
Option 1 ID : 6306802160454  
Option 2 ID : 6306802160455  
Option 3 ID : 6306802160456  
Option 4 ID : 6306802160457  
Status : Answered  
Chosen Option : 1



Q.19 Select the most appropriate meaning of the given idiom

Go down like a lead balloon

- Ans ☒ 1. To be received badly by an audience
- ☐ 2. To surrender
- ☐ 3. To gamble everything you have
- ☐ 4. Put yourself in a tough position in order to support someone/ something

Question ID : 630680552563  
Option 1 ID : 6306802160346  
Option 2 ID : 6306802160349  
Option 3 ID : 6306802160347  
Option 4 ID : 6306802160348

Status : Answered

Chosen Option : 1

Q.20 There is a sentence that is missing in the paragraph below. Look at the paragraph and decide in which blank (1, 2, 3, or 4) the following sentence would best fit.

Sentence: On the other hand, we find persons engaged in worst types of corrupt practices living in peace and prosperity.

We often come across situations and incidents, which appear quite contradictory to the known laws of Nature, creating doubts about the impartiality of divine justice. \_\_\_\_1\_\_\_\_ For instance, honest, duty-conscious, morally elevated person is often seen caught in adversities in one form or the other, or is suddenly struck with a great misfortune in life as though he/she were being punished by God for a great sin. \_\_\_\_2\_\_\_\_. An idler wins a jackpot or inherits a fortune from unexpected quarters, whereas a hard working intelligent person is found suffering endlessly for want of basic necessities. \_\_\_\_3\_\_\_\_. One person achieves great success with little effort, whereas another does not succeed in spite of his best efforts. \_\_\_\_4\_\_\_\_. Such phenomena are popularly ascribed to the role of fate.

- Ans ☐ 1. blank 4
- ☐ 2. blank 1
- ☒ 3. blank 2
- ☐ 4. blank 3

Question ID : 630680552582  
Option 1 ID : 6306802160425  
Option 2 ID : 6306802160422  
Option 3 ID : 6306802160423  
Option 4 ID : 6306802160424

Status : Not Answered

Chosen Option : --

