



Teachingninja.in



Latest Govt Job updates



Private Job updates



Free Mock tests available

Visit - teachingninja.in



Teachingninja.in

IB ACIO Grade-II

**Previous Year Paper
(Executive)
17 Jan, 2024 Shift 3**



INTELLIGENCE BUREAU

(Ministry of Home Affairs)

Government of India

Participant ID	
Application no	
Participant Name	
Test Center Name	
Test Date	17/01/2024
Test Time	2:30 PM - 3:30 PM
Subject	IB ACIO II Exe

Section : Current Affairs

Q.1 Consider the following statement about COP-28-

- 1. Prime Minister Narendra Modi participated in the COP-28 on 1 December 2023.
- 2. COP-28 was organized at California, USA
- 3. The event focused on making climate finance more available, accessible, and affordable to developing countries.
- 4. During the session, the leaders adopted the "UAE Declaration on a New Global Climate Finance Framework".

Which of the statement given above is/are correct?

- Ans ☒ 1. Statement 1, 3, 4
- ☒ 2. Statement 2,3 and 4
- ☒ 3. All are correct
- ☒ 4. Statement 1, 2 and 3

Question ID : 630680554830
Option 1 ID : 6306802168899
Option 2 ID : 6306802168896
Option 3 ID : 6306802168898
Option 4 ID : 6306802168897
Status : Not Answered
Chosen Option : --

Q.2 Consider the following statement about Zojila Tunnel-

- 1. As per October 2023 it is Asia's longest tunnel
- 2. It is 10 km long tunnel
- 3. It is located in Ladakh

Which of the statement given above is/are correct?

- Ans ☒ 1. Statement 2 and 3
- ☒ 2. All are correct
- ☒ 3. Statement 1 and 2
- ☒ 4. Statement 1 and 3

Question ID : 630680554829
Option 1 ID : 6306802168894
Option 2 ID : 6306802168895
Option 3 ID : 6306802168893
Option 4 ID : 6306802168892
Status : Answered
Chosen Option : 2

Q.3 The maximum grant provided under Cultural Function & Production Grant (CFPG) of Ministry of Culture is _____.

- Ans ☒ 1. Rs.5 Lakh which can be increased to Rs. 10 Lakh under exceptional circumstances.
- ☒ 2. Rs.5 Lakh which can be increased to Rs. 20 Lakh under exceptional circumstances.
- ☒ 3. Rs.10 Lakh which can be increased to Rs. 20 Lakh under exceptional circumstances.
- ☒ 4. Rs.2 Lakh which can be increased to Rs. 7 Lakh under exceptional circumstances.

Question ID : 630680554809
Option 1 ID : 6306802168812
Option 2 ID : 6306802168815
Option 3 ID : 6306802168814
Option 4 ID : 6306802168813
Status : Not Answered
Chosen Option : --

Q.4 Consider the following statement about "Swavlamban 2023":

1. It was 2nd Edition of the Indian Navy's Naval Innovation and Indigenisation (NIIO) Seminar
2. 'Swavlamban 2023' was conducted on 04 October 2023 to 05 October 2023
3. It was conducted in Pune, Maharashtra
4. In June 2023 Prime Minister launched the 75 challenges for the start-ups/ MSMEs as a part of the 'SPRINT' initiative.

Which of the statement given above is/are correct?

- Ans ☒ 1. Statement 2 and 4
- ☒ 2. Statement 1 and 2
- ☒ 3. Statement 3 and 4
- ☒ 4. Statement 2 and 3

Question ID : 630680554824
Option 1 ID : 6306802168872
Option 2 ID : 6306802168873
Option 3 ID : 6306802168874
Option 4 ID : 6306802168875
Status : Not Answered
Chosen Option : --

Q.5 Calixcoca Vaccine is for the treatment of _____.

- Ans ☒ 1. cocaine and crack addiction
- ☒ 2. heroin and morphine addiction
- ☒ 3. alcohol addiction
- ☒ 4. fentanyl, and codeine addiction

Question ID : 630680554801
Option 1 ID : 6306802168780
Option 2 ID : 6306802168782
Option 3 ID : 6306802168781
Option 4 ID : 6306802168783
Status : Answered
Chosen Option : 4



Q.6 2023 Sovereign Asian Art Prize was won by _____.

Ans ☒ 1. Parul Gupta

☒ 2. Shrimanti Saha

☒ 3. Priyanka Singh Maharjan

☒ 4. Indu Antony

Question ID : 630680554810

Option 1 ID : 6306802168818

Option 2 ID : 6306802168819

Option 3 ID : 6306802168817

Option 4 ID : 6306802168816

Status : Answered

Chosen Option : 3

Q.7 Consider the following statement about "Hot Cooked Meal" launched in November 2023.

1. This scheme is launched by the Uttar Pradesh government
2. This scheme is launched for the age group 6 to 15 years
3. This scheme is launched for primary and upper Primary schools
4. This scheme was launched by the Chief Minister of Uttar Pradesh

Which of the statement given above is/are correct?

Ans ☒ 1. Statement 2 and 3

☒ 2. Statement 1 and 4

☒ 3. Only Statement 1

☒ 4. Statement 1,2 and 3

Question ID : 630680554828

Option 1 ID : 6306802168889

Option 2 ID : 6306802168891

Option 3 ID : 6306802168888

Option 4 ID : 6306802168890

Status : Answered

Chosen Option : 2

Q.8 Consider the following statement about the BWF World Badminton Championships 2023:

1. Indian player HS Prannoy won silver medal in the men's singles category
2. Malaysia was the host country of this event
3. It was the 10th edition of the event

Which of the statement given above is/are incorrect?

Ans ☒ 1. All are incorrect

☒ 2. Only statement 3

☒ 3. Statement 2 and 3

☒ 4. Only statement 1

Question ID : 630680554821

Option 1 ID : 6306802168862

Option 2 ID : 6306802168863

Option 3 ID : 6306802168861

Option 4 ID : 6306802168860

Status : Not Answered

Chosen Option : --



Q.9 Consider the following statement about "Operation Sajag"

- 1. The Indian Coast Guard executed 'Operation Sajag,'
- 2. It was conducted along the west coast on September 18, 2023.
- 3. This operation is related to the Ministry of Defence

Which of the statement given above is/are correct?

- Ans
- ☒ 1. Only statement 1
 - ☒ 2. Statement 2 and 3
 - ☒ 3. Only statement 3
 - ☒ 4. All are correct

Question ID : 630680554825
Option 1 ID : 6306802168876
Option 2 ID : 6306802168877
Option 3 ID : 6306802168879
Option 4 ID : 6306802168878
Status : Answered
Chosen Option : 1

Q.10 Choose the correct code of the payloads from the mentioned below which were launched by PSCV-C55?

- A. TeLEOS-2
- B. POEM-2
- C. LUMILITE-4
- D. EOS-07

- Ans
- ☒ 1. A, C and D
 - ☒ 2. B, c and D
 - ☒ 3. A, B and C
 - ☒ 4. A,B and D

Question ID : 630680554822
Option 1 ID : 6306802168867
Option 2 ID : 6306802168866
Option 3 ID : 6306802168865
Option 4 ID : 6306802168864
Status : Not Answered
Chosen Option : --

Q.11 Which of the following city is recognized as City of literature by UNESCO's Creative Cities Network?

- Ans
- ☒ 1. Kolkata
 - ☒ 2. Kozhikode
 - ☒ 3. Mumbai
 - ☒ 4. Nalanda

Question ID : 630680554802
Option 1 ID : 6306802168784
Option 2 ID : 6306802168787
Option 3 ID : 6306802168785
Option 4 ID : 6306802168786
Status : Answered
Chosen Option : 2

Q.12 Consider the following statement about Amplifi 2.0 portal launched in November 2023:

1. It has been developed by the Union Ministry of Housing and Urban Affairs
2. Amplifi 2.0 portal provides raws data from Indian cities on a single platform
3. Full form of Amplifi is Assessment and Monitoring Platform for Liveable Inclusive and Future-ready urban India

Which of the statement given above is/are correct?

- Ans ☒ 1. Only statement 1
- ☒ 2. All are correct
- ☒ 3. Only statement 3
- ☒ 4. Statement 2 and 3

Question ID : 630680554823
Option 1 ID : 6306802168868
Option 2 ID : 6306802168870
Option 3 ID : 6306802168871
Option 4 ID : 6306802168869
Status : Not Answered
Chosen Option : --

Q.13 In which form of chess did Karthikeyan Murali defeat Magnus Carlsen?

- Ans ☒ 1. Rapid Chess
- ☒ 2. Blitz Chess
- ☒ 3. Fischer Random Chess
- ☒ 4. Classical Chess

Question ID : 630680554803
Option 1 ID : 6306802168788
Option 2 ID : 6306802168790
Option 3 ID : 6306802168791
Option 4 ID : 6306802168789
Status : Answered
Chosen Option : 1

Q.14 As of December 2023 which among the following is the scheme related to the minorities in India.

1. Nai Udaan
2. Seekho aur Kamao
3. USTTAD
4. Naya Rasta

- Ans ☒ 1. 1, 3 and 4
- ☒ 2. 2, 3 and 4
- ☒ 3. 1, 2 and 4
- ☒ 4. 1,2 and 3

Question ID : 630680554827
Option 1 ID : 6306802168887
Option 2 ID : 6306802168885
Option 3 ID : 6306802168886
Option 4 ID : 6306802168884
Status : Answered
Chosen Option : 1



Q.15 The major focus area of PAALAN 1000 is _____

- Ans
- ☒ 1. Cognitive development of children under 8 years
 - ☒ 2. Cognitive development of children under 5 years
 - ☒ 3. Cognitive development of children under 2 years
 - ☒ 4. Cognitive development of children under 10 years

Question ID : 630680554805
Option 1 ID : 6306802168798
Option 2 ID : 6306802168797
Option 3 ID : 6306802168796
Option 4 ID : 6306802168799
Status : Not Answered
Chosen Option : --

Q.16 Shanti Swarup Bhatnagar Prize for Science and Technology 2022 in Mathematical Sciences was won by _____.

- Ans
- ☒ 1. Apoorva Khare
 - ☒ 2. Dipyaman Ganguli
 - ☒ 3. Basudeb Dasgupta
 - ☒ 4. Anindya Das

Question ID : 630680554804
Option 1 ID : 6306802168792
Option 2 ID : 6306802168793
Option 3 ID : 6306802168795
Option 4 ID : 6306802168794
Status : Answered
Chosen Option : 2

Q.17 Who among the following is the first woman to lead the Indian High Commission in Islamabad after independence?

- Ans
- ☒ 1. Sashastra Seema Bal
 - ☒ 2. Geetika Srivastava
 - ☒ 3. Archana Ramasundaram
 - ☒ 4. C. B. Muthamma

Question ID : 630680554806
Option 1 ID : 6306802168803
Option 2 ID : 6306802168801
Option 3 ID : 6306802168802
Option 4 ID : 6306802168800
Status : Not Answered
Chosen Option : --

Q.18 Consider the following statement about Periodic Labour Force Survey Report 2022-23

1. It is developed by Ministry of Women & Child Development
2. Female Labour Force Participation Rate in the country has improved significantly by 4.2.
3. In 2023 Female Labour Force Participation Rate in the country is 32.8%
4. in the 2021-22 report Labour Force Participation Rate in the country 28.6 %

Which of the statement given above is/are correct?

- Ans
- ☒ 1. Statement 3 and 4
 - ☒ 2. Statement 2 and 4
 - ☒ 3. Statement 1 and 3
 - ☒ 4. Statement 1 and 2

Question ID : 630680554826
Option 1 ID : 6306802168882
Option 2 ID : 6306802168883
Option 3 ID : 6306802168880
Option 4 ID : 6306802168881
Status : Not Answered
Chosen Option : --

Q.19 Which of the following states in India reported the highest number of extreme weather events from January to September 2023?

- Ans
- ☒ 1. Himachal Pradesh
 - ☒ 2. Bihar
 - ☒ 3. Madhya Pradesh
 - ☒ 4. Uttar Pradesh

Question ID : 630680554808
Option 1 ID : 6306802168810
Option 2 ID : 6306802168809
Option 3 ID : 6306802168808
Option 4 ID : 6306802168811
Status : Answered
Chosen Option : 3

Q.20 Who are NOT the eligible beneficiaries of Abua Awas Yojna ?

- A) Current or retired government or semi-government employees.
- B) Income tax payers.
- C) Homeless or unattended individuals.

- Ans
- ☒ 1. B,C
 - ☒ 2. A, B
 - ☒ 3. A, C
 - ☒ 4. A, B, C

Question ID : 630680554807
Option 1 ID : 6306802168806
Option 2 ID : 6306802168805
Option 3 ID : 6306802168807
Option 4 ID : 6306802168804
Status : Not Answered
Chosen Option : --

Section : General Studies

Q.1 Consider the following statements in respect of Article 3 of the Constitution of India:

- 1. Parliament may by law form a new State by separation of territory from any State or by uniting two or more States or parts of States or by uniting any territory to a part of any State.
 - 2. Parliament may by law diminish the area of any State.
 - 3. Parliament may by law alter the boundaries of any State.
 - 4. Parliament may by law alter the name of any State.
- Which of the statements above is/are correct?

- Ans
- ☒ 1. 1, 3 and 4 only
 - ☒ 2. 2, 3 and 4 only
 - ☒ 3. 1, 2 and 4 only
 - ☒ 4. 1, 2, 3 and 4

Question ID : 630680554911
Option 1 ID : 6306802169221
Option 2 ID : 6306802169222
Option 3 ID : 6306802169220
Option 4 ID : 6306802169223
Status : Answered
Chosen Option : 2

Q.2 Which of the following statements is correct?

- A) Statutory Bodies in India are created by an Act of Parliament.
- B) Executive Bodies are not mentioned in the Constitution.

- Ans
- ☒ 1. Only A is true
 - ☒ 2. Neither A nor B is true
 - ☒ 3. Both A and B is true
 - ☒ 4. Only B is true

Question ID : 630680554892
Option 1 ID : 6306802169144
Option 2 ID : 6306802169147
Option 3 ID : 6306802169146
Option 4 ID : 6306802169145
Status : Answered
Chosen Option : 1

Q.3 Consider the following statements:

- 1. Alauddin Khilji instituted the 'Daag' system of branding horses to prevent fraud in the cavalry.
 - 2. Muhammad bin Tughlaq is known for his transfer of the capital from Delhi to Daulatabad.
 - 3. The Iqta system was abolished by Balban to strengthen central control.
- Which of the statements above is/are correct?

- Ans
- ☒ 1. 1, 2, and 3
 - ☒ 2. 2 and 3 only
 - ☒ 3. 1 and 3 only
 - ☒ 4. 1 and 2 only

Question ID : 630680554904
Option 1 ID : 6306802169195
Option 2 ID : 6306802169193
Option 3 ID : 6306802169194
Option 4 ID : 6306802169192
Status : Answered
Chosen Option : 1

Q.4 Consider the following statements:

1. The Swaraj Party was formed in late 1925 by Motilal Nehru and C.R. Das to enter the legislative councils.
 2. The Rowlatt Act was one of the important factors which led to the Non-Cooperation Movement in 1920.
 3. The Simon Commission, constituted in 1927, was boycotted by the Indian National Congress and most other Indian political parties.
 4. The Azad Hind Fauj or Indian National Army was reorganized by Subhas Chandra Bose in 1943 in Southeast Asia.
- Which of the above statements are correct?

Ans ☒ 1. 2, 3, and 4
☐ 2. 1, 3, and 4
☐ 3. 1, 2, 3, and 4
☐ 4. 1, 2, and 3

Question ID : 630680554903
Option 1 ID : 6306802169190
Option 2 ID : 6306802169189
Option 3 ID : 6306802169191
Option 4 ID : 6306802169188
Status : Answered
Chosen Option : 3

Q.5 Consider the following statements:

1. As per Food and Agriculture organization of the United Nations, India is the world's largest producer of pulses and ranks second in rice production.
 2. The Green Revolution in India led to significant increases in wheat production, primarily in Punjab, Haryana, and Uttar Pradesh.
 3. Black soil, also known as Regur soil, is most suitable for the cultivation of cotton.
- Which of the statements above is/are correct?

Ans ☐ 1. 1 and 2 only
☒ 2. 1, 2 and 3
☐ 3. 1 and 3 only
☐ 4. 2 and 3 only

Question ID : 630680554908
Option 1 ID : 6306802169208
Option 2 ID : 6306802169211
Option 3 ID : 6306802169210
Option 4 ID : 6306802169209
Status : Answered
Chosen Option : 2

Q.6 Consider the following statements:

1. Bengali is the second most spoken language in India after Hindi.
 2. Urdu is often associated with the Deccan region and its literature includes the famous Deccan poetry.
 3. Punjabi is unique among Indian languages for its use of the Gurmukhi script, developed by the second Sikh Guru, Guru Angad.
- Which of the statements above is/are correct?

- Ans ☒ 1. 1,2 and 3
- ☒ 2. 1 and 2 only
- ☒ 3. 1 and 3 only
- ☒ 4. 2 and 3 only

Question ID : 630680554905
Option 1 ID : 6306802169199
Option 2 ID : 6306802169196
Option 3 ID : 6306802169198
Option 4 ID : 6306802169197
Status : Answered
Chosen Option : 3

Q.7 Consider the following statements:

1. The Four Noble Truths form the central doctrine of Buddhism.
 2. The concept of 'Anatta' in Buddhism denies the existence of a permanent soul.
 3. Mahayana Buddhism introduced the concept of Bodhisattva.
 4. The Milindapanha is a Pali text that records a dialogue between the Indo-Greek king Menander and the monk Nagasena.
- Which of the statements above is/are correct?

- Ans ☒ 1. 1, 3, and 4 only
- ☒ 2. 1, 2, and 3 only
- ☒ 3. 2, 3, and 4 only
- ☒ 4. 1, 2, 3, and 4 only

Question ID : 630680554906
Option 1 ID : 6306802169201
Option 2 ID : 6306802169200
Option 3 ID : 6306802169202
Option 4 ID : 6306802169203
Status : Not Answered
Chosen Option : --

Q.8 Which of the following structures of Buddhist architecture is used as living quarters of the monks?

- Ans ☒ 1. Chaitya Grihas
- ☒ 2. Viharas
- ☒ 3. Chalupa
- ☒ 4. Stupas

Question ID : 630680554886
Option 1 ID : 6306802169120
Option 2 ID : 6306802169122
Option 3 ID : 6306802169123
Option 4 ID : 6306802169121
Status : Answered
Chosen Option : 2



Q.9 Arthashastra was written by _____.

- Ans
- ☒ 1. Banabhatta
 - ☒ 2. Megasthenes
 - ☒ 3. Kautilya
 - ☒ 4. Vishakhadatta

Question ID : 630680554884
Option 1 ID : 6306802169112
Option 2 ID : 6306802169115
Option 3 ID : 6306802169114
Option 4 ID : 6306802169113
Status : Answered
Chosen Option : 3

Q.10 _____ is the maximum income available that can be saved and spent by a nation on the consumption of goods and services.

- Ans
- ☒ 1. National Disposable Income
 - ☒ 2. Gross National Disposable Income
 - ☒ 3. National Income
 - ☒ 4. Personal Disposable Income

Question ID : 630680554889
Option 1 ID : 6306802169134
Option 2 ID : 6306802169132
Option 3 ID : 6306802169133
Option 4 ID : 6306802169135
Status : Answered
Chosen Option : 3

Q.11 Consider the following statements:

1. The Indian monsoon is divided into the Southwest Monsoon and Northeast Monsoon.
 2. The retreating monsoon is associated with the development of cyclonic depressions in the Bay of Bengal.
 3. The Western Disturbances are the primary cause of snowfall in the Himalayan region.
 4. El Niño is known to have an enhancing effect on the monsoon rains in India.
- Which of the statements above is/are correct?

- Ans
- ☒ 1. 1, 2, and 3 only
 - ☒ 2. 2, 3, and 4 only
 - ☒ 3. 1, 3, and 4 only
 - ☒ 4. 1, 2, 3 and 4

Question ID : 630680554907
Option 1 ID : 6306802169204
Option 2 ID : 6306802169206
Option 3 ID : 6306802169205
Option 4 ID : 6306802169207
Status : Answered
Chosen Option : 4

Q.12 Tripitaka are the religious texts of _____.

- Ans ☒ 1. Sikhs
☒ 2. Buddhists
☒ 3. Hindus
☒ 4. Jains

Question ID : 630680554885
Option 1 ID : 6306802169118
Option 2 ID : 6306802169117
Option 3 ID : 6306802169116
Option 4 ID : 6306802169119
Status : Answered
Chosen Option : 2

Q.13 When was the constitution of India adopted?

- Ans ☒ 1. March 5, 1951
☒ 2. August 15, 1948
☒ 3. November 26, 1949
☒ 4. 26 January 1950

Question ID : 630680554891
Option 1 ID : 6306802169143
Option 2 ID : 6306802169141
Option 3 ID : 6306802169140
Option 4 ID : 6306802169142
Status : Answered
Chosen Option : 4

Q.14 Consider the following statements:

1. The Swachh Bharat Mission aims to eradicate open defecation and improve solid waste management.
2. The Smart Cities Mission focuses on sustainable and inclusive development to create a replicable model for other cities.
3. Atal Mission for Rejuvenation and Urban Transformation (AMRUT) 2.0 scheme was launched on 01 October 2022 for the period of 05 years i.e. from the financial year 2022-23 to the financial year 2026-27.

Which of the statements above is/are correct?

- Ans ☒ 1. 1 and 3 only
☒ 2. 1 and 2 only
☒ 3. 1, 2 and 3 only
☒ 4. 2 and 3 only

Question ID : 630680554912
Option 1 ID : 6306802169225
Option 2 ID : 6306802169224
Option 3 ID : 6306802169227
Option 4 ID : 6306802169226
Status : Not Answered
Chosen Option : --

Q.15 Tughluq Dynasty was ended by which of the following rulers?

- Ans ☒ 1. Timur
- ☐ 2. Ghiyas-ud-din Tughluq
- ☐ 3. Qutb-ud-din Aibak
- ☐ 4. Jalal-ud-din Firuz Khilji

Question ID : 630680554883
Option 1 ID : 6306802169110
Option 2 ID : 6306802169108
Option 3 ID : 6306802169111
Option 4 ID : 6306802169109
Status : Answered
Chosen Option : 4

Q.16 Which of the following states of India has the highest reserves of Chromite?

- Ans ☐ 1. Himachal Pradesh
- ☐ 2. Maharashtra
- ☐ 3. Rajasthan
- ☒ 4. Odisha

Question ID : 630680554887
Option 1 ID : 6306802169124
Option 2 ID : 6306802169126
Option 3 ID : 6306802169125
Option 4 ID : 6306802169127
Status : Answered
Chosen Option : 3

Q.17 Consider the following statements:

1. India's National Clean Air Programme (NCAP) aims to reduce particulate matter (PM) pollution by 10-15% by 2024.
2. The Jal Jeevan Mission focuses on providing safe and adequate drinking water through individual household tap connections by 2024.
3. The National Electric Mobility Mission Plan (NEMMP) targets achieving national fuel security by promoting hybrid and electric vehicles.
4. The FAME India Scheme (Faster Adoption and Manufacturing of Electric Vehicles) is part of National Electric Mobility Mission Plan (NEMMP) and provides subsidies for electric vehicles. Which of the statements above is/are correct?

- Ans ☒ 1, 2, 3, and 4 only
- ☐ 2, 1, 3, and 4 only
- ☐ 3, 1, 2, and 3 only
- ☐ 4, 1, 2, 3 and 4

Question ID : 630680554910
Option 1 ID : 6306802169218
Option 2 ID : 6306802169217
Option 3 ID : 6306802169216
Option 4 ID : 6306802169219
Status : Not Answered
Chosen Option : --

Q.18 Consider the following statements:

1. India's National Action Plan on Climate Change (NAPCC) includes eight missions aimed at promoting sustainable development.
 2. India saw the highest year-on-year growth in renewable energy additions of 9.83% in 2022.
 3. The Perform Achieve and Trade (PAT) scheme is an initiative under the National Mission for Enhanced Energy Efficiency.
- Which of the statements above is/are correct?

Ans ☒ 1. 1 and 3 only

☒ 2. 1,2 and 3

☒ 3. 1 and 2 only

☒ 4. 2 and 3 only

Question ID : 630680554909

Option 1 ID : 6306802169213

Option 2 ID : 6306802169215

Option 3 ID : 6306802169212

Option 4 ID : 6306802169214

Status : Not Answered

Chosen Option : --

Q.19 Consider the following statements:

- A) Failure of Third Plan that of the devaluation of rupee(to boost exports) along with inflationary recession led to postponement of Fourth Five year plan.
- B) Three Annual Plans were introduced instead of the Fifth five year plan.

Ans ☒ 1. Only B is true

☒ 2. Neither A nor B is true

☒ 3. Only A is true

☒ 4. Both A and B is true

Question ID : 630680554890

Option 1 ID : 6306802169137

Option 2 ID : 6306802169139

Option 3 ID : 6306802169136

Option 4 ID : 6306802169138

Status : Not Answered

Chosen Option : --

Q.20 Life expectancy of men in India as per 2011 census is _____.

Ans ☒ 1. sometimes less and sometimes greater than that of women in India.

☒ 2. equal to that of women in India.

☒ 3. greater than that of women in India.

☒ 4. less than that of women in India.

Question ID : 630680554888

Option 1 ID : 6306802169131

Option 2 ID : 6306802169130

Option 3 ID : 6306802169128

Option 4 ID : 6306802169129

Status : Answered

Chosen Option : 3

Section : Numerical Aptitude



Q.1 (x, y) is a pair of positive integers such that $\text{HCF}(x, y) + \text{LCM}(x, y) = 187$ and $x > y$.

Which one of the following is correct in respect of the Question and the Statements given below?

Statement 1: There are three possible values of $\text{HCF}(x, y)$.

Statement 2: The minimum value of $(x + y)$ is 37.

Statement 3: There are 7 pairs of (x, y) that satisfy the given conditions.

- Ans**
- ☒ 1. Statements 1 and 3 are correct but Statement 2 is incorrect.
 - ☒ 2. Statement 1 is incorrect but Statements 2 and 3 are correct.
 - ☒ 3. Only Statements 1 and 2 are correct.
 - ☒ 4. All three statements are correct.

Question ID : 630680554987

Option 1 ID : 6306802169526

Option 2 ID : 6306802169527

Option 3 ID : 6306802169525

Option 4 ID : 6306802169524

Status : Not Answered

Chosen Option : --

Q.2 The prices of a cream and a shampoo are in the ratio 19: 11. The price of the cream is ₹ 160 more than the price of the shampoo. What is the price of a cream?

- Ans**
- ☒ 1. ₹340
 - ☒ 2. ₹360
 - ☒ 3. ₹400
 - ☒ 4. ₹380

Question ID : 630680554970

Option 1 ID : 6306802169458

Option 2 ID : 6306802169456

Option 3 ID : 6306802169459

Option 4 ID : 6306802169457

Status : Answered

Chosen Option : 4

Q.3 A sum becomes ₹ 8640 after two years and ₹ 12,441.6 after four years at the same compound interest. Find the sum.

- Ans**
- ☒ 1. ₹5000
 - ☒ 2. ₹6000
 - ☒ 3. ₹5800
 - ☒ 4. ₹6300

Question ID : 630680554968

Option 1 ID : 6306802169449

Option 2 ID : 6306802169451

Option 3 ID : 6306802169448

Option 4 ID : 6306802169450

Status : Answered

Chosen Option : 2



Q.4

Find the positive square root of $92 - 24\sqrt{6} - 4\sqrt{2}$

Ans

✓ 1. $6 + 2\sqrt{2}$

✗ 2. $8 - 2\sqrt{2}$

✗ 3. $8 - 4\sqrt{2}$

✗ 4. $6 - 2\sqrt{2}$

Question ID : 630680554988

Option 1 ID : 6306802169530

Option 2 ID : 6306802169528

Option 3 ID : 6306802169531

Option 4 ID : 6306802169529

Status : Not Attempted and Marked For Review

Chosen Option : --

Q.5

35 men and 49 women, working together, can do a job in 84 days while 48 men and 84 women, working together, can do the same job in 56 days. In how many days can the same job be done by 30 men and 21 women, working together?

Ans

✗ 1. $120\frac{6}{13}$

✓ 2. $120\frac{8}{13}$

✗ 3. $120\frac{7}{13}$

✗ 4. $120\frac{9}{13}$

Question ID : 630680554993

Option 1 ID : 6306802169551

Option 2 ID : 6306802169549

Option 3 ID : 6306802169550

Option 4 ID : 6306802169548

Status : Not Attempted and Marked For Review

Chosen Option : --

Q.6

A salt and water mixture, of which 12.5% is salt, costs ₹22 per litre. Another salt and water mixture, of which 27.5% is salt, costs ₹38.50 per litre. How many litres of a salt and water mixture, of which 30% is salt, can be bought for ₹165?

Ans

✗ 1. 5

✗ 2. 4.5

✓ 3. 4

✗ 4. 3.5

Question ID : 630680554986

Option 1 ID : 6306802169523

Option 2 ID : 6306802169522

Option 3 ID : 6306802169521

Option 4 ID : 6306802169520

Status : Not Attempted and Marked For Review

Chosen Option : --

Q.7 If Naman had purchased 25 articles for ₹ 22 and sold all the articles at the rate of 22 for ₹ 25, then find his approximate profit percentage.

- Ans**
- ☒ 1. 30.2%
 - ☒ 2. 21.5%
 - ☒ 3. 20.5%
 - ☒ 4. 29.1%

Question ID : 630680554972
Option 1 ID : 6306802169464
Option 2 ID : 6306802169465
Option 3 ID : 6306802169467
Option 4 ID : 6306802169466
Status : Answered
Chosen Option : 3

Q.8 Excluding stoppages, the speed of a bus is 152 km/hr. and including stoppages, it is 114 km/hr. For how many minutes does the bus stop per hour?

- Ans**
- ☒ 1. 15 minutes
 - ☒ 2. 9 minutes
 - ☒ 3. 14 minutes
 - ☒ 4. 10 minutes

Question ID : 630680554974
Option 1 ID : 6306802169475
Option 2 ID : 6306802169474
Option 3 ID : 6306802169473
Option 4 ID : 6306802169472
Status : Answered
Chosen Option : 1

Q.9 A shopkeeper buys three varieties of sugar at Rs 99, Rs 120 and Rs 144 per kg respectively and mixes them in the ratio 9 : 2 : 1. In order to earn a y% profit after giving a discount equal to a sixth of the marked price, the marked price per kg of the blended sugar is fixed at Rs 178.50. What is the value of y?

- Ans**
- ☒ 1. 35
 - ☒ 2. 40
 - ☒ 3. 45
 - ☒ 4. 36

Question ID : 630680554990
Option 1 ID : 6306802169536
Option 2 ID : 6306802169539
Option 3 ID : 6306802169538
Option 4 ID : 6306802169537
Status : Not Attempted and Marked For Review
Chosen Option : --



Q.10 Ravi and Rajiv decided to run a 960 m long race on a track as long as the length of the race.

Which of the statement(s) below is (are) sufficient to conclude that Rajiv ran at a speed of 10 m/s?

Statement 1: Ravi is allowed to start 5 seconds before Rajiv started running.

Statement 2: Ravi ran at 8 m per second.

Statement 3: Rajiv caught up with Ravi with $\frac{3}{8}$ of the track length still to be covered.

Ans ✓ 1.

Even all the three statements taken together is not sufficient.

✗ 2. All the three statements taken together is sufficient.

✗ 3. Statements 2 and 3 taken together are sufficient.

✗ 4. Statements 1 and 3 taken together are sufficient.

Question ID : 630680554994

Option 1 ID : 6306802169555

Option 2 ID : 6306802169554

Option 3 ID : 6306802169553

Option 4 ID : 6306802169552

Status : Not Answered

Chosen Option : --

Q.11 The greatest number of wagons that can be attached to a locomotive engine if the speed is not to fall below 14 km. per hour is given as 144.

Which one of the following is correct in respect of the Question and the Statements given below?

Statement 1: The locomotive engine without any wagon can go at a rate of 50 km per hour.

Statement 2: The speed of the locomotive diminishes by a quantity which varies as the square root of the number of wagons attached.

Statement 3: With 16 wagons its speed is 38 km. per hour.

Ans ✓ 1. All the three statements together are sufficient,

✗ 2.

Even all the three statements taken together is still not sufficient.

✗ 3. Statement 2 and Statement 3 taken together are sufficient.

✗ 4. Statement 1 and Statement 3 taken together are sufficient.

Question ID : 630680554992

Option 1 ID : 6306802169546

Option 2 ID : 6306802169547

Option 3 ID : 6306802169545

Option 4 ID : 6306802169544

Status : Not Answered

Chosen Option : --

Q.12 The product of two co-prime numbers is 1073. Find their L.C.M.

- Ans
- ☒ 1. 1
 - ☒ 2. 1073
 - ☒ 3. 29
 - ☒ 4. 37

Question ID : 630680554969
Option 1 ID : 6306802169452
Option 2 ID : 6306802169453
Option 3 ID : 6306802169454
Option 4 ID : 6306802169455
Status : Answered
Chosen Option : 2

Q.13 Jay lent some amount of money at 14% simple interest and an equal amount of money at 20% simple interest each for two years. If his total interest was, ₹ 9520, then find the amount of money that was lent in each case.

- Ans
- ☒ 1. ₹15,000
 - ☒ 2. ₹13,000
 - ☒ 3. ₹16,000
 - ☒ 4. ₹14,000

Question ID : 630680554967
Option 1 ID : 6306802169445
Option 2 ID : 6306802169444
Option 3 ID : 6306802169446
Option 4 ID : 6306802169447
Status : Answered
Chosen Option : 4

Q.14 A number increased by 57% gives 942. Find the number.

- Ans
- ☒ 1. 600
 - ☒ 2. 700
 - ☒ 3. 800
 - ☒ 4. 500

Question ID : 630680554971
Option 1 ID : 6306802169460
Option 2 ID : 6306802169463
Option 3 ID : 6306802169462
Option 4 ID : 6306802169461
Status : Answered
Chosen Option : 1

Q.15 Prakash and Inaya started a business investing ₹ 77,000 and ₹ 84,000 respectively. In what ratio the profit earned after 2 years be divided between Prakash and Inaya respectively?

- Ans**
- ☐ 1. 12 : 11
 - ☐ 2. 12 : 7
 - ☐ 3. 11 : 7
 - ☒ 4. 11 : 12

Question ID : 630680554973
Option 1 ID : 6306802169470
Option 2 ID : 6306802169471
Option 3 ID : 6306802169469
Option 4 ID : 6306802169468
Status : Answered
Chosen Option : 4

Q.16 On a particular day each of Danish, Ethan and Farhan sold three types of pens from their respective shops. Danish and Ethan sold an identical number of pens of Type A while Farhan sold twice as many pens of Type A as Danish and Ethan together sold. The ratio of the numbers of pens of Type B sold by Danish, Ethan and Farhan was 3 : 4 : 1 respectively, and Ethan and Farhan sold an identical number of pens of Type C each, while Danish sold thrice as many pens of Type C as each of Ethan and Farhan sold. The three sellers sold each of the types of pens at different prices per unit.

Assertion (A): It is possible that Danish sold each pen of Type A at a loss of Rs 2, each pen of Type B at a profit of Rs 4, and each pen of Type C at a loss of Rs 5 and made an overall profit of Rs 144; Ethan sold each pen of Type A at a profit of Rs 5, each pen of Type B at a loss of Re 1, and each pen of Type C at a profit of Rs 7 and made an overall profit of Rs 13; and Farhan sold each pen of Type A at a profit of Re 3, each pen of Type B at a profit of Re 4, and each pen of Type C at a loss of Rs 6 and made an overall profit of Rs 240.

Reason (R): Framing and solving the three possible linear equations we will find that we get a unique solution.

- Ans**
- ☐ 1. Both Assertion (A) and Reason (R) are true but Reason (R) is not a correct explanation of Assertion (A).
 - ☒ 2. Assertion (A) is false and Reason (R) is true.
 - ☐ 3. Both Assertion (A) and Reason (R) are true and Reason (R) is a correct explanation of Assertion (A).
 - ☐ 4. Assertion (A) is true and Reason (R) is false.

Question ID : 630680554995
Option 1 ID : 6306802169557
Option 2 ID : 6306802169559
Option 3 ID : 6306802169556
Option 4 ID : 6306802169558
Status : Not Answered
Chosen Option : --

Q.17 In a 60-liter mixture of milk and water, the water content is 40%. How many litres of water should be added to increase the water content to 60%?

- Ans**
- ☐ 1. 25 litres
 - ☒ 2. 30 litres
 - ☐ 3. 15 litres
 - ☐ 4. 20 litres

Question ID : 630680554966
Option 1 ID : 6306802169441
Option 2 ID : 6306802169443
Option 3 ID : 6306802169442
Option 4 ID : 6306802169440
Status : Answered
Chosen Option : 2



Q.18 Arun and Devika bought an item each at identical prices. Arun marked his item at $p\%$ above his purchase price and then offered a discount of $q\%$ on the marked price. Devika claimed to offer her item for sale at $y\%$ below her purchase price but then added $z\%$ of the reduced offer price as handling charges. Eventually both sold their items at the same nominal price.

Which one of the following is correct in respect of the Question and the Statements given below?

Statement 1: The values of p , q , y and z are respectively given as 25, 8, 20 and 43.75

Statement 2: The values of p , q , y and z are respectively given as 35, 20, 10 and 20

- Ans**
- ☒ 1. Only Statement 1 is feasible.
 - ☒ 2. Neither of the two statements is feasible.
 - ☒ 3. Both Statements are feasible.
 - ☒ 4. Only Statement 2 is feasible.

Question ID : 630680554989

Option 1 ID : 6306802169532

Option 2 ID : 6306802169535

Option 3 ID : 6306802169534

Option 4 ID : 6306802169533

Status : Not Answered

Chosen Option : --

Q.19 The sum of the squares of two numbers is 545 and the square of their difference is 1. Find the product of the two numbers.

- Ans**
- ☒ 1. 286
 - ☒ 2. 282
 - ☒ 3. 256
 - ☒ 4. 272

Question ID : 630680554975

Option 1 ID : 6306802169479

Option 2 ID : 6306802169476

Option 3 ID : 6306802169478

Option 4 ID : 6306802169477

Status : Answered

Chosen Option : 4

Q.20 A, B and C enter a partnership with initial investments in the ratio $\frac{11}{5} : \frac{7}{2} : \frac{15}{8}$. After 4 months A raises her share of investment by 62.5%. If the total profit after 12 months since the beginning of the partnership is Rs. 138584, then how much (in Rs.) does A get as her share of profit?

- Ans**
- ☒ 1. 50874
 - ☒ 2. 50864
 - ☒ 3. 50844
 - ☒ 4. 50884

Question ID : 630680554991

Option 1 ID : 6306802169541

Option 2 ID : 6306802169542

Option 3 ID : 6306802169543

Option 4 ID : 6306802169540

Status : Not Answered

Chosen Option : --

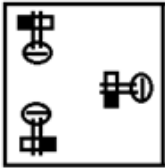
Section : Reasoning and Logical Aptitude



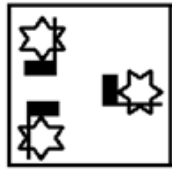
Q.1 Three of the following four figure pairs are alike in a certain way and thus form a group. Which is the one that does not belong to that group?

Ans

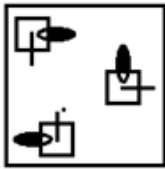
✗ 1.



✓ 2.



✗ 3.



✗ 4.



Question ID : 630680554953

Option 1 ID : 6306802169391

Option 2 ID : 6306802169389

Option 3 ID : 6306802169388

Option 4 ID : 6306802169390

Status : Answered

Chosen Option : 2

Q.2 Select the figure that will replace the question mark (?) in the following figure series.

P	M	□	P	M	X	□	P	+	X	□	
□		X			+		M	S		P	
X		+			S			↑		M	
+	S	↑			↑						?

Ans

- ✖ 1.

↑

+

□

S

X

P

M
- ✖ 2.

S

↑

+

X

□

M

P
- ✖ 3.

S

+

□

↑

X

P

M
- ✔ 4.

S

+

X

↑

□

P

M

Question ID : 630680554931
Option 1 ID : 6306802169303
Option 2 ID : 6306802169302
Option 3 ID : 6306802169301
Option 4 ID : 6306802169300
Status : Not Attempted and Marked For Review
Chosen Option : --

Q.3 In a certain code language, 'FAST' is written as '7-39', and 'LINE' is written as '21-19'. Which of the following are correct matches as per the given code language?

WORD	CODE
(i) DOME	(W) 15-27
(ii) FISH	(X) 18-15
(iii) COMB	(Y) 19-18

- Ans
- ✖ 1. i-W, iii-X only

✖ 2. i-Y , iii-X only

✔ 3. i-Y , ii-W, iii-X only

✖ 4. iii-X only

Question ID : 630680554947
Option 1 ID : 6306802169366
Option 2 ID : 6306802169364
Option 3 ID : 6306802169367
Option 4 ID : 6306802169365
Status : Answered
Chosen Option : 3

Q.4 In a group of students, 147 play football, 155 play hockey, 160 play cricket, 36 play football and hockey, 44 play football and cricket, 25 play hockey and cricket, and 15 play all three games. Find the total number of students in the group.

- Ans ☒ 1. 366
☒ 2. 372
☒ 3. 350
☒ 4. 345

Question ID : 630680554928
Option 1 ID : 6306802169290
Option 2 ID : 6306802169288
Option 3 ID : 6306802169289
Option 4 ID : 6306802169291
Status : Answered
Chosen Option : 3

Q.5 'A % B' means 'A is the brother of B'
'A @ B' means 'A is the father of B'
'A = B' means 'A is the wife of B'
'A & B' means 'A is the mother of B'

Based on the above information, find out which of the given statements can be the reason/s behind the assertion made below if it is given that 'M % K = Z @ L % C'.

Assertion: K is maternal grandmother of H?

Reason A : C & H

Reason B : N @ H

- Ans ☒ 1. Only B is the reason behind the assertion
☒ 2. Both A and B are reasons behind the assertion
☒ 3. Neither A nor B is the reason behind the assertion
☒ 4. Only A is the reason behind the assertion

Question ID : 630680554948
Option 1 ID : 6306802169370
Option 2 ID : 6306802169368
Option 3 ID : 6306802169371
Option 4 ID : 6306802169369
Status : Answered
Chosen Option : 4

Q.6 A question is followed by two statements numbered (I) and (II). You have to decide whether the data provided in the statements are sufficient/necessary to answer the question. Read both the statements and decide the appropriate answer.

Question: In which direction is Vineet finally facing?

(I) Initially Vineet was facing northeast, then he turned 135 degrees clockwise, then he turned 45 degrees anticlockwise. Then he turned 90 degrees anticlockwise for his final facing of a direction.

(II) Initially Vineet was facing north, then he turned 90 degrees followed by a 135 degrees turn. He, then turned 45 degrees for his final facing.

- Ans ☒ 1. Data in Statement II alone is sufficient to answer the question while data in statement I is not
☒ 2. Data in statements I and II together are NOT sufficient to answer the question
☒ 3. Data in Statement I alone is sufficient to answer the question while data in statement II is not
☒ 4. Data in statements I and II together are necessary to answer the question.

Question ID : 630680554950
Option 1 ID : 6306802169377
Option 2 ID : 6306802169379
Option 3 ID : 6306802169376
Option 4 ID : 6306802169378
Status : Not Attempted and Marked For Review
Chosen Option : --

Q.7 Six persons Ritu, Gunjan, Vicky, Sana, Kiran, and Hemant live in a six-storey building. The ground floor is numbered 1, the floor just above it is numbered 2, and so on till the topmost floor which is numbered 6. Only three people live between Vicky and Hemant. Kiran lives on an even-numbered floor. Ritu lives just above Hemant. Four people live between Vicky and Ritu. Kiran lives just above Gunjan. Who lives just above Vicky?

- Ans
- ☐ 1. Kiran
 - ☐ 2. Gunjan
 - ☐ 3. Hemant
 - ☒ 4. Sana

Question ID : 630680554925
Option 1 ID : 6306802169277
Option 2 ID : 6306802169278
Option 3 ID : 6306802169279
Option 4 ID : 6306802169276
Status : Answered
Chosen Option : 4

Q.8 Three Statements are given followed by two conclusions numbered I and II. Assuming the statements to be true, decide which of the conclusions logically follow(s) from the statements.

Statement I: Some reds are blue.
Statement II: All blue is green.
Statement III: Some green are brown.

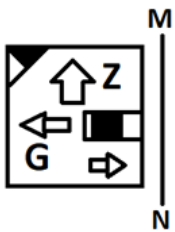
Conclusion I: Some red are brown.
Conclusion II: Some reds are green.

- Ans
- ☐ 1. Both conclusions I and II follow
 - ☒ 2. Only conclusion II follows
 - ☐ 3. Neither conclusion I nor II follows
 - ☐ 4. Only conclusion I follows

Question ID : 630680554927
Option 1 ID : 6306802169286
Option 2 ID : 6306802169285
Option 3 ID : 6306802169287
Option 4 ID : 6306802169284
Status : Answered
Chosen Option : 2

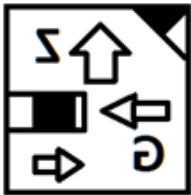


Q.9 Select the correct mirror image of the given figure when the mirror is placed at MN as shown below.

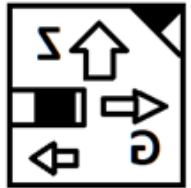


Ans

✗ 1.



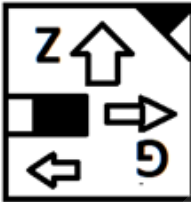
✓ 2.



✗ 3.

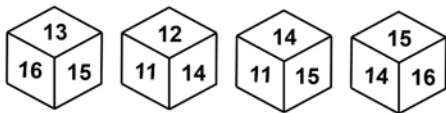


✗ 4.



Question ID : 630680554952
Option 1 ID : 6306802169384
Option 2 ID : 6306802169385
Option 3 ID : 6306802169386
Option 4 ID : 6306802169387
Status : Answered
Chosen Option : 2

Q.10 Four different positions of the same dice are given below. Find the number opposite of 13.



- Ans ☒ 1. 15
☒ 2. 14
☒ 3. 11
☒ 4. 16

Question ID : 630680554932
Option 1 ID : 6306802169305
Option 2 ID : 6306802169306
Option 3 ID : 6306802169307
Option 4 ID : 6306802169304

Status : Answered
Chosen Option : 2

Q.11 Select the set in which the numbers are related in the same way as are the numbers of the following sets.

(NOTE : Operations should be performed on the whole numbers, without breaking down the numbers into its constituent digits. E.g. 13 – Operations on 13 such as adding /subtracting /multiplying etc. to 13 can be performed. Breaking down 13 into 1 and 3 and then performing mathematical operations on 1 and 3 is not allowed)
(12, 21, 162)
(14, 26, 288)

- Ans ☒ 1. (17, 30, 278)
☒ 2. (16, 26, 220)
☒ 3. (15, 29, 142)
☒ 4. (18, 29, 242)

Question ID : 630680554954
Option 1 ID : 6306802169392
Option 2 ID : 6306802169394
Option 3 ID : 6306802169393
Option 4 ID : 6306802169395

Status : Not Attempted and Marked For Review
Chosen Option : --

Q.12 Select the wrong term in the following number series:

3, 4, 12, 40, 103, 228

- Ans ☒ 1. 228
☒ 2. 12
☒ 3. 40
☒ 4. 103

Question ID : 630680554933
Option 1 ID : 6306802169310
Option 2 ID : 6306802169309
Option 3 ID : 6306802169308
Option 4 ID : 6306802169311

Status : Marked For Review
Chosen Option : 3



Q.13 Seven persons named P, Q, R, S, T, U and V are sitting in a straight line, all facing north. Each one of them is pursuing one of seven different courses i.e. B.A., B.Com, B.Sc., B.Tech, B.Arch, M.Sc. and M.Tech. Q is fourth to left of R. S is third to right of P. The person pursuing B.Tech is third to left of R. The person pursuing B.Arch is sitting immediate left of S who is sitting at the extreme end. The persons pursuing M.Sc. and B.Com are immediate neighbours. The persons pursuing B.Sc. and B.Arch are immediate neighbours. V is fourth to left of U. S is not pursuing B.Sc. The person pursuing B.A. is third to left of P. The person pursuing M.Tech is fourth to the right of the person pursuing M.Sc.

Which of the following is/are true based on the given arrangement?

I. The person pursuing B.com is third to left of the person pursuing M.Tech.

II. Only three persons are sitting between Q and R.

III. The person pursuing B.Arch. is sitting second to the right of T.

Ans ☒ 1. All I, II and III are true

☒ 2. Only II and III are true

☒ 3. Only I and II are true

☒ 4. Only I and III is true

Question ID : 630680554945

Option 1 ID : 6306802169359

Option 2 ID : 6306802169358

Option 3 ID : 6306802169357

Option 4 ID : 6306802169356

Status : Not Attempted and
Marked For Review

Chosen Option : --

Q.14 Read the following information carefully and answer the question that follows. You must assume everything in the statement to be true and decide which of the conclusion/s logically follow/s.

With active populations, road traffic, industry and construction, cities are expectedly noisy places. Noise is a leading source of dissatisfaction for city residents. Urban noise affects the quality of lives of people residing there. It also causes serious and long-term harm to health. Noise disturbs sleep which results in stress, fatigue and changes in body's chemical balances. Noise interferes with certain cognitive functions such as attention, concentration and memory.

Which of the following can be concluded from the given information?

A. The main cause of noise pollution is the people remaining active throughout the day and they are able to pay attention to their tasks for more duration.

B. The noise pollution is evident only in those urban areas where industries are located and people are not sleeping properly due to long working hours.

C. Noise is associated with low quality of sleep which causes other problems such as tiredness, stress and other bodily changes.

D. Sleep is not the only factor which is interfered due to noise pollution; there are other functions that are affected among people.

Ans ☒ 1. Only A, B and C

☒ 2. Only B, C and D

☒ 3. Only B and D

☒ 4. Only C and D

Question ID : 630680554951

Option 1 ID : 6306802169380

Option 2 ID : 6306802169382

Option 3 ID : 6306802169381

Option 4 ID : 6306802169383

Status : Not Attempted and
Marked For Review

Chosen Option : --



Q.15 Four letter clusters have been given, out of which three are alike in some manner and one is different. Select the odd letter cluster.

- Ans ☒ 1. QRS
☒ 2. LKN
☒ 3. UVW
☒ 4. HIJ

Question ID : 630680554929
Option 1 ID : 6306802169293
Option 2 ID : 6306802169294
Option 3 ID : 6306802169295
Option 4 ID : 6306802169292
Status : Answered
Chosen Option : 2

Q.16 If M denotes 'addition', N denotes 'multiplication', O denotes 'subtraction', and P denotes 'division', then what will be the value of the following equation?

$55 \text{ N } 2 \text{ M } 27 \text{ O } 16 \text{ P } 4 = ?$

- Ans ☒ 1. 133
☒ 2. 143
☒ 3. 152
☒ 4. 166

Question ID : 630680554934
Option 1 ID : 6306802169315
Option 2 ID : 6306802169314
Option 3 ID : 6306802169312
Option 4 ID : 6306802169313
Status : Answered
Chosen Option : 1

Q.17 Arrange the words in a meaningful logical order and select the appropriate sequence :

1. Seed
2. Flower
3. Plant
4. Bud

- Ans ☒ 1. 4123
☒ 2. 2431
☒ 3. 1243
☒ 4. 1423

Question ID : 630680554926
Option 1 ID : 6306802169282
Option 2 ID : 6306802169283
Option 3 ID : 6306802169281
Option 4 ID : 6306802169280
Status : Answered
Chosen Option : 4

Q.18 PAUSED is related to USPEDA in a certain way based on certain logic. In the same way, ZENITH is related to ZTNIHE. Which of the following are correct matches following the same logic?

i. TINGLE	(W) ACEMLS
ii. MORSEL	(X) UTLIFE
iii. CAMELS	(Y) SROMLE
iv. FUTILE	(Z) ELGNIT

- Ans**
- ☒ 1. i-W, ii-Y, iv-X only
 - ☒ 2. i-W, iv-X only
 - ☒ 3. ii-Y, iv-X only
 - ☒ 4. ii-Y, iii-Z, iv-X only

Question ID : 630680554949
Option 1 ID : 6306802169375
Option 2 ID : 6306802169372
Option 3 ID : 6306802169373
Option 4 ID : 6306802169374
Status : Answered
Chosen Option : 3

Q.19 Select the wrong term in the given alpha-numeric series.

Y17, A34, C51, F68, G85

- Ans**
- ☒ 1. Y17
 - ☒ 2. C51
 - ☒ 3. F68
 - ☒ 4. A34

Question ID : 630680554930
Option 1 ID : 6306802169297
Option 2 ID : 6306802169298
Option 3 ID : 6306802169299
Option 4 ID : 6306802169296
Status : Answered
Chosen Option : 3

Q.20 Six girls named A, B, C, D, E and F score different marks in an examination. B scores more marks than D. The ratio between marks of D and E is 5 : 8 respectively. F scores 5 marks more than A. C scores more marks than E. B scores lesser marks than C. The sum of marks obtained by D and E is 130. The ratio between marks of A and D is 11:10 respectively.

Which of the following is true based on the given information?
I. F scores 60 marks.
II. C scores the highest marks.

- Ans**
- ☒ 1. Both I and II
 - ☒ 2. Only I
 - ☒ 3. Only II
 - ☒ 4. Neither I nor II

Question ID : 630680554946
Option 1 ID : 6306802169362
Option 2 ID : 6306802169360
Option 3 ID : 6306802169361
Option 4 ID : 6306802169363
Status : Answered
Chosen Option : 3

Q.1 Select the correct conclusion based on the meaning of the underlined idiom:

It should be one's avowed policy to keep the flatterers at arm's length.

Conclusion:

1. The farther a person stays from flatterers, the better it is.
2. Having flatterers around boosts one's self-confidence.
3. Flatterers are not true well-wishers and should be kept at bay.

- Ans ☒ 1. Only 2 is correct
- ☒ 2. Both 1 and 3 are correct
- ☒ 3. Only 3 is correct
- ☒ 4. Both 2 and 3 are correct

Question ID : 630680554870

Option 1 ID : 6306802169057

Option 2 ID : 6306802169059

Option 3 ID : 6306802169058

Option 4 ID : 6306802169056

Status : Answered

Chosen Option : 1

Q.2 Select the word that is closest in meaning (SYNONYM) to the word given below

Glib

- Ans ☒ 1. Lethargy
- ☒ 2. Implausible
- ☒ 3. Inarticulate
- ☒ 4. Easy

Question ID : 630680554847

Option 1 ID : 6306802168964

Option 2 ID : 6306802168967

Option 3 ID : 6306802168966

Option 4 ID : 6306802168965

Status : Answered

Chosen Option : 4

Q.3 The sentence below has been divided into three parts. Select the part of the sentence that has an error. If the sentence has no error, select the option 'No Error'.

He had been led to his squad of commandos/ towards the target of a group of houses/ when he spotted enemy soldiers hiding in the houses.

- Ans ☒ 1. when he spotted enemy soldiers hiding in the houses.
- ☒ 2. towards the target of a group of houses
- ☒ 3. He had been led to his squad of commandos
- ☒ 4. No error

Question ID : 630680554851

Option 1 ID : 6306802168982

Option 2 ID : 6306802168981

Option 3 ID : 6306802168980

Option 4 ID : 6306802168983

Status : Answered

Chosen Option : 3

Q.4 There is a sentence that is missing in the paragraph below. Look at the paragraph and decide in which blank (1, 2, 3, or 4) the following sentence would best fit.

Sentence: It is also necessary to consider more meaningful aspects of literacy if we are to complete the transition we are in.

Literacy has traditionally been described as the ability to read and write.

____1____ UNESCO defines literacy as the ability to identify, understand, interpret, create, communicate, compute and use printed and written materials associated with varying contexts. ____2____. Literacy involves enabling individuals to achieve their goals, to develop their knowledge and potential, and to participate fully in their community and wider society. ____3____. It is no longer sufficient to consider whether a student can 'read' and 'write'. ____4____.

Ans ☒ 1. Blank 1

☒ 2. Blank 4

☒ 3. Blank 2

☒ 4. Blank 3

Question ID : 630680554862

Option 1 ID : 6306802169024

Option 2 ID : 6306802169027

Option 3 ID : 6306802169025

Option 4 ID : 6306802169026

Status : Answered

Chosen Option : 2

Q.5 Select the most appropriate meaning of the given proverb from the options

People who live in glass houses should not throw stones

Ans ☒ 1. Don't criticize someone if you're not perfect either; don't be a hypocrite

☒ 2. If someone whom I don't like doesn't like someone else whom I don't like, we can act like friends and unite against the other person (common in war)

☒ 3. People who wake up early or who get to places early have a better chance of success

☒ 4. The more you do something, the better you will become at it

Question ID : 630680554844

Option 1 ID : 6306802168952

Option 2 ID : 6306802168955

Option 3 ID : 6306802168954

Option 4 ID : 6306802168953

Status : Answered

Chosen Option : 1



Q.6 Some parts of a sentence have been jumbled up, and labelled P, Q, R and S. Select the option that gives the correct sequence in which these parts can be rearranged to form a meaningful and grammatically correct paragraph. Opening and Closing sentence indicate the start of the paragraph and end of the sentence paragraph.

Opening Sentence: Jane Goodall, a renowned primatologist and conservationist, was born on April 3, 1934, in London, England.

P. She spent several years living among chimpanzees, observing their behaviour and documenting social structures.

Q. Inspired by Goodall's work, many conservationists today continue to advocate for the protection of endangered species and their habitats.

R. Goodall's groundbreaking research on chimpanzees in Gombe Stream National Park, Tanzania, challenged existing scientific norms and expanded our understanding of primates.

S. In 1977, Goodall established the Jane Goodall Institute, dedicated to wildlife research, conservation, and community development.

Closing Sentence: Jane Goodall's contributions to primatology have left a lasting impact on the scientific community and conservation efforts worldwide.

- Ans
- ☒ 1. RQSP
 - ☒ 2. RSPQ
 - ☒ 3. SPQR
 - ☒ 4. PRSQ

Question ID : 630680554842

Option 1 ID : 6306802168945

Option 2 ID : 6306802168947

Option 3 ID : 6306802168946

Option 4 ID : 6306802168944

Status : Not Attempted and
Marked For Review

Chosen Option : --

Q.7 Select the correct conclusion based on the meaning of the underlined word:

Statement: The shopkeeper's gambit was to ask double the price.

Conclusion:

- i. The shopkeeper was fined for selling inferior quality goods at half the price.
- ii. Giving discounts on elevated prices is a clever plan intended to increase sales.
- iii. Consumers complained against the shopkeeper for selling adulterated foodstuff at exorbitant prices.
- iv. The announcement of an assured prize in the lucky draw was a risky action plan to gain advantage.

- Ans
- ☒ 1. Only ii is correct
 - ☒ 2. Both ii and iv are correct
 - ☒ 3. Only iii is correct
 - ☒ 4. Both i and iv are correct

Question ID : 630680554868

Option 1 ID : 6306802169048

Option 2 ID : 6306802169049

Option 3 ID : 6306802169050

Option 4 ID : 6306802169051

Status : Answered

Chosen Option : 2



Q.8

Select the correct conclusion based on the meaning of the underlined word:

Statement: His false accusations caused indignation all around.

i. The indigenous population has suffered profound injustice.

ii. It has become a common practice to level allegations against the opposition parties.

iii. The unjust treatment meted out to soldiers caused shock and anger.

iv. He has fallen into the debt trap and is going through a phase of depression.

Ans

✗

1. Both i and iv are correct

✗

2. Only ii is correct

✗

3. Both i and iii are correct

✓

4. Only iii is correct

Question ID : 630680554867

Option 1 ID : 6306802169045

Option 2 ID : 6306802169047

Option 3 ID : 6306802169044

Option 4 ID : 6306802169046

Status : Answered

Chosen Option : 2

Q.9

Match the following groups of words with the correct one-word substitutions.

phrase	one-word substitution
1. to pay money to use a product or service regularly	a. ascribe
2. to order treatment for someone	b. subscribe
3. to put thoughts into written or printed form	c. prescribe
4. to attribute a cause or characteristic to something	d. transcribe

Ans

✗

1. 1-d, 2-a, 3-b, 4-c

✓

2. 1-b, 2-c, 3-d, 4-a

✗

3. 1-a, 2-b, 3-c, 4-d

✗

4. 1-c, 2-d, 3-a, 4-b

Question ID : 630680554866

Option 1 ID : 6306802169042


Option 2 ID : 6306802169040

Option 3 ID : 6306802169043

Option 4 ID : 6306802169041

Status : Answered

Chosen Option : 2

Teachingninja.in

Q.10 Arrange the given sentences (1-6) in the correct order to form a coherent paragraph.

1. And, since there were no enemies, it nested on the ground in complete safety.
2. The goats ate the undergrowth which provided the dodo with cover; dogs and cats hunted and troubled the old bird.
3. Dodo, the size of a goose, securely inhabited the island of Mauritius.
4. The pigs and rats were not far behind who devoured the eggs and young ones, finishing off the feast.
5. This bird had lost its power of flight since there were no enemies in the island to fly from.
6. Then man discovered the dodos' paradise in around 1507 and with him came his familiars- dogs, cats, pigs, goats and rats.

Ans ☒ 1. 351624

☐ 2. 356241

☐ 3. 312564

☐ 4. 362451

Question ID : 630680554864

Option 1 ID : 6306802169034

Option 2 ID : 6306802169035

Option 3 ID : 6306802169033

Option 4 ID : 6306802169032

Status : Answered

Chosen Option : 3

Q.11 Select the most appropriate meaning of the given idiom

Make no bones about

Ans ☐ 1. Someone who is unpredictable and can cause damage if not kept in check

☐ 2. Eventually, after a long period of time

☒ 3. To state a fact so there are no doubts or objections

☐ 4. Not willing to accept the ideas of others

Question ID : 630680554843

Option 1 ID : 6306802168949

Option 2 ID : 6306802168948

Option 3 ID : 6306802168951

Option 4 ID : 6306802168950

Status : Answered

Chosen Option : 4

Q.12 Select the word that is closest in meaning (SYNONYM) to the word given below

Malign

Ans ☒ 1. Evil

☐ 2. Radical

☐ 3. Nihilistic

☐ 4. Insurgent

Question ID : 630680554846

Option 1 ID : 6306802168960

Option 2 ID : 6306802168963

Option 3 ID : 6306802168961

Option 4 ID : 6306802168962

Status : Answered

Chosen Option : 1



Q.13 The sentence below has been divided into three parts. Select the part of the sentence that has an error. If the sentence has no error, select the option 'No Error'.

A graduate of the University of Cincinnati, Stewart holds/ a bachelor's degree in German studies and/ a MBA in finance and international business.

- Ans
- ☒ 1. No error
 - ☒ 2. A graduate of the University of Cincinnati, Stewart holds
 - ☒ 3. a MBA in finance and international business.
 - ☒ 4. a bachelor's degree in German studies and

Question ID : 630680554848
Option 1 ID : 6306802168971
Option 2 ID : 6306802168968
Option 3 ID : 6306802168970
Option 4 ID : 6306802168969
Status : Answered
Chosen Option : 3

Q.14 Which of the following statements correctly uses the idiom 'kicked up a row' by substituting the underlined words?

- A. Even if we are not able to help our friends, we should not treat them coldly and formally.
B. The machine operator created a big fuss when he was admonished for not following the instructions correctly.
C. Success is important but not by resorting to unfair means.
D. The brothers have been running around ever since they had a dispute over their land.

- Ans
- ☒ 1. Statement C
 - ☒ 2. Statement D
 - ☒ 3. Statement B
 - ☒ 4. Statement A

Question ID : 630680554871
Option 1 ID : 6306802169060
Option 2 ID : 6306802169062
Option 3 ID : 6306802169061
Option 4 ID : 6306802169063
Status : Answered
Chosen Option : 2

Q.15 Select the word that is opposite in meaning (ANTONYM) to the word given below.

Incantation

- Ans
- ☒ 1. Reality
 - ☒ 2. Succession
 - ☒ 3. Liberal
 - ☒ 4. Abundant

Question ID : 630680554845
Option 1 ID : 6306802168956
Option 2 ID : 6306802168958
Option 3 ID : 6306802168957
Option 4 ID : 6306802168959
Status : Answered
Chosen Option : 4



Q.16 The sentence below has been divided into three parts. Select the part of the sentence that has an error. If the sentence has no error, select the option 'No Error'.

She decided to take a break/ from work, while she needed/ some time to recharge and rejuvenate.

- Ans ☒ 1. No error
- ☒ 2. She decided to take a break
- ☒ 3. some time to recharge and rejuvenate.
- ☒ 4. from work, while she needed

Question ID : 630680554849
Option 1 ID : 6306802168975
Option 2 ID : 6306802168972
Option 3 ID : 6306802168974
Option 4 ID : 6306802168973
Status : Answered
Chosen Option : 1

Q.17 In the following passage there are blanks, each of which has been numbered. Select the correct option to fill in the blanks.

Like all other good things in this world, leisure too can be used properly or ___1___ thoroughly. Most people do not know how to use their leisure simply because they get it so ___2___. Some people keep wondering what to do, but by the time they ___3___ to do something, it has already vanished. Others ___4___ around smoking, gossiping, backbiting and tearing reputations to the tiniest bits possible. Still others engage in ___5___ activities as window-shopping, watching senseless movies, playing computer games or chatting on mobile phones.

- Ans ☒ 1. 1-withered, 2-barely, 3-determine, 4-saunter, 5-noxious
- ☒ 2. 1-famished, 2-seldom, 3-propose, 4-dawdle, 5-baleful
- ☒ 3. 1-wasted, 2- readily, 3-decide, 4-loiter, 5-harmful
- ☒ 4. 1-abused, 2-rarely, 3-resolve, 4-lounge, 5-baneful

Question ID : 630680554869
Option 1 ID : 6306802169053
Option 2 ID : 6306802169055
Option 3 ID : 6306802169052
Option 4 ID : 6306802169054
Status : Answered
Chosen Option : 3

Q.18 Match the following groups of words with the correct one-word substitutions.

phrase	one-word substitution
1. a person who deliberately sets fire to a building	a. altruist
2. one who devotes one's life to the welfare of other people	b. bigot
3. one who does not believe in the existence of God	c. arsonist
4. one who has narrow and prejudiced religious views	d. atheist

- Ans ☒ 1. 1-c, 2-a, 3-d, 4-b
- ☒ 2. 1-d, 2-b, 3-c, 4-a
- ☒ 3. 1-a, 2-c, 3-b, 4-d
- ☒ 4. 1-b, 2-d, 3-a, 4-c

Question ID : 630680554865
Option 1 ID : 6306802169037
Option 2 ID : 6306802169036
Option 3 ID : 6306802169039
Option 4 ID : 6306802169038
Status : Answered
Chosen Option : 1



Q.19 Four sentences are given below. Find the odd sentence out.

- A. The webs of spiders provide the most vivid examples of animal structures built entirely in tension.
B. Man has long used suspension bridges made of ropes of steel and concrete, which bear loads in tension.
C. Animals and birds are great builders, using simple materials but employing sound engineering principles.
D. Beavers are natural engineers that use tree branches to construct dams, the divided end being pressed into the walls.

Ans ☒ 1. sentence D
☒ 2. sentence A
☒ 3. sentence C
☒ 4. sentence B

Question ID : 630680554863

Option 1 ID : 6306802169031

Option 2 ID : 6306802169028

Option 3 ID : 6306802169030

Option 4 ID : 6306802169029

Status : Not Attempted and Marked For Review

Chosen Option : --

Q.20 The sentence below has been divided into three parts. Select the part of the sentence that has an error. If the sentence has no error, select the option 'No Error'.

He will have been being disheartened/ by the telephone opinion/ poll published yesterday.

Ans ☒ 1. He will have been being disheartened
☒ 2. No error
☒ 3. by the telephone opinion
☒ 4. poll published yesterday.

Question ID : 630680554850

Option 1 ID : 6306802168976

Option 2 ID : 6306802168979

Option 3 ID : 6306802168977

Option 4 ID : 6306802168978

Status : Answered

Chosen Option : 1

