



Teachingninja.in



Latest Govt Job updates



Private Job updates



Free Mock tests available

Visit - teachingninja.in



Teachingninja.in

IB ACIO Grade-II

**Previous Year Paper
(Executive)
18 Jan, 2024 Shift 4**



INTELLIGENCE BUREAU

(Ministry of Home Affairs)

Government of India

Participant ID	
Application no	
Participant Name	
Test Center Name	
Test Date	18/01/2024
Test Time	5:30 PM - 6:30 PM
Subject	IB ACIO II Exe

Section : Current Affairs

Q.1 Which of the following statement is/are Incorrect about Himalaya Project recently resolved to declare Yaya Tso.

1. The panchayat of Chumathang village, along with GoI-UNDP-GEF SECURE Himalaya Project recently resolved to declare Yaya Tso as Ladakh's 3rd Biodiversity Heritage Site.
2. The resolution was signed on 17th December 2023 after multiple rounds of consultations between the village stakeholders and SECURE Himalaya Project to declare the high-altitude lake and its catchment as a Biodiversity Heritage Site.
3. The proposed Yaya Tso BHS will have an approximate area of 160 sq. km. which will also include the lake's watershed.

Ans ☒ 1. 3 and 2 only

☒ 2. 1,2 and 3

☒ 3. 2 only

☒ 4. 1 only

Question ID : 630680558081

Option 1 ID : 6306802181297

Option 2 ID : 6306802181298

Option 3 ID : 6306802181296

Option 4 ID : 6306802181295

Status : Answered

Chosen Option : 2

Q.2 Which of the following statement is correct about International Craft Summit 2023?

I. Odisha Chief Minister Naveen Patnaik in January 2023 inaugurated an 'International Craft Summit' in Jaipur.

II. International delegates from 15 countries have arrived in Jaipur to engage with local artisans and other stakeholders, informed the government.

Ans ☒ 1. Both I and II

☒ 2. Only II

☒ 3. Neither I nor II

☒ 4. Only I

Question ID : 630680556693

Option 1 ID : 6306802175764

Option 2 ID : 6306802175763

Option 3 ID : 6306802175765

Option 4 ID : 6306802175762

Status : Answered

Chosen Option : 2



Q.3 Which of the following statement is correct about Intersolar Europe 2023 exhibition?

- I. It was held in Munich, Germany from 14th to 16th June, 2023.
- II. Indian Renewable Energy Development Agency (IREDA) participated in the three-day "Intersolar Europe 2023" exhibition.

- Ans ☒ 1. Only I
- ☒ 2. Neither I nor II
- ☒ 3. Only II
- ☒ 4. Both I and II

Question ID : 630680556607
Option 1 ID : 6306802175418
Option 2 ID : 6306802175421
Option 3 ID : 6306802175419
Option 4 ID : 6306802175420
Status : Not Answered
Chosen Option : --

Q.4 Which of the following is / are the CORRECT statement(s) regarding awards approved on the eve of independence day 2023 to Armed Forces and Central Armed Police Forces personnel?

1. President Smt Droupadi Murmu approved 76 Gallantry awards.
2. These include nine posthumous to Armed Forces & CAPF personnel.

- Ans ☒ 1. Both 1 and 2
- ☒ 2. 1 only
- ☒ 3. Neither 1 nor 2
- ☒ 4. 2 only

Question ID : 630680558046
Option 1 ID : 6306802181156
Option 2 ID : 6306802181155
Option 3 ID : 6306802181158
Option 4 ID : 6306802181157
Status : Answered
Chosen Option : 4

Q.5 What is the theme of the World Economic Forum (WEF) Annual Meeting 2023?

- Ans ☒ 1. Correlation in a Fragmented World
- ☒ 2. Cooperation in a Fragmented World
- ☒ 3. Competition in a Fragmented World
- ☒ 4. Conflict in a Fragmented World

Question ID : 630680556596
Option 1 ID : 6306802175377
Option 2 ID : 6306802175374
Option 3 ID : 6306802175375
Option 4 ID : 6306802175376
Status : Answered
Chosen Option : 2

Q.6 Which of the following statement is/are CORRECT about Uttarakhand Public Services (Horizontal Reservation for Women) Bill, 2022?

1. On October 12, 2022, the Uttarakhand state cabinet authorised chief minister Pushkar Singh Dhami for bringing an ordinance on the issue of women's reservation in the state government jobs.
2. Uttarakhand Public Services (Horizontal Reservation for Women) Bill, 2022, was passed by state assembly in November 2022.
3. The Bill seeks to provide 35 per cent reservation to women in government jobs in order to ensure social justice, equality of opportunity, improvement in living standards and gender equality in public planning.

Ans ☒ 1. 3 only

☒ 2. 1 and 2 only

☒ 3. 1 and 3 only

☒ 4. 2 only

Question ID : 630680558068

Option 1 ID : 6306802181244

Option 2 ID : 6306802181246

Option 3 ID : 6306802181243

Option 4 ID : 6306802181245

Status : Answered

Chosen Option : 2

Q.7 Name the award received by the following scientists in January 2023.

1. Shri Khadar Valli Dudekula
2. Shri Modadugu Vijay Gupta
3. Shri Ganesh Nagappa Krishnarajanagara
4. Shri Arvind Kumar

Ans ☒ 1. Padma Shri

☒ 2. Bhatnagar Prizes

☒ 3. Padma Vibhushan

☒ 4. Padma Bhushan

Question ID : 630680558042

Option 1 ID : 6306802181140

Option 2 ID : 6306802181142

Option 3 ID : 6306802181141

Option 4 ID : 6306802181139

Status : Answered

Chosen Option : 2

Q.8 Which of the following statement is correct about Khelo India Para Games, 2023?

I. The 1st edition of Khelo India Para Games 2023 is being organized from 10th -17th December 2023.

II. Khelo India Para Games 2023 will held across 3 venues in the city of Delhi across 7 sports Disciplines (Para Archery, Par Athletics, Para Badminton, Para Table Tennis, Para Powerlifting, CP Football, Para Shooting).

Ans ☒ 1. Both I and II

☐ 2. Neither I nor II

☐ 3. Only II

☐ 4. Only I

Question ID : 630680556624

Option 1 ID : 6306802175488

Option 2 ID : 6306802175489

Option 3 ID : 6306802175487

Option 4 ID : 6306802175486

Status : Answered

Chosen Option : 1

Q.9 भारतीय न्याय संहिता विधेयक, 2023, निम्नलिखित में से किस अधिनियम का स्थान लेगा?

Ans ☐ 1. सिविल प्रक्रिया संहिता, 1908

☐ 2. आपराधिक प्रक्रिया संहिता, (1898), 1973

☒ 3. भारतीय दंड संहिता, 1860

☐ 4. भारतीय साक्ष्य अधिनियम, 1872

Question ID : 630680556645

Option 1 ID : 6306802175573

Option 2 ID : 6306802175571

Option 3 ID : 6306802175570

Option 4 ID : 6306802175572

Status : Answered

Chosen Option : 3

Q.10 Which of the following statement is/are INCORRECT about the announcement made by Central Government in November 2023 regarding modification to Senior Citizen's Savings Scheme?

1. The amended Senior Citizen's Savings (Fourth Amendment) Scheme, 2023, now allows depositors to extend their accounts multiple times upon maturity to benefit from its attractive interest rates for a shorter period.
2. The ministry has also amended the rules to not to allow premature closure of PPF account and changed the rules governing premature withdrawal under the National Savings Time Deposit scheme.

Ans ☐ 1. 2 only

☒ 2. Neither 1 nor 2

☐ 3. 1 and 2

☐ 4. 1 only

Question ID : 630680558061

Option 1 ID : 6306802181216

Option 2 ID : 6306802181218

Option 3 ID : 6306802181217

Option 4 ID : 6306802181215

Status : Answered

Chosen Option : 3

Q.11 Prime Minister Shri Narendra Modi has released India's 6G Vision "Bharat 6G Vision" document on March 23, 2023 which envisages India to be a front-line contributor in design, development and deployment of 6G technology _____.

- Ans
- ☐ 1. by 2025
 - ☐ 2. by 2028
 - ☐ 3. by 2035
 - ☒ 4. by 2030

Question ID : 630680556631
Option 1 ID : 6306802175514
Option 2 ID : 6306802175516
Option 3 ID : 6306802175517
Option 4 ID : 6306802175515
Status : Not Answered
Chosen Option : --

Q.12 Find the CORRECT statement/s about VAJRA PRAHAR 2023?

1. Exercise VAJRA PRAHAR is a joint exercise conducted between Indian Navy and US Navy Special Forces.
2. The 14th Edition commenced at the Joint Training Node, Umroi on 21st November, 2023.
3. The US contingent is represented by personnel from the 1st Special Forces Group (SFG) of US Special Forces.
4. It aims at sharing best practices and experiences in areas such as joint mission planning and operational tactics.

- Ans
- ☒ 1. 1,2,3 and 4
 - ☐ 2. 1,2 and 3 only
 - ☐ 3. 1,4 and 3 only
 - ☐ 4. 2,3 and 4 only

Question ID : 630680558054
Option 1 ID : 6306802181190
Option 2 ID : 6306802181187
Option 3 ID : 6306802181189
Option 4 ID : 6306802181188
Status : Answered
Chosen Option : 3

Q.13 Which of the following statement(s) is/ are correct about IIT Guwahati and ISRO Researchers Discovery of X-Ray Polarization in Extragalactic Black Hole Source in November 2023?

1. Large Magellanic Cloud X-3 (LMC X3) is a binary star system consisting of a black hole and a 'normal' star that is much hotter, bigger, and more massive than the Sun.
2. It is located in a satellite galaxy of our Milky Way, nearly 200,000 light-years away from Earth. Since its discovery in 1971, it has been observed by various satellites.

- Ans
- ☒ 1. Both 1 & 2
 - ☐ 2. 2 only
 - ☐ 3. Neither 1 nor 2
 - ☐ 4. 1 only

Question ID : 630680558040
Option 1 ID : 6306802181134
Option 2 ID : 6306802181132
Option 3 ID : 6306802181133
Option 4 ID : 6306802181131
Status : Answered
Chosen Option : 4

Q.14 Which of the following statement is/are CORRECT about India's updated Nationally Determined Contribution (NDC)?

1. In August 2023, Cabinet approved India's Updated Nationally Determined Contribution to be communicated to the United Nations Framework Convention on Climate Change.
2. This update to India's existing NDC translates the 'Panchamrit' announced at COP 26 into enhanced climate targets.
3. The update is a step towards achieving India's long term goal of reaching net-zero by 2070.
4. As per the updated NDC, India now stands committed to reduce Emissions Intensity of its GDP by 45 percent by 2030

Ans ☒ 1. 1 and 2 only

☒ 2. 1,2,3 and 4

☒ 3. 3,2, and 4 only

☒ 4. 3 and 4 only

Question ID : 630680558083

Option 1 ID : 6306802181303

Option 2 ID : 6306802181306

Option 3 ID : 6306802181305

Option 4 ID : 6306802181304

Status : Answered

Chosen Option : 2

Q.15 Which of the following is/are TRUE regarding Karthikeyan Murali?

1. In a remarkable chess feat in October 2023, the 24-year-old Indian chess grandmaster, Karthikeyan Murali, delivered a stunning blow to the world's number one player, Magnus Carlsen.
2. Karthikeyan's victory in the classical chess format at the ongoing Qatar Masters marked only the third instance where an Indian player emerged triumphant against Carlsen.
3. Karthikeyan's win occurred in the seventh round of the tournament, where he skillfully wielded the black pieces.

Ans ☒ 1. 1 & 2 only

☒ 2. 1,2 & 3

☒ 3. 2 & 3 only

☒ 4. 1 & 3

Question ID : 630680558032

Option 1 ID : 6306802181099

Option 2 ID : 6306802181101

Option 3 ID : 6306802181100

Option 4 ID : 6306802181102

Status : Answered

Chosen Option : 1



Q.16 Which of the following statement is correct about Constitution (105th Amendment) Act 2021?

I. President Droupadi Murmu has given her assent to the Constitution (105th Amendment) Act 2021.

II. This Act restores the power of State Governments to identify and specify Socially and Economically Backward Classes (SEBCs).

- Ans
- ☒ 1. Both I and II
 - ☒ 2. Neither I nor II
 - ☒ 3. Only II
 - ☒ 4. Only I

Question ID : 630680556661
Option 1 ID : 6306802175636
Option 2 ID : 6306802175637
Option 3 ID : 6306802175635
Option 4 ID : 6306802175634
Status : Answered
Chosen Option : 1

Q.17 Which of the following statement is correct about cyclone Michaung 2023?

I. The name of the cyclone 'Michaung' was proposed by Myanmar, which signifies resilience and fortitude.

II. This is the sixth cyclone to develop in the Indian Ocean in 2023 and the fourth to form in the Bay of Bengal.

- Ans
- ☒ 1. Only II
 - ☒ 2. Both I and II
 - ☒ 3. Only I
 - ☒ 4. Neither I nor II

Question ID : 630680556667
Option 1 ID : 6306802175659
Option 2 ID : 6306802175660
Option 3 ID : 6306802175658
Option 4 ID : 6306802175661
Status : Answered
Chosen Option : 2

Q.18 The Union Cabinet chaired by the Prime Minister Shri Narendra Modi has approved the eCourts Project Phase III as a Central Sector Scheme spanning four years with financial outlay of Rs.7210 crore. As part of the National eGovernance Plan, the e-Courts Project is under implementation since 2007 for ICT enablement of the Indian Judiciary the Phase II of which has concluded in _____.

- Ans
- ☒ 1. 2023
 - ☒ 2. 2022
 - ☒ 3. 2020
 - ☒ 4. 2021

Question ID : 630680556638
Option 1 ID : 6306802175542
Option 2 ID : 6306802175543
Option 3 ID : 6306802175545
Option 4 ID : 6306802175544
Status : Answered
Chosen Option : 1

Q.19 The Gazette notification to bring which of the following temple of Odisha to the protected monument list of Archaeological Survey of India (ASI) came on May 5 2023?

Ans ☒ 1. Brahmeswara Temple

☒ 2. Kapileshwar temple

☒ 3. Jagannath Temple

☒ 4. Mukteswara Temple

Question ID : 630680556680

Option 1 ID : 6306802175712

Option 2 ID : 6306802175710

Option 3 ID : 6306802175711

Option 4 ID : 6306802175713

Status : Not Answered

Chosen Option : --

Q.20 Which of the following statement is/are CORRECT about Abua Bir Dishom Abhiyan?

1. On November 6,2023, the Jharkhand government launched Abua Bir Dishom Abhiyan.
2. "Abua Bir Dishom Abhiyan" provides land title certificates to individuals and communities under the Forest Rights Act.
3. The titles cover areas such as grazing, fishing, access to water bodies, resource access, recognition of customary rights, among others.
4. The drive has been launched after nine years.

Ans ☒ 1. 3 and 4 only

☒ 2. 1 and 2 only

☒ 3. 2 and 3 only

☒ 4. 1,2,3 and 4

Question ID : 630680558076

Option 1 ID : 6306802181276

Option 2 ID : 6306802181275

Option 3 ID : 6306802181278

Option 4 ID : 6306802181277

Status : Not Answered

Chosen Option : --

Section : General Studies

Q.1 The National Forestry Action Plan identified which of the following interrelated basic issues confronting forestry development in India?

1. Protect existing forests resources
2. Improve forest productivity
3. Expand forest area by tree plantation on non-forest lands only
4. Strengthen the policy and institutional framework

Ans ☒ 1. 1, 2, 3 only

☒ 2. 1, 2, 4 only

☒ 3. 2, 3, 4 only

☒ 4. 1, 3, 4 only

Question ID : 630680557417

Option 1 ID : 6306802178723

Option 2 ID : 6306802178726

Option 3 ID : 6306802178724

Option 4 ID : 6306802178725

Status : Answered

Chosen Option : 2



Q.2 Section 3 of the Official Language Act 1963 provides important provisions relating to official language for Union and for use of Parliament.

Consider the following statements as per Section 3(3) of the Official Language Act of 1963 about the use of both Hindi and the English languages:

1. Both Hindi and English languages shall be used for resolutions, general orders, rules, notifications, administrative or other reports or press communiques issued or made by the Central Government or by a Ministry.
2. Administrative and other reports and official papers laid before a House or the Houses of Parliament shall be in both Hindi and English languages.
3. Contracts and agreements executed, and licenses, permits, notices and forms of tender issued, by or on behalf of the Central Government or any Ministry shall be in both Hindi and English languages.

Which of the given statements are correct?

- Ans**
- ☒ 1. 1 and 3 only
 - ☒ 2. 1, 2 and 3
 - ☒ 3. 2 and 3 only
 - ☒ 4. 1 and 2 only

Question ID : 630680557405

Option 1 ID : 6306802178677

Option 2 ID : 6306802178678

Option 3 ID : 6306802178676

Option 4 ID : 6306802178675

Status : Not Answered

Chosen Option : --

Q.3 Which of the following statement is correct about Dhamek stupa?

I. Dhamek Stupa is the most noticeable structure in Samath, near Varanasi.

II. The Stupa is 28 meters in diameter at the base and 43.6 meters in height, built partly of stone and partly of brick.

- Ans**
- ☒ 1. Only I
 - ☒ 2. Only II
 - ☒ 3. Both I and II
 - ☒ 4. Neither I nor II

Question ID : 630680557484

Option 1 ID : 6306802178995

Option 2 ID : 6306802178996

Option 3 ID : 6306802178997

Option 4 ID : 6306802178998

Status : Answered

Chosen Option : 1

Q.4 Consider the following statements about the reign of Humayun.

1. When Humayun came into power in 1530, the newly conquered territories and administration were not consolidated.
2. He also confronted the hostility of the Afghans, mainly Sher Khan in Bihar, on the one hand and Bahadur Shah, the ruler of Gujarat, on the other.
3. The Chaghatai nobles were in favourably inclined towards him and the Indian nobles, who had joined Babur's service, supported the Mughals at Humayun's accession.

Which of the given statements is/are correct?

- Ans**
- ☒ 1. Only 1
 - ☒ 2. 2 and 3 only
 - ☒ 3. 1 and 2 only
 - ☒ 4. 1 and 3 only

Question ID : 630680557395
Option 1 ID : 6306802178638
Option 2 ID : 6306802178636
Option 3 ID : 6306802178635
Option 4 ID : 6306802178637
Status : Answered
Chosen Option : 3

Q.5 Which of the following statements is/are correct with respect to 'Indian States' Energy Transition' 2023, prepared by the Institute for Energy Economics and Financial Analysis (IEEFA) along with EMBER and published in February 2023?

Statement 1: Tamil Nadu and Gujarat are the Indian states making the most progress in overall preparedness and commitment in the transition to clean electricity.

Statement 2: The report analyses 16 Indian states, which together account for 90% of the country's annual power requirement.

Statement 3: The report has measured the performance of 16 states in terms of four dimensions, i.e., decarbonisation, performance of the power system, readiness of the power ecosystem, and policies and political commitments.

- Ans**
- ☒ 1. 1, 2 and 3
 - ☒ 2. Only 1 and 2
 - ☒ 3. Only 2 and 3
 - ☒ 4. Only 1

Question ID : 630680557424
Option 1 ID : 6306802178754
Option 2 ID : 6306802178751
Option 3 ID : 6306802178752
Option 4 ID : 6306802178753
Status : Answered
Chosen Option : 1

Q.6 Which of the following countries does not share land boundary with India?

- Ans**
- ☒ 1. Bangladesh
 - ☒ 2. Bhutan
 - ☒ 3. Myanmar
 - ☒ 4. Tajikistan

Question ID : 630680557508
Option 1 ID : 6306802179091
Option 2 ID : 6306802179094
Option 3 ID : 6306802179092
Option 4 ID : 6306802179093
Status : Answered
Chosen Option : 4



Q.7 निम्नलिखित में से कौन भारत की संसद का अंग नहीं है?

- Ans
- ☐ 1. राष्ट्रपति
 - ☒ 2. विधान परिषद
 - ☐ 3. राज्यसभा
 - ☐ 4. लोकसभा

Question ID : 630680557549

Option 1 ID : 6306802179255

Option 2 ID : 6306802179258

Option 3 ID : 6306802179257

Option 4 ID : 6306802179256

Status : Answered

Chosen Option : 2

Q.8 Who among the following is seventh Siikh guru?

- Ans
- ☐ 1. Guru Hargobind
 - ☐ 2. Guru Har Kishan
 - ☒ 3. Guru Har Rai
 - ☐ 4. Guru Teg Bahadur

Question ID : 630680557482

Option 1 ID : 6306802178987

Option 2 ID : 6306802178989

Option 3 ID : 6306802178988

Option 4 ID : 6306802178990

Status : Answered

Chosen Option : 4

Q.9 At the time of independence, the variety of industries was very narrow and largely confined to which of the following?

I. Cotton textile

II. Jute

- Ans
- ☐ 1. Neither I nor II
 - ☐ 2. Only II
 - ☐ 3. Only I
 - ☒ 4. Both I and II

Question ID : 630680557528

Option 1 ID : 6306802179174

Option 2 ID : 6306802179172

Option 3 ID : 6306802179171

Option 4 ID : 6306802179173

Status : Answered

Chosen Option : 4



Q.10 In which of the following part of Indian constitution fundamental duties are inserted?

I. Part IVA

II. Part IV

- Ans** ☒ 1. Both I and II
☒ 2. Only I
☒ 3. Neither I nor II
☒ 4. Only II

Question ID : 630680557534

Option 1 ID : 6306802179197

Option 2 ID : 6306802179195

Option 3 ID : 6306802179198

Option 4 ID : 6306802179196

Status : Answered

Chosen Option : 2

Q.11 Which of the following statements about the Comptroller and Auditor-General of India are correct?

1. The Office of the Comptroller and Auditor General had its beginning in 1919.
2. The organisation that C&AG heads is known as Indian Audit and Accounts Department (IA and AD).
3. The office of the C&AG with its Headquarters at New Delhi is a vast organisation being the single audit authority for the Central, State and Union Territory Governments and local bodies.
4. C&AG was elected for the first time to the Board of Auditors of the UN with effect from July 1991.

- Ans** ☒ 1. Only 3 and 4
☒ 2. Only 1 and 4
☒ 3. Only 2 and 3
☒ 4. Only 1 and 2

Question ID : 630680557442

Option 1 ID : 6306802178825

Option 2 ID : 6306802178826

Option 3 ID : 6306802178824

Option 4 ID : 6306802178823

Status : Not Answered

Chosen Option : --

Q.12 Which of the following is a risk associated with implementation of green revolution in India?

I. It would Possibly increase the disparities between small and big farmers.

II. HYV crops were also more prone to attack by pests and the farmers who adopted this technology could lose everything in a pest attack.

- Ans** ☒ 1. Neither I nor II
☒ 2. Only II
☒ 3. Only I
☒ 4. Both I and II

Question ID : 630680557532

Option 1 ID : 6306802179190

Option 2 ID : 6306802179188

Option 3 ID : 6306802179187

Option 4 ID : 6306802179189

Status : Answered

Chosen Option : 3

Q.13 Who was the revenue minister of Akbar?

- Ans
- ☐ 1. Maansingh
 - ☐ 2. Birbal
 - ☐ 3. Mulla Do-Piyaza
 - ☒ 4. Todar Mal

Question ID : 630680557463
Option 1 ID : 6306802178912
Option 2 ID : 6306802178913
Option 3 ID : 6306802178914
Option 4 ID : 6306802178911

Status : Answered

Chosen Option : 4

Q.14 पर्यावरण प्रभाव मूल्यांकन में कई चरण शामिल होते हैं और प्रत्येक चरण परियोजना के समय प्रदर्शन को निर्धारित करने में समान रूप से महत्वपूर्ण होता है। निम्नलिखित चरणों को सही कालानुक्रमिक क्रम में व्यवस्थित कीजिए।

1. परिदृश्यन (Scoping)
2. प्रभाव-विश्लेषण (Impact-analysis)
3. संवीक्षा (Screening)
4. प्रशमन (Mitigation)

- Ans
- ☐ 1. 1, 2, 3, 4
 - ☒ 2. 3, 1, 2, 4
 - ☐ 3. 3, 2, 4, 1
 - ☐ 4. 4, 3, 2, 1

Question ID : 630680557433
Option 1 ID : 6306802178788
Option 2 ID : 6306802178787
Option 3 ID : 6306802178789
Option 4 ID : 6306802178790

Status : Answered

Chosen Option : 1

Q.15 Which of the following statement is correct about Great Himalaya?

- I. The folds of Great Himalayas are symmetrical in nature.
- II. The core of this part of Himalayas is composed of granite.

- Ans
- ☒ 1. Only II
 - ☐ 2. Only I
 - ☐ 3. Neither I nor II
 - ☐ 4. Both I and II

Question ID : 630680557499
Option 1 ID : 6306802179056
Option 2 ID : 6306802179055
Option 3 ID : 6306802179058
Option 4 ID : 6306802179057

Status : Answered

Chosen Option : 2

Q.16 Match List I with List II.

LIST I	LIST II
1. The two Itihāsas or Epics	A. Manuals of worship
2. The Āgamas	B. The codes of law
3. The Dharma Śāstras	C. Philosophical schools
4. The Darśhans	D. Ramayana and Mahābhārata

- Ans ☒ 1. 1-D, 2-A, 3-C, 4-B
☒ 2. 1-D, 2-A, 3-B, 4-C
☒ 3. 1-D, 2-C, 3-A, 4-B
☒ 4. 1-B, 2-A, 3-D, 4-C

Question ID : 630680557409
Option 1 ID : 6306802178694
Option 2 ID : 6306802178691
Option 3 ID : 6306802178692
Option 4 ID : 6306802178693
Status : Answered
Chosen Option : 2

Q.17 Consider the Following statements about Pandita Rama Bai.

1. She was amongst the important women social reformers in Maharashtra.
2. In 1890, she started Sharda Sadan, a home for widows.
3. Her book titled Amar Jiban is the first known autobiography written by an Indian woman.
4. She started the Vidhava Vivaha Uttejaka Mandal (Society for Encouragement of Widow Marriage) in 1865.

Which of the given statements are correct?

- Ans ☒ 1. 3 and 4 only
☒ 2. 1 and 2 only
☒ 3. 2, 3 and 4 only
☒ 4. 2 and 3 only

Question ID : 630680557390
Option 1 ID : 6306802178617
Option 2 ID : 6306802178615
Option 3 ID : 6306802178618
Option 4 ID : 6306802178616
Status : Answered
Chosen Option : 3

Q.18 In the context of open economy, forex stands for which of the following?

- Ans**
- ☐ 1. Foreign expenditure ratio
 - ☐ 2. Formal exchange rate
 - ☐ 3. Formal expenditure ratio
 - ☒ 4. Foreign exchange rate

Question ID : 630680557521
Option 1 ID : 6306802179145
Option 2 ID : 6306802179144
Option 3 ID : 6306802179146
Option 4 ID : 6306802179143
Status : Answered
Chosen Option : 4

Q.19 The Iron Age in North India is archaeologically represented by assemblages that mainly contain which of the following particular pottery types?

I. Painted Grey Ware (PGW)

II. Northern Black Polished Ware (NBPW)

- Ans**
- ☒ 1. Both I and II
 - ☐ 2. Only II
 - ☐ 3. Neither I nor II
 - ☐ 4. Only I

Question ID : 630680557465
Option 1 ID : 6306802178921
Option 2 ID : 6306802178920
Option 3 ID : 6306802178922
Option 4 ID : 6306802178919
Status : Not Answered
Chosen Option : --

Q.20 Consider the following functions of a Local Government in India.

1. Ensuring safe and continuous water supply
2. Providing electricity
3. Establishment of and maintenance of libraries and reading rooms.

Which of the above is/are its discretionary functions?

- Ans**
- ☐ 1. Only 1
 - ☐ 2. Only 1 and 2
 - ☒ 3. Only 3
 - ☐ 4. Only 2 and 3

Question ID : 630680557443
Option 1 ID : 6306802178827
Option 2 ID : 6306802178828
Option 3 ID : 6306802178829
Option 4 ID : 6306802178830
Status : Not Answered
Chosen Option : --

Q.1 Select the option that is true regarding the following labelled Assertion (A) and Reason (R).

Assertion (A)	Reason (R)
The system of equations: $9x + 6y = 11$ and $7x + ky = 9$ has no solution, if $k = \frac{14}{3}$.	System of equations $ax + by = c$ $dx + ey = f$ has no solution, if $\frac{a}{d} = \frac{b}{e} \neq \frac{c}{f}$

Ans

✓ 1. Both A and R are true and R is a correct explanation of A.

✗ 2.

Both A and R are true but R is not a correct explanation of A.

✗ 3. A is false and R is true.

✗ 4. A is true and R is false.

Question ID : 630680560600

Option 1 ID : 6306802191392

Option 2 ID : 6306802191393

Option 3 ID : 6306802191395

Option 4 ID : 6306802191394

Status : Not Answered

Chosen Option : --

Q.2 If A1 is 19 times more than A2, then A2 is what percentage less than A1?

Ans

✗ 1. 100 percent

✓ 2. 95 percent

✗ 3. 105 percent

✗ 4. 85 percent

Question ID : 630680557679

Option 1 ID : 6306802179778

Option 2 ID : 6306802179776

Option 3 ID : 6306802179777

Option 4 ID : 6306802179775

Status : Answered

Chosen Option : 2

Q.3 The average age of a group of 13 men is 55 years. 2 men leave the group and the average age of group increases by 1 year. What is the average age of 2 men who left the group?

Ans

✗ 1. 50.5 years

✗ 2. 48.5 years

✗ 3. 50 years

✓ 4. 49.5 years

Question ID : 630680557647

Option 1 ID : 6306802179650

Option 2 ID : 6306802179648

Option 3 ID : 6306802179649

Option 4 ID : 6306802179647

Status : Answered

Chosen Option : 4



Q.4 A question is given, followed by three statements labelled I, II and III. Identify which of the statements is/are sufficient to answer the question.

Question:

What is the total expense when the hostel has 189 occupants?

Statements: Total expenses of the hostel consist of two parts: one varies directly with the number of occupants and the other is fixed.

- I. When it had 150 occupants, its total expense was ₹79,500.
- II. When it had 240 occupants, its total expense was ₹1,15,500.
- III. When it had 200 occupants, its total expense was ₹99,000.

- Ans**
- ☒ 1. I and II only
 - ☒ 2. I only
 - ☒ 3. I, II and III
 - ☒ 4. I and II or I and III

Question ID : 630680557614
Option 1 ID : 6306802179516
Option 2 ID : 6306802179515
Option 3 ID : 6306802179518
Option 4 ID : 6306802179517
Status : Not Answered
Chosen Option : --

Q.5 If $x + y + z = 10$ and $x^2 + y^2 + z^2 = 80$, then what is the value of $4xy + 4yz + 4zx$?

- Ans**
- ☒ 1. 30
 - ☒ 2. 20
 - ☒ 3. 40
 - ☒ 4. 10

Question ID : 630680557730
Option 1 ID : 6306802179981
Option 2 ID : 6306802179980
Option 3 ID : 6306802179982
Option 4 ID : 6306802179979
Status : Answered
Chosen Option : 3

Q.6 In a class, the ratio of the number of boys to that of girls is 3 : 5. The number of students who passed to that of who failed is 7 : 3. Among boys, the number of those who passed to those who failed is in the ratio 2 : 1. Among girls, what is the ratio of the number of girls who passed to those who failed?

- Ans**
- ☒ 1. 15 : 8
 - ☒ 2. 9 : 4
 - ☒ 3. 18 : 7
 - ☒ 4. 12 : 5

Question ID : 630680557608
Option 1 ID : 6306802179492
Option 2 ID : 6306802179494
Option 3 ID : 6306802179493
Option 4 ID : 6306802179491
Status : Not Answered
Chosen Option : --



Q.7 Which of the following statements is/are correct?

- (a) A number is divisible by 125, if the last three digits of the number form a number that is divisible by 5^3 .
- (b) If a number is divisible by two numbers, then it is divisible by the product of the two numbers.
- (c) A number is divisible by 36, if the number is divisible by 4, 6 and 12.

- Ans**
- ☐ 1. (a) and (b)
- ☒ 2. (a) only
- ☐ 3. (b) and (c)
- ☐ 4. (b) only

Question ID : 630680557581
Option 1 ID : 6306802179384
Option 2 ID : 6306802179383
Option 3 ID : 6306802179386
Option 4 ID : 6306802179385
Status : Answered
Chosen Option : 3

Q.8 The cost of a motorbike is 75% less than the cost of a car. The cost of a car decreases by 25% and that of a motorbike increases by 40%.

Statement I: The new cost of a motorbike is $53\frac{1}{3}\%$ less than the new cost of a car.

Statement II: The total new cost of one car and two motorbikes is $3\frac{1}{3}\%$ more than their total initial cost.

Which of the above statements is/are correct?

- Ans**
- ☐ 1. Neither I nor II
- ☐ 2. II only
- ☒ 3. I only
- ☐ 4. Both I and II

Question ID : 630680557592
Option 1 ID : 6306802179430
Option 2 ID : 6306802179428
Option 3 ID : 6306802179427
Option 4 ID : 6306802179429
Status : Answered
Chosen Option : 3

Q.9 Pipes A and B can fill a tank in 6 hours and 15 hours, respectively. Pipe C is a drain pipe. When all the three pipes are opened together for 6 hours, then 65% of the tank is filled. Initially, pipes A and C are opened together for 8 hours and then C is closed and B is opened. Pipes A and B together will fill the remaining part of tank in ____ hours.

- Ans**
- ☐ 1. $3\frac{1}{3}$
- ☒ 2. $2\frac{6}{7}$
- ☐ 3. $3\frac{2}{3}$
- ☐ 4. $2\frac{3}{7}$

Question ID : 630680557616
Option 1 ID : 6306802179525
Option 2 ID : 6306802179524
Option 3 ID : 6306802179526
Option 4 ID : 6306802179523
Status : Not Answered
Chosen Option : --

Q.10 When 860, 1712 and 3203 are divided by a two-digit number x , then the remainder in each case is y . If $(2x + y)$ is written as $p \times q \times r^2$, where p, q and r are prime numbers, then what is the value of $(p + q + r)$?

- Ans** ☒ 1. 10
☐ 2. 12
☐ 3. 16
☐ 4. 15

Question ID : 630680557575
Option 1 ID : 6306802179359
Option 2 ID : 6306802179360
Option 3 ID : 6306802179362
Option 4 ID : 6306802179361
Status : Not Answered
Chosen Option : --

Q.11 What is the value of $\frac{72 - (25 \div 5) \times 2}{6 \times 5 + 1}$?

- Ans** ☐ 1. 1
☒ 2. 2
☐ 3. 3
☐ 4. 4

Question ID : 630680557668
Option 1 ID : 6306802179731
Option 2 ID : 6306802179732
Option 3 ID : 6306802179733
Option 4 ID : 6306802179734
Status : Answered
Chosen Option : 2

Q.12 The ratio of alcohol and water in solutions A and B is 3 : 5 and 5 : 7, respectively. Two litres of A is mixed with 5 litres of B and 3 litres of alcohol is also added to it to get a new solution C. In 1.5 litres of solution C, how much alcohol (in ml) should be mixed so that the ratio of alcohol and water in the final solution becomes 2 : 1?

- Ans** ☐ 1. 385
☐ 2. 405
☒ 3. 375
☐ 4. 395

Question ID : 630680557572
Option 1 ID : 6306802179348
Option 2 ID : 6306802179350
Option 3 ID : 6306802179347
Option 4 ID : 6306802179349
Status : Not Answered
Chosen Option : --



Q.13 Bala has thrice as much amount as that of Lalit and Lalit has 10 percent more amount than Vimal. If the average amount of all three of them is ₹1350, then how much amount is with Bala?

- Ans
- ☐ 1. ₹2455
 - ☐ 2. ₹2465
 - ☒ 3. ₹2475
 - ☐ 4. ₹2355

Question ID : 630680557688
Option 1 ID : 6306802179813
Option 2 ID : 6306802179814
Option 3 ID : 6306802179811
Option 4 ID : 6306802179812

Status : Answered

Chosen Option : 3

Q.14 Anil sells two pens at the rate of ₹1500 per pen. He earns a profit of 25 percent on one pen and loses 25 percent on the other pen. What will be the total profit or loss in whole transaction?

- Ans
- ☐ 1. ₹250 profit
 - ☐ 2. ₹280 profit
 - ☒ 3. ₹200 loss
 - ☐ 4. ₹150 loss

Question ID : 630680557701
Option 1 ID : 6306802179865
Option 2 ID : 6306802179863
Option 3 ID : 6306802179866
Option 4 ID : 6306802179864

Status : Answered

Chosen Option : 4

Q.15 A person borrows some money for 2 years at a certain rate of simple interest. If the ratio of principal and total interest is 5 : 4, then what is the annual rate of interest?

- Ans
- ☐ 1. 50 percent
 - ☒ 2. 40 percent
 - ☐ 3. 48 percent
 - ☐ 4. 35 percent

Question ID : 630680557654
Option 1 ID : 6306802179678
Option 2 ID : 6306802179676
Option 3 ID : 6306802179677
Option 4 ID : 6306802179675

Status : Answered

Chosen Option : 2



Q.16 The sum of two numbers is 176 and their difference is 16. What is the ratio of the two numbers?

- Ans**
- ✓ 1. 6 : 5
 - ✗ 2. 3 : 2
 - ✗ 3. 6 : 1
 - ✗ 4. 5 : 2

Question ID : 630680557711
Option 1 ID : 6306802179906
Option 2 ID : 6306802179903
Option 3 ID : 6306802179904
Option 4 ID : 6306802179905
Status : Answered
Chosen Option : 1

Q.17 A sum of ₹2600 is lent out at simple interest in two parts. One part at the annual rate of 18 percent and another part at the annual rate of 25 percent. If the total annual interest is ₹520, then what is the sum lent out at the rate of 25 percent per annum?

- Ans**
- ✗ 1. ₹657.66
 - ✓ 2. ₹742.85
 - ✗ 3. ₹798.89
 - ✗ 4. ₹642.68

Question ID : 630680557658
Option 1 ID : 6306802179694
Option 2 ID : 6306802179692
Option 3 ID : 6306802179693
Option 4 ID : 6306802179691
Status : Not Answered
Chosen Option : --

Q.18 Two trains C and D starts moving from stations R and S respectively towards each other. Trains take 4 hours 16 minutes and 3 hours 45 minutes to reach S and R respectively after they meet each other. If the speed of train C is 60 km/hr, then what is the speed of the train D?

- Ans**
- ✓ 1. 64 km/hr
 - ✗ 2. 72 km/hr
 - ✗ 3. 48 km/hr
 - ✗ 4. 56 km/hr

Question ID : 630680557725
Option 1 ID : 6306802179959
Option 2 ID : 6306802179962
Option 3 ID : 6306802179960
Option 4 ID : 6306802179961
Status : Not Answered
Chosen Option : --

Q.19 A and B run a $5\frac{1}{2}$ km race on a 500 m long circular track starting from the same point, simultaneously, in the same direction. The speed of A is 50% faster than B.

Which of the following statements is/are correct?

Statement I: A and B meet for the first time after starting the race when A covers 1200 m.

Statement II: A meets B three times during the race.

Ans ☒ 1. Neither I nor II

☒ 2. I and II

☒ 3. I only

☒ 4. II only

Question ID : 630680557622

Option 1 ID : 6306802179550

Option 2 ID : 6306802179549

Option 3 ID : 6306802179547

Option 4 ID : 6306802179548

Status : Not Answered

Chosen Option : --

Q.20 Naman sells an item at ₹ x , after giving two successive discounts each of 10% on its marked price. If he does not give any discount on the marked price, he earns a profit of 25%. The cost price of the item is ₹800. What is the value of x ?

Ans ☒ 1. 840

☒ 2. 810

☒ 3. 820

☒ 4. 830

Question ID : 630680557600

Option 1 ID : 6306802179459

Option 2 ID : 6306802179462

Option 3 ID : 6306802179461

Option 4 ID : 6306802179460

Status : Answered

Chosen Option : 3

Section : Reasoning and Logical Aptitude



Q.1 In the following question below are given some statements followed by some conclusions based on those statements. Taking the given statements to be true even if they seem to be at variance from commonly known facts. Read all the conclusions and then decide which of the given conclusion logically follows the given statements.

Statements:

I. No G are M.

II. Some A are M.

Conclusion:

I. Some M are A.

II. Some M are G.

Ans ☒ 1. Both conclusions I and II follows.

☒ 2. Only conclusion I follows.

☒ 3. Only conclusion II follows.

☒ 4. Neither conclusion follows.

Question ID : 630680557303

Option 1 ID : 6306802178269

Option 2 ID : 6306802178267

Option 3 ID : 6306802178268

Option 4 ID : 6306802178270

Status : Answered

Chosen Option : 2

Q.2 In the following question, select the missing number from the given series.

12, 24, 72, 288, 1440, ?

Ans ☒ 1. 8550

☒ 2. 8000

☒ 3. 8640

☒ 4. 8650

Question ID : 630680557365

Option 1 ID : 6306802178518

Option 2 ID : 6306802178516

Option 3 ID : 6306802178517

Option 4 ID : 6306802178515

Status : Answered

Chosen Option : 3

Q.3 If $29A17B20 = 32$ and $33A14B10 = 29$, then $11A8B3 = ?$

Ans ☒ 1. 8

☒ 2. 9

☒ 3. 11

☒ 4. 6

Question ID : 630680557376

Option 1 ID : 6306802178559

Option 2 ID : 6306802178561

Option 3 ID : 6306802178562

Option 4 ID : 6306802178560

Status : Answered

Chosen Option : 4



Q.4 Read the following information carefully and answer the question that follows. You must assume everything in the statement to be true and on the basis of the information given in the statement, decide which of the course of action not logically follow for pursuing.
Statement :- Safe drinking water is a fundamental human right, yet over 2 billion people lack access to it. This disparity leads to preventable diseases and hinders development.

- Ans** ☒ 1.
We should conserve water at home by fixing leaks, taking shorter showers, and using water-efficient appliances.
- ☒ 2.
We should invest in and upgrade water treatment facilities to effectively remove contaminants and ensure safe drinking water.
- ☒ 3.
We must stop rainwater harvesting systems to capture and utilize rainwater for non-potable purposes.
- ☒ 4.
Implement policies to protect watersheds and ecosystems that contribute to the sustainability of water sources.

Question ID : 630680556948
Option 1 ID : 6306802176703
Option 2 ID : 6306802176706
Option 3 ID : 6306802176705
Option 4 ID : 6306802176704
Status : Answered
Chosen Option : 4

Q.5 From the given option figures, select the one in which the question figure is hidden/embedded.



- Ans**
- ☒ 1.
- ☒ 2.
- ☒ 3.
- ☒ 4.

Question ID : 630680557359
Option 1 ID : 6306802178491
Option 2 ID : 6306802178493
Option 3 ID : 6306802178494
Option 4 ID : 6306802178492
Status : Answered
Chosen Option : 3

Q.6 In this question, a question is followed by two statements numbered (I) and (II). You have to decide whether the data provided in the statements are sufficient to answer the question. Read both the statements and decide the appropriate answer.
Q. There are five cartons numbered from 1 to 5, kept in a warehouse. The weight of each carton is different from the other. Which of the cartons is the heaviest?
I. Carton no. 1. is heavier than carton no. 5 but lighter than carton no. 3. Carton no. 4 is heavier than carton no. 3 but lighter than carton no. 2.
II. Carton no. 5. is heavier than carton no. 1 but lighter than carton no. 3. Carton no. 4 is heavier than carton no. 3.

Ans ☒ 1.
Data in Statement II alone is sufficient to answer the question while data in statement I is not.
☒ 2.
Data in statements I and II together are NOT sufficient to answer the question.
☒ 3.
Data in statements I and II together are necessary to answer the question.
☒ 4.
Data in Statement I alone is sufficient to answer the question while data in statement II is not.

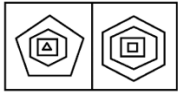
Question ID : 630680556938
Option 1 ID : 6306802176664
Option 2 ID : 6306802176666
Option 3 ID : 6306802176665
Option 4 ID : 6306802176663
Status : Answered
Chosen Option : 4

Q.7 Six friends Mayank, Varisha, Raju, Laxmi, Shivani and Meena who scored different marks in exam out of 100 but not necessarily in same order. Laxmi who scored 76 marks is younger than Mayank but older than Meena and Shivani. Varisha is younger than Raju who scored 98 marks. Difference of Raju and Varisha's marks is 11. Maynk's marks is just reverse digit of Varisha's marks. Mayank is younger than Varisha. Shivani is not the youngest among all. Meena scored 55 marks while Shivani scored 12 marks more than Meena and 9 Marks less than Laxmi.
Which of the following statement is true based on the above information?
I. Varisha is youngest in all.
II. Laxmi scored 76 marks.

Ans ☒ 1. Neither I nor II
☒ 2. Only I
☒ 3. Both I and II
☒ 4. Only II

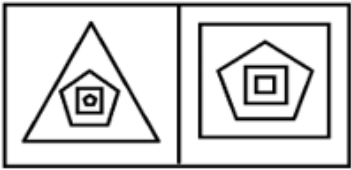
Question ID : 630680556921
Option 1 ID : 6306802176598
Option 2 ID : 6306802176595
Option 3 ID : 6306802176597
Option 4 ID : 6306802176596
Status : Answered
Chosen Option : 4

Q.8 In this figure, first figure is related to second figure following a certain pattern. Choose from among the alternatives, the figure pair, in which the two figures are related following the same pattern.




Ans

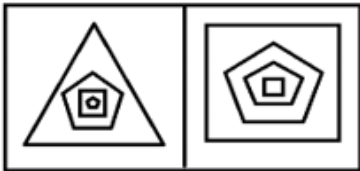
✗ 1.



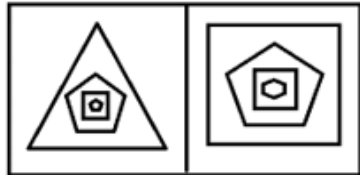
✗ 2.



✗ 3.



✓ 4.



Question ID : 630680556958
Option 1 ID : 6306802176743
Option 2 ID : 6306802176746
Option 3 ID : 6306802176744
Option 4 ID : 6306802176745
Status : Not Answered
Chosen Option : --

Q.9 There are six persons Baman, Fauzan, Deepak, Arvind, Enam and Charan each of them speaking different languages English, French, Chinese, German, Urdu and Hindi are but not necessarily in same order are sitting equidistance around a circular table. Each of them is either facing the center or facing outside opposite to the center

- There are exactly three persons facing towards center. each of them sitting together
- Baman is sitting between person who knows English and Deepak. All of them are facing towards center.
- Charan who knows German sitting opposite to person who knows Hindi.
- Enam is sitting third to the right of person who knows Urdu.
- Fauzan is sitting opposite to Arvind who knows English.
- Baman knows Hindi.
- Charan is sitting to the immediate left of Enam who knows French.

Which of the following statement is / are true based on the given arrangement?

- I. Deepak knows Urdu facing towards center.
- II. Enam who knows French is sitting opposite to Deepak.
- III. Arvind is sitting between person who knows French and Hindi.

- Ans**
- ☒ 1. Only III is true.
 - ☒ 2. Only II is true.
 - ☒ 3. All I, II and III are true.
 - ☒ 4. Only I is true.

Question ID : 630680556913
Option 1 ID : 6306802176565
Option 2 ID : 6306802176564
Option 3 ID : 6306802176566
Option 4 ID : 6306802176563
Status : Not Answered
Chosen Option : --

Q.10 In a certain code language, "SUCCESS" Is written as 'UQGAESU', and "FAILURE" is written as 'GPWJKYH'. Which of the following are correct matches as per the given code language?

WORD	CODE
I. REJECTS	(W) UPGRVCN
II. LETTERS	(X) URQGEMF
III. DOCIOTS	(Y) URECLCT

- Ans**
- ☒ 1. I-X only
 - ☒ 2. I-X , II-W only
 - ☒ 3. I-Y, II-W, III-X only
 - ☒ 4. III-Y , I-W only

Question ID : 630680556926
Option 1 ID : 6306802176617
Option 2 ID : 6306802176615
Option 3 ID : 6306802176616
Option 4 ID : 6306802176618
Status : Answered
Chosen Option : 3

Q.11 After arranging the given words according to dictionary order, which word will come at 'Fifth' position?

1. Source
2. Sound
3. Soup
4. Sour
5. Soul

Ans ✓ 1. Source

✗ 2. Soup

✗ 3. Sound

✗ 4. Soul

Question ID : 630680557297

Option 1 ID : 6306802178243

Option 2 ID : 6306802178245

Option 3 ID : 6306802178244

Option 4 ID : 6306802178246

Status : Answered

Chosen Option : 1

Q.12 In the following question, four letter pairs are given. The letters on left side of (–) is related to the letters on the right side of (–) with some Logic/Rule/Relation. Three are similar on basis of same Logic/Rule/Relation. Select the odd one out from the given alternatives.

Ans ✗ 1. ET – KZ

✓ 2. NP – TW

✗ 3. XM – DS

✗ 4. OW – UC

Question ID : 630680557324

Option 1 ID : 6306802178351

Option 2 ID : 6306802178353

Option 3 ID : 6306802178354

Option 4 ID : 6306802178352

Status : Answered

Chosen Option : 2



Q.13 In the following question below are given some statements followed by some conclusions based on those statements. Taking the given statements to be true even if they seem to be at variance from commonly known facts. Read all the conclusions and then decide which of the given conclusion logically follows the given statements.

Statements:

I. All Math are Science.

II. Some Science are Hindi.

Conclusion:

I. No Hindi are Math.

II. All Hindi are Science.

- Ans**
- ☒ 1. Both conclusions I and II follows.
 - ☒ 2. Only conclusion I follows.
 - ☒ 3. Neither conclusion follows.
 - ☒ 4. Only conclusion II follows.

Question ID : 630680557321

Option 1 ID : 6306802178341

Option 2 ID : 6306802178339

Option 3 ID : 6306802178342

Option 4 ID : 6306802178340

Status : Answered

Chosen Option : 3

Q.14 MPQO is related to PMTL in a certain way based on the English alphabetical order. In the same way, DGHF is related to GDKC. Which of the following are correct matches following the same logic?

(i)	DRGB	(W)	NKRJ
(ii)	KNOM	(X)	GOJY
(iii)	RGJL	(Y)	PIDM
(iv)	MLAP	(Z)	UDMI

- Ans**
- ☒ 1. iii-Y , i-W only
 - ☒ 2. i-Y, ii-X, iii-W only
 - ☒ 3. i-Y only
 - ☒ 4. ii-W only

Question ID : 630680556932

Option 1 ID : 6306802176642

Option 2 ID : 6306802176640

Option 3 ID : 6306802176639

Option 4 ID : 6306802176641

Status : Answered

Chosen Option : 4

Q.15 *P × Q means that P is the daughter of Q,

P – Q means that P is the sister of Q,

P + Q means that P is the father of Q

Based on the above information, find out which of the given statements can be the reason/s behind the assertion made below if it is given that “M – N + O × L”.

Assertion: L is daughter in law of J?

Reason A: J × M

Reason B: J + M

- Ans**
- ☒ 1. Only A is the reason behind the assertion
 - ☒ 2. Both A and B are reasons behind the assertion
 - ☒ 3. Only B is the reason behind the assertion
 - ☒ 4. Neither A nor B is the reason behind the assertion

Question ID : 630680556930

Option 1 ID : 6306802176632

Option 2 ID : 6306802176631

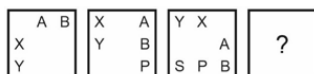
Option 3 ID : 6306802176633

Option 4 ID : 6306802176634

Status : Not Answered

Chosen Option : --

Q.16 In the following question, select the figure which can be placed at the sign of question mark (?) from the given alternatives.



- Ans**
- ☒ 1.

T	B	X
S		
P	Y	A
 - ☒ 2.

T	Y	X
S		
P	B	A
 - ☒ 3.

T	X	Y
S		
P	B	A
 - ☒ 4.

T	Y	X
B		
P	S	A

Question ID : 630680557349

Option 1 ID : 6306802178452

Option 2 ID : 6306802178451

Option 3 ID : 6306802178454

Option 4 ID : 6306802178453

Status : Answered

Chosen Option : 2

Q.17 Six lectures A1, A2, A3, A4, A5 and A6 are to be organized in a span of seven days from Sunday to Saturday. Only one lecture on each day in accordance with the following:

I. There should be a gap of two days between A5 and A4.

II. A2 should be organised on Tuesday and should not be organized just before A4.

III. A1 should not be organized on Thursday.

IV. One day there will be no lecture (Friday is not that day), just before that day A4 will be organised.

V. A3 should be organised immediately after A6.

On which day there is no lecture?

- Ans**
- ☒ 1. Thursday
 - ☒ 2. Saturday
 - ☒ 3. Monday
 - ☒ 4. Tuesday

Question ID : 630680557287

Option 1 ID : 6306802178205

Option 2 ID : 6306802178206

Option 3 ID : 6306802178203

Option 4 ID : 6306802178204

Status : Not Answered

Chosen Option : --

Q.18 In the following number-pairs, the second number is obtained by applying certain mathematical operations to the first number. Which numbers should replace X and Y so that the pattern followed by the two numbers on the left side of :: is same as that on the right side of :: ?

(NOTE : Operations should be performed on the whole numbers, without breaking down the numbers into its constituent digits. E.g. 13 – Operations on 13 such as adding / subtracting /multiplying etc. to 13 can be performed. Breaking down 13 into 1 and 3 and then performing mathematical operations on 1 and 3 is not allowed)

X : 56 :: 11 : Y

- Ans**
- ☒ 1. X=7, Y=132
 - ☒ 2. X=7, Y=144
 - ☒ 3. X=8, Y=132
 - ☒ 4. X=8, Y=144

Question ID : 630680556965

Option 1 ID : 6306802176773

Option 2 ID : 6306802176771

Option 3 ID : 6306802176772

Option 4 ID : 6306802176774

Status : Answered

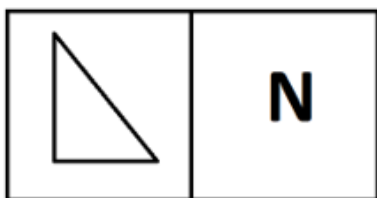
Chosen Option : 1



Q.19 Three of the following four figure pairs are alike in a certain way and thus form a group. Which is the one that does not belong to that group?

Ans

✗ 1.



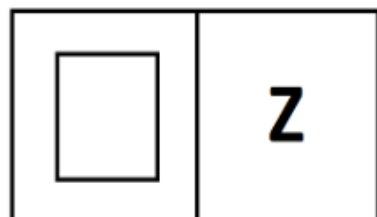
✗ 2.



✗ 3.



✓ 4.



Question ID : 630680556963

Option 1 ID : 6306802176765

Option 2 ID : 6306802176763

Option 3 ID : 6306802176764

Option 4 ID : 6306802176766

Status : Answered

Chosen Option : 4

Q.20 A series is given with one term missing. Select the correct alternative from the given ones that will complete the series.

RT, WE, BP, GA, ?

Ans

✓ 1. LL

✗ 2. LM

✗ 3. LT

✗ 4. LR

Question ID : 630680557341

Option 1 ID : 6306802178420

Option 2 ID : 6306802178419

Option 3 ID : 6306802178422

Option 4 ID : 6306802178421

Status : Answered

Chosen Option : 1

Section : English

Q.1 The five sentences labelled (1, 2, 3, 4, 5) given in this question. The first sentence is fixed and others when properly sequenced, form a coherent paragraph. Each sentence is labelled with a number. Decide on the proper order for the sentences and choose the correct option.

1.The city-state of Singapore and Switzerland's Zurich were named as the most expensive cities in the world.

2. The popular US destination, where prices have increased by 1.9% according to the study, slipped to third, tying with Switzerland's Geneva.

3. The rise of the latter, which jumped from sixth place on last year's list, was attributed to the strength of the Swiss Franc along with the high prices of groceries, household goods and recreation.

4. New York tied with Singapore for first place last year.

5. Singapore's costly transport and clothing were also noted.

- Ans** ☒ 1. 13542
- ☐ 2. 14523
- ☐ 3. 15243
- ☐ 4. 12435

Question ID : 630680556806
Option 1 ID : 6306802176108
Option 2 ID : 6306802176107
Option 3 ID : 6306802176109
Option 4 ID : 6306802176110
Status : Answered
Chosen Option : 3

Q.2 Select the option in which the word 'effeminate' is used correctly.

- Ans** ☐ 1. Having nothing to do for hours, he has become lethargic, effeminate and grouchy.
- ☐ 2. Effeminate, though they are, the two brothers are graceful and lithe in their gait and movements.
- ☒ 3. He is choosy about his party dress and spends a long time in front of the mirror – he is effeminate, in a way.
- ☐ 4. Her attitude towards her colleagues is rather effeminate – condescending and bossy.

Question ID : 630680556733
Option 1 ID : 6306802175912
Option 2 ID : 6306802175913
Option 3 ID : 6306802175914
Option 4 ID : 6306802175911
Status : Answered
Chosen Option : 1

Q.3 Four sentences are given as options. Choose the option that contains the odd sentence.





- Ans** ☐ 1. Imagine the power of something that can move an entire subcontinent.
- ☐ 2. An earthquake strikes without warning and when it does its power is immense.
- ☐ 3. When an earthquake strikes, the world trembles.
- ☒ 4. The power of a cyclonic storm is such that vast areas of land get inundated and cut off from the rest of the world.

Question ID : 630680556711
Option 1 ID : 6306802175825
Option 2 ID : 6306802175823
Option 3 ID : 6306802175826
Option 4 ID : 6306802175824
Status : Answered
Chosen Option : 4



Q.4 Match the following words with their SYNONYMS.

	List I		List II
1	Trap	A	Ambush
2	Audacity	B	Dreamy
3	Nostalgic	C	Nerve

- Ans  1. 1-A, 2-C, 3-B
 2. 1-A, 2-B, 3-C
 3. 1-B, 2-C, 3-A
 4. 1-C, 2-A, 3-B





Question ID : 630680556859
Option 1 ID : 6306802176320
Option 2 ID : 6306802176319
Option 3 ID : 6306802176322
Option 4 ID : 6306802176321
Status : Answered
Chosen Option : 1

Q.5 Select the correct conclusion based on the correct meaning of the word underlined in the following sentence.

Statement: Some people have no compunction in changing their jobs ever so often.

Conclusion:

- (i) It is a noble feeling to have, after all, as your conscience is clear.
(ii) At the end of their productive life, they might find themselves neither here nor there: a rolling stone gathers no moss.
(iii) You have no one to care for or worry about: you are the master of yourself.

- Ans  1. Only conclusion (ii) and (iii)
 2. Only conclusion (i) and (iii)
 3. Only conclusion (i)
 4. Only conclusion (ii)

Question ID : 630680556747
Option 1 ID : 6306802175969
Option 2 ID : 6306802175970
Option 3 ID : 6306802175967
Option 4 ID : 6306802175968
Status : Answered
Chosen Option : 2

Q.6 Identify the grammatically correct form of the given sentence.

Sentence: She is not the only girl who plays a football in the community park.

I. She is not the only girl who plays football in the community park.

II. She is not a only girl who plays football in the community park.

- Ans**
- ☒ 1. Only II is correct
 - ☒ 2. Only I is correct
 - ☒ 3. Both I and II are correct
 - ☒ 4. Neither I nor II is correct

Question ID : 630680556863
Option 1 ID : 6306802176336
Option 2 ID : 6306802176335
Option 3 ID : 6306802176337
Option 4 ID : 6306802176338
Status : Answered
Chosen Option : 2

Q.7 Identify the grammatically correct form of the given sentence.

Sentence: My eyes popped wide open as I seen that the Greek salad was priced at six hundred rupees.

I. My eyes popped wide open as I seen that the Greek salad is priced at six hundred rupees.

II. My eyes popped wide open as I saw that the Greek salad was priced at six hundred rupees.





- Ans**
- ☒ 1. Neither I nor II is correct
 - ☒ 2. Both I and II are correct
 - ☒ 3. Only II is correct
 - ☒ 4. Only I is correct

Question ID : 630680556893
Option 1 ID : 6306802176458
Option 2 ID : 6306802176457
Option 3 ID : 6306802176456
Option 4 ID : 6306802176455
Status : Answered
Chosen Option : 3



Q.8 Match the following words with their SYNONYMS.

	List I		List II
1	Amity	A	Futile
2	Belligerent	B	Contentious
3	Vain	C	Goodwill

- Ans  1. 1-C, 2-B, 3-A
 2. 1-A, 2-C, 3-B
 3. 1-A, 2-B, 3-C
 4. 1-B, 2-C, 3-A





Question ID : 630680556862
Option 1 ID : 6306802176333
Option 2 ID : 6306802176332
Option 3 ID : 6306802176331
Option 4 ID : 6306802176334
Status : Answered
Chosen Option : 1

Q.9 Select the correct conclusion based on the meaning of the underlined word.

Statement: Pari believes I have the perfect life here; she should know that the grass is always greener on the other side.

Conclusion:

- I. People are never satisfied with their own situation.
II. The things a person does not have always seem more appealing than the things he or she does have.

- Ans  1. Only conclusion I is correct
 2. Both conclusion I and II are correct
 3. Only conclusion II is correct
 4. Neither conclusion I nor II is correct

Question ID : 630680556829
Option 1 ID : 6306802176199
Option 2 ID : 6306802176201
Option 3 ID : 6306802176200
Option 4 ID : 6306802176202
Status : Answered
Chosen Option : 2

Q.10 Identify the grammatically correct form of the given sentence.

Sentence: He enjoys sweet dishes, but though he doesn't like to eat chocolate.

I. He enjoys sweet dishes, but he doesn't like to eat chocolate.

II. He enjoys sweet dishes, yet though he doesn't like to eat chocolate.

III. Though he enjoys sweet dishes, since he doesn't like to eat chocolate.

Ans

- ✓ 1. Only I is correct
✗ 2. Only I and II are correct
✗ 3. Only III is correct
✗ 4. Only II is correct

Question ID : 630680556878
Option 1 ID : 6306802176395
Option 2 ID : 6306802176398
Option 3 ID : 6306802176397
Option 4 ID : 6306802176396
Status : Answered
Chosen Option : 1

Q.11 Which of the following statements uses the given idiom correctly?

(i) Even when flood waters surround large parts of a town, some people have a whale of a time swimming in the waters and screaming.

(ii) A whale of a time was found washed ashore on the beach and people gathered to see it.

(iii) Our family had a whale of a time last year when we went on vacation to Himachal Pradesh.

Ans

- ✗ 1. All the statements
✓ 2. Only statements (i) and (iii)
✗ 3. Only statements (i) and (ii)
✗ 4. Only statements (ii) and (iii)

Question ID : 630680556758
Option 1 ID : 6306802176014
Option 2 ID : 6306802176012
Option 3 ID : 6306802176011
Option 4 ID : 6306802176013
Status : Answered
Chosen Option : 2

Q.12 Select the correct conclusion based on the meaning of the underlined word.

Statement: Book the tickets now, as the early bird gets the worm.

Conclusion:

I. Those who reply without thinking gets into trouble.

II. Those who are eager and early are the ones who most succeed.

- Ans
- ☒ 1. Only conclusion I is correct
 - ☒ 2. Both conclusion I and II are correct
 - ☒ 3. Only conclusion II is correct
 - ☒ 4. Neither conclusion I nor II is correct

Question ID : 630680556826
Option 1 ID : 6306802176187
Option 2 ID : 6306802176189
Option 3 ID : 6306802176188
Option 4 ID : 6306802176190
Status : Answered
Chosen Option : 1

Q.13 Select the conclusion(s) that follow(s) based on the correct meaning of the underlined segment in the following sentence.

Sentence:

Many justify their actions saying that the end justifies the means.

Conclusion:

(i) The means and ends are like two parallel lines; they never meet.

(ii) Those who have the means end up successful in life.

(iii) In a war, the more powerful side does not hesitate to use unconventional weapons to achieve victory.

- Ans
- ☒ 1. Only Conclusion (iii)
 - ☒ 2. Only conclusion (i)
 - ☒ 3. Only conclusion (ii)
 - ☒ 4. Only conclusion (i) and (iii)

Question ID : 630680556763
Option 1 ID : 6306802176033
Option 2 ID : 6306802176031
Option 3 ID : 6306802176032
Option 4 ID : 6306802176034
Status : Answered
Chosen Option : 3

Q.14 Four sentences are given as options. Choose the option that contains the odd sentence.

- Ans
- ☒ 1. Others may cause frustrations among the main stakeholders, namely students and teachers.
 - ☒ 2. In every nation, 'Excellent Teacher' awards are given every year.
 - ☒ 3. Some of these changes may produce desired positive results.
 - ☒ 4. Educational changes occur frequently in any national context.

Question ID : 630680556716
Option 1 ID : 6306802175845
Option 2 ID : 6306802175844
Option 3 ID : 6306802175846
Option 4 ID : 6306802175843
Status : Answered
Chosen Option : 1

Q.15 Select the option in which the word 'cynosure' is used correctly.

- Ans ☒ 1. My sister and I were the cynosure of all eyes when we entered the office; we had just been awarded special positions in the organisation.
- ☐ 2. The potholes and debris collected on the arterial road was the cynosure of the commuters.
- ☐ 3. The manager's promise of a pay rise was met with cynosure by all of us.
- ☐ 4. The weather was very cold and I had a cynosure in my nose.

Question ID : 630680556729
Option 1 ID : 6306802175895
Option 2 ID : 6306802175898
Option 3 ID : 6306802175897
Option 4 ID : 6306802175896
Status : Answered
Chosen Option : 1

Q.16 Select the option in which the word 'truant' is used correctly.

- Ans ☒ 1. The problem of truants is also the result of education being disengaged from real life.
- ☐ 2. There was a large family at the theme park and the children were playing truant in the water and enjoying themselves.
- ☐ 3. About twenty truant employees were recently rewarded with a letter of appreciation and a cash prize.
- ☐ 4. The law will eventually catch up with the truants who have been involved in a series of robberies in the neighbourhood.

Question ID : 630680556737
Option 1 ID : 6306802175927
Option 2 ID : 6306802175928
Option 3 ID : 6306802175930
Option 4 ID : 6306802175929
Status : Answered
Chosen Option : 4

Q.17 A sentence is missing in the paragraph given below. Decide in which blank (i.e., 1, 2, 3 or 4) the following sentence would fit best.

Sentence:

Nay, education would even help them in the performance of the narrowest sphere of womanly duty.

Paragraph:

It is the height of selfishness for men, who fully appreciate in their own case the great advantages of a good education, to deny these advantages to women. (1)____. There is no valid argument by which the exclusion of the female sex from the privilege of education can be defended. (2)____. It is argued that women have their domestic duties to perform and that if they were educated, they would bury themselves in their books and have little time for attending to the management of their households. (3)____. But women are no more liable to this temptation than men and most women would be able to do their household work all the better for being able to refresh their minds in the intervals of leisure with a little reading. (4)____. For, education involves knowledge of the means by which health may be preserved and enables a mother to consult such modern books as will tell her how to rear up her children into healthy men and women and skillfully nurse them when disease attacks her household.

- Ans ☐ 1. Blank 3
- ☒ 2. Blank 4
- ☐ 3. Blank 1
- ☐ 4. Blank 2

Question ID : 630680556705
Option 1 ID : 6306802175801
Option 2 ID : 6306802175802
Option 3 ID : 6306802175799
Option 4 ID : 6306802175800
Status : Answered
Chosen Option : 2



Q.18 Match the following words with their antonyms.

	List I		List II
1	Dubious	A	Latent
2	Gigantic	B	Indisputable
3	Industrious	C	Microscopic

Ans ☒ 1. 1-A, 2-B, 3-C

☒ 2. 1-B, 2-C, 3-A

☒ 3. 1-C, 2-A, 3-B

☒ 4. 1-C, 2-B, 3-A

Question ID : 630680556840

Option 1 ID : 6306802176243

Option 2 ID : 6306802176245

Option 3 ID : 6306802176246

Option 4 ID : 6306802176244

Status : Answered

Chosen Option : 2

Q.19 The passage given below has numbered blanks. Select the most appropriate option to fill in blank number 3.

To avoid the various foolish opinions which mankind holds, no superhuman genius is required. A few simple rules will keep you, not from all error, but from silly error. If the matter is one that can be (1)___ by observation, make the observation yourself. Aristotle could have avoided the mistake of (2)___ that women have fewer teeth than men, by the simple device of asking Mrs Aristotle to keep her mouth open while he (3)___. He did not do so because he thought he knew. Thinking that you know when in fact you don't is a fatal mistake, to which we are all (4)___. I believe myself that hedgehogs eat black beetles, because I have been told that they do; but if I were writing a book on the habits of hedgehogs, I should not (5)___ myself until I had seen one enjoying this unappetizing diet. Aristotle, however, was less cautious. Ancient and medieval authors knew all about unicorns and salamanders; not one of them thought it necessary to avoid dogmatic statements about them because he had never seen one of them.

Ans ☒ 1. counted

☒ 2. opened

☒ 3. watched

☒ 4. closed

Question ID : 630680556750

Option 1 ID : 6306802175980

Option 2 ID : 6306802175981

Option 3 ID : 6306802175982

Option 4 ID : 6306802175979

Status : Answered

Chosen Option : 1



Q.20 Identify the grammatically correct form of the given sentence.

Sentence: I tries to wake up early at the morning and perform my daily exercise.

I. I tried to wake up early at the morning and perform my daily exercise.

II. I tries to wake up early in the morning and performed my daily exercise.

III. I try to get up early every morning and do my daily exercise.

Ans ✗ 1. Only II and III are correct

✓ 2. Only III is correct

✗ 3. Only I is correct

✗ 4. All I, II and III are correct

Question ID : 630680556900

Option 1 ID : 6306802176485

Option 2 ID : 6306802176484

Option 3 ID : 6306802176483

Option 4 ID : 6306802176486

Status : Answered

Chosen Option : 2

