



# Teachingninja.in



**Latest Govt Job updates**



**Private Job updates**



**Free Mock tests available**

**Visit - [teachingninja.in](https://teachingninja.in)**



Teachingninja.in

# **IB SA & MTS**

**Previous Year Paper**  
**20 Dec, 2023**



INTELLIGENCE BUREAU

(Ministry of Home Affairs)

Government of India

Application Seq. No.	
Participant ID	
Participant Name	
Test Center Name	
Test Date	20/12/2023
Test Time	11:30 AM - 12:30 PM
Post Name	Both

Section : General Awareness

Q.1 Microfinance is a category of financial services targeting individuals and small businesses that lack access to conventional \_\_\_\_\_ and related services.

- Ans
1. transport

2. banking

3. manpower

4. security

Question ID : 630680520113

Option 1 ID : 6306802032884

Option 2 ID : 6306802032881

Option 3 ID : 6306802032883

Option 4 ID : 6306802032882

Status : Answered

Chosen Option : 2

Q.2 What should you do when you come across a traffic light displaying a Flashing Red Signal?

- Ans
1. Stop well before the stop line

2. You must come to a complete stop

3. You should slow down and proceed with caution

4. Proceed with caution

Question ID : 630680520141

Option 1 ID : 6306802032994

Option 2 ID : 6306802032993

Option 3 ID : 6306802032995

Option 4 ID : 6306802032996

Status : Answered

Chosen Option : 2

Q.3 Which one of the following terms was amended by Supreme Court of India in its handbook on gender stereotypes?

- Ans
- ☒ 1. Call girl
  - ☒ 2. Sex worker
  - ☒ 3. Punters
  - ☒ 4. Handicapped

Question ID : 630680520106  
Option 1 ID : 6306802032856  
Option 2 ID : 6306802032854  
Option 3 ID : 6306802032853  
Option 4 ID : 6306802032855  
Status : Not Answered  
Chosen Option : --

Q.4 When should you turn on the headlights before sunset?

- Ans
- ☒ 1. 45 minutes
  - ☒ 2. 10 minutes
  - ☒ 3. 30 minutes
  - ☒ 4. 60 minutes

Question ID : 630680520144  
Option 1 ID : 6306802033007  
Option 2 ID : 6306802033005  
Option 3 ID : 6306802033006  
Option 4 ID : 6306802033008  
Status : Not Answered  
Chosen Option : --

Q.5 As per Census 2011, the sex ratio for rural areas in India was \_\_\_\_\_.


- Ans
- ☒ 1. 929
  - ☒ 2. 923
  - ☒ 3. 943
  - ☒ 4. 949


Question ID : 630680520118  
Option 1 ID : 6306802032902  
Option 2 ID : 6306802032901  
Option 3 ID : 6306802032903  
Option 4 ID : 6306802032904  
Status : Not Answered  
Chosen Option : --


**Q.6** Which of the dashboard lights comes on when the parking brake is engaged with the ignition switch in the “ON” position?


Ans

- ✓ 1.


- ✗ 2.


- ✗ 3.


- ✗ 4.



Question ID : 630680520148

Option 1 ID : 6306802033023

Option 2 ID : 6306802033024

Option 3 ID : 6306802033022

Option 4 ID : 6306802033021

Status : Not Answered

Chosen Option : --

**Q.7** As per Census 2011, which of the following states had sex ratio more than 900 in urban areas, as per Census 2011?

- I. Gujarat
- II. Punjab

- Ans
- ✓ 1. Neither I nor II

✗ 2. Only II

✗ 3. Only I

✗ 4. Both I and II

Question ID : 630680520119

Option 1 ID : 6306802032908

Option 2 ID : 6306802032906

Option 3 ID : 6306802032905

Option 4 ID : 6306802032907

Status : Answered

Chosen Option : 2

Q.8 In the context of the Indian national movement, which of the following statements is correct regarding the Hindustan Socialist Republican Association (HSRA)?

- I. It was founded in 1928 at Ferozeshah Kotla in Delhi.
- II. Subhas Chandra Bose and Bal Gangadhar Tilak were among the founder-members of the HSRA.

- Ans 

✓

1. Only I

✗

2. Only II

✗

3. Both I and II

✗

4. Neither I nor II

Question ID : 630680520112

Option 1 ID : 6306802032877

Option 2 ID : 6306802032878

Option 3 ID : 6306802032879

Option 4 ID : 6306802032880

Status : Answered

Chosen Option : 4

Q.9 The Union Cabinet approved the eCourts Project phase III with financial outlay of Rs. \_\_\_\_\_.

- Ans 

✗

1. 55 crore

✗

2. 6500 crore

✓

3. 7210 crore

✗

4. 6210 crore

Question ID : 630680520105

Option 1 ID : 6306802032852

Option 2 ID : 6306802032850

Option 3 ID : 6306802032849

Option 4 ID : 6306802032851

Status : Not Answered

Chosen Option : --

Q.10 “National Quantum Mission” was approved by the union cabinet on April 2023 at a total cost of Rs. \_\_\_\_\_.

- Ans 

✓

1. 6003.65 crore

✗

2. 4006.00 crore

✗

3. 5500.25 crore

✗

4. 3004.23 crore

Question ID : 630680520102

Option 1 ID : 6306802032840

Option 2 ID : 6306802032838

Option 3 ID : 6306802032839

Option 4 ID : 6306802032837

Status : Answered

Chosen Option : 1

Q.11 Microfinance is an economic tool designed to promote financial inclusion, which enables poor and low-income households for which of the following?

- I. To come out of poverty.
- II. To increase their income levels.
- III. To improve their overall living standards.

Ans ☒ 1. Only I and III

☒ 2. I, II and III

☒ 3. Only II and III

☒ 4. Only I and II

Question ID : 630680520115

Option 1 ID : 6306802032891

Option 2 ID : 6306802032892

Option 3 ID : 6306802032890

Option 4 ID : 6306802032889

Status : Answered

Chosen Option : 2

Q.12 The Supreme Court of India directed Centre to collect data from states, UTs on social security schemes belonging to \_\_\_\_\_.

Ans ☒ 1. Old age person

☒ 2. Minorities

☒ 3. Disabled person

☒ 4. Womens

Question ID : 630680520104

Option 1 ID : 6306802032846

Option 2 ID : 6306802032848

Option 3 ID : 6306802032845

Option 4 ID : 6306802032847

Status : Not Answered

Chosen Option : --

Q.13 Which of the following statements is correct about Harappan architecture?

- I. Each Harappan city had a well fortified citadel.
- II. The largely regular planning of the streets and certain uniformity throughout the area of Harappan culture in such features as weights and measures, the size of bricks and even the layout of the great cities are noticeable characteristics.

Ans ☒ 1. Both I and II

☒ 2. Only II

☒ 3. Only I

☒ 4. Neither I nor II

Question ID : 630680520128

Option 1 ID : 6306802032943

Option 2 ID : 6306802032942

Option 3 ID : 6306802032941

Option 4 ID : 6306802032944

Status : Answered

Chosen Option : 1

Q.14 Who wrote the book “A shot at History : My obsessive Journey to Olympic Gold and Beyond”?

- Ans
- ☐ 1. Arjun Singh
  - ☐ 2. Anantjeet Singh Naruka
  - ☐ 3. Divyansh Singh Panwar
  - ☒ 4. Abhinav Bindra

Question ID : 630680520099  
Option 1 ID : 6306802032825  
Option 2 ID : 6306802032827  
Option 3 ID : 6306802032828  
Option 4 ID : 6306802032826  
Status : Answered  
Chosen Option : 4

Q.15 What is the most important aspect of driving?

- Ans
- ☐ 1. Entertainment
  - ☐ 2. Multitasking
  - ☒ 3. Concentration
  - ☐ 4. Speed

Question ID : 630680520139  
Option 1 ID : 6306802032988  
Option 2 ID : 6306802032986  
Option 3 ID : 6306802032985  
Option 4 ID : 6306802032987  
Status : Answered  
Chosen Option : 3

Q.16 Who was the first president of the Indian National Congress?

- Ans
- ☐ 1. Dadabhai Naoraji
  - ☐ 2. Romesh Chandra Dutt
  - ☐ 3. Pherozeshah Mehta
  - ☒ 4. W.C. Bonnerjee

Question ID : 630680520111  
Option 1 ID : 6306802032874  
Option 2 ID : 6306802032875  
Option 3 ID : 6306802032873  
Option 4 ID : 6306802032876  
Status : Answered  
Chosen Option : 4



Q.17 Which of the following statements is correct about state executive?

- I. State executive consists of Governor and Council of Ministers with Chief Minister as its head.
- II. The Governor of a State is appointed by the President for a term of five years and holds office during his pleasure.

- Ans 

✔

1. Both I and II

✖

2. Only I

✖

3. Neither I nor II

✖

4. Only II

Question ID : 630680520123

Option 1 ID : 6306802032923

Option 2 ID : 6306802032921

Option 3 ID : 6306802032924

Option 4 ID : 6306802032922

Status : Answered

Chosen Option : 1

Q.18



What is the dashboard light name shown in the figure?

- Ans 

✖

1. Transaxle Warning Light

✖

2. Brake System Warning Light

✔

3. Immobilizer System Light

✖

4. Oil Pressure Light

Question ID : 630680520147

Option 1 ID : 6306802033020

Option 2 ID : 6306802033019

Option 3 ID : 6306802033018

Option 4 ID : 6306802033017

Status : Answered

Chosen Option : 3

Q.19 Santiniketan institution was started in \_\_\_\_\_.

- Ans 

✖

1. 1905

✖

2. 1907

✖

3. 1903

✔

4. 1901

Question ID : 630680520109

Option 1 ID : 6306802032867

Option 2 ID : 6306802032868

Option 3 ID : 6306802032866

Option 4 ID : 6306802032865

Status : Answered

Chosen Option : 2

Q.20 What is the most important point in tyre maintenance?

- Ans
- ✔ 1. maintaining a proper inflation pressure
  - ✘ 2. Not rotating the tires
  - ✘ 3. Re-treading the tires
  - ✘ 4. Replacing tires with worn out treads

Question ID : 630680520146  
Option 1 ID : 6306802033013  
Option 2 ID : 6306802033016  
Option 3 ID : 6306802033015  
Option 4 ID : 6306802033014  
Status : Answered  
Chosen Option : 1

Q.21 Which of the following statements is correct regarding the Brahmaputra river?

- I. It is known as the Tsang po in Tibet.
- II. It is known as Meghna in Bangladesh.

- Ans
- ✘ 1. Neither I nor II
  - ✘ 2. Both I and II
  - ✘ 3. Only II
  - ✔ 4. Only I

Question ID : 630680520117  
Option 1 ID : 6306802032900  
Option 2 ID : 6306802032899  
Option 3 ID : 6306802032898  
Option 4 ID : 6306802032897  
Status : Answered  
Chosen Option : 4

Q.22 Who wrote an autobiography 'Unbreakable'?

- Ans
- ✘ 1. Dipa Karmakar
  - ✘ 2. P.V. Sindhu
  - ✔ 3. Mary Kom
  - ✘ 4. Saina Nehwal

Question ID : 630680520100  
Option 1 ID : 6306802032829  
Option 2 ID : 6306802032831  
Option 3 ID : 6306802032832  
Option 4 ID : 6306802032830  
Status : Not Answered  
Chosen Option : --

Q.23 What should you locate first when using a map to navigate?

- Ans
- ✓ 1. Your current location and destination
  - ✗ 2. The index
  - ✗ 3. The scale of the map
  - ✗ 4. The nearest landmark

Question ID : 630680520142

Option 1 ID : 6306802032999

Option 2 ID : 6306802032998

Option 3 ID : 6306802032997

Option 4 ID : 6306802033000

Status : Answered

Chosen Option : 1

Q.24



Which of the Traffic Police Hand Signals is shown in the image?

- Ans
- ✗ 1. To start vehicles coming from right
  - To stop vehicles approaching
  - ✗ 2. simultaneously from front and behind
  - ✓ 3. To stop vehicles approaching from behind
  - ✗ 4. To change sign

Question ID : 630680520140

Option 1 ID : 6306802032991

Option 2 ID : 6306802032992

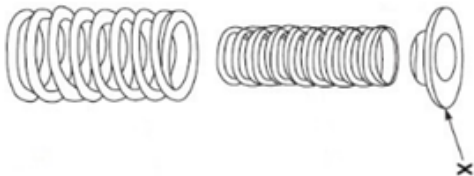
Option 3 ID : 6306802032990

Option 4 ID : 6306802032989

Status : Answered

Chosen Option : 1

Q.25



Name the part marked ‘X’ shown in the figure.

- Ans
- ✗ 1. Collets
  - ✗ 2. Valve Spring
  - ✗ 3. Guide
  - ✓ 4. Spring Retainer

Question ID : 630680520145  
Option 1 ID : 6306802033010  
Option 2 ID : 6306802033011  
Option 3 ID : 6306802033009  
Option 4 ID : 6306802033012  
Status : Not Answered  
Chosen Option : --

Q.26 Who of the following was the founder of the Servants of India Society?

- Ans
- ✗ 1. Bal Gangadhar Tilak
  - ✗ 2. Subhas Chandra Bose
  - ✗ 3. Vinayak Damodar Savarkar
  - ✓ 4. Gopal Krishna Gokhale

Question ID : 630680520110  
Option 1 ID : 6306802032869  
Option 2 ID : 6306802032871  
Option 3 ID : 6306802032872  
Option 4 ID : 6306802032870  
Status : Answered  
Chosen Option : 4

Q.27 Which of the following became Tamil Nadu’s first biodiversity heritage site?

- Ans
- ✗ 1. Mavdasaru
  - ✗ 2. Hogrikan
  - ✓ 3. Arittapatti
  - ✗ 4. Ambaraguda

Question ID : 630680520107  
Option 1 ID : 6306802032860  
Option 2 ID : 6306802032858  
Option 3 ID : 6306802032857  
Option 4 ID : 6306802032859  
Status : Answered  
Chosen Option : 1

Q.28 Executive power of the State is vested in \_\_\_\_\_.

- Ans
1. Advocate general

2. Chief minister

3. Home minister

4. Governor

Question ID : 630680520121

Option 1 ID : 6306802032915

Option 2 ID : 6306802032913

Option 3 ID : 6306802032914

Option 4 ID : 6306802032916

Status : Answered

Chosen Option : 2

Q.29 Which of the following Articles of the Indian Constitution is related with protection of life and personal liberty?

- Ans
1. Article 17

2. Article 19

3. Article 21

4. Article 15

Question ID : 630680520120

Option 1 ID : 6306802032910

Option 2 ID : 6306802032911

Option 3 ID : 6306802032912

Option 4 ID : 6306802032909

Status : Answered

Chosen Option : 3

Q.30 Who among the following has written Mahabharata?

- Ans
1. Valmiki

2. Tulsidas

3. Maharishi Manu

4. Ved Vyas

Question ID : 630680520125

Option 1 ID : 6306802032931

Option 2 ID : 6306802032932

Option 3 ID : 6306802032930

Option 4 ID : 6306802032929

Status : Answered

Chosen Option : 4

Q.31 Who is the facilitator or mentor of Self Help Group – Bank Linkage Program (SHG-BLP)?

- Ans
1. SIDBI

2. NABARD

3. SEBI

4. NHB

Question ID : 630680520114

Option 1 ID : 6306802032888

Option 2 ID : 6306802032885

Option 3 ID : 6306802032887

Option 4 ID : 6306802032886

Status : Answered

Chosen Option : 2

Q.32 When should you turn on headlights in fog or rain, when visibility is reduced to \_\_\_\_\_.

- Ans
- ☒ 1. less than 150 metres
  - ☒ 2. less than 50 metres
  - ☒ 3. less than 200 metres
  - ☒ 4. less than 100 metres

Question ID : 630680520143  
Option 1 ID : 6306802033003  
Option 2 ID : 6306802033001  
Option 3 ID : 6306802033004  
Option 4 ID : 6306802033002  
Status : Answered  
Chosen Option : 4

Q.33 “The Race of My Life” book captures the extraordinary journey of \_\_\_\_\_.

- Ans
- ☒ 1. Hima Das
  - ☒ 2. Hitendra Singh Rawat
  - ☒ 3. Milkha Singh
  - ☒ 4. P.T. Usha

Question ID : 630680520101  
Option 1 ID : 6306802032835  
Option 2 ID : 6306802032836  
Option 3 ID : 6306802032833  
Option 4 ID : 6306802032834  
Status : Not Answered  
Chosen Option : --

Q.34 Which of the following is a tributary of the Krishna river?

- Ans
- ☒ 1. Wardha
  - ☒ 2. Bhima
  - ☒ 3. Kabini
  - ☒ 4. Manjra

Question ID : 630680520116  
Option 1 ID : 6306802032895  
Option 2 ID : 6306802032894  
Option 3 ID : 6306802032896  
Option 4 ID : 6306802032893  
Status : Answered  
Chosen Option : 2

Q.35 Timeline of the National Quantum Mission is from \_\_\_\_\_.

- Ans
- ☒ 1. 2020-21 to 2024-25
  - ☒ 2. 2024-25 to 2030-31
  - ☒ 3. 2023-24 to 2030-31
  - ☒ 4. 2022-23 to 2028-29

Question ID : 630680520103  
Option 1 ID : 6306802032841  
Option 2 ID : 6306802032844  
Option 3 ID : 6306802032843  
Option 4 ID : 6306802032842  
Status : Answered  
Chosen Option : 4

Q.36 Shri Kashi Vishwanath Temple is dedicated to lord \_\_\_\_\_ and is in \_\_\_\_\_.

- Ans
- ☒ 1. Vishnu, Kashi
  - ☐ 2. Shiva, Kashi
  - ☐ 3. Shiva, Prayagraj
  - ☐ 4. Vishnu, Prayagraj

Question ID : 630680520126  
Option 1 ID : 6306802032933  
Option 2 ID : 6306802032935  
Option 3 ID : 6306802032936  
Option 4 ID : 6306802032934  
Status : Answered  
Chosen Option : 3

Q.37 Which of the following book in English language was awarded by Sahitya Academy in 2022?

- Ans
- ☐ 1. Trying to Say Goodbye
  - ☐ 2. The Sari Shop
  - ☐ 3. Em and the bid Hoom
  - ☒ 4. All The Lives We Never Lived

Question ID : 630680520124  
Option 1 ID : 6306802032926  
Option 2 ID : 6306802032928  
Option 3 ID : 6306802032927  
Option 4 ID : 6306802032925  
Status : Not Answered  
Chosen Option : --

Q.38 Which of the following statement is correct about special powers of governors?

I. In respect of Nagaland, Governor has special responsibility under Article 371 A of the Constitution with respect to law and order and even though it is necessary for him to consult Council of Ministers in matters relating to law and order, he can exercise his individual judgment as to the action to be taken.  
II. In respect of Arunachal Pradesh, Governor has special responsibility under Article 371H of the Constitution with respect to law and order and in discharge of his functions in relation thereto.

- Ans
- ☒ 1. Both I and II
  - ☐ 2. Only II
  - ☐ 3. Only I
  - ☐ 4. Neither I nor II

Question ID : 630680520122  
Option 1 ID : 6306802032919  
Option 2 ID : 6306802032918  
Option 3 ID : 6306802032917  
Option 4 ID : 6306802032920  
Status : Answered  
Chosen Option : 1

Q.39 Which one of the following states notified India's first slender loris sanctuary in October 2022?

- Ans    ☒ 1. Tamil Nadu
- ☐ 2. Karnataka
- ☐ 3. Maharashtra
- ☐ 4. Kerala

Question ID : 630680520108  
Option 1 ID : 6306802032862  
Option 2 ID : 6306802032861  
Option 3 ID : 6306802032863  
Option 4 ID : 6306802032864  
Status : Not Answered  
Chosen Option : --

Q.40 Reh festival is celebrated by which of the following tribe of India?

- Ans    ☐ 1. Hrusso
- ☐ 2. Adi
- ☐ 3. Tagin
- ☒ 4. Idu-mismi

Question ID : 630680520127  
Option 1 ID : 6306802032938  
Option 2 ID : 6306802032940  
Option 3 ID : 6306802032937  
Option 4 ID : 6306802032939  
Status : Answered  
Chosen Option : 4

Section : Quantitative Aptitude

Q.1 What is the sum of first five prime numbers?

- Ans    ☒ 1. 28
- ☐ 2. 30
- ☐ 3. 27
- ☐ 4. 29

Question ID : 630680520053  
Option 1 ID : 6306802032641  
Option 2 ID : 6306802032644  
Option 3 ID : 6306802032642  
Option 4 ID : 6306802032643  
Status : Answered  
Chosen Option : 1



**Q.2** M and N together can complete a work in 80 days. They started the work together but after 40 days M left the work. If the remaining work is completed by N in 100 more days, then M alone can complete the entire work in how many days?

- Ans
1.

350/3 days

2.

180 days

3.

150 days

4.

400/3 days

Question ID : 630680520062

Option 1 ID : 6306802032677

Option 2 ID : 6306802032678

Option 3 ID : 6306802032680

Option 4 ID : 6306802032679

Status : Not Answered

Chosen Option : --

**Q.3** What is the solution to the following system of equation?

$$3x + 2y + z = 2$$

$$4x + 3y - z = 7$$

$$2x + 7y + 2z = -7$$

- Ans
1.

$x = 2, y = 1, z = -2$

2.

$x = -1, y = 3, z = -1$

3.

$x = 2, y = -1, z = -2$

4.

$x = 1, y = -2, z = 2$

Question ID : 630680520065

Option 1 ID : 6306802032691

Option 2 ID : 6306802032692

Option 3 ID : 6306802032689

Option 4 ID : 6306802032690

Status : Not Answered

Chosen Option : --

**Q.4** A train starts at 4:00 pm from Mumbai and move towards Ahmedabad at the speed of 27 km/hr. Another train starts from Ahmedabad at 7 pm and moves towards Mumbai at the speed of 45 km/hr. If the distance between Mumbai and Ahmedabad is 513 km, then at what time both the trains will meet?

- Ans
1.

2:00 am

2.

12:00 am

3.

1:00 am

4.

11:00 pm

Question ID : 630680520063

Option 1 ID : 6306802032682

Option 2 ID : 6306802032684

Option 3 ID : 6306802032681

Option 4 ID : 6306802032683

Status : Not Answered

Chosen Option : --

**Q.5** A cone is kept on a cylinder. The base of cone and cylinder are identical. The height of the conical part is 6 cm and height of the cylindrical part is 4 cm. If the diameter of the cone is 21 cm, then what is the volume of the solid?

- Ans**
- ☒ 1. 1862 cm<sup>3</sup>
  - ☒ 2. 2079 cm<sup>3</sup>
  - ☒ 3. 2479 cm<sup>3</sup>
  - ☒ 4. 2169 cm<sup>3</sup>

Question ID : 630680520067

Option 1 ID : 6306802032699

Option 2 ID : 6306802032697

Option 3 ID : 6306802032700

Option 4 ID : 6306802032698

Status : Not Answered

Chosen Option : --

**Q.6** The difference between the compound interest (compounding annually) and simple interest on a sum at the rate of 40 percent per annum for 2 years is Rs. 2400. What is the sum?

- Ans**
- ☒ 1. Rs. 18000
  - ☒ 2. Rs. 20000
  - ☒ 3. Rs. 17500
  - ☒ 4. Rs. 15000

Question ID : 630680520052

Option 1 ID : 6306802032639

Option 2 ID : 6306802032640

Option 3 ID : 6306802032637

Option 4 ID : 6306802032638

Status : Not Answered

Chosen Option : --

**Q.7** Distance of a chord JK from the centre is 7 cm. If diameter of this circle is 50 cm, then what will be length of this chord?

- Ans**
- ☒ 1. 24 cm
  - ☒ 2. 48 cm
  - ☒ 3. 74 cm
  - ☒ 4. 96 cm

Question ID : 630680520068

Option 1 ID : 6306802032701

Option 2 ID : 6306802032702

Option 3 ID : 6306802032704

Option 4 ID : 6306802032703

Status : Not Answered

Chosen Option : --

**Q.8** A person lent certain sum of money at the annual rate of 5 percent on simple interest and the interest received in 16 years is Rs. 700 less than the sum lent. What is the sum lent?

- Ans**
- ☒ 1. Rs. 3000
  - ☒ 2. Rs. 3500
  - ☒ 3. Rs. 4000
  - ☒ 4. Rs. 2000

Question ID : 630680520051

Option 1 ID : 6306802032634

Option 2 ID : 6306802032635

Option 3 ID : 6306802032636

Option 4 ID : 6306802032633

Status : Not Answered

Chosen Option : --

**Q.9** If two successive discounts of 20 percent and 30 percent are given on an article, then what will be the net discount?

- Ans**
- ☒ 1. 40 percent
  - ☒ 2. 50 percent
  - ☒ 3. 44 percent
  - ☒ 4. 56 percent

Question ID : 630680520059

Option 1 ID : 6306802032666

Option 2 ID : 6306802032665

Option 3 ID : 6306802032667

Option 4 ID : 6306802032668

Status : Answered

Chosen Option : 3

**Q.10** Height of a cone is 15 cm and radius of its base is 21 cm. What is the volume of the cone?

- Ans**
- ☒ 1. 6590 cm<sup>3</sup>
  - ☒ 2. 7680 cm<sup>3</sup>
  - ☒ 3. 7240 cm<sup>3</sup>
  - ☒ 4. 6930 cm<sup>3</sup>

Question ID : 630680520066

Option 1 ID : 6306802032695

Option 2 ID : 6306802032696

Option 3 ID : 6306802032694

Option 4 ID : 6306802032693

Status : Not Answered

Chosen Option : --

Q.11 Which of the following is the largest two digit prime number?

- Ans
- ☒ 1. 89
  - ☒ 2. 99
  - ☒ 3. 97
  - ☒ 4. 93

Question ID : 630680520054  
Option 1 ID : 6306802032648  
Option 2 ID : 6306802032647  
Option 3 ID : 6306802032646  
Option 4 ID : 6306802032645  
Status : Answered  
Chosen Option : 3

Q.12 Two numbers are in the ratio of 13 : 5. If their sum is 54, then what is the sum of the squares of the two numbers?

- Ans
- ☒ 1. 2916
  - ☒ 2. 1627
  - ☒ 3. 1746
  - ☒ 4. 1521

Question ID : 630680520060  
Option 1 ID : 6306802032670  
Option 2 ID : 6306802032672  
Option 3 ID : 6306802032671  
Option 4 ID : 6306802032669  
Status : Answered  
Chosen Option : 3

Q.13 The average height of two men J and K is 171 cm. Another man L Joins them and the average height becomes 166 cm. If another man M whose height is 21 cm more than that of L replaces J, then the average height of K, L and M becomes 161 cm. What is the height of J?

- Ans
- ☒ 1. 192 cm
  - ☒ 2. 196 cm
  - ☒ 3. 191 cm
  - ☒ 4. 187 cm

Question ID : 630680520050  
Option 1 ID : 6306802032631  
Option 2 ID : 6306802032630  
Option 3 ID : 6306802032629  
Option 4 ID : 6306802032632  
Status : Not Answered  
Chosen Option : --

**Q.14** The average age of 34 students is 17 years. It was observed that while calculating the average age, the age of a student was taken as 10 years instead of 8 years. What will be the correct average age?

- Ans
- ☒ 1. 19.29 years
  - ☒ 2. 15.87 years
  - ☒ 3. 17.28 years
  - ☒ 4. 16.94 years

Question ID : 630680520049  
Option 1 ID : 6306802032628  
Option 2 ID : 6306802032627  
Option 3 ID : 6306802032625  
Option 4 ID : 6306802032626  
Status : Not Answered  
Chosen Option : --

**Q.15** Two numbers are in the ratio of 3 : 5. If the sum of the two numbers is 96, then what is the difference between the two numbers?

- Ans
- ☒ 1. 96
  - ☒ 2. 48
  - ☒ 3. 24
  - ☒ 4. 36

Question ID : 630680520061  
Option 1 ID : 6306802032676  
Option 2 ID : 6306802032675  
Option 3 ID : 6306802032674  
Option 4 ID : 6306802032673  
Status : Answered  
Chosen Option : 3

**Q.16** A, B and C are prime numbers such that  $A < B < C$ . If  $A \times B \times C = 182$ , then what is the value of  $B + C$ ?

- Ans
- ☒ 1. 20
  - ☒ 2. 22
  - ☒ 3. 24
  - ☒ 4. 18

Question ID : 630680520055  
Option 1 ID : 6306802032650  
Option 2 ID : 6306802032651  
Option 3 ID : 6306802032652  
Option 4 ID : 6306802032649  
Status : Not Answered  
Chosen Option : --

**Q.17** When a number is successively decreased by 10 percent, 20 percent and 34 percent, then it becomes 10692. What is that number?

- Ans**
- ✓ 1. 22500
  - ✗ 2. 22000
  - ✗ 3. 22250
  - ✗ 4. 25000

Question ID : 630680520057  
Option 1 ID : 6306802032657  
Option 2 ID : 6306802032660  
Option 3 ID : 6306802032658  
Option 4 ID : 6306802032659  
Status : Not Answered  
Chosen Option : --

**Q.18** Instead of increasing a number successively by 30 percent and 50 percent, it is decreased by 14.2 percent. Resultant value is what percentage of the required correct value?

- Ans**
- ✓ 1. 44 percent
  - ✗ 2. 50 percent
  - ✗ 3. 42 percent
  - ✗ 4. 46 percent

Question ID : 630680520056  
Option 1 ID : 6306802032655  
Option 2 ID : 6306802032653  
Option 3 ID : 6306802032656  
Option 4 ID : 6306802032654  
Status : Not Answered  
Chosen Option : --

**Q.19** A train of length 480 metres crosses an electric pole in 20 seconds and crosses another train of the same length travelling in opposite direction in 30 seconds. What is the speed of the second train?

- Ans**
- ✗ 1. 16 metre/second
  - ✗ 2. 12 metre/second
  - ✗ 3. 15 metre/second
  - ✓ 4. 8 metre/second

Question ID : 630680520064  
Option 1 ID : 6306802032688  
Option 2 ID : 6306802032685  
Option 3 ID : 6306802032686  
Option 4 ID : 6306802032687  
Status : Not Answered  
Chosen Option : --

**Q.20** D sells a table to E at a profit of 40 percent and E sells it to F at a loss of 40 percent. What is the ratio of cost prices of D and F?

- Ans
- ☒ 1. 22 : 19
  - ☒ 2. 24 : 23
  - ☒ 3. 23 : 20
  - ☒ 4. 25 : 21

Question ID : 630680520058

Option 1 ID : 6306802032664

Option 2 ID : 6306802032661

Option 3 ID : 6306802032663

Option 4 ID : 6306802032662

Status : Not Answered

Chosen Option : --

Section : Numerical and Logical and Analytical Ability and Reasoning

**Q.1** By interchanging the given two signs which of the following equation will be not correct?

+ and –

- Ans
- ☒ 1.  $7 \div 21 \times 42 - 14 + 18 = 20$
  - ☒ 2.  $7 + 3 \times 8 \div 6 - 5 = 8$
  - ☒ 3.  $63 + 21 \div 7 \times 14 - 8 = 29$
  - ☒ 4.  $42 \times 14 \div 28 + 15 - 35 = 41$

Question ID : 630680520025

Option 1 ID : 6306802032529

Option 2 ID : 6306802032532

Option 3 ID : 6306802032531

Option 4 ID : 6306802032530

Status : Not Answered

Chosen Option : --

**Q.2** In the following question below are given some statements followed by some conclusions based on those statements. Taking the given statements to be true even if they seem to be at variance from commonly known facts. Read all the conclusions and then decide which of the given conclusion logically follows the given statements.

Statements:  
I. Some bottle are cup.  
II. No plate is bottle.

Conclusion:  
I. No plate is cup.  
II. No bottle is plate.

- Ans
- ☒ 1. Both conclusions I and II follows
  - ☒ 2. Only conclusion II follows
  - ☒ 3. Only conclusion I follows
  - ☒ 4. Neither conclusion follows

Question ID : 630680520016

Option 1 ID : 6306802032495

Option 2 ID : 6306802032494

Option 3 ID : 6306802032493

Option 4 ID : 6306802032496

Status : Answered

Chosen Option : 2

Q.3 Consider the string given below made up of letter-number-symbol. How many 3 are immediately followed by an alphabet?

N 4 6 D # \$ L 2 3 % @ 3 \$ & # 3 G \$ H @ K # & 5 H 4 D # % 5 3 @ O % 9 V 3 @

- Ans
1. 4

2. 3

3. 2

4. 1

Question ID : 630680520018

Option 1 ID : 6306802032504

Option 2 ID : 6306802032503

Option 3 ID : 6306802032502

Option 4 ID : 6306802032501

Status : Answered

Chosen Option : 4

Q.4 In the following question, select the missing number from the given series.

810, 815, 802, 823, 794, ?

- Ans
1. 831

2. 832

3. 830

4. 828

Question ID : 630680520026

Option 1 ID : 6306802032536

Option 2 ID : 6306802032534

Option 3 ID : 6306802032533

Option 4 ID : 6306802032535

Status : Not Answered

Chosen Option : --

Q.5 Five plays P1, P2, P3, P4 and P5 are to be staged from Monday to Friday of a week. On each day, only one play will be staged. P4 and P5 should not be the first or last to be staged. P5 should be staged immediately before P3. P2 should be staged immediately after P4. One play is staged between P1 and P2. Which play is staged on Wednesday?

- Ans
1. P3

2. P1

3. P4

4. P2

Question ID : 630680520009

Option 1 ID : 6306802032468

Option 2 ID : 6306802032466

Option 3 ID : 6306802032467

Option 4 ID : 6306802032465

Status : Answered

Chosen Option : 4



Q.6 Consider the string given below made up of letter-number-symbol. How many 2's are there?

# 2 3 \$ 2 % @ \$ & 3 # G 2 \$ 3 H @ 3 K # & 2 5 H 4 D # 2 2 % 5 2 3 @ 2 O % 9 2 V @ 2 3 4  
2 2 % 5 2 3

- Ans
- ☒ 1. 12
  - ☒ 2. 13
  - ☒ 3. 10
  - ☒ 4. 11

Question ID : 630680520017  
Option 1 ID : 6306802032498  
Option 2 ID : 6306802032497  
Option 3 ID : 6306802032500  
Option 4 ID : 6306802032499  
Status : Answered  
Chosen Option : 2

Q.7 By interchanging the given two signs which of the following equation will be correct?

+ and -

- Ans
- ☒ 1.  $8 + 14 - 7 \times 6 \div 3 = 8$
  - ☒ 2.  $21 + 8 \times 7 - 33 \div 3 = 24$
  - ☒ 3.  $7 + 9 \times 8 \div 6 - 5 = 1$
  - ☒ 4.  $0 \times 4 + 6 \div 2 - 8 = 45$

Question ID : 630680520023  
Option 1 ID : 6306802032523  
Option 2 ID : 6306802032524  
Option 3 ID : 6306802032522  
Option 4 ID : 6306802032521  
Status : Answered  
Chosen Option : 1

Q.8 In the following question, select the related letters from the given alternatives.

CN : ZM :: YE : ?

- Ans
- ☒ 1. MY
  - ☒ 2. VV
  - ☒ 3. UL
  - ☒ 4. ZA

Question ID : 630680520020  
Option 1 ID : 6306802032510  
Option 2 ID : 6306802032511  
Option 3 ID : 6306802032509  
Option 4 ID : 6306802032512  
Status : Answered  
Chosen Option : 2

Q.9 Pointing to a woman, a man said, “Her father is the husband of the mother of the brother of my father”. How is that woman related to that man?

- Ans
1. Mother

2. Mother-in-law

3. Father's sister

4. Father's mother

Question ID : 630680520014

Option 1 ID : 6306802032485

Option 2 ID : 6306802032486

Option 3 ID : 6306802032488

Option 4 ID : 6306802032487

Status : Answered

Chosen Option : 4

Q.10 Six lectures A1, A2, A3, A4, A5 and A6 are to be organized in a span of seven days from Sunday to Saturday. Only one lecture on each day in accordance with the following:

- I. There should be a gap of two days between A5 and A4.
- II. A2 should be organised on Tuesday and should not be organized just before A4.
- III. A1 should not be organized on Thursday.
- IV. One day there will be no lecture (Friday is not that day), just before that day A4 will be organised.
- V. A3 should be organised immediately after A6.

Which lecture is organised on Thursday?

- Ans
1. A2

2. A6

3. A5

4. A3

Question ID : 630680520010

Option 1 ID : 6306802032469

Option 2 ID : 6306802032471

Option 3 ID : 6306802032470

Option 4 ID : 6306802032472

Status : Not Answered

Chosen Option : --

Q.11 A series is given with one term missing. Select the correct alternative from the given ones that will complete the series.

RSM4, NTS9, TUO16, PVU25, ?

- Ans
1. VNO36

2. VWQ36

3. OMQ49

4. VNQ49

Question ID : 630680520022

Option 1 ID : 6306802032518

Option 2 ID : 6306802032517

Option 3 ID : 6306802032519

Option 4 ID : 6306802032520

Status : Not Answered

Chosen Option : --

Q.12 In a certain code language, 'PIETY' is written as '15', 'ZTHOU' is written as '18'. What is the code for 'NCHEE' in that code language?

- Ans
- ☒ 1. 4
  - ☒ 2. 8
  - ☒ 3. 7
  - ☒ 4. 5

Question ID : 630680520012

Option 1 ID : 6306802032479

Option 2 ID : 6306802032477

Option 3 ID : 6306802032478

Option 4 ID : 6306802032480

Status : Not Answered

Chosen Option : --

Q.13 In the following question below are given some statements followed by some conclusions based on those statements. Taking the given statements to be true even if they seem to be at variance from commonly known facts. Read all the conclusions and then decide which of the given conclusion logically follows the given statements.

Statements:  
I. No A is B.  
II. Some S are B.

Conclusion:  
I. All B are S.  
II. All A are S.

- Ans
- ☒ 1. Only conclusion II follows
  - ☒ 2. Only conclusion I follows
  - ☒ 3. Neither conclusion follows
  - ☒ 4. Both conclusions I and II follows

Question ID : 630680520015

Option 1 ID : 6306802032490

Option 2 ID : 6306802032489

Option 3 ID : 6306802032492

Option 4 ID : 6306802032491

Status : Answered

Chosen Option : 3

Q.14 By interchanging the given two signs which of the following equation will be not correct?

+ and -

- Ans
- ☒ 1.  $5 + 3 + 2 \times 4 - 7 = 6$
  - ☒ 2.  $17 + 8 - 11 \times 6 + 3 = 31$
  - ☒ 3.  $48 \times 6 + 36 + 30 - 20 = -2$
  - ☒ 4.  $50 \div 25 \times 30 + 15 - 40 = 85$

Question ID : 630680520024

Option 1 ID : 6306802032527

Option 2 ID : 6306802032525

Option 3 ID : 6306802032528

Option 4 ID : 6306802032526

Status : Answered

Chosen Option : 4

Q.15 Tarun walks 46 km towards East. He turns right and walks 36 km. He again turns right and walks 46 km. How far and in which direction is his starting point from the finishing point?

- Ans 

1. 46 km, North

2. 36 km, North

3. 36 km, South

4. 46 km, South

Question ID : 630680520013

Option 1 ID : 6306802032482

Option 2 ID : 6306802032483

Option 3 ID : 6306802032481

Option 4 ID : 6306802032484

Status : Answered

Chosen Option : 3

Q.16 Consider the string given below made up of letter-number-symbol. How many 4 are immediately followed and preceded by an alphabet?

N 4 6 D # \$ L % @ \$ & # G \$ H N 4 D 6 D # \$ L & 5 N 4 D 6 D # \$ L # % 5 3 N 4 D 6 D # \$ L V @

- Ans 

1. 4

2. 3

3. 1

4. 2

Question ID : 630680520019

Option 1 ID : 6306802032508

Option 2 ID : 6306802032507

Option 3 ID : 6306802032505

Option 4 ID : 6306802032506

Status : Answered

Chosen Option : 2

Q.17 A, B, C, D and E are five friends sitting in a single row facing North. A sitting fourth to the right of C. B is sitting second to the right of C. D sitting to the immediate left of B. Who is sitting on the immediate left of E?

- Ans 

1. B

2. D

3. C

4. A

Question ID : 630680520007

Option 1 ID : 6306802032457

Option 2 ID : 6306802032459

Option 3 ID : 6306802032458

Option 4 ID : 6306802032460

Status : Answered

Chosen Option : 1

Q.18 In a certain code language, 'WALK' is written as 'AFPP'. What is the code for 'BLOW' in that code language?

- Ans
1. FQSC

2. FQTB

3. FRSB

4. FQSB

Question ID : 630680520011

Option 1 ID : 6306802032474

Option 2 ID : 6306802032475

Option 3 ID : 6306802032476

Option 4 ID : 6306802032473

Status : Answered

Chosen Option : 1

Q.19 In the following question, four letter pairs are given. The letters on left side of (–) is related to the letters on the right side of (–) with some Logic/Rule/Relation. Three are similar on basis of same Logic/Rule/Relation. Select the odd one out from the given alternatives.

- Ans
1. JY – RG

2. DS – LA

3. RN – ZT

4. TI – BQ

Question ID : 630680520021

Option 1 ID : 6306802032513

Option 2 ID : 6306802032516

Option 3 ID : 6306802032514

Option 4 ID : 6306802032515

Status : Answered

Chosen Option : 3

Q.20 Eight friends A, B, C, D, E, F, G and H are seated in a straight line and all of them are facing north, but not necessarily in the same order. B sits second to right of F. F sits at one of the extreme ends of the line. Only three people sit between B and E. C sits third to the left of D. Only two people sit between D and A. G is not an immediate neighbour of E. Who is sitting on the immediate left of C?

- Ans
1. H

2. E

3. F

4. G

Question ID : 630680520008

Option 1 ID : 6306802032464

Option 2 ID : 6306802032462

Option 3 ID : 6306802032461

Option 4 ID : 6306802032463

Status : Answered

Chosen Option : 3

Section : English Language

Comprehension:

Read the following passage and answer the questions given below.

The United States and a few European countries make routine use of jury trials even today. Every citizen is expected to serve jury-duty if he/she gets selected as a juror for a case. Once the summons are issued, they are asked to come to court on a particular day, at a particular time. The law states that you must participate and employers can't prevent employees from performing jury duty. Citizens are selected on the basis of their professional, intellectual and social backgrounds.

Jury trials came to India with the British. The first case decided by an English jury was in 1665, when one Mrs. Ascentia Dawes was charged with the murder of her slave, an Indian girl. A jury of six Englishmen and six Portuguese, found her guilty, but she was acquitted because of the 'meniality' of the crime. Jury trials gradually became a biased institution, often ruling in the favour of British, ignoring extreme violence and exploitation of Indians.

SubQuestion No : 1

Q.1 Which word means the same as the word 'acquitted' used in the passage?

- Ans
1. Arraigned

2. Impeachable

3. Exonerated

4. Indicted

Question ID : 630680519986

Option 1 ID : 6306802032373

Option 2 ID : 6306802032374

Option 3 ID : 6306802032375

Option 4 ID : 6306802032376

Status : Answered

Chosen Option : 4

Comprehension:

Read the following passage and answer the questions given below.

The United States and a few European countries make routine use of jury trials even today. Every citizen is expected to serve jury-duty if he/she gets selected as a juror for a case. Once the summons are issued, they are asked to come to court on a particular day, at a particular time. The law states that you must participate and employers can't prevent employees from performing jury duty. Citizens are selected on the basis of their professional, intellectual and social backgrounds.

Jury trials came to India with the British. The first case decided by an English jury was in 1665, when one Mrs. Ascentia Dawes was charged with the murder of her slave, an Indian girl. A jury of six Englishmen and six Portuguese, found her guilty, but she was acquitted because of the 'meniality' of the crime. Jury trials gradually became a biased institution, often ruling in the favour of British, ignoring extreme violence and exploitation of Indians.

SubQuestion No : 2

Q.2 Mrs. Ascentia Dawes was charged with which crime?

- Ans
1. Bribery

2. Murder

3. Fraud

4. Robbery

Question ID : 630680519983

Option 1 ID : 6306802032361

Option 2 ID : 6306802032362

Option 3 ID : 6306802032364

Option 4 ID : 6306802032363

Status : Answered

Chosen Option : 2

Comprehension:

Read the following passage and answer the questions given below.

The United States and a few European countries make routine use of jury trials even today. Every citizen is expected to serve jury-duty if he/she gets selected as a juror for a case. Once the summons are issued, they are asked to come to court on a particular day, at a particular time. The law states that you must participate and employers can't prevent employees from performing jury duty. Citizens are selected on the basis of their professional, intellectual and social backgrounds.

Jury trials came to India with the British. The first case decided by an English jury was in 1665, when one Mrs. Ascentia Dawes was charged with the murder of her slave, an Indian girl. A jury of six Englishmen and six Portuguese, found her guilty, but she was acquitted because of the 'meniality' of the crime. Jury trials gradually became a biased institution, often ruling in the favour of British, ignoring extreme violence and exploitation of Indians.

SubQuestion No : 3

Q.3 Which of the following statements can be inferred from the passage?

- Ans
- ☒ 1. A proper exam is conducted in the US to select a juror.
  - ☒ 2. The law of the US doesn't promote the active participation of people in jury trials.
  - ☒ 3. Before the arrival of British in India, there were no jury trials.
  - ☒ 4. Indian people were highly favoured in the jury trials.

Question ID : 630680519984

Option 1 ID : 6306802032365

Option 2 ID : 6306802032368

Option 3 ID : 6306802032366

Option 4 ID : 6306802032367

Status : Answered

Chosen Option : 3

Comprehension:

Read the following passage and answer the questions given below.

The United States and a few European countries make routine use of jury trials even today. Every citizen is expected to serve jury-duty if he/she gets selected as a juror for a case. Once the summons are issued, they are asked to come to court on a particular day, at a particular time. The law states that you must participate and employers can't prevent employees from performing jury duty. Citizens are selected on the basis of their professional, intellectual and social backgrounds.

Jury trials came to India with the British. The first case decided by an English jury was in 1665, when one Mrs. Ascentia Dawes was charged with the murder of her slave, an Indian girl. A jury of six Englishmen and six Portuguese, found her guilty, but she was acquitted because of the 'meniality' of the crime. Jury trials gradually became a biased institution, often ruling in the favour of British, ignoring extreme violence and exploitation of Indians.

SubQuestion No : 4

Q.4 What is the most appropriate tone of the given passage?

- Ans
- ☒ 1. Apologetic
  - ☒ 2. Vituperative
  - ☒ 3. Introspective
  - ☒ 4. Technical

Question ID : 630680519985

Option 1 ID : 6306802032372

Option 2 ID : 6306802032369

Option 3 ID : 6306802032370

Option 4 ID : 6306802032371

Status : Answered

Chosen Option : 3

Q.5 Choose the most appropriate synonym of the underlined word.

Production relocation to Africa and South America have allowed Chinese enterprises to circumvent trade caps.

- Ans
1. Simulate

2. Contort

3. Evade

4. Visualize

Question ID : 630680519978

Option 1 ID : 6306802032347

Option 2 ID : 6306802032345

Option 3 ID : 6306802032346

Option 4 ID : 6306802032348

Status : Answered

Chosen Option : 3

Q.6 Select the incorrectly spelt word from the given sentence.

Floods are not new to India and this sub-continent, but in recent years the problem has recieved much greater attention.

- Ans
1. continent

2. attention

3. recent

4. recieved

Question ID : 630680519981

Option 1 ID : 6306802032357

Option 2 ID : 6306802032360

Option 3 ID : 6306802032358

Option 4 ID : 6306802032359

Status : Not Answered

Chosen Option : --

Q.7 Select the most appropriate option for the given blank.

The word moved over me like \_\_\_\_\_ finger of ice.

- Ans
1. a

2. an

3. the

4. No article

Question ID : 630680519966

Option 1 ID : 6306802032298

Option 2 ID : 6306802032299

Option 3 ID : 6306802032297

Option 4 ID : 6306802032300

Status : Answered

Chosen Option : 1



Q.8 Select the most appropriate option for the given blank.

Your light \_\_\_\_\_ so brightly that it touched so many of us, impacted the lives of many more, and \_\_\_\_\_ the game forever.

- Ans
1. had shone, changing

2. shines, had changed

3. shone, changed

4. has shone, has changed

Question ID : 630680519971

Option 1 ID : 6306802032318

Option 2 ID : 6306802032320

Option 3 ID : 6306802032319

Option 4 ID : 6306802032317

Status : Answered

Chosen Option : 2

Q.9 Choose the idiom/phrase that can substitute the highlighted group of words meaningfully.

This office has become expensive to maintain and difficult to dispose of as it no longer generates any profit.

- Ans
1. Til the cows come home

2. Start off on the wrong foot

3. Scapegoat

4. A white elephant

Question ID : 630680519976

Option 1 ID : 6306802032337

Option 2 ID : 6306802032339

Option 3 ID : 6306802032338

Option 4 ID : 6306802032340

Status : Answered

Chosen Option : 4

Q.10 Choose the word that can substitute the given group of words.

A person who stirs up public feelings especially of discontent

- Ans
1. Reconciler

2. Demagogue

3. Unites

4. Saint

Question ID : 630680519975

Option 1 ID : 6306802032334

Option 2 ID : 6306802032336

Option 3 ID : 6306802032335

Option 4 ID : 6306802032333

Status : Answered

Chosen Option : 2

Q.11 Select the most appropriate option for the given blank.

I didn't speak to the sage again \_\_\_\_\_ many years.

- Ans 

✓

1. for
- ✗

2. by
- ✗

3. of
- ✗

4. since

Question ID : 630680519968

Option 1 ID : 6306802032306

Option 2 ID : 6306802032308

Option 3 ID : 6306802032307

Option 4 ID : 6306802032305

Status : Answered

Chosen Option : 1

Q.12 Select the most appropriate option for the given blank.

They are having \_\_\_\_\_ breakfast in my room.

- Ans 

✗

1. an
- ✗

2. a
- ✗

3. the
- ✓

4. No article

Question ID : 630680519967

Option 1 ID : 6306802032303

Option 2 ID : 6306802032302

Option 3 ID : 6306802032301

Option 4 ID : 6306802032304

Status : Answered

Chosen Option : 4

Q.13 Rearrange the parts of the sentence in correct order.

Interpreting the facial

- P. of others is a vital element of social
- Q. interaction that allow us to make rapid
- R. inferences about others' mental states
- S. expression, tone of voice and gestures

- Ans 

✗

1. QPSR
- ✓

2. SPQR
- ✗

3. PSQR
- ✗

4. SRQP

Question ID : 630680519972

Option 1 ID : 6306802032323

Option 2 ID : 6306802032322

Option 3 ID : 6306802032324

Option 4 ID : 6306802032321

Status : Answered

Chosen Option : 2

Q.14 Select the sentence with no spelling errors.

- Ans 

1. Hardwood trees shed their leaves annually, and they are called deciduous trees.

2. Hardwood trees shed there leaves annually, and they are called deciduous trees.

3. Hardwood trees shed their leaves anually, and they are called deciduous trees.

4. Hardwood trees shed their leaves annually, and they are called decidous trees.

Question ID : 630680519980

Option 1 ID : 6306802032353

Option 2 ID : 6306802032354

Option 3 ID : 6306802032355

Option 4 ID : 6306802032356

Status : Answered

Chosen Option : 1

Q.15 Choose the word that can substitute the given group of words.

An unexpected gain

- Ans 

1. Bounty

2. Waterfall

3. Hex

4. Windfall

Question ID : 630680519974

Option 1 ID : 6306802032330

Option 2 ID : 6306802032332

Option 3 ID : 6306802032329

Option 4 ID : 6306802032331

Status : Answered

Chosen Option : 4

Q.16 Rearrange the parts of the sentence in correct order.

- P. mass reductions of the Greenland Ice Sheet have substantial
- Q. impacts on global sea level and the speed of the Atlantic
- R. freshwater caused by increased meltwater runoff into the northern Atlantic
- S. Meridional Overturning Circulation, due to the additional

- Ans 

1. PQSR

2. SRQP

3. PQRS

4. RPQS

Question ID : 630680519973

Option 1 ID : 6306802032326

Option 2 ID : 6306802032328

Option 3 ID : 6306802032327

Option 4 ID : 6306802032325

Status : Answered

Chosen Option : 1

Q.17 Select the most appropriate option for the given blank.

Over the last two decades of her life, she suffered \_\_\_\_\_ various health problems, but nothing could dissuade her \_\_\_\_\_ fulfilling her mission.

- Ans 

✓

1. from, from
- ✗

2. of, with
- ✗

3. with, on
- ✗

4. off, of

Question ID : 630680519970

Option 1 ID : 6306802032315

Option 2 ID : 6306802032316

Option 3 ID : 6306802032313

Option 4 ID : 6306802032314

Status : Answered

Chosen Option : 1

Q.18 Select the most appropriate option for the given blank.

Add \_\_\_\_\_ exercise in your routine.

- Ans 

✓

1. some
- ✗

2. very
- ✗

3. too
- ✗

4. so

Question ID : 630680519969

Option 1 ID : 6306802032311

Option 2 ID : 6306802032309

Option 3 ID : 6306802032312

Option 4 ID : 6306802032310

Status : Answered

Chosen Option : 1

Q.19 Choose the idiom/phrase that can substitute the highlighted group of words meaningfully.

Your words are not enough for this. I want everything in writing.

- Ans 

✗

1. Weal and woe
- ✓

2. Black and white
- ✗

3. Break a leg
- ✗

4. Spill the beans

Question ID : 630680519977

Option 1 ID : 6306802032341

Option 2 ID : 6306802032344

Option 3 ID : 6306802032342

Option 4 ID : 6306802032343

Status : Answered

Chosen Option : 2

Q.20 Choose the most appropriate antonym of the underlined word.

Avoid verbose marketing lingo and keep answers short and concise.

- Ans
1. Flowery
2. Talkative
3. Elaborate
4. Terse

Question ID : 630680519979

Option 1 ID : 6306802032351

Option 2 ID : 6306802032352

Option 3 ID : 6306802032350

Option 4 ID : 6306802032349

Status : Answered

Chosen Option : 4

