



# Teachingninja.in



**Latest Govt Job updates**



**Private Job updates**



**Free Mock tests available**



**Visit - [teachingninja.in](https://teachingninja.in)**



**Teachingninja.in**

# **IB Security Assistant**

**Previous Year Paper**  
**23 Mar, 2023 Shift 3**



INTELLIGENCE BUREAU

(Ministry of Home Affairs)

Government of India

Participant ID	
Participant Name	
Test Center Name	
Test Date	23/03/2023
Test Time	3:00 PM - 4:00 PM
Subject	Security Assistant & Multi Tasking Staff

Section : General Awareness

Q.1 To ensure safety and dignity of sanitation workers, recently the Ministry of Social Justice and Empowerment announced a new scheme named \_\_\_\_.

Ans 

✗ 1. NIRVIK

✗ 2. KAWACH

✓ 3. NAMASTE

✗ 4. PM-DevINE

Question ID : 630680193221

Status : Answered

Chosen Option : 3

Q.2 Carbohydrates are present in the muscles in the form of \_\_\_\_.

Ans 

✗ 1. amylopectin

✗ 2. amylose

✗ 3. collagen

✓ 4. glycogen

Question ID : 630680193213

Status : Answered

Chosen Option : 4

Q.3 Which of the following vitamins is synthesized due to the striking of the ultraviolet (UV) rays from sunlight to the human skin?

Ans 

✗ 1. Vitamin B

✗ 2. Vitamin A


✓ 3. Vitamin D

✗ 4. Vitamin C

Question ID : 630680193227

Status : Answered

Chosen Option : 3

Teachingninja.in

Q.4 The state of matter in which the electrons are free in a cloud rather than attached to individual atoms is called \_\_\_\_\_.

- Ans
- ☒ 1. Plasma
  - ☐ 2. Liquid
  - ☐ 3. Gas
  - ☐ 4. Solid

Question ID : 630680193229  
Status : Answered  
Chosen Option : 1

Q.5 Which of the following diseases can occur due to poor Air Quality in the environment?

- Ans
- ☐ 1. Bronchitis
  - ☐ 2. Emphysema
  - ☒ 3. Asthma
  - ☐ 4. Typhoid

Question ID : 630680193215  
Status : Answered  
Chosen Option : 1

Q.6 Nati folk dance is related to which of the following states of India?

- Ans
- ☐ 1. Madhya Pradesh
  - ☐ 2. Odisha
  - ☒ 3. Himachal Pradesh
  - ☐ 4. Karnataka

Question ID : 630680193226  
Status : Answered  
Chosen Option : 4

Q.7 Carnatic music is the Indian classical music mainly associated with \_\_\_\_\_ India.

- Ans
- ☐ 1. western
  - ☐ 2. eastern
  - ☐ 3. north
  - ☒ 4. south

Question ID : 630680193212  
Status : Answered  
Chosen Option : 4

Q.8 Which of the following schemes of government of India is to empower the students belonging to minority communities and prepare them for competitive examinations?

- Ans
- ☒ 1. Naya Savera
  - ☐ 2. Nai Manzil
  - ☐ 3. Seekho aur Kamao
  - ☐ 4. Nai Udaan

Question ID : 630680193222  
Status : Answered  
Chosen Option : 4

**Q.9** Acid rain leaches \_\_\_\_\_ from the soil that may be harmful to plants as well as animals.

**Ans**    ☒ 1. calcium  
          ☒ 2. oxygen  
          ☒ 3. lead  
          ☒ 4. aluminium

Question ID : **630680193220**  
Status : **Answered**  
Chosen Option : **3**

**Q.10** Famous Buddhist Monastery \_\_\_\_\_, also known as ‘The Golden Temple’ is situated in Bylakuppe, Karnataka.

**Ans**    ☒ 1. Rumtek  
          ☒ 2. Tharpa Choling  
          ☒ 3. Namdroling  
          ☒ 4. Palpung

Question ID : **630680193219**  
Status : **Not Answered**  
Chosen Option : **--**

**Q.11** Under the ‘Khelo India’ movement, the Ministry of YAS has decided to setup \_\_\_\_\_ Khelo India centres across the country by 2024.

**Ans**    ☒ 1. 500  
          ☒ 2. 1500  
          ☒ 3. 2000  
          ☒ 4. 1000

Question ID : **630680193225**  
Status : **Answered**  
Chosen Option : **4**

**Q.12** Acid rain results when \_\_\_\_\_ is emitted into the environment.

**Ans**    ☒ 1. sulphur dioxide  
          ☒ 2. lead oxide  
          ☒ 3. CO<sub>2</sub>  
          ☒ 4. carbon monoxide

Question ID : **630680193230**  
Status : **Answered**  
Chosen Option : **1**

**Q.13** What is the rank of India in 2022 Environmental Performance Index (EPI)?

**Ans**    ☒ 1. 140  
          ☒ 2. 160  
          ☒ 3. 180  
          ☒ 4. 170

Question ID : **630680193217**  
Status : **Answered**  
Chosen Option : **1**

Q.14 Like Litmus paper, \_\_\_\_\_ is also a natural indicator to test the nature of chemical substances.

Ans 

✗ 1. sodium

✗ 2. indigo

✓ 3. turmeric

✗ 4. baking powder

Question ID : 630680193214

Status : Answered

Chosen Option : 2

Q.15 The Indian classical dance form that belongs to the famous Lucknow Gharana is:

Ans 

✗ 1. Kathakali

✗ 2. Mohiniyattam

✗ 3. Kuchipudi

✓ 4. Kathak

Question ID : 630680193211

Status : Answered

Chosen Option : 4

Q.16 NITI Aayog on November 23, 2021, released SDGs Urban Index 2021-22 in which total \_\_\_\_\_ urban areas were ranked.

Ans 

✗ 1. 86

✗ 2. 46

✓ 3. 56

✗ 4. 77

Question ID : 630680193216

Status : Not Answered

Chosen Option : --

Q.17 Which gharana is NOT associated with 'Khayal' music?

Ans 

✗ 1. Patiala

✗ 2. Gwalior

✓ 3. Lucknow

✗ 4. Kirana

Question ID : 630680193218

Status : Answered

Chosen Option : 1

Q.18 Who was elected as the 36<sup>th</sup> president of the BCCI in 2022?

Ans 

✗ 1. Sourav Ganguly

✓ 2. Roger Binny

✗ 3. Sunil Gavaskar

✗ 4. Ravi Shastri

Question ID : 630680193223

Status : Answered

Chosen Option : 2

Q.19

In complex carbohydrates, \_\_\_\_\_ or more sugars bond together in a more complex chemical structure.

Ans

✓

1. three

✗

2. two

✗

3. four

✗

4. five

Question ID : 630680193228

Status : Answered

Chosen Option : 2

Q.20

Who became the first Indian to win a Diamond League title in 2022?

Ans

✗

1. Hima Das

✗

2. Vinesh Phogat

✓

3. Neeraj Chopra

✗

4. Meerabai Chanu

Question ID : 630680193224

Status : Answered

Chosen Option : 3

Section : Quantitative Aptitude

Q.1

X takes twice as much time as Y or thrice as much time as Z to finish a job. Working together, the trio can finish the job in 2 days. Y alone can do the work in \_\_\_\_\_.

Ans

✓

1. 6 days

✗

2. 12 days

✗

3. 8 days

✗

4. 15 days

Question ID : 630680193243

Status : Not Answered

Chosen Option : --

Q.2

A, B, and C have salaries in the ratio 2 : 3 : 5 in the year 2018. In 2019 they got an increment of 10%, 15% and 20%, respectively. In 2020 only A got an increment of 20%. What is the ratio of their salaries in 2020?

Ans

✗

1. 22 : 115 : 30

✗

2. 81 : 11 : 20

✓

3. 88 : 115 : 200

✗

4. 42 : 15 : 20

Question ID : 630680193238

Status : Answered

Chosen Option : 3

Q.3

A big joint family has 4 grandparents, 4 parents and 8 cousins. The average age of the grandparents is 74 years, that of the parents is 58 years and that of the cousins is 22 years. What is the average age of the members of the family?

Ans

✗

1. 65 years

✗

2. 20 years

✓

3. 44 years

✗

4. 32 years

Question ID : 630680193234

Status : Not Answered

Chosen Option : --

**Q.4** The simple interest on a sum of money is  $\frac{4}{9}$  of the principal. Find the time if rate per cent and time (in years) both are numerically equal.

- Ans**
- ☒ 1. 6 years 4 months
  - ☒ 2. 8 years
  - ☒ 3. 7 years
  - ☒ 4. 6 years 8 months

Question ID : 630680193239  
Status : Not Answered  
Chosen Option : --

**Q.5** The cost price of an article is ₹2,100. What should the marked price of the article be so that after a discount of 20% the seller still makes a profit of 90%?

- Ans**
- ☒ 1. ₹4,200.5
  - ☒ 2. ₹3,812.5
  - ☒ 3. ₹3,100.5
  - ☒ 4. ₹4,987.5

Question ID : 630680193240  
Status : Answered  
Chosen Option : 4

**Q.6** If Raj invested ₹14,000 at 10% p.a. for 1 year with compound interest being compounded half-yearly, then the amount received by him on maturity is \_\_\_\_\_.

- Ans**
- ☒ 1. ₹15,435
  - ☒ 2. ₹17,854
  - ☒ 3. ₹16,235
  - ☒ 4. ₹16,254

Question ID : 630680193241  
Status : Answered  
Chosen Option : 1

**Q.7** A hollow cylindrical iron pipe has its internal and external radii as 14 m and 21 m, respectively, and its height as 14 m. If this pipe is to be painted all over, find the area to be painted.

(Use  $\pi = \frac{22}{7}$ )

- Ans**
- ☒ 1. 4000 m<sup>2</sup>
  - ☒ 2. 3562 m<sup>2</sup>
  - ☒ 3. 4620 m<sup>2</sup>
  - ☒ 4. 5624 m<sup>2</sup>

Question ID : 630680193233  
Status : Not Answered  
Chosen Option : --



**Q.8** For an item a manufacturer gains 12%, the wholesaler gains 10%, and the retailer gains 15%. Find the cost price of the item if its retail price is ₹56,672.

- Ans**
- ☒ 1. ₹46,570
  - ☒ 2. ₹34,500
  - ☒ 3. ₹40,000
  - ☒ 4. ₹32,565

Question ID : 630680193235  
Status : Answered  
Chosen Option : 4

**Q.9** Find the value of  $\sqrt[4]{100000000} - \sqrt[3]{9261}$ .

- Ans**
- ☒ 1. -11
  - ☒ 2. -19
  - ☒ 3. -14
  - ☒ 4. -51

Question ID : 630680193242  
Status : Not Answered  
Chosen Option : --

**Q.10** If  $\frac{a}{b} = \frac{7}{11}$  and  $\frac{b}{c} = \frac{12}{17}$ , then  $\frac{a+b}{b+c}$  is:

- Ans**
- ☒ 1.  $\frac{216}{931}$
  - ☒ 2.  $\frac{391}{216}$
  - ☒ 3.  $\frac{216}{391}$
  - ☒ 4.  $\frac{216}{319}$

Question ID : 630680193249  
Status : Not Answered  
Chosen Option : --

**Q.11** Two trains of length 600 m each are moving in the same direction on parallel tracks. Initially train A is ahead of train B and both the trains are moving with the same speed of 108 km/h. The driver of train B accelerates by 1 m/sec<sup>2</sup>. After 50 sec train B is just completely ahead of train A. Calculate the original distance (in m) between trains A and B.

- Ans**
- ☒ 1. 1000
  - ☒ 2. 2750
  - ☒ 3. 1250
  - ☒ 4. 1500

Question ID : 630680193232  
Status : Not Answered  
Chosen Option : --

Q.12

The smallest number greater than 1, by which  $\sqrt{45}$  should be multiplied so as to get a rational number is:

Ans

✗ 1.

$4\sqrt{5}$

✓ 2.

$\sqrt{5}$

✗ 3.

$\sqrt{45}$

✗ 4.

$2\sqrt{5}$

Question ID : 630680193231

Status : Not Answered

Chosen Option : --

Q.13

I spend 25% of my salary on rent, 20% of my salary on transport, 40% of the remaining salary on groceries, and save the remaining part, which is ₹16,500. What is my salary?

Ans

✓ 1.

₹50,000

✗ 2.

₹30,000

✗ 3.

₹40,000

✗ 4.

₹45,000

Question ID : 630680193246

Status : Not Answered

Chosen Option : --

Q.14

Sonu and Monu together can build a wall in 6 days, while Monu and Mohan together can build the same wall in 12 days. Sonu and Monu work together for 5 days after which they both fall ill. The remaining work is completed by Mohan in 10 days. The total payment for the work done is ₹3,600 which is to be divided among three persons. What will be Sonu's share out of the total payment?

Ans

✗ 1.

₹1,500

✗ 2.

₹2,000

✗ 3.

₹1,200

✓ 4.

₹1,800

Question ID : 630680193236

Status : Not Answered

Chosen Option : --

Q.15

A cylindrical vessel with a base of radius 15 m and height of 21 m is filled with water to a certain height. 10 spherical balls of radius 1.5 m are dropped into this vessel. By how much will the level of water rise in the vessel?

Ans

✗ 1.

40 cm

✗ 2.

50 cm

✗ 3.

60 cm

✓ 4.

20 cm

Question ID : 630680193237

Status : Not Answered

Chosen Option : --

Q.16

The value of  $\sqrt{4 - \sqrt{7} + \sqrt{19 + 2\sqrt{84}}}$  is \_\_\_\_\_.

Ans

- ✓ 1.  $1 + \sqrt{3}$   
✗ 2.  $1 - \sqrt{3}$   
✗ 3.  $2 + \sqrt{3}$   
✗ 4.  $2 - \sqrt{3}$

Question ID : 630680193250

Status : Not Answered

Chosen Option : --

Q.17

Find the average of the prime numbers between 40 and 80.

Ans

- ✓ 1. 59.4  
✗ 2. 57.2  
✗ 3. 61.5  
✗ 4. 63.3

Question ID : 630680193248

Status : Not Answered

Chosen Option : --

Q.18

₹370 is divided into 3 parts. The second part is  $\frac{1}{4}$  of the third part and the ratio of the first and the third parts is 3 : 5. Find the ratio of the third part to the total amount of money.

Ans

- ✓ 1. 20 : 37  
✗ 2. 12 : 23  
✗ 3. 10 : 41  
✗ 4. 15 : 43

Question ID : 630680193244

Status : Not Answered

Chosen Option : --

Q.19

3% of what number is the sum of 4% of 12 and 6% of 80?

Ans

- ✓ 1. 176  
✗ 2. 445  
✗ 3. 216  
✗ 4. 413

Question ID : 630680193245

Status : Answered

Chosen Option : 1

Q.20

Two cars are travelling from the same location, moving in the same direction at speeds of 6 km/h and 4 km/h, respectively, starting at the same time. Calculate the approximate distance between the cars after 10 minutes.

Ans

- ✗ 1. 258.6 m  
✗ 2. 562.4 m  
✓ 3. 333.3 m  
✗ 4. 245.6 m

Question ID : 630680193247

Status : Answered

Chosen Option : 3

Section : Numerical,Logical,Analytical Ability & Reasoning

**Q.1** Read the given statements and conclusions carefully. Assuming that the information given in the statements is true, even if it appears to be at variance with commonly known facts, decide which of the given conclusions logically follow(s) from the statements.

**Statements:**  
All hyenas are pandas  
Some deer are buffaloes  
Some hyenas are scorpions

**Conclusions:**  
(I) Some pandas are deer  
(II) Some hyenas are buffaloes  
(III) Some pandas are scorpions

- Ans ☒ 1. Only conclusion I follows  
☒ 2. Only conclusion III follow  
☒ 3. None of the conclusions follow  
☒ 4. Only conclusion II follows

Question ID : 630680193255  
Status : Answered  
Chosen Option : 2

**Q.2** Read the given statement and conclusions carefully. Decide which of the given conclusions is/are true based on the statement.

**Statement:**  
 $U \leq R = W < V > X \geq Z > Y$

**Conclusions:**  
I.  $Y < X$   
II.  $V > U$

- Ans ☒ 1. Only conclusion I is true  
☒ 2. Both conclusions I and II are true  
☒ 3. Neither conclusion I nor II is true  
☒ 4. Only conclusion II is true

Question ID : 630680193256  
Status : Answered  
Chosen Option : 2

**Q.3** Refer to the given number, symbol series and answer the question that follows.  
(Left) 7 + \* 7 # & 8 6 5 % 4 \$ 6 # @ 4 7 ! 2 5 (Right)

How many such symbols are there (from left to right) in the above series which are immediately preceded by a symbol and also immediately followed by an even number?

- Ans ☒ 1. 4  
☒ 2. 3  
☒ 3. 1  
☒ 4. 2

Question ID : 630680193258  
Status : Answered  
Chosen Option : 4

Q.4 Select the term from among the given options that can replace the question mark (?) in the following series.

B2Y, C3X, D6W, E9V, ?

- Ans
- ☒ 1. F12U
  - ☒ 2. G36U
  - ☒ 3. F45U
  - ☒ 4. F36U

Question ID : 630680193257  
Status : Answered  
Chosen Option : 3

Q.5 J, K, L, M, N and O live on six different floors of the same building. The lowermost floor in the building is numbered 1, the floor above it is numbered 2, and so on till the topmost floor is numbered 6. M lives on floor number 2. K and M are immediate neighbours. O lives on the floor immediately above K. N lives on the topmost floor. J lives on an odd numbered floor, exactly above O. On which floor does L live?

- Ans
- ☒ 1. 1
  - ☒ 2. 5
  - ☒ 3. 4
  - ☒ 4. 3

Question ID : 630680193253  
Status : Answered  
Chosen Option : 1

Q.6 B, D, F, H, G, O, T and W are eight family members. B is the brother of G. T is the son of W. O is the son of G. H is D's wife. G and W are sisters. F is the son of B. D is the father of B. How is H related to O?

- Ans
- ☒ 1. Maternal cousin
  - ☒ 2. Mother's mother
  - ☒ 3. Father's mother
  - ☒ 4. Mother's sister

Question ID : 630680193263  
Status : Answered  
Chosen Option : 2

Q.7 Each of the digits in the number 56249324861 is arranged in ascending order from left to right. What will be the sum of the digits which are second from the left and second from the right in the new number thus formed?

- Ans
- ☒ 1. 12
  - ☒ 2. 10
  - ☒ 3. 8
  - ☒ 4. 9

Question ID : 630680193269  
Status : Answered  
Chosen Option : 2

**Q.8** Each vowel in the word TABLE is changed to the letter following it in the English alphabetical order and each consonant is changed to the letter preceding it in the English alphabetical order. If each letter, thus formed, is arranged in alphabetical order, which letter will be third from the right?

- Ans
- ☒ 1. B
  - ☒ 2. F
  - ☒ 3. K
  - ☒ 4. A

Question ID : 630680193259

Status : Answered

Chosen Option : 2

**Q.9** Select the number from among the given options that can replace the question mark (?) in the following series.

3, 24, 125, 504, 1515, ?

- Ans
- ☒ 1. 3030
  - ☒ 2. 3032
  - ☒ 3. 9093
  - ☒ 4. 3028

Question ID : 630680193267

Status : Answered

Chosen Option : 2

**Q.10** Select the option in which the triad share the same relationship as that shared by the given triads.  
S – V – A  
H – K – P

- Ans
- ☒ 1. E – H – M
  - ☒ 2. W – Y – C
  - ☒ 3. N – Q – W
  - ☒ 4. K – N – R

Question ID : 630680193266

Status : Not Answered

Chosen Option : --

**Q.11** Eight classmates P, Q, R, S, T, U, V and W are sitting around a circular table facing the centre, but not necessarily in the same order. W sits exactly between S and Q. V sits exactly between T and P. U sits to the immediate left of S. V sits to the immediate right of T. R sits exactly between T and Q. Who sits to the immediate left of U?

- Ans
- ☒ 1. W
  - ☒ 2. P
  - ☒ 3. V
  - ☒ 4. S

Question ID : 630680193251

Status : Answered

Chosen Option : 2

**Q.12** Z, Y, X, W, T, S, R and Q are eight colleagues, sitting around a circular table at equal distance to each other facing the centre, not necessarily in the same order. S is an immediate neighbour of both Z and W. X is an immediate neighbour of both Y and T. R sits to the immediate right of Z. Q sits to the immediate left of W. Y sits second to the left of W. Who sits second to the right of S?

- Ans
- ☒

1. Q
- ☒
2. T

☒☒

Question ID : 630680193252

Status : Not Answered

Chosen Option : --

**Q.13** In the given letter-cluster pairs, the first letter-cluster is related to the second letter-cluster following a certain logic. Study the given pairs carefully, and from the given options, select the pair that follows the same logic.  
ENT : FQV  
FET : GHV

- Ans
- ☒

1. TEN : UHP
- ☒
2. GMT : HOV

☒☒

Question ID : 630680193264

Status : Answered

Chosen Option : 1

**Q.14** Rogerio, in search of an internet café, walked 30 m due North. He turned right and walked 18 m. He again turned right and walked 30 m. Finally, he turned left and walked 22 m to reach the internet café. How far and in which direction is the internet café from his starting point?

- Ans
- ☒

1. 40 m due west
- ☒
2. 100 m due East

☒☒

Question ID : 630680193262

Status : Answered

Chosen Option : 4

**Q.15** In this question, a group of numbers/symbols is coded using letters as per the table given below and the conditions which follow. The correct combination of codes following the condition is your answer.

Number/Symbol	1	3	#	@	\$	7	<	&	2	%	!	4	/	6
Code	E	F	A	C	B	P	W	Y	M	J	K	R	T	U

Conditions:

- (i) If the first element is a symbol and the third a number, the codes for these two are to be interchanged.
- (ii) If the first element is an odd number and the last an even number, the first and the last elements are to be coded as O.
- (iii) If both the second and third elements are perfect squares, the third element is to be coded as the code for the second element.

How will '# 3 2 < &' be coded?

- Ans
- ☒

1. MFAYW
- ☒
2. MFFWY

☒☒

Question ID : 630680193261

Status : Not Answered

Chosen Option : --

Q.16 Four letter-clusters have been given, out of which three are alike in some manner and one is different. Select the one that is different.  
(Note: the letter-clusters are NOT to be treated as meaningful words)

Ans

✖ 1. FJIL

✖ 2. MQPS

✔ 3. YCBF

✖ 4. PTSV

Question ID : 630680193265

Status : Not Answered

Chosen Option : --

Q.17 Seven boxes V, U, T, S, R, Q and P are kept one above the other, but not necessarily in the same order. S is at the lowermost position. Only V is kept above R. Only three boxes are kept between U and S. Q is kept immediately above T, which is kept above P. How many boxes are kept between V and P?

Ans

✖ 1. 3

✖ 2. 5

✔ 3. 4

✖ 4. 2

Question ID : 630680193254

Status : Answered

Chosen Option : 3

Q.18 Select the number from among the given options that can replace the question mark (?) in the following series.

8, 32, 16, 64, 32, 128, ?

Ans

✔ 1. 64

✖ 2. 48

✖ 3. 192

✖ 4. 256

Question ID : 630680193268

Status : Answered

Chosen Option : 1

Q.19 Select the correct combination of mathematical signs that can sequentially replace the \* signs and balance the given equation.

22 \* 16 \* 12 \* 3 \* 3 \* 2 \* 4

Ans

✔ 1. −, +, ÷, =, ×, +

✖ 2. +, −, ÷, ×, =, +

✖ 3. −, +, ÷, ×, =, +

✖ 4. −, +, ×, =, ÷, +

Question ID : 630680193270

Status : Not Answered

Chosen Option : --

Q.20 In a certain code language, 'CIVILIAN' is coded as '251961916192714' and 'COLONIAL' is coded as '2513161314192716'. How will 'COMPLAIN' be coded in that language?

Ans

✔ 1. 2513151216271914

✖ 2. 2512151215271914

✖ 3. 2514161217271914

✖ 4. 2412141115261813


Question ID : 630680193260

Status : Not Answered

Chosen Option : --

https://cdn.digialm.com//per/g01/pub/1258/touchstone/AssessmentQPHTMLMode1//1258O2353/1258O2353S3D10162/1679667491443434/14...

14/23

 Teachingninja.in



Section : English Language

Q.1 Select the option that can be used as a one-word substitute for the underlined group of words in the following sentence.

Zubeida went around like a person who walks in sleep, with an absent stare.

- Ans
- ☒

1. regressionist
- ☒

2. somnambulist
- ☒

3. arsonist
- ☒

4. narcissist

Question ID : 630680193289

Status : Answered

Chosen Option : 2

Q.2 Sentences of a paragraph are given below in jumbled order. Arrange the sentences in the correct order to form a meaningful and coherent paragraph.

- A. The fog was so bad that he could not see a lamp post looming in front of us.
- B. After a nervous glance at her watch she nearly yelled, "Jaldi, jaldi."
- C. He swerved to avoid it, hit the side of the pavement and the van came to a halt.
- D. So he put his foot down on the accelerator.

- Ans
- ☒

1. A, B, C, D
- ☒

2. A, B, D, C
- ☒

3. B, D, C, A
- ☒

4. B, D, A, C

Question ID : 630680193286

Status : Answered

Chosen Option : 2

Q.3 Select the most appropriate preposition to fill in the blank.

Baldy punched one policeman as Ponytail head-butted another as they tried to push \_\_\_\_\_ but by then Karthik and Dubey had also joined the fight.

- Ans
- ☒

1. off
- ☒

2. on
- ☒

3. through
- ☒

4. by

Question ID : 630680193274

Status : Answered

Chosen Option : 1

Q.4 Select the most appropriate ANTONYM of the word given in brackets to fill in the blank.

We went past their table mumbling very polite and \_\_\_\_\_ (outspoken) good nights.

- Ans
- ☒

1. loud
- ☒

2. disrespectful
- ☒

3. rowdy
- ☒

4. docile

Question ID : 630680193281

Status : Answered

Chosen Option : 2

Q.5

Select the INCORRECTLY spelt word from among the underlined words in the following sentence.

After she had sneezed continously for five minites, Aunt Razia took pity on her and offered to take us to the quiz.

Ans

✗ 1. sneized

✓ 2. continuously

✗ 3. minites

✗ 4. ofered

Question ID : 630680193283

Status : Answered

Chosen Option : 2

Q.6

Select the most appropriate proverb conveying the meaning given in brackets to fill in the blank.

Rekha's father has enrolled her in the best coaching centre and furnished her study room well. Yet she is not working hard at her studies. \_\_\_\_\_ (One can make it easy for someone to do something, but not force them to do it.)

Ans

✗ 1. You should make hay while the sun shines.

✓ 2. You can lead a horse to water, but you cannot make him drink it.

✗ 3. You should strike the iron when it is hot.

✗ 4. The grass is greener on the other side.

Question ID : 630680193280

Status : Answered

Chosen Option : 2

Q.7

Select the most appropriate synonym of the word given in brackets to fill in the blank.

This strange, ugly, \_\_\_\_\_ (baffling) city was also awesomely beautiful.

Ans

✗ 1. logical

✗ 2. coherent

✗ 3. dilapidated

✓ 4. bewildering

Question ID : 630680193282

Status : Not Answered

Chosen Option : --

Q.8

Select the most appropriate article to fill in the blank.

\_\_\_\_\_ younger man was very trendily dressed in a black, high-necked pullover and a leather jacket.

Ans

✗ 1. No article needed

✗ 2. A

✓ 3. The

✗ 4. An

Question ID : 630680193272

Status : Answered

Chosen Option : 4

Q.9 Select the most appropriate tense form of the verb given in brackets to fill in the blank.

“Okay, but \_\_\_\_\_ (remember) to always call Jahan, Janaki,” I turned to the others.

- Ans
- ☒

1. remembering
- ☒

2. remember
- ☒

3. remembered
- ☒

4. to remember

Question ID : 630680193278

Status : Answered

Chosen Option : 3

Q.10 Select the most appropriate adjective to fill in the blank.

Then he pointed to a \_\_\_\_\_ man in a dhoti who was standing at the river edge.

- Ans
- ☒

1. plum
- ☒

2. leather
- ☒

3. filled
- ☒

4. plump

Question ID : 630680193273

Status : Answered

Chosen Option : 4

Q.11 Choose the correct spelling of the underlined word in the given sentence.

He was followed by Nawab and Badshah, her two golden retreavers, who were all over us in a second.

- Ans
- ☒

1. Retraevers
- ☒

2. Retrievers
- ☒

3. Retreivers
- ☒

4. Retreavers

Question ID : 630680193284

Status : Answered

Chosen Option : 3

Q.12 Select the most appropriate option that can substitute the underlined word in the given sentence.

How can I have the key to the sanctum when all I do is fill pots of Ganga water and grind the sandalwood?

- Ans
- ☒

1. shrine
- ☒

2. museum
- ☒

3. treasury
- ☒

4. bank

Question ID : 630680193290

Status : Not Answered

Chosen Option : --

Q.13 Select the most appropriate proverb that conveys the meaning given in brackets in the following sentence, to fill in the blank.

I advised Rita to apply for the job soon after the opening was announced.  
\_\_\_\_\_ (The person who moves first will get an advantage over others.)

- Ans
- ☒ 1. The early bird catches the worm.
  - ☐ 2. To kill two birds with one stone.
  - ☐ 3. Rolling stone gathers no moss.
  - ☐ 4. A bird in hand is worth two in the bush.

Question ID : 630680193279

Status : Answered

Chosen Option : 1

Q.14 Select the most appropriate punctuation mark to fill in the blank.

“Yes, I did hear something but, sorry, girls \_\_\_\_\_”

- Ans
- ☒ 1. !
  - ☐ 2. ,
  - ☐ 3. .
  - ☐ 4. ?

Question ID : 630680193276

Status : Answered

Chosen Option : 3

Q.15 Select the most appropriate article to fill in the blank.

Just then, Miss Dutta came out of \_\_\_\_\_ physics lab looking grim and went marching off towards Sister Rose's office.

- Ans
- ☐ 1. an
  - ☒ 2. the
  - ☐ 3. No article needed
  - ☐ 4. a

Question ID : 630680193271

Status : Answered

Chosen Option : 2

Q.16 Select the most appropriate option to fill in blank

Aunt Razia turned to \_\_\_\_\_ at us, \_\_\_\_\_ a finger. “You four do not go anywhere without me, you hear? I'll be back in ten minutes.”

- Ans
- ☒ 1. glare, wagging
  - ☐ 2. cry, turning
  - ☐ 3. smile, looking
  - ☐ 4. laugh, twisting

Question ID : 630680193287

Status : Answered

Chosen Option : 1

Q.17

Select the most appropriate punctuation mark to fill in the blank.  
She was wearing a saggy, faded, green T\_\_\_\_\_ shirt.

Ans

✗

1. ;

✗

2. .

✓

3. -

✗

4. ,

Question ID : 630680193275

Status : Answered

Chosen Option : 3

Q.18

Select the most appropriate option that can substitute the underlined word in the following sentence.  
  
“Yes, Ma’am!” Karthik gave a mock salute, then as the two walked away, he smiled at Jahan.

Ans

✓

1. imitative

✗

2. sincere

✗

3. comic

✗

4. genuine

Question ID : 630680193288

Status : Answered

Chosen Option : 1

Q.19

Sentences of a paragraph are given below. While the first and the last sentences (A and F) are in the correct order, the sentences in between are jumbled up. Arrange the sentences in the correct order to form a meaningful and coherent paragraph.

A. Moving away from the noise and the crowds, we settled on the ghat steps outside and heard the whole story.

F. Mishra was nowhere to be seen but the idol was still in the crate in the store room.

B. Finally, a servant was found who opened the door to an empty house.

C. Another police team then rushed off to Robin’s house and found it locked.

D. When the police arrived at Shashadhar Mishra’s house and knocked at the door, no one answered.

E. The neighbours said that they had not seen the couple for the last two days.

Ans

✗

1. B, C, D, E

✓

2. D, B, C, E

✗

3. E, C, B, D

✗

4. E, D, C, B

Question ID : 630680193285

Status : Answered

Chosen Option : 4

Q.20

Select the most appropriate tense form of the verb given in brackets to fill in the blank.  
  
Then he \_\_\_\_\_ (point) to a plump man in a dhoti who was standing at the river edge filling a couple of large copper pots with Ganga water.

Ans

✗

1. will point

✗

2. had pointed

✓

3. pointed

✗

4. pointing

Question ID : 630680193277

Status : Answered

Chosen Option : 3

Section : General Studies

Q.1 Who was replaced by Lord Willingdon as viceroy in India just before the second round table conference?

Ans 

✗ 1. Lord Wavell

✓ 2. Lord Irwin

✗ 3. Lord Chelmsford

✗ 4. Lord Reading

Question ID : 630680193308

Status : Answered

Chosen Option : 2

Q.2 \_\_\_\_\_ was the temporary Chairman of the first meeting of the Constituent Assembly held on 9 December 1946.

Ans 

✓ 1. Sachchidananda Sinha

✗ 2. Krishnaswamy Ayyar

✗ 3. Gopalaswami Ayyangar

✗ 4. Madhava Rao

Question ID : 630680193300

Status : Answered

Chosen Option : 1

Q.3 As per Union Budget 2022 – 23 Emergency Credit Line Guarantee Scheme (ECLGS) will be extended up to \_\_\_\_\_ .

Ans 

✗ 1. May 2023

✗ 2. May 2024

✗ 3. March 2024

✓ 4. March 2023

Question ID : 630680193293

Status : Answered

Chosen Option : 3

Q.4 In 1724, who was reappointed Viceroy of the Deccan with the title of Asaf Jah?

Ans 

✓ 1. Qamar-ud-din Siddiqi

✗ 2. Saadat Khan Burhan-ul-Mulk

✗ 3. Farrukhsiyar

✗ 4. Murshid Quli Khan

Question ID : 630680193307

Status : Not Answered

Chosen Option : --

Q.5 \_\_\_\_\_ is the literacy rate of India, as per census 2011.

Ans 

✗ 1. 75.04%

✗ 2. 76.44%

✓ 3. 74.04%

✗ 4. 73.54%

Question ID : 630680193299

Status : Answered

Chosen Option : 1

Q.6

In how many broad belts are the minerals in India generally concentrated?

Ans

✖

1. Five

✖

2. Two

✔

3. Three

✖

4. Four

Question ID : 630680193296

Status : Not Answered

Chosen Option : --

Q.7

In \_\_\_\_\_, Fundamental Duties were added into the Indian Constitution.

Ans

✖

1. 1986

✖

2. 1956

✔

3. 1976

✖

4. 1966

Question ID : 630680193301

Status : Answered

Chosen Option : 3

Q.8

Which of the following statements about India is correct?

Ans

✔

1. The mainland extends between latitudes 8°4'N and 37°6'N and longitudes 68°7'E and 97°25'E.

✖

2. The mainland extends between latitudes 8°4'N and 47°6'N and longitudes 68°7'E and 97°25'E.

✖

3. The mainland extends between latitudes 7°4'N and 37°6'N and longitudes 68°7'E and 97°25'E.

✖

4. The mainland extends between latitudes 8°4'N and 37°6'N and longitudes 68°7'E and 87°25'E.

Question ID : 630680193295

Status : Answered

Chosen Option : 1

Q.9

In which of the following years did Maharashtra state introduce Lokayukta through the Maharashtra Lokayukta and Upa-Lokayuktas Act?

Ans

✔

1. 1971

✖

2. 1972

✖

3. 1973

✖

4. 1974

Question ID : 630680193304

Status : Answered

Chosen Option : 4

Q.10

The Constitution (101<sup>st</sup> Amendment) Act, 2016, deals with:

Ans

✖

1. 10% reservation for Economically Weaker Sections (EWSs)

✔

2. introducing the Goods and Services Tax

✖

3. constitutional status to the National Commission for Backward Classes

✖

4. extending the reservation of seats for SCs and STs in the Lok Sabha and State Assemblies


Question ID : 630680193310

Status : Answered

Chosen Option : 2

https://cdn.digialm.com//per/g01/pub/1258/touchstone/AssessmentQPHTMLMode1//1258O2353/1258O2353S3D10162/1679667491443434/14...

21/23

 Teachingninja.in

Q.11 Indian National Congress has how many MPs in the 17th Lok Sabha?

Ans 

✗ 1. 57

✓ 2. 53

✗ 3. 51

✗ 4. 59

Question ID : 630680193309

Status : Not Answered

Chosen Option : --

Q.12 Which of the following districts has population growth rate less than 10 per cent, as per census 2011?

Ans 

✗ 1. Jaipur

✗ 2. Nashik

✓ 3. Hugli

✗ 4. Surat

Question ID : 630680193298

Status : Answered

Chosen Option : 1

Q.13 Palas, Pratiharas and Rashtrakutas participated in warfare for the control of which of the following cities?

Ans 

✗ 1. Maghad

✗ 2. Patliputra

✗ 3. Gwalior

✓ 4. Kannauj

Question ID : 630680193305

Status : Not Answered

Chosen Option : --

Q.14 \_\_\_\_\_ is called the father of the modern Indian Renaissance due to the remarkable changes he instituted in 18th and 19th century India.

Ans 

✗ 1. Swami Ramakrishna Paramahansa

✗ 2. Atmaram Pandurang

✓ 3. Raja Ram Mohan Roy

✗ 4. Swami Vivekananda

Question ID : 630680193291

Status : Answered

Chosen Option : 3

Q.15 As of December 2022, who was the youngest Advocate General, the youngest Chief Justice of a High Court and the youngest Judge of the Supreme Court of India?

Ans 

✓ 1. Justice Md. Hidayatullah

✗ 2. Justice P.B. Gajendragadkar

✗ 3. Justice Mehr Chand Mahajan

✗ 4. Justice Sudhi Ranjan Das


Question ID : 630680193303

Status : Answered

Chosen Option : 4

https://cdn.digialm.com//per/g01/pub/1258/touchstone/AssessmentQPHTMLMode1//1258O2353/1258O2353S3D10162/1679667491443434/14...

22/23

 Teachingninja.in



Q.16 The difference between revenue and cost is called the firm's \_\_\_\_\_.

- Ans
- ☒ 1. loss
  - ☒ 2. interest
  - ☒ 3. profit
  - ☒ 4. capital

Question ID : 630680193294  
Status : Answered  
Chosen Option : 3

Q.17 Which of the following is NOT a Fundamental Right in the Indian Constitution?

- Ans
- ☒ 1. To develop the scientific temper, humanism and the spirit of inquiry and reform.
  - ☒ 2. To establish and maintain institutions for religious and charitable purposes.
  - ☒ 3. To move freely throughout the territory of India.
  - ☒ 4. To reside and settle in any part of the territory of India.

Question ID : 630680193302  
Status : Answered  
Chosen Option : 1

Q.18 When did Babar defeat and kill Ibrahim Lodi?

- Ans
- ☒ 1. 1525 AD
  - ☒ 2. 1522 AD
  - ☒ 3. 1526 AD
  - ☒ 4. 1520 AD

Question ID : 630680193306  
Status : Answered  
Chosen Option : 3

Q.19 What is India's predicted economic growth, as per Union Budget 2022 – 23?

- Ans
- ☒ 1. 9.9%
  - ☒ 2. 9.2%
  - ☒ 3. 8.8%
  - ☒ 4. 8.2%

Question ID : 630680193292  
Status : Answered  
Chosen Option : 2

Q.20 \_\_\_\_\_ has the lowest record of population density having just 17 per square kilometre, as per census 2011.

- Ans
- ☒ 1. Mizoram
  - ☒ 2. Goa
  - ☒ 3. Arunachal Pradesh
  - ☒ 4. Sikkim

Question ID : 630680193297  
Status : Answered  
Chosen Option : 3