



# Teachingninja.in



**Latest Govt Job updates**



**Private Job updates**



**Free Mock tests available**

**Visit - [teachingninja.in](https://teachingninja.in)**



Teachingninja.in

# **IB Security Assistant**

**Previous Year Paper**  
**24 Mar, 2023 Shift 3**



INTELLIGENCE BUREAU

(Ministry of Home Affairs)

Government of India

Participant ID	
Participant Name	
Test Center Name	
Test Date	24/03/2023
Test Time	3:00 PM - 4:00 PM
Subject	Security Assistant & Multi Tasking Staff

Section : General Awareness

Q.1 The Uttar Pradesh Government has made it mandatory for all students and teachers in madrasas of the state to sing \_\_\_\_\_ before commencing classes as per the order released by the Uttar Pradesh Government, in September 2022.

- Ans
- ☒ 1. the National Anthem
  - ☐ 2. Vande Mataram
  - ☐ 3. a patriotic song
  - ☐ 4. a prayer song

Question ID : 630680193628  
Status : Answered  
Chosen Option : 2

Q.2 Which of the following dances is performed during festivals like Eid al-Fitr and Ramzan in Jammu & Kashmir?

- Ans
- ☐ 1. Rasa Lila dance
  - ☐ 2. Kud dance
  - ☐ 3. Dumhal dance
  - ☒ 4. Rouf dance

Question ID : 630680193630  
Status : Answered  
Chosen Option : 4

Q.3 Which of the following historical caves of India are located in the state of Bihar?

- Ans
- ☐ 1. Ajanta Caves
  - ☐ 2. Kanheri Caves
  - ☒ 3. Barabar Caves
  - ☐ 4. Ellora Caves

Question ID : 630680193620  
Status : Answered  
Chosen Option : 3

<div><div>Q.4</div><div>How many species of Plasmodium have long been recognised to infect humans in nature to cause malaria?</div><div>Ans</div><div><div><div>✖</div><div>1. 1</div></div><div><div>✖</div><div>2. 3</div></div><div><div>✔</div><div>3. 4</div></div><div><div>✖</div><div>4. 2</div></div></div></div> <div><div>Question ID : 630680193621</div><div>Status : Answered</div><div>Chosen Option : 1</div></div>
<div><div>Q.5</div><div>Which of the following cities has been included in the top ten cities in the Sustainable Development Goals (SDG) Urban Index and Dashboard 2021-22 by NITI Aayog?</div><div>Ans</div><div><div><div>✖</div><div>1. Bengaluru</div></div><div><div>✔</div><div>2. Tiruchirappalli</div></div><div><div>✖</div><div>3. Jaipur</div></div><div><div>✖</div><div>4. Indore</div></div></div></div> <div><div>Question ID : 630680193629</div><div>Status : Answered</div><div>Chosen Option : 2</div></div>
<div><div>Q.6</div><div>Which team won the Ranji Trophy 2022 final?</div><div>Ans</div><div><div><div>✔</div><div>1. Madhya Pradesh</div></div><div><div>✖</div><div>2. Gujarat</div></div><div><div>✖</div><div>3. Mumbai</div></div><div><div>✖</div><div>4. Punjab</div></div></div></div> <div><div>Question ID : 630680193618</div><div>Status : Answered</div><div>Chosen Option : 1</div></div>
<div><div>Q.7</div><div>_____ is a percussion instrument.</div><div>Ans</div><div><div><div>✖</div><div>1. Flute</div></div><div><div>✖</div><div>2. Clarinet</div></div><div><div>✔</div><div>3. Cymbal</div></div><div><div>✖</div><div>4. Veena</div></div></div></div> <div><div>Question ID : 630680193624</div><div>Status : Answered</div><div>Chosen Option : 4</div></div>
<div><div>Q.8</div><div>Which state bagged the highest number of medals during the Khelo India Youth Games 2022?</div><div>Ans</div><div><div><div>✖</div><div>1. Maharashtra</div></div><div><div>✔</div><div>2. Haryana</div></div><div><div>✖</div><div>3. Punjab</div></div><div><div>✖</div><div>4. Tamil Nādu</div></div></div></div> <div><div>Question ID : 630680193619</div><div>Status : Answered</div><div>Chosen Option : 1</div></div>

<div><div>Q.9 _____ is a free-living animal.</div><div>Ans <div><div><div>✖</div><div>1. Leech</div></div><div><div>✖</div><div>2. Tapeworm</div></div><div><div>✖</div><div>3. Wuchereria</div></div><div><div>✔</div><div>4. Planaria</div></div></div></div></div> <div><div>Question ID : 630680193625</div><div>Status : Answered</div><div>Chosen Option : 3</div></div>
<div><div>Q.10 In the RT-PCR examination, the term Ct stands for:</div><div>Ans <div><div><div>✔</div><div>1. Cycle Threshold</div></div><div><div>✖</div><div>2. Computed Tomography</div></div><div><div>✖</div><div>3. Corona Threshold</div></div><div><div>✖</div><div>4. Computed Topography</div></div></div></div></div> <div><div>Question ID : 630680193633</div><div>Status : Answered</div><div>Chosen Option : 4</div></div>
<div><div>Q.11 Which of the following processes cause cooling?</div><div>Ans <div><div><div>✖</div><div>1. Translocation</div></div><div><div>✔</div><div>2. Evaporation</div></div><div><div>✖</div><div>3. Fermentation</div></div><div><div>✖</div><div>4. Respiration</div></div></div></div></div> <div><div>Question ID : 630680193626</div><div>Status : Answered</div><div>Chosen Option : 2</div></div>
<div><div>Q.12 To which state does the popular folk singer Teejan Bai belong to?</div><div>Ans <div><div><div>✖</div><div>1. Gujarat</div></div><div><div>✖</div><div>2. Manipur</div></div><div><div>✖</div><div>3. Assam</div></div><div><div>✔</div><div>4. Chhattisgarh</div></div></div></div></div> <div><div>Question ID : 630680193631</div><div>Status : Answered</div><div>Chosen Option : 3</div></div>
<div><div>Q.13 In March 2022, the Brihanmumbai Municipal Corporation and the Maharashtra government have their first-ever climate action plan, Mumbai Climate Action Plan (MCAP), to eliminate carbon emissions by _____.</div><div>Ans <div><div><div>✖</div><div>1. 2030</div></div><div><div>✔</div><div>2. 2050</div></div><div><div>✖</div><div>3. 2040</div></div><div><div>✖</div><div>4. 2060</div></div></div></div></div> <div><div>Question ID : 630680193622</div><div>Status : Answered</div><div>Chosen Option : 2</div></div>

Q.14 In which year did the government set up the Central Pollution Control Board (CPCB)?

- Ans
- ☒ 1. 1970
  - ☒ 2. 1984
  - ☒ 3. 1974
  - ☒ 4. 1980

Question ID : 630680193627  
Status : Answered  
Chosen Option : 2

Q.15 Which of the following statements is INCORRECT?

- Ans
- ☒ 1. All chordates have a ventral nerve cord.
  - ☒ 2. All chordates are triploblastic.
  - ☒ 3. All chordates have paired gills. pouches
  - ☒ 4. All chordates have a notochord.

Question ID : 630680193632  
Status : Not Answered  
Chosen Option : --

Q.16 Where did the 36<sup>th</sup> National Games take place in September-October 2022?

- Ans
- ☒ 1. Gujarat
  - ☒ 2. Andhra Pradesh
  - ☒ 3. Maharashtra
  - ☒ 4. Karnataka

Question ID : 630680193614  
Status : Answered  
Chosen Option : 1

Q.17 Light falling on colloidal particles leads to scattering of light. This phenomena is called:

- Ans
- ☒ 1. Mendel's effect
  - ☒ 2. Brownian effect
  - ☒ 3. Bowl effect
  - ☒ 4. Tyndall effect

Question ID : 630680193616  
Status : Answered  
Chosen Option : 4

Q.18 In which classical dance forms the performance includes a Sutradhara or Nattuvanar who is the conductor of the entire performance?

- Ans
- ☒ 1. Odissi
  - ☒ 2. Bharatnatyam
  - ☒ 3. Kathak
  - ☒ 4. Kuchipudi

Question ID : 630680193623  
Status : Answered  
Chosen Option : 2

Q.19 In the Global Hunger Index 2022, India's rank is:

- Ans
- ☒ 1. 121<sup>st</sup>
  - ☒ 2. 116<sup>th</sup>
  - ☒ 3. 107<sup>th</sup>
  - ☒ 4. 109<sup>th</sup>

Question ID : 630680193617  
Status : Answered  
Chosen Option : 3

Q.20 The white blood cells in human blood are also called:

- Ans
- ☒ 1. leukocytes
  - ☒ 2. erythrocytes
  - ☒ 3. melanocytes
  - ☒ 4. granulocytes

Question ID : 630680193615  
Status : Answered  
Chosen Option : 1

Section : Quantitative Aptitude

Q.1 The difference between the two numbers is 1140. If 6% of one number is equal to 10% of the other number, find the greater number.

- Ans
- ☒ 1. 2500
  - ☒ 2. 2600
  - ☒ 3. 1660
  - ☒ 4. 2850

Question ID : 630680193648  
Status : Not Attempted and Marked For Review  
Chosen Option : --

Q.2 The cost price of 15 apples is equal to the selling price of 10 apples and the discount on 12 apples is equal to the profit on 4 apples. What is the percentage point difference between the profit percentage and discount percentage?

- Ans
- ☒ 1. 30
  - ☒ 2. 50
  - ☒ 3. 20
  - ☒ 4. 40

Question ID : 630680193635  
Status : Not Attempted and Marked For Review  
Chosen Option : --

Q.3 Find the average of the squares numbers which lie between 20 and 70.

- Ans
- ☒ 1. 43.5
  - ☒ 2. 44.5
  - ☒ 3. 46.5
  - ☒ 4. 41.5

Question ID : 630680193652  
Status : Answered  
Chosen Option : 2

**Q.4** A wall of dimensions 50 m × 30 m × 40 m is to be built with bricks of length 3 m, breadth 2 m, and height 1 m. The contractor has ordered 6500 bricks. How many more bricks would be required?

- Ans**
- ☒ 1. 7000
  - ☒ 2. 6500
  - ☒ 3. 10000
  - ☒ 4. 3500

Question ID : 630680193643

Status : **Not Attempted and Marked For Review**

Chosen Option : --

**Q.5** In a mixture of 90 L, the ratio of milk and water is 4 : 5. If this ratio is to be 5 : 4, then the quantity of milk to be added further is \_\_\_\_\_.

- Ans**
- ☒ 1. 24.5 L
  - ☒ 2. 17.5 L
  - ☒ 3. 22.5 L
  - ☒ 4. 20.5 L

Question ID : 630680193650

Status : **Not Attempted and Marked For Review**

Chosen Option : --

**Q.6** A shopkeeper increases the selling price of an article by 40% due to which his profit percentage increases from 15% to 40%. What is the percentage increase in the cost price?

- Ans**
- ☒ 1. 10%
  - ☒ 2. 25%
  - ☒ 3. 20%
  - ☒ 4. 15%

Question ID : 630680193634

Status : **Not Attempted and Marked For Review**

Chosen Option : --

**Q.7** A builder appoints three construction workers Jai, Naresh and Sunil on one of his sites. They take 20, 30 and 60 days, respectively, to do a piece of work. How many days will it take Jai to complete the entire work if he is assisted by Naresh and Sunil together on alternate days? Jai starts the work on the first day alone.

- Ans**
- ☒ 1. 14 days
  - ☒ 2.  $12\frac{1}{2}$  days
  - ☒ 3.  $13\frac{1}{2}$  days
  - ☒ 4. 10 days

Question ID : 630680193641

Status : **Not Attempted and Marked For Review**

Chosen Option : --



Q.8

If  $x + \frac{1}{x} = 6$  and  $y = \frac{2^{18}+2^{20}+2^{22}}{2^{20}+2^{22}+2^{24}}$ , then the ratio of  $\frac{3x}{2x^2+2-5x} : y$  is \_\_\_\_\_.

Ans

✓ 1.

12 : 7

✗ 2.

7 : 12

✗ 3.

7 : 5

✗ 4.

5 : 7

Question ID : 630680193653

Status : Not Attempted and Marked For Review

Chosen Option : --

Q.9

The LCM of two prime numbers  $x$  and  $y$  ( $x > y$ ) is 667. What is the value of  $5y - 3x$ ?

Ans

✗ 1.

-14

✗ 2.

14

✗ 3.

-28

✓ 4.

28

Question ID : 630680193638

Status : Not Attempted and Marked For Review

Chosen Option : --

Q.10

A and B working separately can finish a work in 15 days and 20 days, respectively. If they work on alternate days, A starting first, and if the work goes on for 8 days, what part of the work will be left unfinished?

Ans

✗ 1.

$\frac{7}{60}$

✗ 2.

$\frac{3}{5}$

✓ 3.

$\frac{8}{15}$

✗ 4.

$\frac{1}{4}$

Question ID : 630680193639

Status : Not Attempted and Marked For Review

Chosen Option : --

Q.11

If 15% of 55% of a number is 2475, then 41% of that number is:

Ans

✗ 1.

10200

✓ 2.

12300

✗ 3.

12000

✗ 4.

15000

Question ID : 630680193646

Status : Not Attempted and Marked For Review

Chosen Option : --

**Q.12** The ratio of two numbers is 5 : 4. A number y is then subtracted from each of the two given numbers so that the ratio of the resultant numbers becomes 2 : 1. What would be the ratio of the resultant numbers when the same number y is added to each of the two initial numbers?

- Ans
- ☒ 1. 3 : 2
  - ☒ 2. 5 : 4
  - ☒ 3. 7 : 6
  - ☒ 4. 8 : 7

Question ID : 630680193636

Status : Not Attempted and Marked For Review

Chosen Option : --

**Q.13** A can complete a piece of work alone in 20 days, while B can do it alone in 30 days. They worked together for 5 days and left. The rest of the work is completed by C alone in 7 days. In what ratio should the payment be divided among them?

- Ans
- ☒ 1. 4 : 5 : 6
  - ☒ 2. 3 : 2 : 7
  - ☒ 3. 1 : 8 : 9
  - ☒ 4. 2 : 6 : 9

Question ID : 630680193642

Status : Not Attempted and Marked For Review

Chosen Option : --

**Q.14** The simple interest on ₹6,000 in 4 years at R% interest per annum is equal to the simple interest on ₹9,000 at the rate of 12% per annum in 2 years. What is the value of R?

- Ans
- ☒ 1. 8
  - ☒ 2. 11
  - ☒ 3. 9
  - ☒ 4. 10

Question ID : 630680193637

Status : Not Attempted and Marked For Review

Chosen Option : --

**Q.15** If  $(3^2)^{\sqrt{x}} = 41^{\sqrt{x}} - 40^{\sqrt{x}}$ , then  $x^2$  is equal to:

- Ans
- ☒ 1. 4
  - ☒ 2. 20
  - ☒ 3. 16
  - ☒ 4. 12

Question ID : 630680193645

Status : Not Attempted and Marked For Review

Chosen Option : --

**Q.16** Two trains start at the same time from A and B and move towards each other at the rates of 10 km/h and 27 km/h, respectively. When they meet, it is found that one train has travelled 340 km more than the other. The distance between A and B is \_\_\_\_\_.

- Ans
- ✓ 1. 740 km
  - ✗ 2. 786 km
  - ✗ 3. 486 km
  - ✗ 4. 589 km

Question ID : 630680193640

Status : Not Attempted and Marked For Review

Chosen Option : --

**Q.17** The average weight of X, Y and Z is 50 kg. The average weight of X and Y is 44.5 kg and the average weight of Y and Z is 53.5 kg. If the weights of X, Y and Z are p, q and r, respectively, then the value of  $\frac{p+q}{r}$ , correct to two decimal places, is \_\_\_\_\_.

- Ans
- ✓ 1. 1.46
  - ✗ 2. 0.45
  - ✗ 3. 0.95
  - ✗ 4. 1.55

Question ID : 630680193647

Status : Not Attempted and Marked For Review

Chosen Option : --

**Q.18**  $1+4+9+16+25+\dots+81+100+81+\dots+16+9+4+1=?$

- Ans
- ✓ 1. 670
  - ✗ 2. 620
  - ✗ 3. 550
  - ✗ 4. 690

Question ID : 630680193651

Status : Not Attempted and Marked For Review

Chosen Option : --

**Q.19** Station A is 530 km away from station B. A train starts from Station A at 9:00 A.M. towards Station B at 90 km/h, while another train starts from Station B at 10:00 A.M. towards Station A at 90 km/h. At what time do they meet?

- Ans
- ✗ 1. 12:26:20 P.M.
  - ✓ 2. 12:26:40 P.M.
  - ✗ 3. 12:26:30 P.M.
  - ✗ 4. 12:26:50 P.M.

Question ID : 630680193649

Status : Not Attempted and Marked For Review

Chosen Option : --

Q.20

Mohit bought a house for ₹64,000, promising to pay after 1.5 years with an interest at the rate of 5% per annum compounded half yearly. Find the interest paid after one and a half years.

Ans

✗

1.

₹2,041

✓

2.

₹4,921

✗

3.

₹2,564

✗

4.

₹5,126

Question ID : 630680193644

Status : Not Answered

Chosen Option : --

Section : Numerical,Logical,Analytical Ability & Reasoning

Q.1

Select the number from among the given options that can replace the question mark (?) in the following series.  
5, 6, 10, 19, 35, 60, ?

Ans

✗

1.

122

✓

2.

96

✗

3.

118

✗

4.

106

Question ID : 630680193671

Status : Answered

Chosen Option : 2

Q.2

Read the given statements and conclusions carefully. Decide which of the given conclusions is true based on the statements.

Statements:

$Z < S < E = J, J \geq T > G = V$

Conclusions:

I.  $V < E$   
II.  $T > Z$

Ans

✓

1.

Only conclusion I is true

✗

2.

Neither conclusion I nor II is true

✗

3.

Either conclusion I or II is true

✗

4.

Only conclusion II is true

Question ID : 630680193659

Status : Answered

Chosen Option : 2

Q.3

S16H is related to P22K in a certain way. In the same way, M28N is related to J34Q. To which of the following is K32P related following the same logic?

Ans

✗

1.

G42T

✗

2.

D38W

✓

3.

H38S

✗

4.

F40U

Question ID : 630680193668

Status : Answered

Chosen Option : 3

Q.4 Nine persons – C, D, B, A, J, F, G, H and K – are sitting in a straight line facing north, but not necessarily in the same order. G sits second to the right of C. B sits fourth to the left of G. D is neither an immediate neighbour of K nor B. F sits fourth to the right of C and second to the left of K. K sits fifth to the right of A. Only three people sit between J and A. Who among the following sits third to the right of H?

- Ans
- ☒

1. F
- ☒

2. D
- ☒

3. G
- ☒

4. C

Question ID : 630680193654

Status : Not Answered

Chosen Option : --

Q.5 Eight people E, F, G, H, J, K, L and M are sitting around a circular table facing the centre but not necessarily in the same order. F is sitting second to the left of K. H is an immediate neighbour of K. There are only three people sitting between H and E. Only one person sits between L and E. M is sitting to the immediate right of the L. G is to the immediate left of F. What is the position of L with respect to H?

- Ans
- ☒

1. Fourth to the left
- ☒

2. Third to the left
- ☒

3. Second to the right
- ☒

4. Fourth to the right

Question ID : 630680193655

Status : Not Answered

Chosen Option : --

Q.6 Study the given arrangement of 2-digit numbers and symbols and answer the question that follows.

(Left) 65 67 87 86 & 43 32 37 @ 27 % 29 76 71 49 \$ 52 23 # (Right)

What is the sum of the 8<sup>th</sup> number from the left and the 5<sup>th</sup> number from the right end in the above series?

- Ans
- ☒

1. 103
- ☒

2. 106
- ☒

3. 109
- ☒

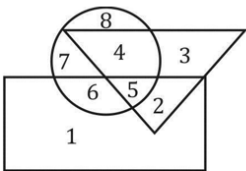
4. 97

Question ID : 630680193661

Status : Not Answered

Chosen Option : --

**Q.7** The following question is based on the given diagram. The triangle represents 'teachers', the circle represents 'players', and the rectangle represents 'musicians'.



Which numbered space in the diagram represents teachers who are also players and musicians?

- Ans 

✓

1. 5

✗

2. 3

✗

3. 2

✗

4. 4
- Question ID : 630680193658

Status : Answered

Chosen Option : 1
- Q.8** In the given letter-cluster pairs, the first letter-cluster is related to the second letter-cluster following a certain logic. Study the given pairs carefully, and from the given options, select the pair that follows the same logic.
- JHL : MKO :: PNR : SQU
- Ans 

✓

1. VTS : YWV

✗

2. ZXC : VUX

✗

3. WUX : YXB

✗

4. WTX : ZXA

Question ID : 630680193667

Status : Not Answered

Chosen Option : --

**Q.9** Select the number from among the given options that can replace the question mark (?) in the following series.

5, 20, 80, 320, 1280, ?

Ans 

✗

1. 4890

✓

2. 5120

✗

3. 4760

✗

4. 4430

Question ID : 630680193670

Status : Not Answered

Chosen Option : --

https://cdn.digialm.com//per/g01/pub/1258/touchstone/AssessmentQPHTMLMode1//1258O2353/1258O2353S6D11264/16796676653696335/1...

12/24

Teachingninja.in

**Q.10** In this question, a group of letters is coded using numbers/symbols as per the table given below and the conditions which follow. The correct combination of codes following the conditions is your answer.

#	8	%	@	6	&	1	*	!	7
A	L	B	T	Q	I	E	D	F	U

**Condition 1:** If a word starts with a vowel but ends with a consonant then codes for first and last letter to be reversed.

**Condition 2:** If there are more than two vowels in a word, then the first vowel is to be coded as 1, the second vowel as 2 and so on.

**Condition 3:** If a word starts with a consonant and also ends with a vowel then vowels are to be coded after coding all the consonants.

What is the code for “BEAUTIFUL”

- Ans
- ✗

1. %1#7@4!78

✓

2. %123@4!58

✗

3. %123@&!78

✗

4. %1#7&@!78

Question ID : 630680193664

Status : Not Answered

Chosen Option : --

**Q.11** Q walks 100 m towards the north. Then he turns right and walks 150 m. Then he turns right and walks 170 m. Then he turns left and walks 80 m. Finally, he turns left and walks 70 m. How many metres and in which direction is he from the starting position?

- Ans
- ✗

1. 200 m towards the west

✗

2. 240 m towards the east

✓

3. 230 m towards the east

✗

4. 250 m towards the west

Question ID : 630680193665

Status : Answered

Chosen Option : 3

**Q.12** If 1<sup>st</sup> January 1997 was a Wednesday, what was the day of the week on 24<sup>th</sup> June 1997?

- Ans
- ✗

1. Wednesday

✓

2. Tuesday

✗

3. Monday

✗

4. Sunday

Question ID : 630680193662

Status : Answered

Chosen Option : 3

Q.13 Which two signs should be interchanged to make the following equation correct?

16 × 25 ÷ (121 - 11) = 389

- Ans
- ☒ 1. (+ and -)
  - ☒ 2. (- and ×)
  - ☒ 3. (× and ÷)
  - ☒ 4. (- and ÷)

Question ID : 630680193673

Status : Not Attempted and Marked For Review

Chosen Option : --

Q.14 Four letter-cluster pairs have been given, out of which three are alike in some manner, and one is different. Select the one that is different.

- Ans
- ☒ 1. KJM - PQN
  - ☒ 2. DCF - WXU
  - ☒ 3. QPR - KJI
  - ☒ 4. GFI - TUR

Question ID : 630680193669

Status : Not Attempted and Marked For Review

Chosen Option : --

Q.15 There are six boxes, namely P, Q, R, S, T, U, which are kept one above the other. R is kept immediately above P. T is kept immediately above U. Only two boxes are kept between T and S. T is not at the topmost or at the lowermost position. P is above U. Q is kept immediately above S. R is neither kept immediately above nor immediately below T. U is kept at one of the positions above S. There are only 2 boxes between R and U. Which of the following boxes is kept immediately below U?

- Ans
- ☒ 1. T
  - ☒ 2. R
  - ☒ 3. Q
  - ☒ 4. S

Question ID : 630680193657

Status : Not Attempted and Marked For Review

Chosen Option : --

Q.16 Seven boxes – A, B, C, D, E, F and G are kept one above the other in a stack. G is kept at the bottommost position. A is kept immediately above G. There are 2 boxes between F and A. E is kept third from the bottom. B is kept immediately above D. How many boxes are there between F and E?

- Ans
- ☒ 1. Three
  - ☒ 2. One
  - ☒ 3. Four
  - ☒ 4. Two

Question ID : 630680193656

Status : Not Attempted and Marked For Review

Chosen Option : --



Q.17

In a certain code language, 'greater than person' is written as 476, 'there is no greater' is written as 8243, 'no person is right' is written as 2817, and 'disability no greater' is written as 548. What is the code for 'right' in that language?

Ans

✖

1. 2

✖

2. 4

✖

3. 8

✔

4. 1

Question ID : 630680193663

Status : Not Attempted and Marked For Review

Chosen Option : --

Q.18

Select the combination of letters that when sequentially placed in the blanks of the given series will complete the series.

IMPI\_ \_EIMP\_ \_ GEIM\_ \_ NGEI\_ \_ INGE

Ans

✖

1. GINNMIPP

✖

2. GNNIMIPP

✔

3. NGINPIMP

✖

4. GNNIPIMP

Question ID : 630680193660

Status : Not Attempted and Marked For Review

Chosen Option : --

Q.19

A, B, C, D, E and F are six members in a family. The family consists of two married couples.The family members are a lawyer, teacher,businessman, engineer, accountant and doctor. A, the lady teacher, is married to the businessman. The lawyer is married to B, who is a doctor. F, the accountant, is the son of B and the brother of E. C, the lawyer, is the daughter-in-law of A. E is the unmarried engineer. A's son's son is F.How is D related to F?

Ans

✖

1. Father

✔

2. Paternal grandfather

✖

3. Brother

✖

4. Daughter's son

Question ID : 630680193666

Status : Not Attempted and Marked For Review

Chosen Option : --

Q.20

What approximate value should come in place of the question mark (?) in the following equation?

48.09% of 1698 + 59% of 2387.98 - ? = 1225

Ans

✖

1. 1040

✔

2. 1000

✖

3. 1060

✖

4. 1076

Question ID : 630680193672


Status : Not Attempted and Marked For Review

Chosen Option : --

Section : English Language

https://cdn.digialm.com//per/g01/pub/1258/touchstone/AssessmentQPHTMLMode1//1258O2353/1258O2353S6D11264/16796676653696335/1...

15/24

 Teachingninja.in

Q.1

Select the most appropriate option to fill in the blank.

The Grand Central Terminal is \_\_\_\_\_ most famous station in the world.

Ans

✓ 1. the

✗ 2. a

✗ 3. No word required

✗ 4. an

Question ID : 630680193674

Status : Answered

Chosen Option : 1

Q.2

Select the most appropriate option that can substitute the underlined segment in the given sentence. If there is no need to substitute it, select 'No substitution required'.

Any inventory of Darjeeling is incomplete if a tea plantation is not included in it.

Ans

✓ 1. itinerary

✗ 2. index

✗ 3. No substitution required

✗ 4. record

Question ID : 630680193692

Status : Not Attempted and Marked For Review

Chosen Option : --

Q.3

Select the most appropriate option to fill in the blank.

This story is \_\_\_\_\_ the partition of India and Pakistan.

Ans

✗ 1. to

✗ 2. at

✓ 3. about

✗ 4. for

Question ID : 630680193676

Status : Answered

Chosen Option : 3

Q.4

Select the correct punctuation mark to fill in the blank.

Bobby \_\_\_\_\_ I didn't know you could play the mouth organ.

Ans

✗ 1. semicolon (;)

✗ 2. colon (:) )

✗ 3. dash (-)


✓ 4. comma (,)

Question ID : 630680193678

Status : Answered

Chosen Option : 3

https://cdn.digialm.com//per/g01/pub/1258/touchstone/AssessmentQPHTMLMode1//1258O2353/1258O2353S6D11264/16796676653696335/1... 16/24

 Teachingninja.in

**Q.5** Sentences of a paragraph are given below in jumbled order. Arrange the sentences in the correct order to form a meaningful and coherent paragraph.

- A. Once, I went for a wedding with my cousins to the neighbouring village.
- B. We children enjoyed ourselves thoroughly.
- C. In those days, a wedding was a great event.
- D. We would eat and play endlessly, savouring the freedom because all the elders were busy.

- Ans
- ☒ 1. ADCB
  - ☒ 2. ABDC
  - ☒ 3. ADBC
  - ☒ 4. ACBD

Question ID : 630680193688

Status : Answered

Chosen Option : 2

**Q.6** Select the most appropriate option that can substitute the underlined segment in the given sentence. If there is no need to substitute it, select 'No substitution required'.

We have constructed a rough estimate of expenditure for this project.

- Ans
- ☒ 1. manufactured
  - ☒ 2. No substitution required
  - ☒ 3. prepared
  - ☒ 4. built

Question ID : 630680193693

Status : Answered

Chosen Option : 3

**Q.7** Select the INCORRECTLY spelt word.

- Ans
- ☒ 1. Sailor
  - ☒ 2. Waitor
  - ☒ 3. Author
  - ☒ 4. Actor

Question ID : 630680193686

Status : Answered

Chosen Option : 2

**Q.8** Select the most appropriate option to fill in the blanks.

The artist was shocked \_\_\_\_\_ that somebody had scratched his painting \_\_\_\_\_ a knife.

- Ans
- ☒ 1. see, for
  - ☒ 2. to be seeing, from
  - ☒ 3. to see, with
  - ☒ 4. seeing, by

Question ID : 630680193690

Status : Answered

Chosen Option : 3

Q.9

Select the most appropriate option that can substitute the underlined segment in the given sentence. If there is no need to substitute it, select 'No substitution required'.

Our solar system is a part of the Milky Way galaxy.

Ans

✖

1. cosmos

✔

2. No substitution required

✖

3. creation

✖

4. universe

Question ID : 630680193691

Status : Answered

Chosen Option : 2

Q.10

Select the INCORRECTLY spelt word.

Ans

✖

1. Culture

✔

2. Sculptur

✖

3. Murmur

✖

4. Puncture

Question ID : 630680193687

Status : Answered

Chosen Option : 2

Q.11

Select the most appropriate option to fill in the blank.

Sarju sat next to her mother \_\_\_\_\_ her doll tightly in her arms.

Ans

✔

1. holding

✖

2. to hold

✖

3. held

✖

4. hold

Question ID : 630680193677

Status : Answered

Chosen Option : 1

Q.12

Select the sentence with correct punctuation and capitalisation.

Ans

✖

1. Well thats all I've got to say about Mars.

✔

2. "Well, that's all I've got to say about Mars."

✖

3. Well, that's all Ive got to say, about Mars.

✖

4. "Well, that's all I've got to say about mars?"

Question ID : 630680193679

Status : Answered

Chosen Option : 3

Q.13

Select the most appropriate option to fill in the blank.

\_\_\_\_\_ antique shop will be a good place to see old clocks.

Ans

✖

1. A

✔

2. An

✖

3. The

✖

4. No word required

Question ID : 630680193675

Status : Answered

Chosen Option : 2

Q.14 Select the most appropriate meaning of the given word.

Absolute

Ans 

✗

1. Yielding

✗

2. Limited

✗

3. Restricted

✓

4. Complete

Question ID : 630680193685

Status : Answered

Chosen Option : 4

Q.15 Select the most appropriate meaning of the given idiom.

By and large

Ans 

✗

1. At some future time

✗

2. Certainly

✗

3. On the contrary

✓

4. On the whole

Question ID : 630680193683

Status : Not Attempted and Marked For Review

Chosen Option : --

Q.16 Select the most appropriate option to fill in the blank.

My grandfather \_\_\_\_\_ for a morning walk everyday irrespective of the weather outside.

Ans 

✗

1. go

✗

2. is going

✓

3. goes

✗

4. has gone

Question ID : 630680193680

Status : Answered

Chosen Option : 4

Q.17 Select the most appropriate ANTONYM of the word given in brackets to fill in the blank.

The whole story narrated by the girl was \_\_\_\_\_ (accurate).

Ans 

✗

1. correct

✓

2. false

✗

3. strict

✗

4. just

Question ID : 630680193684

Status : Answered

Chosen Option : 2

Q.18 Sentences of a paragraph are given below in jumbled order. Arrange the sentences in the correct order to form a meaningful and coherent paragraph.

- A. During that time she would forget all her work and listen with the greatest concentration.
- B. Later, she could repeat the entire text by heart.
- C. My grandmother never went to school so she could not read.
- D. Every Wednesday, a magazine called Karmaveera would come, and I would read a story to her.

- Ans
- ☒ 1. ADBC
  - ☒ 2. DACB
  - ☒ 3. CBDA
  - ☒ 4. CDAB

Question ID : 630680193689

Status : Answered

Chosen Option : 2

Q.19 Select the most appropriate option to fill in the blank.

We took a break after we \_\_\_\_\_ for two days continuously.

- Ans
- ☒ 1. have worked
  - ☒ 2. worked
  - ☒ 3. had worked
  - ☒ 4. are working

Question ID : 630680193681

Status : Answered

Chosen Option : 2

Q.20 Select the option that can substitute the underlined segment in the given proverb correctly. If there is no need to substitute it, select 'No substitution required'.

Strike while the person is not ready.

- Ans
- ☒ 1. everything is cold
  - ☒ 2. everybody is resting
  - ☒ 3. the iron is hot
  - ☒ 4. No substitution required

Question ID : 630680193682

Status : Answered

Chosen Option : 2

Section : General Studies

Q.1 The Drafting Committee of the Indian Constitution had \_\_\_\_\_.

- Ans
- ☒ 1. eight members
  - ☒ 2. six members
  - ☒ 3. nine members
  - ☒ 4. seven members

Question ID : 630680193700

Status : Answered

Chosen Option : 4

Q.2

The Gurjara-Pratihara dynasty was founded by \_\_\_\_\_ in the region of Malwa in the eighth century.

Ans

✗

1. Vatsaraja

✗

2. Mihira Bhoja

✓

3. Nagabhata I

✗

4. Dhruva

Question ID : 630680193702

Status : Not Attempted and Marked For Review

Chosen Option : --

Q.3

The first English newspaper in India 'Bengal Gazette' was started by\_\_\_\_\_.

Ans

✓

1. James Augustus Hicky

✗

2. Subash Chandra Bose

✗

3. John Adams

✗

4. Richard Wellesley

Question ID : 630680193703

Status : Answered

Chosen Option : 1

Q.4

As per \_\_\_\_\_, the President shall address both Houses of Parliament assembled together on the commencement of the first parliament session of each year.

Ans

✗

1. Article 41(2)

✗

2. Article 53(1)

✓

3. Article 87(1)

✗

4. Article 93(1)

Question ID : 630680193713

Status : Answered

Chosen Option : 3

Q.5

The North-Eastern Areas (Reorganisation) Act was passed in the year \_\_\_\_\_.

Ans

✗

1. 1952

✗

2. 1963

✓

3. 1971

✗

4. 1989

Question ID : 630680193705

Status : Answered

Chosen Option : 3

Q.6

India's total area accounts for about \_\_\_\_\_ of the total geographical area of the world.

Ans

✗

1. 3.4 per cent

✗

2. 4.4 per cent

✓

3. 2.4 per cent

✗


4. 1.4 per cent

Question ID : 630680193696

Status : Answered

Chosen Option : 1

https://cdn.digialm.com//per/g01/pub/1258/touchstone/AssessmentQPHTMLMode1//1258O2353/1258O2353S6D11264/16796676653696335/1... 21/24

Teachingninja.in

<div><div>Q.7 Which of the following is an example of a physical feature formed by extensive gully erosion?</div><div>Ans <div><div><div>✖</div><div>1. Backwaters of Kerala</div></div><div><div>✖</div><div>2. Malda gap</div></div><div><div>✖</div><div>3. Rann of Kutchh</div></div><div><div>✔</div><div>4. Chambal basin</div></div></div></div></div>	<div><div>Question ID : 630680193707</div><div>Status : Not Attempted and Marked For Review</div><div>Chosen Option : --</div></div>
<div><div>Q.8 _____ has been appointed as the Attorney General (AG) of India by President Droupadi Murmu, in October 2022.</div><div>Ans <div><div><div>✖</div><div>1. KK Venugopal</div></div><div><div>✖</div><div>2. Mukul Rohatgi</div></div><div><div>✖</div><div>3. Goolam Essaji Vahanvati</div></div><div><div>✔</div><div>4. R Venkataramani</div></div></div></div></div>	<div><div>Question ID : 630680193712</div><div>Status : Answered</div><div>Chosen Option : 4</div></div>
<div><div>Q.9 _____ has the lowest record of population density having just 17 per square kilometre, as per census 2011.</div><div>Ans <div><div><div>✖</div><div>1. Mizoram</div></div><div><div>✔</div><div>2. Arunachal Pradesh</div></div><div><div>✖</div><div>3. Sikkim</div></div><div><div>✖</div><div>4. Goa</div></div></div></div></div>	<div><div>Question ID : 630680193697</div><div>Status : Answered</div><div>Chosen Option : 2</div></div>
<div><div>Q.10 Which of the following districts has population growth rate less than 10 per cent, as per census 2011?</div><div>Ans <div><div><div>✖</div><div>1. Jaipur</div></div><div><div>✔</div><div>2. Hugli</div></div><div><div>✖</div><div>3. Surat</div></div><div><div>✖</div><div>4. Nashik</div></div></div></div></div>	<div><div>Question ID : 630680193698</div><div>Status : Answered</div><div>Chosen Option : 3</div></div>
<div><div>Q.11 Which Emperor adopted the Zabat System of measurement of land?</div><div>Ans <div><div><div>✔</div><div>1. Sher Shah</div></div><div><div>✖</div><div>2. Jahangir</div></div><div><div>✖</div><div>3. Bairam Khan</div></div><div><div>✖</div><div>4. Akbar</div></div></div></div></div>	<div><div>Question ID : 630680193701</div><div>Status : Answered</div><div>Chosen Option : 4</div></div>



Q.12 Which of the following banks are public sector banks?  
(a) Canara bank  
(b) Bank of Baroda  
(c) Central bank of India  
(d) IndusInd bank  
(e) RBL bank

Ans 

✗ 1. (b), (c) and (d)

✓ 2. (a), (b) and (c)

✗ 3. (c), (d) and (e)

✗ 4. (a), (c) and (e)

Question ID : 630680193694

Status : Not Answered

Chosen Option : --

Q.13 The statement of estimated receipts and expenditure of the Government of India is presented to the Parliament every year as per \_\_\_\_\_ of the Indian Constitution.

Ans 

✓ 1. Article 112

✗ 2. Article 123

✗ 3. Article 121

✗ 4. Article 110

Question ID : 630680193709

Status : Answered

Chosen Option : 4

Q.14 Which Schedule to the Constitution of India specifies allocation of powers and functions between Union and States?

Ans 

✗ 1. 3<sup>rd</sup>

✗ 2. 10<sup>th</sup>

✓ 3. 7<sup>th</sup>

✗ 4. 5<sup>th</sup>

Question ID : 630680193711

Status : Answered

Chosen Option : 3

Q.15 Which of the following has been recognised by the Supreme Court of India as a fundamental right which is explicitly not given as a fundamental right in the Constitution of India?

Ans 

✗ 1. Right to Constitutional Remedies

✓ 2. Right to Privacy

✗ 3. Right to Freedom of Religion, Cultural and Educational Rights

✗ 4. Right against Exploitation

Question ID : 630680193708

Status : Answered

Chosen Option : 1

Q.16 As per the Economic Survey of India 2021-22 report (as per advance estimates), the service sector has contributed nearly \_\_\_\_\_ of India's 2021-22 GDP.

Ans 

✗ 1. 15%

✗ 2. 37%

✓ 3. 53%

✗ 4. 75%


Question ID : 630680193706

Status : Answered

Chosen Option : 4

https://cdn.digialm.com//per/g01/pub/1258/touchstone/AssessmentQPHTMLMode1//1258O2353/1258O2353S6D11264/16796676653696335/1...

23/24

 TeachingNinja.in

Q.17 Who founded Arya Women's Society/Arya Mahila Samaj at Pune in 1882?

- Ans
- ☒ 1. Tarabai Shinde
  - ☒ 2. Pandita Ramabai Saraswati
  - ☒ 3. Savitribai Phule
  - ☒ 4. Fatima Sheikh

Question ID : 630680193704  
Status : Answered  
Chosen Option : 3

Q.18 Regional Rural Banks (RRBs) in India were established by the Government of India, under the provisions of RRBs Act, \_\_\_\_\_.

- Ans
- ☒ 1. 1976
  - ☒ 2. 1980
  - ☒ 3. 1974
  - ☒ 4. 1978

Question ID : 630680193695  
Status : Answered  
Chosen Option : 1

Q.19 Which of the following is a Constitutional body of the Government of India?

- Ans
- ☒ 1. Union Public Service Commission
  - ☒ 2. NITI Aayog
  - ☒ 3. National Human Rights Commission
  - ☒ 4. Lokpal and Lokayuktas

Question ID : 630680193710  
Status : Answered  
Chosen Option : 1

Q.20 Which of the following states has literacy rate less than 80%, as per census 2011?

- Ans
- ☒ 1. Arunachal Pradesh
  - ☒ 2. Goa
  - ☒ 3. Tripura
  - ☒ 4. Himachal Pradesh

Question ID : 630680193699  
Status : Answered  
Chosen Option : 4