



Teachingninja.in



Latest Govt Job updates



Private Job updates



Free Mock tests available

Visit - teachingninja.in



Teachingninja.in

LIC Assistant

**Memory Based Paper
Mains
22 Dec, 2019**



200 Questions

Que. 1 Recently, Mastercard, along with cricketer _____, launched a nationwide initiative 'Team Cashless India' to accelerate the acceptance and adoption of digital payments.

1. Virat Kohli
2. Rohit Sharma
3. Mahendra Singh Dhoni
4. Yuvraj Singh
5. Hardik Pandya

Correct Option - 3

Que. 2 In October 2019, who has been appointed as the new president of the Board of Control for Cricket in India (BCCI)?

1. Virender Sehwag
2. Sourav Ganguly
3. Gautam Gambhir
4. Rahul Dravid
5. Sachin Tendulkar

Correct Option - 2

Que. 3 The RBI has recently proposed a minimum equity capital of _____ to set up a small finance bank under the 'on tap' licence regime to expand the banking services.

1. Rs. 200 crore
2. Rs. 100 crore
3. Rs. 150 crore
4. Rs. 250 crore
5. Rs. 300 crore

Correct Option - 1

Que. 4 India's first visually-impaired IAS officer Pranjali Patil has taken charge as Sub-collector of _____.

1. Cochin
2. Thiruvananthapuram
3. Chennai
4. Hyderabad
5. Mysore

Correct Option - 2

Que. 5 Which of the following is not true about Aadhaar-enabled payment system (AEPS)?

1. AEPS enables bank customers to access their Aadhaar-linked bank accounts through the Aadhaar authentication.
2. For a transaction through AEPS, only Aadhaar number and fingerprint captured during the enrolment are required.
3. AEPS allows inter-operability among different systems adopted by different banks in a safe and secured manner.
4. AEPS is aimed at empowering the marginalised and excluded segments to conduct financial transactions through micro ATMs deployed by banks in villages.
5. Customers can find out their account balance, deposit cash, withdraw money and transfer funds to other Aadhaar-linked bank accounts through the help of business correspondents of the bank they have account in.

Correct Option - 5

Que. 6 The insurance in which risks are shared between multiple insurers is known as:

1. Dual Insurance
2. Co-Insurance
3. Self-Insurance
4. Reinsurance
5. None of these

Correct Option - 4

Que. 7 When was baseball and softball removed from Olympic games?

1. 2012
2. 2008
3. 2004
4. 2016
5. 2000

Correct Option - 1

Que. 8 What is full form of CIRP?

1. Corporate Insolvency Resolvance Process
2. Centralization Insolvency Resolution Process
3. Capitalisation Insolvency Resolution Process
4. Corporate Insolvency Resolution Process
5. None of the above

Correct Option - 4

Que. 9 With which country will India conduct Joint Military Exercise DHARMA GUARDIAN-2019?

1. Japan
2. France
3. China
4. Russia
5. USA

Correct Option - 1

Que. 10 Which state emerged as the topper among major states in the first-ever India Innovation Index launched by NITI Aayog in October 2019?

1. Tamil Nadu
2. Karnataka
3. Maharashtra
4. Telangana
5. Haryana

Correct Option - 2

Que. 11 Which of the following cities has been declared as the wealthiest city in India according to 'The Wealthiest Cities Worldwide in 2019 list' by New World Health?

1. Mumbai
2. New Delhi
3. Ahmedabad
4. Bengaluru
5. None of the above

Correct Option - 1

Que. 12 Which country won the 3rd Edition of the SAFF U-15 Women's Championships 2019?

1. Bhutan
2. China
3. India
4. Bangladesh
5. Pakistan

Correct Option - 3

Que. 13 From December, 16, 2019, National Electronic Funds Transfer (NEFT) transaction facility has been made available 24 hours, every day for all the customers. NEFT can be done in auto mode through STP model? What does P stand for? (Dec 2019)

1. Processing
2. Plant
3. Payments

4. Pay
5. None of the above

Correct Option - 1

Que. 14 How much amount has been allocated by the government of India to an alternative investment fund to revive the realty sector?

1. 20,000 crore
2. 15,000 crore
3. 25,000 crore
4. 10,000 crore
5. 5,000 crore

Correct Option - 3

Que. 15 A floating nuclear power plant that is also known as 'Chernobyl on ice' is ready to begin supplying the electricity in _____.

1. Russia
2. France
3. USA
4. Japan
5. UK

Correct Option - 1

Que. 16 India's first International Financial Services Centre (IFSC) became operational at:

1. Varanasi
2. Chennai
3. Mumbai
4. Delhi
5. Gandhinagar

Correct Option - 5

Que. 17 What is the Minimum Basic Sum Assured in LIC's Micro Bachat Plan?

1. Rs. 40,000
2. Rs. 10,000
3. Rs. 50,000
4. Rs. 5000
5. None of the above

Correct Option - 3

Que. 18 What is the name of the policy announced by HDFC ERGO General Insurance Company, India's third-largest non-life insurance provider in the private sector?

1. Trip for all
2. Trip Protector
3. Trip India
4. Trip citizen
5. Trip everyone

Correct Option - 2

Que. 19 Who chaired the International Jury of 50th International Film Festival of India?

1. Zhang Yang
2. Lucretia Martel
3. John Bailey
4. Robin Campillo
5. None of the above

Correct Option - 3

Que. 20 The Chief Minister of which state announced the 'Mo Sarkar' initiative that will commence from October 2 on the occasion of Gandhi Jayanti?

1. Karnataka
2. Odisha
3. Bihar
4. Uttar Pradesh
5. Haryana

Correct Option - 2

Que. 21 Accidental insurance cover in Pradhan Mantri Jan Dhan Yojna has been increased from 1 lakh to _____ (PMJDY).

1. Rs.1 Lakh
2. Rs.50,000
3. Rs.30,000
4. Rs.2 Lakh
5. None of these

Correct Option - 4

Que. 22 Who among the following became the first all-female to carry out a spacewalk in October 2019?

- 1.Christina Koch
- 2.Jessica Meir



3. Anne McClain

1. Only 1
2. Only 1 and 2
3. Only 1 and 3
4. Only 2 and 3
5. All are correct

Correct Option - 2

Que. 23 What is the minimum age for joining National pension Scheme?

1. 18 years
2. 21 years
3. 25 years
4. 30 years
5. 22

Correct Option - 1

Que. 24 Who has been appointed as the first chairman of the steering committee of the Code for Responsible Lending (CRL) in micro-credit?

1. BP Kanungo
2. HR Khan
3. Mahesh Kumar Jain
4. Viral Acharya
5. None of these

Correct Option - 2

Que. 25 As per the 2019 Global Hunger Index, India ranks _____ out of 117 qualifying countries.

1. 98
2. 100
3. 102
4. 104
5. 106

Correct Option - 3

Que. 26 Who has been appointed as an International Judge of the Singapore International Commercial Court in July 2019?

1. Justice A K Sikri
2. Justice Ashok Bhushan
3. Justice Jasti Chelameswar

4. Justice Arun Kumar Mishra
5. Justice Sharad Arvind Bobde

Correct Option - 1

Que. 27 World Students' Day is celebrated in the remembrance?

1. Jawaharlal Nehru
2. B. R. Ambedkar
3. APJ Abdul Kalam's
4. Lal Bahadur Shastri
5. None of the above

Correct Option - 3

Que. 28 _____ has created Individual Guinness World Records for "The most full contact knee strikes in three minutes (one leg) (female), 263 strikes".

1. Mitali Madhumita
2. Divya Ajith Kumar
3. Priya Jhingan
4. Kiran Uniyal
5. Padmavathy Bandopadhyay

Correct Option - 4

Que. 29 When is International Coffee Day celebrated?

1. 1st October
2. 1st September
3. 1st November
4. 1st August
5. None of the above

Correct Option - 1

Que. 30 Which of the following states has launched Rythu Bharosa Scheme?

1. Andhra Pradesh
2. Telangana
3. Maharashtra
4. Gujarat
5. None of the above

Correct Option - 1

Que. 31 For how many years does a Payment Bank have to work before applying for conversion into Small Finance Bank?

1. 5 years
2. 3 years
3. 7 years
4. 2 years
5. None of the above

Correct Option - 1

Que. 32 Edelweiss Asset Management Company (AMC) has launched India's 1st Corporate Bond ETF called the Bharat Bond ETF. How many variants will it have?

1. 3
2. 2
3. 5
4. 4
5. 6

Correct Option - 2

Que. 33 On the occasion of World Food Day, Union Minister for Health and Family Welfare Dr Harsh Vardhan has launched _____.

1. Food Safety Mitra
2. Food Safety Sahayak
3. Food Safety Dost
4. Food Safety Madadgar
5. None of the above

Correct Option - 1

Que. 34 Who among the following is the winner of Noble Prize in Economics in 2019?

1. Michel Mayor
2. James Peebles
3. Didier Queloz
4. Michael Kremer
5. Akira Yoshino

Correct Option - 4

Que. 35 Vikram Sarabhai Library won UNESCO Asia-Pacific Awards for Cultural Heritage Conservation is present in which IIM of India?

1. Indian Institute of Management Ahmedabad

2. Indian Institute of Management Bangalore
3. Indian Institute of Management Lucknow
4. Indian Institute of Management Calcutta
5. Indian Institute of Management Tiruchirappalli.

Correct Option - 1

Que. 36 Which state is the biggest beneficiary of Sewa Service Train?

1. Tamil Nadu
2. Kerala
3. Andhra Pradesh
4. Himachal Pradesh
5. None of the above

Correct Option - 1

Que. 37 Which state's cultural department is going to organise the country's first training and performance programme of world-famous KHON Ramlila?

1. Madhya Pradesh
2. Bihar
3. Maharashtra
4. Uttar Pradesh
5. Haryana

Correct Option - 4

Que. 38 Which of the following has launched a nationwide initiative 'Team Cashless India' to accelerate the acceptance and adoption of digital payments.

1. Mastercard
2. Rupay
3. American Express
4. Visa
5. None of the above

Correct Option - 1

Que. 39 Where will the WorldSkills International Competition 2019 be held?

1. Russia
2. USA
3. India
4. UK
5. Singapore

Correct Option - 1

Que. 40

A written form attached to an insurance policy that alters the policy’s coverage, terms, or conditions; sometimes called a _____.

1. Rider

2. Stipulation

3. Proviso

4. Standard Policy Form

5. None of these

Correct Option - 1

Que. 41

In the following question, two columns are given, containing three phrases each. A phrase from the first column may or may not connect with a phrase from the second column to make a grammatically and contextually correct sentence. There are five options, four of which display the sequence(s) in which the phrases can be joined to form a correct sentence. If none of the phrases make a correct sentence, mark ‘None of these’ as your answer.

Column (1)	Column (2)
A. Bitcoin, first released as open-source software in 2009,	D. is generally considered the first decentralized cryptocurrency.
B. The decentralized control of each cryptocurrency works through distributed ledger technology,	E. centralized digital currency and central banking systems.
C. Cryptocurrencies use decentralized control as opposed to	F. typically a blockchain, that serves as a public financial transaction database.

1. A-E and B-D

2. B-E and C-F

3. A-F

4. C-D

5. None of these

Correct Option - 5

Que. 42

In the following question, two columns are given, containing three phrases each. A phrase from the first column may or may not connect with a phrase from the second column to make a grammatically and contextually correct sentence. There are five options, four of which display the sequence(s) in which the phrases can be joined to form a correct sentence. If none of the phrases make a correct sentence, mark ‘None of these’ as your answer.

Column (1)	Column (2)
A. A black hole is a region of spacetime exhibiting gravitational acceleration so strong that nothing—	D. very massive stars collapse at the end of their life cycle.
B. The first modern solution of general relativity that would characterize a black hole	E. was found by Karl Schwarzschild in 1916.
C. Black holes of stellar mass are expected to form when	F. no particles or even electromagnetic radiation such as light—can escape from it.

- 1. A-D and B-F
- 2. C-E
- 3. C-F and B-D
- 4. A-E
- 5. None of these

Correct Option - 5

Que. 43 In the following question, two columns are given, containing three phrases each. A phrase from the first column may or may not connect with a phrase from the second column to make a grammatically and contextually correct sentence. There are five options, four of which display the sequence(s) in which the phrases can be joined to form a correct sentence. If none of the phrases make a correct sentence, mark ‘None of these’ as your answer.

Column (1)	Column (2)
A. Anorexia is a dangerous psychological disorder;	D. some 15 to 20 percent of its victims literally starve themselves to death.
B. Although people with anorexia may be incredibly thin, their body images are so distorted that	E. they see their reflections in mirrors as disgustingly fat.
C. The exact reasons for the occurrence of eating disorders are not clear,	F. although several factors play a role.

- 1. B-F
- 2. A-E
- 3. A-D and C-F
- 4. C-E and B-D
- 5. None of these

Correct Option - 3

Que. 44 In the following question, two columns are given, containing three phrases each. A phrase from the first column may or may not connect with a phrase from the second column to make a grammatically and contextually correct sentence. There are five options, four of which display the sequence(s) in which the phrases can be joined to form a correct sentence. If none of the phrases makes a correct sentence, mark ‘None of these’ as your answer.

Column (1)	Column (2)
A. The prefrontal cortex is the part of the brain that allows people to think,	D. inhibit the desire for action that stems from such emotions.
B. During adolescence, the prefrontal cortex becomes increasingly efficient in	E. evaluate and make complex judgements in a uniquely human way.
C. Rather than simply reacting to emotions like anger or rage, an individual with a fully developed prefrontal cortex is able to	F. communicating with other parts of the brain.

- 1. B-F and C-D
- 2. A-F
- 3. A-E and C-F

4. C-E
5. All of these

Correct Option - 1

Que. 45 In each question, one sentence is given in which certain words are in bold and numbered from A to E. Below the sentence are given five options with possible pairs of interchange of those bold words. Choose the pair(s) of words which are needed to be interchanged to make the sentence grammatically correct and meaningful.

The (A) **rise** in Earth's temperature can cause (B) **alterations** in the ecology, including an (C) **pattern** sea level and a (D) **change** in the quantity and (E) **increasing** of rainfall.

1. A-E
2. B-D, C-E
3. B-C, D-E
4. C-E
5. D-E

Correct Option - 4

Que. 46 In the sentence, certain words are in bold and numbered from A to E, which are the possible pairs to be interchanged. Choose the pair(s) of words which need to be interchanged to make the sentence grammatically correct and meaningful.

The last known (A) **resting** place of Homo erectus, one of the most (B) **traced** human ancestors and the first to walk fully (C) **upright**, has been (D) **successful** to a (E) **floodplain** near the longest river on the Indonesian island of Java.

1. C-E and A-E
2. B-D
3. B-C
4. A-E and C-D
5. A-C

Correct Option - 2

Que. 47 In the sentence, certain words are in bold and numbered from A to E, which are the possible pairs to be interchanged. Choose the pair(s) of words which need to be interchanged to make the sentence grammatically correct and meaningful.

For (A) **over** fifty years, *The Chronicles of Narnia* have (B) **canon** the fantasy (C) **genre** to become part of the (D) **transcended** of (E) **classic** literature.

1. B-D
2. A-E

3. C-D and A-B
4. A-D
5. B-C and C-E

Correct Option - 1

Que. 48 In each question, one sentence is given in which certain words are in bold and numbered from A to E. Below the sentence are given five options with possible pairs of interchange of those bold words. Choose the pair(s) of words which are needed to be interchanged to make the sentence grammatically correct and meaningful.

Studies indicate that (A) **averse** to popular apprehensions about (B) **displacement** from jobs owing to globalisation, even the (C) **skilled** workforce is not (D) **contrary** to moving to get a (E) **good** job.

1. B-C, D-E
2. A-D
3. C-D, A-D
4. A-C
5. D-E

Correct Option - 2

Que. 49 In each question, one sentence is given in which certain words are in bold and numbered from A to E. Below the sentence are given five options with possible pairs of interchange of those bold words. Choose the pair(s) of words which are needed to be interchanged to make the sentence grammatically correct and meaningful.

NITI Ayog, the (A) **farmers** policy think tank, recently pointed out that the solution to the problem of (B) **waiving** distress will be (C) **unresolved** unless some proper measure is taken as (D) **agrarian** loans help a small number of (E) **government's**.

1. A-E and B-D
2. A-C and B-D
3. B-C
4. B-D
5. No correction required

Correct Option - 1

Que. 50 Below a word is given followed by three sentences which consist of that word. Identify the sentence/s which best expresses the meaning of the word. Choose Option 5 (None of these) if the word is not suitable in any of the sentences.

BALL

- A. Sanchita balled her eyes out when she found out she wasn't going to be part of the team.
- B. She balled up the love letter and threw it at his face.
- C. Sagarika had a ball at the office party, where she sang and she danced.

1. Only C
2. Only B
3. Both B and C
4. Only A
5. None of these

Correct Option - 3

Que. 51 Below a word is given followed by three sentences which consist of that word. Identify the sentence/s which best expresses the meaning of the word. Choose option 5 (None of these) if the word is not suitable in any of the sentences.

NOVEL

- A. Dad stayed on the farm most of the time, and Mom was the **novel** housewife.
- B. Many of his bold and **novel** theories have provoked strenuous opposition, while others have met with general acceptance, except among scholars of the more conservative type.
- C. There is more **novel** than dialogue in this play.

1. Only A
2. Only B
3. Only C
4. Both A and B
5. None of these

Correct Option - 2

Que. 52 Below a word is given followed by three sentences which consist of that word. Identify the sentence/s which best expresses the meaning of the word. Choose option 5 (None of these) if the word is not suitable in any of the sentences.

LEAP

- A. My view is heightened with a gentle **leap** by car across the calming, almost whimsical, landscape.
- B. She shook like a **leap** in a thunderstorm, her warm brown eyes wide and tears streaming down her cheeks.
- C. A **leap** of leopards strayed into a mango orchard, creating panic among the caretakers present at the farm.

1. Only B
2. Only C
3. Both A and C
4. Both A and B
5. None of these

Correct Option - 2

Que. 53 Below a word is given followed by three sentences which consist of that word. Identify the sentence/s which best expresses the meaning of the word. Choose option 5 (None of these) if the word is not suitable in any of the sentences.

RAISE

- A. He stooped to **raise** his hands in the pond and smiled up at her.

B. It takes a village to **raise** a child.

C. In the latter years of his **raise** King Harsha's sway over the whole basin of the Ganges from the Himalayas to the Nerbudda was undisputed.

1. Only C
2. Only B
3. Only A
4. Both A and C
5. None of these

Correct Option - 2

Que. 54 Directions: In the given sentence a word has been emboldened. Find out the most appropriate word from the given options that can be replaced with the emboldened word. If none are correct select option 5 as your answer.

Families hit by the Sardar Sarovar dam project after the swelled up Narmada backwaters **dehydrated** 178 villages in August, took part in a public hearing on Sunday as the protests demanding rehabilitation entered the second day.

1. increased
2. submerged
3. moisturized
4. thrived
5. No Improvement

Correct Option - 2

Que. 55 In the given sentence a word has been emboldened. Find out the most appropriate word from the given options that can be replaced with the emboldened word. If none are correct select option 5 as your answer

Animal activists and volunteers said the city had fewer incidents of animals getting **injured** and separated from their owners this Deepavali.

1. stimulated
2. facilitated
3. wounded
4. excited
5. None of these

Correct Option - 3

Que. 56 Directions: In the given sentence, a word has been emboldened. Select a suitable word for the word in bold from the given options. If none follows select option 5 as your answer.

Akriti's **naivety** was something that made her an easy target for charming con men.

1. Sophistication
2. Cynicism

3. Artfulness
4. Childishness
5. None of these

Correct Option - 4

Que. 57 In the given sentence a word has been emboldened. Find out the most appropriate word from the given options that can be replaced with the emboldened word. If none are correct select option 5 as your answer.

The manager was **wearing out** the proposals given by the other company.

1. Watching out
2. Holding on
3. Thinking over
4. Talking over
5. No improvement

Correct Option - 3

Que. 58 Which of the phrases (a), (b), (c) and (d) given below should replace the phrase given in bold the following sentences to make the sentence grammatically meaningful and correct. If the sentence is correct as it is and there is no correction required mark (e) as the answer.

You should ask just about any question that **casts your mind back** to ensure that you are buying a good computer.

1. Change your mind
2. Collect your wits
3. Comes to mind
4. Call to mind
5. None of the above

Correct Option - 3

Que. 59 The following question contains two sentences with one blank each. Choose the option that best fits both the blanks.

1. One of the most dangerous diseases in the middle ages was _____, which wiped out nearly half of Europe's population.
2. Inside trading is among the major concerns that _____ the company at the moment.

1. Ponder
2. Plague
3. Meander
4. Hurdle
5. Withstand

Correct Option - 2

Que. 60 The following question contains two sentences with one blank each. Choose the option that best fits both the blanks.

The fact is that the scientists _____ across the vaccine by accident.

His horse _____ on a rock in the darkness and they fell heavily down the slope.

1. Caressed
2. Frolicked
3. Witnessed
4. Stumbled
5. Harnessed

Correct Option - 4

Que. 61 The following question contains two sentences with one blank each. Choose the option that best fits both the blanks.

Upon seeing her, his bravado _____, halting his horse mid-stride.

Then the music _____, then stopped for a beat and started up again.

1. Captured
2. Faltered
3. Enraptured
4. Entangled
5. Altered

Correct Option - 2

Que. 62 The following question contains two sentences with one blank each. Choose the option that best fits both the blanks.

The old Baron was not _____ to having his opinions questioned.

My eyes soon grew _____ to the darkness surrounding the room and I could make out the faint outline of the door.

1. Afforded
2. Awarded
3. Attached
4. Accustomed
5. Applied

Correct Option - 4

Que. 63 Directions: Find out the most effective word from the given options to fill the blanks of the following questions.

1. Patients began _____ from therapy when they had been depression-free for a month.
2. The highest _____ limit from the ATMs has been set to Rs. 50,000 per day by the central bank.



1. Discouraging
2. Diminishing
3. Withdrawing
4. Divulging
5. Withholding

Correct Option - 3

Que. 64 In the following passage, certain words have been given in a jumbled manner and numbered from A to H. Choose the option which should replace the word in bold to form a contextually and grammatically meaningful paragraph.

The Netherlands' supreme court has (A) **jeopardised** a ruling ordering the country's government to do much more to cut carbon emissions, after a six-year fight for climate (B) **reduce**. The court ruled that the government had explicit duties to protect its citizens' human rights in the face of climate change and must (C) **inspired** emissions by at least 25% compared with 1990 levels by the end of 2020. The non-profit Urgenda Foundation, which brought the case, welcomed the "groundbreaking" judgment. The (D) **justice** judgment in 2015 was seen as a landmark in the then nascent field of climate litigation, and (E) **obligated** similar cases across the world, from Pakistan to New Zealand. David Boyd, the UN special rapporteur on human rights and the environment, said it was "the most (F) **original** climate change court decision in the world so far, confirming that human rights are (G) **important** by the climate emergency and that wealthy nations are legally (H) **upheld** to achieve rapid and substantial emission reductions."

Which of the following would replace (A)?

1. B
2. C
3. E
4. H
5. A

Correct Option - 4

Que. 65 Which of the following would replace (B)?

1. A
2. B
3. D
4. G
5. F

Correct Option - 3

Que. 66 Which of the following would replace (C)?

1. H
2. F



- 3. B
- 4. D
- 5. G

Correct Option - 3

Que. 67 Which of the following would replace (D)?

- 1. B
- 2. C
- 3. H
- 4. F
- 5. A

Correct Option - 4

Que. 68 Which of the following would replace (E)?

- 1. C
- 2. D
- 3. F
- 4. G
- 5. B

Correct Option - 1

Que. 69 Which of the following would replace (G)?

- 1. H
- 2. F
- 3. E
- 4. A
- 5. D

Correct Option - 4

Que. 70 Which of the following would replace (H)?

- 1. A
- 2. B
- 3. E
- 4. C
- 5. D

Correct Option - 3

Que. 71 Read the following sections of a passage given below and answer the questions that follow:

Work-life balance is a concept that describes the prototype of splitting one's time and energy between work and other important aspects of one's life. Many people **grapple with** work-life balance, no matter what career they have. Achieving a work-life balance is a daily challenge. It can be tough to make time for family, friends, community participation, spirituality, personal growth, self-care, and other personal activities, in addition to the demands of the workplace.

Because many employees experience a personal, professional, and monetary need to achieve, work-life balance can be challenging.

*Employers can help employees achieve work-life balance by instituting **apt** policies, procedures, actions, and expectations that enable them to pursue more balanced lives, such as flexible work schedules, paid time off (PTO) policies, responsibly paced time and communication expectations, and company-sponsored family events and activities.*

Work-life balance reduces the stress that employees experience. When someone spends the majority of his days on work-related activities and feels as if he is neglecting other important components of their lives, it results into stress and unhappiness. *An employee who doesn't make time for self-care eventually _____ his output and productivity.*

The workplace that enables employees to achieve work-life balance is particularly motivating and gratifying to employees, which **turns** their lives **into** much happier places. And happy employees, whose needs for work-life balance are achieved, **tend to** stay with their employer and are more productive.

Which of the following statements is/are true according to the passage?

1. It is very easy to make a balance between work and personal life.
2. Work-life balance causes stress and unhappiness in one's life.
3. Employers should help employees to achieve work-life balance in order to get better output and productivity.
4. Both 1 & 2
5. None of the above

Correct Option - 3

Que. 72 Which of the following can be the best suited title for the given passage?

1. Work-life balance
2. Importance of work-life balance
3. Relations of employees and employers
4. Role of time management
5. None of the above

Correct Option - 2

Que. 73 Which of the following sentences is not true as per the passage?

1. It is very difficult to achieve work-life balance for most of the people.
2. Work-life balance reduces the stress that employees experience.
3. When someone spends the majority of his days on work-related activities, he feels excited about his work.
4. An employee who doesn't make time for self-care eventually damages his output and productivity.

5. None of the above.

Correct Option - 3

Que. 74 Which type of workplace is motivating and gratifying to employees?

1. The type that provides a handsome pay to its employees.
2. The type where employees are bound to work for long hours.
3. The type that enables employees to achieve work-life balance.
4. Both (1) & (3)
5. None of the above.

Correct Option - 3

Que. 75 Identify which part of this sentence from the passage is erroneous?

Employers can help employees achieve work-life balance by instituting apt policies, procedures, actions,(A)/ and expectations that enable them to pursue more balanced lives,(B)/ such as flexible work schedules, paid time of (PTO) policies, responsibly paced time(C)/ and communication expectations, and company-sponsored family events and activities(D)./ No error (E)

1. A
2. B
3. C
4. D
5. E

Correct Option - 3

Que. 76 Fill in the blank with the most suitable option.

An employee who doesn't make time for self-care eventually _____ his output and productivity.

1. increases
2. supports
3. damages
4. discusses
5. heightens

Correct Option - 3

Que. 77 Which of the following words is the closest in meaning to 'apt'?

1. abundant
2. agile
3. appropriate
4. averse
5. apart

Correct Option - 3

Que. 78 Which of the following words is the closest in meaning to '**tend to**'?

1. be opposed to
2. be prepared to
3. be inclined to
4. be forced to
5. be careful to

Correct Option - 3

Que. 79 Which of the following words is the closest in meaning to '**grapple with**'?

1. struggle with
2. collaborate with
3. toy with
4. trust with
5. build with

Correct Option - 1

Que. 80 Which of the following words is the closest in meaning to '**turn into**'?

1. fool into
2. convince into
3. transform into
4. crumble into
5. walk into

Correct Option - 3

Que. 81 What approximate value should come in place of the question mark (?) in the following question?

$$8.01 + (4.99)^2 - 26.99 = ?$$

1. 6
2. 5
3. 7
4. 8
5. 4

Correct Option - 1

Que. 82 What approximate value should come in place of the question mark (?) in the following question?

$$(16.99) \times (6.01)^2 - (4.99) \times (7.99) = ?$$

1. 561
2. 572
3. 471
4. 671
5. 461

Correct Option - 2

Que. 83 What approximate value should come in place of the question mark (?) in the following question?

$$(18.01) \div (2.99) + (6.01) - (3.01)^2 = (1.99) \times ?$$

1. 2.50
2. 3.50
3. 1.50
4. 4.50
5. 3

Correct Option - 3

Que. 84 What approximate value should come in place of the question mark (?) in the following question?

$$(24.99) \div (5.01) \times (12.01) - (7.01) \times (7.99) = ?$$

1. 6
2. 5
3. 8
4. 4
5. 2

Correct Option - 4

Que. 85 What approximate value should come in place of the question mark (?) in the following question?

$$(34.99) \times (4.99) \div (6.99) + (12.01) \times (8.99) = ?$$

1. 123
2. 125
3. 127
4. 131
5. 133

Correct Option - 5

Que. 86 What approximate value should come in place of the question mark (?) in the following question?

$$(1/2.01) \times (23.99) - (14.92/3.03) - (6.07) = ?$$

1. 0

- 2. 1
- 3. 2
- 4. 3
- 5. 4

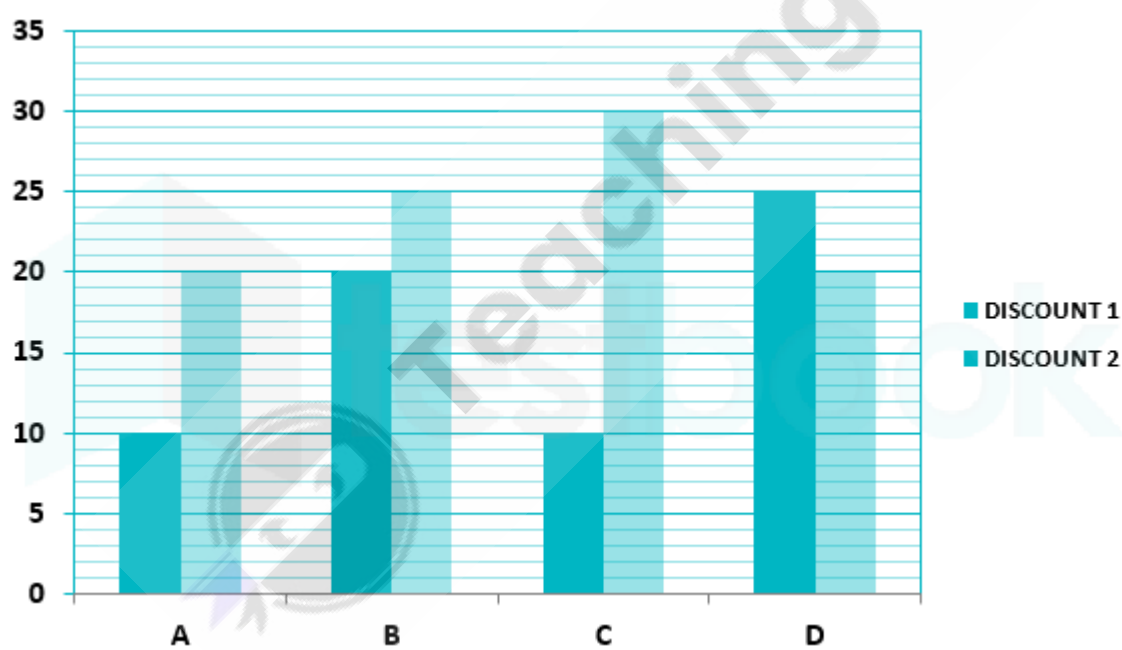
Correct Option - 2

Que. 87 What approximate value should come in place of the question mark (?) in the following question?
 $(8.99)^2 \times 17 - (14.04 \times 7.96) = ?$

- 1. 1165
- 2. 1365
- 3. 1265
- 4. 1175
- 5. 1275

Correct Option - 3

Que. 88 In the given bar graph, there are four products A, B, C, D. Each product gets two successive discounts. Observe the graph carefully and answer the following questions.



The Marked price of product A is Rs. 4500 and Discount 2 is not applicable, then the Selling Price of product A is

- 1. Rs. 3850
- 2. Rs. 3700
- 3. Rs. 3950
- 4. Rs. 4150
- 5. Rs. 4050

Correct Option - 5

Que. 89 The Cost Price of product C is Rs. 1600 and the Marked Price of product C is Rs. 3400. After successive Discount what will be the profit/loss percentage (approximately)?

1. 37.5% loss
2. 35.2% profit
3. 33.8% profit
4. 33.8.2% loss
5. No profit or loss

Correct Option - 3

Que. 90 If another discount of 20% is given to the product A. Then the total successive discount percentage of product A is

1. 32.2%
2. 47.4%
3. 42.4%
4. 51.6%
5. 54.2%

Correct Option - 3

Que. 91 If the Marked Price of product B and product D is same, then the ratio of Selling Price of product B to the Selling Price of product D is

1. 2 : 3
2. 1 : 2
3. 2 : 1
4. 1 : 1
5. 3 : 2

Correct Option - 4

Que. 92 If the Selling Price of product B is Rs. 2100 then the Marked Price of product B is

1. Rs. 3300
2. Rs. 2300
3. Rs. 3500
4. Rs. 2400
5. Rs. 3100

Correct Option - 3

Que. 93 In the given question, two equations numbered I and II are given. You have to solve both the equations and mark the appropriate answer-

I. $x^2 + 6x + 5 = 0$

II. $y^2 - 7y + 12 = 0$

1. $x > y$
2. $x < y$
3. $x \geq y$
4. $x \leq y$
5. $x = y$ or relationship between x and y cannot be established

Correct Option - 2

Que. 94 In the given question, two equations numbered I and II are given. You have to solve both the equations and mark the appropriate answer-

I. $x^2 = 64$

II. $(y + 8)^2 = 0$

1. $x > y$
2. $x < y$
3. $x \geq y$
4. $x \leq y$
5. $x = y$ or relationship between x and y cannot be established

Correct Option - 3

Que. 95 In the given question, two equations numbered I and II are given. You have to solve both the equations and mark the appropriate answer-

I. $2x^2 - 11x - 30 = 0$

II. $y^2 - 8y + 15 = 0$

1. $x > y$
2. $x < y$
3. $x \geq y$
4. $x \leq y$
5. $x = y$ or relationship between x and y cannot be established

Correct Option - 5

Que. 96 In the given question, two equations numbered I and II are given. You have to solve both the equations and mark the appropriate answer-

I. $x^2 - 14x + 45 = 0$

II. $y^2 - 24y + 135 = 0$

- 1. $x > y$
- 2. $x < y$
- 3. $x \geq y$
- 4. $x \leq y$
- 5. $x = y$ or relationship between x and y cannot be established

Correct Option - 4

Que. 97 In the given question, two equations numbered I and II are given. You have to solve both the equations and mark the appropriate answer-

I. $2x^2 - 7x + 3 = 0$
II. $2y^2 - 9y + 4 = 0$

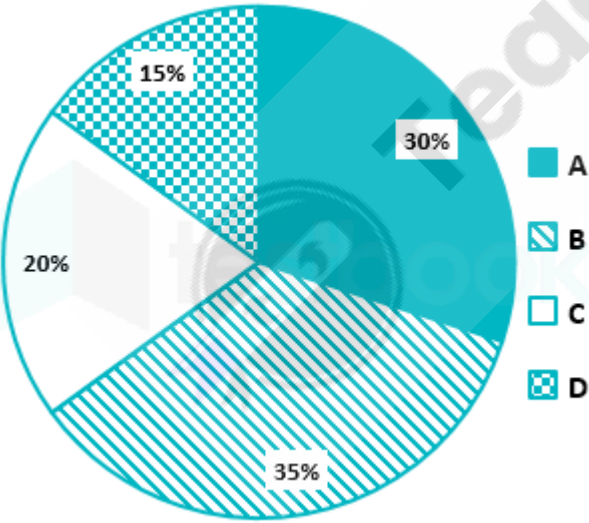
- 1. $x > y$
- 2. $x < y$
- 3. $x \geq y$
- 4. $x \leq y$
- 5. $x = y$ or relationship between x and y cannot be established

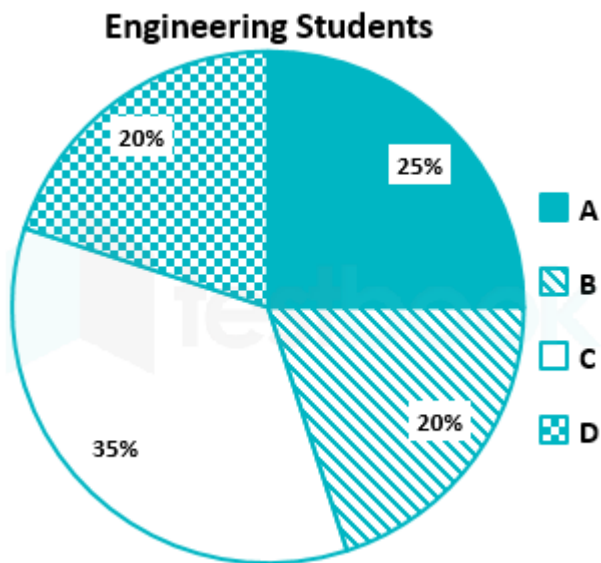
Correct Option - 5

Que. 98 **Directions:** Refer to the pie chart and answer (in approximately) the given questions.

A survey was done on 4000 medical and engineering students and 1800 engineering students in a college in different sectors A, B, C, and D.

Medical and Engineering Students





How much percentage of medical students of sector C and A is to the engineering students of sector B and D is

1. 127.8%
2. 64.5%
3. 74.5%
4. 68.5%
5. 71%

Correct Option - 1

Que. 99 The total number of medical students of sector D and engineering students of sector A and B is

1. 1100
2. 1200
3. 1090
4. 1050
5. 1040

Correct Option - 4

Que. 100 The difference between, medical and engineering students in sector A and engineering students of sector A and C is

1. 120
2. 150
3. 140
4. 145
5. 155

Correct Option - 1

Que. 101 The Ratio of medical students B : D is

1. 52 : 17
2. 27 : 91
3. 13 : 3
4. 101 : 57
5. 57 : 24

Correct Option - 3

Que. 102 The Average number of medical students in sectors A, B and C is

1. 684
2. 580
3. 653
4. 587
5. 697

Correct Option - 3

Que. 103 A and B started a business in which A invested Rs. 12000 less than B. B left the business after 8 months. If B receives Rs. 4800 out of the total profit Rs. 7680 after one year. Find the initial investment of B?

1. Rs. 30000
2. Rs. 36000
3. Rs. 24000
4. Rs. 20000
5. Rs. 28000

Correct Option - 4

Que. 104 A man invested some money in the bank at the rate of 20% compounded annually and after 2 years received interest as Rs. 6600. If the man invested double of the principal in another scheme at the rate of 10% compounded annually for 2 years then find the compound interest earned by him in the second scheme.

1. Rs. 6300
2. Rs. 6600
3. Rs. 6200
4. Rs. 6400
5. Rs. 6700

Correct Option - 1

Que. 105 The diameter of the circle is equal to the perimeter of the square. If the perimeter of the square is approximately 209.98 m. Find the area of the circle.

1. 34000.45 m²
2. 34643.40 m²



3. 30000 m²
4. 25457.34 m²
5. 29357.45 m²

Correct Option - 2

Que. 106 A is 5 years older than B and 10 years younger than C. If the sum of ages of A, B and C together after 5 years is 80 years. Find the present age of B.

1. 15 years
2. 20 years
3. 30 years
4. 25 years
5. 35 years

Correct Option - 1

Que. 107 Two pipes A and B fills half of the tank in 9 hours. An outlet pipe C will empty 50% of the tank in 18 hours. If all the pipes are opened simultaneously, in how much time 75% of the tank will be filled completely?

1. 36 hours
2. 18 hours
3. 27 hours
4. 30 hours
5. 12 hours

Correct Option - 3

Que. 108 In a mixture, the quantity of milk and water is in the ratio of 5 : 1. 60% of the mixture is taken out and the same amount of pure milk is added to it. If the milk in resultant mixture is 84 liters, Find the amount of mixture taken out.

1. 54 liters
2. 45 liters
3. 36 liters
4. 63 liters
5. 60 liters

Correct Option - 1

Que. 109 A train crosses 300 m long platform in 40 seconds, and train crosses a pole in 20 seconds then In how much time will it cross its extra 75% of the length of the platform.

1. 25 seconds
2. 30 seconds
3. 35 seconds

4. 32 seconds
5. 27 seconds

Correct Option - 3

Que. 110 30 men are engaged to a work by a contractor for 6 days. They work for 4 days but due to some reasons only 50% of the work is completed. How many more men should be engaged to work to complete the work in a given period of time.

1. 12 men
2. 20 men
3. 30 men
4. 18 men
5. 9 men

Correct Option - 3

Que. 111 Each question below is followed by two statements I and II. You have to determine whether the data given in the statements are sufficient for answering the question. You should use the data and your knowledge of Mathematics to choose the best possible answer.

By selling a new car with 2% profit, how much profit was earned?

I. The cost price of a car is Rs 420000.

II. The selling price is 102% of the cost price of a new car.

1. If the data in **statement I alone is sufficient** to answer the question, while the data in statement II alone are not sufficient to answer the question.
2. If the data in **statement II alone is sufficient** to answer the question, while the data in statement I alone are not sufficient to answer the question.
3. If the data either in **statement I alone or in statement II alone is sufficient** to answer the question.
4. If the data even in both the **statements I and II together are not sufficient** to answer the question.
5. If the data in both **statements I and II together are needed** to answer the question.

Correct Option - 1

Que. 112 Each question below is followed by two statements I and II. You have to determine whether the data given in the statements are sufficient for answering the question. You should use the data and your knowledge of Mathematics to choose the best possible answer.

A cylinder of given radius 14 cm and volume $17,248 \text{ cm}^3$. What is the height of cylinder?

I. Volume of cylinder is $\pi r^2 h$.

II. Height is 2 times of radius of a cylinder.

1. If the data in **statement I alone is sufficient** to answer the question, while the data in statement II alone are not sufficient to answer the question.
2. If the data in **statement II alone is sufficient** to answer the question, while the data in statement I alone are not sufficient to answer the question.
3. If the data either in **statement I alone or in statement II alone is sufficient** to answer the question.
4. If the data even in both the **statements I and II together are not sufficient** to answer the question.

5. If the data in both **statements I and II together are needed** to answer the question.

Correct Option - 3

Que. 113 Each question below is followed by two statements I and II. You have to determine whether the data given in the statements are sufficient for answering the question. You should use the data and your knowledge of Mathematics to choose the best possible answer.

10 years ago, Amit was 6 times as old as Rahul. At present, what is the age of Amit?

- I. After 3 years, the average age of Amit and Rahul will be 20 years.
II. 6 years ago, Amit will be 2 times as old as Rahul.

1. If the data in **statement I alone is sufficient** to answer the question, while the data in statement II alone are not sufficient to answer the question
2. If the data in **statement II alone is sufficient** to answer the question, while the data in statement I alone are not sufficient to answer the question
3. If the data either in **statement I alone or in statement II alone is sufficient** to answer the question.
4. If the data even in both the **statements I and II together are not sufficient** to answer the question
5. If the data in both **statements I and II together are needed** to answer the question

Correct Option - 3

Que. 114 Each question below is followed by two statements I and II. You have to determine whether the data given in the statements are sufficient for answering the question. You should use the data and your knowledge of Mathematics to choose the best possible answer.

Find the investment of a shopkeeper on 1000 books in Rs.

- I. 250 books were lost, he sold the remaining books Rs. 5 per book.
II. He gained 10% on the investment.

1. If the data in **statement I alone is sufficient** to answer the question, while the data in statement II alone are not sufficient to answer the question
2. If the data in **statement II alone is sufficient** to answer the question, while the data in statement I alone are not sufficient to answer the question
3. If the data either in **statement I alone or in statement II alone is sufficient** to answer the question.
4. If the data even in both the **statements I and II together are not sufficient** to answer the question.
5. If the data in both **statements I and II together are needed** to answer the question.

Correct Option - 5

Que. 115 Each question below is followed by two statements I and II. You have to determine whether the data given in the statements are sufficient for answering the question. You should use the data and your knowledge of Mathematics to choose the best possible answer.

Yuvraj decided to lend Amar a sum of Rs. 18000 on simple interest for some years at the rate of 10% per annum then find the number of years Yuvraj lends the sum of money to Amar

- I. The total amount received by Yuvraj is 23400.
II. The total simple interest earned is $\frac{10}{3}$ of the amount given by Yuvraj to Amar.

1. If the data in **statement I alone is sufficient** to answer the question, while the data in statement II alone are not sufficient to answer the question.



- 2. If the data in **statement II alone is sufficient** to answer the question, while the data in statement I alone are not sufficient to answer the question.
- 3. If the data either in **statement I alone or in statement II alone is sufficient** to answer the question.
- 4. If the data even in both the **statements I and II together are not sufficient** to answer the question.
- 5. If the data in both **statements I and II together are needed** to answer the question.

Correct Option - 3

Que. 116 **Directions:**

There are 4 cities A, B, C, D. The cars in these cities are running on three different types of sources viz Petrol, Diesel and CNG. The percentage of cars running on petrol and diesel is given. The total number of cars is 2940. Read the table carefully and answer the following questions.

Cities	Petrol + CNG + Diesel	Percentage of Petrol cars	Percentage of Diesel cars
A	800	30%	20%
B	620	50%	30%
C	700	70%	20%
D	820	40%	50%

What is the ratio of Petrol and CNG type of cars in city D to the Diesel and CNG type of cars in city B

- 1. 41 : 31
- 2. 21 : 31
- 3. 15 : 11
- 4. 33 : 41
- 5. 22 : 13

Correct Option - 1

Que. 117 The CNG type of cars in city B is how much percentage (approximately) more than the CNG type of cars in city D?

- 1. 46%
- 2. 51%
- 3. 53%
- 4. 48%
- 5. 55%

Correct Option - 2

Que. 118 **Directions:**

There are 4 cities A, B, C, D. The cars in these cities are running on three different types of sources viz Petrol, Diesel and CNG. The percentage of cars running on petrol and diesel is given. The total number of cars is 2940. Read the table carefully and answer the following questions.

Cities	Petrol + CNG + Diesel	Percentage of Petrol cars	Percentage of Diesel cars
A	800	30%	20%
B	620	50%	30%
C	700	70%	20%
D	820	40%	50%

What is the total number of Diesel and Petrol cars in city C and city D?

1. 1143
2. 1423
3. 1250
4. 1368
5. 985

Correct Option - 4

Que. 119 **Directions:**
 There are 4 cities A, B, C, D. The cars in these cities are running on three different types of sources viz Petrol, Diesel and CNG. The percentage of cars running on petrol and diesel is given. The total number of cars is 2940. Read the table carefully and answer the following questions.

Cities	Petrol + CNG + Diesel	Percentage of Petrol cars	Percentage of Diesel cars
A	800	30%	20%
B	620	50%	30%
C	700	70%	20%
D	820	40%	50%

Find the difference between the number of CNG and Petrol cars in city C to the number of Petrol and Diesel cars in city B.

1. 51
2. 65
3. 53
4. 64
5. 67

Correct Option - 4

Que. 120 What is the average number of Diesel cars in all the four cities?

1. 221
2. 231
3. 224

- 4. 254
- 5. 263

Correct Option - 3

Que. 121 **Direction:** Study the information given below carefully and answer the questions that follow.

Eight people- J to Q are sitting around a circular table but not necessarily in the same order. Some are facing towards the centre and some are facing away from the centre.

Q and L are facing the opposite direction to that of P. Q is not an immediate neighbour of M and both are facing the same direction. O is not an immediate neighbour of L or N. J is facing the same direction as N. Both the immediate neighbours of K are facing the same direction but opposite to that of K. Both the immediate neighbours of M are facing the same direction but opposite to that of M. J sits opposite to K and both are facing opposite directions from each other. M sits third to the left of N and L. O is facing away from the centre and is not an immediate neighbour of K.

What is the position of M with respect to J?

- 1. Second to the Left
- 2. Third to the right
- 3. Second to the right
- 4. Third to the left
- 5. Immediate right

Correct Option - 3

Que. 122 How many persons are facing towards the centre?

- 1. Three
- 2. Two
- 3. Five
- 4. Four
- 5. One

Correct Option - 4

Que. 123 Four of the five are alike in a certain way and thus form a group. Find the option which does not belong to the group.

- 1. Q
- 2. N
- 3. J
- 4. P
- 5. O

Correct Option - 1

Que. 124 Who sits opposite P?

1. K
2. M
3. O
4. L
5. J

Correct Option - 4

Que. 125 As Q is related to L, O is related to J, in the same way K is related to?

1. O
2. P
3. M
4. L
5. Q

Correct Option - 2

Que. 126 How many pairs of letters in the word “MANIPULATIVE” have the same number of letters between them in the word (in both forward and backward directions), as they have in the English alphabetical series?

1. 4
2. 5
3. 3
4. 0
5. More than 5

Correct Option - 5

Que. 127 **Directions:** Study the following information to answer the given questions.

Six friends A, B, C, D, E and F are seated in a straight line but not necessarily in the same order. Three of them are facing south while three are facing north.

E and C sit facing the same direction. F sits at one of the extreme ends and faces in the same direction as A. E sits third to the left of B. D does not face north. A and B sits in the middle of the row and A faces the opposite direction as B. A sits exactly in the middle of E and D. E is facing north.

How many persons are there between C and F?

1. None
2. 3
3. 1
4. 2
5. 4



Correct Option - 2

Que. 128 Four of the five pairs given below are related in some way, thus form a group. Which of the following does not belong to the group?

- 1. EC
- 2. DF
- 3. BC
- 4. AD
- 5. AE

Correct Option - 5

Que. 129 Who is the neighbour of E?

- 1. A
- 2. B
- 3. C
- 4. D
- 5. F

Correct Option - 3

Que. 130 What is the position of E with respect to D?

- 1. Third to the left
- 2. Fourth to the left
- 3. Immediate right
- 4. Fourth to the right
- 5. Second to the right

Correct Option - 4

Que. 131 Which of the following is true with respect to the given arrangement?

- 1. Two people sit to the left of C
- 2. A sits second to right of D
- 3. B and C are immediate neighbours of each other
- 4. F sits third to the right of A
- 5. All are true

Correct Option - 2

Que. 132 **Statement:**

Some days are dark

Few dark are dreams

All dream is dusty
Some dusty are not dull

Conclusion:

- I) Some days can be dull
- II) Some dreams can be dull
- III) All dark is dream

- 1. Only I and II follow
- 2. Only II and III follows
- 3. Only III follows
- 4. All follows
- 5. None follows

Correct Option - 1

Que. 133 In the following question below are given three statements followed by three conclusions. Taking the given statements to be true even if they seem to be at variance from commonly known facts, read all the conclusions and then decide which of the given conclusion logically follows the given statements.

Statements:

- I. Few cat are dog.
- II. At least some dog are frog.
- III. Only frog is lion.

Conclusions:

- I. Some dog being a lion is possibility.
- II. Some cat are frog.
- III. All frog being cat is a possibility.

- 1. Both I and II conclusions follow
- 2. Both II and III conclusions follow
- 3. Both I and III conclusions follow
- 4. Neither I nor II conclusion follows
- 5. None of the conclusions follows

Correct Option - 5

Que. 134 **Direction:** In the question below are given some statements followed by some conclusions. You have to take given statements to be true even if they seem to be at variance with commonly known facts. Read all the conclusions and then decide which of the given conclusions logically follows from the given statements disregarding commonly known facts.

Statements

- Every tree is green
- All green are herbs
- Only a few leaf are herbs
- None of green is plant.

Conclusions

- I. None of tree is plant
- II. Every Herbs is plant is possibility.
- III. All herbs are leaf.

- 1. Only II follows
- 2. Only I follow
- 3. Only II and III follows
- 4. None follows
- 5. All follows

Correct Option - 2

Que. 135 **Instructions:** In these types of questions the symbols \$, *, @, ©, # are used with the following meanings as illustrated below:

- ‘P\$Q’ means ‘P is smaller than Q’
- ‘P©Q’ means P is greater than Q’
- ‘P#Q’ means P is equal to Q’
- ‘P@Q’ means P is either equal to or greater than Q
- ‘P*Q’ means P is either equal to or less than Q

Now in each of the following questions assuming the given statements to be True, find which of the conclusion/s given below them is/are definitely True?

Statements:

R @ S @ T © U © X; T \$ V \$ W

Conclusions:

- I. R © X
- II. X \$ W

- 1. if only Conclusion I is true
- 2. if only Conclusion II is true
- 3. if either Conclusion I or II is true.
- 4. if neither Conclusion I or II is true
- 5. if both conclusion I and II are true.

Correct Option - 5

Que. 136 **Statements:**
E # F \$ G \$ H; G @ I

Conclusions:

- I. H © I
- II. E @ I

- 1. if only Conclusion I is true
- 2. if only Conclusion II is true.
- 3. if either Conclusion I or II is true
- 4. if neither Conclusion I or II is true

5. if both conclusion I and II are true.

Correct Option - 1

Que. 137 **Statements:**

A © B © F © C; D © E © C

Conclusions:

I. C \$ A

II. B © D

1. if only Conclusion I is true.
2. if only Conclusion II is true.
3. if either Conclusion I or II is true.
4. if neither Conclusion I or II is true.
5. if both conclusion I and II are true.

Correct Option - 1

Que. 138 **Statements:**

K * L * M # N; P @ O @ M

Conclusions:

I. K \$ P

II. K # P

1. if only Conclusion I is true.
2. if only Conclusion II is true.
3. if either Conclusion I or II is true.
4. if neither Conclusion I or II is true.
5. if both conclusion I and II are true.

Correct Option - 3

Que. 139 **Statements:**

D \$ E \$ F \$ G; K © F

Conclusions:

I. K * G

II. K © D

1. if only Conclusion I is true.
2. if only Conclusion II is true
3. if either Conclusion I or II is true
4. if neither Conclusion I or II is true
5. if both conclusion I and II are true.

Correct Option - 2

Que. 140 **Direction:** Study the information given below carefully and answer the questions that follow.

There are eight members in a family – A, B, C, D, E, F, G and H. A is the grandmother of G. A is the wife of B. B has one son and one daughter. C, the daughter of A is married to E. F is the wife of D who is the son of A. H is the son of D. E has one daughter.

How is C related to D?

- 1. Brother
- 2. Sister
- 3. Mother
- 4. Daughter
- 5. Granddaughter

Correct Option - 2

Que. 141 How is F related to A?

- 1. Son
- 2. Daughter-in-law
- 3. Son-in-law
- 4. Father
- 5. Brother

Correct Option - 2

Que. 142 How is A related to E?

- 1. Mother
- 2. Father
- 3. Father-in-law
- 4. Mother-in-law
- 5. Sister

Correct Option - 4

Que. 143 **Directions:** Study the given information and answer the following questions.

A number/symbol arrangement machine, when given a particular input, rearranges it following a particular rule. The following is the illustration of the input and the steps of arrangement.

- Input: @ #2 5 \$ 6 8 ? 7 ! & > 9 4
- Step I: 2 @ # \$ 6 8 ? 7 ! & > 9 4 5
- Step II: 2 4 @ # \$ 6 8 ? ! & > 9 5 7
- Step III: 2 4 6 @ # \$ 8 ? ! & > 5 7 9
- Step IV: 2 4 6 8 @ # \$? ! & > 5 7 9
- Step V: 3 5 7 9 @ # \$? ! & > 4 6 8
- Step VI: 3 4 5 7 9 @ # \$? ! & > 6 8
- Step VII: 3 4 5 6 7 9 @ # \$? ! & > 8

Step VIII: 3 4 5 6 7 8 9 @ # \$? ! & >

And Step VIII is the last step for this input. As per rules followed in the above steps, find out in each of the questions the appropriate step for the given input.

Input: * 5 \$ 9 / 8 4 © 3 + 2 = 6 %

How many steps are required to complete the input arrangement?

- 1. 5
- 2. 6
- 3. 7
- 4. 8
- 5. Cannot be determined

Correct Option - 4

Que. 144 What will be the last step for the given input?

- 1. 2 3 4 5 7 8 9 * \$ / © + = %
- 2. 2 3 5 6 7 8 9 * \$ / © + = %
- 3. 2 3 6 4 5 7 9 * \$ / © + = %
- 4. 2 4 5 7 3 8 9 * \$ / © + = %
- 5. None of these

Correct Option - 1

Que. 145 What is the position of % in the 5th step?

- 1. Fifth from the left
- 2. Sixth from the left
- 3. Fourth from the right
- 4. Eleventh from the right
- 5. None of these

Correct Option - 3

Que. 146 **Direction:** Study the following information carefully and answer the question given below.

Ten friends A, B, C, D, E, F, G, H, I, J who had married in the same year were talking about their wedding anniversaries in their reunion. No two persons have their wedding anniversary in the same month of a year and neither of the friends had married in the months of March or September.

A was the first person to get married. C will celebrate his anniversary in February. At least 8 persons have their anniversaries before G. H was married just before G and just after I. The anniversaries of B and H are after that of I. The anniversary of E is before the anniversary of F and after the anniversary of D. The anniversary months of E and J have 31 days.

Who among the following was married in October?

- 1. E
- 2. F

3. H
4. I
5. J

Correct Option - 3

Que. 147 Four of the five are alike in a certain way and thus form a group. Find the option which does not belong to the group.

1. E
2. F
3. J
4. I
5. H

Correct Option - 2

Que. 148 How many persons will celebrate their anniversaries between February and July?

1. 1
2. 2
3. 3
4. 4
5. 5

Correct Option - 3

Que. 149 Who was the last person to get married among the ten friends?

1. A
2. B
3. C
4. D
5. E

Correct Option - 2

Que. 150 Identify the true statement among the following.

1. The anniversary of F is in May.
2. E had married before D.
3. H has his anniversary in November.
4. J will celebrate his anniversary after I.
5. The month of H's anniversary has 31 days.

Correct Option - 5

Que. 151 **Direction:** Study the following information carefully and answer the questions given below.

Six boxes A, B, C, D, E, and F of wheat grains are stacked in a granary, whose weights are 25, 30, 40, 45, 50, and 70 (in kg) but not necessarily in the same order.

F is kept at the lowermost position. There are 3 boxes between A and E. The sum of the weights of A and E is the same as the weight of F. B is kept just below A and its weight is 50 kg. D is kept below C and above E. The weights of C and D are multiples of 10 but not 70. C is not heavier than D. A is not heavier than E.

Which of the following boxes is kept just above F?

1. A
2. B
3. C
4. D
5. E

Correct Option - 5

Que. 152 Which of the following is the heaviest box?

1. B
2. C
3. D
4. E
5. F

Correct Option - 5

Que. 153 Which of the following does not belong to the group?

1. B
2. C
3. D
4. E
5. F

Correct Option - 4

Que. 154 **Directions:** Study the following information and answer the given below questions.

In a certain code language,

‘india have many temples’ is written as ‘5D% 4V@ 4N# 7M&’.

‘temple has tiny plants’ is written as ‘6M& 3S@ 4N& 6A\$’.

‘more peoples attends prayers’ is written as ‘4R# 7O\$ 7T* 7A\$’.

Which of the following is the code for ‘marriage’?

1. 8R\$
2. 8A\$

3. 7A\$
4. 8R#
5. None of these

Correct Option - 4

Que. 155 Which of the following code for “important area”?

1. 9P%, 4A*
2. 8P%, 4E*
3. 4E*, 9P%
4. 9P%, 4E*
5. 8P%, 3E*

Correct Option - 4

Que. 156 In the given code language, code “6L\$” is for which of the given word?

1. Poetic
2. Poems
3. People
4. Public
5. Police

Correct Option - 5

Que. 157 What is the code for “indians are tidy”?

1. 7D%, 3R*, 4D&
2. 7D%, 3E*, 4D\$
3. 5D%, 3E*, 4D\$
4. 7D%, 3E*, 4D&
5. 3E&, 4D&, 7D%

Correct Option - 4

Que. 158 In the given code language, code “6N&” is for which of the given word?

1. tender
2. temple
3. tempts
4. toilet
5. todays

Correct Option - 1

Que. 159 Which of the following symbols should be placed in the blank spaces respectively (in the same order from left to right) in order to complete the given expression in such a manner that “ $S > Q$ ” definitely holds false?

$S _ N _ X _ Q _ V$

1. $\geq, =, >, \geq$
2. $>, >, =, =$
3. $>, \leq, =, >$
4. $=, =, <, \geq$
5. None of these

Correct Option - 4

Que. 160 Which of the following symbols should be placed in the blank spaces respectively (in the same order from left to right) in order to complete the given expression in such a manner that “ $S \geq L$ ” definitely holds True?

$S _ R _ M _ L$

1. $<, >, =$
2. $=, =, >$
3. $\geq, >, \leq$
4. $\geq, =, \geq$
5. None of these

Correct Option - 4

Que. 161 निर्देश: निम्नलिखित गद्यांश का ध्यान पूर्वक अध्ययन करें और दिए गए प्रश्नों के उत्तर दें।

रबीन्द्रनाथ टैगोर एक प्रसिद्ध भारतीय कवि थे जो गुरुदेव के नाम से प्रसिद्ध थे। टैगोर का जन्म कलकत्ता के जोर-साँको में 7 मई 1861 को एक अमीर सुसंस्कृत परिवार में हुआ था। उनके अभिभावक महर्षि देवेन्द्रनाथ (पिता) और शारदा देवी (माता) थीं। वो बचपन से ही कविताएँ लिखने के शौकीन थे। एक महान कवि होने के साथ ही, वो एक मानवतावादी, देशभक्त, चित्रकार, उपन्यासकार, कहानी लेखक, शिक्षाविद् और दर्शनशास्त्री भी थे। वो देश के सांस्कृतिक दूत थे जिन्होंने पूरी दुनिया में भारतीय संस्कृति के ज्ञान को फैलाया है। वो अपने समय के एक प्रतिभासंपन्न बच्चे थे जिसने बहुत महान कार्य किये। कविता लेखन के क्षेत्र में वो एक उगते सूरज के समान थे।

‘गीतांजलि’ गुरुदेव रवीन्द्रनाथ टैगोर (1861-1941) की सर्वाधिक प्रशंसित और पठित पुस्तक है। इसी प्रकार उन्हें 1913 में विश्व प्रसिद्ध नोबेल पुरस्कार भी मिला। इसके बाद अपने जीवन काल में अपने पूरे जीवन काल में वे भारतीय साहित्य पर छाए रहे हैं। साहित्य की विभिन्न विधाओं, संगीत और चरित्र कला में सतत् सृजनरत रहते हुए उन्होंने अन्तिम साँस तक सरस्वती की साधना की और भारतवासियों के लिए गुरु देव के रूप में प्रतिष्ठित हुए।

भारतीय साहित्य के लिये उनका योगदान बहुत बड़ा और अविस्मरणीय है। उनके रबीन्द्रसंगीत में दो गीत बहुत प्रसिद्ध हुए क्योंकि वो दो देशों के राष्ट्रगान हैं “जन मन गण” (भारत का राष्ट्रगान) और “आमार सोनार बांग्ला” (बांग्लादेश का राष्ट्रगान)। उनकी रचनात्मक लेखन, चाहे वो कविता या कहानी के रूप में हों, आज भी उसे कोई चुनौती नहीं दे सकता। शायद वो पहले व्यक्ति हैं जिन्होंने अपने असरदार लेखन से पूरब और पश्चिम के बीच की दूरी को कम कर दिया। अपनी कहानियों में रबीन्द्रनाथ अनुपम हैं। बंगला भाषा और बंगाल के कहानी के क्षेत्र में उनसे पहले कोई नहीं हुआ और बाद भी उनके जैसी अनुभूति विरल है।

टैगोर शान्ति निकेतन विद्यालय की स्थापना से ही संतुष्ट नहीं थे। उनका विचार था कि एक ऐसे शिक्षा केन्द्र की स्थापना की जाए, जहाँ पूर्व और पश्चिम को मिलाया जा सके। अपने इस उद्देश्य की प्राप्ति के लिए टैगोर ने 1921 में शान्तिनिकेतन में ‘यत्र



विश्वम भवत्येकनीडम् (सारा विश्व एक घर है) के नए आदर्श वाक्य के साथ विश्व भारती विश्वविद्यालय की स्थापना की। तभी से यह संस्था एक अन्तर्राष्ट्रीय विश्वविद्यालय के रूप में ख्याति प्राप्त कर रही है।

रबिन्द्रनाथ टैगोर शांति निकेतन की स्थापना से संतुष्ट क्यों नहीं थे?

1. उनकी संस्था को कोई उपलब्धि नहीं मिली।
2. इसे उनके रचनात्मक संग्रहालयों में सम्मिलित नहीं किया गया।
3. वे चाहते थे कि ऐसे शिक्षा केंद्र की स्थापना हो जहाँ पूर्व और पश्चिम को मिलाया जा सके।
4. अपने जीवन काल में इसे बेहतर केंद्र बनाना चाहते थे।

Correct Option - 3

Que. 162 निम्न में से 'प्रतिष्ठित' का विलोम कौनसा होगा?

1. उपप्रतिष्ठित
2. अनप्रतिष्ठित
3. अप्रतिष्ठित
4. उप्रतिष्ठित

Correct Option - 3

Que. 163 रबिन्द्रनाथ टैगोर को नोबेल पुरस्कार किस वर्ष में मिला था?

1. 1912
2. 1913
3. 1908
4. 1920

Correct Option - 2

Que. 164 निम्न में से रबिन्द्रनाथ टैगोर किस नाम से प्रसिद्ध थे?

1. महामना
2. गोपाल
3. गुरुदेव
4. नेपोलियन

Correct Option - 3

Que. 165 रबिन्द्रनाथ टैगोर को किस रचना के लिए नोबेल पुरस्कार से सम्मानित किया गया था?

1. काबुलीवाला के लिए
2. भारतीय राष्ट्रगान के लिए
3. साधना के लिए

4. गीतांजलि के लिए

Correct Option - 4

Que. 166 निम्न शब्दों में से 'ख्याति' का पर्याय होगा -

1. यश
2. प्रसिद्धि
3. योग्यता
4. 1 और 2

Correct Option - 4

Que. 167 उपर्युक्त गद्यांश में टैगोर को किस के समान माना गया है?

1. चन्द्रमा के
2. सितारे के
3. सूरज के
4. समुद्र के

Correct Option - 3

Que. 168 विरल का अर्थ है -

1. बहुत
2. अल्प
3. ज्ञान
4. समान

Correct Option - 2

Que. 169 'रचनात्मक' शब्द में शब्द का कौनसा भेद है?

1. सर्वनाम
2. संज्ञा
3. विशेषण
4. क्रिया

Correct Option - 3

Que. 170 'साधना' का पर्यायवाची शब्द ज्ञात करें।

1. अनुकूल
2. अभ्यास

3. अंकित
4. कामना

Correct Option - 2

Que. 171 नीचे दिए गए वाक्य में एक रिक्त स्थान दिया गया है, वाक्य को पूरा करें और सही विकल्प का चयन कीजिये।
किसी व्यक्ति जिससे किसी कार्य करने की आशा न हो, उससे कार्य कराना का अर्थ है _____

1. नाच न जाने आँगन टेढ़ा
2. लंगूर के मुँह में अंगूर
3. गधे से हल चलाना
4. खयाली पुलाव पकाना
5. गले पड़ना

Correct Option - 3

Que. 172 नीचे दिए गए वाक्य में एक रिक्त स्थान दिया गया है, वाक्य को पूरा करें और सही विकल्प का चयन कीजिये।
वापस जाने की जल्दी में होना का अर्थ है -

1. घोड़े पर सवार होना
2. गंगा लाभ होना
3. गाल बजाना
4. गुजर जाना
5. गुलर का फूल होना

Correct Option - 1

Que. 173 नीचे दिए गए वाक्य में एक रिक्त स्थान दिया गया है, वाक्य को पूरा करें और सही विकल्प का चयन कीजिये।
जो बहुत प्यारा हो, उसके लिए सही मुहावरा है - _____

1. गढ़ फतह करना
2. गुल खेलना
3. गले न उतरना
4. गले का हार होना

Correct Option - 4

Que. 174 अमृत का पर्यायवाची है—

1. अशुद्धक
2. पियूष
3. गुलधर

4. मनोरथ
5. इनमें से कोई नहीं

Correct Option - 2

Que. 175 बादल का पर्यायवाची है-

1. उत्तम
2. मठ
3. अम्बुद
4. प्रालेय
5. इनमे से कोई नहीं

Correct Option - 3

Que. 176 निर्देश: नीचे नीचे दिए गए परिच्छेद में कुछ रिक्त स्थान छोड़ दिए गए हैं तथा उन्हें प्रश्न संख्या से दर्शाया गया है। ये संख्याएँ परिच्छेद के नीचे दिए गए हैं एवं और प्रत्येक के सामने (1), (2), (3), (4) और (5) विकल्प दिए गए हैं। इन पाँचों में से कोई एक इस रिक्त स्थान को पूरा करेगा। आपको वह विकल्प ज्ञात करना है और उसका क्रमांक ही उत्तर के रूप में दर्शाना है।

सफलता हर किसी के जीवन का लक्ष्य है। जीवन चुनौतियों और ----(A)---- से भरा है लेकिन केवल उन्हीं लोगों के लिए जो वास्तव में अवसरों को प्राप्त करने और चुनौतियों का सामना करने के लिए ----(B)---- करते हैं। कड़ी मेहनत और समर्पण --- (C)---- की यात्रा का एकमात्र मंत्र हैं। उत्साह और कड़ी मेहनत के बिना कोई भी सफलता हासिल नहीं कर सकता। हो सकता है कई अवसरों पर आपको सफलता पर व्याख्या देनी पड़े। हम यहां सफलता के विभिन्न नमूने साझा कर रहे हैं जो आपको अपने दर्शकों के लिए एक ----(D)---- व्याख्या देने में मदद करेंगे। स्कूल स्तर पर आप 'शिक्षक दिवस', 'वार्षिक दिवस' आदि जैसे अवसरों पर सफलता पर छोटी व्याख्या का ----(E)---- कर सकते हैं।

दिए गए परिच्छेद में (B) से प्रदर्शित रिक्त स्थान पर निम्न में से कौन-सा शब्द आएगा?

1. चुनौती
2. संघर्ष
3. विकल्प
4. समय
5. निवेदन

Correct Option - 2

Que. 177 दिए गए परिच्छेद में (A) से प्रदर्शित रिक्त स्थान पर निम्न में से कौन-सा शब्द आएगा?

1. अभीन्ताओं
2. आकांशाओं
3. चेतावनियों
4. क्षमताओं

5. अवसरों

Correct Option - 5

Que. 178 दिए गए परिच्छेद में (C) से प्रदर्शित रिक्त स्थान पर निम्न में से कौन-सा शब्द आएगा?

1. आज्ञा
2. मान्यता
3. असफलता
4. सफलता
5. जीत

Correct Option - 4

Que. 179 दिए गए परिच्छेद में (D) से प्रदर्शित रिक्त स्थान पर निम्न में से कौन-सा शब्द आएगा?

1. शक्तिशाली
2. मानवशाली
3. कर्मशाली
4. योग्यशाली
5. प्रभावशाली

Correct Option - 5

Que. 180 दिए गए परिच्छेद में (E) से प्रदर्शित रिक्त स्थान पर निम्न में से कौन-सा शब्द आएगा?

1. आदर
2. संयोग
3. उपयोग
4. प्रभाव
5. शोषण

Correct Option - 3

Que. 181 निर्देश: निम्न पाँच (1), (2), (3), (4) और (5) वाक्य को व्यवस्थित कर एक सार्थक लेख बनाएँ और निम्न प्रश्नों का उत्तर दें-

1. सारा विश्व आर्थिक मंदी की चपेट में है।
 2. यह कामगारों की छँटनी को नहीं झेल पाएगा।
 3. नौकरियों में छँटनी की जा रही है,
 4. सरकार के सामने आर्थिक मंदी से बाहर निकलने की भी भारी चुनौती है।
 5. भारत पहले से ही बेरोजगारी की समस्या से जूझ रहा है।
- पुनर्व्यवस्थित करने के बाद निम्नलिखित में से पहला वाक्य कौन-सा है?

1. 1
2. 2
3. 3
4. 4
5. 5

Correct Option - 4

Que. 182 पुनर्व्यवस्थित करने के बाद निम्नलिखित में से दूसरा वाक्य कौन-सा है?

1. 1
2. 2
3. 3
4. 4
5. 5

Correct Option - 1

Que. 183 पुनर्व्यवस्थित करने के बाद निम्नलिखित में से तीसरा वाक्य कौन-सा है?

1. 1
2. 2
3. 3
4. 4
5. 5

Correct Option - 3

Que. 184 पुनर्व्यवस्थित करने के बाद निम्नलिखित में से चौथा वाक्य कौन-सा है?

1. 1
2. 2
3. 3
4. 4
5. 5

Correct Option - 5

Que. 185 पुनर्व्यवस्थित करने के बाद निम्नलिखित में से पाँचवा वाक्य कौन-सा है?

1. 1
2. 2
3. 3
4. 4
5. 5



Correct Option - 2

Que. 186 निम्नलिखित वाक्य में, चार शब्द दिए गए हैं, जिनमें बोल्ट किया गया है। इन शब्दों में से एक को गलत तरीके से वर्तनी या संदर्भ में अनुचित हो सकता है। वह शब्द ज्ञात कीजिये। यदि सभी शब्द सही हैं, तो अपने उत्तर के रूप में विकल्प 5 चुनें।

कल-कारखानों का दूषित जल नदी-नालों में मिलाकर भयंकर जल-प्रदूषण पैदा करता है।

1. कल-कारखानों
2. दूषित
3. मिलाकर
4. जल-प्रदूषण
5. सभी सही हैं

Correct Option - 3

Que. 187 निम्नलिखित वाक्य में, चार शब्द दिए गए हैं, जिनमें बोल्ट किया गया है। इन शब्दों में से एक को गलत तरीके से वर्तनी या संदर्भ में अनुचित हो सकता है। वह शब्द ज्ञात कीजिये। यदि सभी शब्द सही हैं, तो अपने उत्तर के रूप में विकल्प 5 चुनें।

प्राथमिक चिकित्सा का सबसे मुख्य उद्देश्य होता है घायल या पीड़ित व्यक्ति की जान बचाना

1. प्राथमिक
2. चिकित्सा
3. उद्देश्य
4. पीड़ित
5. सभी सही हैं

Correct Option - 5

Que. 188 निम्नलिखित वाक्य में, चार शब्द दिए गए हैं, जिनमें बोल्ट किया गया है। इन शब्दों में से एक को गलत तरीके से वर्तनी या संदर्भ में अनुचित हो सकता है। वह शब्द ज्ञात कीजिये। यदि सभी शब्द सही हैं, तो अपने उत्तर के रूप में विकल्प 5 चुनें।

अनुसूचित जाति/जनजाति के लाभार्थियों हेतु बोरिंग पर अनुदान की अधिकतम सीमा 10000 रु निर्धारित है।

1. लाभार्थियों
2. अनुदान
3. अधिकतम
4. निर्धारित
5. सभी सही हैं

Correct Option - 4

Que. 189 नीचे दिए गए प्रश्न में एक वाक्य के लेबल वाले भागों का एक सेट है। दिए गए पांच विकल्पों में से, सुसंगत वाक्य बनाने के लिए सबसे तार्किक क्रम का चयन करें।

(A) के साथ ही शुरू हो गया था (B) ऐतिहासिक रूप से वायु का (C) वायु तत्व वस्तुतः प्राण ही है (D) प्रदूषण अग्नि के आविष्कार।

1. BCDA
2. CABD
3. CBDA
4. CBAD
5. BCAD

Correct Option - 3

Que. 190 नीचे दिए गए प्रश्न में एक वाक्य के लेबल वाले भागों का एक सेट है। दिए गए पांच विकल्पों में से, सुसंगत वाक्य बनाने के लिए सबसे तार्किक क्रम का चयन करें।

हिंदी को राजभाषा माना गया है जबकि अंग्रेजी को सहायक राजभाषा माना गया है।

(A) अंग्रेजी को सहायक (B) माना गया है जबकि (C) राजभाषा माना गया है (D) हिंदी को राजभाषा।

1. DABC
2. ABDC
3. ACDB
4. DBAC
5. CDAB

Correct Option - 4

Que. 191 नीचे दिये गये प्रश्न में एक वाक्य को चार भागों में बाँटा गया है आपको वाक्य का अध्ययन कर तय करना है की निम्न में से किस भाग में त्रुटि है यदि वाक्य में कोई भी त्रुटि नहीं है तो आपका उत्तर 5 (कोई त्रुटि नहीं है) होगा?

पेड़ वायु प्रदूषण / कम करने में / हमारी विविधता कर / पर्यावरण को शुद्ध रखते हैं / कोई त्रुटि नहीं है।

1. पेड़ वायु प्रदूषण
2. कम करने में
3. हमारी विविधता कर
4. पर्यावरण को शुद्ध रखते हैं
5. कोई त्रुटि नहीं है।

Correct Option - 3

Que. 192 नीचे दिये गये प्रश्न में एक वाक्य को चार भागों में बाँटा गया है आपको वाक्य का अध्ययन कर तय करना है की निम्न में से किस भाग में त्रुटि है यदि वाक्य में कोई भी त्रुटि नहीं है तो आपका उत्तर 5 (कोई त्रुटि नहीं है) होगा?

नीम का पेड़ वातावरण में / हवा को शुद्ध करके जीवों / के लिए ज्यादा ऑक्सीजन / निर्माण करता है / कोई त्रुटि नहीं है।

1. नीम का पेड़ वातावरण में

2. हवा को शुद्ध करके जीवों
3. के लिए ज्यादा ऑक्सीजन
4. निर्माण करता है
5. कोई त्रुटि नहीं है।

Correct Option - 2

Que. 193 नीचे दिये गये प्रश्न में एक वाक्य को चार भागों में बाँटा गया है आपको वाक्य का अध्यन कर तय करना है की निम्न में से किस भाग में त्रुटि है यदि वाक्य में कोई भी त्रुटि नहीं है तो आपका उत्तर 5 (कोई त्रुटि नहीं है) होगा?

परोपकारी मानव किसी बदले की / भावना अथवा प्राप्ति की / आकांक्षा से किसी के / हित में रत नहीं होता / कोई त्रुटि नहीं है।

1. परोपकारी मानव किसी बदले की
2. भावना अथवा प्राप्ति की
3. आकांक्षा से किसी के
4. हित में रत नहीं होता
5. कोई त्रुटि नहीं है

Correct Option - 5

Que. 194 नीचे दिये गये प्रश्न में एक वाक्य को चार भागों में बाँटा गया है आपको वाक्य का अध्यन कर तय करना है की निम्न में से किस भाग में त्रुटि है यदि वाक्य में कोई भी त्रुटि नहीं है तो आपका उत्तर 5 (कोई त्रुटि नहीं है) होगा?

चुनाव की प्रक्रिया के तहत / जनता एक ऐसे नेता रूपी / नाव को चुनती है जो जनता को / अनुभव की वैतरणी पार करा सके / कोई त्रुटि नहीं है।

1. चुनाव की प्रक्रिया के तहत
2. जनता एक ऐसे नेता रूपी
3. नाव को चुनती है जो जनता को
4. अनुभव की वैतरणी पार करा सके
5. कोई त्रुटि नहीं है

Correct Option - 4

Que. 195 नीचे दिये गये प्रश्न में एक वाक्य को चार भागों में बाँटा गया है आपको वाक्य का अध्यन कर तय करना है की निम्न में से किस भाग में त्रुटि है यदि वाक्य में कोई भी त्रुटि नहीं है तो आपका उत्तर 5 (कोई त्रुटि नहीं है) होगा?

मनुष्य को समय के साथ / चलना पड़ता जो / समय के साथ नहीं चला / वह पीछे रह पायेगा / कोई त्रुटि नहीं है।

1. मनुष्य को समय के साथ
2. चलना पड़ता जो
3. समय के साथ नहीं चला
4. वह पीछे रह पायेगा
5. कोई त्रुटि नहीं है।

Correct Option - 4

Que. 196 निर्देश: नीचे नीचे दिए गए परिच्छेद में कुछ रिक्त स्थान छोड़ दिए गए हैं तथा उन्हें प्रश्न संख्या से दर्शाया गया है। ये संख्याएँ परिच्छेद के नीचे दिए गए हैं एवं और प्रत्येक के सामने (A), (B), (C), (D) और (E) विकल्प दिए गए हैं। इन पाँचों में से कोई एक इस रिक्त स्थान को पूरा करेगा। आपको वह विकल्प ज्ञात करना है और उसका क्रमांक ही उत्तर के रूप में दर्शाना है।

स्कूल के भारी बैग्स के कारण बच्चों को कई स्वास्थ्य समस्याओं का सामना करना पड़ता है जिसके केवल शारीरिक ही नहीं मानसिक और ----(A)---- प्रभाव भी होते हैं। कमर, गर्दन और कंधों में दर्द। हाथों में झुनझुनी आना, सुन्न हो जाना और कमजोरी आ जाना। लंबे समय में होने वाले ----(B)---- थकान और गलत पास्चर विकसित होना। गर्दन और कंधों में तनाव के कारण सिरदर्द होना। स्पाइन का ----(C)---- हो जाना। स्कॉलियोसिस की समस्या, जिसमें स्पाइन एक तरफ झुकने लगती है। फेफड़ों पर दबाव आने के कारण सांस लेने की ----(D)---- कम हो जाना। बच्चों पर ज्यादा बोझ न पड़े इसके लिए केंद्रीय विद्यालय संगठन ने तो बकायदा स्कूली बैग का ----(E)---- भार भी तय कर दिया है।

दिए गए परिच्छेद में (A) से प्रदर्शित रिक्त स्थान पर निम्न में से कौन-सा शब्द आएगा?

1. संख्यात्मक
2. भावनात्मक
3. रचनात्मक
4. परमात्मक
5. नवात्मक

Correct Option - 2

Que. 197 दिए गए परिच्छेद में (B) से प्रदर्शित रिक्त स्थान पर निम्न में से कौन-सा शब्द आएगा?

1. लाभ
2. विचार
3. तत्व
4. नुकसान
5. समाचार

Correct Option - 4

Que. 198 दिए गए परिच्छेद में (C) से प्रदर्शित रिक्त स्थान पर निम्न में से कौन-सा शब्द आएगा?

1. उदगम
2. वृद्धि
3. क्षतिग्रस्त
4. पोषण
5. समान

Correct Option - 3

Que. 199 दिए गए परिच्छेद में (D) से प्रदर्शित रिक्त स्थान पर निम्न में से कौन-सा शब्द आएगा?

1. अभिव्यक्ति
2. क्षमता
3. इच्छा
4. शक्ति
5. नम्रता

Correct Option - 2

Que. 200 दिए गए परिच्छेद में (E) से प्रदर्शित रिक्त स्थान पर निम्न में से कौन-सा शब्द आएगा?

1. अधिकतम
2. न्यूनतम
3. समस्या
4. मापदंड
5. योग्यतम

Correct Option - 1

