



Teachingninja.in



Latest Govt Job updates



Private Job updates



Free Mock tests available

Visit - teachingninja.in



Teachingninja.in

SSB Constable

Previous Year Paper
26 Dec, 2023 Shift 1



भारत सरकार
गृह मंत्रालय
महानिदेशक कार्यालय, सशस्त्र सीमा बल
ईस्ट ब्लॉक -5, आर.के.पुरम -1, नई दिल्ली -66
वेबसाइट: -www.ssbrectt.gov.in



Government of India
Ministry of Home Affairs
Office of the Director General
Sashastra Seema Bal
East Block-V, R.K.Puram -1
New Delhi-66
Website: - www.ssbrectt.gov.in

Participant ID	
Participant Name	
Test Center Name	
Test Date	26/12/2023
Test Time	8:30 AM - 10:30 AM
Subject	CT Non GD Post

Section : General Knowledge

Q.1 Which of the following is not true about the legislative powers of the President?

- Ans
- ☒ 1. The President summons, and prorogues the Houses of Parliament.
 - ☒ 2. The President has the power to dissolve the Lok Sabha even before the expiry of its term on the recommendation of the Prime Minister.
 - ☒ 3. He may summon the Parliament at least twice a year, and the gap between two sessions cannot be more than six months.
 - ☒ 4. The President nominates ten members to Rajya Sabha from amongst persons having special knowledge in the field of literature, science, art and social service.

Question ID : 630680513487
Option 1 ID : 6306802006643
Option 2 ID : 6306802006645
Option 3 ID : 6306802006644
Option 4 ID : 6306802006646
Status : Answered
Chosen Option : 4

Q.2 Damodar river flows in which of the following plateau areas?

- Ans
- ☒ 1. Malwa plateau
 - ☒ 2. Vindhyan plateau
 - ☒ 3. Chotanagpur plateau
 - ☒ 4. Deccan plateau

Question ID : 630680513482
Option 1 ID : 6306802006624
Option 2 ID : 6306802006625
Option 3 ID : 6306802006623
Option 4 ID : 6306802006626
Status : Answered
Chosen Option : 3

Q.3 Based on the information available till November- 2023, which of the following languages is not included in the 8th Schedule of the Indian Constitution?

- Ans
- ☒ 1. Maithili
 - ☒ 2. Tamil
 - ☒ 3. Braj
 - ☒ 4. Hindi

Question ID : 630680513480
Option 1 ID : 6306802006618
Option 2 ID : 6306802006617
Option 3 ID : 6306802006616
Option 4 ID : 6306802006615
Status : Answered
Chosen Option : 3

Q.4 During World War II, on which of the following dates did Japan suddenly attack the American naval base Pearl Harbor?

- Ans
- ☒ 1. December 7, 1941
 - ☒ 2. December 8, 1941
 - ☒ 3. December 9, 1941
 - ☒ 4. December 10, 1941

Question ID : 630680513478
Option 1 ID : 6306802006610
Option 2 ID : 6306802006609
Option 3 ID : 6306802006608
Option 4 ID : 6306802006607
Status : Answered
Chosen Option : 3

Q.5 ISRO has launched which of the following spacecraft in the year 2023 to provide remote observations of the solar corona?

- Ans
- ☒ 1. Aditya L1
 - ☒ 2. Gaganyaan
 - ☒ 3. Pragyan
 - ☒ 4. Vikram

Question ID : 630680513466
Option 1 ID : 6306802006560
Option 2 ID : 6306802006562
Option 3 ID : 6306802006561
Option 4 ID : 6306802006559
Status : Answered
Chosen Option : 1

Q.6 PM SHRI scheme is related to which of the following?

- Ans
- ☒ 1. Renovating rural roads in central Indian states
 - ☒ 2. Development and upgradation of schools across India
 - ☒ 3. Upgrading health infrastructure across India
 - ☒ 4. Enhancing employment in unorganized sector

Question ID : 630680513469
Option 1 ID : 6306802006574
Option 2 ID : 6306802006572
Option 3 ID : 6306802006571
Option 4 ID : 6306802006573
Status : Answered
Chosen Option : 3



Q.7 Which article of the Indian Constitution states that "State to secure a social order for the promotion of welfare of the people."

Ans ☒ 1. Article 39

☒ 2. Article 38

☒ 3. Article 40

☒ 4. Article 41

Question ID : 630680513485
Option 1 ID : 6306802006636
Option 2 ID : 6306802006635
Option 3 ID : 6306802006637
Option 4 ID : 6306802006638
Status : Answered
Chosen Option : 2

Q.8 'Amongmng Festival is associated with which of the following states/UTs?

Ans ☒ 1. Uttrakhand

☒ 2. Nagaland

☒ 3. Himachal Pradesh

☒ 4. Punjab

Question ID : 630680513481
Option 1 ID : 6306802006620
Option 2 ID : 6306802006622
Option 3 ID : 6306802006619
Option 4 ID : 6306802006621
Status : Answered
Chosen Option : 3

Q.9 India has become the _____ country in the world to land on the surface of the Moon.

Ans ☒ 1. Third

☒ 2. Fourth

☒ 3. Second

☒ 4. First

Question ID : 630680513468
Option 1 ID : 6306802006569
Option 2 ID : 6306802006570
Option 3 ID : 6306802006568
Option 4 ID : 6306802006567
Status : Answered
Chosen Option : 4

Q.10 Which among the following is referred to as narrow measure of OF money supply in india?

Ans ☒ 1. M_3

☒ 2. M_4

☒ 3. M_2

☒ 4. M_1

Question ID : 630680513475
Option 1 ID : 6306802006595
Option 2 ID : 6306802006598
Option 3 ID : 6306802006596
Option 4 ID : 6306802006597
Status : Answered
Chosen Option : 2



Q.11 The book titled "The Chipko Movement: A People's History" won the Kamaladevi Chattopadhyay NIF Book Award for 2022. This book is the creation of which of the following?

- Ans ☒ 1. Shekhar Pathak
 ☐ 2. Sanjeev Sanyal
 ☐ 3. Loknath Chhetri
 ☐ 4. Mansi Gulati

Question ID : 630680513479
Option 1 ID : 6306802006611
Option 2 ID : 6306802006613
Option 3 ID : 6306802006614
Option 4 ID : 6306802006612
Status : Answered
Chosen Option : 4

Q.12 Sreeja Akula is associated with which of the following sports?

- Ans ☐ 1. Snooker
 ☐ 2. Cricket
 ☒ 3. Table Tennis
 ☐ 4. Lawn Tennis

Question ID : 630680513489
Option 1 ID : 6306802006651
Option 2 ID : 6306802006652
Option 3 ID : 6306802006653
Option 4 ID : 6306802006654
Status : Answered
Chosen Option : 4

Q.13 After returning from South Africa, on the advice of which of the following, Mahatma Gandhi traveled to India for about a year to know the land and its people?

- Ans ☐ 1. Abul Kalam Azad
 ☐ 2. Mohmed Ali Jinnah
 ☒ 3. Gopal Krishna Gokhale
 ☐ 4. Sardar Patel

Question ID : 630680513477
Option 1 ID : 6306802006606
Option 2 ID : 6306802006605
Option 3 ID : 6306802006604
Option 4 ID : 6306802006603
Status : Answered
Chosen Option : 3

Q.14 Which of the following is not a part of the Lal-Bal-Pal group related to the Indian freedom struggle?

- Ans
- ☒ 1. Bal Gangadhar Tilak
 - ☒ 2. Lala Lajpat Rai
 - ☒ 3. Bipin Chandra Pal
 - ☒ 4. Lala Hardayal

Question ID : 630680513476
Option 1 ID : 6306802006599
Option 2 ID : 6306802006600
Option 3 ID : 6306802006601
Option 4 ID : 6306802006602
Status : Answered
Chosen Option : 3

Q.15 Who among the following has become the first woman officer of the Indian Navy to command a warship of the Indian Navy, Western Fleet?

- Ans
- ☒ 1. Shaliza Dhami
 - ☒ 2. Prerna Deosthalee
 - ☒ 3. Apurva Gite
 - ☒ 4. Pooja Panda

Question ID : 630680513471
Option 1 ID : 6306802006579
Option 2 ID : 6306802006581
Option 3 ID : 6306802006580
Option 4 ID : 6306802006582
Status : Answered
Chosen Option : 1

Q.16 According to the final data of 2011 census, which of the following states/union territories has the highest population density in India?

- Ans
- ☒ 1. Lakshadweep
 - ☒ 2. Bihar
 - ☒ 3. Delhi
 - ☒ 4. Uttar Pradesh

Question ID : 630680513484
Option 1 ID : 6306802006632
Option 2 ID : 6306802006634
Option 3 ID : 6306802006631
Option 4 ID : 6306802006633
Status : Answered
Chosen Option : 4

Q.17 Which of the following is/are covered under tertiary sector of economics?

- Ans
- ☒ 1. Banking
 - ☒ 2. Fishing
 - ☒ 3. Forestry
 - ☒ 4. Agriculture

Question ID : 630680513473
Option 1 ID : 6306802006589
Option 2 ID : 6306802006590
Option 3 ID : 6306802006588
Option 4 ID : 6306802006587
Status : Answered
Chosen Option : 1

Q.18 Which of the following is the highest peak of India?

- Ans
- ☒ 1. Mount Everest
 - ☒ 2. Annapurna
 - ☒ 3. Dhaulagiri
 - ☒ 4. Kanchenjunga

Question ID : 630680513483
Option 1 ID : 6306802006627
Option 2 ID : 6306802006630
Option 3 ID : 6306802006629
Option 4 ID : 6306802006628
Status : Answered
Chosen Option : 4

Q.19 Which of the following is not a part of High Powered Money (H)?

- Ans
- ☒ 1. Currency held by the public(C)
 - ☒ 2. Cash reserves of banks(R)
 - ☒ 3. Money stored in ATMs
 - ☒ 4. Other deposits of RBI

Question ID : 630680513474
Option 1 ID : 6306802006591
Option 2 ID : 6306802006592
Option 3 ID : 6306802006594
Option 4 ID : 6306802006593
Status : Answered
Chosen Option : 1

Q.20 Based on the information available till November- 2023, which of the following states is not included under PM MITRA scheme?

- Ans
- ☒ 1. Madhya Pradesh
 - ☒ 2. Uttar Pradesh
 - ☒ 3. Rajasthan
 - ☒ 4. Maharashtra

Question ID : 630680513470
Option 1 ID : 6306802006578
Option 2 ID : 6306802006576
Option 3 ID : 6306802006575
Option 4 ID : 6306802006577
Status : Answered
Chosen Option : 3

Q.21 What does the "R" stand for in MAHASAGAR, the Indian Navy's outreach initiative among maritime heads?

- Ans
- ☒ 1. Region
 - ☒ 2. Reaction
 - ☒ 3. Response
 - ☒ 4. Rehearsal

Question ID : 630680513472
Option 1 ID : 6306802006583
Option 2 ID : 6306802006584
Option 3 ID : 6306802006586
Option 4 ID : 6306802006585
Status : Answered
Chosen Option : 3

Q.22 Which of the following is not a throwing sport event?

- Ans
- ☒ 1. Javelin
 - ☒ 2. Shot put
 - ☒ 3. Chess
 - ☒ 4. Discus

Question ID : 630680513488
Option 1 ID : 6306802006647
Option 2 ID : 6306802006650
Option 3 ID : 6306802006649
Option 4 ID : 6306802006648
Status : Answered
Chosen Option : 3

Q.23 Who appoints the Attorney General of India?

- Ans
- ☒ 1. President
 - ☒ 2. Chief Justice of India
 - ☒ 3. President along with the Prime Minister
 - ☒ 4. Prime Minister

Question ID : 630680513486
Option 1 ID : 6306802006641
Option 2 ID : 6306802006639
Option 3 ID : 6306802006642
Option 4 ID : 6306802006640
Status : Answered
Chosen Option : 1

Q.24 Which of the following states has won the most medals in the National Games 2023?

- Ans
- ☒ 1. Kerala
 - ☒ 2. Delhi
 - ☒ 3. Bihar
 - ☒ 4. Maharashtra

Question ID : 630680513490
Option 1 ID : 6306802006656
Option 2 ID : 6306802006655
Option 3 ID : 6306802006658
Option 4 ID : 6306802006657
Status : Answered
Chosen Option : 4

Q.25 What is 'VYOMITRA' developed by ISRO?

- Ans
- ☒ 1. India's first Moon mission
 - ☒ 2. India's first solar mission
 - ☒ 3. Female looking spacefaring humanoid robot
 - ☒ 4. India's first manned space station

Question ID : 630680513467
Option 1 ID : 6306802006563
Option 2 ID : 6306802006565
Option 3 ID : 6306802006564
Option 4 ID : 6306802006566
Status : Answered
Chosen Option : 2

Q.1 If a person walks at 13 km/hr instead of 10 km/hr, he would have walked 21 km more. The actual distance travelled by him is:

- Ans
- ☒ 1. 82 km.
 - ☒ 2. 70 km.
 - ☒ 3. 60 km.
 - ☒ 4. 85 km.

Question ID : 630680513511
Option 1 ID : 6306802006740
Option 2 ID : 6306802006741
Option 3 ID : 6306802006739
Option 4 ID : 6306802006742
Status : Answered
Chosen Option : 1

Q.2 $(86.84 + 129.16) \div 6^3 = 2.5 \times 4 + ?$

- Ans
- ☒ 1. 0.99
 - ☒ 2. 0.9
 - ☒ 3. -9
 - ☒ 4. 9

Question ID : 630680513500
Option 1 ID : 6306802006698
Option 2 ID : 6306802006697
Option 3 ID : 6306802006696
Option 4 ID : 6306802006695
Status : Answered
Chosen Option : 2

Q.3 The simple interest on a sum is $\frac{6}{11}$ of the principal for 5 years. What is the rate (in percentage) of interest per annum?

- Ans
- ☒ 1. 10.91%
 - ☒ 2. 11.51%
 - ☒ 3. 13.67%
 - ☒ 4. 9.28%

Question ID : 630680513492
Option 1 ID : 6306802006664
Option 2 ID : 6306802006665
Option 3 ID : 6306802006666
Option 4 ID : 6306802006663
Status : Answered
Chosen Option : 1



Q.4 There is 30% increase in an amount in 3 years at simple interest. What will be the compound interest of ₹ 15,300 after 2 years at the same rate?

Ans ✓ 1. ₹ 3213

✗ 2. ₹ 3456

✗ 3. ₹ 3546

✗ 4. ₹ 3325

Question ID : 630680513494

Option 1 ID : 6306802006671

Option 2 ID : 6306802006673

Option 3 ID : 6306802006674

Option 4 ID : 6306802006672

Status : Answered

Chosen Option : 3

Q.5 The ratio of the outer and the inner circumference of a circular path is 8:7. If path is 60 meters wide, then what is the radius of the inner circle?

Ans ✓ 1. 420 m

✗ 2. 300 m

✗ 3. 540 m

✗ 4. 320 m

Question ID : 630680513514

Option 1 ID : 6306802006754

Option 2 ID : 6306802006752

Option 3 ID : 6306802006753

Option 4 ID : 6306802006751

Status : Answered

Chosen Option : 1

Q.6 The ratio of the total amount distributed in all the males and females as salary is 13: 12. The ratio of the salary of each male and female is 7: 8. Find the ratio of the no. of males and females.

Ans ✗ 1. 15:11

✗ 2. 19:15

✓ 3. 26:21

✗ 4. 23:20

Question ID : 630680513508

Option 1 ID : 6306802006730

Option 2 ID : 6306802006729

Option 3 ID : 6306802006728

Option 4 ID : 6306802006727

Status : Answered

Chosen Option : 1



Q.7 $584.71 + 265.33 - 817.38 + 83.9 = ?$

- Ans
- ☒ 1. 109.67
 - ☒ 2. 116.56
 - ☒ 3. 114.35
 - ☒ 4. 111.25

Question ID : 630680513498
Option 1 ID : 6306802006690
Option 2 ID : 6306802006687
Option 3 ID : 6306802006688
Option 4 ID : 6306802006689
Status : Answered
Chosen Option : 2

Q.8 A shopkeeper sells an article for ₹ 249 with a loss of 17 %. Find the cost price of the article.

- Ans
- ☒ 1. ₹ 285
 - ☒ 2. ₹ 250
 - ☒ 3. ₹ 300
 - ☒ 4. ₹ 200

Question ID : 630680513504
Option 1 ID : 6306802006713
Option 2 ID : 6306802006712
Option 3 ID : 6306802006714
Option 4 ID : 6306802006711
Status : Answered
Chosen Option : 3

Q.9 A boat can travel with a speed of 12 km/hr in still water. If the speed of the stream is 4 km/hr, find the time taken by the boat to go 80 km downstream.

- Ans
- ☒ 1. 4 hours
 - ☒ 2. 8 hours
 - ☒ 3. 5 hours
 - ☒ 4. 2 hours

Question ID : 630680513512
Option 1 ID : 6306802006743
Option 2 ID : 6306802006744
Option 3 ID : 6306802006746
Option 4 ID : 6306802006745
Status : Answered
Chosen Option : 4

Q.10 Which of the following is the largest value?

Ans

✓ 1. $(0.2)^{-1}$

✗ 2. 0.0002

✗ 3. $1/2000$

✗ 4. 2.02

Question ID : 630680513497

Option 1 ID : 6306802006686

Option 2 ID : 6306802006683

Option 3 ID : 6306802006684

Option 4 ID : 6306802006685

Status : Answered

Chosen Option : 4

Q.11 There are 5 friends, and each of them has a different number of marbles. The number of marbles they have is 8, 12, 11, 15, and 19, respectively. What is the average number of marbles per friend?

Ans

✗ 1. 18

✗ 2. 15

✓ 3. 13

✗ 4. 9

Question ID : 630680513491

Option 1 ID : 6306802006662

Option 2 ID : 6306802006661

Option 3 ID : 6306802006660

Option 4 ID : 6306802006659

Status : Answered

Chosen Option : 3

Q.12 $6X2$ is a three-digit number in which X is a missing digit. If the number is divisible by 6, then find the minimum value of X.

Ans

✗ 1. 6

✗ 2. 8

✗ 3. 3

✓ 4. 1

Question ID : 630680513495

Option 1 ID : 6306802006677

Option 2 ID : 6306802006678

Option 3 ID : 6306802006676

Option 4 ID : 6306802006675

Status : Answered

Chosen Option : 3

Q.13 A: B: C is in the ratio of 5: 3: 8. How much money will C get out of Rs 1280?

- Ans
- ☐ 1. ₹ 200
 - ☐ 2. ₹ 580
 - ☐ 3. ₹ 350
 - ☒ 4. ₹ 640

Question ID : 630680513507
Option 1 ID : 6306802006724
Option 2 ID : 6306802006725
Option 3 ID : 6306802006723
Option 4 ID : 6306802006726
Status : Answered
Chosen Option : 4

Q.14 The price of rice falls by 6.25 %. By what percentage a person can increase the consumption of rice so that his overall budget does not change?

- Ans
- ☐ 1. 4.5%
 - ☐ 2. 7.56%
 - ☐ 3. 5.75%
 - ☒ 4. 6.67%

Question ID : 630680513501
Option 1 ID : 6306802006699
Option 2 ID : 6306802006702
Option 3 ID : 6306802006700
Option 4 ID : 6306802006701
Status : Answered
Chosen Option : 3

Q.15 The marked price on an item was ₹ 3800/- but the shopkeeper offered a double discount of 50% and 20%. How much did he finally sell the item for?

- Ans
- ☐ 1. ₹ 1800
 - ☐ 2. ₹ 1920
 - ☒ 3. ₹ 1520
 - ☐ 4. ₹ 2220

Question ID : 630680513506
Option 1 ID : 6306802006720
Option 2 ID : 6306802006722
Option 3 ID : 6306802006719
Option 4 ID : 6306802006721
Status : Answered
Chosen Option : 2

Q.16 The value of $\sqrt{0.16} + \sqrt{0.36} + \sqrt{0.0064} + \sqrt{0.0081}$.

- Ans
- ✓ 1. 2.004
 - ✗ 2. 1.0124
 - ✗ 3. 1.17
 - ✗ 4. 2.08

Question ID : 630680513499
Option 1 ID : 6306802006693
Option 2 ID : 6306802006691
Option 3 ID : 6306802006692
Option 4 ID : 6306802006694
Status : Answered
Chosen Option : 4

Q.17 Find the selling price if marked price = ₹ 3400 and Discount = 25%.

- Ans
- ✗ 1. ₹ 3400
 - ✓ 2. ₹ 2550
 - ✗ 3. ₹ 3050
 - ✗ 4. ₹ 2600

Question ID : 630680513505
Option 1 ID : 6306802006718
Option 2 ID : 6306802006717
Option 3 ID : 6306802006716
Option 4 ID : 6306802006715
Status : Answered
Chosen Option : 2

Q.18 The largest sphere to be curved out of a right circular cylinder of radius 6 cm and height 16 cm . Find the volume of the sphere.

- Ans
- ✗ 1. 840.15 cm^3
 - ✗ 2. 915.10 cm^3
 - ✓ 3. 905.14 cm^3
 - ✗ 4. 625.23 cm^3

Question ID : 630680513513
Option 1 ID : 6306802006750
Option 2 ID : 6306802006749
Option 3 ID : 6306802006748
Option 4 ID : 6306802006747
Status : Answered
Chosen Option : 2

Q.19 Selling price of 16 candles is same as Cost price of 24 candles. Find the gain percent.

- Ans
- ☐ 1. 22.22%
 - ☐ 2. 11.11%
 - ☒ 3. 33.33%
 - ☐ 4. 44.44%

Question ID : 630680513503
Option 1 ID : 6306802006708
Option 2 ID : 6306802006707
Option 3 ID : 6306802006709
Option 4 ID : 6306802006710
Status : Answered
Chosen Option : 3

Q.20 Two pipes can fill a tank in 4 hours and 6 hours respectively. A third pipe can empty the same tank in 10 hours. If all the pipes start working together, how long it will take to fill the tank?

- Ans
- ☐ 1. 28/39 hrs.
 - ☐ 2. 24/19 hrs.
 - ☐ 3. 19/60 hrs.
 - ☒ 4. 60/19 hrs.

Question ID : 630680513510
Option 1 ID : 6306802006738
Option 2 ID : 6306802006735
Option 3 ID : 6306802006736
Option 4 ID : 6306802006737
Status : Answered
Chosen Option : 4

Q.21 To pack a set of books, shobit got cartons of a certain height that were 32 inches long and 20 inches wide. If the volume of such a carton was 20 cubic feet, what was the height of each carton? [Use 1 foot = 12 inches.]

- Ans
- ☐ 1. 40 inches
 - ☐ 2. 38 inches
 - ☐ 3. 42 inches
 - ☒ 4. 54 inches

Question ID : 630680513515
Option 1 ID : 6306802006758
Option 2 ID : 6306802006755
Option 3 ID : 6306802006756
Option 4 ID : 6306802006757
Status : Answered
Chosen Option : 2



Q.22 The current birth rate per thousand is 29.4, whereas corresponding death rate is 14.4 per thousand. Find the net growth rate in terms of population increase in percent.

- Ans**
- ☒ 1. 2.6%
 - ☒ 2. 1.5%
 - ☒ 3. 3.2%
 - ☒ 4. 2%

Question ID : 630680513502
Option 1 ID : 6306802006704
Option 2 ID : 6306802006706
Option 3 ID : 6306802006703
Option 4 ID : 6306802006705
Status : Answered
Chosen Option : 1

Q.23 Which is the largest 4-digit number that can be exactly divisible by 35?

- Ans**
- ☒ 1. 9975
 - ☒ 2. 9977
 - ☒ 3. 9982
 - ☒ 4. 9970

Question ID : 630680513496
Option 1 ID : 6306802006681
Option 2 ID : 6306802006680
Option 3 ID : 6306802006679
Option 4 ID : 6306802006682
Status : Answered
Chosen Option : 1

Q.24 What is the compound interest on a sum of ₹ 11250 at 12% per annum in 2 years, if the interest is compound 8-monthly?

- Ans**
- ☒ 1. ₹ 2821
 - ☒ 2. ₹ 2922
 - ☒ 3. ₹ 2879
 - ☒ 4. ₹ 2780

Question ID : 630680513493
Option 1 ID : 6306802006668
Option 2 ID : 6306802006670
Option 3 ID : 6306802006669
Option 4 ID : 6306802006667
Status : Answered
Chosen Option : 2

Q.25 Anusha can do a work in 24 days and preeti in 14 days. If they work on it together for 8 days, then the fraction of the work that is left is :

- Ans**
- ☒ 1. 19/21
 - ☒ 2. 2/21
 - ☒ 3. 5/21
 - ☒ 4. 12/21

Question ID : 630680513509
Option 1 ID : 6306802006732
Option 2 ID : 6306802006731
Option 3 ID : 6306802006733
Option 4 ID : 6306802006734
Status : Answered
Chosen Option : 1

Section : Reasoning

Q.1 In a certain code language, HOME is written as IONE and ROOF is written as SOOG. How CARE will be written in the same code?

- Ans**
- ☒ 1. DASE
 - ☒ 2. SEAD
 - ☒ 3. DAES
 - ☒ 4. SADE

Question ID : 630680513516
Option 1 ID : 6306802006759
Option 2 ID : 6306802006762
Option 3 ID : 6306802006760
Option 4 ID : 6306802006761
Status : Answered
Chosen Option : 1

Q.2 What will come in place of the question marks (?) to make the series given below logically complete?

13, 28, 49, 64, 85, ??

- Ans**
- ☒ 1. 81, 96
 - ☒ 2. 121, 100
 - ☒ 3. 96, 81
 - ☒ 4. 100, 121

Question ID : 630680513537
Option 1 ID : 6306802006844
Option 2 ID : 6306802006846
Option 3 ID : 6306802006843
Option 4 ID : 6306802006845
Status : Answered
Chosen Option : 4

Q.3 What will come in the place of question marks (??) to make the following series logically complete?

ZA 21, YZ 42, XY 63, WX 84 ??

- Ans
- ☒ 1. WV 105
 - ☒ 2. VU 105
 - ☒ 3. VW 105
 - ☒ 4. UV 105

Question ID : 630680513525
Option 1 ID : 6306802006795
Option 2 ID : 6306802006798
Option 3 ID : 6306802006796
Option 4 ID : 6306802006797
Status : Answered
Chosen Option : 3

Q.4 Pointing towards a picture, Jyoti says that the man in the picture is the only son-in-law of my father's wife. How is Jyoti related to the man in the photograph?

- Ans
- ☒ 1. Wife
 - ☒ 2. Niece
 - ☒ 3. Sister
 - ☒ 4. Husband

Question ID : 630680513518
Option 1 ID : 6306802006768
Option 2 ID : 6306802006770
Option 3 ID : 6306802006769
Option 4 ID : 6306802006767
Status : Answered
Chosen Option : 4

Q.5 How is Seema related to the only daughter of Seema's brother's father's wife?

- Ans
- ☒ 1. Grandmother
 - ☒ 2. Sister
 - ☒ 3. Brother
 - ☒ 4. Seema her Self

Question ID : 630680513519
Option 1 ID : 6306802006771
Option 2 ID : 6306802006773
Option 3 ID : 6306802006772
Option 4 ID : 6306802006774
Status : Answered
Chosen Option : 4

Q.6 In a certain code language, RACE is written as 27 and TRACK is written as 53. How SPEED will be written in the same code?

- Ans
- ☒ 1. 48
 - ☒ 2. 50
 - ☒ 3. 47
 - ☒ 4. 49

Question ID : 630680513517
Option 1 ID : 6306802006764
Option 2 ID : 6306802006766
Option 3 ID : 6306802006763
Option 4 ID : 6306802006765
Status : Answered
Chosen Option : 4

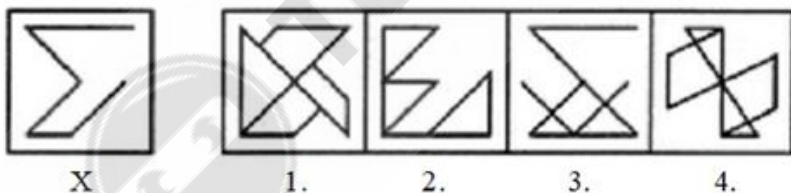
Q.7 If '+' means '-', '*' means '/', '-' means '+' and '/' means '*' then find out the answer of the following expression.

$$8 / 8 + 10 - 30 \times 3$$

- Ans
- ☒ 1. 61
 - ☒ 2. 67
 - ☒ 3. 64
 - ☒ 4. 57

Question ID : 630680513539
Option 1 ID : 6306802006852
Option 2 ID : 6306802006854
Option 3 ID : 6306802006853
Option 4 ID : 6306802006851
Status : Answered
Chosen Option : 3

Q.8 Which of the following option will embed the original image (X)?



- Ans
- ☒ 1. 3
 - ☒ 2. 4
 - ☒ 3. 1
 - ☒ 4. 2

Question ID : 630680513531
Option 1 ID : 6306802006821
Option 2 ID : 6306802006822
Option 3 ID : 6306802006819
Option 4 ID : 6306802006820
Status : Answered
Chosen Option : 3




Q.9 Which of the following options is different from the other three options?

- Ans
- ☒ 1. Brinjal
 - ☒ 2. Ladyfinger
 - ☒ 3. Potato
 - ☒ 4. Mango

Question ID : 630680513523
Option 1 ID : 6306802006790
Option 2 ID : 6306802006789
Option 3 ID : 6306802006787
Option 4 ID : 6306802006788

Status : Answered
Chosen Option : 4

Q.10 Which of the following options will replace the question mark in the given figure below?



- Ans
- ☒ 1. 3
 - ☒ 2. 4
 - ☒ 3. 2
 - ☒ 4. 1

Question ID : 630680513529
Option 1 ID : 6306802006813
Option 2 ID : 6306802006814
Option 3 ID : 6306802006812
Option 4 ID : 6306802006811

Status : Answered
Chosen Option : 2

Q.11 Which of the following options will replace the question mark in the given figure below?



- Ans
- ☒ 1. 4
 - ☒ 2. 1
 - ☒ 3. 3
 - ☒ 4. 2

Question ID : 630680513530
Option 1 ID : 6306802006818
Option 2 ID : 6306802006815
Option 3 ID : 6306802006817
Option 4 ID : 6306802006816

Status : Answered
Chosen Option : 4



Q.12 Which among the following option will replace the question mark on the basis of sportsperson and sports?

Dhyan Chand : Hockey :: Sharath Kamal : ?

- Ans
- ☐ 1. Chess
 - ☐ 2. Badminton
 - ☒ 3. Table Tennis
 - ☐ 4. Hockey

Question ID : 630680513521
Option 1 ID : 6306802006782
Option 2 ID : 6306802006779
Option 3 ID : 6306802006781
Option 4 ID : 6306802006780
Status : Answered
Chosen Option : 3

Q.13 Which among the following option will replace the question mark on the basis of human body Part and disease?

Eye : Myopia :: Intestine : ?

- Ans
- ☐ 1. TB
 - ☒ 2. Colitis
 - ☐ 3. Cirrhosis
 - ☐ 4. Conjunctivitis

Question ID : 630680513520
Option 1 ID : 6306802006777
Option 2 ID : 6306802006775
Option 3 ID : 6306802006778
Option 4 ID : 6306802006776
Status : Answered
Chosen Option : 2

Q.14 How many such symbols are there in the series which are followed by numbers?

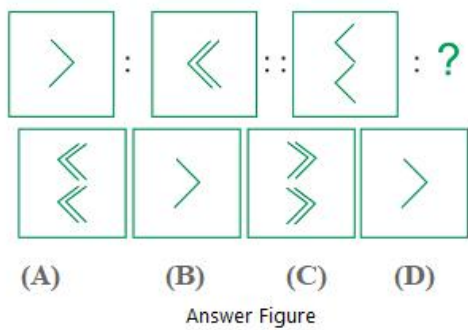
6 G # L 7 F % 5 B # 4 C 1 L S 6 M 7 B 3 S M @ 6 K 5 @

- Ans
- ☐ 1. 3
 - ☐ 2. 6
 - ☒ 3. 4
 - ☐ 4. 5

Question ID : 630680513527
Option 1 ID : 6306802006803
Option 2 ID : 6306802006806
Option 3 ID : 6306802006804
Option 4 ID : 6306802006805
Status : Answered
Chosen Option : 4



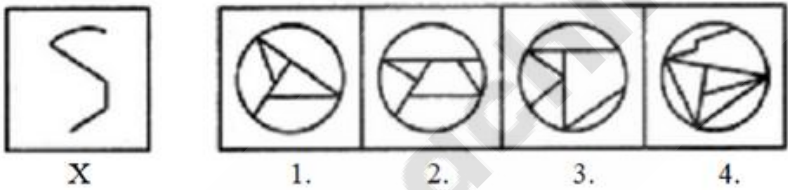
Q.15 Which of the following 4 answer figures will replace the question mark?



- Ans
- ☒ 1. B
 - ☒ 2. A
 - ☒ 3. C
 - ☒ 4. D

Question ID : 630680513536
Option 1 ID : 6306802006840
Option 2 ID : 6306802006839
Option 3 ID : 6306802006841
Option 4 ID : 6306802006842
Status : Answered
Chosen Option : 3

Q.16 Which of the following option will embed the original image (X)?



- Ans
- ☒ 1. 1
 - ☒ 2. 4
 - ☒ 3. 3
 - ☒ 4. 2

Question ID : 630680513532
Option 1 ID : 6306802006823
Option 2 ID : 6306802006826
Option 3 ID : 6306802006825
Option 4 ID : 6306802006824
Status : Answered
Chosen Option : 2

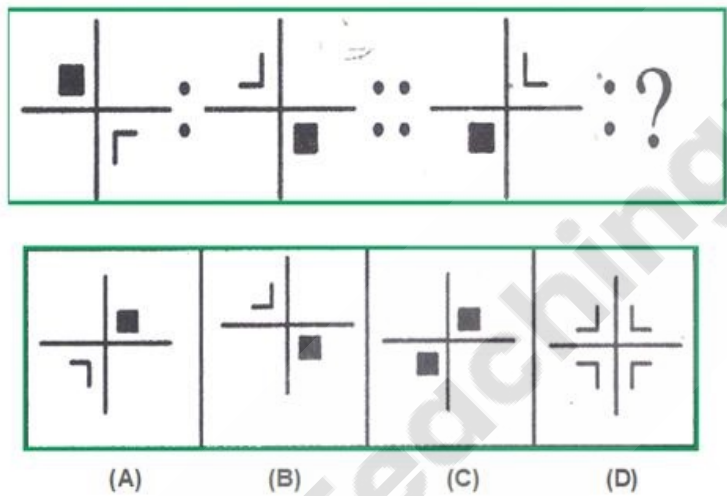
Q.17 Which of the following option closely resembles the following mirror image NATIONAL?

- NATIONAL
(1) JANOILAI (2) JANOITAI
(3) JANOITAI (4) LAIOITAI

Ans ☒ 1. 1
☒ 2. 4
☒ 3. 2
☒ 4. 3

Question ID : 630680513533
Option 1 ID : 6306802006827
Option 2 ID : 6306802006830
Option 3 ID : 6306802006828
Option 4 ID : 6306802006829
Status : Answered
Chosen Option : 2

Q.18 Which of the following 4 answer figures will replace the question mark ?



Ans ☒ 1. A
☒ 2. B
☒ 3. D
☒ 4. C

Question ID : 630680513535
Option 1 ID : 6306802006835
Option 2 ID : 6306802006836
Option 3 ID : 6306802006838
Option 4 ID : 6306802006837
Status : Answered
Chosen Option : 1

Q.19 Which of the following option closely resembles the following mirror image GEOGRAPHY?

GEOGRAPHY

(1) YHƆAƆGƆƆƆ (2) YHPARGOEG

(3) ʎHƆAƆGƆƆƆ (4) YHƆAƆGƆƆƆ

Ans ☒ 1. 2

☒ 2. 4

☒ 3. 1

☒ 4. 3

Question ID : 630680513534

Option 1 ID : 6306802006832

Option 2 ID : 6306802006834

Option 3 ID : 6306802006831

Option 4 ID : 6306802006833

Status : Answered

Chosen Option : 2

Q.20 How many such letters are there in the series which are preceded by numbers?

4 B @ D 4 G 6 # F % G & * N 6 A 3 S G @ 5 F 3 @ H 3

Ans ☒ 1. 3

☒ 2. 4

☒ 3. 2

☒ 4. 5

Question ID : 630680513528

Option 1 ID : 6306802006808

Option 2 ID : 6306802006809

Option 3 ID : 6306802006807

Option 4 ID : 6306802006810

Status : Answered

Chosen Option : 1

Q.21 If P>Q>R>S>T>U>V, then which among the following is biggest in the given series?

Ans ☒ 1. S

☒ 2. Q

☒ 3. P

☒ 4. U

Question ID : 630680513526

Option 1 ID : 6306802006801

Option 2 ID : 6306802006800

Option 3 ID : 6306802006802

Option 4 ID : 6306802006799

Status : Answered

Chosen Option : 3

Q.22 What will come in place of the question marks (?) to make the series given below logically complete?

9, 4, 8, 3, 6, 1, 2, ??

- Ans
- ✓ 1. -3, 6
 - ✗ 2. 6, -3
 - ✗ 3. 6, 3
 - ✗ 4. 3, 6

Question ID : 630680513538
Option 1 ID : 6306802006848
Option 2 ID : 6306802006847
Option 3 ID : 6306802006850
Option 4 ID : 6306802006849

Status : Answered
Chosen Option : 4

Q.23 Which of the following options is different from the other three options on the basis of sports and their respective players?

- Ans
- ✗ 1. Mahesh Bhupati
 - ✗ 2. Vijay Amritraj
 - ✗ 3. Rohan Bopanna
 - ✓ 4. Ankita Raina

Question ID : 630680513524
Option 1 ID : 6306802006794
Option 2 ID : 6306802006792
Option 3 ID : 6306802006791
Option 4 ID : 6306802006793

Status : Answered
Chosen Option : 3

Q.24 Which of the following options is different from the other three options on the basis of cities and their respective countries?

- Ans
- ✓ 1. Bhubaneswar
 - ✗ 2. Berlin
 - ✗ 3. Buenos Aires
 - ✗ 4. Bucharest

Question ID : 630680513522
Option 1 ID : 6306802006785
Option 2 ID : 6306802006783
Option 3 ID : 6306802006786
Option 4 ID : 6306802006784

Status : Answered
Chosen Option : 1

Q.25 If '+' means '-', 'x' means '/', '-' means '+' and '/' means 'x' then find out the answer of the following expression.

$9 / 9 + 15 - 35 \times 5$

- Ans
- ☒ 1. 71
 - ☒ 2. 68
 - ☒ 3. 69
 - ☒ 4. 73

Question ID : 630680513540
Option 1 ID : 6306802006857
Option 2 ID : 6306802006855
Option 3 ID : 6306802006856
Option 4 ID : 6306802006858
Status : Answered
Chosen Option : 4

Section : General English

Q.1 Fill in the blank with the correct word from the below options.
Media plays a crucial role in shaping modern society by providing us with news, entertainment, and a _____ for exchanging ideas and opinions.

- Ans
- ☒ 1. concern
 - ☒ 2. ensure
 - ☒ 3. platform
 - ☒ 4. office

Question ID : 630680513560
Option 1 ID : 6306802006935
Option 2 ID : 6306802006938
Option 3 ID : 6306802006936
Option 4 ID : 6306802006937
Status : Answered
Chosen Option : 2

Q.2 The following sentence has been divided into parts. One of them may contain an error.
Select the part that contains the prepositions error from the given options.
The/ river/ divides the/ city/ about/ two parts.

- Ans
- ☒ 1. divides the
 - ☒ 2. two parts
 - ☒ 3. about
 - ☒ 4. The

Question ID : 630680513544
Option 1 ID : 6306802006872
Option 2 ID : 6306802006874
Option 3 ID : 6306802006873
Option 4 ID : 6306802006871
Status : Answered
Chosen Option : 1

Q.3 Select the appropriate article from the below options to complete the sentence. Mark "No article" if there is no requirement of article in the given sentence.
We spent all our money because we stayed at _____ most expensive hotel in town.

- Ans
- ☒ 1. an
 - ☒ 2. a
 - ☒ 3. No article
 - ☒ 4. the

Question ID : 630680513542
Option 1 ID : 6306802006866
Option 2 ID : 6306802006863
Option 3 ID : 6306802006864
Option 4 ID : 6306802006865
Status : Answered
Chosen Option : 4

Q.4 In the below sentence one of the words has been misspelt. Choose from the below given options that spells the word in bold correctly.
The Arctic is potentially warming as much as four times faster than the rest of the globe, partly because the region lacks a solid landmass. Instead, it's made of perennially frozen solid ice floating above the Arctic Ocean. But as this ice increasingly shrinks, the ocean absorbs more warm sunlight, (acelerating) global climate change.

- Ans
- ☒ 1. acceleerating
 - ☒ 2. accelerating
 - ☒ 3. acceelerating
 - ☒ 4. acceleratting

Question ID : 630680513549
Option 1 ID : 6306802006893
Option 2 ID : 6306802006892
Option 3 ID : 6306802006891
Option 4 ID : 6306802006894
Status : Answered
Chosen Option : 2

Q.5 Select the most appropriate SYNONYM of the word highlighted/ given in brackets in the below sentence.
Individuals can also be targeted by cybercriminals, using computers to (exploit) their weaknesses and cause psychological damage.

- Ans
- ☒ 1. ignore
 - ☒ 2. neglect
 - ☒ 3. destruction
 - ☒ 4. manipulate

Question ID : 630680513555
Option 1 ID : 6306802006916
Option 2 ID : 6306802006917
Option 3 ID : 6306802006918
Option 4 ID : 6306802006915
Status : Answered
Chosen Option : 4

Q.6 Fill in the blank with the correct word from the below options.
Scientists have studied past climate changes to understand the factors that can _____ the planet to warm or cool.

- Ans
- ☒ 1. recycle
 - ☒ 2. delayed
 - ☒ 3. choking
 - ☒ 4. cause

Question ID : 630680513558
Option 1 ID : 6306802006927
Option 2 ID : 6306802006930
Option 3 ID : 6306802006928
Option 4 ID : 6306802006929
Status : Answered
Chosen Option : 4

Q.7 In the following question a statement has been given with highlighted text. You are required to replace the text with correct Idioms given in the options.
Annie was disappointed she couldn't go to the party, but after everyone who attended got food poisoning, it turned out to be (an apparently bad thing that turned out to be good in some way).

- Ans
- ☒ 1. on a thin ice
 - ☒ 2. burn the bridges
 - ☒ 3. a blessing in disguise
 - ☒ 4. add fuel to the fire

Question ID : 630680513551
Option 1 ID : 6306802006901
Option 2 ID : 6306802006899
Option 3 ID : 6306802006900
Option 4 ID : 6306802006902
Status : Answered
Chosen Option : 3

Q.8 Fill in the blank with the correct word from the below options.
Farmers' organisations have criticised the _____ increase in minimum support price for all the Rabi crops.

- Ans
- ☒ 1. meagre
 - ☒ 2. sufficient
 - ☒ 3. incredible
 - ☒ 4. inefficient

Question ID : 630680513556
Option 1 ID : 6306802006921
Option 2 ID : 6306802006920
Option 3 ID : 6306802006919
Option 4 ID : 6306802006922
Status : Answered
Chosen Option : 2

Q.9 Select the most appropriate SYNONYM of the word highlighted/ given in brackets in the below sentence.
Climate change is going to impact the world (significantly) and negatively.

- Ans ☒ 1. barely
☒ 2. considerably
☒ 3. little
☒ 4. just

Question ID : 630680513554
Option 1 ID : 6306802006914
Option 2 ID : 6306802006913
Option 3 ID : 6306802006912
Option 4 ID : 6306802006911
Status : Answered
Chosen Option : 2

Q.10 Choose the most appropriate one-word substitution for the below word.
"A planned route or journey"

- Ans ☒ 1. spontaneous
☒ 2. extempore
☒ 3. itinerary
☒ 4. impromptu

Question ID : 630680513547
Option 1 ID : 6306802006884
Option 2 ID : 6306802006886
Option 3 ID : 6306802006885
Option 4 ID : 6306802006883
Status : Answered
Chosen Option : 1

Q.11 Select the most appropriate SYNONYM of the word highlighted/ given in brackets in the below sentence.
Despite the remarkable advancements observed in the global economies, there has been a (persistent) decline in the labour force participation rate (LFPR) of women in developing nations.

- Ans ☒ 1. stagnant
☒ 2. false
☒ 3. hesitant
☒ 4. Constant

Question ID : 630680513553
Option 1 ID : 6306802006909
Option 2 ID : 6306802006908
Option 3 ID : 6306802006907
Option 4 ID : 6306802006910
Status : Answered
Chosen Option : 4

Q.12 Fill in the blank with the correct word from the below options.
Cybercrime can have a significant impact on businesses and individuals, _____ to financial losses and damage to reputation.

- Ans
- ☒ 1. minimizing
 - ☒ 2. includes
 - ☒ 3. implementing
 - ☒ 4. leading

Question ID : 630680513559
Option 1 ID : 6306802006931
Option 2 ID : 6306802006933
Option 3 ID : 6306802006932
Option 4 ID : 6306802006934
Status : Answered
Chosen Option : 4

Q.13 In the following question a statement has been given with highlighted text. You are required to replace the text with correct Idioms given in the options.
Ramesh thought Ashok was the one who broke the vase, but he was (looking for the answers at the wrong place).

- Ans
- ☒ 1. barking up the wrong tree
 - ☒ 2. Don't cry over spilt milk
 - ☒ 3. bigger fish to fry
 - ☒ 4. call it a day

Question ID : 630680513550
Option 1 ID : 6306802006897
Option 2 ID : 6306802006896
Option 3 ID : 6306802006895
Option 4 ID : 6306802006898
Status : Answered
Chosen Option : 1

Q.14 Choose the most appropriate one-word substitution for the below word.
"Constant effort to achieve something"

- Ans
- ☒ 1. Disbelief
 - ☒ 2. inactive
 - ☒ 3. perseverance
 - ☒ 4. doubtful

Question ID : 630680513545
Option 1 ID : 6306802006875
Option 2 ID : 6306802006877
Option 3 ID : 6306802006876
Option 4 ID : 6306802006878
Status : Answered
Chosen Option : 3

Q.15 In the below sentence one of the words has been misspelt. Choose from the below given options that spells the word in bold correctly.
Just 2°C may not sound like a large increase, but scientists say it has potential to cause extreme weather around the world and (destabilize) the climate.

- Ans
- ☒ 1. destabiliize
 - ☒ 2. destabilize
 - ☒ 3. destebilize
 - ☒ 4. destabalize

Question ID : 630680513548
Option 1 ID : 6306802006889
Option 2 ID : 6306802006890
Option 3 ID : 6306802006888
Option 4 ID : 6306802006887
Status : Answered
Chosen Option : 4

Q.16 Fill in the blank with the correct word from the below options.
Human trafficking is a global crime that trades in people and ____ them for profit.

- Ans
- ☒ 1. ignores
 - ☒ 2. exploits
 - ☒ 3. appropriate
 - ☒ 4. illegal

Question ID : 630680513557
Option 1 ID : 6306802006923
Option 2 ID : 6306802006924
Option 3 ID : 6306802006925
Option 4 ID : 6306802006926
Status : Answered
Chosen Option : 4

Q.17 Choose the most appropriate one-word substitution for the below word.
"examination of tissue removed from a living body to discover the presence, cause, or extent of a disease"

- Ans
- ☒ 1. Imposter
 - ☒ 2. Platoon
 - ☒ 3. biopsy
 - ☒ 4. postmortem

Question ID : 630680513546
Option 1 ID : 6306802006880
Option 2 ID : 6306802006882
Option 3 ID : 6306802006881
Option 4 ID : 6306802006879
Status : Answered
Chosen Option : 1

Q.18 In the following question a statement has been given with highlighted text. You are required to replace the text with correct Idioms given in the options.
Ms. Ramirez used to be opposed to allowing dogs at school, but she's had (a change in her opinion about this).

- Ans
- ☒ 1. Costs an arm and a leg
 - ☒ 2. a change of heart
 - ☒ 3. Chip off the old block
 - ☒ 4. Drag your feet

Question ID : 630680513552
Option 1 ID : 6306802006904
Option 2 ID : 6306802006905
Option 3 ID : 6306802006903
Option 4 ID : 6306802006906
Status : Answered
Chosen Option : 2

Q.19 The following sentence has been divided into parts. One of them may contain an error. Select the part that contains the prepositions error from the given options.
She/ works/ quite hard. /You can't/ accuse/ her /from being/ lazy.

- Ans
- ☒ 1. You can't
 - ☒ 2. from being
 - ☒ 3. lazy
 - ☒ 4. her

Question ID : 630680513543
Option 1 ID : 6306802006867
Option 2 ID : 6306802006870
Option 3 ID : 6306802006869
Option 4 ID : 6306802006868
Status : Answered
Chosen Option : 2

Q.20 Select the appropriate article from the below options to complete the sentence. Mark "No article" if there is no requirement of article in the given sentence.
Did you have a nice holiday? Yes, it was _____ best holiday I've ever had.

- Ans
- ☒ 1. a
 - ☒ 2. an
 - ☒ 3. No article
 - ☒ 4. the

Question ID : 630680513541
Option 1 ID : 6306802006859
Option 2 ID : 6306802006862
Option 3 ID : 6306802006861
Option 4 ID : 6306802006860
Status : Answered
Chosen Option : 4

Comprehension:

Refer to the below passage and answer the questions.

In today's fast-paced and demanding world, rules and regulations are essential in both small and large environments. Without these institutions, life would be much more difficult, and people would do as they please without consequences.

Rules and regulations are present in every aspect of life. In educational institutions, students must follow a set of rules. In the workplace, employees and employers must comply with employment regulations. In social and family gatherings, there are unwritten rules of behaviour. Even in our homes, parents make house rules for their children.

These regulations ensure the smooth functioning of society. They prevent chaos from prevailing and ensure that everyone adheres to a set of expected behaviours. Rules guarantee fair treatment for workers and fair play on the playing fields. They also ensure that no person or group may take advantage of others and that everyone respects each other's rights and property. This creates harmonious living conditions and establishes a basis for discipline so that children can be guided and socialised. Although some rules may appear childish and ridiculous, such as the penalties imposed on littering and vandalism, they are justifiable. Such regulations address the actions of thoughtless and inconsiderate individuals who may negatively impact the peace-loving majority of the community. Without the existence of rules and laws, respect for human life may be lost. Criminals and gangs could take over society, and the strong may take advantage of the weak.

Therefore, even though we may find some rules difficult to accept, we must acknowledge their importance. Rules and regulations contribute to better living conditions, and without laws and legislation, freedom would not be possible.

SubQuestion No : 21

Q.21 Select the most appropriate **SYNONYM** of the given word below.
harmonious

- Ans ☒ 1. peaceful
 ☐ 2. opposite
 ☐ 3. incompatible
 ☐ 4. hostile

Question ID : 630680513565
Option 1 ID : 6306802006953
Option 2 ID : 6306802006954
Option 3 ID : 6306802006952
Option 4 ID : 6306802006951
Status : Answered
Chosen Option : 1



Comprehension:

Refer to the below passage and answer the questions.

In today's fast-paced and demanding world, rules and regulations are essential in both small and large environments. Without these institutions, life would be much more difficult, and people would do as they please without consequences.

Rules and regulations are present in every aspect of life. In educational institutions, students must follow a set of rules. In the workplace, employees and employers must comply with employment regulations. In social and family gatherings, there are unwritten rules of behaviour. Even in our homes, parents make house rules for their children.

These regulations ensure the smooth functioning of society. They prevent chaos from prevailing and ensure that everyone adheres to a set of expected behaviours. Rules guarantee fair treatment for workers and fair play on the playing fields. They also ensure that no person or group may take advantage of others and that everyone respects each other's rights and property. This creates harmonious living conditions and establishes a basis for discipline so that children can be guided and socialised. Although some rules may appear childish and ridiculous, such as the penalties imposed on littering and vandalism, they are justifiable. Such regulations address the actions of thoughtless and inconsiderate individuals who may negatively impact the peace-loving majority of the community. Without the existence of rules and laws, respect for human life may be lost. Criminals and gangs could take over society, and the strong may take advantage of the weak.

Therefore, even though we may find some rules difficult to accept, we must acknowledge their importance. Rules and regulations contribute to better living conditions, and without laws and legislation, freedom would not be possible.

SubQuestion No : 22

Q.22 Identify the suitable title for the passage.

- Ans ☒ 1. The Necessity of Rules and Regulations in Society
- ☐ 2. Society and its unnecessary rules
- ☐ 3. Criminals and Gangs
- ☐ 4. Rules & regulations- Major obstacle in freedom

Question ID : 630680513562
Option 1 ID : 6306802006941
Option 2 ID : 6306802006939
Option 3 ID : 6306802006940
Option 4 ID : 6306802006942
Status : Answered
Chosen Option : 1



Comprehension:

Refer to the below passage and answer the questions.

In today's fast-paced and demanding world, rules and regulations are essential in both small and large environments. Without these institutions, life would be much more difficult, and people would do as they please without consequences.

Rules and regulations are present in every aspect of life. In educational institutions, students must follow a set of rules. In the workplace, employees and employers must comply with employment regulations. In social and family gatherings, there are unwritten rules of behaviour. Even in our homes, parents make house rules for their children.

These regulations ensure the smooth functioning of society. They prevent chaos from prevailing and ensure that everyone adheres to a set of expected behaviours. Rules guarantee fair treatment for workers and fair play on the playing fields. They also ensure that no person or group may take advantage of others and that everyone respects each other's rights and property. This creates harmonious living conditions and establishes a basis for discipline so that children can be guided and socialised. Although some rules may appear childish and ridiculous, such as the penalties imposed on littering and vandalism, they are justifiable. Such regulations address the actions of thoughtless and inconsiderate individuals who may negatively impact the peace-loving majority of the community. Without the existence of rules and laws, respect for human life may be lost. Criminals and gangs could take over society, and the strong may take advantage of the weak.

Therefore, even though we may find some rules difficult to accept, we must acknowledge their importance. Rules and regulations contribute to better living conditions, and without laws and legislation, freedom would not be possible.

SubQuestion No : 23

Q.23 Select the most appropriate **ANTONYM** of the given word below.
inconsiderate

- Ans** ☒ 1. disrespectful
 ☒ 2. Polite
 ☒ 3. rude
 ☒ 4. arrogant

Question ID : 630680513566
Option 1 ID : 6306802006957
Option 2 ID : 6306802006958
Option 3 ID : 6306802006956
Option 4 ID : 6306802006955
Status : Answered
Chosen Option : 2



Comprehension:

Refer to the below passage and answer the questions.

In today's fast-paced and demanding world, rules and regulations are essential in both small and large environments. Without these institutions, life would be much more difficult, and people would do as they please without consequences.

Rules and regulations are present in every aspect of life. In educational institutions, students must follow a set of rules. In the workplace, employees and employers must comply with employment regulations. In social and family gatherings, there are unwritten rules of behaviour. Even in our homes, parents make house rules for their children.

These regulations ensure the smooth functioning of society. They prevent chaos from prevailing and ensure that everyone adheres to a set of expected behaviours. Rules guarantee fair treatment for workers and fair play on the playing fields. They also ensure that no person or group may take advantage of others and that everyone respects each other's rights and property. This creates harmonious living conditions and establishes a basis for discipline so that children can be guided and socialised. Although some rules may appear childish and ridiculous, such as the penalties imposed on littering and vandalism, they are justifiable. Such regulations address the actions of thoughtless and inconsiderate individuals who may negatively impact the peace-loving majority of the community. Without the existence of rules and laws, respect for human life may be lost. Criminals and gangs could take over society, and the strong may take advantage of the weak.

Therefore, even though we may find some rules difficult to accept, we must acknowledge their importance. Rules and regulations contribute to better living conditions, and without laws and legislation, freedom would not be possible.

SubQuestion No : 24

Q.24 Identify the central theme of the passage.

- Ans ☒ 1. Rules and regulations contribute to better living conditions, and without laws and legislation, freedom would not be possible.
- ☐ 2. Rules and regulations are not present in every aspect of life and is not needed as well.
- ☐ 3. The regulations doesn't ensure the smooth functioning of society always and sometimes creates chaos as well.
- ☐ 4. A lot of rules are difficult to be accepted and thus should be avoided at all costs.

Question ID : 630680513563

Option 1 ID : 6306802006946

Option 2 ID : 6306802006945

Option 3 ID : 6306802006944

Option 4 ID : 6306802006943

Status : Answered

Chosen Option : 3



Comprehension:

Refer to the below passage and answer the questions.

In today's fast-paced and demanding world, rules and regulations are essential in both small and large environments. Without these institutions, life would be much more difficult, and people would do as they please without consequences.

Rules and regulations are present in every aspect of life. In educational institutions, students must follow a set of rules. In the workplace, employees and employers must comply with employment regulations. In social and family gatherings, there are unwritten rules of behaviour. Even in our homes, parents make house rules for their children.

These regulations ensure the smooth functioning of society. They prevent chaos from prevailing and ensure that everyone adheres to a set of expected behaviours. Rules guarantee fair treatment for workers and fair play on the playing fields. They also ensure that no person or group may take advantage of others and that everyone respects each other's rights and property. This creates harmonious living conditions and establishes a basis for discipline so that children can be guided and socialised. Although some rules may appear childish and ridiculous, such as the penalties imposed on littering and vandalism, they are justifiable. Such regulations address the actions of thoughtless and inconsiderate individuals who may negatively impact the peace-loving majority of the community. Without the existence of rules and laws, respect for human life may be lost. Criminals and gangs could take over society, and the strong may take advantage of the weak.

Therefore, even though we may find some rules difficult to accept, we must acknowledge their importance. Rules and regulations contribute to better living conditions, and without laws and legislation, freedom would not be possible.

SubQuestion No : 25

Q.25 Select the most appropriate SYNONYM of the given word below.
essential

- Ans ☒ 1. necessary
☐ 2. extra
☐ 3. unwanted
☐ 4. nonessential

Question ID : 630680513564
Option 1 ID : 6306802006950
Option 2 ID : 6306802006947
Option 3 ID : 6306802006948
Option 4 ID : 6306802006949
Status : Answered
Chosen Option : 1

Section : General Hindi

Q.1 निम्नलिखित कहावत को पूर्ण करने के लिए रिक्त स्थान की पूर्ति करें:-
"तू डाल-डाल ____ पात - पात।"

- Ans ☐ 1. वे
☐ 2. यहाँ
☒ 3. मैं
☐ 4. वह

Question ID : 630680513591
Option 1 ID : 6306802007056
Option 2 ID : 6306802007055
Option 3 ID : 6306802007058
Option 4 ID : 6306802007057
Status : Not Answered
Chosen Option : --

Q.2 शब्द "दशानन" में कौन सा समास है?

- Ans ☒ 1. कर्मधारय समास
☒ 2. बहुव्रीही समास
☒ 3. द्विगु समास
☒ 4. तत्पुरुष समास

Question ID : 630680513575
Option 1 ID : 6306802006993
Option 2 ID : 6306802006992
Option 3 ID : 6306802006994
Option 4 ID : 6306802006991
Status : Not Answered
Chosen Option : --

Q.3 निम्नलिखित में से कौन सा शब्द "सुकृत्य" का विलोम शब्द है?

- Ans ☒ 1. कुकृति
☒ 2. कुकृत्य
☒ 3. किकृति
☒ 4. अकार्य

Question ID : 630680513582
Option 1 ID : 6306802007020
Option 2 ID : 6306802007019
Option 3 ID : 6306802007021
Option 4 ID : 6306802007022
Status : Not Answered
Chosen Option : --

Q.4 निम्नलिखित में से कौन सा शब्द सामासिक पद कविश्रेष्ठ का सामासिक विग्रह है?

- Ans ☒ 1. श्रेष्ठवान कवि
☒ 2. कवियों के लिए श्रेष्ठ
☒ 3. कवियों का श्रेष्ठ
☒ 4. कवियों में श्रेष्ठ

Question ID : 630680513576
Option 1 ID : 6306802006998
Option 2 ID : 6306802006997
Option 3 ID : 6306802006996
Option 4 ID : 6306802006995
Status : Not Answered
Chosen Option : --

Q.5 निश्चल में कौन सा संधि है?

- Ans ☒ 1. व्यंजन संधि
☒ 2. विसर्ग संधि
☒ 3. स्वर संधि
☒ 4. व्यंजन संधि एवं विसर्ग संधि दोनों

Question ID : 630680513567
Option 1 ID : 6306802006961
Option 2 ID : 6306802006960
Option 3 ID : 6306802006959
Option 4 ID : 6306802006962
Status : Not Answered
Chosen Option : --



Q.6 एकांत का संधि विच्छेद निम्नलिखित में से कौन सा है?

- Ans ☒ 1. एका + अंत
☒ 2. एक + अंत
☒ 3. एक + अनंत
☒ 4. एक + उन्वित

Question ID : 630680513568
Option 1 ID : 6306802006963
Option 2 ID : 6306802006965
Option 3 ID : 6306802006964
Option 4 ID : 6306802006966
Status : Not Answered
Chosen Option : --

Q.7 नवरत्न में कौन सा समास है?

- Ans ☒ 1. तत्पुरुष समास
☒ 2. द्वंद समास
☒ 3. द्विगु समास
☒ 4. कर्मधारय समास

Question ID : 630680513574
Option 1 ID : 6306802006988
Option 2 ID : 6306802006987
Option 3 ID : 6306802006989
Option 4 ID : 6306802006990
Status : Not Answered
Chosen Option : --

Q.8 निम्नलिखित में से कौन सा शब्द "सामिष" का विलोम शब्द है?

- Ans ☒ 1. निरामिष
☒ 2. आमिष
☒ 3. निरमिष
☒ 4. तामसिक

Question ID : 630680513583
Option 1 ID : 6306802007025
Option 2 ID : 6306802007024
Option 3 ID : 6306802007026
Option 4 ID : 6306802007023
Status : Not Answered
Chosen Option : --

Q.9 जिसका जन्म परिवार में सबसे पहले हुआ हो उसे क्या कहते हैं?

- Ans ☒ 1. अनुज
☒ 2. अग्रज
☒ 3. आग्रज
☒ 4. अगराज

Question ID : 630680513579
Option 1 ID : 6306802007007
Option 2 ID : 6306802007010
Option 3 ID : 6306802007008
Option 4 ID : 6306802007009
Status : Not Answered
Chosen Option : --



Q.10 इंदिरा निम्नलिखित में से किस शब्द का पर्यावाची शब्द है?

- Ans
- ☒ 1. कमल
 - ☒ 2. कोकिल
 - ☒ 3. किरण
 - ☒ 4. कमला

Question ID : 630680513580
Option 1 ID : 6306802007012
Option 2 ID : 6306802007013
Option 3 ID : 6306802007014
Option 4 ID : 6306802007011
Status : Not Answered
Chosen Option : --

Q.11 अजर - अजिर शब्द युग्म का अर्थ निम्नलिखित में से क्या है?

- Ans
- ☒ 1. जो वृद्ध न हो - आंगन
 - ☒ 2. वृद्ध - अमर
 - ☒ 3. अजन्मा - पृथ्वी
 - ☒ 4. आक्षय - नष्ट

Question ID : 630680513584
Option 1 ID : 6306802007028
Option 2 ID : 6306802007029
Option 3 ID : 6306802007027
Option 4 ID : 6306802007030
Status : Not Answered
Chosen Option : --

Q.12 "प्रत्यय" में प्रति का क्या अर्थ होता है?

- Ans
- ☒ 1. साथ में पर बाद में
 - ☒ 2. समीप
 - ☒ 3. चलनेवाला
 - ☒ 4. सृष्टि

Question ID : 630680513572
Option 1 ID : 6306802006981
Option 2 ID : 6306802006979
Option 3 ID : 6306802006982
Option 4 ID : 6306802006980
Status : Not Answered
Chosen Option : --

Q.13 घुड़दौड़ का संधि विच्छेद निम्नलिखित में से कौन सा है?

- Ans
- ☒ 1. घुड़ + दौड़
 - ☒ 2. घुड़द + दौड़
 - ☒ 3. घोड़ा + दौड़
 - ☒ 4. घुड़ + दौल

Question ID : 630680513569
Option 1 ID : 6306802006967
Option 2 ID : 6306802006969
Option 3 ID : 6306802006968
Option 4 ID : 6306802006970
Status : Not Answered
Chosen Option : --



Q.14 "भद्रा" निम्नलिखित में से किस शब्द का पर्यावाची शब्द है?

- Ans ☒ 1. भादो
☒ 2. गाय
☒ 3. अपशकुन
☒ 4. बैल

Question ID : 630680513581
Option 1 ID : 6306802007016
Option 2 ID : 6306802007017
Option 3 ID : 6306802007018
Option 4 ID : 6306802007015
Status : Not Answered
Chosen Option : --

Q.15 "घर पर फूस नहीं, नाम धनपत" लोकोक्ति का क्या अर्थ है?

- Ans ☒ 1. गुण कुछ नहीं, पर गुणी कहलाना।
☒ 2. आपस की फुट से हानि होना।
☒ 3. निर्दयी या मूर्ख के आगे दुखड़ा रोना बेकार होता है।
☒ 4. कम गुण वाला व्यक्ति दिखावा बहुत करता है।

Question ID : 630680513588
Option 1 ID : 6306802007043
Option 2 ID : 6306802007046
Option 3 ID : 6306802007044
Option 4 ID : 6306802007045
Status : Not Answered
Chosen Option : --

Q.16 अत्यधिक शब्द में कौन सा उपसर्ग है?

- Ans ☒ 1. अति
☒ 2. अधि
☒ 3. अ
☒ 4. अधी

Question ID : 630680513571
Option 1 ID : 6306802006977
Option 2 ID : 6306802006976
Option 3 ID : 6306802006975
Option 4 ID : 6306802006978
Status : Not Answered
Chosen Option : --

Q.17 निम्नलिखित में से कौन सा शब्द सामासिक पद गुरुसेवा का सामासिक विग्रह है?

- Ans ☒ 1. गुरु की सेवा करने के लिए
☒ 2. गुरुओं की सेवा
☒ 3. गुरु की सेवा
☒ 4. गुरु के लिए सेवा

Question ID : 630680513577
Option 1 ID : 6306802007002
Option 2 ID : 6306802006999
Option 3 ID : 6306802007001
Option 4 ID : 6306802007000
Status : Not Answered
Chosen Option : --



Q.18 निम्नलिखित में से कौन सा शब्द वाक्य "जिसकी कल्पना न की जा सके" के लिए सबसे सटीक अर्थ प्रदान करता है?

- Ans ☒ 1. कल्पनीय
☒ 2. अकल्पनीय
☒ 3. अंकुश
☒ 4. अकिंचन

Question ID : 630680513578
Option 1 ID : 6306802007003
Option 2 ID : 6306802007004
Option 3 ID : 6306802007006
Option 4 ID : 6306802007005
Status : Not Answered
Chosen Option : --

Q.19 "गर्दन पर सवार होना" मुहावरे का अर्थ निम्नलिखित में से क्या है?

- Ans ☒ 1. घूस देना
☒ 2. परास्त होना
☒ 3. पक्षपात करना
☒ 4. पीछा न छोड़ना

Question ID : 630680513587
Option 1 ID : 6306802007041
Option 2 ID : 6306802007042
Option 3 ID : 6306802007040
Option 4 ID : 6306802007039
Status : Not Answered
Chosen Option : --

Q.20 मनौवल शब्द में कौन सा प्रत्यय है?

- Ans ☒ 1. नवल
☒ 2. अल
☒ 3. औवल
☒ 4. वल

Question ID : 630680513573
Option 1 ID : 6306802006986
Option 2 ID : 6306802006985
Option 3 ID : 6306802006983
Option 4 ID : 6306802006984
Status : Not Answered
Chosen Option : --

Q.21 "तन पर नहीं लत्ता पान खाय अलबत्ता" लोकोक्ति का क्या अर्थ है?

- Ans ☒ 1. झूठा दिखावा करना
☒ 2. महाकंजूस
☒ 3. छोटे का बड़े से बढ़ जाना।
☒ 4. निराला ढंग

Question ID : 630680513589
Option 1 ID : 6306802007047
Option 2 ID : 6306802007050
Option 3 ID : 6306802007049
Option 4 ID : 6306802007048
Status : Not Answered
Chosen Option : --



Q.22 "उपसर्ग" में उप का क्या अर्थ होता है?

- Ans ☒ 1. सृष्टि
☒ 2. समीप
☒ 3. साथ में
☒ 4. चलनेवाला

Question ID : 630680513570
Option 1 ID : 6306802006972
Option 2 ID : 6306802006971
Option 3 ID : 6306802006973
Option 4 ID : 6306802006974
Status : Not Answered
Chosen Option : --

Q.23 "आँखें फेरना" मुहावरे का अर्थ निम्नलिखित में से क्या है?

- Ans ☒ 1. क्रोध प्रकट करना
☒ 2. नज़र बदलना (पहले जैसा व्यवहार नहीं करना)
☒ 3. आदर करना
☒ 4. मदद करना

Question ID : 630680513586
Option 1 ID : 6306802007035
Option 2 ID : 6306802007038
Option 3 ID : 6306802007037
Option 4 ID : 6306802007036
Status : Not Answered
Chosen Option : --

Q.24 अवधि - अवधी शब्द युग्म का सही अर्थ क्या है?

- Ans ☒ 1. हिन्दी की एक उपभाषा - समय
☒ 2. समय - हिन्दी की एक उपभाषा
☒ 3. समय - शहर का नाम
☒ 4. शहर का नाम - समय

Question ID : 630680513585
Option 1 ID : 6306802007032
Option 2 ID : 6306802007031
Option 3 ID : 6306802007033
Option 4 ID : 6306802007034
Status : Not Answered
Chosen Option : --

Q.25 एक ही व्यक्ति पर केन्द्रित शासन प्रणाली ____ कहलाती है।

- Ans ☒ 1. तानाशाही
☒ 2. लोकतंत्र
☒ 3. गणतंत्र
☒ 4. समाजतंत्र

Question ID : 630680513590
Option 1 ID : 6306802007052
Option 2 ID : 6306802007051
Option 3 ID : 6306802007053
Option 4 ID : 6306802007054
Status : Not Answered
Chosen Option : --

