



Teachingninja.in



Latest Govt Job updates



Private Job updates



Free Mock tests available

Visit - teachingninja.in



Teachingninja.in

WBSEDCL

Previous Year Paper

Office Executive

08 Sept, 2021 Shift 1



Question Paper Preview

Notations :

- 1.Options shown in green color and with ✓ icon are correct.
- 2.Options shown in red color and with ✗ icon are incorrect.

Subject Name :	Office Executive
Creation Date :	2021-09-08 12:15:33
Duration :	90
Total Marks :	85
Display Marks:	Yes
Share Answer Key With Delivery Engine :	No
Actual Answer Key :	Yes
Calculator :	None
Magnifying Glass Required? :	No
Ruler Required? :	No
Eraser Required? :	No
Scratch Pad Required? :	No
Rough Sketch/Notepad Required? :	No
Protractor Required? :	No
Show Watermark on Console? :	Yes
Highlighter :	No
Auto Save on Console? (SA type of questions will be always auto saved) :	No

Office Executive

Group Number : 1

Group Id :	275228336
Group Maximum Duration :	0
Group Minimum Duration :	90
Show Attended Group? :	No
Edit Attended Group? :	No
Break time :	0
Group Marks :	85
Is this Group for Examiner? :	No

General Awareness

Section Id :	275228463
Section Number :	1
Section type :	Online
Mandatory or Optional :	Mandatory
Number of Questions :	10
Number of Questions to be attempted :	10
Section Marks :	10
Enable Mark as Answered Mark for Review and Clear Response :	Yes
Sub-Section Number :	1
Sub-Section Id :	275228552
Question Shuffling Allowed :	Yes

Question Number : 1 Question Id : 2752286640 Question Type : MCQ Option Shuffling : Yes Is Question Mandatory : No Option Orientation : Vertical Correct Marks : 1 Wrong Marks : 0.33

Who among the following is popularly known as Lokamanya?

Options :

1. ❌ Mohandas Karamchand Gandhi

2. ✖ Khan Abdul Gaffar Khan
3. ✔ Bal Gangadhar Tilak
4. ✖ Gopal Krishna Gokhale

Question Number : 2 Question Id : 2752286641 Question Type : MCQ Option Shuffling : Yes Is Question Mandatory : No Option Orientation : Vertical

Correct Marks : 1 Wrong Marks : 0.33

What was the capital of Nanda dynasty?

Options :

1. ✔ Pataliputra
2. ✖ Rajgir
3. ✖ Tanjavur
4. ✖ Kancheepuram

Question Number : 3 Question Id : 2752286642 Question Type : MCQ Option Shuffling : Yes Is Question Mandatory : No Option Orientation : Vertical

Correct Marks : 1 Wrong Marks : 0.33

Which of the following is the birthplace of the revolutionary freedom fighter, Chandrashekhar Azad?

Options :

1. ✖ Uttar Pradesh
2. ✔ Madhya Pradesh
3. ✖ Bihar
4. ✖ West Bengal

Question Number : 4 Question Id : 2752286643 Question Type : MCQ Option Shuffling : Yes Is Question Mandatory : No Option Orientation : Vertical

Correct Marks : 1 Wrong Marks : 0.33

Which of the following is the highest peak in the Aravalli Mountain range?

Options :

1. ✖ Mana Peak
2. ✖ Mukut Parbat
3. ✔ Guru Shikar
4. ✖ Rishi Pahar

Question Number : 5 Question Id : 2752286644 Question Type : MCQ Option Shuffling : Yes Is

Question Mandatory : No Option Orientation : Vertical

Correct Marks : 1 Wrong Marks : 0.33

Which of the following pairs of countries and their capitals is matched INCORRECTLY?

Options :

1. ✖ Russia – Moscow
2. ✖ Afghanistan – Kabul
3. ✖ Nepal – Kathmandu
4. ✔ Bulgaria – Amsterdam

Question Number : 6 Question Id : 2752286645 Question Type : MCQ Option Shuffling : Yes Is

Question Mandatory : No Option Orientation : Vertical

Correct Marks : 1 Wrong Marks : 0.33

Bengali short story CHHUTI is authored by:

Options :

1. ✔ Rabindranath Tagore
2. ✖ Sarat Chandra Chattopadhyay
3. ✖ Bankim Chandra Chattopadhyay
4. ✖ Bibhuti Bhushan Bandyopadhyay

Question Number : 7 Question Id : 2752286646 Question Type : MCQ Option Shuffling : Yes Is

Question Mandatory : No Option Orientation : Vertical

Correct Marks : 1 Wrong Marks : 0.33

The movie PATHER PANCHALI is directed by:

Options :

1. ✔ Satyajit Ray
2. ✖ Rituparno Ghosh
3. ✖ Ritwik Ghatak
4. ✖ Mrinal Sen

Question Number : 8 Question Id : 2752286647 Question Type : MCQ Option Shuffling : Yes Is Question Mandatory : No Option Orientation : Vertical

Correct Marks : 1 Wrong Marks : 0.33

Who organised RAKHIBANDHAN UTSAV on the day of Partition of Bengal?

Options :

1. ✖ Keshab Chandra Sen
2. ✖ Surendranath Bandyopadhyay
3. ✖ Chittaranjan Das
4. ✔ Rabindranath Tagore

Question Number : 9 Question Id : 2752286648 Question Type : MCQ Option Shuffling : Yes Is Question Mandatory : No Option Orientation : Vertical

Correct Marks : 1 Wrong Marks : 0.33

The Indian Institute of Technology, Kharagpur was established in the year?

Options :

1. ✖ 1947
2. ✔ 1951
3. ✖ 1955
4. ✖ 1962

Question Number : 10 Question Id : 2752286649 Question Type : MCQ Option Shuffling : Yes Is Question Mandatory : No Option Orientation : Vertical

Correct Marks : 1 Wrong Marks : 0.33

National Youth Day is observed in the memory of:

Options :

- 1. ✖ Raja Rammohan Roy
- 2. ✖ Khudiram Bose
- 3. ✔ Swami Vivekanada
- 4. ✖ Netaji Subhash Chandra Bose

Reasoning

Section Id :	275228464
Section Number :	2
Section type :	Online
Mandatory or Optional :	Mandatory
Number of Questions :	10
Number of Questions to be attempted :	10
Section Marks :	10
Enable Mark as Answered Mark for Review and Clear Response :	Yes
Sub-Section Number :	1
Sub-Section Id :	275228553
Question Shuffling Allowed :	Yes

Question Number : 11 Question Id : 2752286650 Question Type : MCQ Option Shuffling : Yes Is Question Mandatory : No Option Orientation : Vertical Correct Marks : 1 Wrong Marks : 0.33

Select the option that is related to the third word in the same way as the second word is related to the first word.

Virology : Viruses :: Conchology : ?

Options :

- 1. ✖ Skulls
- 2. ✖ Insects

3. ✓ Shells

4. ✖ Heart

Question Number : 12 Question Id : 2752286651 Question Type : MCQ Option Shuffling : Yes Is Question Mandatory : No Option Orientation : Vertical

Correct Marks : 1 Wrong Marks : 0.33

In a certain code language, 'EDUCATED' is coded as 36. How will 'ADVERBIALITY' be coded in that language?

Options :

1. ✖ 48

2. ✓ 52

3. ✖ 56

4. ✖ 50

Question Number : 13 Question Id : 2752286652 Question Type : MCQ Option Shuffling : Yes Is Question Mandatory : No Option Orientation : Vertical

Correct Marks : 1 Wrong Marks : 0.33

Pointing to a man in a photograph, Radhika said, "The only son of his grandmother is my husband". How is Radhika related to the man in the photograph?

Options :

1. ✖ Aunt

2. ✖ Sister

3. ✖ Maternal aunt

4. ✓ Mother

Question Number : 14 Question Id : 2752286653 Question Type : MCQ Option Shuffling : Yes Is Question Mandatory : No Option Orientation : Vertical

Correct Marks : 1 Wrong Marks : 0.33

Select the number from among the given options that can replace the question mark (?) in the following series.

4, 9, 20, 43, 90, ?

Options :

- 1. ✖ 184
- 2. ✔ 185
- 3. ✖ 186
- 4. ✖ 175

Question Number : 15 Question Id : 2752286654 Question Type : MCQ Option Shuffling : Yes Is Question Mandatory : No Option Orientation : Vertical

Correct Marks : 1 Wrong Marks : 0.33

If ' \div ' means '-', '-' means ' \times ', ' \times ' means '+', and '+' means ' \div ', then find the value of the following expression.

$$70 \times 95 \div 15 - 48 + 20$$

Options :

- 1. ✖ 115
- 2. ✔ 129
- 3. ✖ 140
- 4. ✖ 122

Question Number : 16 Question Id : 2752286655 Question Type : MCQ Option Shuffling : Yes Is Question Mandatory : No Option Orientation : Vertical

Correct Marks : 1 Wrong Marks : 0.33

A dice is marked with the letters from U to Z in different ways. If U is adjacent to V, W and Y, then which of the following statement is necessarily true?

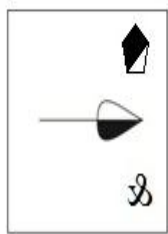
Options :

- 1. ✖ U is adjacent to X.
- 2. ✖ V is adjacent to Y.
- 3. ✖ U is adjacent to Z.
- 4. ✔ X is adjacent to Z.

Question Number : 17 Question Id : 2752286656 Question Type : MCQ Option Shuffling : Yes Is Question Mandatory : No Option Orientation : Vertical

Correct Marks : 1 Wrong Marks : 0.33

Select the correct mirror image of the given figure when the mirror is placed to the right side of the figure.

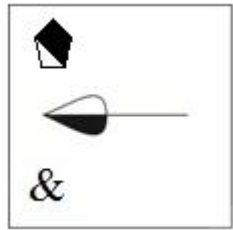


Options :

1. ✖



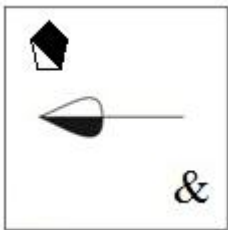
2. ✔



3. ✖



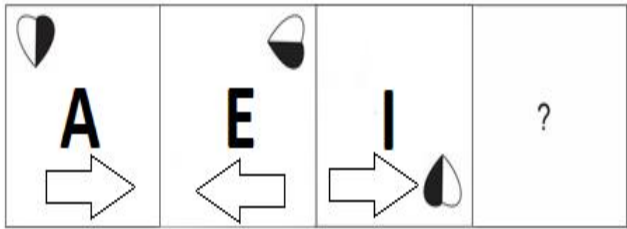
4. ✖



Question Number : 18 Question Id : 2752286657 Question Type : MCQ Option Shuffling : Yes Is Question Mandatory : No Option Orientation : Vertical

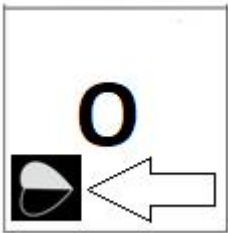
Correct Marks : 1 Wrong Marks : 0.33

Select the figure from among the given options that can replace the question mark (?) in the following series.

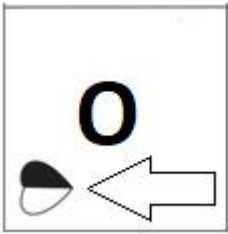


Options :

1. ✖



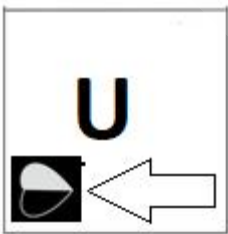
2. ✔



3. ✖



4. ✖




Question Number : 19 Question Id : 2752286658 Question Type : MCQ Option Shuffling : Yes Is



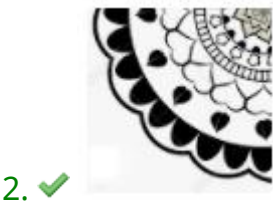
Question Mandatory : No Option Orientation : Vertical

Correct Marks : 1 Wrong Marks : 0.33

Select the figure from the options that can replace the question mark (?) and complete the pattern.



Options :

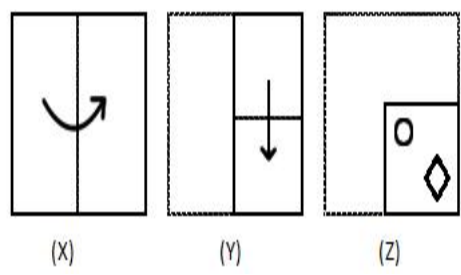


Question Number : 20 Question Id : 2752286659 Question Type : MCQ Option Shuffling : Yes Is

Question Mandatory : No Option Orientation : Vertical

Correct Marks : 1 Wrong Marks : 0.33

The sequence of folding a piece of paper (figures X and Y) and the manner in which the folded paper has been cut (figure Z) is shown in the following figures. How would this paper look when unfolded?



Options :

- 1. ✖
- 2. ✔
- 3. ✖
- 4. ✖

Quantitative Aptitude

Section Id : 275228465
Section Number : 3

Section type :	Online
Mandatory or Optional :	Mandatory
Number of Questions :	20
Number of Questions to be attempted :	20
Section Marks :	20
Enable Mark as Answered Mark for Review and Clear Response :	Yes
Sub-Section Number :	1
Sub-Section Id :	275228554
Question Shuffling Allowed :	Yes

Question Number : 21 Question Id : 2752286660 Question Type : MCQ Option Shuffling : Yes Is Question Mandatory : No Option Orientation : Vertical

Correct Marks : 1 Wrong Marks : 0.33

$15 \div 5 \times 3 + 15 \div (5 \times 3) = ?$

Options :

- 1. ✖ 5
- 2. ✖ 2
- 3. ✔ 10
- 4. ✖ 1

Question Number : 22 Question Id : 2752286661 Question Type : MCQ Option Shuffling : Yes Is Question Mandatory : No Option Orientation : Vertical

Correct Marks : 1 Wrong Marks : 0.33

0.2 of the cost of item A = 0.3 of the cost of item B = 0.45 of the cost of item C. If 0.4 of the cost of item B is ₹ 1,800, what is the total cost of items A and C taken together?

Options :

1. ✖ ₹ 9,900

2. ✔ ₹ 9,750

3. ✖ ₹ 9,450

4. ✖ ₹ 9,000

Question Number : 23 Question Id : 2752286662 Question Type : MCQ Option Shuffling : Yes Is Question Mandatory : No Option Orientation : Vertical

Correct Marks : 1 Wrong Marks : 0.33

Ravi, Sita, Tritha and Utsav shared a pizza among themselves. Ravi had $\frac{1}{3}$ of the pizza while Sita had $\frac{2}{5}$ of the remaining portion. Tritha had $\frac{3}{4}$ of the portion that was left after Ravi and Sita had their shares. Utsav finished off the portion of the pizza that was still left. What fraction of the total pizza did Utsav have?

Options :

1. ✔ $\frac{1}{10}$

2. ✖ $\frac{1}{9}$

3. ✖ $\frac{1}{8}$

4. ✖ $\frac{1}{12}$

Question Number : 24 Question Id : 2752286663 Question Type : MCQ Option Shuffling : Yes Is Question Mandatory : No Option Orientation : Vertical

Correct Marks : 1 Wrong Marks : 0.33

Which is the greatest number that leaves the same remainder when dividing 598, 1788 and 1465?

Options :

1. ✖ 19

2. ✔ 17

3. ✖ 15

4. ✖ 13

Question Number : 25 Question Id : 2752286664 Question Type : MCQ Option Shuffling : Yes Is Question Mandatory : No Option Orientation : Vertical

Correct Marks : 1 Wrong Marks : 0.33

Two positive numbers are in the ratio 5 : 4 and the product of the two numbers is 2420. Find the sum of the two numbers.

Options :

1. ✖ 90

2. ✖ 121

3. ✖ 132

4. ✔ 99

Question Number : 26 Question Id : 2752286665 Question Type : MCQ Option Shuffling : Yes Is Question Mandatory : No Option Orientation : Vertical

Correct Marks : 1 Wrong Marks : 0.33

135% of a number added to 15% of 80% of the same number gives 735. What is the number?

Options :

1. ✔ 500

2. ✖ 540

3. ✖ 480

4. ✖ 600

Question Number : 27 Question Id : 2752286666 Question Type : MCQ Option Shuffling : Yes Is Question Mandatory : No Option Orientation : Vertical

Correct Marks : 1 Wrong Marks : 0.33

An item was sold for ₹ 957, thereby incurring a loss of 17.5%. What should the selling price of the item be to make a profit of 10%?

Options :

1. ✖ ₹ 1,196

2. ✖ ₹ 1,296

3. ✖ ₹ 1,236

4. ✔ ₹ 1,276

Question Number : 28 Question Id : 2752286667 Question Type : MCQ Option Shuffling : Yes Is Question Mandatory : No Option Orientation : Vertical

Correct Marks : 1 Wrong Marks : 0.33

A and B invested capital in the ratio 5 : 4 in a business. However, after 5 months A withdrew 40% of the capital she had invested, while after another 3 months B withdrew 50% of the capital she had initially invested. In what ratio should A and B share the profit accrued at the end of the 12 month period since the duo first invested in the business?

Options :

1. ✖ 6 : 5

2. ✖ 11 : 10

3. ✔ 23 : 20

4. ✖ 21 : 20

Question Number : 29 Question Id : 2752286668 Question Type : MCQ Option Shuffling : Yes Is Question Mandatory : No Option Orientation : Vertical

Correct Marks : 1 Wrong Marks : 0.33

The amount paid including simple interest on a certain sum of money invested for 6 years was ₹ 5,580. If the time period of the investment was 8 years, the amount payable would have been ₹ 5,940. What was the original sum invested?

Options :

1. ✖ ₹ 4,650

2. ✔ ₹ 4,500

3. ✖ ₹ 4,750

4. ✖ ₹ 4,200

Question Number : 30 Question Id : 2752286669 Question Type : MCQ Option Shuffling : Yes Is Question Mandatory : No Option Orientation : Vertical

Correct Marks : 1 Wrong Marks : 0.33

Which of the following fractions will NOT terminate when written in the decimal form?

Options :

1. ✖ $\frac{21}{12}$

2. ✔ $\frac{21}{13}$

3. ✖ $\frac{21}{14}$

4. ✖ $\frac{21}{15}$

Question Number : 31 Question Id : 2752286670 Question Type : MCQ Option Shuffling : Yes Is Question Mandatory : No Option Orientation : Vertical

Correct Marks : 1 Wrong Marks : 0.33

If a cyclist covers a distance of 4.25 metres in 1 second, what is her speed in km/h?

Options :

1. ✔ 15.3

2. ✖ 15.4

3. ✖ 15.2

4. ✖ 15.6

Question Number : 32 Question Id : 2752286671 Question Type : MCQ Option Shuffling : Yes Is Question Mandatory : No Option Orientation : Vertical

Correct Marks : 1 Wrong Marks : 0.33

A train crosses a lamp-post in 15 seconds and a platform in 36 seconds. If the train is travelling at the speed of 54 km/h, what is the length of the platform?

Options :

1. ✖ 345 m

2. ✖ 300 m

3. ✖ 360 m

4. ✔ 315 m

Question Number : 33 Question Id : 2752286672 Question Type : MCQ Option Shuffling : Yes Is Question Mandatory : No Option Orientation : Vertical

Correct Marks : 1 Wrong Marks : 0.33

The average of 84, 71 and another number is 65. What is the third number?

Options :

1. ✖ 35

2. ✖ 36

3. ✔ 40

4. ✖ 45

Question Number : 34 Question Id : 2752286673 Question Type : MCQ Option Shuffling : Yes Is Question Mandatory : No Option Orientation : Vertical

Correct Marks : 1 Wrong Marks : 0.33

₹ 3,600 amounts to ₹ 6,660 in 5 years at the rate of $r\%$ simple interest per annum. What is the value of r ?

Options :

1. ✖ 15%

2. ✖ 16%

3. ✔ 17%

4. ✖ 18%

Question Number : 35 Question Id : 2752286674 Question Type : MCQ Option Shuffling : Yes Is Question Mandatory : No Option Orientation : Vertical

Correct Marks : 1 Wrong Marks : 0.33

What is the HCF of 54, 90 and 108?

Options :

1. ✖ 27

2. ✔ 18

3. ✖ 9

4. ✖ 6

Question Number : 36 Question Id : 2752286675 Question Type : MCQ Option Shuffling : Yes Is Question Mandatory : No Option Orientation : Vertical

Correct Marks : 1 Wrong Marks : 0.33

22.5% of a number is 63. What is the number?

Options :

1. ✖ 270

2. ✔ 280

3. ✖ 294

4. ✖ 315

Question Number : 37 Question Id : 2752286676 Question Type : MCQ Option Shuffling : Yes Is



Question Mandatory : No Option Orientation : Vertical

Correct Marks : 1 Wrong Marks : 0.33

The difference between selling an item at the rate of 13% loss and selling it at the rate of 12% profit is ₹ 80. What is the cost price of the item?

Options :

1. ✖ ₹ 400

2. ✖ ₹ 280

3. ✔ ₹ 320

4. ✖ ₹ 360

Question Number : 38 Question Id : 2752286677 Question Type : MCQ Option Shuffling : Yes Is

Question Mandatory : No Option Orientation : Vertical

Correct Marks : 1 Wrong Marks : 0.33

Which of the following numbers will be divisible by 12?

Options :

1. ✖ 12342

2. ✖ 12346

3. ✔ 12348

4. ✖ 12344

Question Number : 39 Question Id : 2752286678 Question Type : MCQ Option Shuffling : Yes Is

Question Mandatory : No Option Orientation : Vertical

Correct Marks : 1 Wrong Marks : 0.33

The area of a square is 72 m^2 . What is the perimeter of the square?

Options :

1. ✖ $18\sqrt{2}$ m

2. ✖ 18 m

3. ✔ $24\sqrt{2}$ m

4. ✖ $20\sqrt{2}$ m

Question Number : 40 Question Id : 2752286679 Question Type : MCQ Option Shuffling : Yes Is

Question Mandatory : No Option Orientation : Vertical

Correct Marks : 1 Wrong Marks : 0.33

The length of the diagonal of a square is $10\sqrt{2}$ m. What is the area of the square?

Options :

1. ✔ 100 m^2

2. ✖ 200 m^2

3. ✖ 50 m^2

4. ✖ 225 m^2

General English

Section Id :

275228466

Section Number :

4

Section type :

Online

Mandatory or Optional :

Mandatory



Number of Questions :	20
Number of Questions to be attempted :	20
Section Marks :	20
Enable Mark as Answered Mark for Review and Clear Response :	Yes
Sub-Section Number :	1
Sub-Section Id :	275228555
Question Shuffling Allowed :	Yes

Question Number : 41 Question Id : 2752286680 Question Type : MCQ Option Shuffling : Yes Is Question Mandatory : No Option Orientation : Vertical Correct Marks : 1 Wrong Marks : 0.33

Select the most appropriate synonym of the given word.

Enmity

Options :

- 1. ✖ Affection
- 2. ✔ Bitterness
- 3. ✖ Puzzle
- 4. ✖ Eagerness

Question Number : 42 Question Id : 2752286681 Question Type : MCQ Option Shuffling : Yes Is Question Mandatory : No Option Orientation : Vertical Correct Marks : 1 Wrong Marks : 0.33

Select the most appropriate synonym of the given word.

Interval

Options :

- 1. ✔ Recess
- 2. ✖ Closure
- 3. ✖ Intrusion

4. ✖ Junction

Question Number : 43 Question Id : 2752286682 Question Type : MCQ Option Shuffling : Yes Is

Question Mandatory : No Option Orientation : Vertical

Correct Marks : 1 Wrong Marks : 0.33

Select the most appropriate ANTONYM of the given word.

Queer

Options :

- 1. ✖ Jester
- 2. ✖ Qualm
- 3. ✖ Wacky
- 4. ✔ Sane

Question Number : 44 Question Id : 2752286683 Question Type : MCQ Option Shuffling : Yes Is

Question Mandatory : No Option Orientation : Vertical

Correct Marks : 1 Wrong Marks : 0.33

Select the most appropriate ANTONYM of the given word.

Weighty

Options :

- 1. ✖ Obese
- 2. ✖ Porcine
- 3. ✔ Trivial
- 4. ✖ Melancholy

Question Number : 45 Question Id : 2752286684 Question Type : MCQ Option Shuffling : Yes Is

Question Mandatory : No Option Orientation : Vertical

Correct Marks : 1 Wrong Marks : 0.33

Select the correctly spelt word.

Options :

- 1. ✖ Estuery
- 2. ✖ Esthetac
- 3. ✔ Estrange
- 4. ✖ Eterniti

Question Number : 46 Question Id : 2752286685 Question Type : MCQ Option Shuffling : Yes Is

Question Mandatory : No Option Orientation : Vertical

Correct Marks : 1 Wrong Marks : 0.33

Select the correctly spelt word.

Options :

- 1. ✖ Daintyes
- 2. ✖ Absentya
- 3. ✔ Mackerel
- 4. ✖ Acomplishment

Question Number : 47 Question Id : 2752286686 Question Type : MCQ Option Shuffling : Yes Is

Question Mandatory : No Option Orientation : Vertical

Correct Marks : 1 Wrong Marks : 0.33

Select the most appropriate option to fill in the blanks.

While travelling alone to the castle at _____, the _____ felt very scared.

Options :

- 1. ✖ night; night
- 2. ✔ night; knight
- 3. ✖ knight; night
- 4. ✖ knight; knight

Question Number : 48 Question Id : 2752286687 Question Type : MCQ Option Shuffling : Yes Is

Question Mandatory : No Option Orientation : Vertical

Correct Marks : 1 Wrong Marks : 0.33

Select the most appropriate option to fill in the blanks.

The _____ seems unpredictable today. I wonder _____ I should carry my jacket or not.

Options :

1. ✖ whether; weather
2. ✖ weather; weather
3. ✔ weather; whether
4. ✖ whether; whether

Question Number : 49 Question Id : 2752286688 Question Type : MCQ Option Shuffling : Yes Is

Question Mandatory : No Option Orientation : Vertical

Correct Marks : 1 Wrong Marks : 0.33

Select the most appropriate option to fill in the blanks.

The _____ told the people, "He who trusts in a lie shall _____ in truth."

Options :

1. ✖ perish; parish
2. ✔ parish; perish
3. ✖ perish; perish
4. ✖ parish; parish

Question Number : 50 Question Id : 2752286689 Question Type : MCQ Option Shuffling : Yes Is

Question Mandatory : No Option Orientation : Vertical

Correct Marks : 1 Wrong Marks : 0.33

Select the most appropriate option to fill in the blanks.

It is not _____ on the part of the airlines to keep on raising their _____.

Options :

1. ✖ fair; fair
2. ✖ fare; fair

3. ✓ fair; fare

4. ✗ fare; fare

Question Number : 51 Question Id : 2752286690 Question Type : MCQ Option Shuffling : Yes Is

Question Mandatory : No Option Orientation : Vertical

Correct Marks : 1 Wrong Marks : 0.33

Select the most appropriate option to fill in the blanks.

Rina's attire _____ her personality. No wonder she gets a lot of _____ at every party.

Options :

1. ✗ complements; complements

2. ✗ compliments; compliments

3. ✗ compliments; complements

4. ✓ complements; compliments

Question Number : 52 Question Id : 2752286691 Question Type : MCQ Option Shuffling : Yes Is

Question Mandatory : No Option Orientation : Vertical

Correct Marks : 1 Wrong Marks : 0.33

The following sentence has been divided into parts. One of them may contain an error. Select the part that contains the error from the given options. If you don't find any error, mark 'No error' as your answer.

Rajasthan, referred to as the Great Indian Desert, / is known for its harsh weather and temperatures / that often soar beyond 50 degrees Celsius in summer.

Options :

1. ✗ Rajasthan, referred to as the Great Indian Desert,

2. ✓ is known for its harsh weather and temperatures

3. ✗ that often soar beyond 50 degrees Celsius in summer .

4. ✗ No error

Question Number : 53 Question Id : 2752286692 Question Type : MCQ Option Shuffling : Yes Is



Question Mandatory : No Option Orientation : Vertical

Correct Marks : 1 Wrong Marks : 0.33

The following sentence has been divided into parts. One of them may contain an error. Select the part that contains the error from the given options. If you don't find any error, mark 'No error' as your answer.

Pani puri was one of the street snacks / that many Indians missed / the most during lockdown.

Note: For this question, discrepancy is found in question/answer. Full Marks is being awarded to all candidates.

Options :

1. Pani puri was one of the street snacks
2. that many Indians missed
3. the most during lockdown.
4. No error

Question Number : 54 Question Id : 2752286693 Question Type : MCQ Option Shuffling : Yes Is

Question Mandatory : No Option Orientation : Vertical

Correct Marks : 1 Wrong Marks : 0.33

The following sentence has been divided into parts. One of them may contain an error. Select the part that contains the error from the given options. If you don't find any error, mark 'No error' as your answer.

All of us have to / learn to deal with / the imperfections of others.

Options :

1. ✖ All of us have to
2. ✖ learn to deal with
3. ✖ the imperfections of others.
4. ✔ No error



Question Number : 55 Question Id : 2752286694 Question Type : MCQ Option Shuffling : Yes Is Question Mandatory : No Option Orientation : Vertical

Correct Marks : 1 Wrong Marks : 0.33

The following sentence has been divided into parts. One of them may contain an error. Select the part that contains the error from the given options. If you don't find any error, mark 'No error' as your answer.

I have realised / after four decades of research and action / that most of the farmers of the world is a woman.

Options :

1. ✖ I have realised
2. ✖ after four decades of research and action
3. ✔ that most of the farmers of the world is a woman.
4. ✖ No error

Question Number : 56 Question Id : 2752286695 Question Type : MCQ Option Shuffling : Yes Is Question Mandatory : No Option Orientation : Vertical

Correct Marks : 1 Wrong Marks : 0.33

Select the most appropriate option that can substitute the underlined segment in the given sentence. If there is no need to substitute it, select 'No substitution required'.

Piyush will make a robot which has artificial intelligence.

Options :

1. ✖ which having artificial intelligence.
2. ✖ which have artificial intelligence.
3. ✖ which had artificial intelligence.
4. ✔ No substitution required

Question Number : 57 Question Id : 2752286696 Question Type : MCQ Option Shuffling : Yes Is Question Mandatory : No Option Orientation : Vertical

Correct Marks : 1 Wrong Marks : 0.33

Select the most appropriate option that can substitute the underlined segment in the given sentence. If there is no need to substitute it, select 'No substitution required'.

Shikha wasn't at home yesterday, is she?

Options :

1. ✓ was she
2. ✗ will she
3. ✗ wasn't she
4. ✗ No substitution required

Question Number : 58 Question Id : 2752286697 Question Type : MCQ Option Shuffling : Yes Is Question Mandatory : No Option Orientation : Vertical

Correct Marks : 1 Wrong Marks : 0.33

Select the most appropriate option that can substitute the underlined segment in the given sentence. If there is no need to substitute it, select 'No substitution required'.

Girish replied, "I haven't seen them in last month."

Options :

1. ✗ for last month
2. ✓ since last month
3. ✗ from last month
4. ✗ No substitution required

Question Number : 59 Question Id : 2752286698 Question Type : MCQ Option Shuffling : Yes Is Question Mandatory : No Option Orientation : Vertical

Correct Marks : 1 Wrong Marks : 0.33

Select the most appropriate option that can substitute the underlined segment in the given sentence. If there is no need to substitute it, select 'No substitution required'.

As soon as she finishes her English homework, she started watching television.

Options :

- 1. ✓ As soon as she finished
- 2. ✗ As soon as she finish
- 3. ✗ As soon as she finishing
- 4. ✗ No substitution required

Question Number : 60 Question Id : 2752286699 Question Type : MCQ Option Shuffling : Yes Is Question Mandatory : No Option Orientation : Vertical

Correct Marks : 1 Wrong Marks : 0.33

Select the most appropriate option that can substitute the underlined segment in the given sentence. If there is no need to substitute it, select 'No substitution required'.

No sooner she read the email than she started crying.

Options :

- 1. ✗ No sooner she reads
- 2. ✗ No soon had she read
- 3. ✓ No sooner had she read
- 4. ✗ No substitution required

Data Analysis Data Interpretation & Data Sufficiency

Section Id :	275228467
Section Number :	5
Section type :	Online
Mandatory or Optional :	Mandatory
Number of Questions :	5
Number of Questions to be attempted :	5
Section Marks :	5
Enable Mark as Answered Mark for Review and Clear Response :	Yes

Sub-Section Number :

1

Sub-Section Id :

275228556

Question Shuffling Allowed :

Yes

Question Number : 61

Question Id : 2752286700

Question Type : MCQ

Option Shuffling : Yes

Is Question Mandatory : No

Option Orientation : Vertical

Correct Marks : 1

Wrong Marks : 0.33

The following table shows the number of cars sold of four different showrooms namely A, B, C, D for the months January, February, March, April.

Month	A	B	C	D
Jan	20	40	30	-
Feb	20	10	30	30
Mar	20	60	5	10
Apr	60	30	10	-

The number of cars sold in each month is always between 95 and 125. What can be the sum of the maximum number of cars sold by showroom D in the months of January and April?

Note: For this question, discrepancy is found in question/answer. Full Marks is being awarded to all candidates.

Options :

1. 55
2. 60
3. 75
4. 45

Question Number : 62

Question Id : 2752286701

Question Type : MCQ

Option Shuffling : Yes

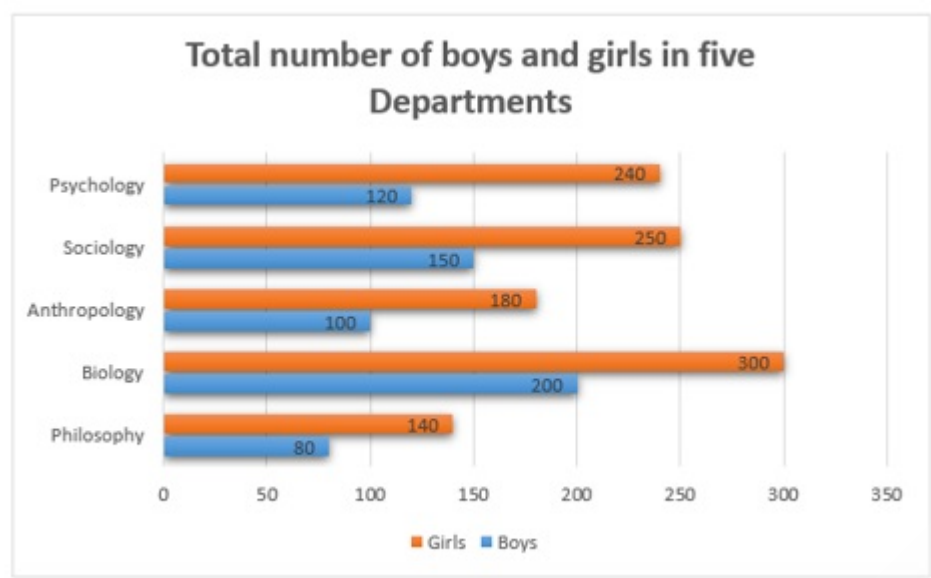
Is Question Mandatory : No

Option Orientation : Vertical

Correct Marks : 1

Wrong Marks : 0.33

The following graph gives the total number of boys and girls in five departments of a college.



What is the average number of boys from all the departments together?

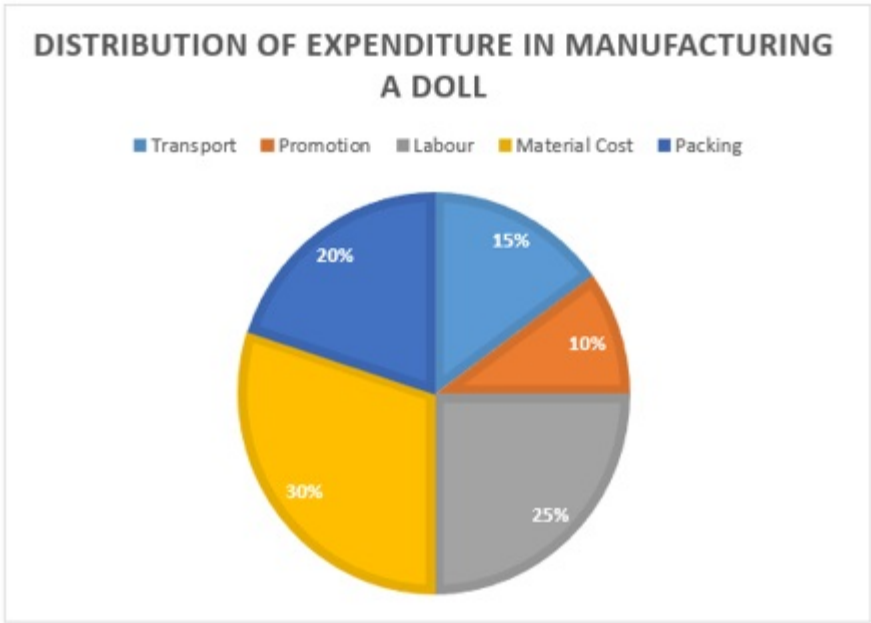
Options :

- 1. ✖ 105
- 2. ✖ 115
- 3. ✖ 125
- 4. ✔ 130

Question Number : 63 Question Id : 2752286702 Question Type : MCQ Option Shuffling : Yes Is Question Mandatory : No Option Orientation : Vertical

Correct Marks : 1 Wrong Marks : 0.33

The following pie chart gives information regarding the distribution of expenditure in manufacturing a doll.



The sum of angles of which of the following sectors is 126° ?

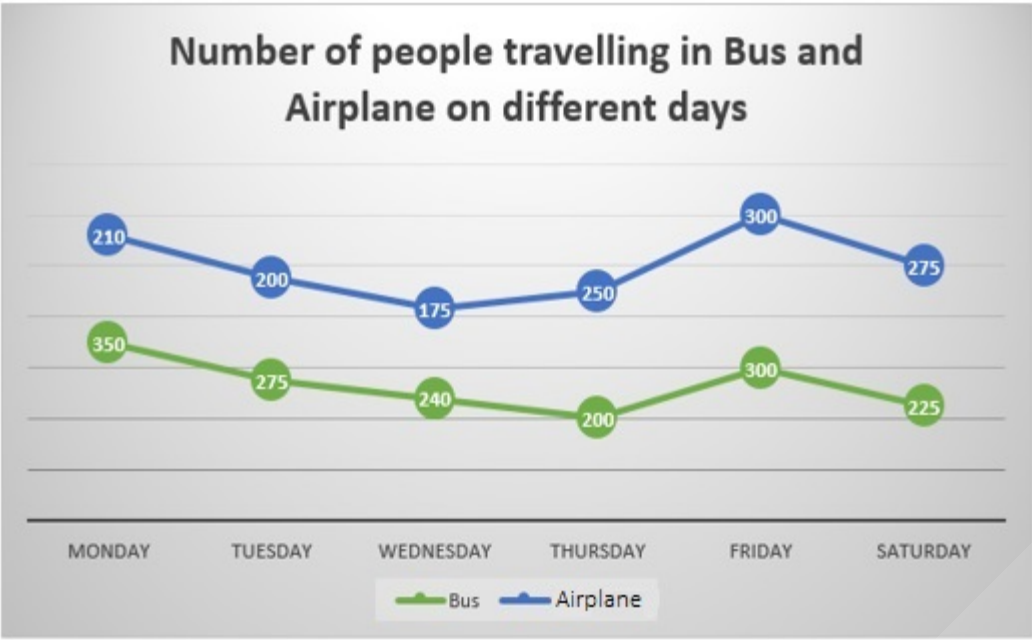
Options :

- 1. ✓ Packing and Transport
- 2. ✗ Labour and Transport
- 3. ✗ Material cost and Packing
- 4. ✗ Transport and Material cost

Question Number : 64 Question Id : 2752286703 Question Type : MCQ Option Shuffling : Yes Is Question Mandatory : No Option Orientation : Vertical

Correct Marks : 1 Wrong Marks : 0.33

The following line graph shows the information related to the number of people travelling to a city from Delhi using Bus and Airplane in a week in the month of January 2020.



If the number of people travelling by Bus on Thursday is increased by 20 percent and the number of people travelling on an Airplane on Thursday is decreased by 36 percent, then what is the difference between the total number of travellers on Monday and the total number of travellers on Thursday?

Options :

- 1. ✓ 160
- 2. ✗ 198
- 3. ✗ 175
- 4. ✗ 136

Question Number : 65 Question Id : 2752286704 Question Type : MCQ Option Shuffling : Yes Is Question Mandatory : No Option Orientation : Vertical

Correct Marks : 1 Wrong Marks : 0.33

The following table gives the information regarding 5 students (S1, S2, S3, S4, S5) marks in various assignments (A1, A2, A3, A4, A5, A6). Few values are missing in the table.

	S1	S2	S3	S4	S5	Row total
A1	97	99	98		99	491
A2	92	95		94		
A3	86	89		90	93	443
A4	78		76		85	405
A5		69	64	75		349
A6	49	53	48	60	55	
Column Total	468		463	502	505	

What are the marks obtained by S4 in the assignment A4?

Options :

- 1. ✖ 80
- 2. ✖ 95
- 3. ✔ 85
- 4. ✖ 90

Computer Proficiency (MS-Office)

Section Id :	275228468
Section Number :	6
Section type :	Online
Mandatory or Optional :	Mandatory
Number of Questions :	20
Number of Questions to be attempted :	20
Section Marks :	20
Enable Mark as Answered Mark for Review and Clear Response :	Yes
Sub-Section Number :	1
Sub-Section Id :	275228557
Question Shuffling Allowed :	Yes

Question Number : 66 Question Id : 2752286705 Question Type : MCQ Option Shuffling : Yes Is Question Mandatory : No Option Orientation : Vertical

Correct Marks : 1 Wrong Marks : 0.33

Which of the following is NOT a valid command option under the 'File' menu tab in Microsoft Word 2016?

Options :

- 1. ✖ New
- 2. ✖ Share
- 3. ✖ Print
- 4. ✔ Paste

Question Number : 67 Question Id : 2752286706 Question Type : MCQ Option Shuffling : Yes Is Question Mandatory : No Option Orientation : Vertical

Correct Marks : 1 Wrong Marks : 0.33

Which of the following application software enables you to create, edit and save professional documents like letters and reports?

Options :

- 1. ✖ Microsoft Paint
- 2. ✖ Microsoft Excel
- 3. ✖ Microsoft PowerPoint
- 4. ✔ Microsoft Word

Question Number : 68 Question Id : 2752286707 Question Type : MCQ Option Shuffling : Yes Is Question Mandatory : No Option Orientation : Vertical

Correct Marks : 1 Wrong Marks : 0.33

The concept of WYSIWYG was first introduced in Microsoft Word. What is the full form of WYSIWYG?

Options :

- 1. ✔ What You See Is What You Get
- 2. ✖ What You Save Is What You Get
- 3. ✖ What You Save Is What You Give

4. ✖ What You See Is What You Give

Question Number : 69 Question Id : 2752286708 Question Type : MCQ Option Shuffling : Yes Is Question Mandatory : No Option Orientation : Vertical

Correct Marks : 1 Wrong Marks : 0.33

Which of the following Microsoft Word commands helps you save an existing file with a new file name to a desired location on a hard drive?

Options :

1. ✖ Import
2. ✖ Publish
3. ✔ Save As
4. ✖ Print

Question Number : 70 Question Id : 2752286709 Question Type : MCQ Option Shuffling : Yes Is Question Mandatory : No Option Orientation : Vertical

Correct Marks : 1 Wrong Marks : 0.33

In Microsoft Word 2016, which of the following is a customisable toolbar that gives you quick access to commonly used commands such as Save, Undo and Redo?

Options :

1. ✖ Title bar
2. ✖ Status bar
3. ✔ Quick access toolbar
4. ✖ Scroll bar

Question Number : 71 Question Id : 2752286710 Question Type : MCQ Option Shuffling : Yes Is Question Mandatory : No Option Orientation : Vertical

Correct Marks : 1 Wrong Marks : 0.33

What is the default font size value when you open a new document in Microsoft Word 2016?

Options :

1. ✖ 8

2. ✖ 10

3. ✔ 11

4. ✖ 12

Question Number : 72 Question Id : 2752286711 Question Type : MCQ Option Shuffling : Yes Is Question Mandatory : No Option Orientation : Vertical

Correct Marks : 1 Wrong Marks : 0.33

In Microsoft Word, the window of a document can be moved by dragging its _____.

Options :

1. ✖ status bar

2. ✔ title bar

3. ✖ menu bar

4. ✖ zoom bar

Question Number : 73 Question Id : 2752286712 Question Type : MCQ Option Shuffling : Yes Is Question Mandatory : No Option Orientation : Vertical

Correct Marks : 1 Wrong Marks : 0.33

A Microsoft Excel worksheet is made up of rows and columns that intersect each other to form _____ where data is entered.

Options :

1. ✔ cells

2. ✖ blocks

3. ✖ sectors

4. ✖ tracks

Question Number : 74 Question Id : 2752286713 Question Type : MCQ Option Shuffling : Yes Is Question Mandatory : No Option Orientation : Vertical

Correct Marks : 1 Wrong Marks : 0.33

Which of the following is a valid absolute cell address in Microsoft Excel?

Options :

- 1. ✖ XX5
- 2. ✖ ZZ50
- 3. ✔ \$Z\$5
- 4. ✖ \$5Z\$

Question Number : 75 Question Id : 2752286714 Question Type : MCQ Option Shuffling : Yes Is Question Mandatory : No Option Orientation : Vertical

Correct Marks : 1 Wrong Marks : 0.33

After entering data in the cell of a Microsoft Excel worksheet, you can press the _____ key to move to the next row.

Options :

- 1. ✖ Tab
- 2. ✔ Enter
- 3. ✖ Esc
- 4. ✖ Shift

Question Number : 76 Question Id : 2752286715 Question Type : MCQ Option Shuffling : Yes Is Question Mandatory : No Option Orientation : Vertical

Correct Marks : 1 Wrong Marks : 0.33

What is the column header of the last column in a Microsoft Excel 2016 worksheet?

Options :

- 1. ✖ XXD
- 2. ✔ XFD
- 3. ✖ ZXA
- 4. ✖ ZXB

Question Number : 77 Question Id : 2752286716 Question Type : MCQ Option Shuffling : Yes Is Question Mandatory : No Option Orientation : Vertical

Correct Marks : 1 Wrong Marks : 0.33

Which of the following keyboard shortcuts can be used to move right to the farthest cell in the row

of a Microsoft Excel worksheet?

Options :

1. ✔ Ctrl+Right Arrow
2. ✖ Ctrl+Left Arrow
3. ✖ Ctrl+Home
4. ✖ Ctrl+End

Question Number : 78 Question Id : 2752286717 Question Type : MCQ Option Shuffling : Yes Is

Question Mandatory : No Option Orientation : Vertical

Correct Marks : 1 Wrong Marks : 0.33

What will be the result of the following Microsoft Excel formula?

=2048/1024/2

Options :

1. ✔ 1
2. ✖ 0
3. ✖ 4
4. ✖ 8

Question Number : 79 Question Id : 2752286718 Question Type : MCQ Option Shuffling : Yes Is

Question Mandatory : No Option Orientation : Vertical

Correct Marks : 1 Wrong Marks : 0.33

Which of the following Microsoft Excel functions displays the current date and time?

Options :

1. ✔ =NOW()
2. ✖ =DATE()
3. ✖ =DATEVALUE()

4. ✖ =TODAY()

Question Number : 80 Question Id : 2752286719 Question Type : MCQ Option Shuffling : Yes Is Question Mandatory : No Option Orientation : Vertical
Correct Marks : 1 Wrong Marks : 0.33

Which of the following appears at the topmost position in a Microsoft PowerPoint 2016 window?

Options :

- 1. ✖ Status bar
- 2. ✔ Title bar
- 3. ✖ Menu bar
- 4. ✖ Zoom bar

Question Number : 81 Question Id : 2752286720 Question Type : MCQ Option Shuffling : Yes Is Question Mandatory : No Option Orientation : Vertical
Correct Marks : 1 Wrong Marks : 0.33

What is the default extension of the presentation files created using Microsoft PowerPoint 97-2003?

Options :

- 1. ✔ .PPT
- 2. ✖ .PPTX
- 3. ✖ .PPX
- 4. ✖ .PTX

Question Number : 82 Question Id : 2752286721 Question Type : MCQ Option Shuffling : Yes Is Question Mandatory : No Option Orientation : Vertical
Correct Marks : 1 Wrong Marks : 0.33

Which of the following 'File' menu options of Microsoft PowerPoint 2016 can be used to save a newly created presentation file?

Options :

1. ✖ 'Save' only
2. ✖ 'Save As' only
3. ✔ Either 'Save' or 'Save As'
4. ✖ Neither 'Save' nor 'Save As'

Question Number : 83 Question Id : 2752286722 Question Type : MCQ Option Shuffling : Yes Is Question Mandatory : No Option Orientation : Vertical

Correct Marks : 1 Wrong Marks : 0.33

Which of the following menu tabs can be used to embed pictures or screenshots in a presentation slide in Microsoft PowerPoint 2016?

Options :

1. ✖ Home
2. ✖ View
3. ✔ Insert
4. ✖ Design

Question Number : 84 Question Id : 2752286723 Question Type : MCQ Option Shuffling : Yes Is Question Mandatory : No Option Orientation : Vertical

Correct Marks : 1 Wrong Marks : 0.33

Which of the following correctly defines a Microsoft PowerPoint presentation?

Options :

1. ✖ Organisation of elements on a slide
2. ✖ Printed set of slides that can be handed out to an audience for future reference
3. ✖ Slide annotation, reminder or piece of text intended for the presenter or the audience
4. ✔ Sequence of slides intended to be viewed by an audience

Question Number : 85 Question Id : 2752286724 Question Type : MCQ Option Shuffling : Yes Is Question Mandatory : No Option Orientation : Vertical

Correct Marks : 1 Wrong Marks : 0.33

By default, _____ placeholders appear in a slide when you create a new presentation file in

Microsoft PowerPoint 2016.

Options :

- 1. ✓ two
- 2. ✗ three
- 3. ✗ four
- 4. ✗ five



Teachingninja.in