



Teachingninja.in



Latest Govt Job updates



Private Job updates



Free Mock tests available

Visit - teachingninja.in



Teachingninja.in

WBSEDCL

Previous Year Paper

Office Executive

08 Sept, 2021 Shift 2



Question Paper Preview

Notations :

- 1.Options shown in green color and with ✓ icon are correct.
- 2.Options shown in red color and with ✗ icon are incorrect.

| | |
|--|---------------------|
| Subject Name : | Office Executive |
| Creation Date : | 2021-09-08 15:50:55 |
| Duration : | 90 |
| Total Marks : | 85 |
| Display Marks: | Yes |
| Share Answer Key With Delivery Engine : | No |
| Actual Answer Key : | Yes |
| Calculator : | None |
| Magnifying Glass Required? : | No |
| Ruler Required? : | No |
| Eraser Required? : | No |
| Scratch Pad Required? : | No |
| Rough Sketch/Notepad Required? : | No |
| Protractor Required? : | No |
| Show Watermark on Console? : | Yes |
| Highlighter : | No |
| Auto Save on Console? (SA type of questions will be always auto saved) : | No |

Office Executive

Group Number : 1

| | |
|-------------------------------|-----------|
| Group Id : | 275228337 |
| Group Maximum Duration : | 0 |
| Group Minimum Duration : | 90 |
| Show Attended Group? : | No |
| Edit Attended Group? : | No |
| Break time : | 0 |
| Group Marks : | 85 |
| Is this Group for Examiner? : | No |

General Awareness

| | |
|--|-----------|
| Section Id : | 275228469 |
| Section Number : | 1 |
| Section type : | Online |
| Mandatory or Optional : | Mandatory |
| Number of Questions : | 10 |
| Number of Questions to be attempted : | 10 |
| Section Marks : | 10 |
| Enable Mark as Answered Mark for Review and Clear Response : | Yes |
| Sub-Section Number : | 1 |
| Sub-Section Id : | 275228558 |
| Question Shuffling Allowed : | Yes |

Question Number : 1 Question Id : 2752286725 Question Type : MCQ Option Shuffling : Yes Is Question Mandatory : No Option Orientation : Vertical Correct Marks : 1 Wrong Marks : 0.33

Which freedom fighter and national leader among the following is born on 2nd October 1904 in Varanasi?

Options :

1. ✖ Gopal Krishna Gokhale
2. ✔ Lal Bahadur Shastri
3. ✖ Lala Lajpat Rai
4. ✖ Mohan Das Karamchand Gandhi

Question Number : 2 Question Id : 2752286726 Question Type : MCQ Option Shuffling : Yes Is

Question Mandatory : No Option Orientation : Vertical

Correct Marks : 1 Wrong Marks : 0.33

Who was the founder of Satavahana dynasty?

Options :

1. ✖ Ugrasena
2. ✖ Danti Durga
3. ✔ Simuka
4. ✖ Divakaramitra

Question Number : 3 Question Id : 2752286727 Question Type : MCQ Option Shuffling : Yes Is

Question Mandatory : No Option Orientation : Vertical

Correct Marks : 1 Wrong Marks : 0.33

The memorial of _____ is named 'Chaitya Bhumi'.

Options :

1. ✖ Lala Lajpat Rai
2. ✖ Lal Bahadur Shastri
3. ✖ Charan Singh
4. ✔ Dr. BR Ambedkar

Question Number : 4 Question Id : 2752286728 Question Type : MCQ Option Shuffling : Yes Is

Question Mandatory : No Option Orientation : Vertical

Correct Marks : 1 Wrong Marks : 0.33

Which river among the following is the second largest river in India?

Options :

- 1. ✔ Godavari
- 2. ✘ Krishna
- 3. ✘ Cauvery
- 4. ✘ Mahanadi

Question Number : 5 Question Id : 2752286729 Question Type : MCQ Option Shuffling : Yes Is Question Mandatory : No Option Orientation : Vertical

Correct Marks : 1 Wrong Marks : 0.33

Which of the following countries' capital city is Hanoi?

Options :

- 1. ✘ Turkey
- 2. ✘ Cyprus
- 3. ✔ Vietnam
- 4. ✘ Turkmenistan

Question Number : 6 Question Id : 2752286730 Question Type : MCQ Option Shuffling : Yes Is Question Mandatory : No Option Orientation : Vertical

Correct Marks : 1 Wrong Marks : 0.33

Bengali short story MAHESH is authored by:

Options :

- 1. ✘ Rabindranath Tagore
- 2. ✘ Bankim Chandra Chattopadhyay
- 3. ✘ Bibhuti Bhushan Bandyopadhyay
- 4. ✔ Sarat Chandra Chattopadhyay

Question Number : 7 Question Id : 2752286731 Question Type : MCQ Option Shuffling : Yes Is Question Mandatory : No Option Orientation : Vertical

Correct Marks : 1 Wrong Marks : 0.33

Who was the leader of the ANTI SATI movement?

Options :

1. ✖ William Carey
2. ✖ Iswarchandra Vidyasagar
3. ✔ Rammohan Roy
4. ✖ Keshab Chandra Sen

Question Number : 8 Question Id : 2752286732 Question Type : MCQ Option Shuffling : Yes Is

Question Mandatory : No Option Orientation : Vertical

Correct Marks : 1 Wrong Marks : 0.33

The Bengali novel PADMA NADIR MAJHI is authored by:

Options :

1. ✔ Manik Bandyopadhyay
2. ✖ Balaichand Mukhopadhyay
3. ✖ Prafulla Roy
4. ✖ Hasan Azizul Hoque

Question Number : 9 Question Id : 2752286733 Question Type : MCQ Option Shuffling : Yes Is

Question Mandatory : No Option Orientation : Vertical

Correct Marks : 1 Wrong Marks : 0.33

In India Doctors' day is celebrated in the memory of:

Options :

1. ✔ Dr. Bidhan Chandra Roy
2. ✖ Dr. Nil Ratan Sarkar
3. ✖ Dr. Debi Shetty
4. ✖ Dr. Radha Gobinda Kar

Question Number : 10 Question Id : 2752286734 Question Type : MCQ Option Shuffling : Yes Is

Question Mandatory : No Option Orientation : Vertical

Correct Marks : 1 Wrong Marks : 0.33

Which goddess is known as Mahisasur Mardini?

Options :

- 1. ❌ Kali
- 2. ❌ Jaggathdhatri
- 3. ❌ Saraswati
- 4. ✅ Durga

Reasoning

| | |
|--|-----------|
| Section Id : | 275228470 |
| Section Number : | 2 |
| Section type : | Online |
| Mandatory or Optional : | Mandatory |
| Number of Questions : | 10 |
| Number of Questions to be attempted : | 10 |
| Section Marks : | 10 |
| Enable Mark as Answered Mark for Review and Clear Response : | Yes |
| Sub-Section Number : | 1 |
| Sub-Section Id : | 275228559 |
| Question Shuffling Allowed : | Yes |

Question Number : 11 Question Id : 2752286735 Question Type : MCQ Option Shuffling : Yes Is Question Mandatory : No Option Orientation : Vertical Correct Marks : 1 Wrong Marks : 0.33

Select the option that is related to the third word in the same way as the second word is related to the first word.

Area : Hectare :: Resistance : ?

Options :

- 1. ❌ Joule
- 2. ❌ Second

3. ✖ Radian

4. ✔ Ohm

Question Number : 12 Question Id : 2752286736 Question Type : MCQ Option Shuffling : Yes Is Question Mandatory : No Option Orientation : Vertical

Correct Marks : 1 Wrong Marks : 0.33

In a certain code language, 'BRANCH' is written as 'IBOZSA'. How will 'DOCTOR' be written in that language?

Options :

1. ✖ SNUDPC

2. ✖ SNSBPC

3. ✔ SNUBPC

4. ✖ SNUBPE

Question Number : 13 Question Id : 2752286737 Question Type : MCQ Option Shuffling : Yes Is Question Mandatory : No Option Orientation : Vertical

Correct Marks : 1 Wrong Marks : 0.33

A family consists of 6 members K, L, M, N, O, P. L is the son of M, but M is not the mother of L. K and M are a married couple. O is the brother of M. N is the daughter of K, and P is the brother of K. Who is the brother-in-law of M?

Options :

1. ✖ K

2. ✖ O

3. ✖ L

4. ✔ P

Question Number : 14 Question Id : 2752286738 Question Type : MCQ Option Shuffling : Yes Is Question Mandatory : No Option Orientation : Vertical

Correct Marks : 1 Wrong Marks : 0.33

Select the number from among the given options that can replace the question mark (?) in the

following series.

2, 4, 12, 48, 240, ?

Options :

- 1. ✖ 1200
- 2. ✖ 1680
- 3. ✖ 1500
- 4. ✔ 1440

Question Number : 15 Question Id : 2752286739 Question Type : MCQ Option Shuffling : Yes Is Question Mandatory : No Option Orientation : Vertical

Correct Marks : 1 Wrong Marks : 0.33

Eight kindergartners K, L, M, N, O, P, Q, R are seated in a circle, facing the centre, for lunch. N is between L and Q. P is between K and R. O is second to the right of K. Which of the following is M's position?

Options :

- 1. ✖ Between O and P
- 2. ✔ Between K and O
- 3. ✖ Between Q and P
- 4. ✖ Between P and L

Question Number : 16 Question Id : 2752286740 Question Type : MCQ Option Shuffling : Yes Is Question Mandatory : No Option Orientation : Vertical

Correct Marks : 1 Wrong Marks : 0.33

If '÷' means subtraction, '−' means multiplication, '×' means addition, and '+' means division, then find the value of the given expression.

$40 \times 120 \div 80 - 40 + 20$

Options :

- 1. ✖ 16
- 2. ✔ 0

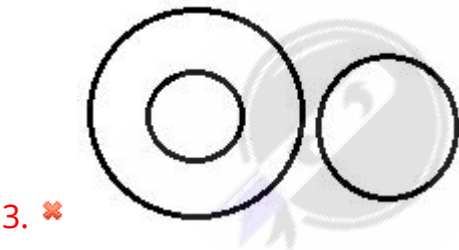
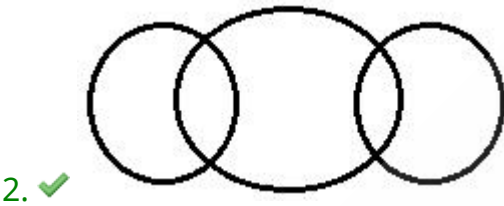

- 3. ✖ 12
- 4. ✖ 8

Question Number : 17 Question Id : 2752286741 Question Type : MCQ Option Shuffling : Yes Is Question Mandatory : No Option Orientation : Vertical Correct Marks : 1 Wrong Marks : 0.33

Select the Venn diagram that best represents the relationship between the following classes.

Men, Journalists, Doctors

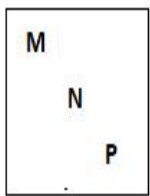
Options :



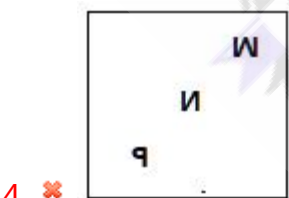
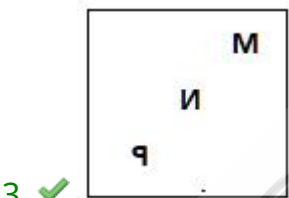
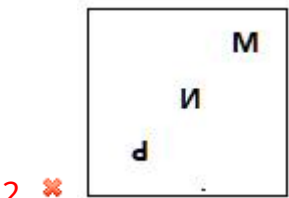
Question Number : 18 Question Id : 2752286742 Question Type : MCQ Option Shuffling : Yes Is Question Mandatory : No Option Orientation : Vertical

Correct Marks : 1 Wrong Marks : 0.33

Select the correct mirror image of the given figure when the mirror is placed to the right side of the figure.



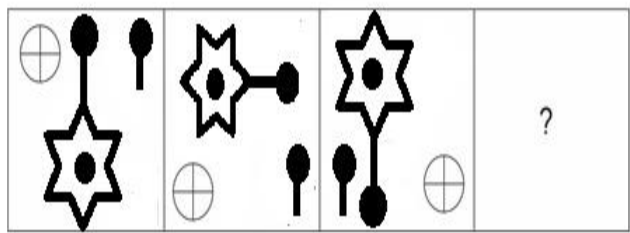
Options :



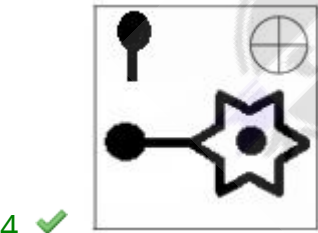
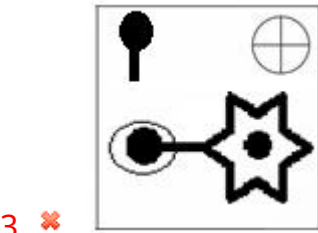
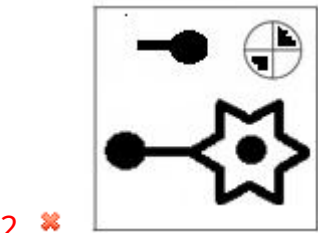
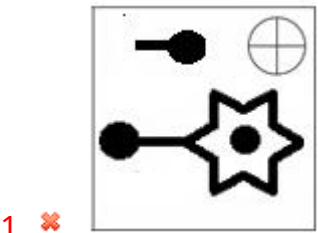
Question Number : 19 Question Id : 2752286743 Question Type : MCQ Option Shuffling : Yes Is Question Mandatory : No Option Orientation : Vertical

Correct Marks : 1 Wrong Marks : 0.33

Select the figure from among the given options that can replace the question mark (?) in the following series.



Options :



Question Number : 20 Question Id : 2752286744 Question Type : MCQ Option Shuffling : Yes Is Question Mandatory : No Option Orientation : Vertical Correct Marks : 1 Wrong Marks : 0.33

Select the figure from the options that can replace the question mark (?) and complete the pattern.



Options :



Quantitative Aptitude

| | |
|-------------------------|-----------|
| Section Id : | 275228471 |
| Section Number : | 3 |
| Section type : | Online |
| Mandatory or Optional : | Mandatory |
| Number of Questions : | 20 |

Number of Questions to be attempted : 20

Section Marks : 20

Enable Mark as Answered Mark for Review and Clear Response : Yes

Sub-Section Number : 1

Sub-Section Id : 275228560

Question Shuffling Allowed : Yes

Question Number : 21 Question Id : 2752286745 Question Type : MCQ Option Shuffling : Yes Is Question Mandatory : No Option Orientation : Vertical

Correct Marks : 1 Wrong Marks : 0.33

What is the value of $\frac{1}{20} + \frac{1}{30} + \frac{1}{42} + \frac{1}{56} + \frac{1}{72} + \frac{1}{90}$?

Options :

1. ✖ $\frac{1}{7}$

2. ✖ $\frac{11}{72}$

3. ✔ $\frac{3}{20}$

4. ✖ $\frac{7}{45}$

Question Number : 22 Question Id : 2752286746 Question Type : MCQ Option Shuffling : Yes Is Question Mandatory : No Option Orientation : Vertical

Correct Marks : 1 Wrong Marks : 0.33

What is the value of $\frac{(0.0003)^2 - 0.0003 \times 0.0007 + (0.0007)^2}{(0.0003)^3 + (0.0007)^3}$?

Options :

1. ✖ 1250

2. ✔ 1000

3. ✖ 1200

4. ✖ 800

Question Number : 23 Question Id : 2752286747 Question Type : MCQ Option Shuffling : Yes Is Question Mandatory : No Option Orientation : Vertical

Correct Marks : 1 Wrong Marks : 0.33

What is the LCM of 15, 25 and 30?

Options :

1. ✖ 180

2. ✖ 90

3. ✔ 150

4. ✖ 300

Question Number : 24 Question Id : 2752286748 Question Type : MCQ Option Shuffling : Yes Is Question Mandatory : No Option Orientation : Vertical

Correct Marks : 1 Wrong Marks : 0.33

Find the HCF of 48, 72 and 18.

Options :

1. ✖ 3

2. ✔ 6

3. ✖ 9

4. ✖ 12

Question Number : 25 Question Id : 2752286749 Question Type : MCQ Option Shuffling : Yes Is Question Mandatory : No Option Orientation : Vertical

Correct Marks : 1 Wrong Marks : 0.33

Sarita obtained 50% marks in Paper 1 and 68% marks in Paper 2 of a subject. However, if her overall percentage in the subject came to 60%, what was the weightage of Paper 1 to that of Paper 2 for the purpose of calculation of the overall percentage?

Options :

1. ✖ 34 : 25

2. ✖ 17 : 18

3. ✖ 5 : 4

4. ✔ 4 : 5

Question Number : 26 Question Id : 2752286750 Question Type : MCQ Option Shuffling : Yes Is Question Mandatory : No Option Orientation : Vertical

Correct Marks : 1 Wrong Marks : 0.33

If 80% of x is 20 more than 90% of 120, then 35% of x is equal to:

Options :

1. ✔ 56

2. ✖ 49

3. ✖ 63

4. ✖ 70

Question Number : 27 Question Id : 2752286751 Question Type : MCQ Option Shuffling : Yes Is

Question Mandatory : No Option Orientation : Vertical

Correct Marks : 1 Wrong Marks : 0.33

A trader sold two items for ₹ 3,910 each. On the first item, she made a profit of 15%, whereas on the second, she incurred a loss of 15%. What was her overall profit or loss in percentage?

Options :

1. ✖ 2% profit

2. ✖ 2.5% profit

3. ✖ 2.5% loss

4. ✔ 2.25% loss

Question Number : 28 Question Id : 2752286752 Question Type : MCQ Option Shuffling : Yes Is

Question Mandatory : No Option Orientation : Vertical

Correct Marks : 1 Wrong Marks : 0.33

Rahu and Ketu made investments in a business in the ratio 7 : 11 and decided to divide the end-of-year profit in the ratio of the sums invested. If Ketu's share in the year-end profit was ₹ 13,200, what was the total profit earned in the business in that year?

Options :

1. ✖ ₹ 19,800

2. ✖ ₹ 18,000

3. ✔ ₹ 21,600

4. ✖ ₹ 23,400

Question Number : 29 Question Id : 2752286753 Question Type : MCQ Option Shuffling : Yes Is Question Mandatory : No Option Orientation : Vertical

Correct Marks : 1 Wrong Marks : 0.33

What is the interest earned on a sum of ₹ 6,500 in 4 years at the rate of 6% simple interest per annum?

Options :

1. ✖ ₹ 1,500

2. ✔ ₹ 1,560

3. ✖ ₹ 1,495

4. ✖ ₹ 1,625

Question Number : 30 Question Id : 2752286754 Question Type : MCQ Option Shuffling : Yes Is Question Mandatory : No Option Orientation : Vertical

Correct Marks : 1 Wrong Marks : 0.33

If $8x6947$ is divisible by 11, then find the value of x .

Options :

1. ✖ 5

2. ✖ 4

3. ✔ 2

4. ✖ 1

Question Number : 31 Question Id : 2752286755 Question Type : MCQ Option Shuffling : Yes Is



Question Mandatory : No Option Orientation : Vertical

Correct Marks : 1 Wrong Marks : 0.33

What is the value of $1 - 0.\bar{1}$?

Options :

1. ✖ 0.9

2. ✔ $0.\bar{8}$

3. ✖ $0.8\bar{9}$

4. ✖ $0.\bar{9}$

Question Number : 32 Question Id : 2752286756 Question Type : MCQ Option Shuffling : Yes Is

Question Mandatory : No Option Orientation : Vertical

Correct Marks : 1 Wrong Marks : 0.33

A train travels for 7 hours at a speed of 60 km/h. If it has to cover the same distance in 4 hours, what should its speed be in km/h?

Options :

1. ✖ 90

2. ✖ 96

3. ✖ 120

4. ✔ 105

Question Number : 33 Question Id : 2752286757 Question Type : MCQ Option Shuffling : Yes Is

Question Mandatory : No Option Orientation : Vertical

Correct Marks : 1 Wrong Marks : 0.33

The average of five numbers is 29 and the average of the smallest three of them is 23. What is the average of the greatest two numbers?

Options :

1. ✖ 26

2. ✖ 36

3. ✔ 38

4. ✖ 42

Question Number : 34 Question Id : 2752286758 Question Type : MCQ Option Shuffling : Yes Is

Question Mandatory : No Option Orientation : Vertical

Correct Marks : 1 Wrong Marks : 0.33

The simple interest earned in two years on ₹ 1,125 is ₹ 180. What is the rate of simple interest per annum?

Options :

1. ✖ 5%

2. ✖ 6%

3. ✔ 8%

4. ✖ 9%

Question Number : 35 Question Id : 2752286759 Question Type : MCQ Option Shuffling : Yes Is

Question Mandatory : No Option Orientation : Vertical

Correct Marks : 1 Wrong Marks : 0.33

The HCF of x and 48 is 16 while the LCM of x and 48 is 96. What is the value of x ?

Options :

1. ✖ 16

2. ✓ 32

3. ✖ 24

4. ✖ 8

Question Number : 36 Question Id : 2752286760 Question Type : MCQ Option Shuffling : Yes Is Question Mandatory : No Option Orientation : Vertical

Correct Marks : 1 Wrong Marks : 0.33

What is 32.5% of 280?

Options :

1. ✖ 98

2. ✓ 91

3. ✖ 78

4. ✖ 84.5

Question Number : 37 Question Id : 2752286761 Question Type : MCQ Option Shuffling : Yes Is Question Mandatory : No Option Orientation : Vertical

Correct Marks : 1 Wrong Marks : 0.33

By selling a steel almirah for ₹ 17,400, Danish made a profit of 20%. On another almirah having the same cost price, he lost 18%. What was the selling price of the second almirah?

Options :

1. ✖ ₹ 11,980

2. ✖ ₹ 11,880

3. ✓ ₹ 11,890

4. ✗ ₹ 11,990

Question Number : 38 Question Id : 2752286762 Question Type : MCQ Option Shuffling : Yes Is Question Mandatory : No Option Orientation : Vertical

Correct Marks : 1 Wrong Marks : 0.33

Which of the following numbers is divisible by 3?

Options :

1. ✗ 136

2. ✗ 146

3. ✓ 156

4. ✗ 166

Question Number : 39 Question Id : 2752286763 Question Type : MCQ Option Shuffling : Yes Is Question Mandatory : No Option Orientation : Vertical

Correct Marks : 1 Wrong Marks : 0.33

In a bag, the ratio of the number of red balls to that of green balls is 7 : 10. If 12 green balls are taken out and 12 red ones added, the ratio of the number of red balls to that of green balls will become 8 : 9. How many red balls were there in the bag to begin with?

Options :

1. ✓ 84

2. ✗ 70

3. ✗ 98

Question Number : 40 Question Id : 2752286764 Question Type : MCQ Option Shuffling : Yes Is
Question Mandatory : No Option Orientation : Vertical
Correct Marks : 1 Wrong Marks : 0.33

The perimeter of a rectangle is 48 m while its length is 14 m. What is the area of the rectangle?

Options :

1. ✖ 476 m²

2. ✔ 140 m²

3. ✖ 280 m²

4. ✖ 336 m²

General English

| | |
|---|-----------|
| Section Id : | 275228472 |
| Section Number : | 4 |
| Section type : | Online |
| Mandatory or Optional : | Mandatory |
| Number of Questions : | 20 |
| Number of Questions to be attempted : | 20 |
| Section Marks : | 20 |
| Enable Mark as Answered Mark for Review and Clear Response : | Yes |
| Sub-Section Number : | 1 |
| Sub-Section Id : | 275228561 |

Question Shuffling Allowed : Yes

Question Number : 41 Question Id : 2752286765 Question Type : MCQ Option Shuffling : Yes Is

Question Mandatory : No Option Orientation : Vertical

Correct Marks : 1 Wrong Marks : 0.33

Select the most appropriate synonym of the given word.

Identify

Options :

- 1. ✖ Overlook
- 2. ✔ Pinpoint
- 3. ✖ Oversee
- 4. ✖ Accomplish

Question Number : 42 Question Id : 2752286766 Question Type : MCQ Option Shuffling : Yes Is

Question Mandatory : No Option Orientation : Vertical

Correct Marks : 1 Wrong Marks : 0.33

Select the most appropriate synonym of the given word.

Culminate

Options :

- 1. ✔ Conclude
- 2. ✖ Create
- 3. ✖ Inaugurate
- 4. ✖ Emanate

Question Number : 43 Question Id : 2752286767 Question Type : MCQ Option Shuffling : Yes Is

Question Mandatory : No Option Orientation : Vertical

Correct Marks : 1 Wrong Marks : 0.33

Select the most appropriate ANTONYM of the given word.

Soothe

Options :

1. ✓ Incite
2. ✗ Mitigate
3. ✗ Mollify
4. ✗ Scrub

Question Number : 44 Question Id : 2752286768 Question Type : MCQ Option Shuffling : Yes Is

Question Mandatory : No Option Orientation : Vertical

Correct Marks : 1 Wrong Marks : 0.33

Select the most appropriate ANTONYM of the given word.

Promise

Options :

1. ✗ Warrant
2. ✗ Betroth
3. ✓ Renege
4. ✗ Eulogise

Question Number : 45 Question Id : 2752286769 Question Type : MCQ Option Shuffling : Yes Is

Question Mandatory : No Option Orientation : Vertical

Correct Marks : 1 Wrong Marks : 0.33

Select the correctly spelt word.

Options :

1. ✗ Reprihend
2. ✗ Repremand
3. ✓ Castigate
4. ✗ Dinounce

Question Number : 46 Question Id : 2752286770 Question Type : MCQ Option Shuffling : Yes Is

Question Mandatory : No Option Orientation : Vertical

Correct Marks : 1 Wrong Marks : 0.33

Select the correctly spelt word.

Options :

1. ✖ Buldgeon
2. ✖ Trunchoen
3. ✔ Lambaste
4. ✖ Magneficent

Question Number : 47 Question Id : 2752286771 Question Type : MCQ Option Shuffling : Yes Is

Question Mandatory : No Option Orientation : Vertical

Correct Marks : 1 Wrong Marks : 0.33

Select the INCORRECTLY spelt word.

Options :

1. ✖ Sumptuous
2. ✖ Splendiferous
3. ✖ Phosphorescent
4. ✔ Respleindent

Question Number : 48 Question Id : 2752286772 Question Type : MCQ Option Shuffling : Yes Is

Question Mandatory : No Option Orientation : Vertical

Correct Marks : 1 Wrong Marks : 0.33

Select the most appropriate option to fill in the blanks.

I wore my _____ shoes and set out to _____ for the upcoming elections.

Options :

1. ✖ canvas; canvas
2. ✔ canvas; canvass
3. ✖ canvass; canvas
4. ✖ canvass; canvass

Question Number : 49 Question Id : 2752286773 Question Type : MCQ Option Shuffling : Yes Is Question Mandatory : No Option Orientation : Vertical

Correct Marks : 1 Wrong Marks : 0.33

Select the most appropriate option to fill in the blanks.

Please do not _____ with that gold _____.

Options :

1. ✖ medal; medal
2. ✖ meddle; meddle
3. ✔ meddle; medal
4. ✖ medal; meddle

Question Number : 50 Question Id : 2752286774 Question Type : MCQ Option Shuffling : Yes Is Question Mandatory : No Option Orientation : Vertical

Correct Marks : 1 Wrong Marks : 0.33

Select the most appropriate option to fill in the blanks.

Last evening while shopping at the weekly _____, I saw a _____ accident.

Options :

1. ✖ bazaar; bazaar
2. ✔ bazaar; bizarre
3. ✖ bizarre; bazaar
4. ✖ bizarre; bizarre

Question Number : 51 Question Id : 2752286775 Question Type : MCQ Option Shuffling : Yes Is Question Mandatory : No Option Orientation : Vertical

Correct Marks : 1 Wrong Marks : 0.33

Select the most appropriate option to fill in the blanks.

The school _____ meets once a week to _____ students who have been neglecting studies.

Options :

- 1. ✖ counsel; counsel
- 2. ✖ council; council
- 3. ✔ council; counsel
- 4. ✖ counsel; council

Question Number : 52 Question Id : 2752286776 Question Type : MCQ Option Shuffling : Yes Is

Question Mandatory : No Option Orientation : Vertical

Correct Marks : 1 Wrong Marks : 0.33

Select the option that can be used as a one-word substitute for the given group of words.

Ready to believe especially on slight or uncertain evidence

Options :

- 1. ✖ Skeptical
- 2. ✔ Credulous
- 3. ✖ Agnostic
- 4. ✖ Staunch

Question Number : 53 Question Id : 2752286777 Question Type : MCQ Option Shuffling : Yes Is

Question Mandatory : No Option Orientation : Vertical

Correct Marks : 1 Wrong Marks : 0.33

Select the option that can be used as a one-word substitute for the given group of words.

One who eats everything indiscriminately

Options :

- 1. ✖ Herbivorous
- 2. ✔ Omnivorous
- 3. ✖ Vegan
- 4. ✖ Carnivorous

Question Number : 54 Question Id : 2752286778 Question Type : MCQ Option Shuffling : Yes Is Question Mandatory : No Option Orientation : Vertical

Correct Marks : 1 Wrong Marks : 0.33

The following sentence has been divided into parts. One of them may contain an error. Select the part that contains the error from the given options. If you don't find any error, mark 'No error' as your answer.

Hoping that my friend / would be in Mumbai, / I went their.

Options :

1. ✖ Hoping that my friend
2. ✖ would be in Mumbai,
3. ✔ I went their.
4. ✖ No error

Question Number : 55 Question Id : 2752286779 Question Type : MCQ Option Shuffling : Yes Is Question Mandatory : No Option Orientation : Vertical

Correct Marks : 1 Wrong Marks : 0.33

The following sentence has been divided into parts. One of them may contain an error. Select the part that contains the error from the given options. If you don't find any error, mark 'No error' as your answer.

The cafeteria, / with all its contents, / was burnt down.

Options :

1. ✖ The cafeteria,
2. ✖ with all its contents,
3. ✖ was burnt down.
4. ✔ No error

Question Number : 56 Question Id : 2752286780 Question Type : MCQ Option Shuffling : Yes Is Question Mandatory : No Option Orientation : Vertical

Correct Marks : 1 Wrong Marks : 0.33

The following sentence has been divided into parts. One of them may contain an error. Select the part that contains the error from the given options. If you don't find any error, mark 'No error' as your answer.

Pay careful attention / on what your / teacher says.

Options :

1. ✖ Pay careful attention
2. ✔ on what your
3. ✖ teacher says.
4. ✖ No error

Question Number : 57 Question Id : 2752286781 Question Type : MCQ Option Shuffling : Yes Is Question Mandatory : No Option Orientation : Vertical

Correct Marks : 1 Wrong Marks : 0.33

Select the most appropriate option that can substitute the underlined segment in the given sentence. If there is no need to substitute it, select 'No substitution required'.

Ramesh wants not lesser than five kilos of sugar.

Options :

1. ✔ not less than
2. ✖ not less then
3. ✖ not fewer then
4. ✖ No substitution required

Question Number : 58 Question Id : 2752286782 Question Type : MCQ Option Shuffling : Yes Is Question Mandatory : No Option Orientation : Vertical

Correct Marks : 1 Wrong Marks : 0.33

Select the most appropriate option that can substitute the underlined segment in the given sentence. If there is no need to substitute it, select 'No substitution required'.

I intend to dispose off all the electronic waste.

Options :

1. ✖ to dispose in
2. ✔ to dispose of
3. ✖ to dispose out
4. ✖ No substitution required

Question Number : 59 Question Id : 2752286783 Question Type : MCQ Option Shuffling : Yes Is

Question Mandatory : No Option Orientation : Vertical

Correct Marks : 1 Wrong Marks : 0.33

Select the most appropriate option that can substitute the underlined segment in the given sentence. If there is no need to substitute it, select 'No substitution required'.

I am sorry, I can't comply to your wishes.

Options :

1. ✖ comply in
2. ✖ comply for
3. ✔ comply with
4. ✖ No substitution required

Question Number : 60 Question Id : 2752286784 Question Type : MCQ Option Shuffling : Yes Is

Question Mandatory : No Option Orientation : Vertical

Correct Marks : 1 Wrong Marks : 0.33

Select the most appropriate meaning of the given proverb.

Waste not, want not

Options :

1. ✖ If you do not want anything, then do not waste.
2. ✖ Do not waste anything if you do not want it later.
3. ✖ Waste what you will never need again.
4. ✔ If you do not waste, you may not lack those things when needed.

Data Analysis Data Interpretation & Data Sufficiency

| | |
|--|-----------|
| Section Id : | 275228473 |
| Section Number : | 5 |
| Section type : | Online |
| Mandatory or Optional : | Mandatory |
| Number of Questions : | 5 |
| Number of Questions to be attempted : | 5 |
| Section Marks : | 5 |
| Enable Mark as Answered Mark for Review and Clear Response : | Yes |
| Sub-Section Number : | 1 |
| Sub-Section Id : | 275228562 |
| Question Shuffling Allowed : | Yes |

Question Number : 61 Question Id : 2752286785 Question Type : MCQ Option Shuffling : Yes Is Question Mandatory : No Option Orientation : Vertical Correct Marks : 1 Wrong Marks : 0.33

The following table shows the number of runs scored by various Batsmen (Rohit, Virat, Rahul and Dhawan) against various teams (Pakistan, England, Australia, New Zealand) in the World cup. Some information is missing from the table.

| Matches | Pakistan | England | Australia | New Zealand | Total |
|---------|----------|---------|-----------|-------------|-------|
| Rohit | 80 | 70 | | 80 | |
| Virat | 60 | | 60 | | |
| Rahul | | | 60 | | 220 |
| Dhawan | 90 | | 70 | 60 | |

- 1) Rohit's average runs in the world cup was 72.5 in the four matches.
- 2) The average runs scored by the 4 batsmen in the match against Pakistan is 67.5.
- 3) Virat's average runs for all the four matches were 1.5 times of Rahul's runs in the match against Pakistan.

- 4) Virat and Dhawan scored the same runs in the match against New Zealand. The average runs in the match against New Zealand is the same as the average runs in the match against Pakistan.
- 5) The total runs in the match against England were 10 less than the total runs in the match against Pakistan for all 4 players.

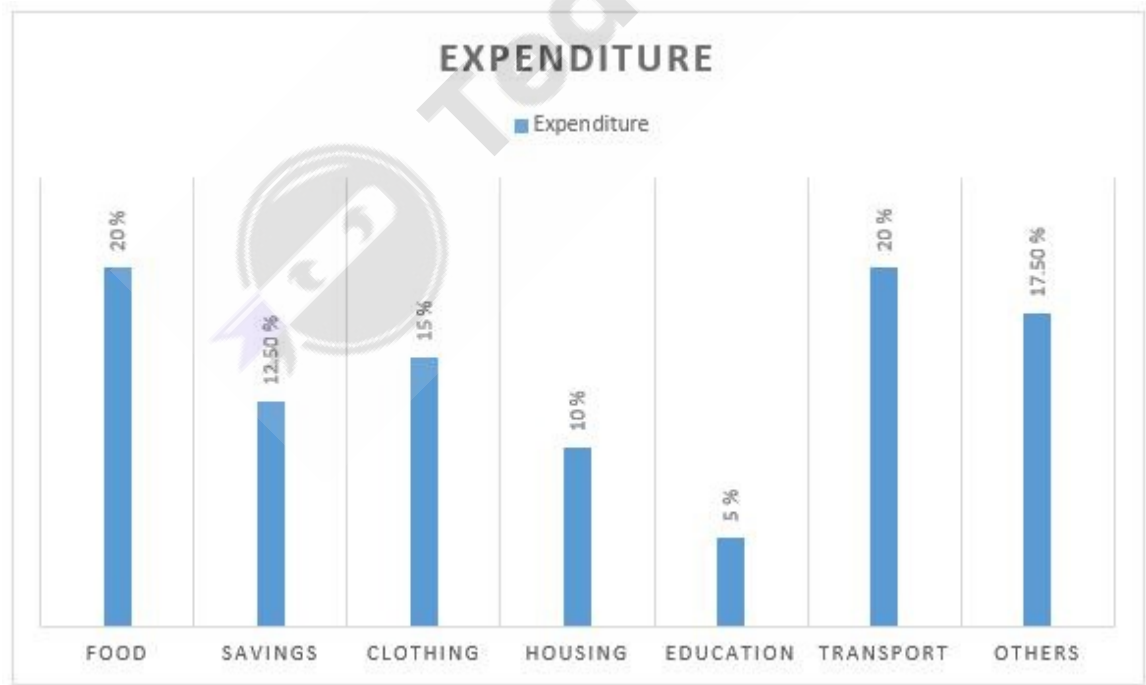
Who is the highest run scorer in the match against New Zealand?

Options :

- 1. ✓ Rohit
- 2. ✗ Virat
- 3. ✗ Rahul
- 4. ✗ Dhawan

Question Number : 62 Question Id : 2752286786 Question Type : MCQ Option Shuffling : Yes Is Question Mandatory : No Option Orientation : Vertical Correct Marks : 1 Wrong Marks : 0.33

The following bar graph shows the spending of a family income on various items and savings in the month of May 2020. The total family income is Rs. 70,000 per month.



What is the total amount of money spent by the family on Housing and Food?

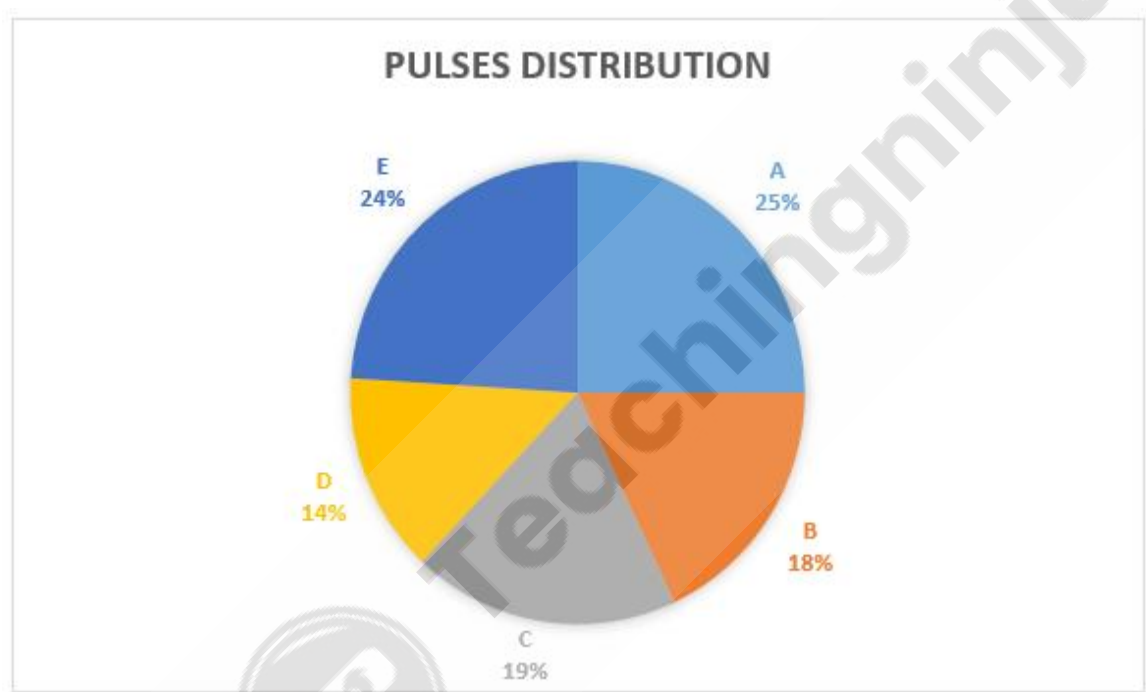
Options :

- 1. ✖ Rs. 16,000
- 2. ✖ Rs. 17,500
- 3. ✔ Rs. 21,000
- 4. ✖ Rs. 18,000

Question Number : 63 Question Id : 2752286787 Question Type : MCQ Option Shuffling : Yes Is Question Mandatory : No Option Orientation : Vertical

Correct Marks : 1 Wrong Marks : 0.33

The following pie chart shows the distribution of pulses to various retailers by the government in March 2020.



What is the central angle corresponding to the quantity of pulses distributed to the retailer E?

Options :

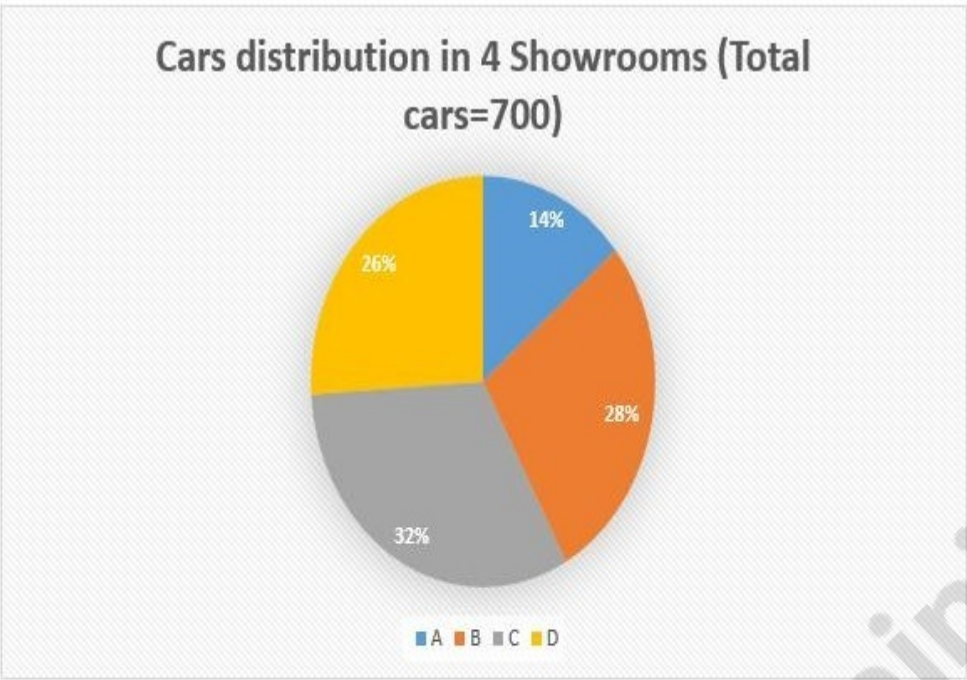
- 1. ✖ 93.2°
- 2. ✔ 86.4°
- 3. ✖ 76.3°
- 4. ✖ 67.5°

Question Number : 64 Question Id : 2752286788 Question Type : MCQ Option Shuffling : Yes Is

Question Mandatory : No Option Orientation : Vertical

Correct Marks : 1 Wrong Marks : 0.33

The following pie chart shows the distribution of cars in the 4 Showrooms (A, B, C, D).



The following table gives the ratio of diesel cars and petrol cars among the cars distributed in the four showrooms.

| Showroom | |
|----------|-----|
| A | 3:4 |
| B | 5:9 |
| C | 5:3 |
| D | 1:1 |

Number of petrol cars in the showroom C is what percent more than the number of diesel cars in the showroom A?

Options :

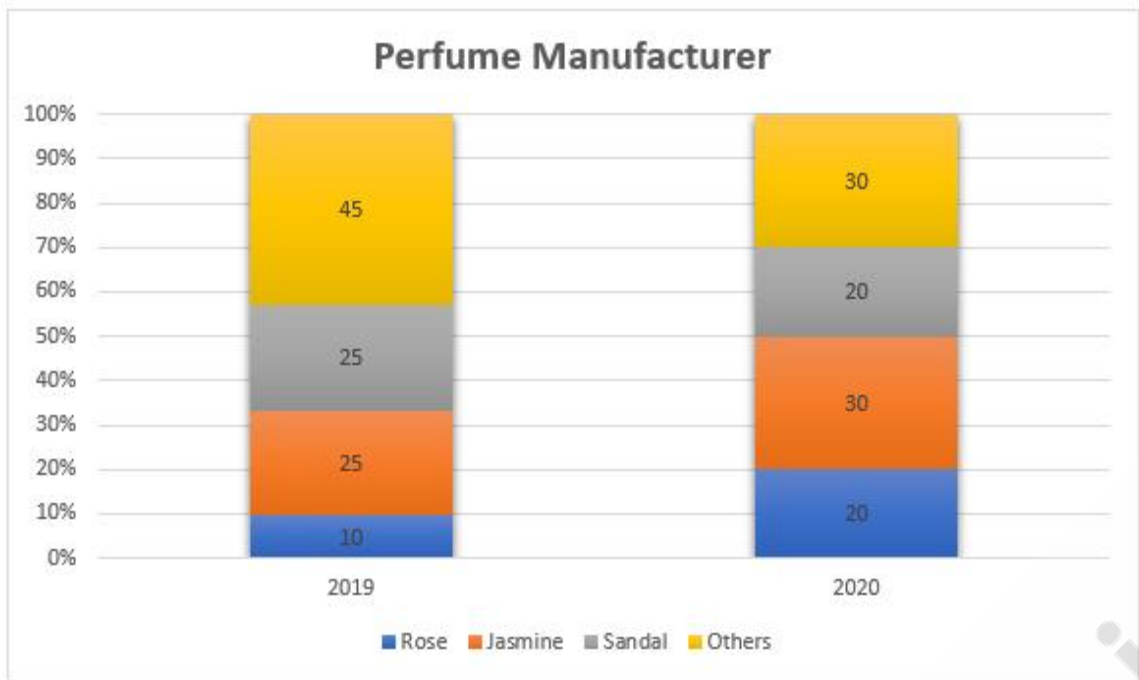
- 1. ✖ 200 percent
- 2. ✔ 100 percent
- 3. ✖ 50 percent
- 4. ✖ 150 percent

Question Number : 65 Question Id : 2752286789 Question Type : MCQ Option Shuffling : Yes Is

Question Mandatory : No Option Orientation : Vertical

Correct Marks : 1 Wrong Marks : 0.33

The following stacked column shows the data related to a perfume manufacturer given in the form of a percentage in the sub-divided bar diagram.



What is the production of jasmine perfume and rose perfume in the year 2020, given that the total perfume production in the year 2020 was 8000 units?

Options :

- 1. ✓ 4000 units
- 2. ✗ 3500 units
- 3. ✗ 3000 units
- 4. ✗ 5000 units

Computer Proficiency (MS-Office)

| | |
|--|-----------|
| Section Id : | 275228474 |
| Section Number : | 6 |
| Section type : | Online |
| Mandatory or Optional : | Mandatory |
| Number of Questions : | 20 |
| Number of Questions to be attempted : | 20 |
| Section Marks : | 20 |
| Enable Mark as Answered Mark for Review and Clear Response : | Yes |

Sub-Section Number : 1
Sub-Section Id : 275228563
Question Shuffling Allowed : Yes

Question Number : 66 Question Id : 2752286790 Question Type : MCQ Option Shuffling : Yes Is Question Mandatory : No Option Orientation : Vertical
Correct Marks : 1 Wrong Marks : 0.33

Which of the following is NOT a valid command option under the 'Home' menu tab in Microsoft Word 2016?

Options :

1. ✖ Change case
2. ✖ Format Painter
3. ✔ Save As
4. ✖ Sort

Question Number : 67 Question Id : 2752286791 Question Type : MCQ Option Shuffling : Yes Is Question Mandatory : No Option Orientation : Vertical
Correct Marks : 1 Wrong Marks : 0.33

Which of the following features of Microsoft Word enables you to create multiple copies of professional documents such as letters and reports for a large number of recipients?

Options :

1. ✖ Table
2. ✔ Mail Merge
3. ✖ Multilevel list
4. ✖ Bookmark

Question Number : 68 Question Id : 2752286792 Question Type : MCQ Option Shuffling : Yes Is Question Mandatory : No Option Orientation : Vertical
Correct Marks : 1 Wrong Marks : 0.33

It was Microsoft who introduced the concept of OLE, which is supported by Microsoft application software like Microsoft Word. What is the full form of OLE?

Options :

1. ✖ Online Linking and Embedding
2. ✔ Object Linking and Embedding
3. ✖ Online Linking and Enabling
4. ✖ Object Linking and Enabling

Question Number : 69 Question Id : 2752286793 Question Type : MCQ Option Shuffling : Yes Is

Question Mandatory : No Option Orientation : Vertical

Correct Marks : 1 Wrong Marks : 0.33

Which of the following is NOT a valid page orientation option in Microsoft Word?

Options :

1. ✖ Portrait
2. ✖ Landscape
3. ✖ Both, Portrait and Landscape
4. ✔ Narrow

Question Number : 70 Question Id : 2752286794 Question Type : MCQ Option Shuffling : Yes Is

Question Mandatory : No Option Orientation : Vertical

Correct Marks : 1 Wrong Marks : 0.33

In Microsoft Word 2016, which of the following displays attributes such as page number, section number and word count of a document?

Options :

1. ✖ Title bar
2. ✔ Status bar
3. ✖ Quick access toolbar
4. ✖ Scroll bar

Question Number : 71 Question Id : 2752286795 Question Type : MCQ Option Shuffling : Yes Is

Question Mandatory : No Option Orientation : Vertical

Correct Marks : 1 Wrong Marks : 0.33

What is the smallest font size value that can be applied to text in Microsoft Word?

Options :

- 1. ✓ 1
- 2. ✗ 8
- 3. ✗ 10
- 4. ✗ 11

Question Number : 72 Question Id : 2752286796 Question Type : MCQ Option Shuffling : Yes Is Question Mandatory : No Option Orientation : Vertical

Correct Marks : 1 Wrong Marks : 0.33

Which of the following statements in the context of Microsoft Word 2016 is/are true?

- (i) 'Home' is the second menu tab (from left) in a Word document.
- (ii) The margins, orientation and size options appear under the 'Layout' menu tab in this version of Word.

Options :

- 1. ✗ Only (i) is true
- 2. ✗ Only (ii) is true
- 3. ✓ Both (i) and (ii) are true
- 4. ✗ Neither (i) nor (ii) is true

Question Number : 73 Question Id : 2752286797 Question Type : MCQ Option Shuffling : Yes Is Question Mandatory : No Option Orientation : Vertical

Correct Marks : 1 Wrong Marks : 0.33

What is the default extension of the files created in Microsoft Excel 97-2003?

Options :

- 1. ✗ .XLSX
- 2. ✓ .XLS
- 3. ✗ .XLX
- 4. ✗ .XLP

Question Number : 74 Question Id : 2752286798 Question Type : MCQ Option Shuffling : Yes Is Question Mandatory : No Option Orientation : Vertical

Correct Marks : 1 Wrong Marks : 0.33

Which of the following is the valid absolute cell address of a cell that lies at the intersection of the third row and fifth column in a Microsoft Excel worksheet?

Note: For this question, discrepancy is found in question/answer. Full Marks is being awarded to all candidates.

Options :

1. 35
2. C5
3. \$C5\$
4. \$C\$5

Question Number : 75 Question Id : 2752286799 Question Type : MCQ Option Shuffling : Yes Is Question Mandatory : No Option Orientation : Vertical

Correct Marks : 1 Wrong Marks : 0.33

You can use the _____ to move a Microsoft Excel worksheet up or down.

Options :

1. ✖ quick access toolbar
2. ✔ vertical scroll bar
3. ✖ horizontal scroll bar
4. ✖ zoom bar

Question Number : 76 Question Id : 2752286800 Question Type : MCQ Option Shuffling : Yes Is Question Mandatory : No Option Orientation : Vertical

Correct Marks : 1 Wrong Marks : 0.33

In a Microsoft Excel worksheet, the content of the current (active) cell is displayed in the _____.

Options :

- 1. ✓ formula bar
- 2. ✗ status bar
- 3. ✗ scroll bar
- 4. ✗ name box

Question Number : 77 Question Id : 2752286801 Question Type : MCQ Option Shuffling : Yes Is

Question Mandatory : No Option Orientation : Vertical

Correct Marks : 1 Wrong Marks : 0.33

After entering data in the cell of a Microsoft Excel worksheet, press the _____ key to move to the next column.

Options :

- 1. ✓ Tab
- 2. ✗ Enter
- 3. ✗ Ctrl
- 4. ✗ Spacebar

Question Number : 78 Question Id : 2752286802 Question Type : MCQ Option Shuffling : Yes Is

Question Mandatory : No Option Orientation : Vertical

Correct Marks : 1 Wrong Marks : 0.33

How many columns are present in a Microsoft Excel 2016 worksheet by default?

Options :

- 1. ✗ 15384
- 2. ✗ 16834
- 3. ✓ 16384
- 4. ✗ 16483

Question Number : 79 Question Id : 2752286803 Question Type : MCQ Option Shuffling : Yes Is

Question Mandatory : No Option Orientation : Vertical

Correct Marks : 1 Wrong Marks : 0.33

Which of the following can be used to move left to the farthest cell in the row of a Microsoft Excel worksheet?

Options :

1. ✖ Ctrl+Right Arrow
2. ✔ Ctrl+Left Arrow
3. ✖ Alt+Home
4. ✖ Alt+End

Question Number : 80 Question Id : 2752286804 Question Type : MCQ Option Shuffling : Yes Is Question Mandatory : No Option Orientation : Vertical

Correct Marks : 1 Wrong Marks : 0.33

Which of the following appears as the first menu item in a Microsoft PowerPoint 2016 window?

Options :

1. ✖ Design
2. ✖ Home
3. ✔ File
4. ✖ Microsoft Office button

Question Number : 81 Question Id : 2752286805 Question Type : MCQ Option Shuffling : Yes Is Question Mandatory : No Option Orientation : Vertical

Correct Marks : 1 Wrong Marks : 0.33

What is the default extension of the presentation files created using Microsoft PowerPoint 2016?

Options :

1. ✖ .PPT
2. ✔ .PPTX
3. ✖ .PPX
4. ✖ .PTX

Question Number : 82 Question Id : 2752286806 Question Type : MCQ Option Shuffling : Yes Is Question Mandatory : No Option Orientation : Vertical

Correct Marks : 1 Wrong Marks : 0.33

Which of the following menu tabs contains the options for paragraph settings in Microsoft PowerPoint 2016?

Options :

1. ✖ File
2. ✔ Home
3. ✖ Design
4. ✖ Insert

Question Number : 83 Question Id : 2752286807 Question Type : MCQ Option Shuffling : Yes Is Question Mandatory : No Option Orientation : Vertical

Correct Marks : 1 Wrong Marks : 0.33

Which of the following can be embedded in a presentation slide in Microsoft PowerPoint 2016?

- (i) Pictures
- (ii) Screenshots
- (iii) Shapes

Options :

1. ✖ (i) and (ii) only
2. ✖ (i) and (iii) only
3. ✖ (ii) and (iii) only
4. ✔ (i), (ii) and (iii)

Question Number : 84 Question Id : 2752286808 Question Type : MCQ Option Shuffling : Yes Is Question Mandatory : No Option Orientation : Vertical

Correct Marks : 1 Wrong Marks : 0.33

Which of the following keyboard shortcuts adds a new slide to a Microsoft PowerPoint presentation?

Options :

1. ✖ Ctrl+N
2. ✔ Ctrl+M

3. ✖ Alt+N

4. ✖ Alt+M

Question Number : 85 Question Id : 2752286809 Question Type : MCQ Option Shuffling : Yes Is Question Mandatory : No Option Orientation : Vertical

Correct Marks : 1 Wrong Marks : 0.33

By default, the _____ menu tab is active when you create a new presentation file in Microsoft PowerPoint 2016.

Options :

1. ✖ File

2. ✔ Home

3. ✖ Design

4. ✖ View

