



Teachingninja.in



Latest Govt Job updates



Private Job updates



Free Mock tests available

Visit - teachingninja.in



Teachingninja.in

WBSEDCL

Previous Year Paper

Office Executive

09 Sept, 2021 Shift 2



Question Paper Preview

Notations :

- 1.Options shown in green color and with ✓ icon are correct.
- 2.Options shown in red color and with ✗ icon are incorrect.

Subject Name :	Office Executive
Creation Date :	2021-09-09 15:10:01
Duration :	90
Total Marks :	85
Display Marks:	Yes
Share Answer Key With Delivery Engine :	No
Actual Answer Key :	Yes
Calculator :	None
Magnifying Glass Required? :	No
Ruler Required? :	No
Eraser Required? :	No
Scratch Pad Required? :	No
Rough Sketch/Notepad Required? :	No
Protractor Required? :	No
Show Watermark on Console? :	Yes
Highlighter :	No
Auto Save on Console? (SA type of questions will be always auto saved) :	No

Office Executive

Group Number : 1

Group Id :	540626790
Group Maximum Duration :	0
Group Minimum Duration :	90
Show Attended Group? :	No
Edit Attended Group? :	No
Break time :	0
Group Marks :	85
Is this Group for Examiner? :	No

General Awareness

Section Id :	540626992
Section Number :	1
Section type :	Online
Mandatory or Optional :	Mandatory
Number of Questions :	10
Number of Questions to be attempted :	10
Section Marks :	10
Enable Mark as Answered Mark for Review and Clear Response :	Yes
Sub-Section Number :	1
Sub-Section Id :	5406261193
Question Shuffling Allowed :	Yes

Question Number : 1 Question Id : 54062619923 Question Type : MCQ Option Shuffling : Yes Is Question Mandatory : No Option Orientation : Vertical Correct Marks : 1 Wrong Marks : 0.33

Which of the following states is NOT included in the 'National Climate Vulnerability Assessment Report 2021' as highly vulnerable to climate change?

Options :

1. ✖ Odishas
2. ✖ Mizoram
3. ✔ Kerala
4. ✖ Bihar

Question Number : 2 Question Id : 54062619924 Question Type : MCQ Option Shuffling : Yes Is Question Mandatory : No Option Orientation : Vertical

Correct Marks : 1 Wrong Marks : 0.33

Which of the following departments constituted the National Startup Advisory Council on 21 January 2020 to advise the government on measures required to build a strong ecosystem for nurturing innovation and startups in India?

Options :

1. ✔ Department for Promotion of Industry and Internal Trade
2. ✖ Department of Disinvestment
3. ✖ Department of Economic Affairs
4. ✖ Department of Revenue

Question Number : 3 Question Id : 54062619925 Question Type : MCQ Option Shuffling : Yes Is Question Mandatory : No Option Orientation : Vertical

Correct Marks : 1 Wrong Marks : 0.33

In 2021, who won her maiden Gold at the Asian Wrestling Championship in the 53 kg category?

Options :

1. ✔ Vinesh Phogat
2. ✖ Babita Kumari
3. ✖ Kavitha Devi
4. ✖ Sakshi Malik

Question Number : 4 Question Id : 54062619926 Question Type : MCQ Option Shuffling : Yes Is Question Mandatory : No Option Orientation : Vertical

Correct Marks : 1 Wrong Marks : 0.33

What was the theme of the three-day Indian Air Force Commanders' Conference 2021 which was held in New Delhi?

Options :

1. ✖ Peace for all
2. ✖ Air power for future
3. ✖ India new normal
4. ✔ Reorienting for the future

Question Number : 5 Question Id : 54062619927 Question Type : MCQ Option Shuffling : Yes Is Question Mandatory : No Option Orientation : Vertical

Correct Marks : 1 Wrong Marks : 0.33

In which country was the first international Earth Summit held?

Options :

1. ✔ Brazil
2. ✖ India
3. ✖ France
4. ✖ Germany

Question Number : 6 Question Id : 54062619928 Question Type : MCQ Option Shuffling : Yes Is Question Mandatory : No Option Orientation : Vertical

Correct Marks : 1 Wrong Marks : 0.33

Who composed the famous Bengali song VANDE MATARAM?

Options :

1. ✔ Bankim Chandra Chattopadhyay
2. ✖ Bibhuti Bhushan Bandyopadhyay
3. ✖ Sarat Chandra Chattopadhyay
4. ✖ Rabindranath Thakur

Question Number : 7 Question Id : 54062619929 Question Type : MCQ Option Shuffling : Yes Is Question Mandatory : No Option Orientation : Vertical

Correct Marks : 1 Wrong Marks : 0.33

The poetic work ANNADAMANGAL is authored by:

Options :

1. ✖ Kalidas
2. ✔ Bharatchandra Ray Gunakar
3. ✖ Madhusudan Dutta
4. ✖ Satyendranath Dutta

Question Number : 8 Question Id : 54062619930 Question Type : MCQ Option Shuffling : Yes Is Question Mandatory : No Option Orientation : Vertical

Correct Marks : 1 Wrong Marks : 0.33

Who wrote the drama 'Cherah Taar'?

Options :

1. ✖ Bijon Bhattacharya
2. ✖ Ajitesh Banerjee
3. ✔ Tulshi Lahiri
4. ✖ Utpal Dutta

Question Number : 9 Question Id : 54062619931 Question Type : MCQ Option Shuffling : Yes Is Question Mandatory : No Option Orientation : Vertical

Correct Marks : 1 Wrong Marks : 0.33

The novel 'Parineeta' was written by?

Options :

1. ✔ Sarat Chandra Chattopadhyay
2. ✖ Rabindranatn Tagore
3. ✖ Sattyajit Ray
4. ✖ Syed Mujtaba Ali

Question Number : 10 Question Id : 54062619932 Question Type : MCQ Option Shuffling : Yes Is Question Mandatory : No Option Orientation : Vertical

Correct Marks : 1 Wrong Marks : 0.33

Whom did Khudiram Bose attempt to assassinate?

Options :

- 1. ✔ Kingsford
- 2. ✖ Lord Curzon
- 3. ✖ Devid Hare
- 4. ✖ Lord Wellesley

Reasoning

Section Id :	540626993
Section Number :	2
Section type :	Online
Mandatory or Optional :	Mandatory
Number of Questions :	10
Number of Questions to be attempted :	10
Section Marks :	10
Enable Mark as Answered Mark for Review and Clear Response :	Yes
Sub-Section Number :	1
Sub-Section Id :	5406261194
Question Shuffling Allowed :	Yes

Question Number : 11 Question Id : 54062619933 Question Type : MCQ Option Shuffling : Yes
Is Question Mandatory : No Option Orientation : Vertical

Correct Marks : 1 Wrong Marks : 0.33

Select the letter-cluster from among the given options that can replace the question mark (?) in the following series.

SNO, PLN, MJM, JHL, ?

Options :

- 1. ✖ GFL
- 2. ✖ LFK
- 3. ✔ GFK
- 4. ✖ LFL

Question Number : 12 Question Id : 54062619934 Question Type : MCQ Option Shuffling : Yes

Is Question Mandatory : No Option Orientation : Vertical

Correct Marks : 1 Wrong Marks : 0.33

Four pairs of letter-clusters have been given, out of which three are alike in some manner and one is different. Select the one that is different.

Options :

- 1. ✖ FLZ : BHV
- 2. ✔ JHV : FDQ
- 3. ✖ NTV : JPR
- 4. ✖ RWZ : NSV

Question Number : 13 Question Id : 54062619935 Question Type : MCQ Option Shuffling : Yes

Is Question Mandatory : No Option Orientation : Vertical

Correct Marks : 1 Wrong Marks : 0.33

In a certain code language, NAVYA is coded as 14-2-22-50-1 and VIJAY is coded as 22-18-10-2-25. How will ROHAN be coded as in that language?

Options :

- 1. ✖ 36-15-8-1-28
- 2. ✔ 18-30-8-2-14
- 3. ✖ 18-15-8-1-14
- 4. ✖ 36-30-16-2-28

Question Number : 14 Question Id : 54062619936 Question Type : MCQ Option Shuffling : Yes

Is Question Mandatory : No Option Orientation : Vertical

Correct Marks : 1 Wrong Marks : 0.33

Read the given statements and conclusions carefully. Assuming that the information given in the statements is true, even if it appears to be at variance with commonly known facts, decide which of the given conclusions logically follow(s) from the statements.

Statements:

All Flowers are Vegetables.

Some Plants are Flowers.

Conclusions:

I. Some Plants are Vegetables.

II. All Flowers are Plants.

Options :

1. ✓ Only conclusion I follows.
2. ✗ Only conclusion II follows.
3. ✗ Neither conclusion I nor II follows.
4. ✗ Both conclusions I and II follow.

Question Number : 15 Question Id : 54062619937 Question Type : MCQ Option Shuffling : Yes

Is Question Mandatory : No Option Orientation : Vertical

Correct Marks : 1 Wrong Marks : 0.33

Select the option that is related to the third number in the same way as the second number is related to the first number.

16 : 252 :: 23 : ?

Options :

1. ✗ 289
2. ✗ 479
3. ✗ 489
4. ✓ 525

Question Number : 16 Question Id : 54062619938 Question Type : MCQ Option Shuffling : Yes
Is Question Mandatory : No Option Orientation : Vertical

Correct Marks : 1 Wrong Marks : 0.33

In a certain code, if '%' means 'addition', '@' means 'multiplication', '\$' means 'division' and '&' means 'subtraction', then find the value of $165 \$ 11 @ 3 \% 32 \& 47$.

Options :

1. ✖ 12

2. ✖ 22

3. ✔ 30

4. ✖ 35

Question Number : 17 Question Id : 54062619939 Question Type : MCQ Option Shuffling : Yes
Is Question Mandatory : No Option Orientation : Vertical

Correct Marks : 1 Wrong Marks : 0.33

Raghav paid Rs. 68 for purchasing 3 pens and 4 pencils, whereas Ashish paid Rs. 72 for purchasing 4 pens and 3 pencils of the same type. How much will Sunita have to pay for purchasing 1 pen and 1 pencil of the same type?

Options :

1. ✖ Rs. 11

2. ✖ Rs. 12

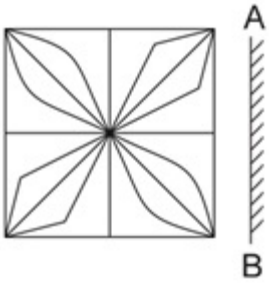
3. ✖ Rs. 16

4. ✔ Rs. 20

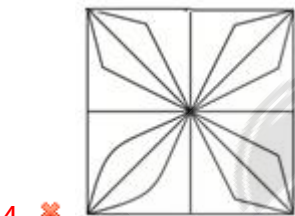
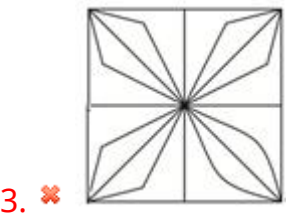
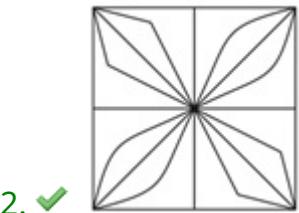
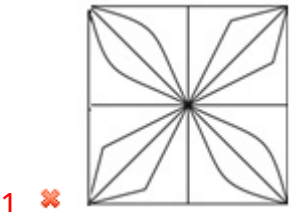
Question Number : 18 Question Id : 54062619940 Question Type : MCQ Option Shuffling : Yes
Is Question Mandatory : No Option Orientation : Vertical

Correct Marks : 1 Wrong Marks : 0.33

Select the correct mirror image of the given figure when the mirror is placed at AB as shown.

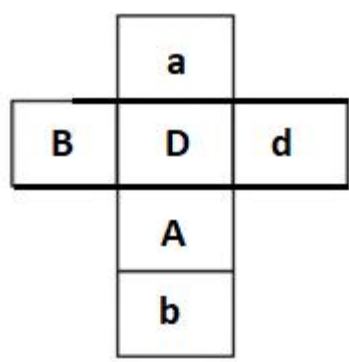


Options :



Question Number : 19 Question Id : 54062619941 Question Type : MCQ Option Shuffling : Yes
Is Question Mandatory : No Option Orientation : Vertical
Correct Marks : 1 Wrong Marks : 0.33

Select the box that CANNOT be formed by folding the given sheet along the lines.



Options :

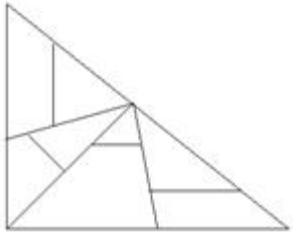
1. ✖

2. ✖

3. ✖

4. ✔

Question Number : 20 Question Id : 54062619942 Question Type : MCQ Option Shuffling : Yes
Is Question Mandatory : No Option Orientation : Vertical
Correct Marks : 1 Wrong Marks : 0.33
How many triangles are there in the given figure?



Options :

- 1. ✖ 9
- 2. ✖ 10
- 3. ✔ 11
- 4. ✖ 12

Quantitative Aptitude

Section Id :	540626994
Section Number :	3
Section type :	Online
Mandatory or Optional :	Mandatory
Number of Questions :	20
Number of Questions to be attempted :	20
Section Marks :	20
Enable Mark as Answered Mark for Review and Clear Response :	Yes
Sub-Section Number :	1
Sub-Section Id :	5406261195
Question Shuffling Allowed :	Yes

Question Number : 21 Question Id : 54062619943 Question Type : MCQ Option Shuffling : Yes
Is Question Mandatory : No Option Orientation : Vertical
Correct Marks : 1 Wrong Marks : 0.33

If $10^3 + 10^4 + \dots + 10^{92}$ is divided by 6, then the remainder is:

Options :

1. ✖ 2

2. ✖ 4

3. ✔ 0

4. ✖ 1

Question Number : 22 Question Id : 54062619944 Question Type : MCQ Option Shuffling : Yes

Is Question Mandatory : No Option Orientation : Vertical

Correct Marks : 1 Wrong Marks : 0.33

The unit digit of the product of $(127)^{35} \times (153)^{66} \times (666)^{999}$ is:

Options :

1. ✖ 6

2. ✖ 4

3. ✖ 8

4. ✔ 2

Question Number : 23 Question Id : 54062619945 Question Type : MCQ Option Shuffling : Yes

Is Question Mandatory : No Option Orientation : Vertical

Correct Marks : 1 Wrong Marks : 0.33

If the least number of five digits is divided by 45, 60, 85, it leaves the remainders 36, 51, 76, respectively. The least five-digit number is:

Options :

1. ✖ 12331

2. ✔ 12231

3. ✖ 12221

4. ✖ 13331

Question Number : 24 Question Id : 54062619946 Question Type : MCQ Option Shuffling : Yes

Is Question Mandatory : No Option Orientation : Vertical

Correct Marks : 1 Wrong Marks : 0.33

The value of $\frac{[(2.43)^3 + (3.47)^3 + (4.1)^3 - 3 \times 2.43 \times 3.47 \times 4.1]}{[(2.43)^2 + (3.47)^2 + (4.1)^2 - 2.43 \times 3.47 - 3.47 \times 4.1 - 2.43 \times 4.1]}$ is:

Options :

1. ✖ 12

2. ✔ 10

3. ✖ 8

4. ✖ 11.2

Question Number : 25 Question Id : 54062619947 Question Type : MCQ Option Shuffling : Yes

Is Question Mandatory : No Option Orientation : Vertical

Correct Marks : 1 Wrong Marks : 0.33

Consider the fractions $4\frac{2}{3}, 1\frac{5}{6}, 2\frac{3}{4}, 3\frac{1}{7}, 5\frac{2}{9}$. Which of them is a non-recurring decimal?

Options :

1. ✖ $5\frac{2}{9}$

2. ✔ $2\frac{3}{4}$

3. ✖

$4\frac{2}{3}$

4. ✖ $1\frac{5}{6}$

Question Number : 26 Question Id : 54062619948 Question Type : MCQ Option Shuffling : Yes

Is Question Mandatory : No Option Orientation : Vertical

Correct Marks : 1 Wrong Marks : 0.33

The value of $\sqrt{0.04} - \sqrt{0.64} + \sqrt{1.96} - \sqrt{0.0009}$ is:

Options :

1. ✖ 2.43

2. ✖ 0.37

3. ✔ 0.77

4. ✖ 2.37

Question Number : 27 Question Id : 54062619949 Question Type : MCQ Option Shuffling : Yes

Is Question Mandatory : No Option Orientation : Vertical

Correct Marks : 1 Wrong Marks : 0.33

The HCF of two numbers a and b is 70 and their LCM is 1050. If $a = 210$, then $b = ?$

Options :

1. ✖ 420

2. ✖ 270

3. ✔ 350

4. ✖ 280

Question Number : 28 Question Id : 54062619950 Question Type : MCQ Option Shuffling : Yes
Is Question Mandatory : No Option Orientation : Vertical

Correct Marks : 1 Wrong Marks : 0.33

The HCF of the fractions $\frac{2}{3}, \frac{8}{9}, \frac{12}{15}, \frac{25}{27}, \frac{36}{39}, \frac{43}{45}$ is:

Options :

1. ✖ 25800

2. ✔ $\frac{1}{1755}$

3. ✖ 77400

4. ✖ $\frac{1}{25800}$

Question Number : 29 Question Id : 54062619951 Question Type : MCQ Option Shuffling : Yes
Is Question Mandatory : No Option Orientation : Vertical

Correct Marks : 1 Wrong Marks : 0.33

A bus conductor's bag contains ₹ 520 in the form of ₹ 10, ₹ 5, ₹ 2 and ₹ 1 coins in the ratio 2 : 3 : 5 : 7, respectively.

The number of ₹ 5 coins is:

Options :

1. ✖ 20

2. ✖ 50

3. ✔ 30

4. ✖ 40

Question Number : 30 Question Id : 54062619952 Question Type : MCQ Option Shuffling : Yes
Is Question Mandatory : No Option Orientation : Vertical

Correct Marks : 1 Wrong Marks : 0.33

Milk containers P and Q contain mixtures of milk and water in the ratios 2 : 3 and 3 : 1, respectively. In what ratio should quantities of the mixtures be taken from P and Q to form a mixture in which milk to water is in the ratio 5 : 3?

Options :

1. ✖ 9 : 5

2. ✖ 4 : 5

3. ✖ 5 : 4

4. ✔ 5 : 9

Question Number : 31 Question Id : 54062619953 Question Type : MCQ Option Shuffling : Yes
Is Question Mandatory : No Option Orientation : Vertical

Correct Marks : 1 Wrong Marks : 0.33

There are three mixtures, in which the first two mixtures are 15% and 48% of the third mixture. What percentage is the first mixture of the second mixture?

Options :

1. ✖ 33.50%

2. ✖ 32.75%

3. ✔ 31.25%

4. ✖ 30.50%

Question Number : 32 Question Id : 54062619954 Question Type : MCQ Option Shuffling : Yes

Is Question Mandatory : No Option Orientation : Vertical

Correct Marks : 1 Wrong Marks : 0.33

Two candidates have applied for nomination for the post of the President of a college union. The college Principal has conducted an election in which 10% of the votes are declared invalid, and the winner gets 80% of the valid votes and wins the election by 5400 votes. The number of valid votes is:

Options :

1. ✖ 7500

2. ✖ 8000

3. ✖ 7000

4. ✔ 9000

Question Number : 33 Question Id : 54062619955 Question Type : MCQ Option Shuffling : Yes

Is Question Mandatory : No Option Orientation : Vertical

Correct Marks : 1 Wrong Marks : 0.33

When a technician sells his product for ₹ 9,000, he earns a profit that is triple the loss incurred when the product is sold for ₹ 4,500. If he sells it at a profit of 20%, then the selling price of this product is:

Options :

1. ✔ ₹ 6,750

2. ✖ ₹ 7,050

3. ✖ ₹ 7,500

4. ✖ ₹ 8,250

Question Number : 34 Question Id : 54062619956 Question Type : MCQ Option Shuffling : Yes

Is Question Mandatory : No Option Orientation : Vertical

Correct Marks : 1 Wrong Marks : 0.33

A girl travelled from her home to school by bicycle at a speed of 12 km/h, and came back at a speed of 3 km/h. If the girl took 3 hours and 45 minutes to complete her journey, then the distance between her home and school is:

Options :

- 1. ✖ 8 km
- 2. ✖ 8.5 km
- 3. ✔ 9 km
- 4. ✖ 7.2 km

Question Number : 35 Question Id : 54062619957 Question Type : MCQ Option Shuffling : Yes
Is Question Mandatory : No Option Orientation : Vertical

Correct Marks : 1 Wrong Marks : 0.33

Two men A and B start walking around a jogging track from the same point at the same time in opposite directions. The circumference of the jogging track is 945 m. If they are walking at 8 km/h and 6 km/h, respectively, after how much time they will meet?

Options :

- 1. ✖ 4.15 min
- 2. ✔ 4.05 min
- 3. ✖ 4.50 min
- 4. ✖ 4.25 min

Question Number : 36 Question Id : 54062619958 Question Type : MCQ Option Shuffling : Yes
Is Question Mandatory : No Option Orientation : Vertical

Correct Marks : 1 Wrong Marks : 0.33

A car travels 25% faster than a bus. Both start moving at the same time from station A and reach station B at the same time. The stations are 250 km apart. If on the way, the car stops for 25 minutes, then the speed of the bus is:

Options :

1. ✖ 110 km/h
2. ✖ 105 km/h
3. ✖ 90 km/h
4. ✔ 120 km/h

Question Number : 37 Question Id : 54062619959 Question Type : MCQ Option Shuffling : Yes
Is Question Mandatory : No Option Orientation : Vertical

Correct Marks : 1 Wrong Marks : 0.33

The distance between two places is 120 km. Two persons A and B start travelling towards each other at the same time and meet each other after 5 hours. If A had travelled at $\frac{2}{3}$ of his speed and B had travelled at double his speed, they would have met after 4 hours. The speed of B is:

Options :

1. ✖ 13.5 km/h
2. ✖ 9.5 km/h
3. ✖ 12.5 km/h
4. ✔ 10.5 km/h

Question Number : 38 Question Id : 54062619960 Question Type : MCQ Option Shuffling : Yes
Is Question Mandatory : No Option Orientation : Vertical

Correct Marks : 1 Wrong Marks : 0.33



A boy cycling along the boundary of a rectangular park at a speed of 77 m/min, completes one round in 10 minutes. The ratio between the length and the breadth of the park is 4 : 3. The area of the park (in m^2) is:

Options :

1. ✖ 32600

2. ✖ 33100

3. ✔ 36300

4. ✖ 30300

Question Number : 39 Question Id : 54062619961 Question Type : MCQ Option Shuffling : Yes
Is Question Mandatory : No Option Orientation : Vertical

Correct Marks : 1 Wrong Marks : 0.33

Assume that the areas of a square and a rectangle are equal. If the length of the rectangle is greater than the length of any side of the square by 7 cm and the breadth is less than 5 cm, then the area of the rectangle (in cm^2) is:

Options :

1. ✔ 306.25

2. ✖ 302.50

3. ✖ 301.75

4. ✖ 309.25

Question Number : 40 Question Id : 54062619962 Question Type : MCQ Option Shuffling : Yes
Is Question Mandatory : No Option Orientation : Vertical

Correct Marks : 1 Wrong Marks : 0.33

If the shortest side of a rectangular closet is $3\frac{3}{4}$ feet, and the diagonal of the floor of the closet is $6\frac{1}{4}$ feet, then the area of the closet (in ft^2) is:

Options :

1. ✖ 15.25

2. ✔ 18.75

3. ✖ 16.50

4. ✖ 17.35

General English

Section Id :	540626995
Section Number :	4
Section type :	Online
Mandatory or Optional :	Mandatory
Number of Questions :	20
Number of Questions to be attempted :	20
Section Marks :	20
Enable Mark as Answered Mark for Review and Clear Response :	Yes
Sub-Section Number :	1
Sub-Section Id :	5406261196
Question Shuffling Allowed :	Yes

Question Number : 41 Question Id : 54062619963 Question Type : MCQ Option Shuffling : Yes
Is Question Mandatory : No Option Orientation : Vertical
Correct Marks : 1 Wrong Marks : 0.33

Select the most appropriate prefix to fill in the blank.

The young girl felt very _____-conscious to sing in front of the huge audience.

Options :

1. ✖ in
2. ✖ un
3. ✖ over
4. ✔ self

Question Number : 42 Question Id : 54062619964 Question Type : MCQ Option Shuffling : Yes

Is Question Mandatory : No Option Orientation : Vertical

Correct Marks : 1 Wrong Marks : 0.33

Select the option that can be used as a one-word substitute for the given group of words.

Happening once every two years

Options :

1. ✔ Biennial
2. ✖ Biannual
3. ✖ Bicentennial
4. ✖ Bilateral

Question Number : 43 Question Id : 54062619965 Question Type : MCQ Option Shuffling : Yes

Is Question Mandatory : No Option Orientation : Vertical

Correct Marks : 1 Wrong Marks : 0.33

Select the most appropriate option to fill in the blanks.

Earth's major earthquakes _____ mainly in belts coinciding with the _____ of tectonic plates.

Options :

1. ✖ have; edges
2. ✔ occur; margins
3. ✖ is; centre
4. ✖ occurs; ends

Question Number : 44 Question Id : 54062619966 Question Type : MCQ Option Shuffling : Yes
Is Question Mandatory : No Option Orientation : Vertical
Correct Marks : 1 Wrong Marks : 0.33

Match the words in Column A with their definitions in Column B.

Column A (Words)	Column B (Definitions)
(a) Dogmatic	(i) Acting together secretly or illegally in order to deceive or cheat someone
(b) Collusive	(ii) A situation in which there is a lot of noise and confusion because people or excited, angry or scared
(c) Pandemonium	(iii) Used to describe two or more things that are related to each other
(d) Correlative	(iv) Strongly expressing your beliefs as facts

Options :

- 1. ✖ a-ii, b-iii, c-i, d-iv
- 2. ✔ a-iv, b-i, c-ii, d-iii
- 3. ✖ a-ii, b-iv, c-i, d-iii
- 4. ✖ a-i, b-iii, c-iv, d-ii

Question Number : 45 Question Id : 54062619967 Question Type : MCQ Option Shuffling : Yes
Is Question Mandatory : No Option Orientation : Vertical
Correct Marks : 1 Wrong Marks : 0.33

Select the most appropriate synonym of the given word.

Brittle

Options :

- 1. ✔ Fragile
- 2. ✖ Broken
- 3. ✖ Tiresome
- 4. ✖ Angry

Question Number : 46 Question Id : 54062619968 Question Type : MCQ Option Shuffling : Yes
Is Question Mandatory : No Option Orientation : Vertical
Correct Marks : 1 Wrong Marks : 0.33

Select the option that can be used as a one-word substitute for the given group of words.

Lasting for a very short time

Options :

- 1. ✖ Conditional
- 2. ✖ Perpetual
- 3. ✖ Eternal
- 4. ✔ Ephemeral

Question Number : 47 Question Id : 54062619969 Question Type : MCQ Option Shuffling : Yes
Is Question Mandatory : No Option Orientation : Vertical

Correct Marks : 1 Wrong Marks : 0.33

Select the most appropriate synonym of the underlined word.

The King banned the export of weapons during war time.

Options :

- 1. ✖ Avoided
- 2. ✖ Ordered
- 3. ✔ Prohibited
- 4. ✖ Monitored

Question Number : 48 Question Id : 54062619970 Question Type : MCQ Option Shuffling : Yes
Is Question Mandatory : No Option Orientation : Vertical

Correct Marks : 1 Wrong Marks : 0.33

Select the most appropriate synonym of the underlined word.

People imagine us skeptics and empiricists to be morose, paranoid and tortured in our private lives, which may be the exact opposite of what history reports.

Options :

- 1. ✖ infirm
- 2. ✖ confined
- 3. ✔ depressed

4. ✖ aggravated

Question Number : 49 Question Id : 54062619971 Question Type : MCQ Option Shuffling : Yes

Is Question Mandatory : No Option Orientation : Vertical

Correct Marks : 1 Wrong Marks : 0.33

Select the option that expresses the given sentence in reported speech.

Arun: "What are the precautions I should take while travelling?"

Options :

1. ✖ Arun questioned about the precautions he should have taken while travelling.
2. ✖ Arun said he had to take precautions while travelling.
3. ✔ Arun asked what precautions he should take while travelling.
4. ✖ Arun asked about the various precautions he was asked to take while travelling.

Question Number : 50 Question Id : 54062619972 Question Type : MCQ Option Shuffling : Yes

Is Question Mandatory : No Option Orientation : Vertical

Correct Marks : 1 Wrong Marks : 0.33

Select the most appropriate ANTONYM of the given word.

Peaked

Options :

1. ✖ Tired
2. ✔ Flushed
3. ✖ Summit
4. ✖ Plummet

Question Number : 51 Question Id : 54062619973 Question Type : MCQ Option Shuffling : Yes

Is Question Mandatory : No Option Orientation : Vertical

Correct Marks : 1 Wrong Marks : 0.33

Select the most appropriate meaning of the underlined idiom.

Ravi is heading the team and so he gets to call the shots.

Options :

1. ✖ Gets to call other people in the team
2. ✖ In charge of communicating with PR Manager
3. ✖ In charge of giving shots to team members
4. ✔ In charge of making decisions for the team

Question Number : 52 Question Id : 54062619974 Question Type : MCQ Option Shuffling : Yes

Is Question Mandatory : No Option Orientation : Vertical

Correct Marks : 1 Wrong Marks : 0.33

Select the most appropriate ANTONYM of the underlined word.

My uncle is a philistine who ignorantly dumped all the valuable paintings in the attic.

Options :

1. ✖ pretentious
2. ✖ flaunting
3. ✖ tacky
4. ✔ cultured

Question Number : 53 Question Id : 54062619975 Question Type : MCQ Option Shuffling : Yes

Is Question Mandatory : No Option Orientation : Vertical

Correct Marks : 1 Wrong Marks : 0.33

Select the most appropriate ANTONYM of the underlined word.

As it was getting late, the audience were asked to limit their questions to those germane to today's speech.

Options :

1. ✖ empirical
2. ✔ irrelevant
3. ✖ irreverent
4. ✖ logical

Question Number : 54 Question Id : 54062619976 Question Type : MCQ Option Shuffling : Yes
Is Question Mandatory : No Option Orientation : Vertical

Correct Marks : 1 Wrong Marks : 0.33

Select the most appropriate option to fill in the blank.

There was no need for the manager to criticise the sales clerk so cruelly and in almost a _____ manner in front of everyone.

Options :

1. ✓ malicious
2. ✗ fastidious
3. ✗ munificent
4. ✗ imperious

Question Number : 55 Question Id : 54062619977 Question Type : MCQ Option Shuffling : Yes
Is Question Mandatory : No Option Orientation : Vertical

Correct Marks : 1 Wrong Marks : 0.33

Select the option that has combined the following sentences using appropriate relative pronoun.

The people were stopped at the border. They were all coming back from the political rally.

Options :

1. ✗ The people, were stopped at the border, had come back from the political rally.
2. ✗ The people that were stopped at the border, had come back from the political rally.
3. ✗ The people had come back from the political rally, while they were stopped at the border.
4. ✓ The people, who were coming back from the political rally, were stopped at the border.

Question Number : 56 Question Id : 54062619978 Question Type : MCQ Option Shuffling : Yes
Is Question Mandatory : No Option Orientation : Vertical

Correct Marks : 1 Wrong Marks : 0.33

Select the option that gives the most appropriate meaning of the underlined interjection.

Ugh! Tea! I don't want it!

Options :

1. ✖ Shows indecisiveness about drinking tea
2. ✖ Shows the speaker is yearning to drink tea
3. ✖ Shows the speaker actually wants to drink tea but refuses it outwardly
4. ✔ Shows deep dislike for tea

Question Number : 57 Question Id : 54062619979 Question Type : MCQ Option Shuffling : Yes

Is Question Mandatory : No Option Orientation : Vertical

Correct Marks : 1 Wrong Marks : 0.33

Select the option that completes the following sentence.

Educational system should be used to revolutionise _____.

Options :

1. ✖ mankind by not questioning his deep beliefs
2. ✔ the traditional attitudes and inculcate new values of equality
3. ✖ by civilizing native people and help them get western education
4. ✖ the western attitude of people and make sure they follow traditional beliefs

Question Number : 58 Question Id : 54062619980 Question Type : MCQ Option Shuffling : Yes

Is Question Mandatory : No Option Orientation : Vertical

Correct Marks : 1 Wrong Marks : 0.33

Select the option that completes the following sentence.

If I were a follower of the leader, _____.

Options :

1. ✖ I would have attended the rally voluntarily
2. ✖ I will attend the rally voluntarily
3. ✖ I can attend the rally voluntarily
4. ✔ I would attend the rally voluntarily



Question Number : 59 Question Id : 54062619981 Question Type : MCQ Option Shuffling : Yes
Is Question Mandatory : No Option Orientation : Vertical

Correct Marks : 1 Wrong Marks : 0.33

Select the option that completes the following sentence.

They took swift measures to put down the flame of rebellion, _____.

Options :

- ✖ as they finished the given work on time
- ✖ sometimes they questioned everyone associated
- ✖ some measures were accepted by everyone
- ✔ some were of military nature while others were of political nature

Question Number : 60 Question Id : 54062619982 Question Type : MCQ Option Shuffling : Yes
Is Question Mandatory : No Option Orientation : Vertical

Correct Marks : 1 Wrong Marks : 0.33

Select the most appropriate verb forms to fill in the blanks.

Nowadays companies _____ candidates with good communication skills and soft skills. Just getting good grades _____ not ensure high-paying jobs in such companies.

Options :

- ✔ prefer; do
- ✖ preferred; do
- ✖ has preferred; did
- ✖ have preferred; do

Data Analysis Data Interpretation & Data Sufficiency

Section Id : 540626996

Section Number : 5

Section type : Online

Mandatory or Optional :	Mandatory
Number of Questions :	5
Number of Questions to be attempted :	5
Section Marks :	5
Enable Mark as Answered Mark for Review and Clear Response :	Yes
Sub-Section Number :	1
Sub-Section Id :	5406261197
Question Shuffling Allowed :	Yes

Question Number : 61 Question Id : 54062619983 Question Type : MCQ Option Shuffling : Yes
Is Question Mandatory : No Option Orientation : Vertical
Correct Marks : 1 Wrong Marks : 0.33

The following bar graph gives the information regarding the production (in thousands of tonnes) of wheat, rice and maize in 4 states.



The percentage of agricultural land used in states 1, 2, 3, and 4 is 32 percent, 26 percent, 13 percent, and 29 percent, respectively. The productivity of a state is defined as the ratio of the total production to the area of the land used. In which of the states is the productivity maximum?

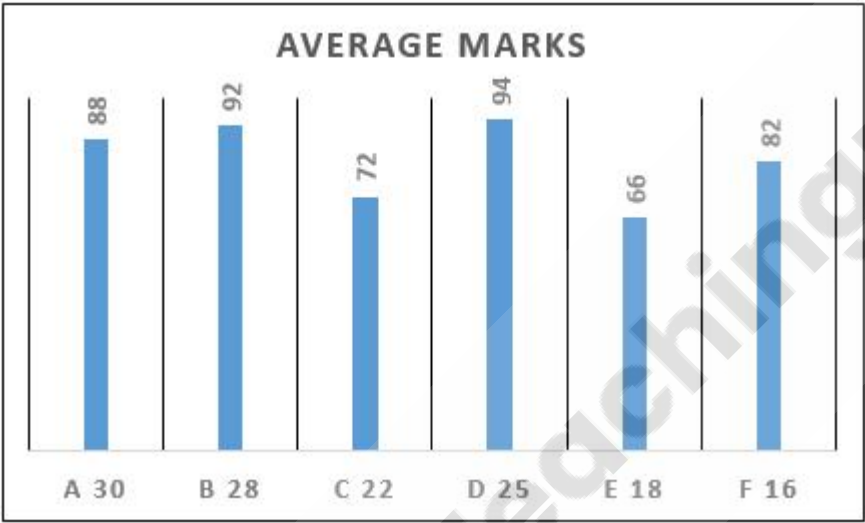
Options :

- 1. ✖ State 2
- 2. ✔ State 3
- 3. ✖ State 1
- 4. ✖ State 4

Question Number : 62 Question Id : 54062619984 Question Type : MCQ Option Shuffling : Yes
Is Question Mandatory : No Option Orientation : Vertical

Correct Marks : 1 Wrong Marks : 0.33

The following chart gives the information about the average marks obtained in Science across the sections of a class. Numbers beside the section name is the number of students in the class.



If the section E students were awarded 3 bonus marks, then the average marks of section E is increased by:

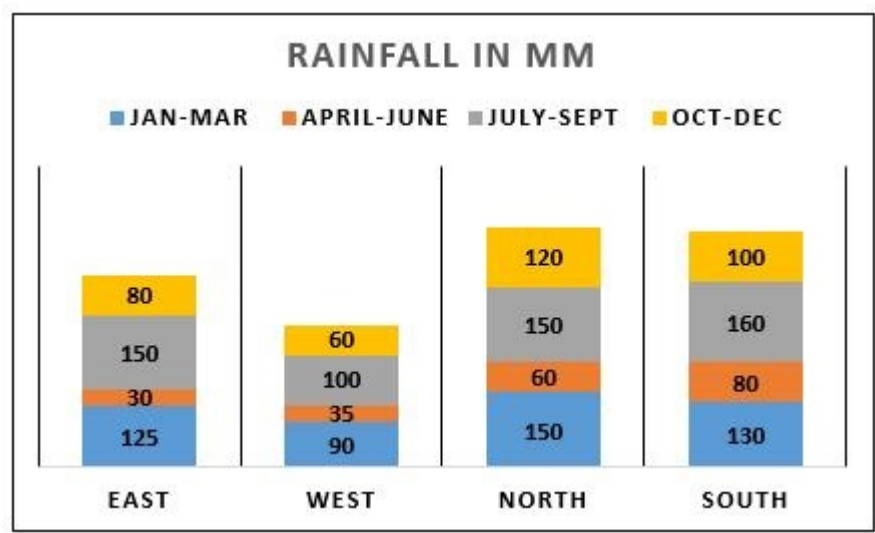
Options :

- 1. ✖ 2.6 percent
- 2. ✖ 5.3 percent
- 3. ✖ 1.8 percent
- 4. ✔ 4.5 percent

Question Number : 63 Question Id : 54062619985 Question Type : MCQ Option Shuffling : Yes
Is Question Mandatory : No Option Orientation : Vertical

Correct Marks : 1 Wrong Marks : 0.33

Below given bar chart shows the quantity of rainfall (in mm) in the four sectors of India in the four different periods of the year.



Which of the following statements is FALSE?

Options :

- 1. ✓ The average rainfall is more in South than North.
- 2. ✗ The average rainfall is maximum in North.
- 3. ✗ The rainfall was the least during the months of April-June.
- 4. ✗ The maximum rainfall in South is during July-Sept.

Question Number : 64 Question Id : 54062619986 Question Type : MCQ Option Shuffling : Yes
Is Question Mandatory : No Option Orientation : Vertical
Correct Marks : 1 Wrong Marks : 0.33

The table shows the movement of a train between the stations P and V.

Station	Arrival	Departure	Distance from Source
P		6.4	0
Q	8.51	8.54	180
R	10.14	10.18	290
S	14.52	14.58	480
T	18.32	18.36	650
U	21.22	21.25	760
V	23.54		880

Based on the information, the train was slowest between the stations:

Options :

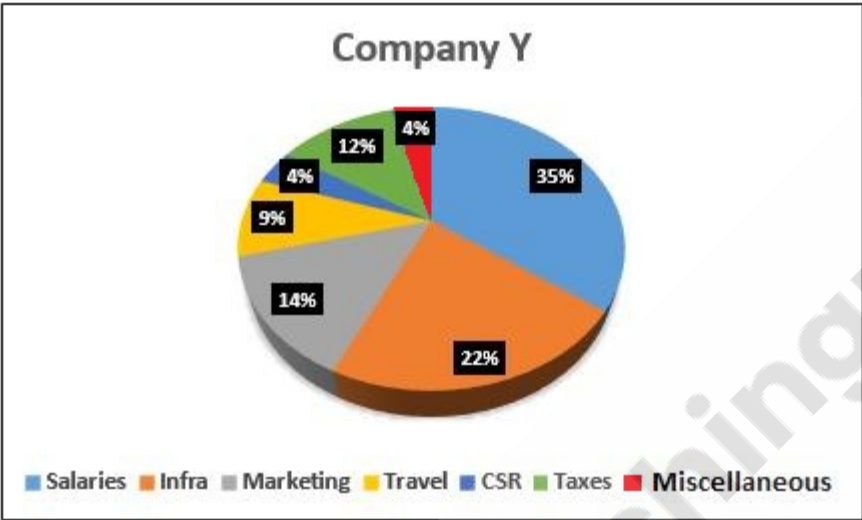
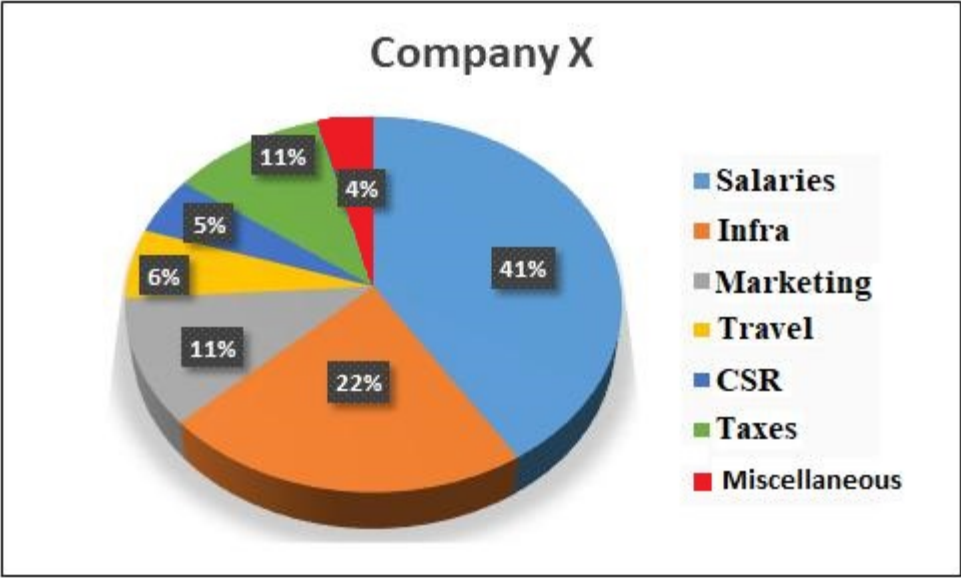
- 1. ✖ S and T
- 2. ✖ U and V
- 3. ✔ T and U
- 4. ✖ R and S

Question Number : 65 Question Id : 54062619987 Question Type : MCQ Option Shuffling : Yes

Is Question Mandatory : No Option Orientation : Vertical

Correct Marks : 1 Wrong Marks : 0.33

The below pie charts show the percentage expenditure on various heads, of two companies for one financial year. That year company X spent Rs. 440 crores and Y spent Rs. 375 crores.



Based on the information, the positive difference between the money spent by the companies for Travel is:

Options :

- 1. ✖ Rs. 6.48 crores
- 2. ✖ Rs. 8.26 crores
- 3. ✔ Rs. 7.35 crores
- 4. ✖ Rs. 4.32 crores

Computer Proficiency (MS-Office)

Section Id : 540626997

Section Number : 6

Section type :	Online
Mandatory or Optional :	Mandatory
Number of Questions :	20
Number of Questions to be attempted :	20
Section Marks :	20
Enable Mark as Answered Mark for Review and Clear Response :	Yes
Sub-Section Number :	1
Sub-Section Id :	5406261198
Question Shuffling Allowed :	Yes

Question Number : 66 Question Id : 54062619988 Question Type : MCQ Option Shuffling : Yes
Is Question Mandatory : No Option Orientation : Vertical
Correct Marks : 1 Wrong Marks : 0.33

Which of the following bars in MS-Word 2016 is used to move up and down through the pages of a document?

Options :

- 1. ✖ Ruler
- 2. ✖ Horizontal scroll basr
- 3. ✖ Tell me bar
- 4. ✔ Vertical scroll bar

Question Number : 67 Question Id : 54062619989 Question Type : MCQ Option Shuffling : Yes
Is Question Mandatory : No Option Orientation : Vertical
Correct Marks : 1 Wrong Marks : 0.33

Which of the following is used to quickly find commands in MS-Word 2007?

Options :

- 1. ✖ Document area
- 2. ✔ Ribbon
- 3. ✖ Title bar

4. ✖ Ruler

Question Number : 68 Question Id : 54062619990 Question Type : MCQ Option Shuffling : Yes

Is Question Mandatory : No Option Orientation : Vertical

Correct Marks : 1 Wrong Marks : 0.33

Which of the following gives access to additional commands for each of the command groups in MS-Word 2016?

Options :

1. ✔ Dialog Box Launcher

2. ✖ Ribbon

3. ✖ Quick Access Toolbar

4. ✖ Ruler

Question Number : 69 Question Id : 54062619991 Question Type : MCQ Option Shuffling : Yes

Is Question Mandatory : No Option Orientation : Vertical

Correct Marks : 1 Wrong Marks : 0.33

Which of the following statements are true or false?

(i) The Print Layout view enables you to see your document as it would appear in a browser such as Internet Explorer.

(ii) The Web Layout view shows the document as it will look when it is printed.

Options :

1. ✖ (i)-True, (ii)-False

2. ✖ (i)-False, (ii)-True

3. ✖ (i)-True, (ii)-True

4. ✔ (i)-False, (ii)-False

Question Number : 70 Question Id : 54062619992 Question Type : MCQ Option Shuffling : Yes

Is Question Mandatory : No Option Orientation : Vertical

Correct Marks : 1 Wrong Marks : 0.33

Which of the following is NOT a non-printing character in MS-Word 2016?



Options :

- 1. ✖ The end of a paragraph (¶)
- 2. ✖ A tab (→)
- 3. ✖ Hidden text (Hidden)
- 4. ✔ An alphabet (A)

Question Number : 71 Question Id : 54062619993 Question Type : MCQ Option Shuffling : Yes

Is Question Mandatory : No Option Orientation : Vertical

Correct Marks : 1 Wrong Marks : 0.33

Match the following with reference to shortcut keys in MS-Word 2016.

(i) Ctrl + B	(a) to toggle the italic attribute
(ii) Ctrl + I	(b) to remove paragraph formatting
(iii) Ctrl + Q	(c) to toggle the bold attribute

Options :

- 1. ✖ (i)-(a), (ii)-(b), (iii)-(c)
- 2. ✔ (i)-(c), (ii)-(a), (iii)-(b)
- 3. ✖ (i)-(a), (ii)-(c), (iii)-(b)
- 4. ✖ (i)-(c), (ii)-(b), (iii)-(a)

Question Number : 72 Question Id : 54062619994 Question Type : MCQ Option Shuffling : Yes

Is Question Mandatory : No Option Orientation : Vertical

Correct Marks : 1 Wrong Marks : 0.33

Which of the following keys is used to access online help or the Office Assistant in MS-Word 2016?

Options :

- 1. ✔ F1
- 2. ✖ F2
- 3. ✖ F3
- 4. ✖ F4

Question Number : 73 Question Id : 54062619995 Question Type : MCQ Option Shuffling : Yes

Is Question Mandatory : No Option Orientation : Vertical

Correct Marks : 1 Wrong Marks : 0.33

Which of the following is a container for data and is each little rectangle seen in the worksheet of MS-Excel 2007?

Options :

1. ✖ Row
2. ✖ Column
3. ✔ Cell
4. ✖ Workbook

Question Number : 74 Question Id : 54062619996 Question Type : MCQ Option Shuffling : Yes

Is Question Mandatory : No Option Orientation : Vertical

Correct Marks : 1 Wrong Marks : 0.33

Which of the following is called a cell range in MS-Excel 2016?

Options :

1. ✖ A collection of menu bars
2. ✖ A collection of workbooks
3. ✖ A collection of worksheets
4. ✔ A collection of cells

Question Number : 75 Question Id : 54062619997 Question Type : MCQ Option Shuffling : Yes

Is Question Mandatory : No Option Orientation : Vertical

Correct Marks : 1 Wrong Marks : 0.33

Which of the following shortcut keys in MS-Excel 2013 is used to show/hide the Ribbon?

Options :

1. ✖ Ctrl+F2
2. ✔ Ctrl+F1
3. ✖ Ctrl+F4
4. ✖ Ctrl+F3

Question Number : 76 Question Id : 54062619998 Question Type : MCQ Option Shuffling : Yes
Is Question Mandatory : No Option Orientation : Vertical

Correct Marks : 1 Wrong Marks : 0.33

Which of the following is displayed by the formula bar of a worksheet in MS-Excel 2016, if an active cell uses a formula?

Options :

1. ✖ Value
2. ✔ Formula
3. ✖ Result of the formula
4. ✖ Cell address

Question Number : 77 Question Id : 54062619999 Question Type : MCQ Option Shuffling : Yes
Is Question Mandatory : No Option Orientation : Vertical

Correct Marks : 1 Wrong Marks : 0.33

Which of the following is NOT a valid representation to specify a range in MS-Excel 2013?

Options :

1. ✖ =SUM(A:A)
2. ✖ =SUM(A:D)
3. ✖ =SUM(1:1)
4. ✔ =SUM(A:1)

Question Number : 78 Question Id : 54062620000 Question Type : MCQ Option Shuffling : Yes
Is Question Mandatory : No Option Orientation : Vertical

Correct Marks : 1 Wrong Marks : 0.33

Which of the following functions is used to count only items that are less than 2 in the range A2 to A10 in MS-Excel 2016?

Options :

1. ✓ =COUNTIF(A2:A10,"<2")
2. ✗ =COUNTIF(A2:A10,TRUE)
3. ✗ =COUNTA(A2:A10,"<2")
4. ✗ =COUNT(A2:A10,"<2")

Question Number : 79 Question Id : 54062620001 Question Type : MCQ Option Shuffling : Yes

Is Question Mandatory : No Option Orientation : Vertical

Correct Marks : 1 Wrong Marks : 0.33

Which of the following keys is used to move to the beginning of the row in MS-Excel 2016?

Options :

1. ✓ Home
2. ✗ Tab
3. ✗ Shift
4. ✗ Ctrl

Question Number : 80 Question Id : 54062620002 Question Type : MCQ Option Shuffling : Yes

Is Question Mandatory : No Option Orientation : Vertical

Correct Marks : 1 Wrong Marks : 0.33

Which of the following groups belongs to the View tab in MS-Excel 2016?

Options :

1. ✗ Alignment
2. ✗ Font
3. ✓ Zoom
4. ✗ Styles

Question Number : 81 Question Id : 54062620003 Question Type : MCQ Option Shuffling : Yes

Is Question Mandatory : No Option Orientation : Vertical

Correct Marks : 1 Wrong Marks : 0.33

Which of the following is used to type speaker notes for the current slide in MS-PowerPoint 2016?

Options :

1. ✖ Slide pane
2. ✔ Notes pane
3. ✖ Ribbon
4. ✖ Title bar

Question Number : 82 Question Id : 54062620004 Question Type : MCQ Option Shuffling : Yes

Is Question Mandatory : No Option Orientation : Vertical

Correct Marks : 1 Wrong Marks : 0.33

Which of the following, on the left side of the screen in MS-PowerPoint 2016, makes it easy to organise slides?

Options :

1. ✔ Slide Navigation pane
2. ✖ Slide pane
3. ✖ Notes pane
4. ✖ Text pane

Question Number : 83 Question Id : 54062620005 Question Type : MCQ Option Shuffling : Yes

Is Question Mandatory : No Option Orientation : Vertical

Correct Marks : 1 Wrong Marks : 0.33

Which of the following is FALSE with reference to MS-PowerPoint?

Options :

1. ✖ A presentation is a systematic way to display information in the form of slides.
2. ✖ Slides are the individual pages of a presentation.
3. ✖ Various slide layouts present in MS-PowerPoint allow us to systematically place the title, text, graphics or other objects on the slide.
4. ✔ We cannot create, modify or design our presentation in Normal view.

Question Number : 84 Question Id : 54062620006 Question Type : MCQ Option Shuffling : Yes
Is Question Mandatory : No Option Orientation : Vertical

Correct Marks : 1 Wrong Marks : 0.33

Which of the following refers to a dotted rectangular box on the slide which is used to hold text, graphics or other slide objects in MS-PowerPoint 2016?

Options :

1. ✖ Slide Show
2. ✖ Slide Layout
3. ✔ Placeholder
4. ✖ Theme

Question Number : 85 Question Id : 54062620007 Question Type : MCQ Option Shuffling : Yes
Is Question Mandatory : No Option Orientation : Vertical

Correct Marks : 1 Wrong Marks : 0.33

Which of the following shortcut keys is used to open the font window in MS-PowerPoint 2016?

Options :

1. ✔ Ctrl+Shift+P
2. ✖ Ctrl+Shift+>
3. ✖ Ctrl+Shift+<
4. ✖ Ctrl+Shift+=

