



Teachingninja.in



Latest Govt Job updates



Private Job updates



Free Mock tests available

Visit - teachingninja.in



Teachingninja.in

SSC GD Constable

Previous Year Paper
07 Feb, 2025 Shift 2



Constable GD in CAPFs and SSF Rifleman GD in AR and Sepoy in NCB Examination 2025

Roll Number	
Candidate Name	
Venue Name	
Exam Date	07/02/2025
Exam Time	12:00 PM - 1:00 PM
Subject	Constable GD Examination 2025

Section : Part-A-General Intelligence and Reasoning

Q.1 GFBE is related to FEAD in a certain way based on the English alphabetical order. In the same way, AZVY is related to ZYUX. To which of the given options is CBXA related, following the same logic?

- Ans ☒ 1. BAVZ
☒ 2. BZVZ
☒ 3. BAWZ
☒ 4. BBVD

Question ID : 630680870647
Option 1 ID : 6306803409823
Option 2 ID : 6306803409822
Option 3 ID : 6306803409820
Option 4 ID : 6306803409821
Status : Answered
Chosen Option : 3

Q.2 What should come in place of the question mark (?) in the given series based on the English alphabetical order?

KRB MTD OVF QXH ?

- Ans ☒ 1. SZK
☒ 2. SZJ
☒ 3. TZJ
☒ 4. RZJ

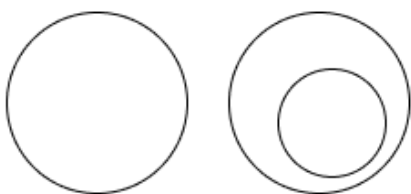
Question ID : 630680641008
Option 1 ID : 6306802509976
Option 2 ID : 6306802509974
Option 3 ID : 6306802509975
Option 4 ID : 6306802509973
Status : Answered
Chosen Option : 2

Q.3 Select the Venn diagram that best illustrate the relationship between the following classes.

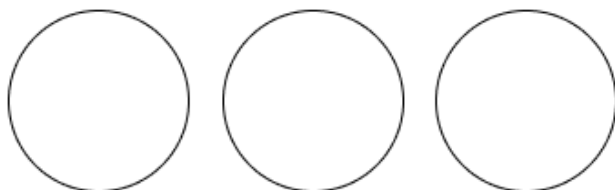
Petrol, Car, Electric.

Ans

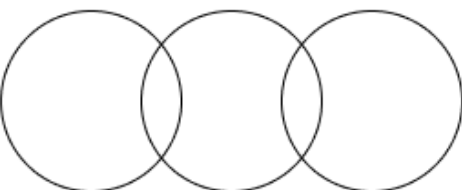
✗ 1.



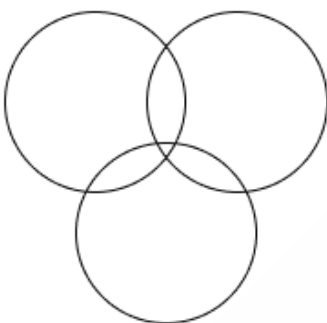
✗ 2.



✓ 3.



✗ 4.



Question ID : 630680477031
Option 1 ID : 6306801863327
Option 2 ID : 6306801863326
Option 3 ID : 6306801863325
Option 4 ID : 6306801863328

Status : Answered

Chosen Option : 3

Q.4 Read the given statements and conclusions carefully. Assuming that the information given in the statements is true, even if it appears to be at variance with commonly known facts, decide which of the given conclusions logically follow(s) from the statements.

Statements:

Some balls are toys.

All toys are plastic.

No plastic is water.

Conclusions:

(I): Some balls are plastic.

(II): No toy is water.

- Ans** ☒ 1. Only conclusion (II) follows.
- ☒ 2. Neither conclusion (I) nor (II) follows.
- ☒ 3. Both conclusions (I) and (II) follow.
- ☒ 4. Only conclusion (I) follows.

Question ID : 630680869775
Option 1 ID : 6306803406463
Option 2 ID : 6306803406464
Option 3 ID : 6306803406465
Option 4 ID : 6306803406462

Status : Answered

Chosen Option : 4

Q.5 Eight people are sitting in two parallel rows containing 4 people each in such a way that there is equal distance between adjacent persons.

In row 1, G, L, O and F are seated and all of them are facing south.

In row 2, B, E, S and T are seated and all of them are facing north.

Thus, each person faces another person from the other row.

No one sits to the left of S. No one sits to the left of L. Only one person sits between T and S. The one facing E sits second to the right of L. O sits second to the right of G.

Which of the following represents both people sitting at extreme ends of the rows?

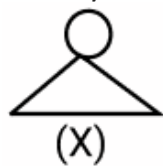
- Ans** ☒ 1. L and E
- ☒ 2. O and T
- ☒ 3. G and S
- ☒ 4. O and B

Question ID : 630680863147
Option 1 ID : 6306803380666
Option 2 ID : 6306803380664
Option 3 ID : 6306803380665
Option 4 ID : 6306803380663

Status : Answered

Chosen Option : 2

Q.6 Select the option in which the given figure (X) is embedded (rotation is NOT allowed).



Ans

✗ 1.



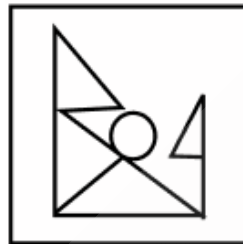
✗ 2.



✗ 3.



✓ 4.



Question ID : 6306801085888

Option 1 ID : 6306804265011

Option 2 ID : 6306804265013

Option 3 ID : 6306804265014

Option 4 ID : 6306804265012

Status : Answered

Chosen Option : 4

Q.7 DGHK is related to ADEH in a certain way based on the English alphabetical order. In the same way, MQTU is related to JNQR. To which of the following is HLQR related, following the same logic?

- Ans ☒ 1. LHQR
☒ 2. EINO
☒ 3. FJOP
☒ 4. KOTU

Question ID : 630680770687
Option 1 ID : 6306803020652
Option 2 ID : 6306803020651
Option 3 ID : 6306803020650
Option 4 ID : 6306803020649

Status : Answered
Chosen Option : 2

Q.8 The position(s) of how many letters will remain unchanged if each of the letters in the word ROTCHES is arranged in the English alphabetical order?

- Ans ☒ 1. Three
☒ 2. Zero
☒ 3. One
☒ 4. Two

Question ID : 630680752472
Option 1 ID : 6306802949175
Option 2 ID : 6306802949172
Option 3 ID : 6306802949173
Option 4 ID : 6306802949174

Status : Answered
Chosen Option : 2

Q.9 Seven people, E, F, G, H, K, L and M are sitting in a row, facing north (but not necessarily in the same order) .Only three people sit between E and L. F sits to the immediate left of L. No one sits to the right of M. Only two people sit between M and F. H sits to the immediate right of G. How many people sit between K and H?

- Ans ☒ 1. Two
☒ 2. One
☒ 3. Four
☒ 4. Three

Question ID : 630680746502
Option 1 ID : 6306802926137
Option 2 ID : 6306802926136
Option 3 ID : 6306802926139
Option 4 ID : 6306802926138

Status : Answered
Chosen Option : 1

Q.10 What should come in place of the question mark (?) in the given series?

18 55 89 120 148 ?

- Ans ☒ 1. 168
☒ 2. 192
☒ 3. 173
☒ 4. 185

Question ID : 630680793591
Option 1 ID : 6306803109551
Option 2 ID : 6306803109552
Option 3 ID : 6306803109553
Option 4 ID : 6306803109554
Status : Answered
Chosen Option : 3

Q.11 Select the correct alternative that when filled in the blanks in the same sequence will make the series logically complete.

_KHLJ_IMKM_NLNK_MOL_

- Ans ☒ 1. FLGOT
☒ 2. ILJOP
☒ 3. IKJQP
☒ 4. FKGQT

Question ID : 630680493570
Option 1 ID : 6306801928011
Option 2 ID : 6306801928008
Option 3 ID : 6306801928010
Option 4 ID : 6306801928009
Status : Answered
Chosen Option : 2

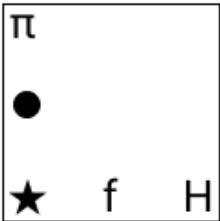


Q.12 Select the figure from among the given options that can replace the question mark (?) in the following series.

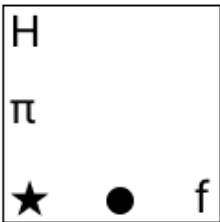
			π	?
π	π ★	π ★ ●	★ ● H	

Ans

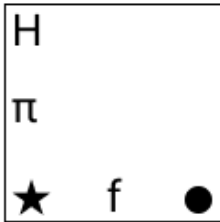
✗ 1.



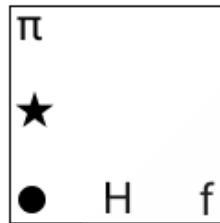
✗ 2.



✗ 3.

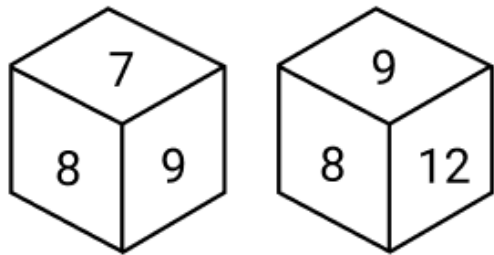


✓ 4.



Question ID : 6306801097489
Option 1 ID : 6306804311228
Option 2 ID : 6306804311229
Option 3 ID : 6306804311226
Option 4 ID : 6306804311227
Status : Answered
Chosen Option : 4

Q.13 Two different positions of the same dice are given below. Which is the number on the face opposite to the face containing 12?



- Ans
- ☒ 1. 10
 - ☒ 2. 9
 - ☒ 3. 11
 - ☒ 4. 7

Question ID : 6306801085432
Option 1 ID : 6306804263237
Option 2 ID : 6306804263238
Option 3 ID : 6306804263236
Option 4 ID : 6306804263239
Status : Answered
Chosen Option : 4

Q.14 In a coded language 'TRIP' is coded as '#@&\$' and "PART" is coded as '&^@#'. What is the code for A in the same code language?

- Ans
- ☒ 1. \$
 - ☒ 2. @
 - ☒ 3. ^
 - ☒ 4. #

Question ID : 630680721188
Option 1 ID : 6306802826108
Option 2 ID : 6306802826107
Option 3 ID : 6306802826105
Option 4 ID : 6306802826106
Status : Answered
Chosen Option : 3


Q.15 Based on the English alphabetical order, three of the following four letter-clusters are alike in a certain way and thus form a group. Which letter-cluster DOES NOT belong to that group?

(Note: The odd man out is not based on the number of consonants/vowels or their position in the letter-cluster.)

Ans  1. MOQ

 2. BDG

 3. QSV

 4. EGJ

Question ID : 630680825520

Option 1 ID : 6306803233623

Option 2 ID : 6306803233624

Option 3 ID : 6306803233621

Option 4 ID : 6306803233622

Status : Answered

Chosen Option : 1

Q.16 In a certain code language 'NBSF' is coded as '82' and 'IMSR' is coded as '118'. What is the code for 'AYLC' in the given code language?

Ans  1. 86

 2. 94

 3. 99

 4. 82

Question ID : 630680722018

Option 1 ID : 6306802829352

Option 2 ID : 6306802829351

Option 3 ID : 6306802829350

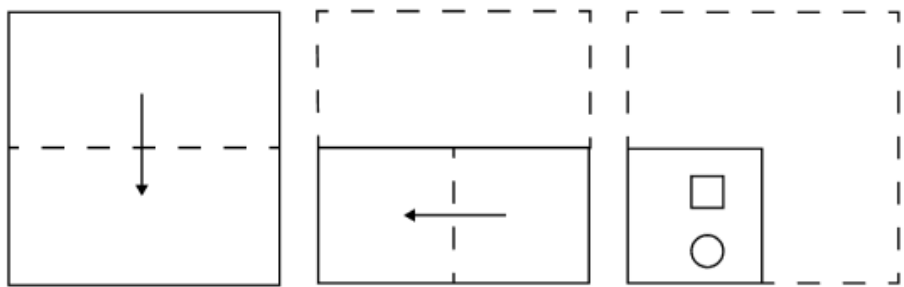
Option 4 ID : 6306802829349

Status : Answered

Chosen Option : 4

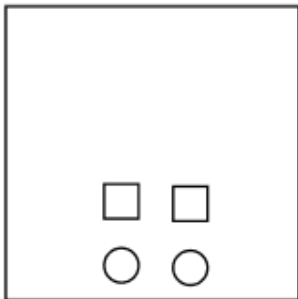


Q.17 A paper is folded and cut as shown below. How will it appear when unfolded?



Ans

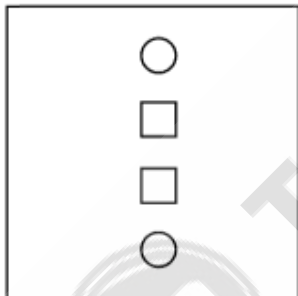
✗ 1.



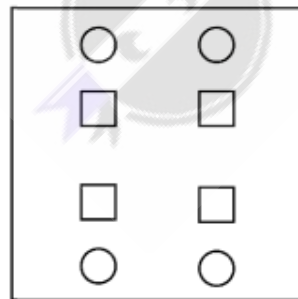
✗ 2.



✗ 3.



✓ 4.



Question ID : 6306801080105

Option 1 ID : 6306804243267

Option 2 ID : 6306804243266

Option 3 ID : 6306804243265

Option 4 ID : 6306804243268

Status : Answered

Chosen Option : 4

Q.18 What should come in place of the question mark (?) in the given series?

650 660 669 677 684 ?

- Ans ☒ 1. 686
☒ 2. 688
☒ 3. 692
☒ 4. 690

Question ID : 630680806044
Option 1 ID : 6306803157828
Option 2 ID : 6306803157829
Option 3 ID : 6306803157831
Option 4 ID : 6306803157830
Status : Answered
Chosen Option : 4

Q.19 What will come in the place of the question mark (?) in the following equation, if '+' and '-' are interchanged and 'x' and '÷' are interchanged?

$48 \times 3 - 16 + 6 \div 3 = ?$

- Ans ☒ 1. 8
☒ 2. 11
☒ 3. 5
☒ 4. 14

Question ID : 630680927196
Option 1 ID : 6306803633738
Option 2 ID : 6306803633739
Option 3 ID : 6306803633737
Option 4 ID : 6306803633740
Status : Answered
Chosen Option : 4

Q.20 In a certain code language,
'A + B' means 'A is the daughter of B',
'A - B' means 'A is the brother of B',
'A x B' means 'A is the sister of B' and
'A ÷ B' means 'A is the son of B'.

How is G related to E if 'E + F x G - H ÷ I'?

- Ans ☒ 1. Mother's brother
☒ 2. Brother's daughter
☒ 3. Mother's sister
☒ 4. Sister's daughter

Question ID : 630680813074
Option 1 ID : 6306803185716
Option 2 ID : 6306803185715
Option 3 ID : 6306803185718
Option 4 ID : 6306803185717
Status : Answered
Chosen Option : 1

Q.1 Which dance of Eastern India was recognized in the Representative List of Intangible Cultural Heritage of Humanity in 2010?

Ans ☒ 1. Garba

☒ 2. Chhau

☒ 3. Bihu

☒ 4. Lavani

Question ID : 630680483355

Option 1 ID : 6306801887799

Option 2 ID : 6306801887798

Option 3 ID : 6306801887801

Option 4 ID : 6306801887800

Status : Answered

Chosen Option : 2

Q.2 While learning to cook, Rajesh noticed that when he crushed a dozen of groundnuts in a grinder, it gets lined with oil. Whereas no oil is released when he grinds a bowl of cumin. What could be the reason behind this difference?

Ans ☒ 1. Cumin was of bad quality.

☒ 2. The fat in groundnut releases oil.

☒ 3. The protein in groundnut releases oil.

☒ 4. The groundnut was not dried.

Question ID : 630680545164

Option 1 ID : 6306802131406

Option 2 ID : 6306802131404

Option 3 ID : 6306802131403

Option 4 ID : 6306802131405

Status : Answered

Chosen Option : 2

Q.3 Sukta was known as hymns of which of the following Vedic books?

Ans ☒ 1. Atharvaveda

☒ 2. Rigveda

☒ 3. Samaveda

☒ 4. Yajurveda

Question ID : 630680565042

Option 1 ID : 6306802209105

Option 2 ID : 6306802209102

Option 3 ID : 6306802209103

Option 4 ID : 6306802209104

Status : Answered

Chosen Option : 2



Q.4 When was the 3rd edition of the Khelo India Winter Games held in India?

- Ans
- ☒ 1. January 2023
 - ☒ 2. January 2024
 - ☒ 3. February 2023
 - ☒ 4. February 2022

Question ID : 6306801374743

Option 1 ID : 6306805412269

Option 2 ID : 6306805412270

Option 3 ID : 6306805412267

Option 4 ID : 6306805412268

Status : Answered

Chosen Option : 2

Q.5 Which benefit is NOT included in 'PM – Surya Ghar: Muft Bijli Yojana'?

- Ans
- ☒ 1. Reduced electricity costs for the government
 - ☒ 2. Increased use of renewable energy
 - ☒ 3. Reduced electricity costs for the private sector
 - ☒ 4. Free electricity for households

Question ID : 6306801122544

Option 1 ID : 6306804410414

Option 2 ID : 6306804410415

Option 3 ID : 6306804410413

Option 4 ID : 6306804410412

Status : Not Answered

Chosen Option : --

Q.6 According to the Census of India, 2011, which of the following northeastern states has the highest population?

- Ans
- ☒ 1. Manipur
 - ☒ 2. Assam
 - ☒ 3. Mizoram
 - ☒ 4. Arunachal Pradesh

Question ID : 630680553900

Option 1 ID : 6306802165454

Option 2 ID : 6306802165456

Option 3 ID : 6306802165455

Option 4 ID : 6306802165457

Status : Answered

Chosen Option : 2

Q.7 After how many years did India win the gold medal in the men's hockey tournament in the Asian Games in 2014?

Ans ☒ 1. 16 years

☐ 2. 11 years

☐ 3. 20 years

☐ 4. 14 years

Question ID : 630680457325

Option 1 ID : 6306801786214

Option 2 ID : 6306801786212

Option 3 ID : 6306801786215

Option 4 ID : 6306801786213

Status : Answered

Chosen Option : 1

Q.8 Georg Simon Ohm was famous for publishing a formula in 1827. What does it describe?

Ans ☐ 1. The magnitude of EMF induced in the coil is directly proportional to the rate of change of magnetic flux associated with that coil.

☐ 2. The sum of all currents entering a junction must equal the sum of all currents leaving the junction.

☒ 3. The current flow is proportional to potential difference and inversely proportional to resistance.

☐ 4. The total electric flux through a closed surface is proportional to the charge enclosed.

Question ID : 630680563297

Option 1 ID : 6306802202142

Option 2 ID : 6306802202144

Option 3 ID : 6306802202141

Option 4 ID : 6306802202143

Status : Answered

Chosen Option : 3

Q.9 Which of the following sectors includes all the business entities, corporations and partnerships?

Ans ☐ 1. Government sector

☐ 2. Household sector

☐ 3. Foreign sector

☒ 4. Firms sector

Question ID : 630680758396

Option 1 ID : 6306802972575

Option 2 ID : 6306802972573

Option 3 ID : 6306802972576

Option 4 ID : 6306802972574

Status : Answered

Chosen Option : 4

Q.10 According to the Indian Constitution, which of the following Schedule deals with the separation of powers of the government?

- Ans ☒ 1. Fifth Schedule
- ☒ 2. Seventh Schedule
- ☒ 3. Eighth Schedule
- ☒ 4. Sixth Schedule

Question ID : 630680636189
Option 1 ID : 6306802490586
Option 2 ID : 6306802490588
Option 3 ID : 6306802490589
Option 4 ID : 6306802490587
Status : Answered
Chosen Option : 2

Q.11 Kalamandalam Kshemavathy Pavithran, recipient of Padma Shri and a performer of mohiniyattam, belongs to which of the following states of India?

- Ans ☒ 1. Karnataka
- ☒ 2. Kerala
- ☒ 3. Tamil Nadu
- ☒ 4. Telangana

Question ID : 630680480965
Option 1 ID : 6306801878448
Option 2 ID : 6306801878449
Option 3 ID : 6306801878451
Option 4 ID : 6306801878450
Status : Answered
Chosen Option : 2

Q.12 Who among the following was appointed as the Union Minister of Culture in June 2024?

- Ans ☒ 1. Jual Oram
- ☒ 2. Giriraj Singh
- ☒ 3. Kinjarapu Rammohan Naidu
- ☒ 4. Gajendra Singh Shekhawat

Question ID : 6306801064931
Option 1 ID : 6306804182010
Option 2 ID : 6306804182011
Option 3 ID : 6306804182009
Option 4 ID : 6306804182012
Status : Not Answered
Chosen Option : --



Q.13 As per Sample Registration System (SRS) 2020, which of the following Indian states had the highest natural growth rate in population?

- Ans ☒ 1. Bihar
- ☒ 2. Uttar Pradesh
- ☒ 3. Madhya Pradesh
- ☒ 4. Rajasthan

Question ID : 630680554125
Option 1 ID : 6306802166357
Option 2 ID : 6306802166354
Option 3 ID : 6306802166355
Option 4 ID : 6306802166356
Status : Answered
Chosen Option : 2

Q.14 What role do MNCs play in the globalisation process?

- Ans ☒ 1. They integrate production and markets across different countries.
- ☒ 2. They regulate national policies on trade.
- ☒ 3. They promote local businesses only.
- ☒ 4. They discourage international trade.

Question ID : 6306801064777
Option 1 ID : 6306804181415
Option 2 ID : 6306804181416
Option 3 ID : 6306804181414
Option 4 ID : 6306804181413
Status : Answered
Chosen Option : 1

Q.15 Sikkil Mala Chandrasekhar is associated with which of the following musical instruments?

- Ans ☒ 1. Tabla
- ☒ 2. Pakhawaj
- ☒ 3. Flute
- ☒ 4. Rudra veena

Question ID : 630680550455
Option 1 ID : 6306802152088
Option 2 ID : 6306802152089
Option 3 ID : 6306802152090
Option 4 ID : 6306802152087
Status : Not Answered
Chosen Option : --

Q.16 The 'August Offer' of 1940 was made by which British government official?

- Ans ☒ 1. Neville Chamberlain
☒ 2. Lord Linlithgow
☒ 3. Clement Attlee
☒ 4. Winston Churchill

Question ID : 6306801069302
Option 1 ID : 6306804199475
Option 2 ID : 6306804199476
Option 3 ID : 6306804199477
Option 4 ID : 6306804199474
Status : Answered
Chosen Option : 3

Q.17 In which type of climate are deciduous forests and tree-shredded grasslands found?

- Ans ☒ 1. Tropical wet and dry climate
☒ 2. Humid subtropical climate
☒ 3. Subtropical steppe climate
☒ 4. Warm temperate (mid-latitude) climate

Question ID : 630680564141
Option 1 ID : 6306802205523
Option 2 ID : 6306802205521
Option 3 ID : 6306802205524
Option 4 ID : 6306802205522
Status : Answered
Chosen Option : 1

Q.18 Which of the following is the festival that celebrates Marathi New Year?

- Ans ☒ 1. Makar Sankranti
☒ 2. Ugadi
☒ 3. Pongal
☒ 4. Gudi Padwa

Question ID : 630680535118
Option 1 ID : 6306802091848
Option 2 ID : 6306802091850
Option 3 ID : 6306802091849
Option 4 ID : 6306802091851
Status : Answered
Chosen Option : 4

Q.19 The focus areas of the first and second five-year plans were:

- Ans ☒ 1. Agriculture and Industry sectors
- ☐ 2. Industry and Service Sectors
- ☐ 3. Agriculture and Service Sectors
- ☐ 4. Agriculture and Foreign Sectors

Question ID : 630680493392
Option 1 ID : 6306801927307
Option 2 ID : 6306801927308
Option 3 ID : 6306801927309
Option 4 ID : 6306801927310
Status : Answered
Chosen Option : 1

Q.20 Vacation, resignation and removal from the offices of Speaker and Deputy Speaker are addressed in which Article of the Constitution of India?

- Ans ☐ 1. Article 70
- ☐ 2. Article 101
- ☐ 3. Article 84
- ☒ 4. Article 94

Question ID : 630680730813
Option 1 ID : 6306802863961
Option 2 ID : 6306802863964
Option 3 ID : 6306802863962
Option 4 ID : 6306802863963
Status : Answered
Chosen Option : 4

Section : Part-C-Elementary Mathematics

Q.1 Pramod sold 154 chairs and had a gain equal to the selling price of 54 chairs. What is his profit percentage?

- Ans ☐ 1. 59%
- ☐ 2. 64%
- ☐ 3. 49%
- ☒ 4. 54%

Question ID : 630680907226
Option 1 ID : 6306803554004
Option 2 ID : 6306803554005
Option 3 ID : 6306803554003
Option 4 ID : 6306803554002
Status : Answered
Chosen Option : 4

Q.2 A shopkeeper bought an article for ₹520. At what price (in ₹) should he sell the article to make 20% profit?

Ans ☒ 1. 636

☒ 2. 624

☒ 3. 416

☒ 4. 612

Question ID : 630680613943

Option 1 ID : 6306802402506

Option 2 ID : 6306802402504

Option 3 ID : 6306802402505

Option 4 ID : 6306802402507

Status : Answered

Chosen Option : 2

Q.3 The greatest number, which divides 943 and 1957 to leave 7 and 1 respectively as remainders, is:

Ans ☒ 1. 12

☒ 2. 28

☒ 3. 10

☒ 4. 13

Question ID : 630680788707

Option 1 ID : 6306803090608

Option 2 ID : 6306803090610

Option 3 ID : 6306803090611

Option 4 ID : 6306803090609

Status : Answered

Chosen Option : 1

Q.4 The price (per litre) of petrol increases by 40%. By what percent should its consumption be reduced such that the expenditure on it increases by 19% only?

Ans ☒ 1. 85%

☒ 2. 15%

☒ 3. 84%

☒ 4. 18%

Question ID : 630680954680

Option 1 ID : 6306803742928

Option 2 ID : 6306803742929

Option 3 ID : 6306803742931

Option 4 ID : 6306803742930

Status : Answered

Chosen Option : 2



Q.5 The simple interest on a principal amount (in ₹) is ₹524 for a period of 2 years at the rate of 5% per annum. The principal amount (in ₹) is:

Ans ☒ 1. 5240

☐ 2. 5234

☐ 3. 5249

☐ 4. 5239

Question ID : 630680789759

Option 1 ID : 6306803094816

Option 2 ID : 6306803094818

Option 3 ID : 6306803094817

Option 4 ID : 6306803094819

Status : Answered

Chosen Option : 1

Q.6 Ajay invested some money in HDFC at 4% per annum rate of interest. What would be the corresponding simple interest (in ₹) if after 2 years, Ajay got ₹204 as compound interest, considering annual compounding?

Ans ☐ 1. 195

☐ 2. 215

☒ 3. 200

☐ 4. 210

Question ID : 6306801002875

Option 1 ID : 6306803935630

Option 2 ID : 6306803935632

Option 3 ID : 6306803935629

Option 4 ID : 6306803935631

Status : Answered

Chosen Option : 3

Q.7 The average age of 40 students of a class is 12 years. If the age of the teacher is also included, the average age of the whole group becomes 13 years. The age (in years) of the teacher is:

Ans ☐ 1. 51

☐ 2. 50

☒ 3. 53

☐ 4. 56

Question ID : 630680862814

Option 1 ID : 6306803379144

Option 2 ID : 6306803379145

Option 3 ID : 6306803379143

Option 4 ID : 6306803379146

Status : Answered

Chosen Option : 3



Q.8 If the income of Ravi is 24% more than that of Ram, then by what percentage is the income of Ram less than that of Ravi?

- Ans
- ☒ 1. $\frac{700}{31}\%$
 - ☒ 2. $\frac{500}{31}\%$
 - ☒ 3. $\frac{400}{31}\%$
 - ☒ 4. $\frac{600}{31}\%$

Question ID : 6306801375057

Option 1 ID : 6306805413522

Option 2 ID : 6306805413519

Option 3 ID : 6306805413521

Option 4 ID : 6306805413520

Status : Answered

Chosen Option : 4

Q.9 The third proportional of $\frac{x^{2.5}}{y^{1.5}} \times z^{3.5}$ and $x^{0.25} \times \frac{y^{0.25}}{z^{-0.25}}$ is _____

- Ans
- ☒ 1. $\frac{y^2}{x^3 z^2}$
 - ☒ 2. $\frac{y^3}{x^3 z^3}$
 - ☒ 3. $\frac{y^2}{x^2 z^3}$
 - ☒ 4. $\frac{y^2}{x^2 z^2}$

Question ID : 6306801148914

Option 1 ID : 6306804515721

Option 2 ID : 6306804515723

Option 3 ID : 6306804515722

Option 4 ID : 6306804515720

Status : Answered

Chosen Option : 3

Q.10 Evaluate: $(-9) - (-60) \div (-15) + (-3) \times 6$

- Ans
- ☒ 1. -33
 - ☒ 2. -34
 - ☒ 3. -31
 - ☒ 4. -30

Question ID : 630680687555

Option 1 ID : 6306802692881

Option 2 ID : 6306802692883

Option 3 ID : 6306802692880

Option 4 ID : 6306802692882

Status : Answered

Chosen Option : 3



Q.11 The diagonals of a rhombus are 4 m and 6 m, respectively. Find its area (in m^2).

- Ans
- ☒ 1. 9
 - ☒ 2. 24
 - ☒ 3. 18
 - ☒ 4. 12

Question ID : 6306801131467

Option 1 ID : 6306804446026

Option 2 ID : 6306804446024

Option 3 ID : 6306804446025

Option 4 ID : 6306804446027

Status : Answered

Chosen Option : 4

Q.12 Krish has ₹1224 with him. He divided it amongst his sons Veer and Nitin and asked them to invest it at 4% rate of interest compounded annually. It was seen that Veer and Nitin got same amount after 12 and 13 years respectively. How much (in ₹) did Krish give to Nitin?

- Ans
- ☒ 1. 600
 - ☒ 2. 724
 - ☒ 3. 450
 - ☒ 4. 624

Question ID : 6306801002819

Option 1 ID : 6306803935405

Option 2 ID : 6306803935408

Option 3 ID : 6306803935407

Option 4 ID : 6306803935406

Status : Answered

Chosen Option : 1

Q.13 A and B can do a work in 30 days and 10 days, respectively. If they v

- Ans
- ☒ 1. $14\frac{1}{3}$ days
 - ☒ 2. $15\frac{1}{3}$ days
 - ☒ 3. $12\frac{1}{3}$ days
 - ☒ 4. $16\frac{1}{3}$ days

Question ID : 6306801146991

Option 1 ID : 6306804508142

Option 2 ID : 6306804508144

Option 3 ID : 6306804508141

Option 4 ID : 6306804508143

Status : Answered

Chosen Option : 2

Q.14 A salesman offers a discount scheme of 'Buy 25 and get 5 free' on the purchase of notebooks in his shop. He professes that a notebook costs him ₹10, but in reality, it costs him ₹5. Find the difference between his profit percentage and scheme discount.

- Ans ☒ 1. 42%
- ☒ 2. 48%
- ☒ 3. 50%
- ☒ 4. 56%

Question ID : 6306801146860
Option 1 ID : 6306804507580
Option 2 ID : 6306804507581
Option 3 ID : 6306804507582
Option 4 ID : 6306804507579
Status : Answered
Chosen Option : 3

Q.15 If the mean proportional of 18 and 98 is $2A + 6$, the value of A is:

- Ans ☒ 1. 16
- ☒ 2. 19
- ☒ 3. 17
- ☒ 4. 18

Question ID : 6306801149387
Option 1 ID : 6306804517597
Option 2 ID : 6306804517600
Option 3 ID : 6306804517598
Option 4 ID : 6306804517599
Status : Answered
Chosen Option : 4

Q.16 The average age of 35 students in a group is 15 years. When the teacher's age is included, the average age of the group increases by 1.25 years. What is the teacher's age (in years)?

- Ans ☒ 1. 45
- ☒ 2. 60
- ☒ 3. 50
- ☒ 4. 55

Question ID : 6306801137484
Option 1 ID : 6306804470122
Option 2 ID : 6306804470121
Option 3 ID : 6306804470120
Option 4 ID : 6306804470119
Status : Answered
Chosen Option : 2



Q.17 Evaluate: $32 \div 8 \times 4 - 3 \times 3$

Ans ☒ 1. 7

☒ 2. 10

☒ 3. 6

☒ 4. 9

Question ID : 630680687597

Option 1 ID : 6306802693048

Option 2 ID : 6306802693049

Option 3 ID : 6306802693051

Option 4 ID : 6306802693050

Status : Answered

Chosen Option : 1

Q.18 Two trains having lengths of 340 m and 360 m are running at speeds of 80 km/h and 90 km/h, respectively, in the same direction. The time taken (in minutes) by the faster train, coming from behind, to completely cross the other train is:

Ans ☒ 1. 4.2

☒ 2. 7

☒ 3. 6

☒ 4. 3.7

Question ID : 630680950215

Option 1 ID : 6306803725509

Option 2 ID : 6306803725512

Option 3 ID : 6306803725510

Option 4 ID : 6306803725511

Status : Answered

Chosen Option : 1

Q.19 The distance from Chandigarh to Amritsar is covered in 4.5 hours at a speed of 50 km/hr. By how much should the speed (in km/hr) be increased to save 30 minutes of travel time?

Ans ☒ 1. 6.5

☒ 2. 6.25

☒ 3. 6

☒ 4. 6.75

Question ID : 6306801154650

Option 1 ID : 6306804538521

Option 2 ID : 6306804538520

Option 3 ID : 6306804538519

Option 4 ID : 6306804538522

Status : Answered

Chosen Option : 2



Q.20 The greatest number, which divides 1477 and 671 to leave 0 and 6 respectively as remainders, is:

Ans ☒ 1. 7

☐ 2. 16

☐ 3. 17

☐ 4. 20

Question ID : 630680788696
Option 1 ID : 6306803090564
Option 2 ID : 6306803090565
Option 3 ID : 6306803090567
Option 4 ID : 6306803090566
Status : Answered

Chosen Option : 1

Section : Part-D-English

Q.1 Select the most appropriate ANTONYM of the given word.

Authenticate

Ans ☒ 1. Discredit

☐ 2. Entitle

☐ 3. Scatter

☐ 4. Amalgamate

Question ID : 630680366828
Option 1 ID : 6306801428791
Option 2 ID : 6306801428792
Option 3 ID : 6306801428789
Option 4 ID : 6306801428790
Status : Not Answered

Chosen Option : --

Q.2 Select the most appropriate synonym of the highlighted word.

The policies of the school proscribe accessing social media websites on school computers.

Ans ☐ 1. vary

☐ 2. reveal

☐ 3. surround

☒ 4. prohibit

Question ID : 630680718785
Option 1 ID : 6306802816654
Option 2 ID : 6306802816652
Option 3 ID : 6306802816653
Option 4 ID : 6306802816651
Status : Not Answered

Chosen Option : --



Q.3 Identify the INCORRECTLY spelt word in the following sentence.

Clear communicetion is essential for effective collaboration and successful completion of complex projects at work.

- Ans
- ☒ 1. collaboration
 - ☒ 2. effective
 - ☒ 3. communicetion
 - ☒ 4. completion

Question ID : 630680419609

Option 1 ID : 6306801636924

Option 2 ID : 6306801636923

Option 3 ID : 6306801636926

Option 4 ID : 6306801636925

Status : Not Answered

Chosen Option : --

Q.4 Select the most appropriate option to fill in the blank.
Tamanna is as _____ with all her projects.

- Ans
- ☒ 1.
busy as a bee
 - ☒ 2. beat around the bush
 - ☒ 3. busy as a sparrow
 - ☒ 4.
busy as a tiger

Question ID : 630680710856

Option 1 ID : 6306802785080

Option 2 ID : 6306802785081

Option 3 ID : 6306802785083

Option 4 ID : 6306802785082

Status : Not Answered

Chosen Option : --

Q.5 Select the most appropriate synonym of the given word.

Annihilate

- Ans
- ☒ 1. Increase
 - ☒ 2. Confirm
 - ☒ 3. Destroy
 - ☒ 4. Lengthen

Question ID : 630680749923

Option 1 ID : 6306802939210

Option 2 ID : 6306802939208

Option 3 ID : 6306802939209

Option 4 ID : 6306802939211

Status : Not Answered

Chosen Option : --



Q.6 Select the most appropriate option to fill in blank.

Neither John _____ his friends were able to attend the party.

Ans ☒ 1. and

☒ 2. nor

☒ 3. but

☒ 4. or

Question ID : 6306801107697

Option 1 ID : 6306804351249

Option 2 ID : 6306804351247

Option 3 ID : 6306804351250

Option 4 ID : 6306804351248

Status : Not Answered

Chosen Option : --

Q.7 The following sentence has been divided into parts. One of them may contain an error. Select the part that contains the error from the given options. If you don't find any error, mark 'No error' as your answer.

The hotel/ is not big enormous/ to accommodate some more guests.

Ans ☒ 1. is not big enormous

☒ 2. The hotel

☒ 3. to accommodate some more guests.

☒ 4. No error.

Question ID : 6306801100057

Option 1 ID : 6306804321548

Option 2 ID : 6306804321547

Option 3 ID : 6306804321549

Option 4 ID : 6306804321550

Status : Not Answered

Chosen Option : --

Q.8 The given sentence is divided into four segments. Select the option that has the segment with an adverbial usage error.

Patricia and / her associate / softly examined / the ancient artefact.

Ans ☒ 1. the ancient artefact

☒ 2. Patricia and

☒ 3. softly examined

☒ 4. her associate

Question ID : 6306801099486

Option 1 ID : 6306804319190

Option 2 ID : 6306804319187

Option 3 ID : 6306804319189

Option 4 ID : 6306804319188

Status : Not Answered

Chosen Option : --



Q.9 Select the most appropriate option that can substitute the underlined words in the given sentence.

The rural life can be contrasted to that of urban life.

- Ans
- ☒ 1. contrasted at
 - ☒ 2. contrasted off
 - ☒ 3. contrasted in
 - ☒ 4. contrasted with

Question ID : 630680435973

Option 1 ID : 6306801701852

Option 2 ID : 6306801701850

Option 3 ID : 6306801701851

Option 4 ID : 6306801701849

Status : Not Answered

Chosen Option : --

Q.10 Select the INCORRECTLY spelt word.

- Ans
- ☒ 1. Renewel
 - ☒ 2. Horizon
 - ☒ 3. Composer
 - ☒ 4. Algebra

Question ID : 6306801090067

Option 1 ID : 6306804281441

Option 2 ID : 6306804281438

Option 3 ID : 6306804281440

Option 4 ID : 6306804281439

Status : Not Answered

Chosen Option : --

Q.11 Select the most appropriate option to substitute the underlined segment in the given sentence.

Learning a new language can be all challenging and rewarding.

- Ans
- ☒ 1. both challenging and rewarding
 - ☒ 2. whether both challenging and rewarding
 - ☒ 3. all both challenging or rewarding
 - ☒ 4. neither challenging and rewarding

Question ID : 630680429376

Option 1 ID : 6306801675551

Option 2 ID : 6306801675548

Option 3 ID : 6306801675550

Option 4 ID : 6306801675549

Status : Not Answered

Chosen Option : --



Q.12 Select the most appropriate option to substitute the underlined segment in the given sentence.

Elastocaloric cooling is a promising, eco-friendly technology for refrigeration that has the potential to be used by a broad range of applications and at different temperature ranges.

- Ans
- ☒ 1. potential to be used as
 - ☐ 2. potential to be using in
 - ☒ 3. potential to be used in
 - ☐ 4. potential to use in

Question ID : 6306801099779
Option 1 ID : 6306804320426
Option 2 ID : 6306804320424
Option 3 ID : 6306804320425
Option 4 ID : 6306804320423
Status : Not Answered
Chosen Option : --

Q.13 Select the most appropriate ANTONYM of the given word.

Confess

- Ans
- ☒ 1. Disavow
 - ☐ 2. Scare
 - ☐ 3. Witness
 - ☐ 4. Preface

Question ID : 630680502804
Option 1 ID : 6306801964797
Option 2 ID : 6306801964799
Option 3 ID : 6306801964800
Option 4 ID : 6306801964798
Status : Not Answered
Chosen Option : --

Q.14 Select the most appropriate option to fill in the blank.

She felt a _____ of relief after the exam was over.

- Ans
- ☒ 1. sense
 - ☐ 2. responsibility
 - ☐ 3. danger
 - ☐ 4. touch

Question ID : 6306801119906
Option 1 ID : 6306804399946
Option 2 ID : 6306804399947
Option 3 ID : 6306804399948
Option 4 ID : 6306804399949
Status : Not Answered
Chosen Option : --

Q.15 Select the most appropriate synonym of the underlined word.

The teacher explained the concept in a concise way, making it easy to understand.

- Ans ☒ 1. Confusing
☒ 2. Interesting
☒ 3. Detailed
☒ 4. Brief

Question ID : 630680751586
Option 1 ID : 6306802945769
Option 2 ID : 6306802945772
Option 3 ID : 6306802945770
Option 4 ID : 6306802945771
Status : Not Answered
Chosen Option : --

Comprehension:

In the following passage, some words have been deleted. Read the passage carefully and select the most appropriate option to fill in each blank.

Apart from the fact that he was at this moment, disguised as a spiritual leader ____1____ the Christian Church, there was nothing sinister about Mr. Cyril Boggis. He was ____2____ trade a dealer in antique furniture, with his own shop and showroom in the King's Road, Chelsea. His premises ____3____ not large, and generally he did not do a great deal of business, but because he always bought very, very cheap and sold very, very ____4____ he managed to make quite a tidy little income every year. He was a talented salesman, and when buying or selling a ____5____ he could slide smoothly into whichever mood suited the client best. He was well aware of his gift using it shamelessly on every possible occasion.

SubQuestion No : 16

Q.16 Select the most appropriate option to fill in blank number 1.

- Ans ☒ 1. of
☒ 2. off
☒ 3. oft
☒ 4. on

Question ID : 630680478683
Option 1 ID : 6306801869688
Option 2 ID : 6306801869685
Option 3 ID : 6306801869686
Option 4 ID : 6306801869687
Status : Not Answered
Chosen Option : --

Comprehension:

In the following passage, some words have been deleted. Read the passage carefully and select the most appropriate option to fill in each blank.

Apart from the fact that he was at this moment, disguised as a spiritual leader ____1____ the Christian Church, there was nothing sinister about Mr. Cyril Boggis. He was ____2____ trade a dealer in antique furniture, with his own shop and showroom in the King's Road, Chelsea. His premises ____3____ not large, and generally he did not do a great deal of business, but because he always bought very, very cheap and sold very, very ____4____ he managed to make quite a tidy little income every year. He was a talented salesman, and when buying or selling a ____5____ he could slide smoothly into whichever mood suited the client best. He was well aware of his gift using it shamelessly on every possible occasion.

SubQuestion No : 17

Q.17 Select the most appropriate option the fill in blank number 2.

- Ans ☒ 1. at
☒ 2. in
☒ 3. from
☒ 4. by

Question ID : 630680478684
Option 1 ID : 6306801869691
Option 2 ID : 6306801869690
Option 3 ID : 6306801869692
Option 4 ID : 6306801869689
Status : Not Answered
Chosen Option : --

Comprehension:

In the following passage, some words have been deleted. Read the passage carefully and select the most appropriate option to fill in each blank.

Apart from the fact that he was at this moment, disguised as a spiritual leader ____1____ the Christian Church, there was nothing sinister about Mr. Cyril Boggis. He was ____2____ trade a dealer in antique furniture, with his own shop and showroom in the King's Road, Chelsea. His premises ____3____ not large, and generally he did not do a great deal of business, but because he always bought very, very cheap and sold very, very ____4____ he managed to make quite a tidy little income every year. He was a talented salesman, and when buying or selling a ____5____ he could slide smoothly into whichever mood suited the client best. He was well aware of his gift using it shamelessly on every possible occasion.

SubQuestion No : 18

Q.18 Select the most appropriate option the fill in blank number 3.

- Ans ☒ 1. were
☒ 2. are
☒ 3. was
☒ 4. is

Question ID : 630680478685
Option 1 ID : 6306801869695
Option 2 ID : 6306801869696
Option 3 ID : 6306801869693
Option 4 ID : 6306801869694
Status : Not Answered
Chosen Option : --

Comprehension:

In the following passage, some words have been deleted. Read the passage carefully and select the most appropriate option to fill in each blank.

Apart from the fact that he was at this moment, disguised as a spiritual leader ____1____ the Christian Church, there was nothing sinister about Mr. Cyril Boggis. He was ____2____ trade a dealer in antique furniture, with his own shop and showroom in the King's Road, Chelsea. His premises ____3____ not large, and generally he did not do a great deal of business, but because he always bought very, very cheap and sold very, very ____4____ he managed to make quite a tidy little income every year. He was a talented salesman, and when buying or selling a ____5____ he could slide smoothly into whichever mood suited the client best. He was well aware of his gift using it shamelessly on every possible occasion.

SubQuestion No : 19

Q.19 Select the most appropriate option the fill in blank number 4.

- Ans  1. door
 2. dare
 3. dear
 4. deer

Question ID : 630680478686
Option 1 ID : 6306801869700
Option 2 ID : 6306801869697
Option 3 ID : 6306801869698
Option 4 ID : 6306801869699
Status : Not Answered
Chosen Option : --

Comprehension:

In the following passage, some words have been deleted. Read the passage carefully and select the most appropriate option to fill in each blank.

Apart from the fact that he was at this moment, disguised as a spiritual leader ____1____ the Christian Church, there was nothing sinister about Mr. Cyril Boggis. He was ____2____ trade a dealer in antique furniture, with his own shop and showroom in the King's Road, Chelsea. His premises ____3____ not large, and generally he did not do a great deal of business, but because he always bought very, very cheap and sold very, very ____4____ he managed to make quite a tidy little income every year. He was a talented salesman, and when buying or selling a ____5____ he could slide smoothly into whichever mood suited the client best. He was well aware of his gift using it shamelessly on every possible occasion.

SubQuestion No : 20

Q.20 Select the most appropriate option the fill in blank number 5.

- Ans  1. piece
 2. pace
 3. pose
 4. peace

Question ID : 630680478687
Option 1 ID : 6306801869704
Option 2 ID : 6306801869702
Option 3 ID : 6306801869703
Option 4 ID : 6306801869701
Status : Not Answered
Chosen Option : --

Q.1 'बहुत परिश्रम करना' के लिए निम्नलिखित में से उपयुक्त मुहावरा है।

- Ans
- ☒ 1. दिन-रात न होना
 - ☒ 2. अत्यधिक जुगाड़ लगाना
 - ☒ 3. आकाश-पाताल एक करना
 - ☒ 4. आग में घी डालना

Question ID : 630680157235

Option 1 ID : 630680608475

Option 2 ID : 630680608474

Option 3 ID : 630680608472

Option 4 ID : 630680608473

Status : Answered

Chosen Option : 3

Q.2 निम्नलिखित मुहावरे के उचित अर्थ का चयन करें-
'आँखों के आगे नाचना'

- Ans
- ☒ 1. देखने को जी चाहना
 - ☒ 2. क्रोध करना
 - ☒ 3. प्रतीक्षा करना
 - ☒ 4. हर समय याद रहना

Question ID : 630680191396

Option 1 ID : 630680742206

Option 2 ID : 630680742205

Option 3 ID : 630680742208

Option 4 ID : 630680742207

Status : Answered

Chosen Option : 4

Q.3 निम्नलिखित में से कौन-सा शब्द पुल्लिंग नहीं है-

- Ans
- ☒ 1. शोषण
 - ☒ 2. कार्य
 - ☒ 3. पोषण
 - ☒ 4. जड़ता

Question ID : 63068065966

Option 1 ID : 630680254796

Option 2 ID : 630680254797

Option 3 ID : 630680254795

Option 4 ID : 630680254794

Status : Answered

Chosen Option : 4



Q.4 निम्नलिखित वाक्यांश के लिए सार्थक शब्द चुनिए -
आकाश में विचरण करने वाला

- Ans ☒ 1. निशाचर
☒ 2. भूमिचर
☒ 3. नभचर
☒ 4. जलचर

Question ID : 630680490933
Option 1 ID : 6306801917639
Option 2 ID : 6306801917641
Option 3 ID : 6306801917640
Option 4 ID : 6306801917642
Status : Answered
Chosen Option : 3

Q.5 'अभ्यागत' का पर्याय है-

- Ans ☒ 1. अतिरिक्त
☒ 2. मेहमान
☒ 3. आगत
☒ 4. अतीत

Question ID : 630680510417
Option 1 ID : 6306801994800
Option 2 ID : 6306801994798
Option 3 ID : 6306801994799
Option 4 ID : 6306801994801
Status : Answered
Chosen Option : 2

Q.6 'जो शिव की उपासना करता हो' वाक्यांश के लिए सार्थक शब्द इनमें से कौन-सा है?

- Ans ☒ 1. भक्त
☒ 2. वैष्णव
☒ 3. शैव
☒ 4. शाक्त

Question ID : 630680273055
Option 1 ID : 6306801060774
Option 2 ID : 6306801060773
Option 3 ID : 6306801060771
Option 4 ID : 6306801060772
Status : Answered
Chosen Option : 3

Q.7 'निंदा' का विलोम शब्द है-

- Ans
- ☒ 1. स्फूर्ति
 - ☒ 2. बुराई
 - ☒ 3. प्रलाप
 - ☒ 4. स्तुति

Question ID : 63068052159

Option 1 ID : 630680200755

Option 2 ID : 630680200757

Option 3 ID : 630680200756

Option 4 ID : 630680200754

Status : Answered

Chosen Option : 4

Q.8 'तालाब का किनारा अत्यंत सुन्दर दिख रहा है।' इस वाक्य में प्रयुक्त 'किनारा' शब्द का अनेकार्थी शब्द निम्न में से कौनसा है?

- Ans
- ☒ 1. माध्यम
 - ☒ 2. हाशिया
 - ☒ 3. सलीका
 - ☒ 4. अंदाज

Question ID : 630680136933

Option 1 ID : 630680530337

Option 2 ID : 630680530336

Option 3 ID : 630680530335

Option 4 ID : 630680530334

Status : Answered

Chosen Option : 3

Q.9 'स्वामी' के लिए विलोम शब्द होगा-

- Ans
- ☒ 1. श्रद्धा
 - ☒ 2. श्रीमान
 - ☒ 3. दाता
 - ☒ 4. दास

Question ID : 630680510626

Option 1 ID : 6306801995634

Option 2 ID : 6306801995635

Option 3 ID : 6306801995637

Option 4 ID : 6306801995636

Status : Answered

Chosen Option : 4



Q.10 'चिंता यह है की देश का पुनरुत्थान कैसे होगा?'

उपरोक्त वाक्य में वर्तनी सम्बन्धी अशुद्धियाँ है। अशुद्धि रहित वाक्य का चयन करें-

- Ans ☒ 1. चिंता यह है की देश का पुनरुत्थान कैसे होगा ।
☒ 2. चिंता यह है कि देश का पुनरुत्थान कैसे होगा ।
☒ 3. चिंता यह है कि देश का पुनरुत्थान कैसे होगा ।
☒ 4. चिंता यह है कि देश का पुनरुत्थान कैसे होगा ।

Question ID : 630680130551

Option 1 ID : 630680505505

Option 2 ID : 630680505504

Option 3 ID : 630680505503

Option 4 ID : 630680505502

Status : Answered

Chosen Option : 2

Q.11 निम्नलिखित वाक्य में रेखांकित खंड के स्थान पर प्रयुक्त होने वाले सबसे उपयुक्त विकल्प का चयन कीजिए-

सीमा की लिखावट हिंदी की बहुत सुंदर है।

- Ans ☒ 1. हिंदी की
☒ 2. लिखावट की हिंदी
☒ 3. हिंदी लिखावट की
☒ 4. हिंदी की लिखावट

Question ID : 630680510005

Option 1 ID : 6306801993156

Option 2 ID : 6306801993155

Option 3 ID : 6306801993154

Option 4 ID : 6306801993153

Status : Answered

Chosen Option : 4

Q.12 दिए गए वाक्यों के रेखांकित शब्दों के आधार पर संज्ञा की दृष्टि से अशुद्ध वाक्य की पहचान करें-

- Ans ☒ 1. कोई अपना ही कई बार आपका सबसे बड़ा नुकसान कर देता है।
☒ 2. अच्छा मित्र मिल जाना किस्मत की बात है।
☒ 3. ज़िया ने चतुराई से दुश्मन को परास्त कर दिया।
☒ 4. गोपाल और रहीम की मित्रता बहुत पुरानी है।

Question ID : 630680396699

Option 1 ID : 6306801546886

Option 2 ID : 6306801546883

Option 3 ID : 6306801546885

Option 4 ID : 6306801546884

Status : Answered

Chosen Option : 1

Q.13 'उत्तर प्रदेश की जनसंख्या लगभग तेईस _____ है।'
रिक्त स्थान की पूर्ति के लिए उपयुक्त तत्सम है-

- Ans ☒ 1. कोटि
☒ 2. कुकुर
☒ 3. करोड़
☒ 4. कज्जल

Question ID : 630680171487

Option 1 ID : 630680664399

Option 2 ID : 630680664402

Option 3 ID : 630680664400

Option 4 ID : 630680664401

Status : Answered

Chosen Option : 1

Q.14 'आपके यहाँ मेरे लिए कुछ _____ हो तो बताइये, मैं इस समय बेकार हूँ।'

उचित सार्थक और निरर्थक शब्द-युग्म वाले विकल्प का चयन करके उपरोक्त वाक्य पूर्ण करें-

- Ans ☒ 1. मीठा-शीठा
☒ 2. काम-वाम
☒ 3. राशन-पानी
☒ 4. कपड़ा-लत्ता

Question ID : 630680130567

Option 1 ID : 630680505569

Option 2 ID : 630680505567

Option 3 ID : 630680505566

Option 4 ID : 630680505568

Status : Answered

Chosen Option : 2

Q.15 'हमारे संविधान में स्त्री के अधिकारों के सम्बन्ध में क्या प्रविधान है?'
उपरोक्त वाक्य के किस शब्द की वर्तनी अशुद्ध है?

- Ans ☒ 1. प्रविधान
☒ 2. संविधान
☒ 3. अधिकारों
☒ 4. सम्बन्ध

Question ID : 630680394674

Option 1 ID : 6306801538985

Option 2 ID : 6306801538982

Option 3 ID : 6306801538983

Option 4 ID : 6306801538984

Status : Answered

Chosen Option : 1



Comprehension:

निम्नलिखित गद्यांश में से कुछ शब्द हटा दिए गए हैं। दिए गए विकल्पों की सहायता से रिक्त स्थानों की पूर्ति कीजिए। प्रत्येक संख्या के लिए उपयुक्त विकल्प का चयन कीजिए।
अस्तित्ववादी, व्यक्ति का अस्तित्व किसी बाह्य सत्ता के _____ (1) नहीं मानते। उनके अनुसार मनुष्य अपने भाग्य का _____ (2) तथा अपने कर्मों के लिए उत्तरदायी स्वयं है। बिना अस्तित्वबोध के मनुष्य सच्चे अर्थों में _____ (3) भी नहीं हो सकता। अस्तित्ववादी सुख की _____ (4) को ही निरर्थक मानते हैं। उनके लिए किसी प्रकार की भी सामाजिक, धार्मिक, नैतिक, राजनीतिक, अथवा वैज्ञानिक _____ (5) मनुष्य को न तो पूर्णतः संतुष्ट कर सकती है और न सुखी।

SubQuestion No : 16

Q.16 सर्वोचित शब्द से गद्यांश का प्रथम रिक्त स्थान पूर्ण करें-

Ans ☒ 1. अधीन

☒ 2. अंतर्गत

☒ 3. अनाधीन

☒ 4. शिकंजे

Question ID : 630680297614

Option 1 ID : 6306801157891

Option 2 ID : 6306801157893

Option 3 ID : 6306801157892

Option 4 ID : 6306801157894

Status : Answered

Chosen Option : 1

Comprehension:

निम्नलिखित गद्यांश में से कुछ शब्द हटा दिए गए हैं। दिए गए विकल्पों की सहायता से रिक्त स्थानों की पूर्ति कीजिए। प्रत्येक संख्या के लिए उपयुक्त विकल्प का चयन कीजिए।
अस्तित्ववादी, व्यक्ति का अस्तित्व किसी बाह्य सत्ता के _____ (1) नहीं मानते। उनके अनुसार मनुष्य अपने भाग्य का _____ (2) तथा अपने कर्मों के लिए उत्तरदायी स्वयं है। बिना अस्तित्वबोध के मनुष्य सच्चे अर्थों में _____ (3) भी नहीं हो सकता। अस्तित्ववादी सुख की _____ (4) को ही निरर्थक मानते हैं। उनके लिए किसी प्रकार की भी सामाजिक, धार्मिक, नैतिक, राजनीतिक, अथवा वैज्ञानिक _____ (5) मनुष्य को न तो पूर्णतः संतुष्ट कर सकती है और न सुखी।

SubQuestion No : 17

Q.17 सर्वोचित शब्द से गद्यांश का द्वितीय रिक्त स्थान पूर्ण करें-

Ans ☒ 1. विकासकता

☒ 2. निर्माता

☒ 3. प्रस्तुतकर्ता

☒ 4. व्याख्याता

Question ID : 630680297615

Option 1 ID : 6306801157895

Option 2 ID : 6306801157897

Option 3 ID : 6306801157896

Option 4 ID : 6306801157898

Status : Answered

Chosen Option : 2

Comprehension:

निम्नलिखित गद्यांश में से कुछ शब्द हटा दिए गए हैं। दिए गए विकल्पों की सहायता से रिक्त स्थानों की पूर्ति कीजिए। प्रत्येक संख्या के लिए उपयुक्त विकल्प का चयन कीजिए।
अस्तित्ववादी, व्यक्ति का अस्तित्व किसी बाह्य सत्ता के _____ (1) नहीं मानते। उनके अनुसार मनुष्य अपने भाग्य का _____ (2) तथा अपने कर्मों के लिए उत्तरदायी स्वयं है। बिना अस्तित्वबोध के मनुष्य सच्चे अर्थों में _____ (3) भी नहीं हो सकता। अस्तित्ववादी सुख की _____ (4) को ही निरर्थक मानते हैं। उनके लिए किसी प्रकार की भी सामाजिक, धार्मिक, नैतिक, राजनीतिक, अथवा वैज्ञानिक _____ (5) मनुष्य को न तो पूर्णतः संतुष्ट कर सकती है और न सुखी।

SubQuestion No : 18

Q.18 सर्वोचित शब्द से गद्यांश का तृतीय रिक्त स्थान पूर्ण करें-

- Ans ☒ 1. जीवित
☒ 2. परतंत्र
☒ 3. आनंदित
☒ 4. स्वछंद

Question ID : 630680297616
Option 1 ID : 6306801157901
Option 2 ID : 6306801157899
Option 3 ID : 6306801157902
Option 4 ID : 6306801157900
Status : Answered
Chosen Option : 1

Comprehension:

निम्नलिखित गद्यांश में से कुछ शब्द हटा दिए गए हैं। दिए गए विकल्पों की सहायता से रिक्त स्थानों की पूर्ति कीजिए। प्रत्येक संख्या के लिए उपयुक्त विकल्प का चयन कीजिए।
अस्तित्ववादी, व्यक्ति का अस्तित्व किसी बाह्य सत्ता के _____ (1) नहीं मानते। उनके अनुसार मनुष्य अपने भाग्य का _____ (2) तथा अपने कर्मों के लिए उत्तरदायी स्वयं है। बिना अस्तित्वबोध के मनुष्य सच्चे अर्थों में _____ (3) भी नहीं हो सकता। अस्तित्ववादी सुख की _____ (4) को ही निरर्थक मानते हैं। उनके लिए किसी प्रकार की भी सामाजिक, धार्मिक, नैतिक, राजनीतिक, अथवा वैज्ञानिक _____ (5) मनुष्य को न तो पूर्णतः संतुष्ट कर सकती है और न सुखी।

SubQuestion No : 19

Q.19 सर्वोचित शब्द से गद्यांश का चतुर्थ रिक्त स्थान पूर्ण करें-

- Ans ☒ 1. लालसा
☒ 2. योग्यता
☒ 3. लालच
☒ 4. वार्ता

Question ID : 630680297617
Option 1 ID : 6306801157906
Option 2 ID : 6306801157904
Option 3 ID : 6306801157903
Option 4 ID : 6306801157905
Status : Answered
Chosen Option : 1

Comprehension:

निम्नलिखित गद्यांश में से कुछ शब्द हटा दिए गए हैं। दिए गए विकल्पों की सहायता से रिक्त स्थानों की पूर्ति कीजिए। प्रत्येक संख्या के लिए उपयुक्त विकल्प का चयन कीजिए।
अस्तित्ववादी, व्यक्ति का अस्तित्व किसी बाह्य सत्ता के _____ (1) नहीं मानते। उनके अनुसार मनुष्य अपने भाग्य का _____ (2) तथा अपने कर्मों के लिए उत्तरदायी स्वयं है। बिना अस्तित्वबोध के मनुष्य सच्चे अर्थों में _____ (3) भी नहीं हो सकता। अस्तित्ववादी सुख की _____ (4) को ही निरर्थक मानते हैं। उनके लिए किसी प्रकार की भी सामाजिक, धार्मिक, नैतिक, राजनीतिक, अथवा वैज्ञानिक _____ (5) मनुष्य को न तो पूर्णतः संतुष्ट कर सकती है और न सुखी।

SubQuestion No : 20

Q.20 सर्वोचित शब्द से गद्यांश का पंचम रिक्त स्थान पूर्ण करें-

- Ans ☒ 1. खोज
☒ 2. उन्नति
☒ 3. पराकाष्ठा
☒ 4. अवनति

Question ID : 630680297618
Option 1 ID : 6306801157910
Option 2 ID : 6306801157907
Option 3 ID : 6306801157909
Option 4 ID : 6306801157908
Status : Answered
Chosen Option : 2

