



# Teachingninja.in



**Latest Govt Job updates**



**Private Job updates**



**Free Mock tests available**



**Visit - [teachingninja.in](https://teachingninja.in)**



Teachingninja.in

# **SSC GD Constable**

**Previous Year Paper**  
**10 Feb, 2025 Shift 1**



Constable GD in CAPFs and SSF Rifleman GD in AR and Sepoy in NCB Examination 2025

Roll Number	
Candidate Name	
Venue Name	
Exam Date	10/02/2025
Exam Time	9:00 AM - 10:00 AM
Subject	Constable GD Examination 2025

Section : Part-A-General Intelligence and Reasoning

Q.1 If 2 is added to each odd digit and 2 is subtracted from each even digit in the number 5163748, what will be the sum of the highest and lowest digit in the new number thus formed?

- Ans ☒ 1. 14  
☒ 2. 16  
☒ 3. 11  
☒ 4. 9

Question ID : 630680375590  
Option 1 ID : 6306801463515  
Option 2 ID : 6306801463517  
Option 3 ID : 6306801463518  
Option 4 ID : 6306801463516  
Status : Answered  
Chosen Option : 3

Q.2 What should come in place of the question mark (?) in the given series?

9 25 53 157 317 ?

- Ans ☒ 1. 953  
☒ 2. 951  
☒ 3. 949  
☒ 4. 947

Question ID : 630680799662  
Option 1 ID : 6306803133445  
Option 2 ID : 6306803133446  
Option 3 ID : 6306803133447  
Option 4 ID : 6306803133448  
Status : Answered  
Chosen Option : 2

Q.3 RMDH is related to PKBF in a certain way based on the English alphabetical order. In the same way, SUGV is related to QSET. To which of the given options is MXKD related, following the same logic?

- Ans ☒ 1. KZIF  
☒ 2. KVIB  
☒ 3. OVMB  
☒ 4. OZMF

Question ID : 630680800178  
Option 1 ID : 6306803135509  
Option 2 ID : 6306803135511  
Option 3 ID : 6306803135510  
Option 4 ID : 6306803135512  
Status : Answered  
Chosen Option : 2

Q.4 Read the given statements and conclusions carefully. Assuming that the information given in the statements is true, even if it appears to be at variance with commonly known facts, decide which of the given conclusion(s) logically follow(s) from the statements.

Statements:  
All crows are rocks.  
All rocks are plants.  
All plants are flowers.

Conclusions:  
(I) All crows are flowers.  
(II) Some flowers are rocks.

- Ans ☒ 1. Only conclusion (I) follows.  
☒ 2. Only conclusion (II) follows.  
☒ 3. Both conclusions (I) and (II) follow.  
☒ 4. Neither conclusion (I) nor (II) follows.

Question ID : 630680867620  
Option 1 ID : 6306803398131  
Option 2 ID : 6306803398130  
Option 3 ID : 6306803398128  
Option 4 ID : 6306803398129  
Status : Answered  
Chosen Option : 3

Q.5 In a certain code language, 'STAIR' is coded as '#\*&@\$' and 'TEARS' is coded as '\*&^@#'. What is the code for 'I' in the given code language?

- Ans ☒ 1. @  
☒ 2. #  
☒ 3. ^  
☒ 4. \$

Question ID : 630680721222  
Option 1 ID : 6306802826243  
Option 2 ID : 6306802826242  
Option 3 ID : 6306802826244  
Option 4 ID : 6306802826241  
Status : Answered  
Chosen Option : 4

**Q.6** Based on the English alphabetical order, three of the following four letter-clusters are alike in a certain way and thus form a group. Which letter-cluster DOES NOT belong to that group?

(Note: The odd one out is not based on the number of consonants/vowels or their position in the letter-cluster.)

**Ans** ✓ 1. MTW

✗ 2. KOI

✗ 3. OSM

✗ 4. LPJ

Question ID : 630680844558

Option 1 ID : 6306803308161

Option 2 ID : 6306803308159

Option 3 ID : 6306803308160

Option 4 ID : 6306803308158

Status : Answered

Chosen Option : 1



Q.7 Select the figure from among the given options that can replace the question mark (?) in the following series.

F	R	D	I	
μ	θ	μ	θ	μ
k	d	m	b	?

Ans

✓ 1.

J		
μ		θ
a		

✗ 2.

R		
μ		θ
m		

✗ 3.

R		
μ		θ
k		

✗ 4.

D		
θ		μ
b		

Question ID : 6306801097494  
Option 1 ID : 6306804311248  
Option 2 ID : 6306804311246  
Option 3 ID : 6306804311249  
Option 4 ID : 6306804311247  
Status : Answered  
Chosen Option : 1

Q.8 E, F, G, H, K, L and N are sitting around a circular table, facing the centre (but not necessarily in the same order) .  
G sits third to the left of K. N sits second to the left of H. Only K sits between L and N. F is not an immediate neighbour of G.  
How many people sit between E and N when counted from the right of E?

- Ans ☒ 1. One  
☒ 2. Three  
☒ 3. Four  
☒ 4. Two

Question ID : 630680748992  
Option 1 ID : 6306802935500  
Option 2 ID : 6306802935502  
Option 3 ID : 6306802935503  
Option 4 ID : 6306802935501  
Status : Answered  
Chosen Option : 4

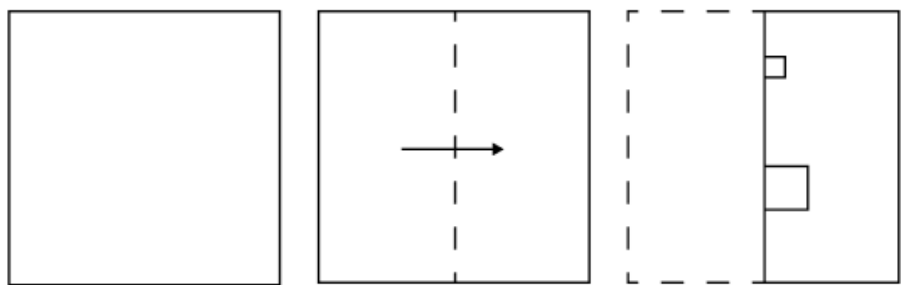
Q.9 In a certain code language, 'SKIP' is coded as '5269' and 'SILK' is coded as '2576'. How is 'L' coded in the given language?

- Ans ☒ 1. 2  
☒ 2. 7  
☒ 3. 5  
☒ 4. 9

Question ID : 630680764110  
Option 1 ID : 6306802994995  
Option 2 ID : 6306802994996  
Option 3 ID : 6306802994998  
Option 4 ID : 6306802994997  
Status : Answered  
Chosen Option : 2

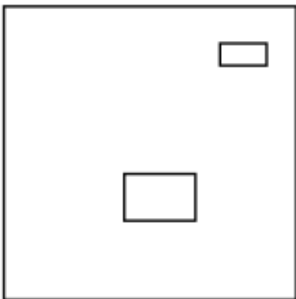


Q.10 A paper is folded and cut as shown below. How will it appear when unfolded?

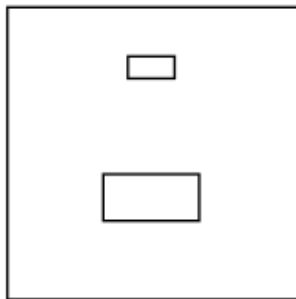


Ans

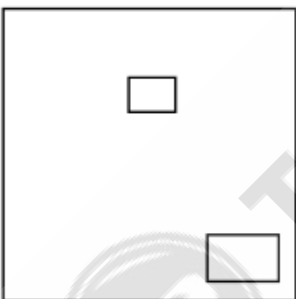
✗ 1.



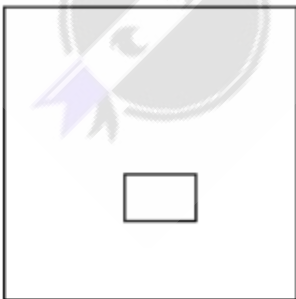
✓ 2.



✗ 3.



✗ 4.



Question ID : 6306801080107

Option 1 ID : 6306804243197

Option 2 ID : 6306804243198

Option 3 ID : 6306804243200

Option 4 ID : 6306804243199

Status : Answered

Chosen Option : 2



Q.11 In a certain code language,

'A + B' means 'A is the mother of B',  
'A - B' means 'A is the brother of B',  
'A × B' means 'A is the wife of B' and  
'A ÷ B' means 'A is the father of B'.

Based on the above, how is F related to J if 'F + G × H ÷ I - J'?

- Ans ☒ 1. Wife's father  
☒ 2. Daughter  
☒ 3. Mother's husband  
☒ 4. Mother's mother

Question ID : 630680805028  
Option 1 ID : 6306803153836  
Option 2 ID : 6306803153834  
Option 3 ID : 6306803153835  
Option 4 ID : 6306803153833  
Status : Answered  
Chosen Option : 4

Q.12 The position(s) of how many letters will remain unchanged if each of the letters in the word GRISTLE is arranged in the English alphabetical order?

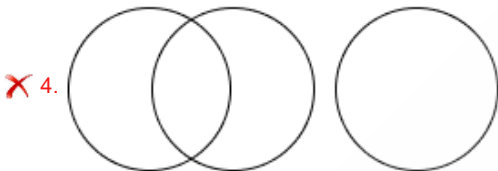
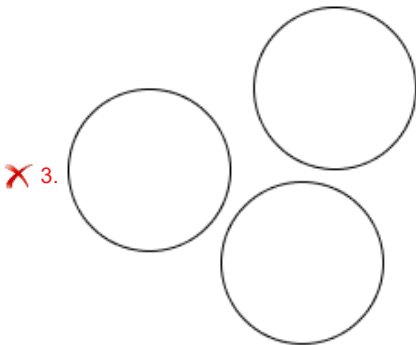
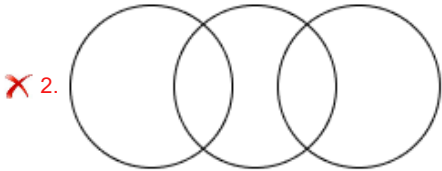
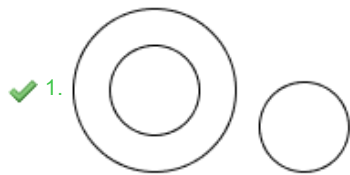
- Ans ☒ 1. Zero  
☒ 2. One  
☒ 3. Three  
☒ 4. Two

Question ID : 630680752474  
Option 1 ID : 6306802949180  
Option 2 ID : 6306802949181  
Option 3 ID : 6306802949183  
Option 4 ID : 6306802949182  
Status : Answered  
Chosen Option : 2



Q.13 Select the Venn diagram that best illustrates the relationship between the following classes.

Amphibian, Crow, Frog  
Ans



Question ID : 630680445828  
Option 1 ID : 6306801740578  
Option 2 ID : 6306801740576  
Option 3 ID : 6306801740579  
Option 4 ID : 6306801740577  
Status : Answered  
Chosen Option : 1

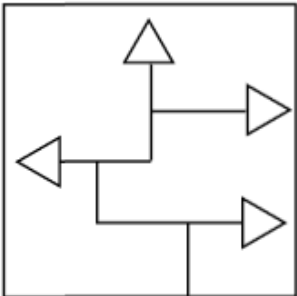
Q.14 Select the option in which the given figure (X) is embedded (rotation is NOT allowed).



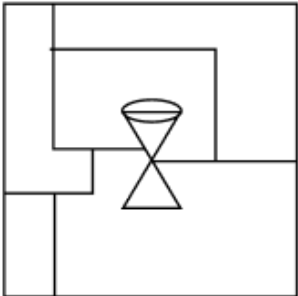
(X)

Ans

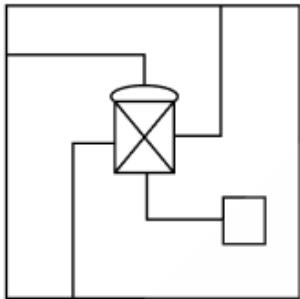
✗ 1.



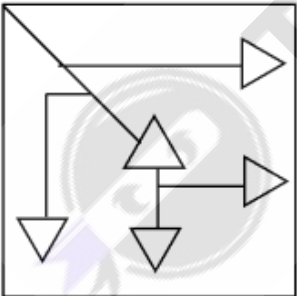
✗ 2.



✓ 3.



✗ 4.



Question ID : 6306801060954  
Option 1 ID : 6306804165960  
Option 2 ID : 6306804165958  
Option 3 ID : 6306804165959  
Option 4 ID : 6306804165957  
Status : Answered  
Chosen Option : 3

Q.15 Eight people are sitting in two parallel rows containing 4 people each in such a way that there is equal distance between adjacent persons.  
In row 1, P, E, S and T are seated and all of them are facing south.  
In row 2, M, O, L and D are seated and all of them are facing north.  
Thus, each person faces another person from the other row.  
O faces the one sitting to the immediate right of P. Only one person sits between O and D. Only two people sit between L and D. D faces the one sitting second to the left of T. E sits at some place to the right of S. Which of the following represents both people sitting at extreme ends of the rows?

- Ans ☒ 1. S and O  
☒ 2. P and L  
☒ 3. T and O  
☒ 4. E and D

Question ID : 630680863149  
Option 1 ID : 6306803380673  
Option 2 ID : 6306803380674  
Option 3 ID : 6306803380671  
Option 4 ID : 6306803380672  
Status : Answered  
Chosen Option : 4

Q.16 What should come in place of the question mark (?) in the given series based on the English alphabetical order?

TEJ UDK VCL WBM ?

- Ans ☒ 1. XAN  
☒ 2. XAO  
☒ 3. YAN  
☒ 4. YAO

Question ID : 630680641004  
Option 1 ID : 6306802510033  
Option 2 ID : 6306802510034  
Option 3 ID : 6306802510035  
Option 4 ID : 6306802510036  
Status : Answered  
Chosen Option : 1

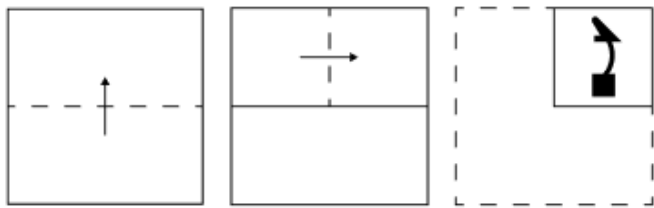
Q.17 Select the correct alternative that when filled in the blanks in the same sequence will make the series logically complete.

\_URVQ\_SWRW\_XSXU\_TYV\_

- Ans ☒ 1. PUTWZ  
☒ 2. OVSYX  
☒ 3. OUSWX  
☒ 4. PVTYZ

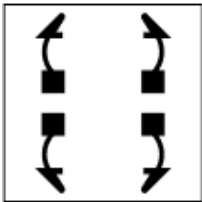
Question ID : 630680458257  
Option 1 ID : 6306801789910  
Option 2 ID : 6306801789911  
Option 3 ID : 6306801789909  
Option 4 ID : 6306801789908  
Status : Answered  
Chosen Option : 4

Q.18 A paper is folded and punched as shown below. How will it appear when unfolded?

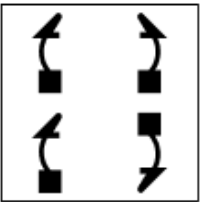


Ans

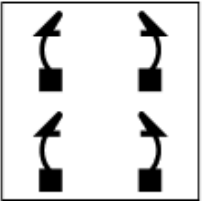
✓ 1.



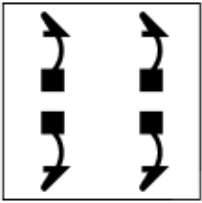
✗ 2.



✗ 3.



✗ 4.



Question ID : 6306801096425

Option 1 ID : 6306804307000

Option 2 ID : 6306804306998

Option 3 ID : 6306804306997

Option 4 ID : 6306804306999

Status : Answered

Chosen Option : 1

Q.19 In a certain code language, ACEG is coded as 16 and BOQT is coded as 54. How will UWIF be coded in the given language?

- Ans ☒ 1. 75  
☒ 2. 57  
☒ 3. 60  
☒ 4. 59

Question ID : 630680875274  
Option 1 ID : 6306803427978  
Option 2 ID : 6306803427977  
Option 3 ID : 6306803427980  
Option 4 ID : 6306803427979  
Status : Answered  
Chosen Option : 4

Q.20 What should come in place of the question mark (?) in the given series?  
77 86 104 140 212 ?

- Ans ☒ 1. 358  
☒ 2. 356  
☒ 3. 357  
☒ 4. 355

Question ID : 630680795441  
Option 1 ID : 6306803116774  
Option 2 ID : 6306803116771  
Option 3 ID : 6306803116773  
Option 4 ID : 6306803116772  
Status : Answered  
Chosen Option : 2

Section : Part-B-General Knowledge and General awareness

Q.1 The Khilafat Movement was associated with which of the following communities?

- Ans ☒ 1. Hindu  
☒ 2. Muslim  
☒ 3. Sikh  
☒ 4. Christian

Question ID : 6306801069467  
Option 1 ID : 6306804200133  
Option 2 ID : 6306804200132  
Option 3 ID : 6306804200131  
Option 4 ID : 6306804200130  
Status : Answered  
Chosen Option : 2



Q.2 Who is the Cabinet Secretary of India as of September 2024?

- Ans ☒ 1. Ajit Kumar Seth  
☒ 2. Rajiv Gauba  
☒ 3. Pradeep Kumar Sinha  
☒ 4. TV Somanathan

Question ID : 6306801125205  
Option 1 ID : 6306804421032  
Option 2 ID : 6306804421034  
Option 3 ID : 6306804421033  
Option 4 ID : 6306804421031  
Status : Answered  
Chosen Option : 2

Q.3 What change was observed in agricultural practices after the Green Revolution?

- Ans ☒ 1. Focus on monoculture of wheat only  
☒ 2. Decrease in the use of fertilisers  
☒ 3. Shift from low-yield to high-yield crops  
☒ 4. Shift from cash crops to subsistence farming

Question ID : 6306801064539  
Option 1 ID : 6306804180484  
Option 2 ID : 6306804180483  
Option 3 ID : 6306804180481  
Option 4 ID : 6306804180482  
Status : Answered  
Chosen Option : 3

Q.4 Which outcome is typically expected from a government's expansionary fiscal policy?

- Ans ☒ 1. Increased government savings  
☒ 2. Stimulation of economic growth  
☒ 3. Higher interest rates  
☒ 4. Reduced public spending and investment

Question ID : 630680542171  
Option 1 ID : 6306802119593  
Option 2 ID : 6306802119595  
Option 3 ID : 6306802119596  
Option 4 ID : 6306802119594  
Status : Answered  
Chosen Option : 2

Q.5 A very heavy concentration of Malwa settlements of Chalcolithic period was found in the:

- Ans ☒ 1. Mahanadi basin  
☒ 2. central Narmada basin  
☒ 3. Ganga basin  
☒ 4. Indus basin

Question ID : 630680565039  
Option 1 ID : 6306802209093  
Option 2 ID : 6306802209091  
Option 3 ID : 6306802209092  
Option 4 ID : 6306802209090

Status : Answered

Chosen Option : 4

Q.6 How many points are awarded for Lona in Kabaddi?

- Ans ☒ 1. Four  
☒ 2. Three  
☒ 3. Two  
☒ 4. Five

Question ID : 630680165067  
Option 1 ID : 630680639290  
Option 2 ID : 630680639289  
Option 3 ID : 630680639288  
Option 4 ID : 630680639291

Status : Answered

Chosen Option : 2

Q.7 What does the Greek letter  $\nu$  (nu) represent in physics?

- Ans ☒ 1. Velocity of particles  
☒ 2. Frequency of a wave  
☒ 3. Density of a substance  
☒ 4. Coefficient of friction

Question ID : 630680563192  
Option 1 ID : 6306802201723  
Option 2 ID : 6306802201724  
Option 3 ID : 6306802201721  
Option 4 ID : 6306802201722

Status : Answered

Chosen Option : 1



Q.8 Who advocated that India would be truly independent only when the poorest of its people became free of human suffering?

- Ans ☒ 1. Indira Gandhi
- ☒ 2. Mahatma Gandhi
- ☒ 3. Subhash Chandra Bose
- ☒ 4. Jawaharlal Nehru

Question ID : 630680597086  
Option 1 ID : 6306802336386  
Option 2 ID : 6306802336387  
Option 3 ID : 6306802336388  
Option 4 ID : 6306802336385  
Status : Answered  
Chosen Option : 2

Q.9 Gombe Habba, celebrated in the state of Karnataka during Navaratri, is a festival of:

- Ans ☒ 1. dolls
- ☒ 2. mountains
- ☒ 3. rivers
- ☒ 4. kites

Question ID : 6306801062648  
Option 1 ID : 6306804172977  
Option 2 ID : 6306804172979  
Option 3 ID : 6306804172980  
Option 4 ID : 6306804172978  
Status : Answered  
Chosen Option : 2

Q.10 Padma Shri awardee of 2024, Mahabir Singh Guddu is a folk dancer from which Indian state?

- Ans ☒ 1. Rajasthan
- ☒ 2. Uttar Pradesh
- ☒ 3. Gujarat
- ☒ 4. Haryana

Question ID : 6306801062793  
Option 1 ID : 6306804173557  
Option 2 ID : 6306804173558  
Option 3 ID : 6306804173560  
Option 4 ID : 6306804173559  
Status : Answered  
Chosen Option : 2

Q.11 As per NFHS 5, what percentage of the Indian population was deprived of drinking water during the year 2019-21?

- Ans ☒ 1. 2.06%
- ☒ 2. 7.32%
- ☒ 3. 5.27%
- ☒ 4. 3.27%

Question ID : 630680564509  
Option 1 ID : 6306802206956  
Option 2 ID : 6306802206955  
Option 3 ID : 6306802206957  
Option 4 ID : 6306802206958  
Status : Answered  
Chosen Option : 4

Q.12 Who was the first to introduce Brazilian bossa nova rhythm in Hindi film music?

- Ans ☒ 1. OP Nayyar
- ☒ 2. RD Burman
- ☒ 3. AR Rahman
- ☒ 4. Anu Malik

Question ID : 630680546990  
Option 1 ID : 6306802138520  
Option 2 ID : 6306802138519  
Option 3 ID : 6306802138522  
Option 4 ID : 6306802138521  
Status : Answered  
Chosen Option : 3

Q.13 As of October 2024, who is the Comptroller and Auditor General (CAG) of India?

- Ans ☒ 1. Nirmala Sitharaman
- ☒ 2. Shivraj Singh Chouhan
- ☒ 3. Girish Chandra Murmu
- ☒ 4. Manohar Lal

Question ID : 6306801125447  
Option 1 ID : 6306804421988  
Option 2 ID : 6306804421986  
Option 3 ID : 6306804421985  
Option 4 ID : 6306804421987  
Status : Answered  
Chosen Option : 3

Q.14 Right to constitutional remedies as a Fundamental Right of the Constitution of India is stated in which of the following Articles?

- Ans ☐ 1. Article 33  
☐ 2. Article 31  
☐ 3. Article 34  
☒ 4. Article 32

Question ID : 630680729471  
Option 1 ID : 6306802858600  
Option 2 ID : 6306802858598  
Option 3 ID : 6306802858601  
Option 4 ID : 6306802858599  
Status : Answered  
Chosen Option : 4

Q.15 How many types of plate tectonic boundaries are there?

- Ans ☐ 1. Two  
☐ 2. Four  
☒ 3. Three  
☐ 4. Five

Question ID : 630680615549  
Option 1 ID : 6306802408870  
Option 2 ID : 6306802408872  
Option 3 ID : 6306802408871  
Option 4 ID : 6306802408873  
Status : Answered  
Chosen Option : 3

Q.16 In a forest ecosystem of Grass → Impala → Hyena, if all the Hyenas are taken away, what will happen ultimately?

- Ans ☐ 1. Impala population will remain stable.  
☐ 2. Impala will live happily forever.  
☐ 3. Grass land will not be affected.  
☒ 4. Impala will die of starvation due to higher population.

Question ID : 6306801374509  
Option 1 ID : 6306805411329  
Option 2 ID : 6306805411330  
Option 3 ID : 6306805411332  
Option 4 ID : 6306805411331  
Status : Answered  
Chosen Option : 4

Q.17 In tennis, the court should be \_\_\_\_\_ wide for a doubles match as per the International Tennis Federation.

Ans 

✗ 1. 37 ft

✗ 2. 38 ft

✗ 3. 35 ft

✓ 4. 36 ft

Question ID : 630680552367

Option 1 ID : 6306802159564

Option 2 ID : 6306802159565

Option 3 ID : 6306802159562

Option 4 ID : 6306802159563

Status : Answered

Chosen Option : 2

Q.18 Which of the following classical dance forms from southern India derives its textual sanction from 'Balarama Bharatam' and 'Hastalakshana Deepika'?

Ans 

✗ 1. Mohiniattam

✓ 2. Kathakali

✗ 3. Kuchipudi

✗ 4. Sattriya

Question ID : 630680476040

Option 1 ID : 6306801859443

Option 2 ID : 6306801859445

Option 3 ID : 6306801859446

Option 4 ID : 6306801859444

Status : Answered

Chosen Option : 2

Q.19 No money bill can be introduced in the State Legislative Assembly without the prior permission of the \_\_\_\_\_.

Ans 

✗ 1. Chief Minister

✓ 2. Governor

✗ 3. Speaker

✗ 4. Deputy Chief Minister

Question ID : 630680735903

Option 1 ID : 6306802884315

Option 2 ID : 6306802884314

Option 3 ID : 6306802884317

Option 4 ID : 6306802884316

Status : Answered

Chosen Option : 2

Q.20 Which of the following statements is/are INCORRECT?

- i. The 'SGSY' scheme was implemented in 2009.
- ii. The primary objective of the 'SGSY' scheme was to promote and attain self-employment.
- iii. The 'SGSY' scheme performed well in Andhra Pradesh.

- Ans
- ☒ 1. Only ii
  - ☒ 2. Only iii
  - ☒ 3. Only ii and iii
  - ☒ 4. Only i

Question ID : 630680476809  
Option 1 ID : 6306801862458  
Option 2 ID : 6306801862460  
Option 3 ID : 6306801862457  
Option 4 ID : 6306801862459  
Status : Answered  
Chosen Option : 1

Section : Part-C-Elementary Mathematics

Q.1 The smallest natural number which is divisible by 33, 72, 11 and 18 is:

- Ans
- ☒ 1. 881
  - ☒ 2. 839
  - ☒ 3. 792
  - ☒ 4. 696

Question ID : 630680788799  
Option 1 ID : 6306803090978  
Option 2 ID : 6306803090977  
Option 3 ID : 6306803090976  
Option 4 ID : 6306803090979  
Status : Answered  
Chosen Option : 3

Q.2 Govind invested some money in HDFC at 3% per annum rate of interest. What would be the corresponding simple interest (in ₹) if after 2 years, Govind got ₹203 as compound interest, considering annual compounding?

- Ans
- ☒ 1. 195
  - ☒ 2. 200
  - ☒ 3. 215
  - ☒ 4. 210

Question ID : 6306801002870  
Option 1 ID : 6306803935610  
Option 2 ID : 6306803935609  
Option 3 ID : 6306803935612  
Option 4 ID : 6306803935611  
Status : Answered  
Chosen Option : 2

Q.3 P can complete a round of circular track in 1 minute and 30 seconds while Q can complete a round in 45 seconds. If they start moving from the same point and move in opposite directions, then they meet after \_\_\_\_\_ seconds.

Ans ☒ 1. 40

☒ 2. 30

☒ 3. 35

☒ 4. 25

Question ID : 6306801149155

Option 1 ID : 6306804516676

Option 2 ID : 6306804516674

Option 3 ID : 6306804516675

Option 4 ID : 6306804516673

Status : Answered

Chosen Option : 2

Q.4 Six persons went to a hotel to have their meals. Five of them spent ₹30 each on their meals. The sixth person spent ₹50 more than the average expenditure of all the six. What was the total money spent by all the persons?

Ans ☒ 1. ₹264

☒ 2. ₹300

☒ 3. ₹240

☒ 4. ₹270

Question ID : 6306801143741

Option 1 ID : 6306804496745

Option 2 ID : 6306804496744

Option 3 ID : 6306804496746

Option 4 ID : 6306804496747

Status : Answered

Chosen Option : 3

Q.5 What is the highest number between 4000 and 5000, which when divided by 12, 16 and 24 would leave the remainder 4?

Ans ☒ 1. 4969

☒ 2. 6499

☒ 3. 4699

☒ 4. 4996

Question ID : 6306801157040

Option 1 ID : 6306804547359

Option 2 ID : 6306804547360

Option 3 ID : 6306804547358

Option 4 ID : 6306804547361

Status : Answered

Chosen Option : 4



Q.6 There are 81 members in group A, 29 members in group B and 70 members in group C. All the members of these groups went to a restaurant. The average amount spent on each member of group A, B and C is ₹467, ₹117 and ₹378, respectively. The total average amount (in ₹) spent per member is:

- Ans
- ☒ 1. 380
  - ☒ 2. 377
  - ☒ 3. 375
  - ☒ 4. 376

Question ID : 630680984875  
Option 1 ID : 6306803863618  
Option 2 ID : 6306803863619  
Option 3 ID : 6306803863620  
Option 4 ID : 6306803863617  
Status : Not Answered  
Chosen Option : --

Q.7 If the curved surface area of a right circular cylinder of height 12 cm is  $96\pi\text{ cm}^2$ , then its radius is:

- Ans
- ☒ 1. 8 cm
  - ☒ 2. 6 cm
  - ☒ 3. 3 cm
  - ☒ 4. 4 cm

Question ID : 6306801131547  
Option 1 ID : 6306804446346  
Option 2 ID : 6306804446344  
Option 3 ID : 6306804446345  
Option 4 ID : 6306804446347  
Status : Answered  
Chosen Option : 4

Q.8 By selling an article for ₹1,500, a man gains ₹150. At what price (in ₹) should he sell the article to gain 24%?

- Ans
- ☒ 1. 1,674
  - ☒ 2. 1,560
  - ☒ 3. 1,493
  - ☒ 4. 1,870

Question ID : 6306801375026  
Option 1 ID : 6306805413396  
Option 2 ID : 6306805413395  
Option 3 ID : 6306805413397  
Option 4 ID : 6306805413398  
Status : Answered  
Chosen Option : 1

**Q.9** Manoj travels from City A to City B. If Manoj drives his car at  $\frac{3}{5}$  of his normal speed, then he reaches City B 10 minutes late.

Find the time (in minutes) that Manoj would have taken to travel from City A to City B if he drove at his normal speed.

Ans ☒ 1. 24

☒ 2. 11

☒ 3. 15

☒ 4. 17

Question ID : 630680931432

Option 1 ID : 6306803650519

Option 2 ID : 6306803650517

Option 3 ID : 6306803650516

Option 4 ID : 6306803650518

Status : Answered

Chosen Option : 3

**Q.10** The fourth proportional to 5, 35 and x is 84, find the value of x.

Ans ☒ 1. 294

☒ 2. 14

☒ 3. 12

☒ 4. 588

Question ID : 6306801135245

Option 1 ID : 6306804461159

Option 2 ID : 6306804461160

Option 3 ID : 6306804461161

Option 4 ID : 6306804461158

Status : Answered

Chosen Option : 3

**Q.11** A and B can do a piece of work in 25 days and 30 days, respectively. They worked together for 6 days, after while B was replaced by P and the work was finished in the next 8 days. How long will P alone take to complete the same work?

Ans ☒ 1.  $33\frac{1}{3}$  days

☒ 2.  $25\frac{3}{4}$  days

☒ 3.  $15\frac{1}{2}$  days

☒ 4.  $30\frac{2}{5}$  days

Question ID : 6306801147523

Option 1 ID : 6306804510207

Option 2 ID : 6306804510205

Option 3 ID : 6306804510204

Option 4 ID : 6306804510206

Status : Answered

Chosen Option : 1



Q.12 Raj has ₹1612 with him. He divided it amongst his sons Varun and Ashish and asked them to invest it at 8% rate of interest compounded annually. It was seen that Varun and Ashish got same amount after 18 and 19 years respectively. How much (in ₹) did Raj give to Varun?

Ans ☒ 1. 687

☒ 2. 775

☒ 3. 837

☒ 4. 875

Question ID : 6306801002836

Option 1 ID : 6306803935475

Option 2 ID : 6306803935474

Option 3 ID : 6306803935473

Option 4 ID : 6306803935476

Status : Not Answered

Chosen Option : --

Q.13 Evaluate:  $(-9) - (-60) \div (-12) + (-3) \times 7$

Ans ☒ 1. -37

☒ 2. -38

☒ 3. -35

☒ 4. -34

Question ID : 630680687568

Option 1 ID : 6306802692933

Option 2 ID : 6306802692935

Option 3 ID : 6306802692932

Option 4 ID : 6306802692934

Status : Answered

Chosen Option : 3

Q.14 The LCM of 36, 45, 465 and 310 is:

Ans ☒ 1. 5560

☒ 2. 5580

☒ 3. 5497

☒ 4. 5658

Question ID : 630680788786

Option 1 ID : 6306803090926

Option 2 ID : 6306803090924

Option 3 ID : 6306803090925

Option 4 ID : 6306803090927

Status : Answered

Chosen Option : 2

Q.15 The price (per litre) of petrol increases by 50%. By what percent should its consumption be reduced such that the expenditure on it increases by 23% only?

- Ans ☒ 1. 81%
- ☒ 2. 18%
- ☒ 3. 21%
- ☒ 4. 82%

Question ID : 630680954683  
Option 1 ID : 6306803742943  
Option 2 ID : 6306803742941  
Option 3 ID : 6306803742942  
Option 4 ID : 6306803742940  
Status : Answered  
Chosen Option : 2

Q.16 The marks in Mathematics and English of S are in proportion. Last year when he got 60 marks in Mathematics, he secured 75 marks in English. If his marks in English this year are 60, then his Mathematics marks are \_\_\_\_\_.

- Ans ☒ 1. 60
- ☒ 2. 48
- ☒ 3. 40
- ☒ 4. 75

Question ID : 6306801148283  
Option 1 ID : 6306804513224  
Option 2 ID : 6306804513223  
Option 3 ID : 6306804513222  
Option 4 ID : 6306804513225  
Status : Answered  
Chosen Option : 2

Q.17 If 4% of  $x = 24$ , then  $x$  is equal to:

- Ans ☒ 1. 700
- ☒ 2. 1300
- ☒ 3. 600
- ☒ 4. 1200

Question ID : 630680591432  
Option 1 ID : 6306802314197  
Option 2 ID : 6306802314198  
Option 3 ID : 6306802314195  
Option 4 ID : 6306802314196  
Status : Answered  
Chosen Option : 3



Q.18 A shopkeeper offers a festive offer: buy any three shirts, get two free. Find the equivalent percentage discount for the offer.

- Ans
- ☐ 1. 30%
  - ☐ 2. 60%
  - ☐ 3. 20%
  - ☒ 4. 40%

Question ID : 6306801134591

Option 1 ID : 6306804458484

Option 2 ID : 6306804458481

Option 3 ID : 6306804458483

Option 4 ID : 6306804458482

Status : Answered

Chosen Option : 4

Q.19 Vijay invests a sum of ₹5400 and Mohan invests a sum of ₹9400 at the same rate of simple interest per annum. If, at the end of 4 years, Mohan gets ₹360 more interest than Vijay, then find the rate of interest per annum (in percentage).

- Ans
- ☐ 1. 4.25
  - ☐ 2. 1.5
  - ☐ 3. 3.25
  - ☒ 4. 2.25

Question ID : 630680613568

Option 1 ID : 6306802401006

Option 2 ID : 6306802401007

Option 3 ID : 6306802401005

Option 4 ID : 6306802401004

Status : Answered

Chosen Option : 4

Q.20 A dishonest shopkeeper promises to sell his goods at cost price. However, he uses a weight that actually weighs 24% less than what is written on it. Find his profit percentage.

- Ans
- ☐ 1.  $32\frac{12}{19}\%$
  - ☒ 2.  $31\frac{11}{19}\%$
  - ☐ 3.  $33\frac{22}{19}\%$
  - ☐ 4.  $30\frac{11}{19}\%$

Question ID : 630680919296

Option 1 ID : 6306803602377

Option 2 ID : 6306803602374

Option 3 ID : 6306803602375

Option 4 ID : 6306803602376

Status : Answered

Chosen Option : 2

Q.1 Select the most appropriate option to fill in the blank.

Growing up in Mumbai, Nehal's childhood was \_\_\_\_\_ with memories of playing in gardens and nurturing plants.

- Ans ☒ 1. full  
☒ 2. filled  
☒ 3. filling  
☒ 4. fills

Question ID : 6306801102242  
Option 1 ID : 6306804330205  
Option 2 ID : 6306804330206  
Option 3 ID : 6306804330207  
Option 4 ID : 6306804330208  
Status : Not Answered  
Chosen Option : --

Q.2 Select the most appropriate option to fill in the blank.

Your tongue gives you information about the taste of food, but your sense of smell also plays an important role when you breathe air out \_\_\_\_\_ eating.

- Ans ☒ 1. with  
☒ 2. in  
☒ 3. while  
☒ 4. from

Question ID : 6306801102258  
Option 1 ID : 6306804330269  
Option 2 ID : 6306804330272  
Option 3 ID : 6306804330271  
Option 4 ID : 6306804330270  
Status : Not Answered  
Chosen Option : --

Q.3 Select the most appropriate ANTONYM of the given word.

Copious

- Ans ☒ 1. Splendid  
☒ 2. Excellent  
☒ 3. Practical  
☒ 4. Meager

Question ID : 6306801102126  
Option 1 ID : 6306804329743  
Option 2 ID : 6306804329741  
Option 3 ID : 6306804329744  
Option 4 ID : 6306804329742  
Status : Not Answered  
Chosen Option : --

Q.4 Select the most appropriate synonym of the given word.

Placate

- Ans ☒ 1. Appease  
☐ 2. Infuriate  
☐ 3. Serve  
☐ 4. Bother

Question ID : 6306801096534  
Option 1 ID : 6306804307437  
Option 2 ID : 6306804307438  
Option 3 ID : 6306804307436  
Option 4 ID : 6306804307439  
Status : Not Answered  
Chosen Option : --

Q.5 Select the INCORRECTLY spelt word.

He made an appoitment with the dentist for next week.

- Ans ☐ 1. made  
☒ 2. appoitment  
☐ 3. dentist  
☐ 4. next

Question ID : 630680693190  
Option 1 ID : 6306802714836  
Option 2 ID : 6306802714839  
Option 3 ID : 6306802714837  
Option 4 ID : 6306802714838  
Status : Not Answered  
Chosen Option : --

Q.6 The given sentence is divided into four segments. Select the option that has the segment with an adverbial usage error.

Christopher told Mathew, / "Politely, she / takes the bus / to work."

- Ans ☒ 1. "Politely, she  
☐ 2. Christopher told Mathew,  
☐ 3. to work."  
☐ 4. takes the bus

Question ID : 6306801099571  
Option 1 ID : 6306804319540  
Option 2 ID : 6306804319539  
Option 3 ID : 6306804319542  
Option 4 ID : 6306804319541  
Status : Not Answered  
Chosen Option : --



Q.7 Select the most appropriate ANTONYM of the word in the brackets to fill in the blank.

Shoaib's \_\_\_\_\_(determination) for the cause of the eradication of child labour is praiseworthy.

- Ans ☒ 1. Cowardice  
☒ 2. Contentment  
☒ 3. Sacrifice  
☒ 4. Victory

Question ID : 630680411066  
Option 1 ID : 6306801603016  
Option 2 ID : 6306801603019  
Option 3 ID : 6306801603017  
Option 4 ID : 6306801603018  
Status : Not Answered  
Chosen Option : --

Q.8 The following sentence has been split into four segments. Identify the segment that contains an error.

A) The supervisor advised / B) him to focus on the / C) examination first and / D) submit the assignment latter.

- Ans ☒ 1. D  
☒ 2. A  
☒ 3. C  
☒ 4. B

Question ID : 630680399111  
Option 1 ID : 6306801556405  
Option 2 ID : 6306801556402  
Option 3 ID : 6306801556404  
Option 4 ID : 6306801556403  
Status : Not Answered  
Chosen Option : --

Q.9 Select the most appropriate option to fill in the blank.

The diplomat's \_\_\_\_\_ manner helped in diffusing the tension between the two conflicting parties.

- Ans ☒ 1. conciliatory  
☒ 2. abrasive  
☒ 3. confrontational  
☒ 4. indifferent

Question ID : 6306801091660  
Option 1 ID : 6306804287862  
Option 2 ID : 6306804287860  
Option 3 ID : 6306804287861  
Option 4 ID : 6306804287859  
Status : Not Answered  
Chosen Option : --

Q.10 Select the most appropriate option that can substitute the underlined segment in the given sentence and rectify it. If no correction is needed, select 'No correction required'.

The article publishes in the newspaper today.

- Ans ☒ 1. was been published  
☒ 2. has been published  
☒ 3. had published  
☒ 4. No correction required

Question ID : 6306801107673  
Option 1 ID : 6306804351152  
Option 2 ID : 6306804351154  
Option 3 ID : 6306804351153  
Option 4 ID : 6306804351151  
Status : Not Answered  
Chosen Option : --

Q.11 Select the most appropriate ANTONYM of the given word.  
Malice

- Ans ☒ 1. Animosity  
☒ 2. Resentment  
☒ 3. Sympathy  
☒ 4. Antipathy

Question ID : 6306801092189  
Option 1 ID : 6306804290002  
Option 2 ID : 6306804290005  
Option 3 ID : 6306804290004  
Option 4 ID : 6306804290003  
Status : Not Answered  
Chosen Option : --

Q.12 Select the word that best completes the given sentence. Determine the collocation through the sentence.

Siva, the singer, \_\_\_\_\_ live for the first time in five years.

- Ans ☒ 1. risen  
☒ 2. lighted  
☒ 3. performed  
☒ 4. shown

Question ID : 6306801103351  
Option 1 ID : 6306804334317  
Option 2 ID : 6306804334316  
Option 3 ID : 6306804334319  
Option 4 ID : 6306804334318  
Status : Not Answered  
Chosen Option : --

Q.13 Select the INCORRECTLY spelt word.

- Ans ☒ 1. Evidance  
☒ 2. Hypothesis  
☒ 3. Scientists  
☒ 4. Corroborated

Question ID : 6306801080374  
Option 1 ID : 6306804243405  
Option 2 ID : 6306804243407  
Option 3 ID : 6306804243406  
Option 4 ID : 6306804243408  
Status : Not Answered  
Chosen Option : --

Q.14 Select the most appropriate option to fill in the blank and complete the given idiom.

Everybody said that Mr. Sen was a man of \_\_\_\_\_.

- Ans ☒ 1. books  
☒ 2. messages  
☒ 3. copies  
☒ 4. letters

Question ID : 630680634086  
Option 1 ID : 6306802482220  
Option 2 ID : 6306802482222  
Option 3 ID : 6306802482221  
Option 4 ID : 6306802482223  
Status : Not Answered  
Chosen Option : --

Q.15 Select the most appropriate ANTONYM of the word in brackets to fill in the blank.

The chef prepared a \_\_\_\_\_ (spicy) curry with bland flavours for those who preferred less heat.

- Ans ☒ 1. pungent  
☒ 2. mild  
☒ 3. zesty  
☒ 4. fiery

Question ID : 630680545615  
Option 1 ID : 6306802133058  
Option 2 ID : 6306802133059  
Option 3 ID : 6306802133057  
Option 4 ID : 6306802133056  
Status : Not Answered  
Chosen Option : --





### Comprehension:

In the following passage, some words have been deleted. Read the passage carefully and select the most appropriate option to fill in each blank

The 18<sup>th</sup> century witnessed a fierce struggle for supremacy in India, pitting the Marathas, a powerful indigenous force, against the formidable British East India Company. The Marathas (1)\_\_\_\_\_ vast territories and played a pivotal role in shaping the subcontinent's political landscape, receiving tributes from regions beyond their direct rule. The Second Anglo-Maratha War had shattered the power of the Maratha chiefs but not their spirit. The (2)\_\_\_\_\_ of their freedom rankled in their hearts. They made a last desperate attempt to regain their independence and old prestige in 1817. The lead in organising a united front of the Maratha chiefs was taken by the Peshwa who was smarting under the (3)\_\_\_\_\_ control exercised by the British Resident. However, Elphinstone, the British Resident at Pune, compelled the Peshwa to sign the treaty of Poona in June 1817. The Peshwa (4)\_\_\_\_\_ his claim as the 'Peshwa'. Lord Hastings also compelled Daulatrao Sindhia to conclude the Treaty of Gwalior in November 1817. Hardly had Scindia signed the treaty of Gwalior when the Peshwa Bajirao II attacked the British at Kirki, near Pune. The British forces (5)\_\_\_\_\_ and occupied Pune. The might of the British forces since then had established completely and on many occasions they had proved it easily during their regime.

### SubQuestion No : 16

Q.16 Select the most appropriate option to fill in blank no 1.

Ans ☒ 1. gifted

☒ 2. controlled

☒ 3. survived

☒ 4. lost

Question ID : 6306801099708

Option 1 ID : 6306804320087

Option 2 ID : 6306804320088

Option 3 ID : 6306804320089

Option 4 ID : 6306804320090

Status : Not Answered

Chosen Option : --



### Comprehension:

In the following passage, some words have been deleted. Read the passage carefully and select the most appropriate option to fill in each blank

The 18<sup>th</sup> century witnessed a fierce struggle for supremacy in India, pitting the Marathas, a powerful indigenous force, against the formidable British East India Company. The Marathas (1)\_\_\_\_\_ vast territories and played a pivotal role in shaping the subcontinent's political landscape, receiving tributes from regions beyond their direct rule. The Second Anglo-Maratha War had shattered the power of the Maratha chiefs but not their spirit. The (2)\_\_\_\_\_ of their freedom rankled in their hearts. They made a last desperate attempt to regain their independence and old prestige in 1817. The lead in organising a united front of the Maratha chiefs was taken by the Peshwa who was smarting under the (3)\_\_\_\_\_ control exercised by the British Resident. However, Elphinstone, the British Resident at Pune, compelled the Peshwa to sign the treaty of Poona in June 1817. The Peshwa (4)\_\_\_\_\_ his claim as the 'Peshwa'. Lord Hastings also compelled Daulatrao Sindhia to conclude the Treaty of Gwalior in November 1817. Hardly had Scindia signed the treaty of Gwalior when the Peshwa Bajirao II attacked the British at Kirki, near Pune. The British forces (5)\_\_\_\_\_ and occupied Pune. The might of the British forces since then had established completely and on many occasions they had proved it easily during their regime.

### SubQuestion No : 17

Q.17 Select the most appropriate option to fill in blank no 2.

- Ans ☒ 1. lost  
☒ 2. benefit  
☒ 3. disappearance  
☒ 4. empowerment

Question ID : 6306801099709

Option 1 ID : 6306804320093

Option 2 ID : 6306804320094

Option 3 ID : 6306804320091

Option 4 ID : 6306804320092

Status : Not Answered

Chosen Option : --



### Comprehension:

In the following passage, some words have been deleted. Read the passage carefully and select the most appropriate option to fill in each blank

The 18<sup>th</sup> century witnessed a fierce struggle for supremacy in India, pitting the Marathas, a powerful indigenous force, against the formidable British East India Company. The Marathas (1)\_\_\_\_\_ vast territories and played a pivotal role in shaping the subcontinent's political landscape, receiving tributes from regions beyond their direct rule. The Second Anglo-Maratha War had shattered the power of the Maratha chiefs but not their spirit. The (2)\_\_\_\_\_ of their freedom rankled in their hearts. They made a last desperate attempt to regain their independence and old prestige in 1817. The lead in organising a united front of the Maratha chiefs was taken by the Peshwa who was smarting under the (3)\_\_\_\_\_ control exercised by the British Resident. However, Elphinstone, the British Resident at Pune, compelled the Peshwa to sign the treaty of Poona in June 1817. The Peshwa (4)\_\_\_\_\_ his claim as the 'Peshwa'. Lord Hastings also compelled Daulatrao Sindhia to conclude the Treaty of Gwalior in November 1817. Hardly had Scindia signed the treaty of Gwalior when the Peshwa Bajirao II attacked the British at Kirki, near Pune. The British forces (5)\_\_\_\_\_ and occupied Pune. The might of the British forces since then had established completely and on many occasions they had proved it easily during their regime.

### SubQuestion No : 18

Q.18 Select the most appropriate option to fill in blank no 3.

Ans ☒ 1. satisfying

☒ 2. rigid

☒ 3. orthodox

☒ 4. pleasant

Question ID : 6306801099710

Option 1 ID : 6306804320097

Option 2 ID : 6306804320095

Option 3 ID : 6306804320098

Option 4 ID : 6306804320096

Status : Not Answered

Chosen Option : --



### Comprehension:

In the following passage, some words have been deleted. Read the passage carefully and select the most appropriate option to fill in each blank

The 18<sup>th</sup> century witnessed a fierce struggle for supremacy in India, pitting the Marathas, a powerful indigenous force, against the formidable British East India Company. The Marathas (1)\_\_\_\_\_ vast territories and played a pivotal role in shaping the subcontinent's political landscape, receiving tributes from regions beyond their direct rule. The Second Anglo-Maratha War had shattered the power of the Maratha chiefs but not their spirit. The (2)\_\_\_\_\_ of their freedom rankled in their hearts. They made a last desperate attempt to regain their independence and old prestige in 1817. The lead in organising a united front of the Maratha chiefs was taken by the Peshwa who was smarting under the (3)\_\_\_\_\_ control exercised by the British Resident. However, Elphinstone, the British Resident at Pune, compelled the Peshwa to sign the treaty of Poona in June 1817. The Peshwa (4)\_\_\_\_\_ his claim as the 'Peshwa'. Lord Hastings also compelled Daulatrao Sindhia to conclude the Treaty of Gwalior in November 1817. Hardly had Scindia signed the treaty of Gwalior when the Peshwa Bajirao II attacked the British at Kirki, near Pune. The British forces (5)\_\_\_\_\_ and occupied Pune. The might of the British forces since then had established completely and on many occasions they had proved it easily during their regime.

### SubQuestion No : 19

Q.19 Select the most appropriate option to fill in blank no 4.

Ans ☒ 1. remembered

☒ 2. renounced

☒ 3. retreated

☒ 4. resigned

Question ID : 6306801099711

Option 1 ID : 6306804320102

Option 2 ID : 6306804320101

Option 3 ID : 6306804320100

Option 4 ID : 6306804320099

Status : Not Answered

Chosen Option : --



### Comprehension:

In the following passage, some words have been deleted. Read the passage carefully and select the most appropriate option to fill in each blank

The 18<sup>th</sup> century witnessed a fierce struggle for supremacy in India, pitting the Marathas, a powerful indigenous force, against the formidable British East India Company. The Marathas (1)\_\_\_\_\_ vast territories and played a pivotal role in shaping the subcontinent's political landscape, receiving tributes from regions beyond their direct rule. The Second Anglo-Maratha War had shattered the power of the Maratha chiefs but not their spirit. The (2)\_\_\_\_\_ of their freedom rankled in their hearts. They made a last desperate attempt to regain their independence and old prestige in 1817. The lead in organising a united front of the Maratha chiefs was taken by the Peshwa who was smarting under the (3)\_\_\_\_\_ control exercised by the British Resident. However, Elphinstone, the British Resident at Pune, compelled the Peshwa to sign the treaty of Poona in June 1817. The Peshwa (4)\_\_\_\_\_ his claim as the 'Peshwa'. Lord Hastings also compelled Daulatrao Sindhia to conclude the Treaty of Gwalior in November 1817. Hardly had Scindia signed the treaty of Gwalior when the Peshwa Bajirao II attacked the British at Kirki, near Pune. The British forces (5)\_\_\_\_\_ and occupied Pune. The might of the British forces since then had established completely and on many occasions they had proved it easily during their regime.

### SubQuestion No : 20

Q.20 Select the most appropriate option to fill in blank no 5.

- Ans ☒ 1. revenge  
☒ 2. retaliated  
☒ 3. restricted  
☒ 4. retreated

Question ID : 6306801099712

Option 1 ID : 6306804320105

Option 2 ID : 6306804320104

Option 3 ID : 6306804320106

Option 4 ID : 6306804320103

Status : Not Answered

Chosen Option : --

### Section : Part-D-Hindi

Q.1 संपत्ति विवाद के कारण दोनों भाइयों के मध्य संबंध विच्छेद हो गया।'

वाक्य में रेखांकित शब्द की शुद्ध वर्तनी है -

- Ans ☒ 1. विच्छेद  
☒ 2. विच्छेद  
☒ 3. बिच्छेद  
☒ 4. विच्छेद

Question ID : 630680140319

Option 1 ID : 630680543078

Option 2 ID : 630680543080

Option 3 ID : 630680543081

Option 4 ID : 630680543079

Status : Answered

Chosen Option : 1

Q.2 दिए गए वाक्य में शब्द या वाक्य खण्ड को बदलिए।

शब्द केवल संकेत मात्र है।

- Ans
- ☒ 1. शब्द संकेत मात्र ही है।
  - ☒ 2. शब्द सिर्फ संके मात्र है।
  - ☒ 3. शब्द केवल संकेत है।
  - ☒ 4. शब्द ही संकेत मात्र है।

Question ID : 630680509931  
Option 1 ID : 6306801992860  
Option 2 ID : 6306801992857  
Option 3 ID : 6306801992859  
Option 4 ID : 6306801992858  
Status : Answered  
Chosen Option : 3

Q.3 मुहावरे और उसके अर्थ के लिए सही विकल्प चुनें।  
अगर-मगर करना

- Ans
- ☒ 1. बहाना कर देना
  - ☒ 2. टाल-मटोल करना
  - ☒ 3. अच्छा नहीं करना
  - ☒ 4. अच्छा करना

Question ID : 630680510258  
Option 1 ID : 6306801994165  
Option 2 ID : 6306801994162  
Option 3 ID : 6306801994164  
Option 4 ID : 6306801994163  
Status : Answered  
Chosen Option : 2

Q.4 वह बाण ' जिससे आग की ज्वाला प्रकट ' हो के लिए सार्थक शब्द होना चाहिए।

- Ans
- ☒ 1. अग्निशमन
  - ☒ 2. अग्नि मिसाइल
  - ☒ 3. अग्निबाण
  - ☒ 4. अग्निहोत्री

Question ID : 630680166489  
Option 1 ID : 630680644873  
Option 2 ID : 630680644875  
Option 3 ID : 630680644872  
Option 4 ID : 630680644874  
Status : Answered  
Chosen Option : 3

Q.5 'अपकर्ष' का विलोम शब्द नीचे दिए विकल्पों में से चुनिए-

- Ans ☒ 1. उत्कर्ष  
☒ 2. विमर्श  
☒ 3. सत्कर्ष  
☒ 4. अनुरूप

Question ID : 630680510598  
Option 1 ID : 6306801995523  
Option 2 ID : 6306801995525  
Option 3 ID : 6306801995524  
Option 4 ID : 6306801995522

Status : Answered

Chosen Option : 2

Q.6 दिए गए वाक्य में शब्द या वाक्य खण्ड को बदलिए।

आपका पत्र सधन्यवाद मिला।

- Ans ☒ 1. आपका पत्र धन्यवाद-सहित मिला।  
☒ 2. आपका पत्र मिला। धन्यवाद।  
☒ 3. आपका पत्र धन्यवाद के साथ मिला।  
☒ 4. आपका पत्र धन्यवाद लिये हुए मिला।

Question ID : 630680509935  
Option 1 ID : 6306801992874  
Option 2 ID : 6306801992873  
Option 3 ID : 6306801992875  
Option 4 ID : 6306801992876

Status : Answered

Chosen Option : 2

Q.7 निम्नलिखित वाक्यों में से किस वाक्य में क्रिया विशेषण का प्रयोग नहीं हुआ है?

- Ans ☒ 1. यह पत्थर तेजी से डूबता है।  
☒ 2. चावल जल्दी उबलता है।  
☒ 3. वह धीरे धीरे चलता है।  
☒ 4. चावल मत खाओ।

Question ID : 630680131945  
Option 1 ID : 630680510983  
Option 2 ID : 630680510982  
Option 3 ID : 630680510984  
Option 4 ID : 630680510985

Status : Answered

Chosen Option : 4



Q.8 निम्नलिखित में से देशज शब्द की पहचान कीजिए।

- Ans ☒ 1. झोला  
☐ 2. गरीब  
☐ 3. कॉलेज  
☐ 4. मुँह

Question ID : 630680157639

Option 1 ID : 630680610087

Option 2 ID : 630680610086

Option 3 ID : 630680610084

Option 4 ID : 630680610085

Status : Answered

Chosen Option : 3

Q.9 'जिस बालक के माता – पिता न हों' वाक्यांश के लिए उपयुक्त शब्द होगा-

- Ans ☐ 1. अजर  
☐ 2. अबोध  
☒ 3. अनाथ  
☐ 4. नवजात

Question ID : 630680203763

Option 1 ID : 630680790252

Option 2 ID : 630680790253

Option 3 ID : 630680790254

Option 4 ID : 630680790251

Status : Answered

Chosen Option : 3

Q.10 निम्नलिखित में से किस वाक्य में वर्तनी सम्बन्धी अशुद्धि नहीं है? चयन करें-

- Ans ☐ 1. भेड़िया मेरे सन्मुख खड़ा था।  
☐ 2. ब्रम्हा का मंदिर किस राज्य में स्थित है।  
☐ 3. वे जीवनपर्यंत ब्रम्हचारी रहे।  
☒ 4. यह जगद्गुरु शंकराचार्य का कथन है।

Question ID : 630680462573

Option 1 ID : 6306801806495

Option 2 ID : 6306801806496

Option 3 ID : 6306801806497

Option 4 ID : 6306801806498

Status : Answered

Chosen Option : 3





Q.11 \_\_\_\_\_ और पुरुष जीवन की गाड़ी के दो पहिये हैं।  
रिक्त स्थान की पूर्ति के लिए उचित सार्थक शब्द है -

- Ans
- ☒ 1. शेरनी
  - ☒ 2. बकरी
  - ☒ 3. स्त्री
  - ☒ 4. गाय

Question ID : 630680129249

Option 1 ID : 630680500624

Option 2 ID : 630680500625

Option 3 ID : 630680500623

Option 4 ID : 630680500622

Status : Answered

Chosen Option : 3

Q.12 निम्न में से किस वाक्य में कारक चिह्न का अशुद्ध प्रयोग हुआ है?

- Ans
- ☒ 1. गार्ड से हरी झंडी दिखाई और गाड़ी चल पड़ी।
  - ☒ 2. जिस समय आपने आवाज़ दी, मैं तैयार हो चुका था।
  - ☒ 3. इस नौकरी से पहले वह तीन नौकरियाँ छोड़ चुका है।
  - ☒ 4. उसने जाने से पहले भोजन किया था।

Question ID : 630680396715

Option 1 ID : 6306801546946

Option 2 ID : 6306801546944

Option 3 ID : 6306801546945

Option 4 ID : 6306801546947

Status : Answered

Chosen Option : 1

Q.13 'मुद्रिका' का पर्याय निम्न में से हैं --

- Ans
- ☒ 1. मिट्टी
  - ☒ 2. अँगूठी
  - ☒ 3. रुपया
  - ☒ 4. बंदरगाह

Question ID : 630680510412

Option 1 ID : 6306801994778

Option 2 ID : 6306801994780

Option 3 ID : 6306801994779

Option 4 ID : 6306801994781

Status : Answered

Chosen Option : 3



Q.14 निम्नलिखित विकल्पों में से 'नकद' शब्द के लिए किस एक वाक्य में उचित विलोम का प्रयोग हुआ है?

- Ans ☒ 1. उधार माँगने से प्रतिष्ठा गिरती है।  
☐ 2. नव्या की पोशाक खूबसूरत है।  
☐ 3. रीता कितना खाती है?  
☐ 4. उसका भवन सोने का है।

Question ID : 630680126140

Option 1 ID : 630680489175

Option 2 ID : 630680489177

Option 3 ID : 630680489176

Option 4 ID : 630680489174

Status : Answered

Chosen Option : 1

Q.15 नीचे दिया गया कौन सा विकल्प रंग, अक्षर और जाति जैसे शब्दों का उपयुक्त अनेकार्थी शब्द है?

- Ans ☒ 1. वर्ण  
☐ 2. विचार  
☐ 3. विसर्ग  
☐ 4. संकल्प

Question ID : 63068060798

Option 1 ID : 630680234643

Option 2 ID : 630680234645

Option 3 ID : 630680234642

Option 4 ID : 630680234644

Status : Answered

Chosen Option : 1

#### Comprehension:

गद्यांश के आधार पर प्रश्न का उत्तर दें।

धरती के तापमान में लगातार वृद्धि हो रही है। तापमान बढ़ने से \_\_\_\_\_ (21) पिघलेंगे। समुद्र \_\_\_\_\_ (22) \_\_\_\_\_ बढ़ने से महासागरों के अथाह जल भंडार के वितरण में \_\_\_\_\_ (23) \_\_\_\_\_ होगा। इससे पृथ्वी पर \_\_\_\_\_ (24) \_\_\_\_\_ और बढ़ेगा। नतीजतन भूकंपीय \_\_\_\_\_ (25) \_\_\_\_\_ की संभावना भी बढ़ जाएगी।

SubQuestion No : 16

Q.16 उचित शब्द चुनकर गद्यांश में रिक्त स्थान (21) की पूर्ति करें-

- Ans ☐ 1. पहाड़  
☐ 2. सतह  
☒ 3. ग्लेशियर  
☐ 4. समुद्र

Question ID : 630680191366

Option 1 ID : 630680742092

Option 2 ID : 630680742090

Option 3 ID : 630680742091

Option 4 ID : 630680742089

Status : Answered

Chosen Option : 3



**Comprehension:**

गद्यांश के आधार पर प्रश्न का उत्तर दें।

धरती के तापमान में लगातार वृद्धि हो रही है। तापमान बढ़ने से \_\_\_\_\_ (21) पिघलेंगे। समुद्र \_\_\_\_\_ (22) \_\_\_\_\_ बढ़ने से महासागरों के अथाह जल भंडार के वितरण में \_\_\_\_\_ (23) \_\_\_\_\_ होगा। इससे पृथ्वी पर \_\_\_\_\_ (24) \_\_\_\_\_ और बढ़ेगा। नतीजतन भूकंपीय \_\_\_\_\_ (25) \_\_\_\_\_ की संभावना भी बढ़ जाएगी।

**SubQuestion No : 17**

**Q.17 उचित शब्द चुनकर गद्यांश में रिक्त स्थान (22) की पूर्ति करें-**

- Ans ☒ 1. क्षेत्रफल  
☒ 2. भूमि  
☒ 3. तल  
☒ 4. सम्पदा

Question ID : 630680191367

Option 1 ID : 630680742094

Option 2 ID : 630680742096

Option 3 ID : 630680742093

Option 4 ID : 630680742095

Status : Answered

Chosen Option : 3

**Comprehension:**

गद्यांश के आधार पर प्रश्न का उत्तर दें।

धरती के तापमान में लगातार वृद्धि हो रही है। तापमान बढ़ने से \_\_\_\_\_ (21) पिघलेंगे। समुद्र \_\_\_\_\_ (22) \_\_\_\_\_ बढ़ने से महासागरों के अथाह जल भंडार के वितरण में \_\_\_\_\_ (23) \_\_\_\_\_ होगा। इससे पृथ्वी पर \_\_\_\_\_ (24) \_\_\_\_\_ और बढ़ेगा। नतीजतन भूकंपीय \_\_\_\_\_ (25) \_\_\_\_\_ की संभावना भी बढ़ जाएगी।

**SubQuestion No : 18**

**Q.18 उचित शब्द चुनकर गद्यांश में रिक्त स्थान (23) की पूर्ति करें-**

- Ans ☒ 1. परिवर्तन  
☒ 2. अभाव  
☒ 3. भेदभाव  
☒ 4. प्रदूषण

Question ID : 630680191368

Option 1 ID : 630680742098

Option 2 ID : 630680742100

Option 3 ID : 630680742097

Option 4 ID : 630680742099

Status : Answered

Chosen Option : 1

**Comprehension:**

गद्यांश के आधार पर प्रश्न का उत्तर दें।

धरती के तापमान में लगातार वृद्धि हो रही है। तापमान बढ़ने से \_\_\_\_\_ (21) पिघलेंगे। समुद्र \_\_\_\_\_ (22) \_\_\_\_\_ बढ़ने से महासागरों के अथाह जल भंडार के वितरण में \_\_\_\_\_ (23) \_\_\_\_\_ होगा। इससे पृथ्वी पर \_\_\_\_\_ (24) \_\_\_\_\_ और बढ़ेगा। नतीजतन भूकंपीय \_\_\_\_\_ (25) \_\_\_\_\_ की संभावना भी बढ़ जाएगी।

**SubQuestion No : 19**

**Q.19 उचित शब्द चुनकर गद्यांश में रिक्त स्थान (24) की पूर्ति करें-**

- Ans ☒ 1. भेदभाव  
☒ 2. दबाव  
☒ 3. तापमान  
☒ 4. भूस्खलन

Question ID : 630680191369

Option 1 ID : 630680742102

Option 2 ID : 630680742103

Option 3 ID : 630680742101

Option 4 ID : 630680742104

Status : Answered

Chosen Option : 2

**Comprehension:**

गद्यांश के आधार पर प्रश्न का उत्तर दें।

धरती के तापमान में लगातार वृद्धि हो रही है। तापमान बढ़ने से \_\_\_\_\_ (21) पिघलेंगे। समुद्र \_\_\_\_\_ (22) \_\_\_\_\_ बढ़ने से महासागरों के अथाह जल भंडार के वितरण में \_\_\_\_\_ (23) \_\_\_\_\_ होगा। इससे पृथ्वी पर \_\_\_\_\_ (24) \_\_\_\_\_ और बढ़ेगा। नतीजतन भूकंपीय \_\_\_\_\_ (25) \_\_\_\_\_ की संभावना भी बढ़ जाएगी।

**SubQuestion No : 20**

**Q.20 उचित शब्द चुनकर गद्यांश में रिक्त स्थान (25) की पूर्ति करें-**

- Ans ☒ 1. परिवर्तनों  
☒ 2. स्खलन  
☒ 3. गतिविधियों  
☒ 4. समस्याओं

Question ID : 630680191370

Option 1 ID : 630680742108

Option 2 ID : 630680742107

Option 3 ID : 630680742105

Option 4 ID : 630680742106

Status : Answered

Chosen Option : 3